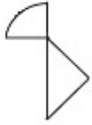


Sub Inspector in Delhi Police and Central Armed Police Forces Examination 2023 Paper I

Roll Number	
Candidate Name	
Venue Name	iON Digital Zone iDZ Old Alwal
Exam Date	03/10/2023
Exam Time	9:00 AM - 11:00 AM
Subject	SICPO Paper I 2023

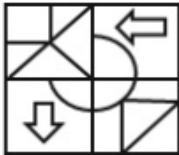
Section : General Intelligence and Reasoning

Q.1 Select the option in which the given figure is embedded (rotation is NOT allowed).

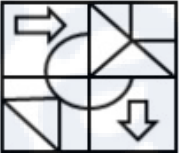


Ans

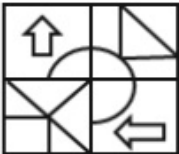
✗ 1.



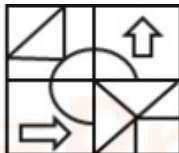
✗ 2.



✗ 3.



✓ 4.



Question ID : 264330126081

Option 1 ID : 264330493996

Option 2 ID : 264330493998

Option 3 ID : 264330493997

Option 4 ID : 264330493999

Status : Answered

Chosen Option : 4

Q.2 Which letter cluster will replace the question mark (?) to complete the given series?

ELSV, FJVR, GHYN, ?, IDEF

- Ans
- 1. HFJB
 - 2. HBJF
 - 3. HFBJ
 - 4. GHFJ

Question ID : 264330145423
Option 1 ID : 264330569948
Option 2 ID : 264330569949
Option 3 ID : 264330569947
Option 4 ID : 264330569950
Status : Answered
Chosen Option : 3

Q.3 Three of the following four letter-clusters are alike in a certain way and one is different. Pick the odd one out.

- Ans
- 1. WVTD
 - 2. JIGQ
 - 3. SRPH
 - 4. KLNK

Question ID : 26433068792
Option 1 ID : 264330269681
Option 2 ID : 264330269683
Option 3 ID : 264330269680
Option 4 ID : 264330269682
Status : Answered
Chosen Option : 4

Q.4 Seven people, A, B, C, D, E, F and G, are sitting in a straight row, facing north (not necessarily in the same order). Only 1 person sits to the left of D. A is an immediate neighbour of D. Only 2 people sit between F and D. Only 3 people sit between C and G. B is not an immediate neighbour of G. Only 2 people sit between E and A. Who sits at the extreme right end of the row?

- Ans
- 1. A
 - 2. G
 - 3. C
 - 4. B

Question ID : 264330145408
Option 1 ID : 264330569887
Option 2 ID : 264330569889
Option 3 ID : 264330569888
Option 4 ID : 264330569890
Status : Answered
Chosen Option : 3

Q.5 In a certain code language, 'GAME' is coded as '8426' and 'MUST' is coded as '7853'.
What is the code for 'M' in the given code language?

- Ans 1. 8
 2. 2
 3. 3
 4. 7

Question ID : 264330169655
Option 1 ID : 264330665319
Option 2 ID : 264330665320
Option 3 ID : 264330665322
Option 4 ID : 264330665321
Status : Answered
Chosen Option : 1

Q.6 Two statements are given, followed by two conclusions numbered I and II. Assuming the statements to be true, even if they seem to be at variance with commonly known facts, decide which of the conclusions logically follow(s) from the statements.

Statements:

All flowers are trees.

All leaves are flowers.

Conclusion:

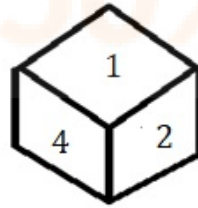
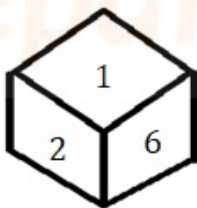
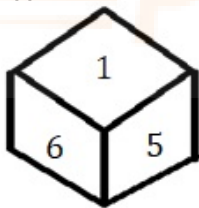
I) All trees are flowers.

II) All leaves are trees.

- Ans 1. Only Conclusion I follows
 2. Neither Conclusion I nor II follows.
 3. Only Conclusion II follows.
 4. Both Conclusions I and II follow.

Question ID : 26433067706
Option 1 ID : 264330265336
Option 2 ID : 264330265339
Option 3 ID : 264330265337
Option 4 ID : 264330265338
Status : Answered
Chosen Option : 3

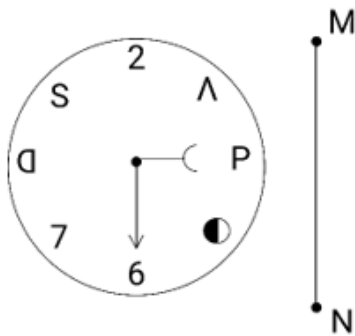
Q.7 Three different positions of the same dice are shown. Find the number on the face opposite the face showing '1'.



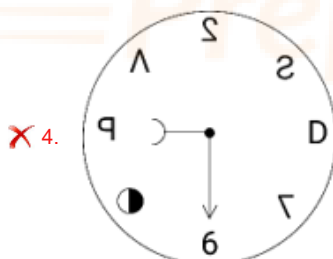
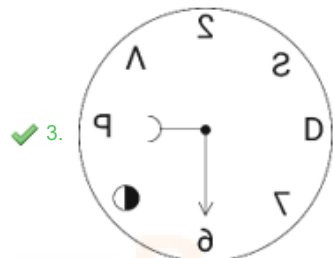
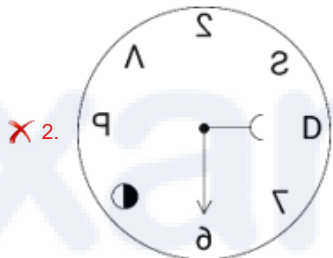
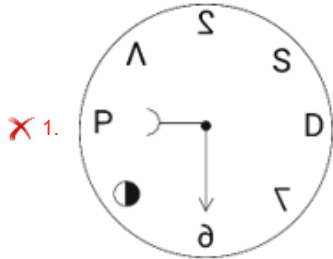
- Ans 1. 3
 2. 2
 3. 6
 4. 4

Question ID : 264330108971
Option 1 ID : 264330428163
Option 2 ID : 264330428162
Option 3 ID : 264330428161
Option 4 ID : 264330428164
Status : Answered
Chosen Option : 1

Q.8 Select the correct mirror image of the given figure, when the mirror is placed at line MN as shown.



Ans



Question ID : 264330170165

Option 1 ID : 264330667335

Option 2 ID : 264330667336

Option 3 ID : 264330667338

Option 4 ID : 264330667337

Status : Answered

Chosen Option : 3

Q.9 If '+' means '-', '-' means 'x', 'x' means '+', '+' means '+', then what will come in place of the question mark (?) in the following equation?
 $137 \div 56 \times 7 - 6 + 31 = ?$

- Ans
- 1. 149
 - 2. 163
 - 3. 145
 - 4. 154

Question ID : 264330126058
Option 1 ID : 264330493905
Option 2 ID : 264330493906
Option 3 ID : 264330493904
Option 4 ID : 264330493907
Status : Answered
Chosen Option : 4

Q.10 Select the option that represents the correct order of the given words as they would appear in an English dictionary?

- 1.Lollipop
- 2.Loincloth
- 3.Longways
- 4.Logician
- 5.Lonely

- Ans
- 1. 3, 2, 1, 5, 4
 - 2. 4, 3, 1, 5, 2
 - 3. 4, 2, 1, 5, 3
 - 4. 3, 4, 1, 5, 2

Question ID : 26433067241
Option 1 ID : 264330263479
Option 2 ID : 264330263477
Option 3 ID : 264330263478
Option 4 ID : 264330263476
Status : Answered
Chosen Option : 3

Q.11 Which of the following terms will replace the question mark (?) in the given series?

ABEG FFHI KJJK PNNM ?

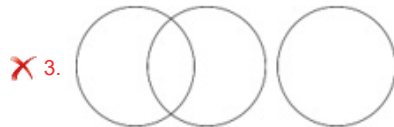
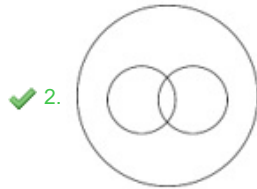
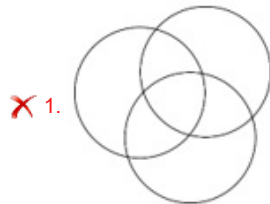
- Ans
- 1. URQO
 - 2. VRQO
 - 3. RUQO
 - 4. UROQ

Question ID : 26433085320
Option 1 ID : 264330334982
Option 2 ID : 264330334984
Option 3 ID : 264330334983
Option 4 ID : 264330334981
Status : Answered
Chosen Option : 1

Q.12 Select the Venn diagram that best illustrates the relationship between the following classes.

Electrical Appliance, Refrigerator, Freezer

Ans



Question ID : 264330132924

Option 1 ID : 264330520757

Option 2 ID : 264330520755

Option 3 ID : 264330520756

Option 4 ID : 264330520758

Status : Answered

Chosen Option : 2

Q.13 Select the set in which the numbers are related in the same way as are the numbers of the following sets.

(NOTE : Operations should be performed on the whole numbers, without breaking down the numbers into its constituent digits. E.g. 13 – Operations on 13 such as adding /subtracting /multiplying etc. to 13 can be performed. Breaking down 13 into 1 and 3 and then performing mathematical operations on 1 and 3 is NOT allowed)

(7, 35, 42), (4, 20, 24)

Ans ✗ 1. (8, 56, 72)

✗ 2. (6, 36, 48)

✓ 3. (9, 45, 54)

✗ 4. (12, 60, 48)

Question ID : 264330145301

Option 1 ID : 264330569462

Option 2 ID : 264330569461

Option 3 ID : 264330569459

Option 4 ID : 264330569460

Status : Answered

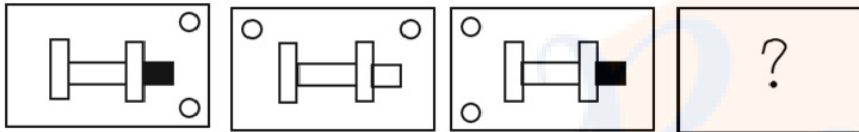
Chosen Option : 3

Q.14 A person starts from point Z and moves 7 km towards the South. He turns right and moves 5 km, turns right, and moves 3 km, then turns right and moves 1 km. He takes a left turn and moves 4 km to reach a point X. How much and in which direction does he need to move now to reach point Z?

- Ans
- 1. 4 km South
 - 2. 4 km East
 - 3. 4 km West
 - 4. 6 km East

Question ID : 26433081451
 Option 1 ID : 264330319638
 Option 2 ID : 264330319639
 Option 3 ID : 264330319637
 Option 4 ID : 264330319640
 Status : Answered
 Chosen Option : 2

Q.15 Select the figure that will replace the question mark (?) in the following figure series.

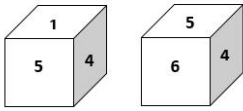


Ans

- 1.
- 2.
- 3.
- 4.

Question ID : 26433065985
 Option 1 ID : 264330258484
 Option 2 ID : 264330258485
 Option 3 ID : 264330258487
 Option 4 ID : 264330258486
 Status : Answered
 Chosen Option : 1

Q.16 Two different positions of the same dice are shown, the six faces of which are numbered from 1 to 6. Select the number that will be on the face opposite to the one showing '1'.



- Ans** 1. 6
 2. 4
 3. 5
 4. 3

Question ID : 26433058063
Option 1 ID : 264330227239
Option 2 ID : 264330227237
Option 3 ID : 264330227238
Option 4 ID : 264330227236
Status : Answered
Chosen Option : 1

Q.17 Two statements are given, followed by two conclusions numbered I and II. Assuming the statements to be true, even if they seem to be at variance with commonly known facts, decide which of the conclusions logically follow(s) from the statements.

Statements:

All plants are vegetables.

Some plants are poisonous.

Conclusions:

I. All vegetables are poisonous.

II. Some vegetables are plants.

- Ans** 1. Neither conclusion I nor II follows
 2. Only conclusion I follows
 3. Both conclusions I and II follow
 4. Only conclusion II follows

Question ID : 26433056711
Option 1 ID : 264330221831
Option 2 ID : 264330221828
Option 3 ID : 264330221830
Option 4 ID : 264330221829
Status : Answered
Chosen Option : 4

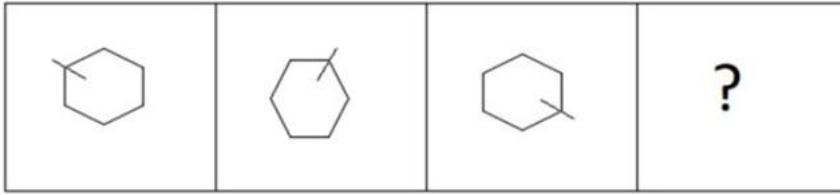
Q.18 Select the correct option that indicates the arrangement of the given words in the order in which they appear in an English dictionary.

1. Desire
2. Destination
3. Descend
4. Destructive
5. Desolate
6. Desperate

- Ans** 1. 3, 1, 2, 6, 5, 4
 2. 3, 1, 6, 5, 2, 4
 3. 3, 1, 5, 6, 2, 4
 4. 3, 1, 5, 6, 4, 2

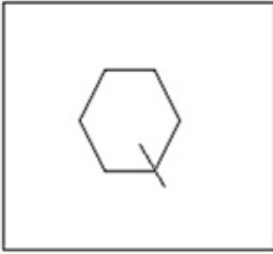
Question ID : 264330145377
Option 1 ID : 264330569763
Option 2 ID : 264330569764
Option 3 ID : 264330569765
Option 4 ID : 264330569766
Status : Answered
Chosen Option : 3

Q.19 Select the figure that will come next in the following figure series.

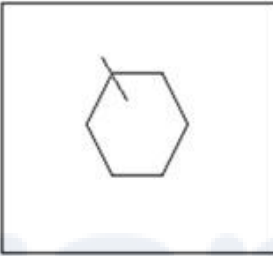


Ans

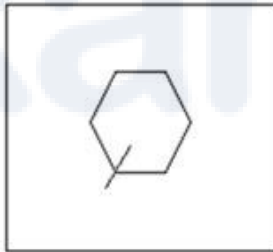
✗ 1.



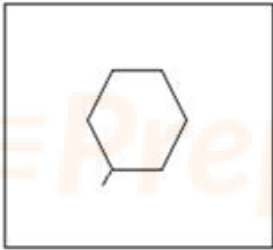
✗ 2.



✓ 3.



✗ 4.



Question ID : 26433087076

Option 1 ID : 264330341947

Option 2 ID : 264330341948

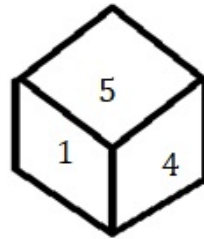
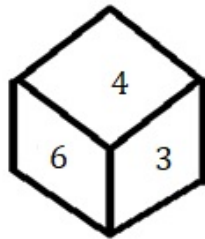
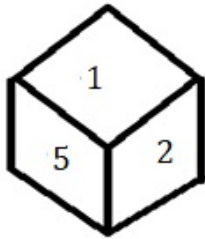
Option 3 ID : 264330341945

Option 4 ID : 264330341946

Status : Answered

Chosen Option : 3

Q.20 Three different positions of the same dice are shown. Find the number on the face opposite the face showing '4'.



- Ans
- 1. 6
 - 2. 2
 - 3. 3
 - 4. 1

Question ID : 264330108967

Option 1 ID : 264330428148

Option 2 ID : 264330428146

Option 3 ID : 264330428147

Option 4 ID : 264330428145

Status : Answered

Chosen Option : 2

Q.21 Select the set in which the numbers are related in the same way as are the numbers of the following sets.

(NOTE : Operations should be performed on the whole numbers, without breaking down the numbers into its constituent digits. E.g. 13 – Operations on 13 such as adding /subtracting /multiplying etc. to 13 can be performed. Breaking down 13 into 1 and 3 and then performing mathematical operations on 1 and 3 is NOT allowed)

(264, 462), (132, 330)

- Ans
- 1. (211, 340)
 - 2. (188, 378)
 - 3. (386, 584)
 - 4. (282, 496)

Question ID : 264330145296

Option 1 ID : 264330569440

Option 2 ID : 264330569439

Option 3 ID : 264330569442

Option 4 ID : 264330569441

Status : Not Attempted and Marked For Review

Chosen Option : --

Q.22 If A denotes '+', B denotes 'x', C denotes '-', and D denotes '÷', then what will come in place of '?' in the following equation?
 $2 B ? D 2 = 4 B 32 D 8$

- Ans
- 1. 12
 - 2. 30
 - 3. 16
 - 4. 8

Question ID : 26433067669

Option 1 ID : 264330265188

Option 2 ID : 264330265189

Option 3 ID : 264330265191

Option 4 ID : 264330265190

Status : Answered

Chosen Option : 3

Q.23 If '+' means 'x', 'x' means '-', '-' means '÷' and '÷' means '+', then what will come in place of the (?) in the following equation?
 $250 - 10 + 10 \times 5 \div 2 = ?$

- Ans
- 1. 247
 - 2. 167
 - 3. 320
 - 4. 234

Question ID : 264330114250
Option 1 ID : 264330449087
Option 2 ID : 264330449086
Option 3 ID : 264330449088
Option 4 ID : 264330449085
Status : Answered
Chosen Option : 1

Q.24 Four letter-clusters have been given, out of which three are alike in some manner and one is different. Select the odd letter-cluster.

- Ans
- 1. WYRS
 - 2. PSJK
 - 3. PRKL
 - 4. FHAB

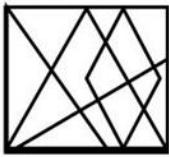
Question ID : 264330180750
Option 1 ID : 264330708970
Option 2 ID : 264330708969
Option 3 ID : 264330708967
Option 4 ID : 264330708968
Status : Answered
Chosen Option : 2

Q.25 In a certain code language, 'VATT' is coded as '65' and 'STOLK' is coded as '79'. How will 'GENEROUS' be coded in that language?

- Ans
- 1. 116
 - 2. 216
 - 3. 204
 - 4. 106

Question ID : 26433079048
Option 1 ID : 264330310198
Option 2 ID : 264330310199
Option 3 ID : 264330310196
Option 4 ID : 264330310197
Status : Answered
Chosen Option : 4

Q.26 Select the option that is embedded in the given figure as its part (rotation is NOT allowed).

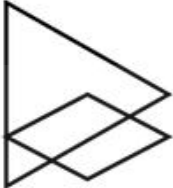


Ans


✓ 1.



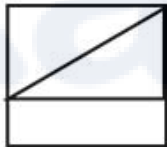
✗ 2.



✗ 3.



✗ 4.



Question ID : 264330145467

Option 1 ID : 264330570125

Option 2 ID : 264330570126

Option 3 ID : 264330570124

Option 4 ID : 264330570123

Status : Answered

Chosen Option : 1

Q.27 If '+' means '÷', '-' means '+', '×' means '-' and '÷' means '×', what will be the value of the following expression?

$$[{\{(14 \times 6) - (4 \div 3)\} + (6 - 4)}] \div 3$$

Ans ✗ 1. 3

✓ 2. 6

✗ 3. 1

✗ 4. 9

Question ID : 264330129643

Option 1 ID : 264330507939

Option 2 ID : 264330507940

Option 3 ID : 264330507938

Option 4 ID : 264330507941

Status : Answered

Chosen Option : 2

Q.28 Select the option that is related to the fifth letter-cluster in the same way as the second letter-cluster is related to the first letter-cluster and the fourth letter-cluster is related to the third letter-cluster.

TEMPLE : SCJLGY :: CHURCH : BFRNXB :: MOSQUE : ?

- Ans
- 1. LMPYPM
 - 2. LMPYMP
 - 3. LPYMPM
 - 4. LMPMPY

Question ID : 264330145394
Option 1 ID : 264330569831
Option 2 ID : 264330569834
Option 3 ID : 264330569833
Option 4 ID : 264330569832
Status : Answered
Chosen Option : 4

Q.29 In a certain code language, 'COURT' is coded as OCRTR and 'JUDGE' is coded as UJAEG. How will 'ORDER' be coded in the same language?

- Ans
- 1. LDRRE
 - 2. ROARE
 - 3. REARO
 - 4. ROBRE

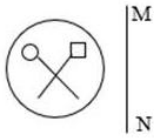
Question ID : 264330132206
Option 1 ID : 264330517919
Option 2 ID : 264330517921
Option 3 ID : 264330517920
Option 4 ID : 264330517922
Status : Answered
Chosen Option : 2

Q.30 Which of the following numbers will replace the question mark (?) in the given series?
115, 130, 122, 137, 129, ?

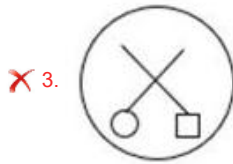
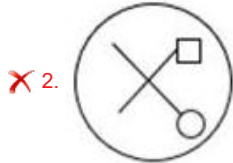
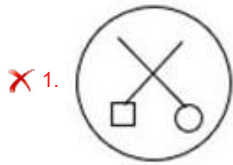
- Ans
- 1. 144
 - 2. 142
 - 3. 148
 - 4. 150

Question ID : 26433057327
Option 1 ID : 264330224293
Option 2 ID : 264330224292
Option 3 ID : 264330224294
Option 4 ID : 264330224295
Status : Answered
Chosen Option : 1

Q.31 Select the correct mirror image of the given figure when the mirror is placed at line MN as shown.



Ans



Question ID : 26433056630
Option 1 ID : 264330221506
Option 2 ID : 264330221507
Option 3 ID : 264330221504
Option 4 ID : 264330221505

Status : Answered

Chosen Option : 4

Q.32 In a certain code language, 'FLORA' is written as 'WQOLC' and 'MONEY' is written as 'PNPYE'. How will 'GOING' be written in that language?

Ans ✓ 1. VNUPW

✗ 2. RMWEH

✗ 3. VBUDP

✗ 4. RHKSR

Question ID : 26433074757
Option 1 ID : 264330293118
Option 2 ID : 264330293119
Option 3 ID : 264330293116
Option 4 ID : 264330293117

Status : Answered

Chosen Option : 1

Q.33 Select the set in which the numbers are related in the same way as are the numbers of the following set.

(NOTE : Operations should be performed on the whole numbers, without breaking down the numbers into its constituent digits. E.g. 13 – Operations on 13 such as adding /subtracting/ multiplying etc. to 13 can be performed. Breaking down 13 into 1 and 3 and then performing mathematical operations on 1 and 3 is NOT allowed)

(6, 2, 96)
(5, 6, 240)

- Ans
- 1. (4,1,6)
 - 2. (12,3,45)
 - 3. (1,2,16)
 - 4. (8,3,28)

Question ID : 264330145319
Option 1 ID : 264330569533
Option 2 ID : 264330569531
Option 3 ID : 264330569534
Option 4 ID : 264330569532
Status : Answered
Chosen Option : 3

Q.34 Study the given pattern carefully and select the number that can replace the question mark (?) in it.

First row: 19, 6, 37
Second row: 21, 8, 45
Third row: 72, 14, ?

(NOTE : Operations should be performed on the whole numbers, without breaking down the numbers into its constituent digits. E.g. 13 – Operations on 13 such as adding /subtracting /multiplying etc. to 13 can be performed. Breaking down 13 into 1 and 3 and then performing mathematical operations on 1 and 3 is not allowed)

- Ans
- 1. 124
 - 2. 134
 - 3. 114
 - 4. 144

Question ID : 26433068248
Option 1 ID : 264330267505
Option 2 ID : 264330267504
Option 3 ID : 264330267506
Option 4 ID : 264330267507
Status : Not Answered
Chosen Option : --

Q.35 If A denotes '+', B denotes 'x', C denotes '-', and D denotes '÷', then what will be the value of the following expression?

39 D 13 B 2 C 6 A 8

- Ans
- 1. 10
 - 2. 8
 - 3. 12
 - 4. 9

Question ID : 26433068700
Option 1 ID : 264330269314
Option 2 ID : 264330269313
Option 3 ID : 264330269312
Option 4 ID : 264330269315
Status : Answered
Chosen Option : 2

Q.36 Select the set in which the numbers are related in the same way as are the numbers of the following sets.

(NOTE : Operations should be performed on the whole numbers, without breaking down the numbers into its constituent digits. E.g. 13- Operations on 13 such as adding /subtracting /multiplying etc. to 13 can be performed. Breaking down 13 into 1 and 3 and then performing mathematical operations on 1 and 3 is not allowed.)

(7, 91, 98)

(4, 52, 56)

Ans 1. (12, 156, 168)

2. (3, 36, 42)

3. (8, 80, 96)

4. (5, 25, 60)

Question ID : 26433057449

Option 1 ID : 264330224782

Option 2 ID : 264330224781

Option 3 ID : 264330224783

Option 4 ID : 264330224780

Status : Answered

Chosen Option : 1

Q.37 If A denotes '+', B denotes 'x', C denotes '-', and D denotes '+', then what will be the value of the following equation?

96 D 3 B 8 C 25 A 14 = ?

Ans 1. 217

2. 234

3. 254

4. 245

Question ID : 264330129781

Option 1 ID : 264330508356

Option 2 ID : 264330508358

Option 3 ID : 264330508357

Option 4 ID : 264330508355

Status : Answered

Chosen Option : 4

Q.38 If A denotes '+', B denotes 'x', C denotes '-', and D denotes '+', then what will come in place of '?' in the following equation?

7 A 3 B 24 D 2 = 20 B ? A 3

Ans 1. 2

2. 20

3. 14

4. 7

Question ID : 26433067663

Option 1 ID : 264330265167

Option 2 ID : 264330265164

Option 3 ID : 264330265166

Option 4 ID : 264330265165

Status : Answered

Chosen Option : 1

Q.39 Which of the following numbers will replace the question mark (?) in the given series?

35, ?, 40, 47, 45, 53

- Ans
- 1. 37
 - 2. 43
 - 3. 42
 - 4. 41

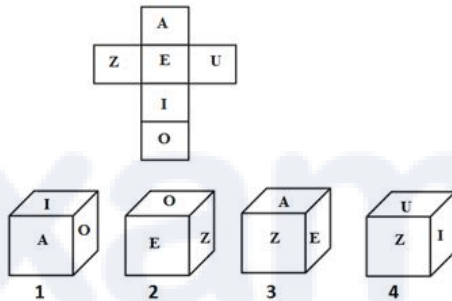
Question ID : 26433091009
Option 1 ID : 264330357446
Option 2 ID : 264330357448
Option 3 ID : 264330357445
Option 4 ID : 264330357447

Status : Answered

Chosen Option : 4

Q.40 If the given sheet is folded to form a cube, which of the given figures is/are possible?

(The elements are shown to indicate the sides only.)



- Ans
- 1. Only 1 and 2
 - 2. Only 1, 2 and 4
 - 3. Only 2 and 3
 - 4. Only 3

Question ID : 26433065678
Option 1 ID : 264330257272
Option 2 ID : 264330257275
Option 3 ID : 264330257273
Option 4 ID : 264330257274

Status : Answered

Chosen Option : 4

Q.41 Which figure from the given options would replace the question mark (?) if the following figure series were to be continued?

BLAST	LBPTS	SLBPT	LSCTP	?
-------	-------	-------	-------	---

Ans

✗ 1.

SLDPT

✗ 2.

SCTPL

✗ 3.

PLTSC

✓ 4.

PLSCT

Question ID : 264330145482

Option 1 ID : 264330570185

Option 2 ID : 264330570183

Option 3 ID : 264330570186

Option 4 ID : 264330570184

Status : Answered

Chosen Option : 4

Q.42 Which of the following numbers will replace the question mark (?) in the given series?
-1/729, -1/81, -1/9, ?

Ans ✗ 1. 1

✓ 2. -1

✗ 3. -1/3

✗ 4. 1/3

Question ID : 26433092495

Option 1 ID : 264330363269

Option 2 ID : 264330363270

Option 3 ID : 264330363271

Option 4 ID : 264330363272

Status : Answered

Chosen Option : 3

Q.43 Which letter-cluster will replace the question mark (?) to complete the given series?
MKPN, LMOP, ?, JQMT, ISLV

- Ans
- 1. KOLT
 - 2. KNNQ
 - 3. KNMR
 - 4. KONR

Question ID : 26433076662
Option 1 ID : 264330300715
Option 2 ID : 264330300714
Option 3 ID : 264330300712
Option 4 ID : 264330300713
Status : Answered
Chosen Option : 4

Q.44 Select the option that is related to the third word in the same way as the second word is related to the first word. (The words must be considered as meaningful words and must not be related to each other based on the number of letters/number of consonants/vowels in the word.)
Butterfly : Caterpillar :: Insect : ?

- Ans
- 1. Cygnet
 - 2. Nymph
 - 3. Larva
 - 4. Microbes

Question ID : 26433091602
Option 1 ID : 264330359775
Option 2 ID : 264330359774
Option 3 ID : 264330359773
Option 4 ID : 264330359776
Status : Answered
Chosen Option : 3

Q.45 Six friends are sitting in a circle. All of them are facing the centre. Kanak sits third to the right of Sona. Kapil is an immediate neighbour of Mani. Goldy sits second to the right of Mani. Sona is an immediate neighbour of Kapil and Suresh. Who sits to the immediate right of Goldy?

- Ans
- 1. Sona
 - 2. Kapil
 - 3. Kanak
 - 4. Suresh

Question ID : 264330145405
Option 1 ID : 264330569877
Option 2 ID : 264330569876
Option 3 ID : 264330569875
Option 4 ID : 264330569878
Status : Answered
Chosen Option : 4

Q.46 L is the wife of Q. P is the mother of M. J is the father of L. M is the sister of H. J is the husband of H. How is P related to L?

- Ans
- 1. Mother's mother
 - 2. Sister's son
 - 3. Mother's sister
 - 4. Sister's husband

Question ID : 264330126021

Option 1 ID : 264330493757

Option 2 ID : 264330493759

Option 3 ID : 264330493756

Option 4 ID : 264330493758

Status : Answered

Chosen Option : 1

Q.47 'A = B' means 'A is the father of B'.
'A \$ B' means 'A is the sister of B'.
'A * B' means 'A is the mother of B'.
'A ? B' means 'A is the son of B'.
If M ? C \$ J * Z, then how is J related to M?

- Ans
- 1. Sister
 - 2. Mother's sister
 - 3. Mother's mother
 - 4. Brother

Question ID : 264330145385

Option 1 ID : 264330569795

Option 2 ID : 264330569798

Option 3 ID : 264330569797

Option 4 ID : 264330569796

Status : Answered

Chosen Option : 2

Q.48 Rohit drives 3 km towards north from point A. He takes a left turn and drives 4 km. Again he takes a left turn and drives 6 km. Finally, he takes a left turn and drives 4 km to reach point B. How far and towards which direction should he drive in order to reach point A again?

- Ans
- 1. 4 km towards south
 - 2. 3 km towards east
 - 3. 3 km towards north
 - 4. 2 km towards west

Question ID : 26433068272

Option 1 ID : 264330267600

Option 2 ID : 264330267603

Option 3 ID : 264330267601

Option 4 ID : 264330267602

Status : Answered

Chosen Option : 3

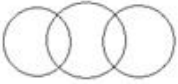

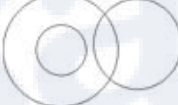
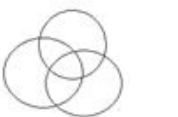
Q.49 In a certain code language, 'FRIEND' is written as 'IIFDME' and 'DEMAND' is written as 'MVDDMA'. How will 'GROUND' be written in that language?

- Ans
- 1. DOTENC
 - 2. P XK RYS
 - 3. OIGDMU
 - 4. OFTSBU

Question ID : 26433074762
Option 1 ID : 264330293138
Option 2 ID : 264330293139
Option 3 ID : 264330293137
Option 4 ID : 264330293136
Status : Answered
Chosen Option : 3

Q.50 Select the Venn diagram that best illustrates the relationship between the following classes.

Pencil, Eraser, Sharpener

- Ans
- 1. 
 - 2. 
 - 3. 
 - 4. 

Question ID : 264330145357
Option 1 ID : 264330569683
Option 2 ID : 264330569686
Option 3 ID : 264330569685
Option 4 ID : 264330569684
Status : Answered
Chosen Option : 2

Section : General Knowledge and General Awareness

Q.1 Which of the following does NOT belong to the family of organic compounds?

- Ans
- 1. Ammonia
 - 2. Nonane
 - 3. Furan
 - 4. Decane

Question ID : 264330131690
Option 1 ID : 264330515860
Option 2 ID : 264330515859
Option 3 ID : 264330515862
Option 4 ID : 264330515861
Status : Answered
Chosen Option : 2

Q.2 In November 2020, _____ has set a record of becoming the world's fastest piano player ever.

- Ans 1. Lydian Nadhaswaram
 2. Anisrinivasan
 3. Gauri Mishra
 4. Shikha Chaurasia

Question ID : 264330145151
Option 1 ID : 264330568862
Option 2 ID : 264330568861
Option 3 ID : 264330568859
Option 4 ID : 264330568860
Status : Answered
Chosen Option : 4

Q.3 For Kharif crops, the temperature required for farming is above 25 degrees Celsius with high humidity and annual rainfall above _____ cm.

- Ans 1. 16
 2. 100
 3. 35
 4. 50

Question ID : 264330163197
Option 1 ID : 264330640099
Option 2 ID : 264330640102
Option 3 ID : 264330640101
Option 4 ID : 264330640100
Status : Answered
Chosen Option : 1

Q.4 Bhutia dance is performed in which of the following states?

- Ans 1. West Bengal
 2. Odisha
 3. Sikkim
 4. Nagaland

Question ID : 264330164793
Option 1 ID : 264330646300
Option 2 ID : 264330646302
Option 3 ID : 264330646299
Option 4 ID : 264330646301
Status : Answered
Chosen Option : 2

Q.5 With which neighbouring country did India sign the Farakka Treaty in 1996 for sharing of the Ganga Waters and on augmenting its flows?

- Ans 1. Bhutan
 2. Bangladesh
 3. Nepal
 4. Afghanistan

Question ID : 264330111362
Option 1 ID : 264330437536
Option 2 ID : 264330437534
Option 3 ID : 264330437535
Option 4 ID : 264330437533
Status : Answered
Chosen Option : 2

Q.6 Which ruler of the Chahamana dynasty made Ajmer his capital?

- Ans
- 1. Ajayaraja
 - 2. Prithviraj II
 - 3. Amoraj
 - 4. Prithviraj III

Question ID : 264330109001
Option 1 ID : 264330428282
Option 2 ID : 264330428283
Option 3 ID : 264330428281
Option 4 ID : 264330428284
Status : Not Answered
Chosen Option : --

Q.7 How many Members of Parliament were elected from Punjab to the 17th Lok Sabha?

- Ans
- 1. 14
 - 2. 15
 - 3. 13
 - 4. 17

Question ID : 264330114610
Option 1 ID : 264330450526
Option 2 ID : 264330450527
Option 3 ID : 264330450525
Option 4 ID : 264330450528
Status : Answered
Chosen Option : 4

Q.8 In India, which of the following regulatory mechanisms was NOT in existence to enforce regulation of the industrial sector?

- Ans
- 1. Industrial licensing under which every entrepreneur had to get permission from government officials to start a firm, close a firm or decide the amount of goods that could be produced.
 - 2. Controls on price fixation and distribution of selected industrial products.
 - 3. Private sector was allowed in all industries.
 - 4. Some goods could be produced only in small-scale industries.

Question ID : 26433064577
Option 1 ID : 264330252900
Option 2 ID : 264330252903
Option 3 ID : 264330252901
Option 4 ID : 264330252902
Status : Not Attempted and Marked For Review
Chosen Option : --

Q.9 Who among the following Indian authors has written the autobiography titled 'My Story'?

- Ans
- 1. Arundhati Roy
 - 2. Shobha Dey
 - 3. Kiran Desai
 - 4. Kamala Das

Question ID : 26433071471
Option 1 ID : 264330280310
Option 2 ID : 264330280309
Option 3 ID : 264330280311
Option 4 ID : 264330280308
Status : Answered
Chosen Option : 2

Q.10 Methyl ethyl ketone is also known as:

- Ans
- 1. 2-butanone
 - 2. propanone
 - 3. methyl pentanone
 - 4. 2-butanol

Question ID : 264330131776
Option 1 ID : 264330516205
Option 2 ID : 264330516203
Option 3 ID : 264330516206
Option 4 ID : 264330516204
Status : Answered
Chosen Option : 4

Q.11 Which of the following statements is NOT correct about fundamental duties in the Indian Constitution?

- Ans
- 1. They are made to value and preserve the rich heritage of our composite culture.
 - 2. They are made to cherish and follow the noble ideals which inspired our national struggle for freedom.
 - 3. They are made to develop the scientific temper, humanism and the spirit of inquiry and reform.
 - 4. They are made justiciable in nature.

Question ID : 264330113382
Option 1 ID : 264330445614
Option 2 ID : 264330445615
Option 3 ID : 264330445616
Option 4 ID : 264330445613
Status : Not Attempted and Marked For Review
Chosen Option : --

Q.12 Who was the first chairman of Finance Commission of India?

Ans 1. Ashok Kumar Chanda

2. KC Neogy

3. K Santhanam

4. PV Rajamannar

Question ID : 264330133074

Option 1 ID : 264330521349

Option 2 ID : 264330521347

Option 3 ID : 264330521348

Option 4 ID : 264330521350

Status : Not Answered

Chosen Option : --

Q.13 The First Commonwealth Games were organised in which of the following years?

Ans 1. 1920

2. 1930

3. 1922

4. 1926

Question ID : 264330118888

Option 1 ID : 264330466207

Option 2 ID : 264330466210

Option 3 ID : 264330466208

Option 4 ID : 264330466209

Status : Answered

Chosen Option : 1

Q.14 Continental Shelf which is the shallowest part of the ocean has an average gradient of:

Ans 1. 8° or even less

2. 1° or even less

3. 5° or even less

4. 2° or even less

Question ID : 26433055832

Option 1 ID : 264330218315

Option 2 ID : 264330218312

Option 3 ID : 264330218314

Option 4 ID : 264330218313

Status : Answered

Chosen Option : 3

Q.15 Dhruvasena II is related to which of the following ruling dynasties?

Ans 1. Vakataka

2. Pushyabhuti

3. Maitraka

4. Maukhari

Question ID : 264330165568

Option 1 ID : 264330649354

Option 2 ID : 264330649353

Option 3 ID : 264330649351

Option 4 ID : 264330649352

Status : Answered

Chosen Option : 2

Q.16 Under which of the following Acts was the National Commission for Women established?

- Ans
- 1. The National Commission for Women Act, 1989
 - 2. The National Commission for Women Act, 1987
 - 3. The National Commission for Women Act, 1990
 - 4. The National Commission for Women Act, 1988

Question ID : 264330145264
Option 1 ID : 264330569313
Option 2 ID : 264330569311
Option 3 ID : 264330569314
Option 4 ID : 264330569312
Status : Answered
Chosen Option : 4

Q.17 Identify the position of stomata in plants.

- Ans
- 1. Tip of stem
 - 2. Inside the roots
 - 3. Inside the flower
 - 4. Surface of leaves

Question ID : 26433064754
Option 1 ID : 264330253610
Option 2 ID : 264330253608
Option 3 ID : 264330253611
Option 4 ID : 264330253609
Status : Answered
Chosen Option : 1

Q.18 Who among the following has given extraordinary powers during an emergency?

- Ans
- 1. Prime Minister
 - 2. The Chief Justice
 - 3. The President
 - 4. The Governor

Question ID : 264330118528
Option 1 ID : 264330465513
Option 2 ID : 264330465515
Option 3 ID : 264330465514
Option 4 ID : 264330465516
Status : Answered
Chosen Option : 3

Q.19 In India all loans that are below _____ are considered as micro loans.

- Ans
- 1. one lakh rupees
 - 2. two lakh rupees
 - 3. four lakh rupees
 - 4. three lakh rupees

Question ID : 264330145237
Option 1 ID : 264330569203
Option 2 ID : 264330569204
Option 3 ID : 264330569206
Option 4 ID : 264330569205
Status : Answered
Chosen Option : 2

Q.20 Identify whether the given statements about p-block elements are correct or incorrect.
Statement A: In p-block elements, the last electron enters the outermost p orbital.
Statement B: The non-metals and metalloids exist only in the p-block of the periodic table.

- Ans**
- 1. Both Statements A and B are correct
 - 2. Only Statement A is correct
 - 3. Both Statements A and B are incorrect
 - 4. Only Statement B is correct

Question ID : 264330137995
Option 1 ID : 264330540590
Option 2 ID : 264330540587
Option 3 ID : 264330540588
Option 4 ID : 264330540589
Status : Answered
Chosen Option : 1

Q.21 Vallabhbhai Patel and _____ helped Gandhi in Kheda by organising his tour of the villages and urging the peasants to stand firm against the government.

- Ans**
- 1. Jamunalal Bajaj
 - 2. Mohammad Ali Jinnah
 - 3. Motilal Nehru
 - 4. Indulal Yajnik

Question ID : 264330165396
Option 1 ID : 264330648666
Option 2 ID : 264330648664
Option 3 ID : 264330648663
Option 4 ID : 264330648665
Status : Answered
Chosen Option : 3

Q.22 The deliberations of the representatives at the Third Round Table Conference was held during the later months of which year?

- Ans**
- 1. 1932
 - 2. 1929
 - 3. 1930
 - 4. 1931

Question ID : 264330112181
Option 1 ID : 264330440811
Option 2 ID : 264330440810
Option 3 ID : 264330440809
Option 4 ID : 264330440812
Status : Answered
Chosen Option : 4

Q.23 Which part of the Indian Constitution deals with fundamental rights?

Ans 1. Part III

2. Part II

3. Part V

4. Part IV

Question ID : 264330111518

Option 1 ID : 264330438158

Option 2 ID : 264330438157

Option 3 ID : 264330438160

Option 4 ID : 264330438159

Status : Answered

Chosen Option : 1

Q.24 At normal temperature and atmospheric pressure, _____ has a density of 1.87 kg/m^3 , which is 1.5 times heavier than air and exists as a liquid below the critical temperature of 31°C .

Ans 1. carbon dioxide

2. nitrogen

3. hydrogen

4. lithium

Question ID : 264330110060

Option 1 ID : 264330432517

Option 2 ID : 264330432518

Option 3 ID : 264330432519

Option 4 ID : 264330432520

Status : Not Attempted and
Marked For Review

Chosen Option : --

Q.25 Sao Joao festival is celebrated primarily by the Catholic Christians in which of the following Indian states?

Ans 1. Assam

2. Goa

3. Manipur

4. Nagaland

Question ID : 26433064692

Option 1 ID : 264330253361

Option 2 ID : 264330253360

Option 3 ID : 264330253362

Option 4 ID : 264330253363

Status : Not Answered

Chosen Option : --

Q.26 According to the Global Hunger Index 2022, which neighbouring country is only behind India with a rank of 109 out of 121 countries?

- Ans
- 1. Bangladesh
 - 2. Afghanistan
 - 3. Nepal
 - 4. Pakistan

Question ID : 264330157103

Option 1 ID : 264330615783

Option 2 ID : 264330615786

Option 3 ID : 264330615784

Option 4 ID : 264330615785

Status : Answered

Chosen Option : 4

Q.27 Which of the following was established by Jyotirao Govindrao Phule in 1873 to fight against idolatry and caste system?

- Ans
- 1. Shree Narayan Guru Dharma Paripalana (SNDP) Movement
 - 2. Satyashodhak Samaj
 - 3. Young Bengal Movement
 - 4. Arya Samaj

Question ID : 26433099177

Option 1 ID : 264330389321

Option 2 ID : 264330389324

Option 3 ID : 264330389322

Option 4 ID : 264330389323

Status : Answered

Chosen Option : 1

Q.28 Who is the first Indian to participate in a Super Heavyweight Boxing event in the 2020 Olympic Games?

- Ans
- 1. Satish Kumar
 - 2. Manish Harshit
 - 3. Sakshi Chaudhary
 - 4. Amit Panghal

Question ID : 26433096226

Option 1 ID : 264330377658

Option 2 ID : 264330377659

Option 3 ID : 264330377660

Option 4 ID : 264330377657

Status : Answered

Chosen Option : 3

Q.29 Prithviraj Raso, an epic poem about the life of the 12th century Indian king, Prithviraj Chauhan, was written by:

- Ans
- 1. Banabhatta
 - 2. Ashvaghosa
 - 3. Bharavi
 - 4. Chand Bardai

Question ID : 26433071390
Option 1 ID : 264330279986
Option 2 ID : 264330279984
Option 3 ID : 264330279985
Option 4 ID : 264330279987
Status : Answered
Chosen Option : 4

Q.30 Which is the most widely accepted model to explain the formation and evaluation of the solar system?

- Ans
- 1. Nebular hypothesis
 - 2. Gas hypothesis
 - 3. Solar hypothesis
 - 4. Cloud hypothesis

Question ID : 264330113348
Option 1 ID : 264330445478
Option 2 ID : 264330445480
Option 3 ID : 264330445479
Option 4 ID : 264330445477
Status : Answered
Chosen Option : 1

Q.31 How many controls are there globally that influence the climate of a particular zone?

- Ans
- 1. 8
 - 2. 6
 - 3. 3
 - 4. 5

Question ID : 264330163229
Option 1 ID : 264330640230
Option 2 ID : 264330640229
Option 3 ID : 264330640227
Option 4 ID : 264330640228
Status : Not Answered
Chosen Option : --

Q.32 Moatsu festival of Nagaland is celebrated by which of the following tribes?

- Ans
- 1. Bhil tribe
 - 2. Ao tribe
 - 3. Munda tribe
 - 4. Bodo tribe

Question ID : 264330164802
Option 1 ID : 264330646337
Option 2 ID : 264330646335
Option 3 ID : 264330646338
Option 4 ID : 264330646336
Status : Answered
Chosen Option : 1

Q.33 Which of the following is considered as a good indicator of economic growth?

- Ans
- 1. Steady increase in loan
 - 2. Steady increase in international trade
 - 3. Steady increase in population
 - 4. Steady increase in the GDP

Question ID : 26433054585
Option 1 ID : 264330213326
Option 2 ID : 264330213327
Option 3 ID : 264330213324
Option 4 ID : 264330213325
Status : Answered
Chosen Option : 4

Q.34 What is the full form of PPLO with respect to bacteria?

- Ans
- 1. Pleuro Pneumonia Like Organisms
 - 2. Pleuro Platelet Like Organisms
 - 3. Platelet Prone Like Organisms
 - 4. Pneumonia Platelet Like Organisms

Question ID : 264330145218
Option 1 ID : 264330569127
Option 2 ID : 264330569129
Option 3 ID : 264330569128
Option 4 ID : 264330569130
Status : Answered
Chosen Option : 2

Q.35 Which of the following algae is also called kelp and found in the deep sea?

- Ans
- 1. Chlamydomona
 - 2. Fucus
 - 3. Laminaria
 - 4. Nostoc

Question ID : 26433089669
Option 1 ID : 264330352180
Option 2 ID : 264330352177
Option 3 ID : 264330352178
Option 4 ID : 264330352179
Status : Answered
Chosen Option : 3

Q.36 Atal Tunnel connects which two places?

- Ans
- 1. Manali and Lahaul-Spiti valley
 - 2. Shimla and Nainital
 - 3. Shimla and Mansoori
 - 4. Manali and Nainital

Question ID : 264330112690
Option 1 ID : 264330442845
Option 2 ID : 264330442848
Option 3 ID : 264330442847
Option 4 ID : 264330442846
Status : Answered
Chosen Option : 1

Q.37 Priorities of the government in the fiscal area and its related policies and deviations are mentioned in which part of the budget document?

- Ans 1. Fiscal Policy Strategy Statement
 2. Appropriation Bill
 3. Macroeconomic Framework Statement
 4. Medium-term Fiscal Policy Statement

Question ID : 264330141437
Option 1 ID : 264330554084
Option 2 ID : 264330554086
Option 3 ID : 264330554085
Option 4 ID : 264330554083
Status : Answered
Chosen Option : 4

Q.38 The structure that produces and holds sperm cells in bryophytes (non-vascular plants) and ferns is called:

- Ans 1. megasporangia
 2. archegonium
 3. antheridium
 4. protonema

Question ID : 264330145205
Option 1 ID : 264330569075
Option 2 ID : 264330569076
Option 3 ID : 264330569077
Option 4 ID : 264330569078
Status : Answered
Chosen Option : 2

Q.39 Shore temple of Mamallapuram was built by:

- Ans 1. Pallavas
 2. Chalukayas
 3. Nagas
 4. Cholas

Question ID : 264330164857
Option 1 ID : 264330646557
Option 2 ID : 264330646558
Option 3 ID : 264330646555
Option 4 ID : 264330646556
Status : Answered
Chosen Option : 1

Q.40 Dr. Teejan Bai, a Padma Shri, Padma Bhushan and Padma Vibhushan awardee is globally recognised for her contribution to which of the following art forms?

- Ans 1. Gendi
 2. Pandavani
 3. Raut Nacha.
 4. Jhirliti

Question ID : 264330145167
Option 1 ID : 264330568925
Option 2 ID : 264330568924
Option 3 ID : 264330568926
Option 4 ID : 264330568923
Status : Answered
Chosen Option : 2

Q.41 In how many phases did the Indian Economy experience the success of the Green Revolution?

- Ans 1. Two
 2. Three
 3. Five
 4. Four

Question ID : 264330145245
Option 1 ID : 264330569235
Option 2 ID : 264330569236
Option 3 ID : 264330569238
Option 4 ID : 264330569237
Status : Answered
Chosen Option : 4

Q.42 Which of the following statement is correct regarding climate of Indian subcontinent?

- A. The climate of North India remains similar throughout the year
B. The Himalayas protect the subcontinent from extremely cold winds from central Asia.

- Ans 1. Only Statement B is correct
 2. Both Statements A and B incorrect
 3. Only Statement A is correct
 4. Both Statements A and B correct

Question ID : 264330121168
Option 1 ID : 264330474878
Option 2 ID : 264330474877
Option 3 ID : 264330474875
Option 4 ID : 264330474876
Status : Not Answered
Chosen Option : --

Q.43 In a volleyball game, each team comprise of how many players?

- Ans 1. 5
 2. 6
 3. 8
 4. 7

Question ID : 264330109851
Option 1 ID : 264330431681
Option 2 ID : 264330431682
Option 3 ID : 264330431684
Option 4 ID : 264330431683
Status : Answered
Chosen Option : 2

Q.44 What is Kalbaisakhi?

Ans 1. Pre monsoon showers and thunderstorms

2. Cold waves and rains

3. Snowfall and hail

4. Heatwaves and loo

Question ID : 264330119786

Option 1 ID : 264330469420

Option 2 ID : 264330469419

Option 3 ID : 264330469421

Option 4 ID : 264330469422

Status : Not Answered

Chosen Option : --

Q.45 Which of the following books is an autobiography of the former American president Bill Clinton?

Ans 1. Becoming

2. My Life

3. Long Walk to Freedom

4. My Country My Life

Question ID : 264330145176

Option 1 ID : 264330568959

Option 2 ID : 264330568960

Option 3 ID : 264330568961

Option 4 ID : 264330568962

Status : Answered

Chosen Option : 1

Q.46 Tansen, the famous musician, often sang in the court of which ruler?

Ans 1. Sher Shah Suri

2. Akbar

3. Feroz Shah Tughlaq

4. Allaudin Khilji

Question ID : 26433074852

Option 1 ID : 264330293499

Option 2 ID : 264330293497

Option 3 ID : 264330293498

Option 4 ID : 264330293496

Status : Answered

Chosen Option : 2

Q.47 Who among the following founded the Kalakshetra Foundation in Chennai that is an important centre for the study and performance of fine arts?

Ans 1. Rukmini Devi Arundale

2. Yamini Krishnamurthy

3. Mrinalini Sarabhai

4. Alarmel Valli

Question ID : 26433054507

Option 1 ID : 264330213015

Option 2 ID : 264330213013

Option 3 ID : 264330213014

Option 4 ID : 264330213012

Status : Answered

Chosen Option : 1

Q.48 Which German chemist was the first to show a graphical representation of the periodicity of an atomic volume plotted against atomic weight?

- Ans 1. Lothar Meyer
 2. John Newlands
 3. William Ramsay
 4. Glenn T Seaborg

Question ID : 264330110063
Option 1 ID : 264330432532
Option 2 ID : 264330432530
Option 3 ID : 264330432531
Option 4 ID : 264330432529
Status : Answered
Chosen Option : 2

Q.49 Which of the following is NOT an Equestrian discipline?

- Ans 1. Dressage
 2. Sprint
 3. Show jumping
 4. Vaulting

Question ID : 26433089944
Option 1 ID : 264330353253
Option 2 ID : 264330353256
Option 3 ID : 264330353255
Option 4 ID : 264330353254
Status : Answered
Chosen Option : 1

Q.50 The Guru Kelucharan Mohapatra Yuva Pratibha Samman 2021 was presented to Arushi Mudgal for _____ dance.

- Ans 1. Mohiniyattam
 2. Odissi
 3. Kuchipudi
 4. Kathak

Question ID : 26433054500
Option 1 ID : 264330212985
Option 2 ID : 264330212986
Option 3 ID : 264330212984
Option 4 ID : 264330212987
Status : Answered
Chosen Option : 2

Section : Quantitative Aptitude

Q.1 The radii of two cylinders are in the ratio of 4 : 5 and their heights are in the ratio of 5 : 2. The ratio of their volume is:

- Ans
- 1. 9 : 4
 - 2. 2 : 1
 - 3. 9 : 7
 - 4. 8 : 5

Question ID : 264330145138
Option 1 ID : 264330568807
Option 2 ID : 264330568809
Option 3 ID : 264330568810
Option 4 ID : 264330568808
Status : Answered
Chosen Option : 2

Q.2 A person crosses a 900-metre long street in 6 minutes. The speed of the person, in km/h, is:

- Ans
- 1. 10
 - 2. 9
 - 3. 5
 - 4. 8

Question ID : 264330103677
Option 1 ID : 264330407016
Option 2 ID : 264330407013
Option 3 ID : 264330407015
Option 4 ID : 264330407014
Status : Answered
Chosen Option : 2

Q.3 If 3 goats or 5 sheep can graze a field in 54 days, then in how many days can 6 goats and 8 sheep graze the same field?

- Ans
- 1. 15
 - 2. 12
 - 3. 10
 - 4. 8

Question ID : 264330102379
Option 1 ID : 264330401984
Option 2 ID : 264330401983
Option 3 ID : 264330401982
Option 4 ID : 264330401981
Status : Not Attempted and Marked For Review
Chosen Option : --

Q.4 An item with a marked price of ₹3,800 was sold for ₹3,496, after a discount of y% was offered. What is the value of y?

- Ans
- 1. 7.5%
 - 2. 8.5%
 - 3. 8%
 - 4. 7%

Question ID : 264330131158
Option 1 ID : 264330513744
Option 2 ID : 264330513746
Option 3 ID : 264330513745
Option 4 ID : 264330513743
Status : Marked For Review
Chosen Option : 2

Q.5 A dishonest dealer announces selling his articles with 22% loss, but uses 35% lighter weights. What is the percentage of his profit or loss?

- Ans
- 1. 20% loss
 - 2. 13% profit
 - 3. 13% loss
 - 4. 20% profit

Question ID : 264330131522
Option 1 ID : 264330515192
Option 2 ID : 264330515191
Option 3 ID : 264330515194
Option 4 ID : 264330515193
Status : Answered
Chosen Option : 2

Q.6 The following table represents the population of four different areas and the percentage of males, females, and children among them.

Area	Population	Males	Females	Children
P	10,000	40%	40%	20%
Q	20,000	30%	40%	30%
R	16,000	50%	30%	20%
S	18,000	45%	35%	20%

What is the total number of children in areas P and Q together?

- Ans
- 1. 7000
 - 2. 9000
 - 3. 6000
 - 4. 8000

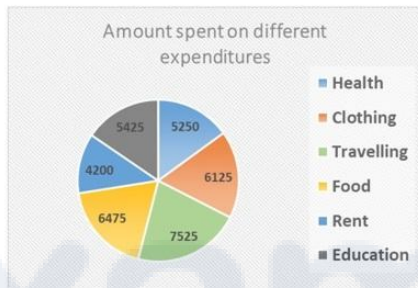
Question ID : 264330167249
Option 1 ID : 264330655992
Option 2 ID : 264330655994
Option 3 ID : 264330655991
Option 4 ID : 264330655993
Status : Answered
Chosen Option : 4

Q.7 If θ is an acute angle and $\sin \theta + \operatorname{cosec} \theta = 2$, then the value of $\sin^5 \theta + \operatorname{cosec}^5 \theta$ is:

- Ans
- 1. 10
 - 2. 2
 - 3. 4
 - 4. 5

Question ID : 264330145132
Option 1 ID : 264330568786
Option 2 ID : 264330568783
Option 3 ID : 264330568784
Option 4 ID : 264330568785
Status : Answered
Chosen Option : 2

Q.8 What is the central angle corresponding to the expenditure spent on Education in the given figure?



- Ans
- 1. 55.8°
 - 2. 55.2°
 - 3. 52°
 - 4. 42°

Question ID : 26433081650
Option 1 ID : 264330320435
Option 2 ID : 264330320434
Option 3 ID : 264330320433
Option 4 ID : 264330320436
Status : Not Attempted and Marked For Review
Chosen Option : --

Q.9 Evaluate $\frac{0.04}{0.05}$ of $\left(3\frac{1}{3} - 2\frac{1}{2}\right) \div \frac{1}{2}$ of $1\frac{1}{4}$
 $\frac{1}{3} + \frac{1}{5}$ of $\frac{1}{9}$

- Ans
- 1. 0.3
 - 2. 5
 - 3. 3
 - 4. 0.03

Question ID : 26433063988
Option 1 ID : 264330250544
Option 2 ID : 264330250547
Option 3 ID : 264330250545
Option 4 ID : 264330250546
Status : Not Attempted and Marked For Review
Chosen Option : --

Q.10

If $\tan A = \frac{4}{3}$, $0 \leq A \leq 90^\circ$, then find the value of $\sin A$.

Ans

1. $\frac{3}{5}$

2. 1

3. $\frac{3}{4}$

4. $\frac{4}{5}$

Question ID : 264330157755

Option 1 ID : 264330618380

Option 2 ID : 264330618382

Option 3 ID : 264330618381

Option 4 ID : 264330618379

Status : Answered

Chosen Option : 4

Q.11 Find the LCM of 15, 24, 35 and 54.

Ans

1. 5670

2. 7560

3. 7650

4. 6570

Question ID : 26433073065

Option 1 ID : 264330286454

Option 2 ID : 264330286453

Option 3 ID : 264330286452

Option 4 ID : 264330286455

Status : Answered

Chosen Option : 2

Prepare 50% Faster

Q.12 Study the given data and answer the question that follows.

The data shows the number of candidates (in thousand) appearing for Civil Service (CS) and Engineering Service (ES) Examinations in the years 2020, 2021, 2022 in USA.

Year	Civil Service		Engineering Service	
	Total No. of Candidates Appeared	Graduates out of the total candidates appeared (in %)	Total No. of Candidates Appeared	Graduates out of the total candidates appeared (in %)
2020	75	60	89	57
2021	110	64	118	65
2022	120	80	135	78

What is total number of graduates who appeared for both CS and ES together in the year 2022?

- Ans
- 1. 2,01,000
 - 2. 2,01,100
 - 3. 2,01,300
 - 4. 2,01,200

Question ID : 264330158260
Option 1 ID : 264330620399
Option 2 ID : 264330620400
Option 3 ID : 264330620402
Option 4 ID : 264330620401
Status : Not Answered
Chosen Option : --

Q.13 Let the speed of the boat in still water be 17 km/h and let the speed of the stream be 5 km/h. What is the time taken by the boat to go 110 km downstream?

- Ans
- 1. 4.5 hours
 - 2. 6 hours
 - 3. 5.5 hours
 - 4. 5 hours

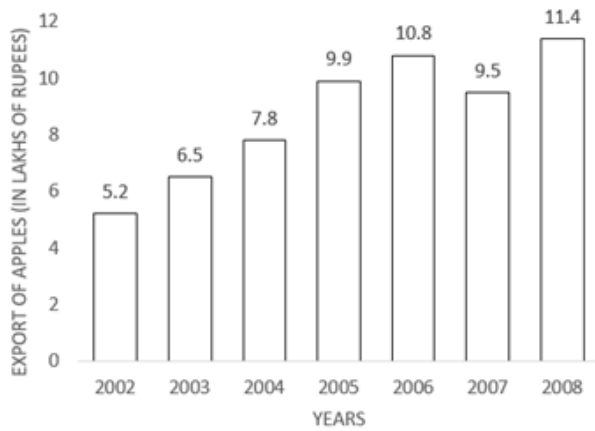
Question ID : 264330145028
Option 1 ID : 264330568367
Option 2 ID : 264330568368
Option 3 ID : 264330568370
Option 4 ID : 264330568369
Status : Answered
Chosen Option : 4

Q.14 A number is first increased by 10% and then increased by 20%. The number, so obtained, is now decreased by 12%. What is the net increase or decrease per cent in the original number?

- Ans
- 1. 16.16% increase
 - 2. 14.14% decrease
 - 3. 11.11% decrease
 - 4. 12.12% increase

Question ID : 264330158379
Option 1 ID : 264330620878
Option 2 ID : 264330620877
Option 3 ID : 264330620876
Option 4 ID : 264330620875
Status : Not Attempted and Marked For Review
Chosen Option : --

Q.15 Study the given graph carefully and answer the question that follows.



In which year was there maximum percentage increase in the export of apples to that of the previous years?

- Ans
- 1. 2003
 - 2. 2005
 - 3. 2006
 - 4. 2008

Question ID : 264330165428

Option 1 ID : 264330648791

Option 2 ID : 264330648794

Option 3 ID : 264330648793

Option 4 ID : 264330648792

Status : Not Attempted and Marked For Review

Chosen Option : --

Q.16 The following data gives a year-wise outlay (in lakhs of rupees) in a certain 4-year plan (2018-2022) of a state.

Year	Health	Housing	Transport	Education
2018-2019	6200	6500	7100	8000
2019-2020	7000	6600	7200	8100
2020-2021	7300	6800	7400	8200
2021-2022	7400	7000	7500	8400

What was the percentage increase during 2020-2021 over 2018-2019 in Education outlay?

- Ans
- 1. 2.8%
 - 2. 3.2%
 - 3. 2.0%
 - 4. 2.5%

Question ID : 264330167248

Option 1 ID : 264330655989

Option 2 ID : 264330655990

Option 3 ID : 264330655987

Option 4 ID : 264330655988

Status : Answered

Chosen Option : 4

Q.17 The first shirt is sold at twice the selling price of the second shirt. The first shirt is sold at 8% profit and the second shirt is sold at a 3% loss. What is the overall percentage profit on the shirts (Rounded off to two decimal place)?

- Ans
- 1. 4.86%
 - 2. 4.07%
 - 3. 4.60%
 - 4. 3.86%

Question ID : 264330102065

Option 1 ID : 264330400768

Option 2 ID : 264330400767

Option 3 ID : 264330400766

Option 4 ID : 264330400765

Status : **Not Attempted and Marked For Review**

Chosen Option : --

Q.18 The areas of the two triangles are in the ratio 4 : 3 and their heights are in the ratio 6 : 5. Find the ratio of their bases.

- Ans
- 1. 5 : 6
 - 2. 10 : 9
 - 3. 6 : 5
 - 4. 9 : 10

Question ID : 264330157742

Option 1 ID : 264330618330

Option 2 ID : 264330618327

Option 3 ID : 264330618329

Option 4 ID : 264330618328

Status : **Not Attempted and Marked For Review**

Chosen Option : --

Q.19 The largest number of four digits that is exactly divisible by 17 and 36 is:

- Ans
- 1. 7956
 - 2. 9180
 - 3. 9792
 - 4. 8568

Question ID : 26433091502

Option 1 ID : 264330359376

Option 2 ID : 264330359374

Option 3 ID : 264330359375

Option 4 ID : 264330359373

Status : **Answered**

Chosen Option : 3

Q.20 PQR is an equilateral triangle inscribed in a circle. S is any point on the arc QR. Measure of $\frac{1}{2} \angle PSQ$ is:

- Ans
- 1. 20°
 - 2. 15°
 - 3. 30°
 - 4. 60°

Question ID : 264330165662
Option 1 ID : 264330649729
Option 2 ID : 264330649730
Option 3 ID : 264330649727
Option 4 ID : 264330649728
Status : Not Answered
Chosen Option : --

Q.21 If $\frac{x}{y} + \frac{y}{x} = 1$ and $x + y = 2$, then the value of $x^3 + y^3$ is:

- Ans
- 1. 1
 - 2. 3
 - 3. 0
 - 4. 2

Question ID : 264330157775
Option 1 ID : 264330618460
Option 2 ID : 264330618462
Option 3 ID : 264330618459
Option 4 ID : 264330618461
Status : Not Answered
Chosen Option : --

Q.22 If the height of a cone is 7 cm and the diameter of the circular base is 12 cm, then its volume is (nearest to integer):

- Ans
- 1. 254 cm^3
 - 2. 284 cm^3
 - 3. 264 cm^3
 - 4. 274 cm^3

Question ID : 264330103751
Option 1 ID : 264330407309
Option 2 ID : 264330407312
Option 3 ID : 264330407310
Option 4 ID : 264330407311
Status : Not Answered
Chosen Option : --

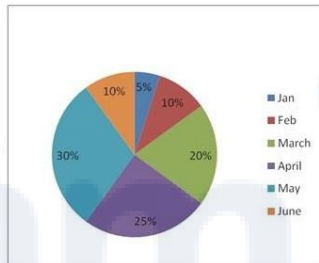
Q.23 A, B and C can do a piece of work in 20 days, 30 days and 60 days respectively. If A works daily and on every third day B and C also work with A, then in how many days, will the work be completed?

- Ans
- 1. 21
 - 2. 18
 - 3. 12
 - 4. 15

Question ID : 26433082412
 Option 1 ID : 264330323484
 Option 2 ID : 264330323483
 Option 3 ID : 264330323481
 Option 4 ID : 264330323482
 Status : Answered
 Chosen Option : 4

Q.24 Darjeeling gets tourists from two countries A and B. Percentage wise distribution of the influx of tourists is given below for the first six months of the year.

Total number of tourists = 60000	
Month	Ratio(A : B)
Jan	5:7
Feb	6:7
Mar	3:2
April	8:7
May	4:5
June	3:4



Find the ratio of tourists from country A coming in during March and April.

- Ans
- 1. 4:7
 - 2. 3:7
 - 3. 7:10
 - 4. 9:10

Question ID : 264330158398
 Option 1 ID : 264330620954
 Option 2 ID : 264330620953
 Option 3 ID : 264330620952
 Option 4 ID : 264330620951
 Status : Not Answered
 Chosen Option : --

Q.25 The value of $11 \times 11 + 11 \div 11 - 11 \times 11 + 11 + 11 \times 11 - 11 - 11 \times 11$ is:

- Ans
- 1. 1
 - 2. 11
 - 3. 121
 - 4. 0

Question ID : 26433072965
 Option 1 ID : 264330286053
 Option 2 ID : 264330286054
 Option 3 ID : 264330286055
 Option 4 ID : 264330286052
 Status : Answered
 Chosen Option : 1

Q.26 A man spends 72% of his salary and saves ₹5,740 per month. What is 10% of his annual salary (in ₹)?

- Ans
- 1. ₹21600
 - 2. ₹24600
 - 3. ₹20500
 - 4. ₹28400

Question ID : 264330145060

Option 1 ID : 264330568496

Option 2 ID : 264330568498

Option 3 ID : 264330568495

Option 4 ID : 264330568497

Status : Not Answered

Chosen Option : --

Q.27 The population of a city is 3,52,314. It increases annually at the rate of 15% per annum. What was its population 2 years ago?

- Ans
- 1. 3,02,400
 - 2. 3,06,360
 - 3. 2,66,400
 - 4. 2,56,400

Question ID : 264330103387

Option 1 ID : 264330405856

Option 2 ID : 264330405854

Option 3 ID : 264330405855

Option 4 ID : 264330405853

Status : Not Answered

Chosen Option : --

Q.28 A tourist van travels the distance of 35 km from Dehradun to Mussoorie at an average speed of 36 km/h and returns at 60 km/h. What is the approximate average speed (in km/h) of the tourist van for the entire journey?

- Ans
- 1. 48
 - 2. 42
 - 3. 45
 - 4. 50

Question ID : 264330108981

Option 1 ID : 264330428201

Option 2 ID : 264330428204

Option 3 ID : 264330428202

Option 4 ID : 264330428203

Status : Answered

Chosen Option : 2

Q.29 The HCF and the LCM of two numbers are 5 and 175, respectively. If the ratio of the two numbers is 5:7, the larger of the two numbers is _____.

- Ans 1. 35
 2. 25
 3. 45
 4. 75

Question ID : 264330102313
Option 1 ID : 264330401718
Option 2 ID : 264330401717
Option 3 ID : 264330401719
Option 4 ID : 264330401720
Status : Answered
Chosen Option : 3

Q.30 The product of two numbers is 726 and their HCF is 11, then their LCM is:

- Ans 1. 58
 2. 68
 3. 66
 4. 76

Question ID : 264330145032
Option 1 ID : 264330568385
Option 2 ID : 264330568386
Option 3 ID : 264330568384
Option 4 ID : 264330568383
Status : Not Answered
Chosen Option : --

Q.31 If a truck moves at a constant speed of 30 km/h for 1 kilometre and 45 km/h for the next 1 kilometre. What is the average speed of the truck?

- Ans 1. 32 km/h
 2. 36 km/h
 3. 38 km/h
 4. 34 km/h

Question ID : 264330104412
Option 1 ID : 264330409949
Option 2 ID : 264330409951
Option 3 ID : 264330409952
Option 4 ID : 264330409950
Status : Answered
Chosen Option : 1

Q.32 P, Q and R, when working individually, can complete a job in, respectively, 36 days, 48 days and 144 days. P, Q and R start working together. P leaves the job 12 days before completion and Q leaves the job 8 days before completion. R works from the beginning till the end of the job. Determine the total number of days taken to complete the job.

- Ans
- 1. 24
 - 2. 27
 - 3. 30
 - 4. 25

Question ID : 264330114534

Option 1 ID : 264330450221

Option 2 ID : 264330450223

Option 3 ID : 264330450224

Option 4 ID : 264330450222

Status : Answered

Chosen Option : 4

Q.33 If $a + b = 10$ and $ab = 6$, then the value of $a^3 + b^3$ is:

- Ans
- 1. 800
 - 2. 820
 - 3. 860
 - 4. 840

Question ID : 264330157766

Option 1 ID : 264330618426

Option 2 ID : 264330618425

Option 3 ID : 264330618423

Option 4 ID : 264330618424

Status : Answered

Chosen Option : 1

Q.34 If $\cos \theta - \sin \theta = \sqrt{2} \sin \theta$, then $(\cos \theta + \sin \theta)$ is:

- Ans
- 1. $-\sqrt{2} \cos \theta$
 - 2. $\sqrt{2} \cos \theta$
 - 3. $\sqrt{2} \tan \theta$
 - 4. $-\sqrt{2} \sin \theta$

Question ID : 264330158303

Option 1 ID : 264330620572

Option 2 ID : 264330620571

Option 3 ID : 264330620574

Option 4 ID : 264330620573

Status : Answered

Chosen Option : 2

Q.35 The sides of a triangle are in the ratio 5 : 12 : 13 and its perimeter is 90 cm. Find its area (in cm^2).

- Ans 1. 150
 2. 270
 3. 30
 4. 60

Question ID : 264330145113

Option 1 ID : 264330568707

Option 2 ID : 264330568709

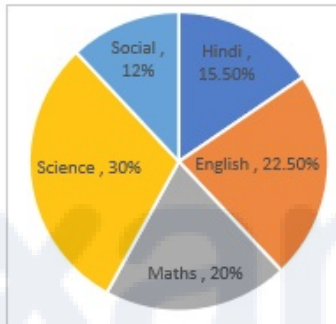
Option 3 ID : 264330568708

Option 4 ID : 264330568710

Status : Not Answered

Chosen Option : --

Q.36 The given pie-chart shows the distribution of the marks scored by Ram in five different subjects (in percentage).



What is the ratio of the central angle of Maths to the central angle of Science?

- Ans 1. 5 : 2
 2. 2 : 3
 3. 4 : 3
 4. 3 : 5

Question ID : 264330158623

Option 1 ID : 264330621854

Option 2 ID : 264330621853

Option 3 ID : 264330621851

Option 4 ID : 264330621852

Status : Answered

Chosen Option : 3

Q.37 Study the given data and answer the question that follows.

The tables shows the number of candidates (in lakh) appearing in an entrance exam from four different cities and the ratio of candidates passing and failing in the same.

City	A	B	C	D
Number of candidates	2.15	1.14	1.56	2.35

Ratio of candidates passing and failing within the city.

City	Passing	Failing
A	4	2
B	5	3
C	6	4
D	4	6

What is the number of failed candidates (in lakh) in city D?

- Ans
- 1. 1.70
 - 2. 1.25
 - 3. 1.85
 - 4. 1.41

Question ID : 264330158258

Option 1 ID : 264330620392

Option 2 ID : 264330620394

Option 3 ID : 264330620391

Option 4 ID : 264330620393

Status : Answered

Chosen Option : 1

Q.38 Two circles of radius 13 cm and 15 cm intersect each other at points A and B. If the length of the common chord is 12 cm, then what is the distance between their centres?

- Ans
- 1. $\sqrt{145} + \sqrt{184}$
 - 2. $\sqrt{131} + \sqrt{181}$
 - 3. $\sqrt{145} + \sqrt{169}$
 - 4. $\sqrt{133} + \sqrt{189}$

Question ID : 264330168751

Option 1 ID : 264330661818

Option 2 ID : 264330661816

Option 3 ID : 264330661815

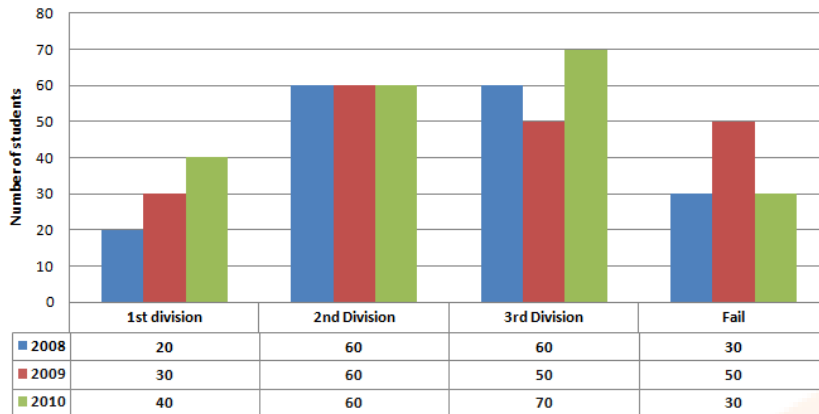
Option 4 ID : 264330661817

Status : Answered

Chosen Option : 4

Q.39 Study the given bar-graph and answer the question that follows.

The bar-graph shows the higher secondary students of a school for the years 2008, 2009 and 2010.



The percentage of students who passed in the second division in the year 2010 was:

- Ans**
- 1. 25%
 - 2. 28%
 - 3. 30%
 - 4. 32%

Question ID : 264330163475

Option 1 ID : 264330641159

Option 2 ID : 264330641160

Option 3 ID : 264330641161

Option 4 ID : 264330641162

Status : Answered

Chosen Option : 3

Q.40 Two numbers are in the ratio 5:3 and the difference between these two numbers is 34. Find the smaller of the two numbers.

- Ans**
- 1. 51
 - 2. 85
 - 3. 68
 - 4. 34

Question ID : 264330104188

Option 1 ID : 264330409053

Option 2 ID : 264330409054

Option 3 ID : 264330409056

Option 4 ID : 264330409055

Status : Answered

Chosen Option : 1

Q.41 The radii of the ends of a frustum of a solid right-circular cone 45 cm high are 28 cm and 7 cm. If this frustum is melted and reconstructed into a solid right circular cylinder whose radius of base and height are in the ratio 3 : 5, find the curved surface area (in cm^2) of this cylinder. [Use $\pi = \frac{22}{7}$.]

- Ans**
- 1. 4580
 - 2. 4610
 - 3. 4640
 - 4. 4620

Question ID : 264330122878

Option 1 ID : 264330481581

Option 2 ID : 264330481580

Option 3 ID : 264330481579

Option 4 ID : 264330481582

Status : Answered

Chosen Option : 3

Q.42 A man runs for 40 km. The time taken by him in the first 10 km is twice the time taken by him in the second 10 km. The time taken in the third 10 km is half of the time taken in the fourth 10 km, and the time taken in the fourth 10 km is equal to the time taken in the first 10 km. If his speed in the first 10 km is 40 km/h, then what is the average speed for 40 km?

- Ans**
- 1. 50 km/h
 - 2. $\frac{70}{3}$ km/h
 - 3. $\frac{160}{3}$ km/h
 - 4. 40 km/h

Question ID : 26433081725

Option 1 ID : 264330320733

Option 2 ID : 264330320734

Option 3 ID : 264330320736

Option 4 ID : 264330320735

Status : Answered

Chosen Option : 1

Q.43 Find the value of $(\tan^2 \theta + \tan^4 \theta)$.

- Ans**
- 1. $\cot^2 \theta - \tan^2 \theta$
 - 2. $\sec^4 \theta - \sec^2 \theta$
 - 3. $\sec^2 \theta - \sec^4 \theta$
 - 4. $\sec^4 \theta + \sec^2 \theta$

Question ID : 264330130397

Option 1 ID : 264330510702

Option 2 ID : 264330510701

Option 3 ID : 264330510699

Option 4 ID : 264330510700

Status : Answered

Chosen Option : 2

Q.44 If the hypotenuse of a right-angled triangle is 29 cm and the sum of the other two sides is 41 cm, then the difference between the other two sides is:

- Ans
- 1. 5 cm
 - 2. 1 cm
 - 3. 2 cm
 - 4. 10 cm

Question ID : 264330165659
Option 1 ID : 264330649716
Option 2 ID : 264330649718
Option 3 ID : 264330649717
Option 4 ID : 264330649715
Status : Answered
Chosen Option : 1

Q.45 Two numbers are in the ratio 3 : 4. The product of their HCF and LCM is 2700. The sum of the numbers is:

- Ans
- 1. 60
 - 2. 105
 - 3. 15
 - 4. 45

Question ID : 26433063995
Option 1 ID : 264330250575
Option 2 ID : 264330250572
Option 3 ID : 264330250573
Option 4 ID : 264330250574
Status : Answered
Chosen Option : 2

Q.46 Rajesh invested ₹10,000 by dividing it into two different investment schemes, A and B, at simple interest rates of 8% and 10%, respectively. If the total interest earned in 2 years is ₹1,680, the amount invested in scheme A is:

- Ans
- 1. ₹8,000
 - 2. ₹2,000
 - 3. ₹6,000
 - 4. ₹4,000

Question ID : 264330104395
Option 1 ID : 264330409884
Option 2 ID : 264330409881
Option 3 ID : 264330409883
Option 4 ID : 264330409882
Status : Not Attempted and Marked For Review
Chosen Option : --

Q.47 If 42, 36 and 35 are the first three terms of a proportion, then the fourth term is:

- Ans 1. 27
 2. 28
 3. 30
 4. 32

Question ID : 264330145045

Option 1 ID : 264330568438

Option 2 ID : 264330568437

Option 3 ID : 264330568436

Option 4 ID : 264330568435

Status : Answered

Chosen Option : 2

Q.48 If the price item is increased by 70% and then allows a scheme discount of 5% and 20% on this marked price. If price is paid in cash and additional discount of 20% is allowed then what is his gain percentage?

- Ans 1. 2.25%
 2. 4.36%
 3. 3.25%
 4. 3.36%

Question ID : 264330104401

Option 1 ID : 264330409905

Option 2 ID : 264330409908

Option 3 ID : 264330409906

Option 4 ID : 264330409907

Status : Not Answered

Chosen Option : --

Q.49 Jonathan had borrowed a sum of money 3 years ago at 10% interest per annum compounded annually for a 5-year period, with the amount to be paid at the end of the period being ₹1,61,051. However, there is no pre-payment penalty and Jonathan has received some bonus payment now, with which he has decided to clear his debt. How much does Jonathan have to pay now to clear his debt?

- Ans 1. ₹1,33,000
 2. ₹1,32,900
 3. ₹1,33,100
 4. ₹1,33,200

Question ID : 264330145054

Option 1 ID : 264330568471

Option 2 ID : 264330568472

Option 3 ID : 264330568473

Option 4 ID : 264330568474

Status : Answered

Chosen Option : 3

Q.50 What is the area of a triangle whose sides are of lengths 12 cm, 13 cm and 5 cm?

- Ans 1. 30 cm^2
 2. 15 cm^2
 3. 40 cm^2
 4. 70 cm^2

Question ID : 264330106081
Option 1 ID : 264330416627
Option 2 ID : 264330416625
Option 3 ID : 264330416626
Option 4 ID : 264330416628
Status : Not Answered
Chosen Option : --

Section : English Comprehension

Q.1 Select the INCORRECTLY spelt word.

- Ans 1. Interrogate
 2. Alienate
 3. Deserve
 4. Assasinate

Question ID : 26433089088
Option 1 ID : 264330349875
Option 2 ID : 264330349876
Option 3 ID : 264330349873
Option 4 ID : 264330349874
Status : Answered
Chosen Option : 4

Q.2 Select the most appropriate meaning of the given idiom.
Bend over backwards

- Ans 1. Working hard to try to impress
 2. Working slowly and lazily
 3. Going backward
 4. Using wrongful means

Question ID : 26433096216
Option 1 ID : 264330377620
Option 2 ID : 264330377619
Option 3 ID : 264330377617
Option 4 ID : 264330377618
Status : Answered
Chosen Option : 1

Q.3 Select the INCORRECTLY spelt word from the underlined words in the following sentence.

This was a blatent disregard to the advisory by the host against it and in violation of norms of the meeting.

- Ans
- 1. advisory
 - 2. blatent
 - 3. disregard
 - 4. violation

Question ID : 264330141156
Option 1 ID : 264330552969
Option 2 ID : 264330552967
Option 3 ID : 264330552968
Option 4 ID : 264330552970
Status : Answered
Chosen Option : 2

Q.4 Parts of the following sentence have been given as options. Select the option that contains an error.

The dancers swayed dainty on the stage last night.

- Ans
- 1. last night
 - 2. on the stage
 - 3. The dancers
 - 4. swayed dainty

Question ID : 264330134122
Option 1 ID : 264330525514
Option 2 ID : 264330525513
Option 3 ID : 264330525511
Option 4 ID : 264330525512
Status : Answered
Chosen Option : 4

Q.5 Select the most appropriate one-word substitution of the given group of words.

A notice of the death of a person, often with a biographical sketch, as in a newspaper.

- Ans
- 1. Obituary
 - 2. Oblivion
 - 3. Elegy
 - 4. Advertisement

Question ID : 26433090852
Option 1 ID : 264330356819
Option 2 ID : 264330356817
Option 3 ID : 264330356820
Option 4 ID : 264330356818
Status : Not Attempted and Marked For Review
Chosen Option : --

Q.6 Select the INCORRECTLY spelt word.

- Ans
- 1. Adjacent
 - 2. Accomplish
 - 3. Agregate
 - 4. Allure

Question ID : 264330122278
Option 1 ID : 264330479240
Option 2 ID : 264330479241
Option 3 ID : 264330479239
Option 4 ID : 264330479242
Status : Marked For Review
Chosen Option : 3

Q.7 Select the most appropriate idiomatic expression that can substitute the underlined segment in the given sentence.
Both Nitin and Uday are of the same interests.

- Ans
- 1. under the weather
 - 2. birds of the same feather
 - 3. blowing smoke without fire
 - 4. different kettles of fish

Question ID : 264330134223
Option 1 ID : 264330525890
Option 2 ID : 264330525888
Option 3 ID : 264330525887
Option 4 ID : 264330525889
Status : Answered
Chosen Option : 1

Q.8 Select the most appropriate ANTONYM of the word 'moving' in the given sentence and choose the correct option.

The old grandfather clock chimed loudly, marking the passage of time with its steady tick-tock.

- Ans
- 1. Steady
 - 2. Marking
 - 3. Chimed
 - 4. Passage

Question ID : 264330163539
Option 1 ID : 264330641414
Option 2 ID : 264330641412
Option 3 ID : 264330641411
Option 4 ID : 264330641413
Status : Answered
Chosen Option : 1

Q.9 Select the most appropriate option that can substitute the underlined segment in the given sentence. If there is no need to substitute it, select 'No substitution required'.
Her paintings are way better then her sketches.

- Ans
- 1. off
 - 2. than
 - 3. more
 - 4. No substitution required

Question ID : 26433070772
Option 1 ID : 264330277544
Option 2 ID : 264330277546
Option 3 ID : 264330277545
Option 4 ID : 264330277547
Status : Answered
Chosen Option : 2

Q.10 Select the most appropriate meaning of the underlined idiom in the given sentence.
I hate to get off on the wrong foot.

- Ans
- 1. To start something with positive factors
 - 2. To start something with neutral factors
 - 3. To start a relationship or activity badly
 - 4. To start something with an injury on the wrong foot

Question ID : 26433089397
Option 1 ID : 264330351089
Option 2 ID : 264330351091
Option 3 ID : 264330351090
Option 4 ID : 264330351092
Status : Answered
Chosen Option : 3

Q.11 Select the most appropriate phrasal verb to fill in the blank.
Arunima _____ a lot during her vacation time.

- Ans
- 1. gets on
 - 2. gets after
 - 3. gets about
 - 4. gets along

Question ID : 26433084918
Option 1 ID : 264330333396
Option 2 ID : 264330333395
Option 3 ID : 264330333394
Option 4 ID : 264330333393
Status : Answered
Chosen Option : 4

Q.12 Select the most appropriate meaning of the given idiom.
The best of both worlds

- Ans 1. Good things come after bad things
 2. An ideal situation
 3. Better to show than tell
 4. Make people comfortable

Question ID : 264330163403
Option 1 ID : 264330640894
Option 2 ID : 264330640891
Option 3 ID : 264330640893
Option 4 ID : 264330640892
Status : Answered
Chosen Option : 4

Q.13 Select the option that can be used as a one-word substitute for the underlined group of words.

How did you become interested in learning the art of producing beautiful handwriting?

- Ans 1. Lexicography
 2. Demography
 3. Calligraphy
 4. Graphology

Question ID : 26433088833
Option 1 ID : 264330348885
Option 2 ID : 264330348887
Option 3 ID : 264330348886
Option 4 ID : 264330348888
Status : Not Answered
Chosen Option : --

Q.14 Select the most appropriate synonym of the given word.

Haphazard

- Ans 1. Random
 2. Sociable
 3. Aggressive
 4. Confident

Question ID : 264330163333
Option 1 ID : 264330640634
Option 2 ID : 264330640633
Option 3 ID : 264330640632
Option 4 ID : 264330640631
Status : Not Answered
Chosen Option : --

Q.15 Parts of the following sentence have been given as options. One of them may contain an error. Select the part that contains the error from the given options. If you don't find any error, mark 'No error' as your answer.

We feed the horse oats for a week because it had eaten all the hay.

- Ans
- 1. No error
 - 2. it had eaten all the hay
 - 3. We feed the horse oats
 - 4. for a week because

Question ID : 26433090495
Option 1 ID : 264330355432
Option 2 ID : 264330355431
Option 3 ID : 264330355429
Option 4 ID : 264330355430
Status : Answered
Chosen Option : 1

Q.16 The following sentence has been split into four segments. Identify the segment that contains a grammatical error.

They will not attend / the event / as they're going / away at end of April.

- Ans
- 1. away at end of April.
 - 2. as they're going
 - 3. the event
 - 4. They will not attend

Question ID : 264330120573
Option 1 ID : 264330472536
Option 2 ID : 264330472535
Option 3 ID : 264330472538
Option 4 ID : 264330472537
Status : Answered
Chosen Option : 1

Q.17 Select the option that can be used as a one-word substitute for the underlined group of words.

Ms. Scarlet was indifferent to pain and pleasure, she never complained.

- Ans
- 1. Hypocrite
 - 2. Stoic
 - 3. Versatile
 - 4. Amateur

Question ID : 26433088836
Option 1 ID : 264330348897
Option 2 ID : 264330348899
Option 3 ID : 264330348900
Option 4 ID : 264330348898
Status : Answered
Chosen Option : 2

Q.18 You are preparing a speech for the upcoming function. Select a synonym for the highlighted word to make it better.
Despite the advancement in technology many rural areas in developing countries still lack access to basic necessities.

- Ans**
- 1. Desist
 - 2. Disguise
 - 3. Avenue
 - 4. Apathy

Question ID : 264330122810
Option 1 ID : 264330481310
Option 2 ID : 264330481307
Option 3 ID : 264330481308
Option 4 ID : 264330481309
Status : Answered
Chosen Option : 3

Q.19 Select the most appropriate meaning of the underlined idiom.

Students often burn the midnight oil to qualify for competitive examinations.

- Ans**
- 1. put the things on fire at night
 - 2. want to be at a place full of light
 - 3. work until late at night
 - 4. sleep well

Question ID : 26433099087
Option 1 ID : 264330388981
Option 2 ID : 264330388984
Option 3 ID : 264330388983
Option 4 ID : 264330388982
Status : Answered
Chosen Option : 3

Q.20 Select the most appropriate meaning of the underlined idiom.
More people in Turkey are on the breadline now than thirty years ago.

- Ans**
- 1. Be very poor
 - 2. Are well educated
 - 3. Be very expensive
 - 4. Earn a lot of money

Question ID : 264330132898
Option 1 ID : 264330520654
Option 2 ID : 264330520652
Option 3 ID : 264330520651
Option 4 ID : 264330520653
Status : Answered
Chosen Option : 1

Q.21 Select the most appropriate synonym of the given word.
Justifiable

- Ans
- 1. Indefensible
 - 2. Neutral
 - 3. Maintainable
 - 4. Reasonable

Question ID : 264330164162
Option 1 ID : 264330643899
Option 2 ID : 264330643902
Option 3 ID : 264330643901
Option 4 ID : 264330643900
Status : Answered
Chosen Option : 4

Q.22 Select the most appropriate meaning of the given idiom.

Left out in the cold

- Ans
- 1. To serve stale and cold food
 - 2. To leave in hurry
 - 3. To bear extreme weather condition
 - 4. To be ignored

Question ID : 264330163406
Option 1 ID : 264330640906
Option 2 ID : 264330640904
Option 3 ID : 264330640905
Option 4 ID : 264330640903
Status : Answered
Chosen Option : 2

Q.23 Select the option that can be used as a one-word substitute for the given group of words.

Fear of water

- Ans
- 1. Hydrophobia
 - 2. Bibliophobia
 - 3. Microphobia
 - 4. Botanophobia

Question ID : 26433088755
Option 1 ID : 264330348574
Option 2 ID : 264330348575
Option 3 ID : 264330348573
Option 4 ID : 264330348576
Status : Answered
Chosen Option : 1

Q.24 Select the option that can substitute the bracketed word segment correctly and complete the following sentence meaningfully.

Lots of kids (was visualised) crossing the road when the bus arrived.

- Ans
- 1. were seen
 - 2. have been seen
 - 3. are seen
 - 4. was seen

Question ID : 264330134148
Option 1 ID : 264330525617
Option 2 ID : 264330525618
Option 3 ID : 264330525616
Option 4 ID : 264330525615
Status : Answered
Chosen Option : 1

Q.25 Select the most appropriate synonym of the given word.
Dreadful

- Ans
- 1. Feeble
 - 2. Terrible
 - 3. Auspicious
 - 4. Propitious

Question ID : 264330120533
Option 1 ID : 264330472381
Option 2 ID : 264330472382
Option 3 ID : 264330472380
Option 4 ID : 264330472379
Status : Answered
Chosen Option : 2

Q.26 Select the most appropriate meaning of the underlined idiom.
We dodged a bullet when we didn't fall for the agents' words.

- Ans
- 1. To give something a try
 - 2. To narrowly avoid situation
 - 3. To be out of your comfort zone
 - 4. To start performing better

Question ID : 264330120619
Option 1 ID : 264330472715
Option 2 ID : 264330472717
Option 3 ID : 264330472718
Option 4 ID : 264330472716
Status : Answered
Chosen Option : 3

Q.27 Select the word which means the same as the group of words underlined in the given sentence.

The pandemic deeply affected small business owners, as they have no means of livelihood left.

- Ans
- 1. Pauper
 - 2. Worker
 - 3. Unemployed
 - 4. Mason

Question ID : 26433089713
Option 1 ID : 264330352348
Option 2 ID : 264330352346
Option 3 ID : 264330352347
Option 4 ID : 264330352345
Status : Answered
Chosen Option : 3

Q.28 Select the option that will improve the underlined part of the given sentence.
The use of chemicals, insecticides and pesticides began after the Green Revolution.

- Ans
- 1. A practice of chemicals, insecticides and pesticides
 - 2. The custom of chemicals, insecticides and pesticides
 - 3. Consumption of chemicals, insecticides and pesticides
 - 4. The usage of chemicals, insecticides and pesticides

Question ID : 264330145288
Option 1 ID : 264330569407
Option 2 ID : 264330569408
Option 3 ID : 264330569409
Option 4 ID : 264330569410
Status : Answered
Chosen Option : 4

Q.29 Select the most appropriate ANTONYM of the given word.

Catastrophic

- Ans
- 1. Calamity
 - 2. Fortuitous
 - 3. Fiasco
 - 4. Sabotage

Question ID : 264330163359
Option 1 ID : 264330640727
Option 2 ID : 264330640729
Option 3 ID : 264330640730
Option 4 ID : 264330640728
Status : Not Attempted and Marked For Review
Chosen Option : --

Q.30 Select the most appropriate meaning of the given idiom.

An arm and a leg

- Ans
- 1. To ask for too much
 - 2. A large amount of money
 - 3. Everything is ready
 - 4. To be lost and bewildered

Question ID : 26433092076
Option 1 ID : 264330361626
Option 2 ID : 264330361627
Option 3 ID : 264330361625
Option 4 ID : 264330361628
Status : Answered
Chosen Option : 1

Q.31 The following sentence has been split into four segments. Identify the segment that contains a spelling error.
He wrote his dairy / in code / so that nobody / could understand it.

- Ans
- 1. so that nobody
 - 2. could understand it
 - 3. in code
 - 4. He wrote his dairy

Question ID : 264330123023
Option 1 ID : 264330482157
Option 2 ID : 264330482158
Option 3 ID : 264330482156
Option 4 ID : 264330482155
Status : Answered
Chosen Option : 2

Q.32 Select the most appropriate ANTONYM for the highlighted word.
The negligent attitude of the cops was criticised.

- Ans
- 1. attentive
 - 2. reluctant
 - 3. amplify
 - 4. bored

Question ID : 264330120738
Option 1 ID : 264330473169
Option 2 ID : 264330473167
Option 3 ID : 264330473170
Option 4 ID : 264330473168
Status : Answered
Chosen Option : 3

Q.33 Select the most appropriate one-word substitution of the given group of words.

A person engaged in or trained for spaceflight.

- Ans
- 1. Astute
 - 2. Astronomer
 - 3. Astronaut
 - 4. Atrocious

Question ID : 26433090849
Option 1 ID : 264330356806
Option 2 ID : 264330356808
Option 3 ID : 264330356807
Option 4 ID : 264330356805
Status : Marked For Review
Chosen Option : 3

Q.34 Select the most appropriate synonym of the given word.

Site

- Ans
- 1. Lap
 - 2. Location
 - 3. Globe
 - 4. Pull

Question ID : 26433063165
Option 1 ID : 264330247327
Option 2 ID : 264330247324
Option 3 ID : 264330247325
Option 4 ID : 264330247326
Status : Answered
Chosen Option : 2

Q.35 Select the INCORRECTLY spelt word.

- Ans
- 1. Serene
 - 2. Triumph
 - 3. Comparsion
 - 4. Unveil

Question ID : 26433091837
Option 1 ID : 264330360685
Option 2 ID : 264330360686
Option 3 ID : 264330360688
Option 4 ID : 264330360687
Status : Answered
Chosen Option : 1

Q.36 The following sentence has been split into four segments. Identify the segment that contains a grammatical error.

She will have participate / in the dance competition / by the time her father / returns from the tour.

- Ans**
- 1. in the dance competition
 - 2. She will have participate
 - 3. by the time her father
 - 4. returns from the tour

Question ID : 264330145281
Option 1 ID : 264330569379
Option 2 ID : 264330569380
Option 3 ID : 264330569382
Option 4 ID : 264330569381
Status : Answered
Chosen Option : 2

Q.37 Select the option that can be used as a one-word substitute for the given group of words.

Working or operating quickly and effectively in an organised way

- Ans**
- 1. Efficient
 - 2. Extensive
 - 3. Excellent
 - 4. Effusive

Question ID : 26433099604
Option 1 ID : 264330391031
Option 2 ID : 264330391030
Option 3 ID : 264330391032
Option 4 ID : 264330391029
Status : Answered
Chosen Option : 1

Q.38 Select the most appropriate synonym of the given word.

Abandon

- Ans**
- 1. Perish
 - 2. Desert
 - 3. Prolong
 - 4. Retain

Question ID : 264330117331
Option 1 ID : 264330461380
Option 2 ID : 264330461379
Option 3 ID : 264330461377
Option 4 ID : 264330461378
Status : Answered
Chosen Option : 2

Q.39 Select the most appropriate ANTONYM of the given word.
Damp

- Ans
- 1. Misty
 - 2. Arid
 - 3. Tropical
 - 4. Soaked

Question ID : 264330165261

Option 1 ID : 264330648138

Option 2 ID : 264330648136

Option 3 ID : 264330648135

Option 4 ID : 264330648137

Status : Not Attempted and
Marked For Review

Chosen Option : --

Q.40 Select the most appropriate meaning of the given idiom.

A leopard can't change his spots

- Ans
- 1. Someone who is cherished above all others
 - 2. A visual presentation is far more descriptive than words
 - 3. Something good that isn't recognised at first
 - 4. You cannot change who you are

Question ID : 264330163402

Option 1 ID : 264330640889

Option 2 ID : 264330640887

Option 3 ID : 264330640888

Option 4 ID : 264330640890

Status : Answered

Chosen Option : 4

Comprehension:

In the following passage some words have been deleted. Read the passage carefully and select the most appropriate option for each blank.

The Amazon rainforest is an awe-inspiring natural wonder that (1)_____ across several South American countries, including Brazil, Peru, Colombia, and Ecuador. Covering an (2)_____ area of 5.5 million square kilometres, it is the largest tropical rainforest on Earth. The Amazon jungle is (3)_____ for its remarkable biodiversity, harbouring an astonishing array of plant and animal species that are still being discovered and studied. The dense vegetation of the jungle creates a (4)_____ and complex ecosystem, supporting countless species and providing crucial ecosystem services such as carbon sequestration and climate regulation. It is also home to (5)_____ communities that have thrived within its rich confines for centuries, preserving their traditions and deep connection to the land.

SubQuestion No : 41

Q.41 Select the most appropriate option to fill in blank number 1.

- Ans
- 1. reaches
 - 2. lengths
 - 3. amounts
 - 4. spans

Question ID : 264330164254

Option 1 ID : 264330644245

Option 2 ID : 264330644246

Option 3 ID : 264330644243

Option 4 ID : 264330644244

Status : Marked For Review

Chosen Option : 1

Comprehension:

In the following passage some words have been deleted. Read the passage carefully and select the most appropriate option for each blank.

The Amazon rainforest is an awe-inspiring natural wonder that (1)_____ across several South American countries, including Brazil, Peru, Colombia, and Ecuador. Covering an (2)_____ area of 5.5 million square kilometres, it is the largest tropical rainforest on Earth. The Amazon jungle is (3)_____ for its remarkable biodiversity, harbouring an astonishing array of plant and animal species that are still being discovered and studied. The dense vegetation of the jungle creates a (4)_____ and complex ecosystem, supporting countless species and providing crucial ecosystem services such as carbon sequestration and climate regulation. It is also home to (5)_____ communities that have thrived within its rich confines for centuries, preserving their traditions and deep connection to the land.

SubQuestion No : 42**Q.42 Select the most appropriate option to fill in blank number 2.**

- Ans 1. gauged
 2. rated
 3. estimated
 4. evaluated

Question ID : 264330164255

Option 1 ID : 264330644247

Option 2 ID : 264330644250

Option 3 ID : 264330644248

Option 4 ID : 264330644249

Status : Answered

Chosen Option : 3

Comprehension:

In the following passage some words have been deleted. Read the passage carefully and select the most appropriate option for each blank.

The Amazon rainforest is an awe-inspiring natural wonder that (1)_____ across several South American countries, including Brazil, Peru, Colombia, and Ecuador. Covering an (2)_____ area of 5.5 million square kilometres, it is the largest tropical rainforest on Earth. The Amazon jungle is (3)_____ for its remarkable biodiversity, harbouring an astonishing array of plant and animal species that are still being discovered and studied. The dense vegetation of the jungle creates a (4)_____ and complex ecosystem, supporting countless species and providing crucial ecosystem services such as carbon sequestration and climate regulation. It is also home to (5)_____ communities that have thrived within its rich confines for centuries, preserving their traditions and deep connection to the land.

SubQuestion No : 43**Q.43 Select the most appropriate option to fill in blank number 3.**

- Ans 1. great
 2. acclaimed
 3. renowned
 4. pre-eminent

Question ID : 264330164256

Option 1 ID : 264330644251

Option 2 ID : 264330644252

Option 3 ID : 264330644253

Option 4 ID : 264330644254

Status : Answered

Chosen Option : 3

Comprehension:

In the following passage some words have been deleted. Read the passage carefully and select the most appropriate option for each blank.

The Amazon rainforest is an awe-inspiring natural wonder that (1)_____ across several South American countries, including Brazil, Peru, Colombia, and Ecuador. Covering an (2)_____ area of 5.5 million square kilometres, it is the largest tropical rainforest on Earth. The Amazon jungle is (3)_____ for its remarkable biodiversity, harbouring an astonishing array of plant and animal species that are still being discovered and studied. The dense vegetation of the jungle creates a (4)_____ and complex ecosystem, supporting countless species and providing crucial ecosystem services such as carbon sequestration and climate regulation. It is also home to (5)_____ communities that have thrived within its rich confines for centuries, preserving their traditions and deep connection to the land.

SubQuestion No : 44**Q.44 Select the most appropriate option to fill in blank number 4.**

- Ans 1. vigour
 2. spirited
 3. vibrant
 4. lavish

Question ID : 264330164257

Option 1 ID : 264330644258

Option 2 ID : 264330644256

Option 3 ID : 264330644255

Option 4 ID : 264330644257

Status : Answered

Chosen Option : 4

Comprehension:

In the following passage some words have been deleted. Read the passage carefully and select the most appropriate option for each blank.

The Amazon rainforest is an awe-inspiring natural wonder that (1)_____ across several South American countries, including Brazil, Peru, Colombia, and Ecuador. Covering an (2)_____ area of 5.5 million square kilometres, it is the largest tropical rainforest on Earth. The Amazon jungle is (3)_____ for its remarkable biodiversity, harbouring an astonishing array of plant and animal species that are still being discovered and studied. The dense vegetation of the jungle creates a (4)_____ and complex ecosystem, supporting countless species and providing crucial ecosystem services such as carbon sequestration and climate regulation. It is also home to (5)_____ communities that have thrived within its rich confines for centuries, preserving their traditions and deep connection to the land.

SubQuestion No : 45**Q.45 Select the most appropriate option to fill in blank number 5.**

- Ans 1. late
 2. ancient
 3. indigenous
 4. organic

Question ID : 264330164258

Option 1 ID : 264330644260

Option 2 ID : 264330644261

Option 3 ID : 264330644262

Option 4 ID : 264330644259

Status : Answered

Chosen Option : 3

Comprehension:

Read the given passage and answer the question that follows.

We started our research into organisational and personal excellence by studying a slightly different topic. We figured that if we could learn why certain people were more effective than others, then we could learn exactly what they did, clone it and pass it on to others. We asked people to identify who they thought were their most effective colleagues. In fact, over the past twenty-five years, we have asked over twenty thousand people to identify the individuals in their organisations who could really get things done. We wanted to find those who were not just influential but who were far more influential than the rest.

SubQuestion No : 46**Q.46 Which real life situation can be the most appropriate to be inferred from the passage?**

- Ans 1. Inflation has direct influence on the morals and ethics of an individual.
2. If we do something wrong to decent people, the same comes to haunt us even after many years.
3. People nowadays do not have patience and want quick success and does not matter what path they choose to obtain their targets.
4. Jassie is an efficient employee whose work ethics can be a case study to learn more about organisational and personal excellence.

Question ID : 264330164710

Option 1 ID : 264330645996

Option 2 ID : 264330645995

Option 3 ID : 264330645998

Option 4 ID : 264330645997

Status : Answered

Chosen Option : 4

Comprehension:

Read the given passage and answer the question that follows.

We started our research into organisational and personal excellence by studying a slightly different topic. We figured that if we could learn why certain people were more effective than others, then we could learn exactly what they did, clone it and pass it on to others. We asked people to identify who they thought were their most effective colleagues. In fact, over the past twenty-five years, we have asked over twenty thousand people to identify the individuals in their organisations who could really get things done. We wanted to find those who were not just influential but who were far more influential than the rest.

SubQuestion No : 47**Q.47 Select the most suitable structure for the above passage.**

- Ans 1. Chronological
2. Cause and Effect
3. Pragmatic
4. Compare and contrast

Question ID : 264330164709

Option 1 ID : 264330645991

Option 2 ID : 264330645993

Option 3 ID : 264330645994

Option 4 ID : 264330645992

Status : Not Answered

Chosen Option : --

Comprehension:

Read the given passage and answer the question that follows.

We started our research into organisational and personal excellence by studying a slightly different topic. We figured that if we could learn why certain people were more effective than others, then we could learn exactly what they did, clone it and pass it on to others. We asked people to identify who they thought were their most effective colleagues. In fact, over the past twenty-five years, we have asked over twenty thousand people to identify the individuals in their organisations who could really get things done. We wanted to find those who were not just influential but who were far more influential than the rest.

SubQuestion No : 48

Q.48 Select the most appropriate ANTONYM of the given word.

Effective

- Ans
- 1. Deniable
 - 2. Harmonious
 - 3. Fruitless
 - 4. Courteous

Question ID : 264330164711

Option 1 ID : 264330646001

Option 2 ID : 264330645999

Option 3 ID : 264330646000

Option 4 ID : 264330646002

Status : Answered

Chosen Option : 1

Comprehension:

Read the given passage and answer the question that follows.

We started our research into organisational and personal excellence by studying a slightly different topic. We figured that if we could learn why certain people were more effective than others, then we could learn exactly what they did, clone it and pass it on to others. We asked people to identify who they thought were their most effective colleagues. In fact, over the past twenty-five years, we have asked over twenty thousand people to identify the individuals in their organisations who could really get things done. We wanted to find those who were not just influential but who were far more influential than the rest.

SubQuestion No : 49

Q.49 Select the most appropriate title to the given passage.

- Ans
- 1. Research Grants in Organisations
 - 2. Learn, Clone and Pass
 - 3. Most Effective Colleagues
 - 4. Different Topics

Question ID : 264330164707

Option 1 ID : 264330645985

Option 2 ID : 264330645984

Option 3 ID : 264330645983

Option 4 ID : 264330645986

Status : Answered

Chosen Option : 3

Comprehension:

Read the given passage and answer the question that follows.

We started our research into organisational and personal excellence by studying a slightly different topic. We figured that if we could learn why certain people were more effective than others, then we could learn exactly what they did, clone it and pass it on to others. We asked people to identify who they thought were their most effective colleagues. In fact, over the past twenty-five years, we have asked over twenty thousand people to identify the individuals in their organisations who could really get things done. We wanted to find those who were not just influential but who were far more influential than the rest.

SubQuestion No : 50

Q.50 Select the statement that most appropriately sums up the passage given.

- Ans
- 1. Some people cannot be identified due to their most effective ways in 25 years.
 - 2. Research grants in an organisation should be increased for personal excellence.
 - 3. It takes 25 years of research to make people more effective and influential.
 - 4. Some people are more effective and more influential than others to get things done.

Question ID : 264330164708

Option 1 ID : 264330645988

Option 2 ID : 264330645987

Option 3 ID : 264330645990

Option 4 ID : 264330645989

Status : Answered

Chosen Option : 4

Sub Inspector in Delhi Police and Central Armed Police Forces Examination 2023 Paper I



Prepare 50% Faster

Roll Number	
Candidate Name	
Venue Name	Rajadhani Institute of Engineering And Technology Block II
Exam Date	03/10/2023
Exam Time	12:30 PM - 2:30 PM
Subject	SICPO Paper I 2023

Section : General Intelligence and Reasoning

Q.1 Which of the following numbers will replace the question mark (?) in the given series?
91, 111, 133, ?, 183, 211

- Ans
- 1. 149
 - 2. 156
 - 3. 167
 - 4. 157

Question ID : 26433067631
Option 1 ID : 264330265039
Option 2 ID : 264330265037
Option 3 ID : 264330265036
Option 4 ID : 264330265038
Status : Answered
Chosen Option : 4

Q.2 Three Statements are given followed by Three conclusions numbered I, II and III.
Assuming the statements to be true, even if they seem to be at variance with commonly known facts, decide which of the conclusions logically follow(s) from the statements.

Statements:
All valleys are mountains.
No sea is a mountain.
Some plains are seas.

Conclusions:
I. Some valleys are plains.
II. No plain is a mountain.
III. No sea is a valley.

- Ans
- 1. Only conclusion II follows.
 - 2. Only conclusion III follows.
 - 3. Only conclusion I follows.
 - 4. Both conclusions I and II follow.

Question ID : 264330145341
Option 1 ID : 264330569621
Option 2 ID : 264330569620
Option 3 ID : 264330569622
Option 4 ID : 264330569619
Status : Answered
Chosen Option : 2



Prepare 50% Faster

Q.3 Select the set in which the numbers are related in the same way as are the numbers of the following set.

(NOTE : Operations should be performed on the whole numbers, without breaking down the numbers into its constituent digits. E.g. 13 – Operations on 13 such as adding /subtracting /multiplying etc. to 13 can be performed. Breaking down 13 into 1 and 3 and then performing mathematical operations on 1 and 3 is NOT allowed)

(25, 3, 150)
(13, 7, 182)

- Ans
- 1. (5,8,184)
 - 2. (6,13,234)
 - 3. (10,5,100)
 - 4. (3,4,45)

Question ID : 264330145327

Option 1 ID : 264330569564

Option 2 ID : 264330569566

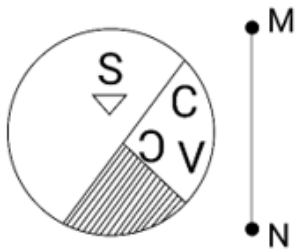
Option 3 ID : 264330569565

Option 4 ID : 264330569563

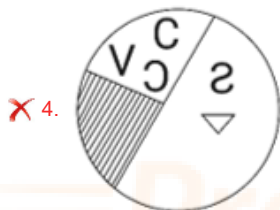
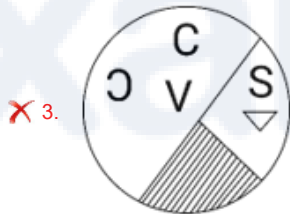
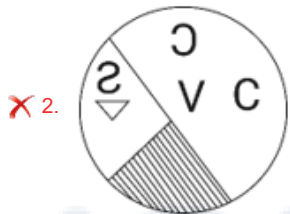
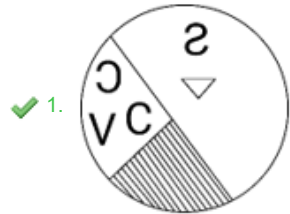
Status : Answered

Chosen Option : 3

Q.4 Select the correct mirror image of the given figure, when the mirror is placed at line MN as shown.



Ans



Question ID : 264330170163

Option 1 ID : 264330667329

Option 2 ID : 264330667328

Option 3 ID : 264330667327

Option 4 ID : 264330667330

Status : Answered

Chosen Option : 1

Q.5 In a certain code language, 'COUNTY' is written as 'ULCYGN' and 'FOREST' is written as 'RLFTHE'. How will 'MARGIN' be written in that language?

- Ans
- 1. RJMDSZ
 - 2. ZMTPRH
 - 3. ZMMRGI
 - 4. RZMNRG

Question ID : 26433074765

Option 1 ID : 264330293149

Option 2 ID : 264330293150

Option 3 ID : 264330293151

Option 4 ID : 264330293148

Status : **Not Attempted and Marked For Review**

Chosen Option : --

Q.6 Six students Meera, Jigyasa, Tarun, Naina, Shambhavi and Avni are sitting around a circular table facing the centre (not necessarily in the same order). Shambhavi is an immediate neighbour of both Jigyasa and Avni. Tarun is sitting third to the left of Jigyasa. Meera is sitting second to the right of Avni. Who is sitting third to the right of Meera?

- Ans
- 1. Avni
 - 2. Naina
 - 3. Jigyasa
 - 4. Shambhavi

Question ID : 26433082280

Option 1 ID : 264330322953

Option 2 ID : 264330322956

Option 3 ID : 264330322955

Option 4 ID : 264330322954

Status : **Not Attempted and Marked For Review**

Chosen Option : --

Q.7 Shilpa goes to a park every day for walking. One morning, she started walking from her home and walked 40 km towards the north. Then she turned to the right and walked 60 km. Again, she turned right and walked 40 km. Lastly, she took a left turn and walked 30 km. How far is she from her home?

- Ans
- 1. 140 km
 - 2. 90 km
 - 3. 100 km
 - 4. 60 km

Question ID : 26433097222

Option 1 ID : 264330381588

Option 2 ID : 264330381587

Option 3 ID : 264330381585

Option 4 ID : 264330381586

Status : **Answered**

Chosen Option : 2

Q.8 Which two mathematical signs should be interchanged to make the given equation correct?

$$(75 + 15) \times 27 \times 1 - 9 \div 7 \times (135 + 3) - 10 \div (189 + 63) = 434$$

Ans 1. + and ÷

2. + and -

3. × and +

4. ÷ and -

Question ID : 264330145311

Option 1 ID : 264330569501

Option 2 ID : 264330569500

Option 3 ID : 264330569499

Option 4 ID : 264330569502

Status : **Not Attempted and Marked For Review**

Chosen Option : --

Q.9 Select the Venn diagram that best illustrates the relationship between the following classes.

Animals, Cats, Dogs

Ans

1.



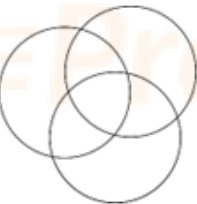
2.



3.



4.



Question ID : 264330132028

Option 1 ID : 264330517210

Option 2 ID : 264330517208

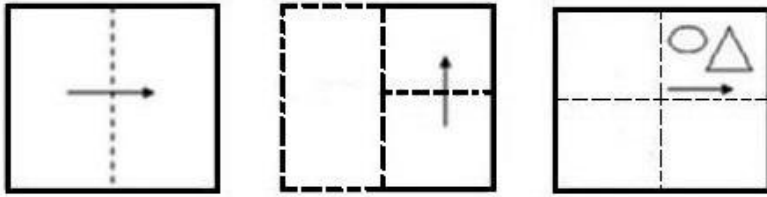
Option 3 ID : 264330517209

Option 4 ID : 264330517207

Status : **Answered**

Chosen Option : 4

Q.10 A paper is folded and cut as shown below. How will it appear when unfolded?



Ans

- ✗ 1.
- ✓ 2.
- ✗ 3.
- ✗ 4.

Question ID : 26433091687

Option 1 ID : 264330360114

Option 2 ID : 264330360113

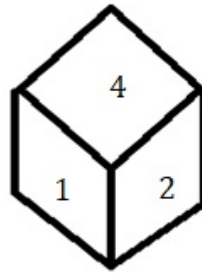
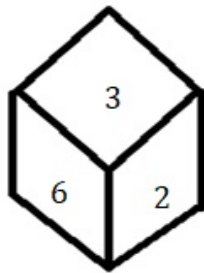
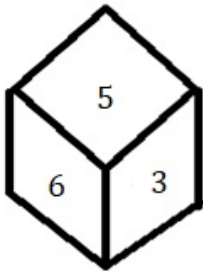
Option 3 ID : 264330360116

Option 4 ID : 264330360115

Status : Answered

Chosen Option : 2

Q.11 Three different positions of the same dice are shown. Find the number on the face opposite the face showing '5'.



- Ans
- 1. 2
 - 2. 3
 - 3. 4
 - 4. 1

Question ID : 264330108970
Option 1 ID : 264330428158
Option 2 ID : 264330428159
Option 3 ID : 264330428160
Option 4 ID : 264330428157
Status : Answered
Chosen Option : 1

Q.12 In a certain code language, 'DOING' is written as 'BQTOV' and 'ZEBRA' is written as 'FAAKB'. How will 'STORM' be written in that language?

- Ans
- 1. PETBK
 - 2. MKYTS
 - 3. PRYSK
 - 4. MLNKP

Question ID : 26433074759
Option 1 ID : 264330293127
Option 2 ID : 264330293125
Option 3 ID : 264330293124
Option 4 ID : 264330293126
Status : Not Attempted and Marked For Review
Chosen Option : --

Q.13 Two statements are given followed by two conclusions numbered I and II. Assuming the statements to be true, even if they seem to be at variance with commonly known facts, decide which of the conclusions logically follow(s) from the statements.

Statements:

Some shells are pebbles.

All pebbles are rocks.

Conclusions:

I. No shell is a rock.

II. Some shells are rocks.

- Ans
- 1. Only conclusion I follows
 - 2. Neither conclusion I nor II follows
 - 3. Both conclusions I and II follow
 - 4. Only conclusion II follows

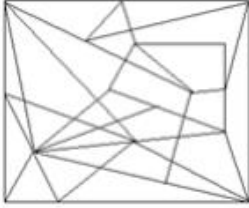
Question ID : 26433058040
Option 1 ID : 264330227144
Option 2 ID : 264330227147
Option 3 ID : 264330227146
Option 4 ID : 264330227145
Status : Answered
Chosen Option : 4

Q.14 Select the option figure in which the given figure is embedded (rotation is NOT allowed).

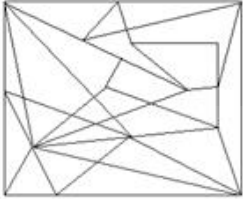


Ans

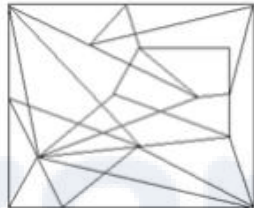
✗ 1.



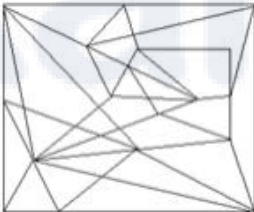
✗ 2.



✓ 3.



✗ 4.



Question ID : 264330145475

Option 1 ID : 264330570156

Option 2 ID : 264330570155

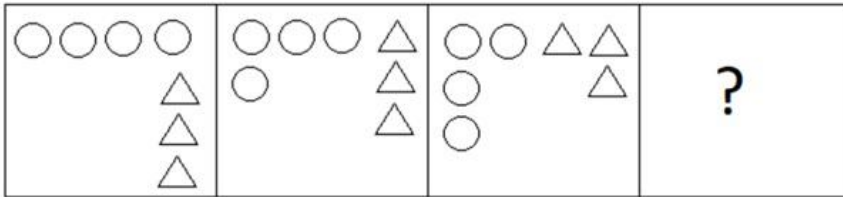
Option 3 ID : 264330570157

Option 4 ID : 264330570158

Status : Not Attempted and
Marked For Review

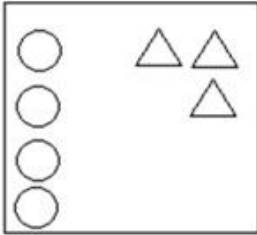
Chosen Option : --

Q.15 Select the figure that will come next in the following figure series.

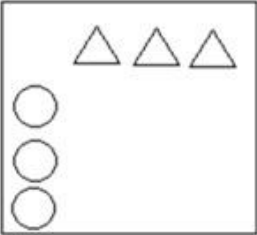


Ans

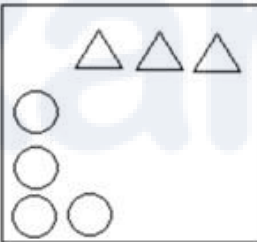
✗ 1.



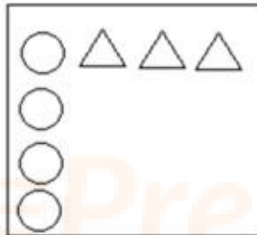
✗ 2.



✗ 3.



✓ 4.



Question ID : 26433087072

Option 1 ID : 264330341931

Option 2 ID : 264330341930

Option 3 ID : 264330341929

Option 4 ID : 264330341932

Status : Answered

Chosen Option : 4

Q.16 Select the correct option that indicates the arrangement of the given words in the order in which they appear in an English dictionary.

1. Formal
2. Foreign
3. Forest
4. Forgotten
5. Forge
6. Forlorn

Ans 1. 2, 3, 5, 4, 6, 1
 2. 2, 3, 6, 1, 5, 4
 3. 2, 3, 4, 5, 6, 1
 4. 2, 3, 5, 6, 4, 1

Question ID : 264330145376
Option 1 ID : 264330569760
Option 2 ID : 264330569762
Option 3 ID : 264330569759
Option 4 ID : 264330569761
Status : Answered
Chosen Option : 3

Q.17 If A denotes '+', B denotes '×', C denotes '−', and D denotes '÷', then what will be the value of the following equation?
13 B 7 A 64 D 4 C 23 = ?

Ans 1. 82
 2. 84
 3. 86
 4. 76

Question ID : 264330129784
Option 1 ID : 264330508367
Option 2 ID : 264330508369
Option 3 ID : 264330508368
Option 4 ID : 264330508370
Status : Answered
Chosen Option : 2

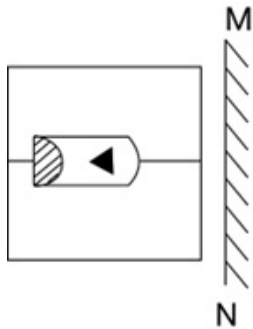
Q.18 Select the option that represents the letters which, when sequentially placed from left to right in the blanks below, will complete the letter series.

A _ _ D F _ K _ _ F A _ L _ _

Ans 1. DLKLFALD
 2. LALKDFDK
 3. KLALDKDF
 4. FDLAKFDL

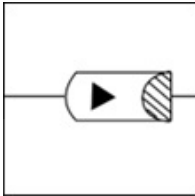
Question ID : 26433086951
Option 1 ID : 264330341445
Option 2 ID : 264330341447
Option 3 ID : 264330341446
Option 4 ID : 264330341448
Status : Answered
Chosen Option : 3

Q.19 Select the correct mirror image of the given combination when the mirror is placed at 'MN' as shown below.

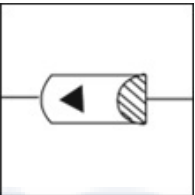


Ans

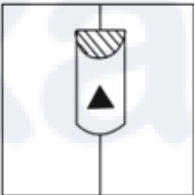
✓ 1.



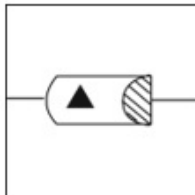
✗ 2.



✗ 3.



✗ 4.



Question ID : 264330130773

Option 1 ID : 264330512204

Option 2 ID : 264330512205

Option 3 ID : 264330512203

Option 4 ID : 264330512206

Status : Answered

Chosen Option : 1

Q.20 Town Q is to the north of Town P. Town R is to the west of Town Q. Town S is to the north of Town R. Town T is to the east of Town S. What is the position of Town T with respect to Town R? (All positions are arranged in GRID pattern).

Ans ✗ 1. East

✗ 2. South

✓ 3. North-east

✗ 4. South-east

Question ID : 26433091638

Option 1 ID : 264330359919

Option 2 ID : 264330359918

Option 3 ID : 264330359917

Option 4 ID : 264330359920

Status : Answered

Chosen Option : 4

Q.21 In a certain code language, 'FRIGHT' is written as 'FOCQED' and 'SHREDS' is written as 'OEPPAB'. How will 'UPSETS' be written in that language?

- Ans
- 1. PMRSQB
 - 2. PMROQB
 - 3. PMRPQB
 - 4. PMSPQB

Question ID : 264330180764

Option 1 ID : 264330709026

Option 2 ID : 264330709023

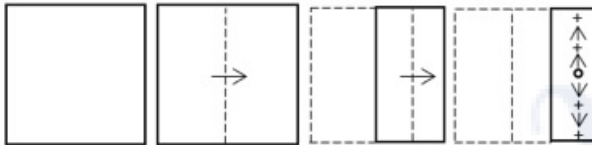
Option 3 ID : 264330709025

Option 4 ID : 264330709024

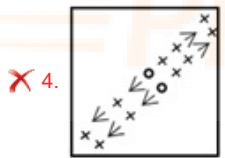
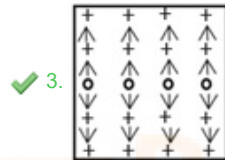
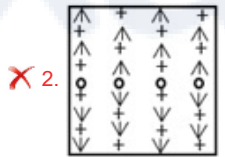
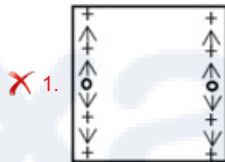
Status : Answered

Chosen Option : 4

Q.22 A paper is folded and cut as shown. How will it appear when unfolded?



Ans



Question ID : 26433068428

Option 1 ID : 264330268224

Option 2 ID : 264330268227

Option 3 ID : 264330268225

Option 4 ID : 264330268226

Status : Not Attempted and Marked For Review

Chosen Option : --

Q.23 Select the set in which the numbers are related in the same way as are the numbers of the following sets.

(NOTE : Operations should be performed on the whole numbers, without breaking down the numbers into its constituent digits. E.g. 13 – Operations on 13 such as adding /subtracting /multiplying etc. to 13 can be performed. Breaking down 13 into 1 and 3 and then performing mathematical operations on 1 and 3 is NOT allowed)

(11, 33, 17), (18, 44, 21)

- Ans
- 1. (7, 32, 9)
 - 2. (12, 40, 18)
 - 3. (16, 43, 22)
 - 4. (15, 34, 19)

Question ID : 264330145304
Option 1 ID : 264330569473
Option 2 ID : 264330569474
Option 3 ID : 264330569471
Option 4 ID : 264330569472
Status : Answered
Chosen Option : 3

Q.24 Which of the following numbers will replace the question mark (?) in the given series?

90, 110, 132, ?, 182

- Ans
- 1. 156
 - 2. 169
 - 3. 148
 - 4. 146

Question ID : 264330145335
Option 1 ID : 264330569598
Option 2 ID : 264330569597
Option 3 ID : 264330569595
Option 4 ID : 264330569596
Status : Answered
Chosen Option : 1

Q.25 Select the set in which the numbers are related in the same way as are the numbers of the following sets.

(NOTE : Operations should be performed on the whole numbers, without breaking down the numbers into its constituent digits. E.g. 13 – Operations on 13 such as adding /subtracting /multiplying etc. to 13 can be performed. Breaking down 13 into 1 and 3 and then performing mathematical operations on 1 and 3 is NOT allowed)

(13, 104, 16), (9, 63, 14)

- Ans
- 1. (23, 204, 26)
 - 2. (8, 60, 15)
 - 3. (12, 85, 15)
 - 4. (10, 92, 17)

Question ID : 264330145299
Option 1 ID : 264330569451
Option 2 ID : 264330569453
Option 3 ID : 264330569454
Option 4 ID : 264330569452
Status : Not Attempted and Marked For Review
Chosen Option : --

Q.26 Which of the following numbers will replace the question mark (?) in the given series?
18, 27, 31, 43, 44, 59, 57, ?

- Ans
- 1. 82
 - 2. 74
 - 3. 83
 - 4. 75

Question ID : 26433067869
Option 1 ID : 264330265989
Option 2 ID : 264330265990
Option 3 ID : 264330265991
Option 4 ID : 264330265988
Status : Answered
Chosen Option : 4

Q.27 Which letter-cluster will complete the given series?
BHERZ, DGHTX, FFKVV, _____

- Ans
- 1. HENWT
 - 2. GGNXU
 - 3. HGMWU
 - 4. HENXT

Question ID : 264330106616
Option 1 ID : 264330418766
Option 2 ID : 264330418768
Option 3 ID : 264330418765
Option 4 ID : 264330418767
Status : Not Attempted and
Marked For Review
Chosen Option : --

Q.28 Select the option that is related to the third word in the same way as the second word is related to the first word. (The words must be considered as meaningful words and must not be related to each other based on the number of letters/number of consonants/vowels in the word.)
Nun : Convent :: King : ?

- Ans
- 1. Palace
 - 2. Cottage
 - 3. Prison
 - 4. Monastery

Question ID : 26433091603
Option 1 ID : 264330359778
Option 2 ID : 264330359777
Option 3 ID : 264330359780
Option 4 ID : 264330359779
Status : Answered
Chosen Option : 1

Q.29 Select the option that represents the correct order of the given words as they would appear in an English dictionary?

1. Authority
2. Automate
3. Authentic
4. Auspicious
5. Aureole

- Ans**
- 1. 4, 5, 3, 1, 2
 - 2. 5, 3, 4, 1, 2
 - 3. 5, 4, 3, 1, 2
 - 4. 3, 4, 5, 1, 2

Question ID : 26433067246

Option 1 ID : 264330263499

Option 2 ID : 264330263497

Option 3 ID : 264330263498

Option 4 ID : 264330263496

Status : Answered

Chosen Option : 3

Q.30 Seven friends, A, B, C, D, E, F and G, are sitting around a circular table facing the centre (not necessarily in the same order). D is an immediate neighbour of B and C. A is sitting third to the right of C. E is an immediate neighbour of A and F. G is sitting immediate left of C. B is sitting third to the right of G. What is the position of G with respect to A when counted from the right side of A?

- Ans**
- 1. Third to the right
 - 2. Second to the right
 - 3. Third to the left
 - 4. Second to the left

Question ID : 26433056907

Option 1 ID : 264330222613

Option 2 ID : 264330222614

Option 3 ID : 264330222612

Option 4 ID : 264330222615

Status : Not Attempted and Marked For Review

Chosen Option : --

Q.31 Four letter-clusters have been given, out of which three are alike in some manner and one is different. Select the odd letter-cluster.

- Ans**
- 1. KNJZ
 - 2. FIEU
 - 3. MJLO
 - 4. SVRH

Question ID : 264330180753

Option 1 ID : 264330708981

Option 2 ID : 264330708979

Option 3 ID : 264330708980

Option 4 ID : 264330708982

Status : Not Attempted and Marked For Review

Chosen Option : --

Q.32 Three of the following letter-clusters are alike in some manner and one is different.
Select the one that is different.

- Ans 1. MRVY
 2. GLPS
 3. NSWZ
 4. TGQJ

Question ID : 264330145344

Option 1 ID : 264330569631

Option 2 ID : 264330569632

Option 3 ID : 264330569634

Option 4 ID : 264330569633

Status : Not Attempted and
Marked For Review

Chosen Option : --

Q.33 Which two numbers (not digits) should be interchanged to make the given equation correct?

$$(18 \times 2) - 24 + 10 \times 160 \div 16 + (10 \times 4) = 170$$

- Ans 1. 2 and 24
 2. 2 and 4
 3. 24 and 18
 4. 16 and 18

Question ID : 264330145307

Option 1 ID : 264330569486

Option 2 ID : 264330569483

Option 3 ID : 264330569485

Option 4 ID : 264330569484

Status : Answered

Chosen Option : 3

Q.34 Select the set in which the numbers are related in the same way as are the numbers of the following sets.

(NOTE : Operations should be performed on the whole numbers, without breaking down the numbers into its constituent digits. E.g. 13- Operations on 13 such as adding/subtracting/multiplying etc. to 13 can be performed. Breaking down 13 into 1 and 3 and then performing mathematical operations on 1 and 3 is not allowed.)

(15, 21, 66)

(9, 17, 44)

- Ans 1. (2, 4, 12)
 2. (5, 37, 52)
 3. (7, 9, 86)
 4. (11, 13, 35)

Question ID : 26433057456

Option 1 ID : 264330224809

Option 2 ID : 264330224810

Option 3 ID : 264330224808

Option 4 ID : 264330224811

Status : Not Attempted and
Marked For Review

Chosen Option : --

Q.35 Which two signs should be interchanged to make the given equation correct?
 $13 + 145 \div 29 \times 52 - 11 = 106$

- Ans
- 1. - and ×
 - 2. x and +
 - 3. ÷ and -
 - 4. + and +

Question ID : 264330129525

Option 1 ID : 264330507469

Option 2 ID : 264330507468

Option 3 ID : 264330507466

Option 4 ID : 264330507467

Status : Answered

Chosen Option : 2



Q.36 Which figure from the given options would replace the question mark (?) if the following figure series were to be continued?

R	3	A	□	9	R	3	F	☆	□	A	3	?
○	F	9	3	F	☆	S	○	A	F	○	9	
□	☆	S	S	○	A	□	9	R	R	S	☆	

Ans

✗ 1.

F	S	9
R	A	☆
□	○	3

✗ 2.

R	S	☆
□	A	3
F	○	9

✓ 3.

F	○	9
R	S	☆
□	A	3

✗ 4.

R	9	□
A	○	S
☆	F	3

Question ID : 264330145478

Option 1 ID : 264330570170

Option 2 ID : 264330570167

Option 3 ID : 264330570168

Option 4 ID : 264330570169

Status : Not Attempted and
Marked For Review

Chosen Option : --

Q.37 If M denotes '-', N denotes '+', O denotes 'x', and P denotes '+', then what will come in place of '?' in the following equation?
255 N 5 O 4 P 16 O 3 M 29 = ?

- Ans
- 1. 223
 - 2. 216
 - 3. 211
 - 4. 230

Question ID : 26433057631
Option 1 ID : 264330225508
Option 2 ID : 264330225509
Option 3 ID : 264330225511
Option 4 ID : 264330225510
Status : Answered
Chosen Option : 1

Q.38 PRO 5' is related to 'OSQ 15' in a certain way. In the same way, 'OPO 10' is related to 'NQQ 30'. Which of the following is related to 'MAC 9' using the same logic?

- Ans
- 1. NZA 3
 - 2. OZA 3
 - 3. NZB 3
 - 4. NZA 27

Question ID : 264330145384
Option 1 ID : 264330569792
Option 2 ID : 264330569791
Option 3 ID : 264330569794
Option 4 ID : 264330569793
Status : Answered
Chosen Option : 4

Q.39 'M \$ K' means 'M is the mother of K'.
'M # K' means 'M is the father of K'.
'M @ K' means 'M is the husband of K'.
'M % K' means 'M is the daughter of K'.
If A \$ C @ R, then how is R related to A?

- Ans
- 1. Husband's father
 - 2. Mother
 - 3. Son's wife
 - 4. Daughter

Question ID : 264330145391
Option 1 ID : 264330569822
Option 2 ID : 264330569821
Option 3 ID : 264330569819
Option 4 ID : 264330569820
Status : Answered
Chosen Option : 3

Q.40 If '+' means 'divided by', '-' means 'added to', 'x' means 'subtracted from' and '÷' means 'multiplied by', then what will be the value of the following expression?

$$[(25 \times 13) - (3 \div 3)] + (3 - 4) \div 5$$

- Ans
- 1. 20
 - 2. 10
 - 3. 15
 - 4. 5

Question ID : 264330130377

Option 1 ID : 264330510622

Option 2 ID : 264330510620

Option 3 ID : 264330510621

Option 4 ID : 264330510619

Status : **Not Attempted and Marked For Review**

Chosen Option : --

Q.41 Which of the following numbers will replace the question mark (?) and complete the given number series?
15, 19, 21, 25, 27, ?

- Ans
- 1. 31
 - 2. 32
 - 3. 29
 - 4. 30

Question ID : 26433067479

Option 1 ID : 264330264429

Option 2 ID : 264330264431

Option 3 ID : 264330264430

Option 4 ID : 264330264428

Status : **Answered**

Chosen Option : 1

Q.42 Which letter-cluster will replace the question mark (?) to complete the given series?
MMNO, OKPM, ?, SGTI, UEVG

- Ans
- 1. POKI
 - 2. QRIL
 - 3. QIRK
 - 4. PQIJ

Question ID : 264330180763

Option 1 ID : 264330709022

Option 2 ID : 264330709020

Option 3 ID : 264330709021

Option 4 ID : 264330709019

Status : **Not Attempted and Marked For Review**

Chosen Option : --

Q.43 In a certain code language, 'OIL' is coded as 27 and 'CREAM' is coded as 125. How will 'POWDER' be coded in the same language?

- Ans
- 1. 225
 - 2. 216
 - 3. 198
 - 4. 169

Question ID : 264330132210

Option 1 ID : 264330517938

Option 2 ID : 264330517937

Option 3 ID : 264330517936

Option 4 ID : 264330517935

Status : Not Attempted and
Marked For Review

Chosen Option : --

Q.44 Given below are two statements and two conclusions. Take the statements to be true even if they are at variance with commonly known facts, and decide whether the conclusion(s) follow(s) the given statements.

Statements:

Some cakes are biscuits.

Some biscuits are chocolates.

Conclusions:

I. Some biscuits are cakes.

II. Some cakes are chocolates.

- Ans
- 1. Both the conclusions follow
 - 2. Only conclusion II follows
 - 3. Neither conclusion I nor II follows
 - 4. Only conclusion I follows

Question ID : 26433056639

Option 1 ID : 264330221542

Option 2 ID : 264330221541

Option 3 ID : 264330221543

Option 4 ID : 264330221540

Status : Answered

Chosen Option : 1

Q.45 If I denotes '+', J denotes 'x', K denotes '-' and L denotes '+', then what will come in place of '?' in the following equation?

$$(35 \text{ I } 5) \text{ J } 9 \text{ K } 23 \text{ L } 39 \text{ K } (3 \text{ J } 8) = ?$$

- Ans
- 1. 60
 - 2. 59
 - 3. 51
 - 4. 55

Question ID : 264330145339

Option 1 ID : 264330569612

Option 2 ID : 264330569614

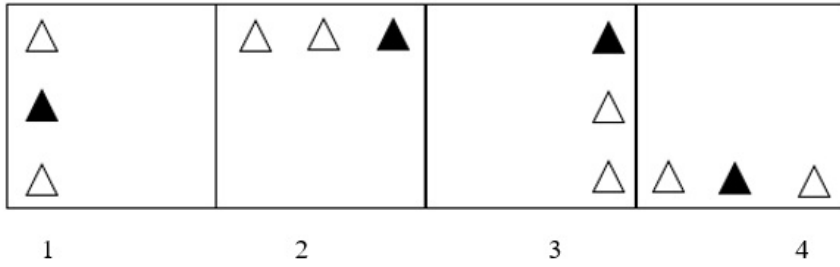
Option 3 ID : 264330569613

Option 4 ID : 264330569611

Status : Answered

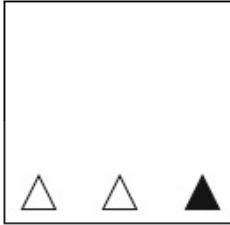
Chosen Option : 4

Q.46 Which of the given figures when placed in the 5th position would continue the series that is established by the first four figures?

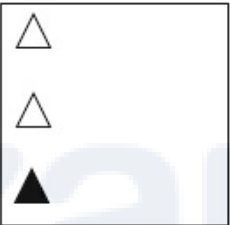


Ans

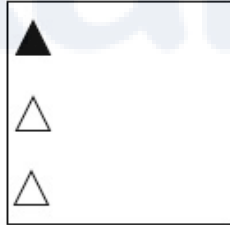
✗ 1.



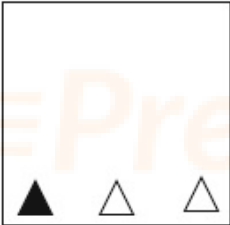
✗ 2.



✓ 3.



✗ 4.



Question ID : 26433087307

Option 1 ID : 264330342867

Option 2 ID : 264330342866

Option 3 ID : 264330342865

Option 4 ID : 264330342868

Status : Not Attempted and
Marked For Review

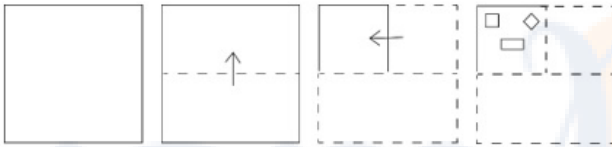
Chosen Option : --

Q.47 A @ B means 'A is the husband of B'
 A & B means 'A is the mother of B'
 A # B means 'A is the daughter of B'
 If Q @ M & Y @ J # R & Z, then how is Y related to Z?

- Ans
- 1. Brother's wife
 - 2. Father's sister
 - 3. Sister's husband
 - 4. Father

Question ID : 264330126024
 Option 1 ID : 264330493768
 Option 2 ID : 264330493769
 Option 3 ID : 264330493771
 Option 4 ID : 264330493770
 Status : Not Attempted and Marked For Review
 Chosen Option : --

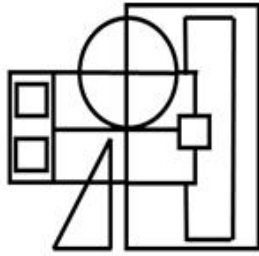
Q.48 A paper is folded and cut as shown below. How will it appear when unfolded?



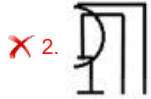
- Ans
- 1.
 - 2.
 - 3.
 - 4.

Question ID : 264330103002
 Option 1 ID : 264330404399
 Option 2 ID : 264330404398
 Option 3 ID : 264330404397
 Option 4 ID : 264330404400
 Status : Not Attempted and Marked For Review
 Chosen Option : --

Q.49 Select the option figure which is embedded in the given figure as its part (rotation is NOT allowed).



Ans



Question ID : 264330145465

Option 1 ID : 264330570117

Option 2 ID : 264330570118

Option 3 ID : 264330570116

Option 4 ID : 264330570115

Status : Not Attempted and
Marked For Review

Chosen Option : --

Q.50 In a certain code language, 'HIGHLY' is written as 'GRHYOH' and 'CLEVER' is written as 'EOCRVV'. How will 'HORROR' be written in that language?

Ans ✗ 1. JRLPDB

✓ 2. RLHRLR

✗ 3. JPRDER

✗ 4. RKJPED

Question ID : 26433074763

Option 1 ID : 264330293142

Option 2 ID : 264330293141

Option 3 ID : 264330293143

Option 4 ID : 264330293140

Status : Not Answered

Chosen Option : --

Section : General Knowledge and General Awareness

Q.1 In India, which of the following modes of transportation reduces trans-shipment losses and delays in supply of petroleum and gas?

- Ans
- 1. Pipeline
 - 2. Roadways
 - 3. Railways
 - 4. Waterways

Question ID : 264330132720
Option 1 ID : 264330519978
Option 2 ID : 264330519977
Option 3 ID : 264330519975
Option 4 ID : 264330519976
Status : Answered
Chosen Option : 1

Q.2 From which country has the concept of Martial Law, which restricts Fundamental rights, borrowed?

- Ans
- 1. The UK
 - 2. The USSR
 - 3. China
 - 4. Japan

Question ID : 264330113392
Option 1 ID : 264330445654
Option 2 ID : 264330445656
Option 3 ID : 264330445655
Option 4 ID : 264330445653
Status : Answered
Chosen Option : 4

Q.3 Copacabana beach is situated in _____.

- Ans
- 1. Peru
 - 2. Australia
 - 3. Mexico
 - 4. Brazil

Question ID : 26433054947
Option 1 ID : 264330214774
Option 2 ID : 264330214772
Option 3 ID : 264330214775
Option 4 ID : 264330214773
Status : Not Attempted and Marked For Review
Chosen Option : --

Q.4 Which of the following is the most widely used method for refining impure metals?

- Ans
- 1. Vapour-Phase Refining
 - 2. Poling Refining
 - 3. Electrolytic Refining
 - 4. Liquidation Refining

Question ID : 264330131684
Option 1 ID : 264330515835
Option 2 ID : 264330515838
Option 3 ID : 264330515836
Option 4 ID : 264330515837
Status : Answered
Chosen Option : 3

Q.5 Which of the following is the correct statement?

- Ans
- 1. Joule is the unit of work
 - 2. The unit of energy is the watt.
 - 3. Joule/ second is also a unit of energy.
 - 4. The unit of power is joule/newton.

Question ID : 264330111860
Option 1 ID : 264330439527
Option 2 ID : 264330439526
Option 3 ID : 264330439528
Option 4 ID : 264330439525
Status : Answered
Chosen Option : 1

Q.6 Which of the following microfinance institutions was established in India at the time of independence?

- Ans
- 1. Joint Liability Group
 - 2. Rural Cooperatives
 - 3. Self Help Group
 - 4. Grameen Model Bank

Question ID : 264330145234
Option 1 ID : 264330569192
Option 2 ID : 264330569191
Option 3 ID : 264330569193
Option 4 ID : 264330569194
Status : Not Attempted and Marked For Review
Chosen Option : --

Q.7 'The Race of my Life' is the autobiography of which of the following sportsmen?

- Ans
- 1. PT Usha
 - 2. Mary Kom
 - 3. Milkha Singh
 - 4. Saurav Ganguly

Question ID : 26433071672
Option 1 ID : 264330281115
Option 2 ID : 264330281114
Option 3 ID : 264330281113
Option 4 ID : 264330281112
Status : Answered
Chosen Option : 3

Q.8 Which of the following has been INCORRECTLY listed as a condition for becoming a citizen of India?

- Ans
- 1. Citizenship by birth
 - 2. Citizenship by naturalisation
 - 3. Citizenship through acquisition of property
 - 4. Citizenship by descent

Question ID : 264330130475
Option 1 ID : 264330511011
Option 2 ID : 264330511014
Option 3 ID : 264330511013
Option 4 ID : 264330511012
Status : Answered
Chosen Option : 3

Q.9 Which British scientist is known for developing the principle of holography in 1947 to improve the resolution of the electron microscope?

- Ans
- 1. Werner Heisenberg
 - 2. Lloyd Cross
 - 3. Dennis Gabor
 - 4. Charles Towns

Question ID : 264330141668
Option 1 ID : 264330554994
Option 2 ID : 264330554993
Option 3 ID : 264330554992
Option 4 ID : 264330554991
Status : Answered
Chosen Option : 3

Q.10 The 'Tripartite struggle' was between Gurjara Pratiharas in North India, Palas in Eastern India and _____ in South India.

- Ans
- 1. Marathas
 - 2. Rashtrakutas
 - 3. Cholas
 - 4. Cheras

Question ID : 264330165356
Option 1 ID : 264330648506
Option 2 ID : 264330648505
Option 3 ID : 264330648504
Option 4 ID : 264330648503
Status : Answered
Chosen Option : 2

Q.11 Who is the author of the novel 'The Moor's Last Sigh'?

- Ans
- 1. VS Naipaul
 - 2. John Keay
 - 3. Kiran Doshi
 - 4. Salman Rushdie

Question ID : 264330145174
Option 1 ID : 264330568951
Option 2 ID : 264330568953
Option 3 ID : 264330568954
Option 4 ID : 264330568952
Status : Answered
Chosen Option : 4

Q.12 Which of the following dances is based on Rasleela themes of Radha and Krishna?

- Ans
- 1. Manipuri dance
 - 2. Sattriya dance
 - 3. Mohiniyattam
 - 4. Kathak

Question ID : 264330164790
Option 1 ID : 264330646287
Option 2 ID : 264330646289
Option 3 ID : 264330646290
Option 4 ID : 264330646288
Status : Answered
Chosen Option : 3

Q.13 Who among the following was the last Mauryan ruler and was killed by his commander-in-chief?

- Ans
- 1. Shatadhanvan
 - 2. Bindusara
 - 3. Brihadratha
 - 4. Dashratha

Question ID : 264330165558

Option 1 ID : 264330649314

Option 2 ID : 264330649312

Option 3 ID : 264330649313

Option 4 ID : 264330649311

Status : **Not Attempted and Marked For Review**

Chosen Option : --

Q.14 Which writ is issued when the court finds that there is unlawful arrest of a person?

- Ans
- 1. Prohibition
 - 2. Mandamus
 - 3. Quo warranto
 - 4. Habeas corpus

Question ID : 264330116397

Option 1 ID : 264330457675

Option 2 ID : 264330457674

Option 3 ID : 264330457676

Option 4 ID : 264330457673

Status : **Answered**

Chosen Option : 4

Q.15 Who among the following founded an expatriate Communist Party of India at Tashkent in 1920?

- Ans
- 1. PC Joshi
 - 2. Shripad Amrut Dange
 - 3. Jolly Kaul
 - 4. MN Roy

Question ID : 264330106615

Option 1 ID : 264330418762

Option 2 ID : 264330418761

Option 3 ID : 264330418763

Option 4 ID : 264330418764

Status : **Answered**

Chosen Option : 4

Q.16 Which of the following statements is correct?

- Ans 1. The transport of male gametes in Gymnosperms occurs through water.
2. The transport of male gametes in bryophytes and pteridophytes occurs through water.
3. The transport of male gametes in bryophytes and pteridophytes occurs through air.
4. The transport of male gametes in angiosperms occurs through water.

Question ID : 26433089668

Option 1 ID : 264330352173

Option 2 ID : 264330352176

Option 3 ID : 264330352175

Option 4 ID : 264330352174

Status : **Not Attempted and Marked For Review**

Chosen Option : --

Q.17 Which Union Territory recorded the highest male literacy rate, according to the 2011 Census?

- Ans 1. Daman and Diu
2. Delhi
3. Andaman and Nicobar Islands
4. Lakshadweep

Question ID : 264330110659

Option 1 ID : 264330434916

Option 2 ID : 264330434913

Option 3 ID : 264330434915

Option 4 ID : 264330434914

Status : **Answered**

Chosen Option : 2

Q.18 Pandit Ravi Shankar popularised which instrument in particular all over the world?

- Ans 1. Sitar
2. Tabla
3. Veena
4. Harmonium

Question ID : 26433074853

Option 1 ID : 264330293503

Option 2 ID : 264330293500

Option 3 ID : 264330293501

Option 4 ID : 264330293502

Status : **Answered**

Chosen Option : 1

Q.19 According to the Census of India 2011, which metropolitan city has the highest population?

- Ans 1. Mumbai
 2. Kolkata
 3. Chennai
 4. Patna

Question ID : 264330166806
Option 1 ID : 264330654259
Option 2 ID : 264330654261
Option 3 ID : 264330654260
Option 4 ID : 264330654262
Status : Answered
Chosen Option : 1

Q.20 Ker and Garia Puja are traditional tribal festivals of which state?

- Ans 1. Jharkhand
 2. Manipur
 3. Odisha
 4. Tripura

Question ID : 264330164806
Option 1 ID : 264330646351
Option 2 ID : 264330646354
Option 3 ID : 264330646352
Option 4 ID : 264330646353
Status : Not Attempted and Marked For Review
Chosen Option : --

Q.21 Which company has been given the responsibility of construction, operation and maintenance of the Hazira-Vijaipur-Jagdishpur (HVJ) pipeline project?

- Ans 1. TATA Petrodyne Limited (TPL)
 2. Oil and Natural Gas Corporation (ONGC)
 3. Gas Authority of India (GAIL)
 4. Reliance Industries Limited (RIL)

Question ID : 264330111326
Option 1 ID : 264330437390
Option 2 ID : 264330437389
Option 3 ID : 264330437392
Option 4 ID : 264330437391
Status : Not Attempted and Marked For Review
Chosen Option : --

Q.22 Mawsynram, the place that receives the highest rainfall in the world, is situated in which hills?

- Ans
- 1. Patkai Hills
 - 2. Mishmi Hills
 - 3. Rajmahal Hills
 - 4. Khasi Hills

Question ID : 264330119785
Option 1 ID : 264330469418
Option 2 ID : 264330469415
Option 3 ID : 264330469416
Option 4 ID : 264330469417
Status : Answered
Chosen Option : 4

Q.23 Which of the following organisations was founded in Poona, Satara and other towns of Maharashtra that worked against Brahmanical orthodoxy and tried to reform Hinduism?

- Ans
- 1. Brahmo Samaj
 - 2. Paramahansa Mandali
 - 3. Ramakrishna Mission
 - 4. Arya Samaj

Question ID : 264330165399
Option 1 ID : 264330648678
Option 2 ID : 264330648675
Option 3 ID : 264330648676
Option 4 ID : 264330648677
Status : Answered
Chosen Option : 4

Q.24 In 1784, who discovered the composition of water through his experiment with hydrogen and oxygen?

- Ans
- 1. Henry Cavendish
 - 2. Herbert C Brown
 - 3. Joseph Priestley
 - 4. John Dalton

Question ID : 264330145222
Option 1 ID : 264330569146
Option 2 ID : 264330569143
Option 3 ID : 264330569145
Option 4 ID : 264330569144
Status : Answered
Chosen Option : 1

Q.25 Under which strata do trees fall?

- Ans
- 1. Second vertical
 - 2. Top vertical
 - 3. Middle vertical
 - 4. Bottom vertical

Question ID : 264330145214

Option 1 ID : 264330569112

Option 2 ID : 264330569111

Option 3 ID : 264330569113

Option 4 ID : 264330569114

Status : Not Attempted and
Marked For Review

Chosen Option : --

Q.26 The fundamental duties were added in the Indian Constitution on the recommendation of the:

- Ans
- 1. Balwant Rai Mehta Committee
 - 2. Bibek Debroy Committee
 - 3. LM Singhvi Committee
 - 4. Sardar Swaran Singh Committee

Question ID : 264330111511

Option 1 ID : 264330438129

Option 2 ID : 264330438132

Option 3 ID : 264330438131

Option 4 ID : 264330438130

Status : Answered

Chosen Option : 4

Q.27 Which of the following is the correct formula for moment of inertia?

- Ans
- 1. $I = mr^2$
 - 2. $I = rm^2$
 - 3. $I = m/r^2$
 - 4. $I = 2mr$

Question ID : 264330111862

Option 1 ID : 264330439534

Option 2 ID : 264330439536

Option 3 ID : 264330439533

Option 4 ID : 264330439535

Status : Answered

Chosen Option : 1

Q.28 Which of the following Articles of the Indian Constitution deals with the relationship between the Prime Minister and the President?

- Ans
- 1. Article 45
 - 2. Article 25
 - 3. Article 35
 - 4. Article 75

Question ID : 264330113416

Option 1 ID : 264330445749

Option 2 ID : 264330445751

Option 3 ID : 264330445752

Option 4 ID : 264330445750

Status : Answered

Chosen Option : 4

Q.29 India's rank in Tokyo Olympic 2020 is:

Ans 1. 49

2. 48

3. 47

4. 46

Question ID : 264330109684

Option 1 ID : 264330431016

Option 2 ID : 264330431015

Option 3 ID : 264330431014

Option 4 ID : 264330431013

Status : Not Attempted and
Marked For Review

Chosen Option : --

Q.30 In which of the following years was the Muslim League formed?

Ans 1. 1915

2. 1909

3. 1906

4. 1912

Question ID : 264330112345

Option 1 ID : 264330441465

Option 2 ID : 264330441467

Option 3 ID : 264330441468

Option 4 ID : 264330441466

Status : Answered

Chosen Option : 2

Q.31 The Chambal, Hindon and Tons rivers are tributaries of the river:

Ans 1. Yamuna

2. Mahanadi

3. Kaveri

4. Tapi

Question ID : 264330169992

Option 1 ID : 264330666643

Option 2 ID : 264330666645

Option 3 ID : 264330666644

Option 4 ID : 264330666646

Status : Not Attempted and
Marked For Review

Chosen Option : --

Q.32 Prabhat Sarma, a recipient of Sangeet Natak Akademi Award, was a _____ player from Assam.

- Ans
- 1. Ghatam
 - 2. Flute
 - 3. Tabla
 - 4. sarangi

Question ID : 264330145158

Option 1 ID : 264330568890

Option 2 ID : 264330568887

Option 3 ID : 264330568889

Option 4 ID : 264330568888

Status : Not Attempted and
Marked For Review

Chosen Option : --

Q.33 Mehrangarh fort is located in which of the following cities?

- Ans
- 1. Jaipur
 - 2. Kota
 - 3. Jodhpur
 - 4. Bikaner

Question ID : 264330164850

Option 1 ID : 264330646528

Option 2 ID : 264330646529

Option 3 ID : 264330646530

Option 4 ID : 264330646527

Status : Not Attempted and
Marked For Review

Chosen Option : --

Q.34 During a game of hockey, following an offence, if a player is shown a yellow card then he will be sent off the pitch for _____.

- Ans
- 1. 5 minutes
 - 2. 6 minutes
 - 3. 4 minutes
 - 4. 3 minutes

Question ID : 264330109854

Option 1 ID : 264330431695

Option 2 ID : 264330431696

Option 3 ID : 264330431694

Option 4 ID : 264330431693

Status : Answered

Chosen Option : 1

Q.35 Trade liberalisation has helped India improve its _____ in industries with medium-to-high technology content.

- Ans
- 1. imports
 - 2. fuel efficiency
 - 3. labour intensity
 - 4. comparative advantage

Question ID : 26433064580
Option 1 ID : 264330252912
Option 2 ID : 264330252915
Option 3 ID : 264330252913
Option 4 ID : 264330252914
Status : Answered
Chosen Option : 1

Q.36 Which of the following five-year plan addressed the issue of removal of poverty as a chief objective for the first time?

- Ans
- 1. Fourth Five-year Plan
 - 2. Third Five-year Plan
 - 3. Sixth Five-year Plan
 - 4. Fifth Five-year Plan

Question ID : 264330145228
Option 1 ID : 264330569168
Option 2 ID : 264330569167
Option 3 ID : 264330569170
Option 4 ID : 264330569169
Status : Answered
Chosen Option : 4

Q.37 Which of the following was the first B vitamin discovered in 1897 that is essential in amino acid and carbohydrate metabolism and is active in energy production reactions?

- Ans
- 1. Biotin
 - 2. Riboflavin
 - 3. Thiamine
 - 4. Folate

Question ID : 264330145202
Option 1 ID : 264330569065
Option 2 ID : 264330569064
Option 3 ID : 264330569063
Option 4 ID : 264330569066
Status : Not Attempted and Marked For Review
Chosen Option : --

Q.38 Identify the cultural festival on the basis of given clues:

i) This festival brings together craftsmen like potters, embroiderers, weavers, wood carvers, metal workers, stone smiths and painters from all over India on one platform in Haryana.

ii) This crafts mela is held in February every year and provides a glimpse of the state's cultural heritage and recent achievements.

- Ans
- 1. Kapil Muni Fair
 - 2. Shamlaji Fair
 - 3. Chitra Vichitra Fair
 - 4. Surajkund Mela

Question ID : 26433054217

Option 1 ID : 264330211853

Option 2 ID : 264330211852

Option 3 ID : 264330211855

Option 4 ID : 264330211854

Status : Not Attempted and
Marked For Review

Chosen Option : --

Q.39 The duration of the 12th five year plan was from _____ to _____.

- Ans
- 1. 2012 - 2017
 - 2. 1987 - 1992
 - 3. 2007 - 2012
 - 4. 1990 - 1995

Question ID : 264330145251

Option 1 ID : 264330569259

Option 2 ID : 264330569262

Option 3 ID : 264330569260

Option 4 ID : 264330569261

Status : Answered

Chosen Option : 1

Q.40 Manisha Kalyan is associated with which of the following sports events?

- Ans
- 1. Football
 - 2. Hockey
 - 3. Cricket
 - 4. Chess

Question ID : 264330109689

Option 1 ID : 264330431033

Option 2 ID : 264330431034

Option 3 ID : 264330431035

Option 4 ID : 264330431036

Status : Not Attempted and
Marked For Review

Chosen Option : --

Q.41 A Governor shall, notwithstanding the expiration of his term, continue to hold office until _____.

- Ans
- 1. the President's consent
 - 2. the Legislative Secretary takes charge
 - 3. his/her successor enters his/her office
 - 4. he/she has aid and advice of the Chief Minister

Question ID : 264330145265
Option 1 ID : 264330569316
Option 2 ID : 264330569315
Option 3 ID : 264330569318
Option 4 ID : 264330569317
Status : Answered
Chosen Option : 1

Q.42 A government budget shows a primary deficit of ₹6,900 crore. The revenue expenditure on interest payment is ₹400 crore. Fiscal deficit is equal to:

- Ans
- 1. ₹6,500 crore
 - 2. ₹7,300 crore
 - 3. ₹7,100 crore
 - 4. ₹6,900 crore

Question ID : 264330145254
Option 1 ID : 264330569272
Option 2 ID : 264330569271
Option 3 ID : 264330569274
Option 4 ID : 264330569273
Status : Answered
Chosen Option : 2

Q.43 The office of Diwan-i-Insha dealt with which affair in administration?

- Ans
- 1. State correspondence
 - 2. Military
 - 3. Finance
 - 4. Religious affairs

Question ID : 264330109006
Option 1 ID : 264330428301
Option 2 ID : 264330428303
Option 3 ID : 264330428304
Option 4 ID : 264330428302
Status : Not Attempted and Marked For Review
Chosen Option : --

Q.44 The earth's perihelion occurs in:

- Ans
- 1. July
 - 2. October
 - 3. January
 - 4. September

Question ID : 264330131737
Option 1 ID : 264330516048
Option 2 ID : 264330516050
Option 3 ID : 264330516047
Option 4 ID : 264330516049
Status : Answered
Chosen Option : 4

Q.45 Guru Bipin Singh, who received the honour of Sangeet Natak Akademi Award in 1966 and the Kalidas Samman by Madhya Pradesh Government, was an exponent of which of the following Indian classical dance forms?

- Ans
- 1. Odissi
 - 2. Manipuri
 - 3. Kuchipudi
 - 4. Kathak

Question ID : 264330145153
Option 1 ID : 264330568867
Option 2 ID : 264330568870
Option 3 ID : 264330568869
Option 4 ID : 264330568868
Status : Answered
Chosen Option : 2

Q.46 Who among the following was the youngest recipient of the Padma Vibhushan award in dance in 1984?

- Ans
- 1. Birju Maharaj
 - 2. Rajendra Gangani
 - 3. Abhimanyu Lal
 - 4. Eshhan Hilal

Question ID : 26433054504
Option 1 ID : 264330213002
Option 2 ID : 264330213000
Option 3 ID : 264330213003
Option 4 ID : 264330213001
Status : Not Attempted and Marked For Review
Chosen Option : --

Q.47 When was the Indian Meteorological Department, Which collects data on temperature, rainfall, wind, etc., and makes weather forecasts, established by the Government of India?

- Ans
- 1. 1879
 - 2. 1876
 - 3. 1875
 - 4. 1873

Question ID : 264330145191
Option 1 ID : 264330569022
Option 2 ID : 264330569021
Option 3 ID : 264330569020
Option 4 ID : 264330569019
Status : Not Attempted and Marked For Review
Chosen Option : --

Q.48 What is the percentage of proteins in the cell membrane?

- Ans
- 1. 60-80%
 - 2. 80-100%
 - 3. 20-40%
 - 4. 40-60%

Question ID : 26433086610
Option 1 ID : 264330340083
Option 2 ID : 264330340084
Option 3 ID : 264330340081
Option 4 ID : 264330340082
Status : Answered
Chosen Option : 4

Q.49 Syed Modi India International is organised in which sporting event?

- Ans
- 1. Kabaddi
 - 2. Volleyball
 - 3. Chess
 - 4. Badminton

Question ID : 264330119247
Option 1 ID : 264330467278
Option 2 ID : 264330467275
Option 3 ID : 264330467277
Option 4 ID : 264330467276
Status : Not Attempted and Marked For Review
Chosen Option : --

Q.50 Which dance form of Goa is also known as the 'Warrior Dance'?

- Ans
- 1. Bihu
 - 2. Lavani
 - 3. Ghode Modni
 - 4. Rauf

Question ID : 26433092388
Option 1 ID : 264330362841
Option 2 ID : 264330362844
Option 3 ID : 264330362842
Option 4 ID : 264330362843
Status : Answered
Chosen Option : 3

Section : Quantitative Aptitude

Q.1 Sukhvir purchased some perishable items for sale but 30% of those items could not be sold and went bad. However, Sukhvir managed to sell the rest of the items at a price that helped him earn an overall profit of 19%. At what percentage above the cost price of each item purchased by Sukhvir did he sell each of the items that did not go bad?

- Ans
- 1. 49%
 - 2. 70%
 - 3. 63%
 - 4. 75%

Question ID : 264330103260

Option 1 ID : 264330405346

Option 2 ID : 264330405347

Option 3 ID : 264330405345

Option 4 ID : 264330405348

Status : Not Attempted and
Marked For Review

Chosen Option : --

Q.2 An item with a marked price of ₹1,940 was sold at a discount of 15%. At what price (in ₹) was the item sold?

- Ans
- 1. 1659
 - 2. 1639
 - 3. 1649
 - 4. 1654

Question ID : 264330131157

Option 1 ID : 264330513739

Option 2 ID : 264330513741

Option 3 ID : 264330513740

Option 4 ID : 264330513742

Status : Answered

Chosen Option : 3

Q.3 A hostel mess requires 217 eggs for a week. How many eggs will it require in total for the months of July, August and September?

- Ans
- 1. 2821
 - 2. 2883
 - 3. 2852
 - 4. 2790

Question ID : 264330103974

Option 1 ID : 264330408197

Option 2 ID : 264330408200

Option 3 ID : 264330408198

Option 4 ID : 264330408199

Status : Answered

Chosen Option : 1

Q.4 Find the greatest number which when divides 261, 853 and 1221, leaves a remainder of 5 in each case.

- Ans
- 1. 19
 - 2. 18
 - 3. 17
 - 4. 16

Question ID : 26433073062

Option 1 ID : 264330286443

Option 2 ID : 264330286442

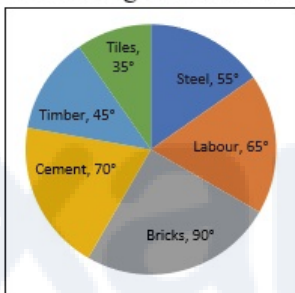
Option 3 ID : 264330286441

Option 4 ID : 264330286440

Status : Not Attempted and Marked For Review

Chosen Option : --

Q.5 Study the given pie-chart and answer the question that follows.
The pie-chart shows total expenditure of ₹3,00,00,000 on different items for constructing a flat in a town.



The percentage of the total expenditure on Labour and Timber is:

- Ans
- 1. $30\frac{5}{9}\%$
 - 2. $30\frac{1}{3}\%$
 - 3. $30\frac{1}{9}\%$
 - 4. $30\frac{7}{9}\%$

Question ID : 264330158282

Option 1 ID : 264330620488

Option 2 ID : 264330620490

Option 3 ID : 264330620487

Option 4 ID : 264330620489

Status : Not Attempted and Marked For Review

Chosen Option : --

Q.6 What is the number of valid votes cast in favour of a candidate in an election, if the candidate received 75% of the total valid votes, and 5% of the total votes were declared invalid, given that the total number of voters was 1,46,000?

- Ans
- 1. 1,06,650
 - 2. 1,10,250
 - 3. 1,04,025
 - 4. 1,08,850

Question ID : 264330157711

Option 1 ID : 264330618205

Option 2 ID : 264330618203

Option 3 ID : 264330618206

Option 4 ID : 264330618204

Status : **Not Attempted and Marked For Review**

Chosen Option : --

Q.7 A conical shape vessel has a radius of 21 cm and has a slant height of 25 cm. If the curved part of the vessel is to be painted white, find the cost (in ₹) of painting at the rate of ₹1.5 per cm².

- Ans
- 1. 2475
 - 2. 1650
 - 3. 825
 - 4. 1250

Question ID : 264330145104

Option 1 ID : 264330568674

Option 2 ID : 264330568671

Option 3 ID : 264330568672

Option 4 ID : 264330568673

Status : **Not Attempted and Marked For Review**

Chosen Option : --

Q.8 P and Q can do a work together in 30 days. Q and R can do the same work together in 24 days and R and P together in 20 days. They started the work together, but Q and R left after 10 days. How many more days will P take to finish the remaining work?

- Ans
- 1. 23
 - 2. 21
 - 3. 18
 - 4. 19

Question ID : 264330122719

Option 1 ID : 264330480974

Option 2 ID : 264330480973

Option 3 ID : 264330480971

Option 4 ID : 264330480972

Status : **Not Attempted and Marked For Review**

Chosen Option : --

Q.9 Find the greatest possible length (in metres) that can be used to exactly measure the lengths 6 m, 5 m 25 cm and 12 m 50 cm.

- Ans
- 1. 0.25 m
 - 2. 0.75 m
 - 3. 0.90 m
 - 4. 0.35 m

Question ID : 26433073063

Option 1 ID : 264330286447

Option 2 ID : 264330286445

Option 3 ID : 264330286444

Option 4 ID : 264330286446

Status : Not Attempted and
Marked For Review

Chosen Option : --

Q.10 In a village election, Sharuk got 80% of the total valid votes. 10% of the votes were invalid. If the total number of votes was 4500, then find the number of valid votes the other candidate got.

- Ans
- 1. 620
 - 2. 450
 - 3. 530
 - 4. 810

Question ID : 264330145071

Option 1 ID : 264330568540

Option 2 ID : 264330568539

Option 3 ID : 264330568541

Option 4 ID : 264330568542

Status : Not Attempted and
Marked For Review

Chosen Option : --

Q.11 What will be the difference between the total surface area and the curved surface area of a hemisphere having 4 cm diameter?

- Ans
- 1. $5\pi \text{ cm}^2$
 - 2. $8\pi \text{ cm}^2$
 - 3. $4\pi \text{ cm}^2$
 - 4. $4.4\pi \text{ cm}^2$

Question ID : 264330104374

Option 1 ID : 264330409800

Option 2 ID : 264330409798

Option 3 ID : 264330409797

Option 4 ID : 264330409799

Status : Not Attempted and
Marked For Review

Chosen Option : --

Q.12 A can do a piece of work in 8 days, while B can do it in 7 days. If they work at it alternately beginning with A, then in how many days will the work be completed?

- Ans
- 1. 8
 - 2. $8\frac{1}{2}$
 - 3. $7\frac{1}{2}$
 - 4. 7

Question ID : 26433082414
Option 1 ID : 264330323491
Option 2 ID : 264330323492
Option 3 ID : 264330323490
Option 4 ID : 264330323489
Status : Answered
Chosen Option : 3

Q.13 The cost of painting the total surface area of a 30 m high solid right circular cylinder at the rate of ₹25 per m^2 is ₹18,425. What is the volume (in m^3) of this cylinder [use $\pi = \frac{22}{7}$]?

- Ans
- 1. 1145
 - 2. 1210
 - 3. 1155
 - 4. 1122

Question ID : 264330122876
Option 1 ID : 264330481571
Option 2 ID : 264330481574
Option 3 ID : 264330481573
Option 4 ID : 264330481572
Status : Not Attempted and Marked For Review
Chosen Option : --

Q.14 What is the length (in cm) of the transverse common tangent between two circles with radii 6 cm and 4 cm, given that the distance between their centres is 14 cm?

- Ans
- 1. $2\sqrt{6}$
 - 2. $4\sqrt{6}$
 - 3. $5\sqrt{6}$
 - 4. $3\sqrt{6}$

Question ID : 264330163486
Option 1 ID : 264330641203
Option 2 ID : 264330641205
Option 3 ID : 264330641206
Option 4 ID : 264330641204
Status : Not Attempted and Marked For Review
Chosen Option : --

Q.15 The value of $(1 + \sin^4 A - \cos^4 A) \operatorname{cosec}^2 A$ is:

- Ans
- 1. -2
 - 2. 2
 - 3. 1
 - 4. -1

Question ID : 264330157758

Option 1 ID : 264330618394

Option 2 ID : 264330618393

Option 3 ID : 264330618391

Option 4 ID : 264330618392

Status : **Not Attempted and Marked For Review**

Chosen Option : --

Q.16 The table given below shows the number of products sold by 4 shopkeepers A, B, C and D on four different days.

person \ Days	A	B	C	D
Monday	1000	800	-	750
Tuesday	500	-	900	650
Wednesday	800	1000	700	-
Thursday	-	1200	800	900

If the total products sold by A and B, including all four days, is 3000 and 3500, respectively, the products sold by B on Tuesday is how many more or less than the products sold by A on Thursday?

- Ans
- 1. 300 more
 - 2. 200 less
 - 3. 200 more
 - 4. 300 less

Question ID : 264330167246

Option 1 ID : 264330655982

Option 2 ID : 264330655979

Option 3 ID : 264330655980

Option 4 ID : 264330655981

Status : **Not Attempted and Marked For Review**

Chosen Option : --

Q.17 If an amount of ₹80 becomes ₹96 in 2 years in a bank account which gives simple annual interest, then an amount of ₹62,000 will become _____ in the same account after 5 years.

- Ans
- 1. ₹88,200
 - 2. ₹84,600
 - 3. ₹82,400
 - 4. ₹93,000

Question ID : 264330117926

Option 1 ID : 264330463522

Option 2 ID : 264330463520

Option 3 ID : 264330463519

Option 4 ID : 264330463521

Status : **Not Attempted and Marked For Review**

Chosen Option : --

Q.18

If $a \propto b$, $b \propto \frac{1}{c}$ and $c \propto d$, then the relation between a and d is:

- Ans
- ✓ 1. $a \propto \frac{1}{d}$
 - ✗ 2. $a \propto d$
 - ✗ 3. $a \propto d^2$
 - ✗ 4. $a \propto \sqrt{d}$

Question ID : 264330145072

Option 1 ID : 264330568544

Option 2 ID : 264330568543

Option 3 ID : 264330568545

Option 4 ID : 264330568546

Status : Answered

Chosen Option : 1

Q.19 Study the given table and answer the question that follows.

The table shows the production of five types of cars P, Q, R, S and T by a company from the year 1989 to 1994.

Type of Car	1989	1990	1991	1992	1993	1994	Total
P	8	20	16	17	21	6	88
Q	16	10	14	12	12	14	78
R	21	17	16	15	13	8	90
S	4	6	10	16	20	31	87
T	25	18	19	30	14	27	133
Total	74	71	75	90	80	86	476

During the period 1989-94, which type of car featured a continuous increase in production?

- Ans
- ✓ 1. S
 - ✗ 2. Q
 - ✗ 3. R
 - ✗ 4. P

Question ID : 264330165465

Option 1 ID : 264330648942

Option 2 ID : 264330648940

Option 3 ID : 264330648941

Option 4 ID : 264330648939

Status : Answered

Chosen Option : 4

Q.20 Evaluate $6.9 - [8.6 - \{6.5 - (5.4 - \overline{4.3 - 2})\}]$.

- Ans
- ✗ 1. 1.8
 - ✗ 2. 1.9
 - ✗ 3. 1.6
 - ✓ 4. 1.7

Question ID : 26433063983

Option 1 ID : 264330250526

Option 2 ID : 264330250527

Option 3 ID : 264330250525

Option 4 ID : 264330250524

Status : Not Attempted and Marked For Review

Chosen Option : --

Q.21 A thief is noticed by a policeman from a distance of 300 m. The thief starts running and the policeman starts chasing him. The thief and policeman run at the rate of 11 km/h and 13 km/h, respectively. After running for how many kilometres will the policeman be able to catch the thief?

- Ans
- 1. 1.65
 - 2. 1.85
 - 3. 1.75
 - 4. 1.95

Question ID : 26433082987

Option 1 ID : 264330325781

Option 2 ID : 264330325783

Option 3 ID : 264330325782

Option 4 ID : 264330325784

Status : **Not Attempted and Marked For Review**

Chosen Option : --

Q.22 A sum of ₹1,00,000 was taken from a bank at the rate of 7% p.a to be compounded annually for 5 years. Calculate the compound interest. (Closest to a ₹)

- Ans
- 1. ₹40,000
 - 2. ₹20,963
 - 3. ₹40,567
 - 4. ₹40,255

Question ID : 264330145083

Option 1 ID : 264330568587

Option 2 ID : 264330568590

Option 3 ID : 264330568589

Option 4 ID : 264330568588

Status : **Not Attempted and Marked For Review**

Chosen Option : --

Q.23 The curved surface area of a cone whose base radius is 7 cm and slant height is 10 cm is:

- Ans
- 1. 280 cm^2
 - 2. 250 cm^2
 - 3. 300 cm^2
 - 4. 220 cm^2

Question ID : 264330103753

Option 1 ID : 264330407319

Option 2 ID : 264330407318

Option 3 ID : 264330407320

Option 4 ID : 264330407317

Status : **Not Attempted and Marked For Review**

Chosen Option : --

Q.24

A sector of a circle has a central angle of 45° and an arc length of 22 cm.

Find the radius of the circle. (Use $\pi = \frac{22}{7}$.)

- Ans
- 1. 32 cm
 - 2. 35 cm
 - 3. 28 cm
 - 4. 36 cm

Question ID : 264330163481

Option 1 ID : 264330641185

Option 2 ID : 264330641183

Option 3 ID : 264330641184

Option 4 ID : 264330641186

Status : **Not Attempted and Marked For Review**

Chosen Option : --

Q.25 The least common multiple of 210, 336 and 504 is :

- Ans
- 1. 5040
 - 2. 3360
 - 3. 2100
 - 4. 4560

Question ID : 26433066160

Option 1 ID : 264330259173

Option 2 ID : 264330259172

Option 3 ID : 264330259174

Option 4 ID : 264330259175

Status : **Not Attempted and Marked For Review**

Chosen Option : --

Q.26 The LCM of $\frac{1}{3}$, $\frac{3}{5}$, $\frac{4}{7}$ and $\frac{9}{16}$ is:

- Ans
- 1. 36
 - 2. 49
 - 3. 38
 - 4. 81

Question ID : 264330145041

Option 1 ID : 264330568419

Option 2 ID : 264330568421

Option 3 ID : 264330568420

Option 4 ID : 264330568422

Status : **Not Attempted and Marked For Review**

Chosen Option : --

Q.27 Study the given table and answer the question that follows.

The table shows the number of students doing various courses in various cities.

City	MBA	MCA	M.Sc.	M.Com.	M.A.	Total
Ahmedabad	1234	1384	1440	1289	1332	6679
Bengaluru	1156	1783	1874	1003	1340	7156
Bhopal	1187	1347	1532	1321	1486	6873
Chennai	1342	1473	1129	1765	1666	7375
New Delhi	1230	1098	1128	1865	1777	7098
Hyderabad	1456	1234	1556	1653	1789	7688
Kolkata	1239	1785	1865	1504	1762	8155

In Chennai, the number of students in MBA is nearly what percentage of students in M.A? (rounded off to 2 digits after decimal)

- Ans
- 1. 76.25%
 - 2. 80.55%
 - 3. 92.12%
 - 4. 99.23%

Question ID : 264330145102

Option 1 ID : 264330568663

Option 2 ID : 264330568664

Option 3 ID : 264330568665

Option 4 ID : 264330568666

Status : Not Attempted and Marked For Review

Chosen Option : --

Q.28 If $\cos A = \frac{15}{17}$, $0 \leq A \leq 90^\circ$, then the value of $\cot(90^\circ - A)$ is:

- Ans
- 1. $\frac{8}{15}$
 - 2. $\frac{2\sqrt{2}}{15}$
 - 3. $\frac{\sqrt{2}}{15}$
 - 4. $\frac{7}{15}$

Question ID : 264330157751

Option 1 ID : 264330618364

Option 2 ID : 264330618366

Option 3 ID : 264330618365

Option 4 ID : 264330618363

Status : Answered

Chosen Option : 1

Q.29 Study the given table and answer the question that follows.

The table shows the number of cakes sold by four different bakeries in 4 different months.

Month \ Bakery	August	September	October	November
P	250	241	213	168
Q	175	189	201	122
R	164	145	129	168
S	224	154	184	209

What is the difference between the total number of cakes sold by bakeries Q and S together in September and the total number of cakes sold by bakeries P and R together in November?

- Ans
- ✓ 1.7
 - ✗ 2.9
 - ✗ 3.10
 - ✗ 4.8

Question ID : 264330158259

Option 1 ID : 264330620398

Option 2 ID : 264330620396

Option 3 ID : 264330620395

Option 4 ID : 264330620397

Status : Not Attempted and Marked For Review

Chosen Option : --

Q.30 The volume of a right circular cone having a base diameter of 14 cm is $196\pi \text{ cm}^3$. Find the perpendicular height of this cone

- Ans
- ✗ 1. 10 cm
 - ✓ 2. 12 cm
 - ✗ 3. 14 cm
 - ✗ 4. 8 cm

Question ID : 264330145117

Option 1 ID : 264330568724

Option 2 ID : 264330568725

Option 3 ID : 264330568726

Option 4 ID : 264330568723

Status : Not Attempted and Marked For Review

Chosen Option : --

Q.31

Find the LCM of $\frac{3}{2}$, $\frac{81}{16}$ and $\frac{9}{8}$.

Ans

✗ 1. $\frac{91}{2}$

✓ 2. $\frac{81}{2}$

✗ 3. $\frac{111}{2}$

✗ 4. $\frac{101}{2}$

Question ID : 26433080080

Option 1 ID : 264330314269

Option 2 ID : 264330314268

Option 3 ID : 264330314271

Option 4 ID : 264330314270

Status : Not Attempted and
Marked For Review

Chosen Option : --

Q.32

If $\frac{A}{L} + \frac{M}{B} = 1$ and $\frac{B}{M} + \frac{N}{C} = 1$, then the value of $\frac{L}{A} + \frac{C}{N}$ is:

Ans

✗ 1. $\frac{B}{M}$

✗ 2. 0

✓ 3. 1

✗ 4. $\frac{M}{B}$

Question ID : 264330157777

Option 1 ID : 264330618470

Option 2 ID : 264330618468

Option 3 ID : 264330618467

Option 4 ID : 264330618469

Status : Not Attempted and
Marked For Review

Chosen Option : --

Q.33 The perimeter of a sector of a circle is 24 cm and the radius is 3 cm. Calculate the area (in cm^2) of the sector.

Ans

✗ 1. 24

✗ 2. 33

✓ 3. 27

✗ 4. 30

Question ID : 264330163482

Option 1 ID : 264330641187

Option 2 ID : 264330641190

Option 3 ID : 264330641188

Option 4 ID : 264330641189

Status : Not Attempted and
Marked For Review

Chosen Option : --

Q.34 Study the given table and answer the question that follows.
The table shows the production of five types of cars P, Q, R, S and T by a company from the year 1989 to 1994.

Type of Car	1989	1990	1991	1992	1993	1994	Total
P	8	20	16	17	21	6	88
Q	16	10	14	12	12	14	78
R	21	17	16	15	13	8	90
S	4	6	10	16	20	31	87
T	25	18	19	30	14	27	133
Total	74	71	75	90	80	86	476

During the period 1989-94, which type of car featured a continuous decrease in production?

- Ans
- 1. S
 - 2. Q
 - 3. R
 - 4. T

Question ID : 264330165466

Option 1 ID : 264330648945

Option 2 ID : 264330648943

Option 3 ID : 264330648944

Option 4 ID : 264330648946

Status : Not Attempted and Marked For Review

Chosen Option : --

Q.35 Find the value of $\frac{\cos 65^\circ}{\sin 25^\circ} + \frac{5 \sin 19^\circ}{\cos 71^\circ} - \frac{3 \cos 28^\circ}{\sin 62^\circ}$.

- Ans
- 1. 2
 - 2. 0
 - 3. 1
 - 4. 3

Question ID : 264330158292

Option 1 ID : 264330620529

Option 2 ID : 264330620527

Option 3 ID : 264330620528

Option 4 ID : 264330620530

Status : Not Attempted and Marked For Review

Chosen Option : --

Q.36 Swastik saves 20% of his income while spends the remaining amount on food, rent, education and shopping. 15% of the income is spent on food, while ₹12,800 is spent on rent, ₹32,000 on education and ₹7,200 on shopping. The amount spent on shopping is 11.25% of the total expenditure. How much money (in ₹) is spent on food?

- Ans
- 1. 9600
 - 2. 10800
 - 3. 12000
 - 4. 15000

Question ID : 264330103315

Option 1 ID : 264330405567

Option 2 ID : 264330405568

Option 3 ID : 264330405565

Option 4 ID : 264330405566

Status : Not Attempted and Marked For Review

Chosen Option : --

Q.37 Simplify the given expression.

$$\frac{a^2 - b^2 - 2bc - c^2}{a^2 + b^2 + 2ab - c^2}$$

- Ans
- 1. $\frac{a + b + c}{a - b - c}$
 - 2. $\frac{a - b - c}{a + b - c}$
 - 3. $\frac{a + b - c}{a - b - c}$
 - 4. $\frac{a - b + c}{a + b - c}$

Question ID : 264330157767

Option 1 ID : 264330618430

Option 2 ID : 264330618429

Option 3 ID : 264330618428

Option 4 ID : 264330618427

Status : Not Attempted and Marked For Review

Chosen Option : --

Q.38 If the marked price is 75% more than the cost price and a discount of 40% is allowed on the marked price, then the percentage profit is:

- Ans
- 1. 6%
 - 2. 7%
 - 3. 8%
 - 4. 5%

Question ID : 264330104505

Option 1 ID : 264330410324

Option 2 ID : 264330410321

Option 3 ID : 264330410322

Option 4 ID : 264330410323

Status : Not Attempted and Marked For Review

Chosen Option : --

Q.39 In what ratio must a shopkeeper mix two types of rice worth ₹55 per kg and ₹70 per kg, so that the average cost of the mixture is ₹65 per kg?

- Ans
- 1. 1 : 2
 - 2. 2 : 3
 - 3. 3 : 2
 - 4. 1 : 3

Question ID : 264330105977

Option 1 ID : 264330416212

Option 2 ID : 264330416209

Option 3 ID : 264330416210

Option 4 ID : 264330416211

Status : Not Attempted and Marked For Review

Chosen Option : --

Q.40 What is the value of the given expression?

$$\frac{1}{12} + \frac{1}{16} + \frac{1}{8}$$

- Ans
- 1. $\frac{13}{48}$
 - 2. $\frac{10}{72}$
 - 3. $\frac{3}{48}$
 - 4. $\frac{13}{18}$

Question ID : 26433063280
Option 1 ID : 264330247773
Option 2 ID : 264330247775
Option 3 ID : 264330247772
Option 4 ID : 264330247774
Status : Answered
Chosen Option : 1

Q.41 For a triangle ABC, D and E are two points on AB and AC such that $AD = \frac{1}{6} AB$, $AE = \frac{1}{6} AC$. If $BC = 22$ cm, then DE is _____. (Consider up to two decimals)

- Ans
- 1. 1.33 cm
 - 2. 1.67 cm
 - 3. 3.67 cm
 - 4. 3.33 cm

Question ID : 264330145114
Option 1 ID : 264330568714
Option 2 ID : 264330568711
Option 3 ID : 264330568713
Option 4 ID : 264330568712
Status : Not Attempted and Marked For Review
Chosen Option : --

Q.42 Reema runs $\frac{5}{4}$ times as fast as Rekha. In view of this Reema allows Rekha a lead of 50 metres to Rekha in a friendly race competition. What is the distance from the starting point where both Reema and Rekha meet?

- Ans
- 1. 250 m
 - 2. 225 m
 - 3. 200 m
 - 4. 240 m

Question ID : 264330145027
Option 1 ID : 264330568363
Option 2 ID : 264330568364
Option 3 ID : 264330568365
Option 4 ID : 264330568366
Status : Not Attempted and Marked For Review
Chosen Option : --

Q.43 The given table shows marks obtained by four students in four subjects.

Subjects Student	Maths (100)	English (100)	Science (100)	Hindi (100)
A	75	80	75	85
B	80	70	70	80
C	70	85	85	75
D	85	75	80	70

The average percentage of marks obtained by all students in Hindi is:

- Ans
- 1. 77.0%
 - 2. 77.6%
 - 3. 77.8%
 - 4. 77.5%

Question ID : 264330165488

Option 1 ID : 264330649032

Option 2 ID : 264330649031

Option 3 ID : 264330649034

Option 4 ID : 264330649033

Status : Not Attempted and
Marked For Review

Chosen Option : --

Q.44 If $\cot \theta = \frac{4}{3}$, $0 < \theta < \frac{\pi}{2}$, and $5p \cos^2 \theta \sin \theta = \cot^2 \theta$, then the value of p is:

- Ans
- 1. $\frac{7}{27}$
 - 2. $\frac{125}{27}$
 - 3. $\frac{5}{27}$
 - 4. $\frac{25}{27}$

Question ID : 264330145122

Option 1 ID : 264330568746

Option 2 ID : 264330568745

Option 3 ID : 264330568744

Option 4 ID : 264330568743

Status : Answered

Chosen Option : 4

Q.45 Train 'A' requires 15 seconds to cross train 'B' of length 300 m moving in the opposite direction at a speed of 36 km/h. Further, train 'A' requires 30 seconds to cross a 500 m long stationary train 'C'. Find the length (in m) of train 'A'.

Ans 1. 200

2. 300

3. 250

4. 275

Question ID : 264330103990

Option 1 ID : 264330408264

Option 2 ID : 264330408261

Option 3 ID : 264330408263

Option 4 ID : 264330408262

Status : Not Attempted and
Marked For Review

Chosen Option : --

Q.46 If the difference between the selling prices of an article at profits of 10% and 7% is ₹6, then the cost price (in ₹) of the article is:

Ans 1. 175

2. 150

3. 200

4. 100

Question ID : 264330102344

Option 1 ID : 264330401843

Option 2 ID : 264330401842

Option 3 ID : 264330401844

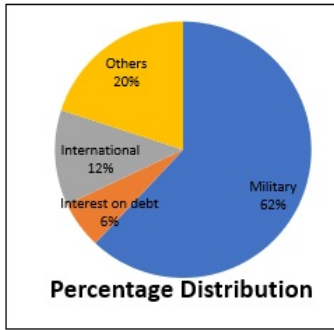
Option 4 ID : 264330401841

Status : Not Attempted and
Marked For Review

Chosen Option : --

Prepare 50% Faster

Q.47 Study the given pie-chart and answer the question that follows.
The pie-chart shows the National Budget Expenditure in the year 2019.



If ₹850 billion were spent in year 2019 for interest on debt and military, then what would have been the total expenditure for that year (in ₹ billion)?

- Ans
- 1. 1,700
 - 2. 1,300
 - 3. 1,250
 - 4. 1,450

Question ID : 264330158281

Option 1 ID : 264330620483

Option 2 ID : 264330620485

Option 3 ID : 264330620486

Option 4 ID : 264330620484

Status : Not Attempted and Marked For Review

Chosen Option : --

Q.48 John can do a piece of work alone in 20 days, while Ravi can do the same piece of work alone in 28 days. In how many days can the duo complete the same work if they work together?

- Ans
- 1. $11\frac{1}{3}$
 - 2. $12\frac{2}{3}$
 - 3. $11\frac{2}{3}$
 - 4. $12\frac{1}{3}$

Question ID : 264330103284

Option 1 ID : 264330405442

Option 2 ID : 264330405444

Option 3 ID : 264330405441

Option 4 ID : 264330405443

Status : Not Attempted and Marked For Review

Chosen Option : --

Q.49 At a courier shop, the weights of 8 parcels were found to be 1.5 kg, 1.25 kg, 1.35 kg, 750 gm, 950 gm, 0.7 kg, 0.4 kg, and 0.5 kg. Find their average weight.

- Ans
- 1. 875gm
 - 2. 900gm
 - 3. 925gm
 - 4. 700gm

Question ID : 264330109236

Option 1 ID : 264330429221

Option 2 ID : 264330429223

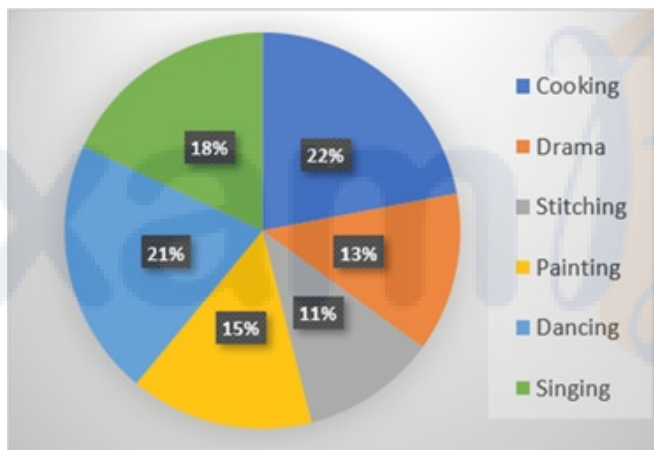
Option 3 ID : 264330429224

Option 4 ID : 264330429222

Status : Answered

Chosen Option : 3

Q.50 Study the given pie-chart and answer the question that follows. The pie-chart shows the percentage of 3600 students enrolled in different hobby classes in a school.



The number of students enrolled in Painting classes is approximately what percentage of those enrolled in Singing classes?

- Ans
- 1. 108%
 - 2. 83%
 - 3. 98%
 - 4. 78%

Question ID : 264330157735

Option 1 ID : 264330618302

Option 2 ID : 264330618300

Option 3 ID : 264330618301

Option 4 ID : 264330618299

Status : Answered

Chosen Option : 1

Section : English Comprehension

Q.1 Select the option that can be used as a one-word substitute for the given group of words.

Study of science of insects

- Ans 1. Entomology
 2. Anthropology
 3. Microbiology
 4. Ecology

Question ID : 26433088991
Option 1 ID : 264330349501
Option 2 ID : 264330349502
Option 3 ID : 264330349504
Option 4 ID : 264330349503
Status : Answered
Chosen Option : 1

Q.2 Select the most appropriate ANTONYM of the given word.

Apathy

- Ans 1. Interruption
 2. Ignorance
 3. Interest
 4. Sincerity

Question ID : 26433099134
Option 1 ID : 264330389149
Option 2 ID : 264330389152
Option 3 ID : 264330389150
Option 4 ID : 264330389151
Status : Not Attempted and Marked For Review
Chosen Option : --

Q.3 Select the option that can be used as a one-word substitute for the given group of words.

One who settles in another country

- Ans 1. Resident
 2. Immigrant
 3. Traveller
 4. Refugee

Question ID : 26433088532
Option 1 ID : 264330347704
Option 2 ID : 264330347701
Option 3 ID : 264330347703
Option 4 ID : 264330347702
Status : Answered
Chosen Option : 2

Q.4 Select the most appropriate option that can substitute the underlined segment in the given sentence. If there is no need to substitute it, select 'No substitution required'.
The Taj Mahal is one of the much popular seven wonders of the world.

- Ans**
- 1. No substitution required
 - 2. more
 - 3. much more
 - 4. most

Question ID : 26433070768
Option 1 ID : 264330277531
Option 2 ID : 264330277529
Option 3 ID : 264330277528
Option 4 ID : 264330277530
Status : Answered
Chosen Option : 4

Q.5 Select the INCORRECTLY spelt word from the given sentence.
Gandhiji considered untouchability to be one of India's major social ills.

- Ans**
- 1. social
 - 2. major
 - 3. considared
 - 4. untouchability

Question ID : 264330164526
Option 1 ID : 264330645298
Option 2 ID : 264330645297
Option 3 ID : 264330645295
Option 4 ID : 264330645296
Status : Answered
Chosen Option : 3

Q.6 Select the most appropriate meaning of the given idiom.

Crack someone up

- Ans**
- 1. To criticise someone
 - 2. To force someone to commit a mistake
 - 3. To make someone angry
 - 4. To make someone laugh

Question ID : 264330163404
Option 1 ID : 264330640896
Option 2 ID : 264330640898
Option 3 ID : 264330640895
Option 4 ID : 264330640897
Status : Answered
Chosen Option : 1

Q.7 Select the most appropriate synonym of the given word.
Captivate

- Ans
- 1. Study
 - 2. Allure
 - 3. Envelope
 - 4. Arrest

Question ID : 264330102432

Option 1 ID : 264330402176

Option 2 ID : 264330402174

Option 3 ID : 264330402175

Option 4 ID : 264330402173

Status : **Not Attempted and
Marked For Review**

Chosen Option : --

Q.8 Select the option that can be used as a one-word substitute for the given group of words.

The capacity for being useful for some purpose.

- Ans
- 1. Gain
 - 2. Utility
 - 3. Desirability
 - 4. Aid

Question ID : 26433090451

Option 1 ID : 264330355265

Option 2 ID : 264330355266

Option 3 ID : 264330355268

Option 4 ID : 264330355267

Status : **Answered**

Chosen Option : 2

Q.9 Select the most appropriate ANTONYM of the given word.

Rejoinder

- Ans
- 1. Expedite
 - 2. Reply
 - 3. Ordinary
 - 4. Request

Question ID : 264330163379

Option 1 ID : 264330640806

Option 2 ID : 264330640803

Option 3 ID : 264330640804

Option 4 ID : 264330640805

Status : **Not Attempted and
Marked For Review**

Chosen Option : --

Q.10 Select the sentence that has a spelling error.

- A- The art of living is learnt easily by those who are positive and optimistic.
B- We can learn a lot about the art of living by having a peep into the lives of great men.
C- The daily routines of these great men dissiminate that they are different.
D- Their unique lifestyles help us learn certain habits and practices that they followed.

- Ans 1. The daily routines of these great men dissiminate that they are different.
 2. Their unique lifestyles help us learn certain habits and practices that they followed.
 3. We can learn a lot about the art of living by having a peep into the lives of great men.
 4. The art of living is learnt easily by those who are positive and optimistic.

Question ID : 264330141561
Option 1 ID : 264330554581
Option 2 ID : 264330554582
Option 3 ID : 264330554580
Option 4 ID : 264330554579
Status : Answered
Chosen Option : 2

Q.11 Select the correct idiom to replace the underlined segment in the given sentence.

We should ask Emily to join our team. She is as keen as butter.

- Ans 1. as keen as a bee
 2. as keen as mustard
 3. as keen as salt
 4. as keen as sugar

Question ID : 26433092313
Option 1 ID : 264330362550
Option 2 ID : 264330362551
Option 3 ID : 264330362549
Option 4 ID : 264330362552
Status : Answered
Chosen Option : 1

Q.12 Choose the correct spelling of the underlined word in the given sentence.

He has won the medal for the twelfth time.

- Ans 1. Twellth
 2. Twwelfth
 3. Twelfth
 4. Twelth

Question ID : 264330117377
Option 1 ID : 264330461549
Option 2 ID : 264330461551
Option 3 ID : 264330461550
Option 4 ID : 264330461552
Status : Answered
Chosen Option : 1

Q.13 Select the most appropriate meaning of the given idiom.

What a small world!

- Ans
- 1. The world is great.
 - 2. What a beautiful place!
 - 3. The world is a village.
 - 4. What a coincidence!

Question ID : 26433099940
Option 1 ID : 264330392334
Option 2 ID : 264330392336
Option 3 ID : 264330392333
Option 4 ID : 264330392335
Status : Answered
Chosen Option : 4

Q.14 Select the most appropriate option that can substitute the underlined segment in the given sentence.

Payal's father was seen desperately searching for the medicine that can counteract the effect of a venomous snakebite in Parul's left hand.

- Ans
- 1. antiseptic
 - 2. anti-serum
 - 3. remedy
 - 4. antidote

Question ID : 26433070594
Option 1 ID : 264330276840
Option 2 ID : 264330276842
Option 3 ID : 264330276843
Option 4 ID : 264330276841
Status : Answered
Chosen Option : 4

Q.15 Select the most appropriate ANTONYM of the given word.

Asset

- Ans
- 1. Mole
 - 2. Liability
 - 3. Wealth
 - 4. Refuge

Question ID : 264330167909
Option 1 ID : 264330658555
Option 2 ID : 264330658558
Option 3 ID : 264330658557
Option 4 ID : 264330658556
Status : Answered
Chosen Option : 2

Q.16 Select the INCORRECTLY spelt word.

- Ans
- 1. Merriment
 - 2. Yearn
 - 3. Zenith
 - 4. Miniture

Question ID : 26433091838
Option 1 ID : 264330360690
Option 2 ID : 264330360692
Option 3 ID : 264330360691
Option 4 ID : 264330360689
Status : Answered
Chosen Option : 4

Q.17 Select the most appropriate ANTONYM of the given word.
Placid

- Ans
- 1. Turbulent
 - 2. Pensive
 - 3. Pristine
 - 4. Destined

Question ID : 26433097020
Option 1 ID : 264330380815
Option 2 ID : 264330380816
Option 3 ID : 264330380813
Option 4 ID : 264330380814
Status : Not Attempted and Marked For Review
Chosen Option : --

Q.18 Choose the most suitable idiom for the given situation.

Ravi has a strong desire to be in college hockey team this year and he is working hard to gain such skills to fulfill his goal of life. He has clearly made up his mind to achieve his target.

- Ans
- 1. To rise to the occasion
 - 2. To make the cut
 - 3. Set sights on
 - 4. To move the goal posts

Question ID : 264330137462
Option 1 ID : 264330538474
Option 2 ID : 264330538472
Option 3 ID : 264330538473
Option 4 ID : 264330538471
Status : Not Attempted and Marked For Review
Chosen Option : --

Q.19 Select the INCORRECTLY spelt word.

- Ans
- 1. Bread
 - 2. Pasta
 - 3. Noodle
 - 4. Pítza

Question ID : 26433089012
Option 1 ID : 264330349588
Option 2 ID : 264330349586
Option 3 ID : 264330349585
Option 4 ID : 264330349587
Status : Answered
Chosen Option : 4

Q.20 Identify the sentence that correctly uses the indefinite article.

- Ans
- 1. There are three cars parked outside: a Mercedes, an Jaguar and a Fiat.
 - 2. There are three cars parked outside: an Mercedes, a Jaguar and a Fiat.
 - 3. There are three cars parked outside: a Mercedes, a Jaguar and a Fiat.
 - 4. There are three cars parked outside: a Mercedes, an Jaguar and an Fiat.

Question ID : 26433059561
Option 1 ID : 264330233094
Option 2 ID : 264330233093
Option 3 ID : 264330233092
Option 4 ID : 264330233095
Status : Answered
Chosen Option : 3

Q.21 You are preparing a speech for an upcoming function. Select a synonym for the highlighted word to make it better.

Effective public transportation networks may greatly alleviate traffic congestion and enhance inhabitants' quality of life in general.

- Ans
- 1. Amplification
 - 2. Diversion
 - 3. Gridlock
 - 4. Laxity

Question ID : 264330121904
Option 1 ID : 264330477774
Option 2 ID : 264330477772
Option 3 ID : 264330477771
Option 4 ID : 264330477773
Status : Answered
Chosen Option : 3

Q.22 Select the option that can be used as a one-word substitute for the given group of words.

Happening repeatedly

- Ans
- 1. Recuperate
 - 2. Recurrent
 - 3. Rapport
 - 4. Regression

Question ID : 26433073674
Option 1 ID : 264330288837
Option 2 ID : 264330288836
Option 3 ID : 264330288839
Option 4 ID : 264330288838
Status : Answered
Chosen Option : 2

Q.23 Select the correct idiom that can substitute the italicised group of words in the given sentence.

He really stinks and *smells foul* after a hard session at the gym.

- Ans
- 1. an old flame
 - 2. an iron will
 - 3. pen and ink
 - 4. lame excuse

Question ID : 26433094782
Option 1 ID : 264330371953
Option 2 ID : 264330371955
Option 3 ID : 264330371956
Option 4 ID : 264330371954
Status : Not Attempted and Marked For Review
Chosen Option : --

Q.24 The following sentence has been divided into parts. One of them may contain an error. Select the part that contains the error from the given options. If you don't find any error, mark 'No error' as your answer.

I wanted to buy a candle holder, / but the store didn't have one. / So, I got a cake.

- Ans
- 1. No error
 - 2. but the store didn't have one
 - 3. I wanted to buy a candle holder
 - 4. So, I got a cake

Question ID : 26433059551
Option 1 ID : 264330233055
Option 2 ID : 264330233053
Option 3 ID : 264330233052
Option 4 ID : 264330233054
Status : Answered
Chosen Option : 2

Q.25 Select the most appropriate idiom to fill in the blank.
All my efforts went in vain. The project on which I was working for the last two months has failed and we are _____.

- Ans
- 1. all in the seventh heaven
 - 2. back to square one
 - 3. on the fly
 - 4. around the bend

Question ID : 264330134221
Option 1 ID : 264330525880
Option 2 ID : 264330525879
Option 3 ID : 264330525881
Option 4 ID : 264330525882
Status : Answered
Chosen Option : 2

Q.26 Select the most appropriate idiom to fill in the blank.
Choosing not to pursue a degree in computer engineering was _____, as the market for them is extremely limited nowadays.

- Ans
- 1. airy fairy
 - 2. a cut above
 - 3. an elevator pitch
 - 4. a blessing in disguise

Question ID : 264330134219
Option 1 ID : 264330525871
Option 2 ID : 264330525873
Option 3 ID : 264330525874
Option 4 ID : 264330525872
Status : Not Attempted and Marked For Review
Chosen Option : --

Q.27 Select the option that can be used as a one-word substitute for the given group of words.

A person who believes that God does not exist

- Ans
- 1. Atheist
 - 2. Fanatic
 - 3. Epicurean
 - 4. Hedonistic

Question ID : 26433088195
Option 1 ID : 264330346375
Option 2 ID : 264330346374
Option 3 ID : 264330346376
Option 4 ID : 264330346373
Status : Answered
Chosen Option : 1

Q.28 Select the most appropriate ANTONYM of the word 'discordant' in the given sentence and choose the correct option.

The sweet melodious symphony of the piano filled the room, transporting the listeners to a world of beauty and emotion.

- Ans
- 1. Filled
 - 2. Melodious
 - 3. Transporting
 - 4. Emotion

Question ID : 264330163538

Option 1 ID : 264330641408

Option 2 ID : 264330641407

Option 3 ID : 264330641409

Option 4 ID : 264330641410

Status : Not Attempted and Marked For Review

Chosen Option : --

Q.29 Select the correct option to substitute the underlined segment in the given sentence. If no substitution is required, select 'No substitution'.

He is faster than smarter.

- Ans
- 1. more fast than smart
 - 2. fast than smart
 - 3. faster than being smart
 - 4. No substitution

Question ID : 26433090823

Option 1 ID : 264330356713

Option 2 ID : 264330356715

Option 3 ID : 264330356714

Option 4 ID : 264330356716

Status : Not Attempted and Marked For Review

Chosen Option : --

Q.30 Parts of the following sentence have been given as options. One of them may contain an error. Select the part that contains the error from the given options. If you don't find any error, mark 'No error' as your answer.

You arrived two days ago. By the time you leave, you will have spent nine days here.

- Ans
- 1. You arrived two days ago
 - 2. No error
 - 3. By the time you leave
 - 4. you will have spent nine days here

Question ID : 26433090496

Option 1 ID : 264330355433

Option 2 ID : 264330355436

Option 3 ID : 264330355434

Option 4 ID : 264330355435

Status : Not Attempted and Marked For Review

Chosen Option : --

Q.31 Select the option that can be used as a one-word substitute for the given group of words.

The study of the human mind

- Ans 1. Psychology
 2. Microbiology
 3. Epidemiology
 4. Anthropology

Question ID : 26433088754
Option 1 ID : 264330348572
Option 2 ID : 264330348571
Option 3 ID : 264330348570
Option 4 ID : 264330348569
Status : Answered
Chosen Option : 1

Q.32 Select the most appropriate option to substitute the underlined segment in the given sentence.

Any sort of unfair conduct is not tolerated in international sports tournaments as it can completely ruin an athlete's career.

- Ans 1. straw in the eye
 2. hand in the mud
 3. foul play
 4. red handed

Question ID : 26433092923
Option 1 ID : 264330364961
Option 2 ID : 264330364963
Option 3 ID : 264330364964
Option 4 ID : 264330364962
Status : Answered
Chosen Option : 3

Q.33 Select the most appropriate ANTONYM of the given word.
Denounce

- Ans 1. Praise
 2. Relieve
 3. Criticise
 4. Dainty

Question ID : 264330165246
Option 1 ID : 264330648084
Option 2 ID : 264330648085
Option 3 ID : 264330648083
Option 4 ID : 264330648086
Status : Not Attempted and Marked For Review
Chosen Option : --

Q.34 Select the most appropriate ANTONYM of the given word.

Leniency

- Ans
- 1. Penalty
 - 2. Favour
 - 3. Sternness
 - 4. Discard

Question ID : 264330163374

Option 1 ID : 264330640786

Option 2 ID : 264330640783

Option 3 ID : 264330640785

Option 4 ID : 264330640784

Status : **Not Attempted and Marked For Review**

Chosen Option : --

Q.35 Select the most appropriate synonym of the word 'viable' in the given sentence and choose the correct option.

The engineer's design was optimised for efficiency and scalability, with a focus on sustainability.

- Ans
- 1. Efficiency
 - 2. Optimised
 - 3. Scalability
 - 4. Sustainability

Question ID : 264330163534

Option 1 ID : 264330641392

Option 2 ID : 264330641391

Option 3 ID : 264330641393

Option 4 ID : 264330641394

Status : **Answered**

Chosen Option : 2

Q.36 The following sentence has been split into four segments. Identify the segment that contains a grammatical error.

A Prime Minister of India / will address / the nation today / on the occasion of Independence Day.

- Ans
- 1. A Prime Minister of India
 - 2. the nation today
 - 3. on the occasion of Independence Day
 - 4. will address

Question ID : 264330120604

Option 1 ID : 264330472655

Option 2 ID : 264330472657

Option 3 ID : 264330472658

Option 4 ID : 264330472656

Status : **Answered**

Chosen Option : 1

Q.37 Select the most appropriate idiom to fill in the blank.

I think we should _____ before buying this car.

- Ans
- 1. eat like a horse
 - 2. hold our horses
 - 3. stop to change horses
 - 4. get off our high horse

Question ID : 264330163337
Option 1 ID : 264330640647
Option 2 ID : 264330640650
Option 3 ID : 264330640648
Option 4 ID : 264330640649
Status : Answered
Chosen Option : 2

Q.38 Select the correct idiom to substitute the underlined word segment in the following sentence.

She trusted her husband but he stabbed her in the neck when he usurped her inheritance.

- Ans
- 1. stabbed her in the back
 - 2. stabbed her prospects
 - 3. stabbed her with a fork
 - 4. snapped her in the neck

Question ID : 264330101448
Option 1 ID : 264330398303
Option 2 ID : 264330398302
Option 3 ID : 264330398301
Option 4 ID : 264330398304
Status : Answered
Chosen Option : 2

Q.39 Select the option that can be used as a one-word substitute for the given group of words.

A keeper or custodian of a museum or other collection

- Ans
- 1. Cartographer
 - 2. Calligrapher
 - 3. Curator
 - 4. Chauffeur

Question ID : 264330164300
Option 1 ID : 264330644415
Option 2 ID : 264330644418
Option 3 ID : 264330644417
Option 4 ID : 264330644416
Status : Answered
Chosen Option : 3

Q.40 Parts of the following sentence have been given as options. Select the option that contains an error.

Raman ate the cake and exclaimed that it tasted sweetly.

- Ans**
- 1. the cake
 - 2. and exclaimed that
 - 3. it tasted sweetly
 - 4. Raman ate

Question ID : 264330134121
Option 1 ID : 264330525508
Option 2 ID : 264330525509
Option 3 ID : 264330525510
Option 4 ID : 264330525507
Status : Answered
Chosen Option : 3

Comprehension:

In the following passage, some words have been deleted. Read the passage carefully and select the most appropriate option to fill in each blank.

South Korea is the most cosmetically (1)_____ country on Earth. Beauty editors estimate that it is because of the government's heavy investment (2)_____ industry. It is ahead of its competitors, and its citizens (3)_____ twice as much on skincare products as consumers in the United States, the UK, and France. Korean shoppers are (4)_____ the world's most discerning. Eight out of 10 Korean women in their 20s and 30s use an app that (5)_____ like a cosmetics-specific, to debate the merits of various common ingredients.

SubQuestion No : 41

Q.41 Select the most appropriate option to fill in blank number 1.

- Ans**
- 1. ancient
 - 2. primitive
 - 3. advanced
 - 4. early

Question ID : 264330164225
Option 1 ID : 264330644135
Option 2 ID : 264330644137
Option 3 ID : 264330644136
Option 4 ID : 264330644138
Status : Answered
Chosen Option : 3

Comprehension:

In the following passage, some words have been deleted. Read the passage carefully and select the most appropriate option to fill in each blank.

South Korea is the most cosmetically (1)_____ country on Earth. Beauty editors estimate that it is because of the government's heavy investment (2)_____ industry. It is ahead of its competitors, and its citizens (3)_____ twice as much on skincare products as consumers in the United States, the UK, and France. Korean shoppers are (4)_____ the world's most discerning. Eight out of 10 Korean women in their 20s and 30s use an app that (5)_____ like a cosmetics-specific, to debate the merits of various common ingredients.

SubQuestion No : 42**Q.42 Select the most appropriate option to fill in blank number 2.**

- Ans 1. of the
 2. by the
 3. in the
 4. from the

Question ID : 264330164226

Option 1 ID : 264330644139

Option 2 ID : 264330644140

Option 3 ID : 264330644141

Option 4 ID : 264330644142

Status : Answered

Chosen Option : 3

Comprehension:

In the following passage, some words have been deleted. Read the passage carefully and select the most appropriate option to fill in each blank.

South Korea is the most cosmetically (1)_____ country on Earth. Beauty editors estimate that it is because of the government's heavy investment (2)_____ industry. It is ahead of its competitors, and its citizens (3)_____ twice as much on skincare products as consumers in the United States, the UK, and France. Korean shoppers are (4)_____ the world's most discerning. Eight out of 10 Korean women in their 20s and 30s use an app that (5)_____ like a cosmetics-specific, to debate the merits of various common ingredients.

SubQuestion No : 43**Q.43 Select the most appropriate option to fill in blank number 3.**

- Ans 1. spend
 2. cherish
 3. comply
 4. propagate

Question ID : 264330164227

Option 1 ID : 264330644146

Option 2 ID : 264330644144

Option 3 ID : 264330644143

Option 4 ID : 264330644145

Status : Answered

Chosen Option : 1

Comprehension:

In the following passage, some words have been deleted. Read the passage carefully and select the most appropriate option to fill in each blank.

South Korea is the most cosmetically (1)_____ country on Earth. Beauty editors estimate that it is because of the government's heavy investment (2)_____ industry. It is ahead of its competitors, and its citizens (3)_____ twice as much on skincare products as consumers in the United States, the UK, and France. Korean shoppers are (4)_____ the world's most discerning. Eight out of 10 Korean women in their 20s and 30s use an app that (5)_____ like a cosmetics-specific, to debate the merits of various common ingredients.

SubQuestion No : 44**Q.44 Select the most appropriate option to fill in blank number 4.**

- Ans 1. perhaps
 2. although
 3. maybe
 4. though

Question ID : 264330164228

Option 1 ID : 264330644147

Option 2 ID : 264330644148

Option 3 ID : 264330644150

Option 4 ID : 264330644149

Status : Answered

Chosen Option : 3

Comprehension:

In the following passage, some words have been deleted. Read the passage carefully and select the most appropriate option to fill in each blank.

South Korea is the most cosmetically (1)_____ country on Earth. Beauty editors estimate that it is because of the government's heavy investment (2)_____ industry. It is ahead of its competitors, and its citizens (3)_____ twice as much on skincare products as consumers in the United States, the UK, and France. Korean shoppers are (4)_____ the world's most discerning. Eight out of 10 Korean women in their 20s and 30s use an app that (5)_____ like a cosmetics-specific, to debate the merits of various common ingredients.

SubQuestion No : 45**Q.45 Select the most appropriate option to fill in blank number 5.**

- Ans 1. dissolves
 2. stops
 3. malfunctions
 4. functions

Question ID : 264330164229

Option 1 ID : 264330644153

Option 2 ID : 264330644151

Option 3 ID : 264330644152

Option 4 ID : 264330644154

Status : Answered

Chosen Option : 4

Comprehension:

Read the given passage carefully and answer the questions that follow.

Throughout history, the intricacies of the human mind have been the subject of fascination and inquiry. From ancient philosophers to modern-day neuroscientists, the workings of the brain have been studied and analysed in an attempt to unravel its mysteries. However, despite centuries of research, much remains unknown about the complexities of human cognition and consciousness.

One of the most fascinating aspects of the human mind is its ability to create and imagine. The human mind has the capacity to conceptualise and bring into being ideas that were previously unknown or unimaginable, from artistic expression to scientific discovery. The process of creativity has captured the attention of scholars and laypeople alike and is both enigmatic and awe-inspiring.

There have been many theories proposed to explain the process of creativity. Some suggest that it is a purely subconscious process, while others argue that creativity is a result of conscious effort and intentional problem-solving. Still others suggest that creativity arises from a combination of conscious and subconscious processes.

Despite the ongoing debate over the nature of creativity, one thing is clear: it is a multifaceted and complex phenomenon. Creativity can manifest in a wide range of human activities, from the creation of art and literature to the development of scientific theories and inventions. It can occur in both individual and collective contexts and can be driven by a variety of factors such as curiosity, passion, or the desire for recognition.

Creativity also has the potential to bring about positive change in the world. Throughout history, creative individuals and groups have used their talents to address social, political, and environmental challenges, often inspiring others to take action and make a difference. From the abolitionist movement to the civil rights movement to the environmental movement, creativity has played a crucial role in promoting social justice and positive change.

Despite the many benefits of creativity, it is not without its challenges. The process of creative expression can be fraught with obstacles, from self-doubt and insecurity to external pressures and constraints. Moreover, not all creative ideas are successful or well-received, and many artists and innovators face rejection and criticism as they seek to bring their ideas to fruition. Despite these challenges, however, the human drive to create and imagine persists.

Individuals and groups continue to harness the power of creativity to make a difference in the world. From the humblest amateur artist to the most celebrated innovator, the human capacity for creativity remains one of our greatest strengths and sources of inspiration.

SubQuestion No : 46

Q.46 Select an appropriate title for the passage.

- Ans**
- 1. The Power of Creativity
 - 2. The Complexities of Human Cognition
 - 3. The History of the Human Mind
 - 4. The Role of the Human Mind in Promoting Positive Change

Question ID : 264330165133

Option 1 ID : 264330647640

Option 2 ID : 264330647642

Option 3 ID : 264330647639

Option 4 ID : 264330647641

Status : Answered

Chosen Option : 1

Comprehension:

Read the given passage carefully and answer the questions that follow.

Throughout history, the intricacies of the human mind have been the subject of fascination and inquiry. From ancient philosophers to modern-day neuroscientists, the workings of the brain have been studied and analysed in an attempt to unravel its mysteries. However, despite centuries of research, much remains unknown about the complexities of human cognition and consciousness.

One of the most fascinating aspects of the human mind is its ability to create and imagine. The human mind has the capacity to conceptualise and bring into being ideas that were previously unknown or unimaginable, from artistic expression to scientific discovery. The process of creativity has captured the attention of scholars and laypeople alike and is both enigmatic and awe-inspiring.

There have been many theories proposed to explain the process of creativity. Some suggest that it is a purely subconscious process, while others argue that creativity is a result of conscious effort and intentional problem-solving. Still others suggest that creativity arises from a combination of conscious and subconscious processes.

Despite the ongoing debate over the nature of creativity, one thing is clear: it is a multifaceted and complex phenomenon. Creativity can manifest in a wide range of human activities, from the creation of art and literature to the development of scientific theories and inventions. It can occur in both individual and collective contexts and can be driven by a variety of factors such as curiosity, passion, or the desire for recognition.

Creativity also has the potential to bring about positive change in the world. Throughout history, creative individuals and groups have used their talents to address social, political, and environmental challenges, often inspiring others to take action and make a difference. From the abolitionist movement to the civil rights movement to the environmental movement, creativity has played a crucial role in promoting social justice and positive change.

Despite the many benefits of creativity, it is not without its challenges. The process of creative expression can be fraught with obstacles, from self-doubt and insecurity to external pressures and constraints. Moreover, not all creative ideas are successful or well-received, and many artists and innovators face rejection and criticism as they seek to bring their ideas to fruition. Despite these challenges, however, the human drive to create and imagine persists.

Individuals and groups continue to harness the power of creativity to make a difference in the world. From the humblest amateur artist to the most celebrated innovator, the human capacity for creativity remains one of our greatest strengths and sources of inspiration.

SubQuestion No : 47

Q.47 What is the main focus of the passage?

- Ans**
- 1. The complexities and challenges of cognitive processes.
 - 2. The mysteries of the human mind.
 - 3. The nature of creativity, its benefits and challenges.
 - 4. The nature of fancy and imagination.

Question ID : 264330165134

Option 1 ID : 264330647644

Option 2 ID : 264330647643

Option 3 ID : 264330647646

Option 4 ID : 264330647645

Status : Answered

Chosen Option : 3

Comprehension:

Read the given passage carefully and answer the questions that follow.

Throughout history, the intricacies of the human mind have been the subject of fascination and inquiry. From ancient philosophers to modern-day neuroscientists, the workings of the brain have been studied and analysed in an attempt to unravel its mysteries. However, despite centuries of research, much remains unknown about the complexities of human cognition and consciousness.

One of the most fascinating aspects of the human mind is its ability to create and imagine. The human mind has the capacity to conceptualise and bring into being ideas that were previously unknown or unimaginable, from artistic expression to scientific discovery. The process of creativity has captured the attention of scholars and laypeople alike and is both enigmatic and awe-inspiring.

There have been many theories proposed to explain the process of creativity. Some suggest that it is a purely subconscious process, while others argue that creativity is a result of conscious effort and intentional problem-solving. Still others suggest that creativity arises from a combination of conscious and subconscious processes.

Despite the ongoing debate over the nature of creativity, one thing is clear: it is a multifaceted and complex phenomenon. Creativity can manifest in a wide range of human activities, from the creation of art and literature to the development of scientific theories and inventions. It can occur in both individual and collective contexts and can be driven by a variety of factors such as curiosity, passion, or the desire for recognition.

Creativity also has the potential to bring about positive change in the world. Throughout history, creative individuals and groups have used their talents to address social, political, and environmental challenges, often inspiring others to take action and make a difference. From the abolitionist movement to the civil rights movement to the environmental movement, creativity has played a crucial role in promoting social justice and positive change.

Despite the many benefits of creativity, it is not without its challenges. The process of creative expression can be fraught with obstacles, from self-doubt and insecurity to external pressures and constraints. Moreover, not all creative ideas are successful or well-received, and many artists and innovators face rejection and criticism as they seek to bring their ideas to fruition. Despite these challenges, however, the human drive to create and imagine persists.

Individuals and groups continue to harness the power of creativity to make a difference in the world. From the humblest amateur artist to the most celebrated innovator, the human capacity for creativity remains one of our greatest strengths and sources of inspiration.

SubQuestion No : 48

Q.48 Which of the following factors can drive creativity?

- Ans
- 1. Self-doubt and insecurity
 - 2. Curiosity and passion
 - 3. Fancy and imagination
 - 4. External pressures and constraints

Question ID : 264330165135

Option 1 ID : 264330647647

Option 2 ID : 264330647649

Option 3 ID : 264330647650

Option 4 ID : 264330647648

Status : Not Answered

Chosen Option : --

Comprehension:

Read the given passage carefully and answer the questions that follow.

Throughout history, the intricacies of the human mind have been the subject of fascination and inquiry. From ancient philosophers to modern-day neuroscientists, the workings of the brain have been studied and analysed in an attempt to unravel its mysteries. However, despite centuries of research, much remains unknown about the complexities of human cognition and consciousness.

One of the most fascinating aspects of the human mind is its ability to create and imagine. The human mind has the capacity to conceptualise and bring into being ideas that were previously unknown or unimaginable, from artistic expression to scientific discovery. The process of creativity has captured the attention of scholars and laypeople alike and is both enigmatic and awe-inspiring.

There have been many theories proposed to explain the process of creativity. Some suggest that it is a purely subconscious process, while others argue that creativity is a result of conscious effort and intentional problem-solving. Still others suggest that creativity arises from a combination of conscious and subconscious processes.

Despite the ongoing debate over the nature of creativity, one thing is clear: it is a multifaceted and complex phenomenon. Creativity can manifest in a wide range of human activities, from the creation of art and literature to the development of scientific theories and inventions. It can occur in both individual and collective contexts and can be driven by a variety of factors such as curiosity, passion, or the desire for recognition.

Creativity also has the potential to bring about positive change in the world. Throughout history, creative individuals and groups have used their talents to address social, political, and environmental challenges, often inspiring others to take action and make a difference. From the abolitionist movement to the civil rights movement to the environmental movement, creativity has played a crucial role in promoting social justice and positive change.

Despite the many benefits of creativity, it is not without its challenges. The process of creative expression can be fraught with obstacles, from self-doubt and insecurity to external pressures and constraints. Moreover, not all creative ideas are successful or well-received, and many artists and innovators face rejection and criticism as they seek to bring their ideas to fruition. Despite these challenges, however, the human drive to create and imagine persists.

Individuals and groups continue to harness the power of creativity to make a difference in the world. From the humblest amateur artist to the most celebrated innovator, the human capacity for creativity remains one of our greatest strengths and sources of inspiration.

SubQuestion No : 49

Q.49 According to the passage, what is one of the challenges of creative expression?

- Ans
- 1. The absence of external pressures and constraints.
 - 2. The limited capacity of the human mind.
 - 3. The lack of appreciation for creative ideas.
 - 4. The overemphasis on conscious problem-solving.

Question ID : 264330165136

Option 1 ID : 264330647654

Option 2 ID : 264330647652

Option 3 ID : 264330647651

Option 4 ID : 264330647653

Status : Not Answered

Chosen Option : --

Comprehension:

Read the given passage carefully and answer the questions that follow.

Throughout history, the intricacies of the human mind have been the subject of fascination and inquiry. From ancient philosophers to modern-day neuroscientists, the workings of the brain have been studied and analysed in an attempt to unravel its mysteries. However, despite centuries of research, much remains unknown about the complexities of human cognition and consciousness.

One of the most fascinating aspects of the human mind is its ability to create and imagine. The human mind has the capacity to conceptualise and bring into being ideas that were previously unknown or unimaginable, from artistic expression to scientific discovery. The process of creativity has captured the attention of scholars and laypeople alike and is both enigmatic and awe-inspiring.

There have been many theories proposed to explain the process of creativity. Some suggest that it is a purely subconscious process, while others argue that creativity is a result of conscious effort and intentional problem-solving. Still others suggest that creativity arises from a combination of conscious and subconscious processes.

Despite the ongoing debate over the nature of creativity, one thing is clear: it is a multifaceted and complex phenomenon. Creativity can manifest in a wide range of human activities, from the creation of art and literature to the development of scientific theories and inventions. It can occur in both individual and collective contexts and can be driven by a variety of factors such as curiosity, passion, or the desire for recognition.

Creativity also has the potential to bring about positive change in the world. Throughout history, creative individuals and groups have used their talents to address social, political, and environmental challenges, often inspiring others to take action and make a difference. From the abolitionist movement to the civil rights movement to the environmental movement, creativity has played a crucial role in promoting social justice and positive change.

Despite the many benefits of creativity, it is not without its challenges. The process of creative expression can be fraught with obstacles, from self-doubt and insecurity to external pressures and constraints. Moreover, not all creative ideas are successful or well-received, and many artists and innovators face rejection and criticism as they seek to bring their ideas to fruition. Despite these challenges, however, the human drive to create and imagine persists.

Individuals and groups continue to harness the power of creativity to make a difference in the world. From the humblest amateur artist to the most celebrated innovator, the human capacity for creativity remains one of our greatest strengths and sources of inspiration.

SubQuestion No : 50

Q.50 Select the most appropriate **ANTONYM** for the word 'fraught'.

- Ans
- 1. Tranquil
 - 2. Calm
 - 3. Beset
 - 4. Devoid

Question ID : 264330165137

Option 1 ID : 264330647656

Option 2 ID : 264330647658

Option 3 ID : 264330647655

Option 4 ID : 264330647657

Status : Not Answered

Chosen Option : --

Sub Inspector in Delhi Police and Central Armed Police Forces Examination 2023 Paper I



Prepare 50% Faster

Roll Number	
Candidate Name	
Venue Name	MIET Meerut - CAMPUS - 1
Exam Date	03/10/2023
Exam Time	4:00 PM - 6:00 PM
Subject	SICPO Paper I 2023

Section : General Intelligence and Reasoning

Q.1 Select the option that represents the letters that, when sequentially placed from left to right in the blanks below, will complete the letter series.

L _ _ A _ _ S _ _ K _ _ L _ _ A

- Ans
- 1. ASLKALSAKA
 - 2. KSKKALSAKA
 - 3. KSLKALSAKS
 - 4. KSLKALSAKA

Question ID : 26433079375
Option 1 ID : 264330311491
Option 2 ID : 264330311489
Option 3 ID : 264330311490
Option 4 ID : 264330311488
Status : Answered
Chosen Option : 3

Q.2 Select the set in which the numbers are related in the same way as the numbers of the given sets.

(NOTE : Operations should be performed on the whole numbers, without breaking down the numbers into its constituent digits. E.g. 13 – Operations on 13 such as adding /subtracting /multiplying etc. to 13 can be performed. Breaking down 13 into 1 and 3 and then performing mathematical operations on 1 and 3 is not allowed.)

(6, 8, 106)
(7, 11, 177)

- Ans
- 1. (8, 7, 119)
 - 2. (9, 8, 154)
 - 3. (5, 9, 101)
 - 4. (7, 9, 136)

Question ID : 26433069114
Option 1 ID : 264330270971
Option 2 ID : 264330270969
Option 3 ID : 264330270970
Option 4 ID : 264330270968
Status : Answered
Chosen Option : 2



Prepare 50% Faster

Q.3 Select the correct mirror image of the given figure when the mirror is placed at MN as shown.



- Ans
- ✓ 1. e s 2 4 m l
 - ✗ 2. e s 4 5 m l
 - ✗ 3. e s 2 4 w l
 - ✗ 4. J m 4 5 a e

Question ID : 26433055953

Option 1 ID : 264330218798

Option 2 ID : 264330218799

Option 3 ID : 264330218796

Option 4 ID : 264330218797

Status : Answered

Chosen Option : 1

Q.4 A @ B means 'A is the husband of B'
A & B means 'A is the mother of B'
A # B means 'A is the daughter of B'
If D & G @ F & E @ H, then how is G related to H?

- Ans
- ✓ 1. Husband's father
 - ✗ 2. Husband's mother
 - ✗ 3. Mother
 - ✗ 4. Father

Question ID : 264330126023

Option 1 ID : 264330493765

Option 2 ID : 264330493764

Option 3 ID : 264330493767

Option 4 ID : 264330493766

Status : Answered

Chosen Option : 1

Q.5 In a certain code language, 'TOWER' is written as 'INGYL' and 'SIGHT' is written as 'JTWVJ'. How will 'BRING' be written in that language?

- Ans
- ✗ 1. LWYDB
 - ✗ 2. ACTBE
 - ✗ 3. KRPJS
 - ✓ 4. AKUPW

Question ID : 26433074756

Option 1 ID : 264330293115

Option 2 ID : 264330293114

Option 3 ID : 264330293112

Option 4 ID : 264330293113

Status : Not Attempted and Marked For Review

Chosen Option : --

Q.6 If 'x' means '-', '+' means '÷', '-' means '+', and '÷' means 'x', what will be the value of the following expression?

$$40 + \{[(24 - 12) \times (2 \div 2)] + (18 \times 10)\}$$

Ans 1. 10

2. 20

3. 1

4. 5

Question ID : 264330129641

Option 1 ID : 264330507932

Option 2 ID : 264330507933

Option 3 ID : 264330507930

Option 4 ID : 264330507931

Status : Answered

Chosen Option : 1

Q.7 In this question, three statements are given, followed by two conclusions numbered I and II. Assuming the statements to be true, even if they seem to be at variance with commonly known facts, decide which of the conclusions logically follows/follow from the statements.

Statements:

I. No dean is a teacher.

II. All teachers are professors.

III. No professor is a lecturer.

Conclusions:

I. Some deans are lecturers.

II. Some teachers are lecturers.

Ans 1. Only conclusion II follows

2. Only conclusion I follows

3. Both conclusions I and II follow

4. Neither conclusion I nor II follows

Question ID : 264330104076

Option 1 ID : 264330408606

Option 2 ID : 264330408605

Option 3 ID : 264330408607

Option 4 ID : 264330408608

Status : Answered

Chosen Option : 4

Q.8 Select the correct combination of mathematical signs to sequentially replace the * signs and to balance the given equation.

$$42 * 7 * 3 * 2 * 13 * 7$$

Ans 1. ÷, x, -, =, x

2. +, =, ÷, x, +

3. ÷, x, =, +, +

4. ÷, x, +, =, +

Question ID : 264330132053

Option 1 ID : 264330517309

Option 2 ID : 264330517308

Option 3 ID : 264330517307

Option 4 ID : 264330517310

Status : Answered

Chosen Option : 4

Q.9 In a certain code language, 'Here we go' is coded as 'asa te du' and 'We can go' is coded as 'du mu asa'. What is the code for the word 'Here'?

- Ans
- 1. mu
 - 2. asa
 - 3. du
 - 4. te

Question ID : 26433074768
Option 1 ID : 264330293163
Option 2 ID : 264330293160
Option 3 ID : 264330293162
Option 4 ID : 264330293161
Status : Answered
Chosen Option : 4

Q.10 Three of the following letter-clusters are alike in some manner and one is different. Select the one that is different.

- Ans
- 1. QJPK
 - 2. KOLN
 - 3. MQNP
 - 4. XBYA

Question ID : 264330145348
Option 1 ID : 264330569648
Option 2 ID : 264330569647
Option 3 ID : 264330569650
Option 4 ID : 264330569649
Status : Answered
Chosen Option : 1

Q.11 Select the correct option that indicates the arrangement of the given words in the order in which they appear in an English dictionary.

1. Glory
2. Glossary
3. Globe
4. Gloss
5. Glow
6. Gloomy

- Ans
- 1. 3, 1, 6, 4, 2, 5
 - 2. 3, 6, 1, 2, 4, 5
 - 3. 3, 6, 1, 4, 2, 5
 - 4. 6, 3, 1, 4, 2, 5

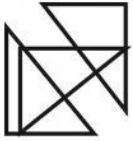
Question ID : 264330145378
Option 1 ID : 264330569768
Option 2 ID : 264330569770
Option 3 ID : 264330569767
Option 4 ID : 264330569769
Status : Answered
Chosen Option : 3

Q.12 If '+' means '-', '-' means '+', '÷' means '×' and '×' means '+', then what will come in place of the (?) in the following equation?
 $15 \div 405 - 3 + 25 \times 5 = ?$

- Ans
- 1. 1890
 - 2. 2000
 - 3. 2005
 - 4. 1889

Question ID : 264330114251
Option 1 ID : 264330449091
Option 2 ID : 264330449089
Option 3 ID : 264330449090
Option 4 ID : 264330449092
Status : Answered
Chosen Option : 3

Q.13 Select the option that is embedded in the given figure as its part (rotation is NOT allowed)



Ans

- 1.
- 2.
- 3.
- 4.

Question ID : 264330145468
Option 1 ID : 264330570127
Option 2 ID : 264330570130
Option 3 ID : 264330570129
Option 4 ID : 264330570128
Status : Answered
Chosen Option : 3

Q.14 Two statements are given, followed by two conclusions numbered I and II. Assuming the statements to be true, even if they seem to be at variance with commonly known facts, decide which of the conclusions logically follow(s) from the statements.

Statements:

All cupboards are shelves.

All shelves are drawers.

Conclusions:

I. All cupboards are drawers.

II. All drawers are shelves.

- Ans**
- 1. Neither conclusion I nor II follows
 - 2. Both conclusions I and II follow
 - 3. Only conclusion II follows
 - 4. Only conclusion I follows

Question ID : 26433056710

Option 1 ID : 264330221827

Option 2 ID : 264330221826

Option 3 ID : 264330221825

Option 4 ID : 264330221824

Status : Answered

Chosen Option : 4

Q.15 Which of the following terms will replace the question mark (?) in the given series?
WWWVU , USTQ , ? , QKPI , OGNB

- Ans**
- 1. SQRM
 - 2. SORW
 - 3. SORM
 - 4. SROM

Question ID : 264330102491

Option 1 ID : 264330402396

Option 2 ID : 264330402395

Option 3 ID : 264330402393

Option 4 ID : 264330402394

Status : Answered

Chosen Option : 3

Q.16 In a certain code language, 'CARD' is coded as '3597' and 'DOGS' is coded as '8346'.
What is the code for 'D' in the given code language?

- Ans**
- 1. 4
 - 2. 9
 - 3. 5
 - 4. 3

Question ID : 264330169656

Option 1 ID : 264330665325

Option 2 ID : 264330665324

Option 3 ID : 264330665323

Option 4 ID : 264330665326

Status : Answered

Chosen Option : 4

Q.17 Which figure from the given options would replace the question mark (?) if the following figure series were to be continued?

X	O	△	T	X	O	△	T	
	S		C		□		D	?
T	△	O	X	T	△	O	X	

Ans

✗ 1.

X	O		
	D		
T	△		

✗ 2.

△	O		
	P		
T	X		

✓ 3.

X	O		
	P		
T	△		

✗ 4.

X	T		
	P		
O	△		

Question ID : 264330145484

Option 1 ID : 264330570192

Option 2 ID : 264330570191

Option 3 ID : 264330570193

Option 4 ID : 264330570194

Status : Answered

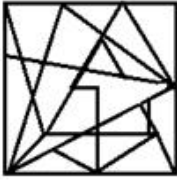
Chosen Option : 3

Q.18 Select the option figure in which the given figure is embedded (rotation is NOT allowed).

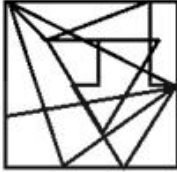


Ans

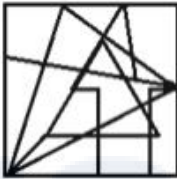
1.



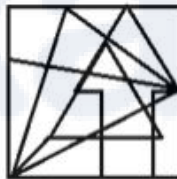
2.



3.



4.



Question ID : 264330145472

Option 1 ID : 264330570146

Option 2 ID : 264330570145

Option 3 ID : 264330570144

Option 4 ID : 264330570143

Status : Answered

Chosen Option : 4

Q.19 In a certain code language, 'BED' is coded as 9 and 'TABLE' is coded as 25. How will 'RECLINER' be coded in the same language?

Ans 1. 58

2. 72

3. 36

4. 64

Question ID : 264330132207

Option 1 ID : 264330517926

Option 2 ID : 264330517925

Option 3 ID : 264330517923

Option 4 ID : 264330517924

Status : Answered

Chosen Option : 4

Q.20 Six students are sitting around a circular table facing the centre. A is an immediate neighbour of both E and D. E sits third to the right of C. D sits third to the left of F. E is an immediate neighbour of F. B sits second to the left of E. Who sits to the immediate left of C?

- Ans
- 1. B
 - 2. D
 - 3. E
 - 4. A

Question ID : 26433068167

Option 1 ID : 264330267181

Option 2 ID : 264330267182

Option 3 ID : 264330267183

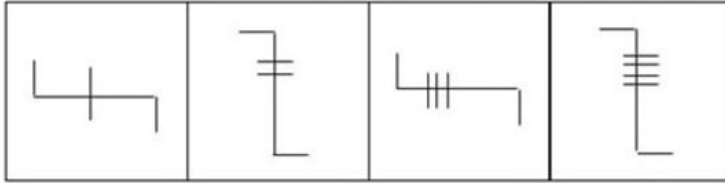
Option 4 ID : 264330267180

Status : Answered

Chosen Option : 2

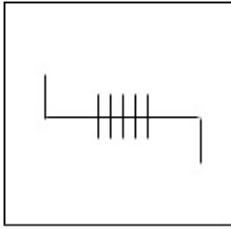


Q.21 Which of the given figures when placed in the 5th position would continue the series that is established by the first four figures?

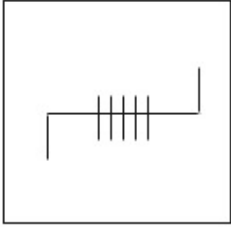


Ans

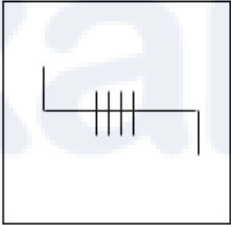
✓ 1.



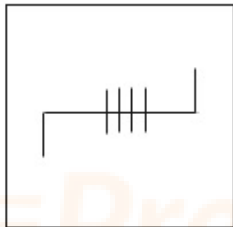
✗ 2.



✗ 3.



✗ 4.



Question ID : 26433087303

Option 1 ID : 264330342851

Option 2 ID : 264330342850

Option 3 ID : 264330342849

Option 4 ID : 264330342852

Status : Answered

Chosen Option : 1

Q.22 Given below are two statements and two conclusions. Take the statements to be true even if they are at variance with commonly known facts, and decide whether the conclusion(s) follow(s) the given statements.

Statements:

All dogs are cats.

Some cats are not dolls.

Conclusions:

I. All dolls are cats.

II. Some cats are dogs.

- Ans**
- 1. Only conclusion II follows
 - 2. Only conclusion I follows
 - 3. Both the conclusions follow
 - 4. Neither conclusion I nor II follows

Question ID : 26433056638

Option 1 ID : 264330221537

Option 2 ID : 264330221536

Option 3 ID : 264330221538

Option 4 ID : 264330221539

Status : Answered

Chosen Option : 1

Q.23 If A denotes '+', B denotes '×', C denotes '−', and D denotes '÷', then what will be the value of the following equation?
 $80 C 16 B 4 A 96 D 4 = ?$

- Ans**
- 1. 37
 - 2. 54
 - 3. 120
 - 4. 40

Question ID : 264330129788

Option 1 ID : 264330508383

Option 2 ID : 264330508384

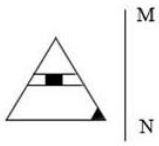
Option 3 ID : 264330508385

Option 4 ID : 264330508386

Status : Answered

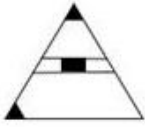
Chosen Option : 4

Q.24 Select the correct mirror image of the given figure when the mirror is placed at line MN as shown.

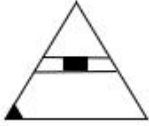


Ans

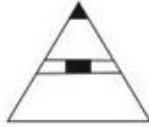
✗ 1.



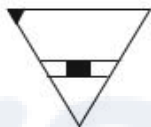
✓ 2.



✗ 3.



✗ 4.



Question ID : 26433056620
Option 1 ID : 264330221465
Option 2 ID : 264330221467
Option 3 ID : 264330221464
Option 4 ID : 264330221466

Status : Answered

Chosen Option : 2

Q.25 If '+' means '÷', '-' means '×', '×' means '-', and '÷' means '+', then what will be the value of the following expression?
 $108 \times 343 + 7 - 2 \div 13 = ?$

Ans ✓ 1. 23

✗ 2. 19

✗ 3. 28

✗ 4. 44

Question ID : 264330101247
Option 1 ID : 264330397535
Option 2 ID : 264330397533
Option 3 ID : 264330397534
Option 4 ID : 264330397536

Status : Answered

Chosen Option : 1

Q.26 Four letter-clusters have been given, out of which three are alike in some manner and one is different. Select the odd letter-cluster.

- Ans 1. SUPT
 2. JLGK
 3. EHBG
 4. PRMQ

Question ID : 264330180756
Option 1 ID : 264330708991
Option 2 ID : 264330708994
Option 3 ID : 264330708992
Option 4 ID : 264330708993
Status : Answered
Chosen Option : 3

Q.27 'C @ D' means 'C is the mother of D'.
'C \$ D' means 'C is the brother of D'.
'C # D' means 'C is the sister of D'.
'C * D' means 'C is the father of D'.
If V \$ Y @ G * F, then how is Y related to F?

- Ans 1. Father's mother
 2. Sister
 3. Father's sister
 4. Brother

Question ID : 264330145389
Option 1 ID : 264330569813
Option 2 ID : 264330569811
Option 3 ID : 264330569812
Option 4 ID : 264330569814
Status : Answered
Chosen Option : 1

Q.28 Select the option that is related to the third word in the same way as the second word is related to the first word.

(The words must be considered as meaningful words and must not be related to each other based on the number of letters/number of consonants/vowels in the word.)

Cat : Paw :: Crow : ?

- Ans 1. Hoff
 2. Wings
 3. Beak
 4. Claw

Question ID : 26433087293
Option 1 ID : 264330342812
Option 2 ID : 264330342809
Option 3 ID : 264330342810
Option 4 ID : 264330342811
Status : Not Attempted and Marked For Review
Chosen Option : --

Q.29 Which of the following numbers will replace the question mark (?) in the given series?
13, 14, -2, 79, -177 ?

- Ans
- 1. 424
 - 2. 528
 - 3. 608
 - 4. 448

Question ID : 26433069197

Option 1 ID : 264330271302

Option 2 ID : 264330271301

Option 3 ID : 264330271300

Option 4 ID : 264330271303

Status : Not Attempted and
Marked For Review

Chosen Option : --

Q.30 In a certain code language, 'How are you' is coded as 'si de tu' and 'You are fine' is coded as 'de mu si'. What is the code for the word 'How'?

- Ans
- 1. mu
 - 2. tu
 - 3. de
 - 4. si

Question ID : 26433074767

Option 1 ID : 264330293159

Option 2 ID : 264330293158

Option 3 ID : 264330293157

Option 4 ID : 264330293156

Status : Answered

Chosen Option : 2

Q.31 Manoj starts from point A and drives X km towards the south and then turns left and drives Y km. He then takes a right turn and drives for 4 km to reach point D. If Manoj drove a total of 17 km between Points A and D, and both X and Y are perfect squares where $X > Y$, then what is the value of X ?

- Ans
- 1. 4
 - 2. 11
 - 3. 5
 - 4. 9

Question ID : 26433097237

Option 1 ID : 264330381648

Option 2 ID : 264330381647

Option 3 ID : 264330381646

Option 4 ID : 264330381645

Status : Answered

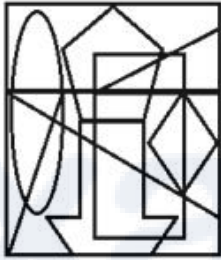
Chosen Option : 4

Q.32 If '+' means '-', '-' means 'x', 'x' means '÷' and '÷' means '+', what will come in place of '?' in the following equation?
 $42 \times 7 - 11 \div 57 + 10 = ?$

- Ans
- 1. 133
 - 2. 113
 - 3. 103
 - 4. 123

Question ID : 264330101150
Option 1 ID : 264330397147
Option 2 ID : 264330397146
Option 3 ID : 264330397148
Option 4 ID : 264330397145
Status : Answered
Chosen Option : 2

Q.33 Select the option figure which is embedded in the given figure as its part (rotation is NOT allowed).



- Ans
- 1.
 - 2.
 - 3.
 - 4.

Question ID : 264330145461
Option 1 ID : 264330570102
Option 2 ID : 264330570100
Option 3 ID : 264330570101
Option 4 ID : 264330570099
Status : Answered
Chosen Option : 2

Q.34 Which of the following terms will replace the question mark (?) in the given series?

PMRO NKTQ LIVS ? HEZW

- Ans
- 1. JGUX
 - 2. GJXU
 - 3. JGVU
 - 4. JGXU

Question ID : 26433085318

Option 1 ID : 264330334973

Option 2 ID : 264330334976

Option 3 ID : 264330334974

Option 4 ID : 264330334975

Status : Answered

Chosen Option : 4

Q.35 Which of the following numbers will replace the question mark (?) in the given series?

93, ?, 102, 111, 123, 138

- Ans
- 1. 95
 - 2. 96
 - 3. 98
 - 4. 97

Question ID : 26433091013

Option 1 ID : 264330357462

Option 2 ID : 264330357464

Option 3 ID : 264330357463

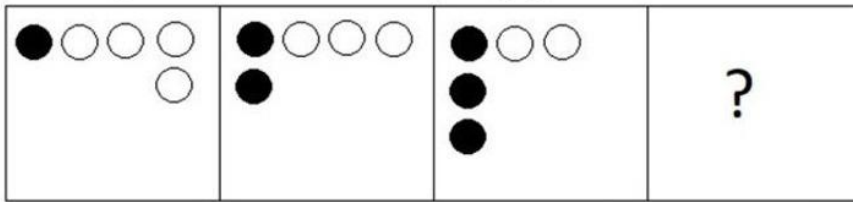
Option 4 ID : 264330357461

Status : Answered

Chosen Option : 2

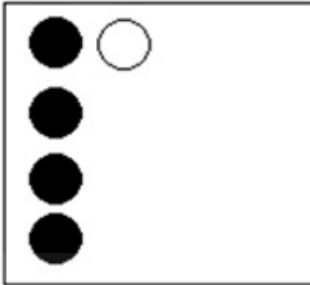
Prepare 50% Faster

Q.36 Select the figure that will come next in the following figure series.

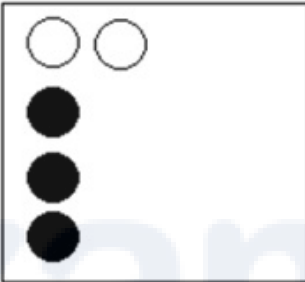


Ans

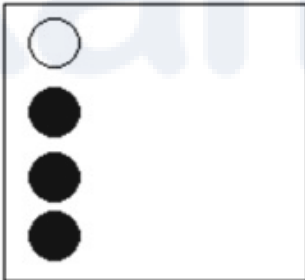
✓ 1.



✗ 2.



✗ 3.



✗ 4.



Question ID : 26433087074

Option 1 ID : 264330341938

Option 2 ID : 264330341937

Option 3 ID : 264330341940

Option 4 ID : 264330341939

Status : Answered

Chosen Option : 1

Q.37 Select the option that represents the correct order of the given words as they would appear in an English dictionary?

1. Jalopy
2. Jabber
3. Jackpot
4. Jackdaw
5. Jackal

Ans 1. 2, 5, 4, 3, 1

2. 4, 5, 2, 3, 1

3. 3, 2, 4, 5, 1

4. 2, 4, 3, 1, 5

Question ID : 26433067240

Option 1 ID : 264330263472

Option 2 ID : 264330263475

Option 3 ID : 264330263474

Option 4 ID : 264330263473

Status : Answered

Chosen Option : 1

Q.38 A boy walks 15 m north, turns right and walks 20 m. Again, he turns right and walks 15 m. Finally, he turns to his left and moves 20 m. What is the distance now from his original position?

Ans 1. 40 m

2. 46 m

3. 50 m

4. 45 m

Question ID : 26433082762

Option 1 ID : 264330324881

Option 2 ID : 264330324883

Option 3 ID : 264330324884

Option 4 ID : 264330324882

Status : Answered

Chosen Option : 1

Q.39 Which of the following numbers will replace the question mark (?) in the given series?
38, 64, 98, 140, ?

Ans 1. 190

2. 186

3. 188

4. 192

Question ID : 26433057329

Option 1 ID : 264330224301

Option 2 ID : 264330224303

Option 3 ID : 264330224300

Option 4 ID : 264330224302

Status : Answered

Chosen Option : 1

Q.40 Six students Prateek, Sameer, Kabir, Ziya, Joseph, Kiran are sitting around a circular table facing the centre (not necessarily in the same order). Prateek is an immediate neighbour of both Sameer and Kabir. Ziya is sitting second to the right of Sameer. Kiran is sitting third to the left of Kabir. Joseph is an immediate neighbour of both Ziya and Kabir.

Who is sitting to the immediate left of Joseph?

- Ans**
- 1. Kabir
 - 2. Ziya
 - 3. Sameer
 - 4. Kiran

Question ID : 26433082276
 Option 1 ID : 264330322938
 Option 2 ID : 264330322937
 Option 3 ID : 264330322940
 Option 4 ID : 264330322939
 Status : Answered
 Chosen Option : 2

Q.41 Select the set in which the numbers are related in the same way as are the numbers of the following sets.

(NOTE : Operations should be performed on the whole numbers, without breaking down the numbers into its constituent digits. E.g. 13 – Operations on 13 such as adding /subtracting /multiplying etc. to 13 can be performed. Breaking down 13 into 1 and 3 and then performing mathematical operations on 1 and 3 is NOT allowed)

(125, 87, 49), (236, 198, 160)

- Ans**
- 1. (194, 162, 124)
 - 2. (222, 186, 140)
 - 3. (166, 128, 101)
 - 4. (277, 239, 201)

Question ID : 264330145302
 Option 1 ID : 264330569464
 Option 2 ID : 264330569465
 Option 3 ID : 264330569463
 Option 4 ID : 264330569466
 Status : Answered
 Chosen Option : 4

Q.42 Which two mathematical signs should be interchanged to make the given equation correct?

$$(63 \times 21) + 8 + 99 \times 11 \div 16 + (12 \times 4) = 158$$

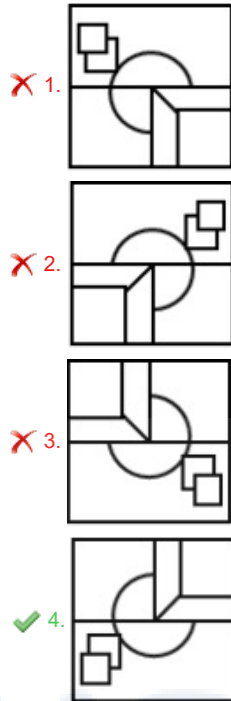
- Ans**
- 1. + and –
 - 2. × and +
 - 3. × and –
 - 4. ÷ and ×

Question ID : 264330145308
 Option 1 ID : 264330569489
 Option 2 ID : 264330569488
 Option 3 ID : 264330569490
 Option 4 ID : 264330569487
 Status : Answered
 Chosen Option : 4

Q.43 Select the option in which the given figure is embedded (rotation is NOT allowed).



Ans



Question ID : 264330126083

Option 1 ID : 264330494004

Option 2 ID : 264330494007

Option 3 ID : 264330494005

Option 4 ID : 264330494006

Status : Answered

Chosen Option : 4

Q.44 Two statements are given followed by two conclusions numbered I and II. Assuming the statements to be true, even if they seem to be at variance with commonly known facts, decide which of the conclusions logically follow(s) from the statements.

Statements:

All goods are services.

No service is a delivery.

Conclusions:

I. No good is a delivery.

II. Some goods are deliveries.

Ans 1. Neither conclusion I nor II follows

2. Both conclusions I and II follow

3. Only conclusion II follows

4. Only conclusion I follows

Question ID : 26433058041

Option 1 ID : 264330227151

Option 2 ID : 264330227150

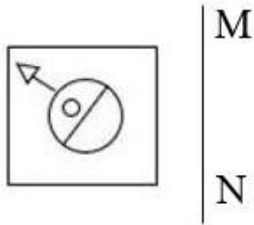
Option 3 ID : 264330227149

Option 4 ID : 264330227148

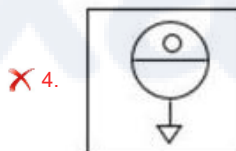
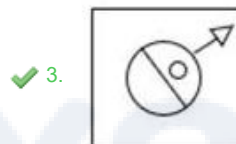
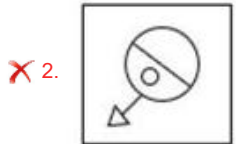
Status : Answered

Chosen Option : 4

Q.45 Select the correct mirror image of the given figure when the mirror is placed at line MN as shown.



Ans



Question ID : 26433056626
Option 1 ID : 264330221488
Option 2 ID : 264330221489
Option 3 ID : 264330221491
Option 4 ID : 264330221490
Status : Answered
Chosen Option : 3

Q.46 Which of the following numbers will replace the question mark (?) in the given series?
1024, 256, 64, ?, 4

- Ans
- ✗ 1. 32
 - ✗ 2. 34
 - ✗ 3. 36
 - ✓ 4. 16

Question ID : 26433092492
Option 1 ID : 264330363257
Option 2 ID : 264330363258
Option 3 ID : 264330363259
Option 4 ID : 264330363260
Status : Answered
Chosen Option : 4

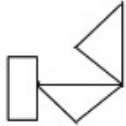
Q.47 Select the option that is related to the fourth term in the same way as the first term is related to the second term and the fifth term is related to the sixth term.

5 : 21 :: ? : 252 :: 27 : 725

- Ans
- 1. 26
 - 2. 10
 - 3. 16
 - 4. 12

Question ID : 26433079356
Option 1 ID : 264330311414
Option 2 ID : 264330311412
Option 3 ID : 264330311413
Option 4 ID : 264330311415
Status : Answered
Chosen Option : 3

Q.48 Select the option in which the given figure is embedded (rotation is NOT allowed).



Ans

- 1.
- 2.
- 3.
- 4.

Question ID : 264330126082
Option 1 ID : 264330494003
Option 2 ID : 264330494002
Option 3 ID : 264330494001
Option 4 ID : 264330494000
Status : Answered
Chosen Option : 2

Q.49 Select the set in which the numbers are related in the same way as are the numbers of the following set.

(NOTE : Operations should be performed on the whole numbers, without breaking down the numbers into its constituent digits. E.g. 13 – Operations on 13 such as adding /subtracting /multiplying etc. to 13 can be performed. Breaking down 13 into 1 and 3 and then performing mathematical operations on 1 and 3 is NOT allowed)

(5, 4, 405)

(7, 3, 500)

Ans 1. (4, 1, 125)

2. (3, 2, 145)

3. (4, 5, 850)

4. (5, 8, 789)

Question ID : 264330145318

Option 1 ID : 264330569530

Option 2 ID : 264330569528

Option 3 ID : 264330569529

Option 4 ID : 264330569527

Status : Not Attempted and Marked For Review

Chosen Option : --

Q.50 Select the option that is related to the fifth letter-cluster in the same way as the second letter-cluster is related to the first letter-cluster and the fourth letter-cluster is related to the third letter-cluster.

CREATION : ETGCVKQP :: UNIVERSE : WPKXGTUG :: PLANET : ?

Ans 1. RNCPGV

2. RCPNGV

3. RPGVNC

4. RPCGVN

Question ID : 264330145396

Option 1 ID : 264330569840

Option 2 ID : 264330569839

Option 3 ID : 264330569841

Option 4 ID : 264330569842

Status : Answered

Chosen Option : 1

Section : General Knowledge and General Awareness

Q.1 Identify the dam that is located in South India.

Ans 1. Rihand dam

2. Mettur dam

3. Gandhi Sagar dam

4. Tilaiya dam

Question ID : 264330113264

Option 1 ID : 264330445142

Option 2 ID : 264330445141

Option 3 ID : 264330445144

Option 4 ID : 264330445143

Status : Not Attempted and Marked For Review

Chosen Option : --

Q.2 Who is the author of the novel 'Before We Visit the Goddess'?

Ans 1. Chitra Banerjee Divakaruni

2. Kiran Doshi

3. Arundhati Roy

4. Jhumpa Lahiri

Question ID : 264330145173

Option 1 ID : 264330568949

Option 2 ID : 264330568947

Option 3 ID : 264330568950

Option 4 ID : 264330568948

Status : Not Attempted and
Marked For Review

Chosen Option : --

Q.3 When the President of India keeps a bill (except money bill and constitutional amendment bill) pending for an indefinite period, it is called _____.

Ans 1. pocket veto of the President

2. suspensive veto of the President

3. absolute veto of the President

4. amendatory veto of the President

Question ID : 264330113415

Option 1 ID : 264330445745

Option 2 ID : 264330445746

Option 3 ID : 264330445747

Option 4 ID : 264330445748

Status : Not Attempted and
Marked For Review

Chosen Option : --

Q.4 Which of the following union territories has the lowest literacy rate according to the 2011 census?

Ans 1. Delhi

2. Dadra and Nagar Haveli

3. Lakshadweep

4. Daman and Diu

Question ID : 264330109509

Option 1 ID : 264330430315

Option 2 ID : 264330430314

Option 3 ID : 264330430313

Option 4 ID : 264330430316

Status : Answered

Chosen Option : 3

Q.5 Where are Huka Falls located?

- Ans
- 1. Spain
 - 2. Australia
 - 3. New Zealand
 - 4. Germany

Question ID : 26433064473

Option 1 ID : 264330252487

Option 2 ID : 264330252484

Option 3 ID : 264330252485

Option 4 ID : 264330252486

Status : Not Attempted and
Marked For Review

Chosen Option : --

Q.6 A money bill under Article 111 of the Constitution of India, presented to the President for assent, has to be endorsed by a Certificate of the _____ signed by him/her that it is a money bill.

- Ans
- 1. Speaker of the Lok Sabha
 - 2. Secretary General of the Rajya Sabha
 - 3. Deputy Chairman of the Rajya Sabha
 - 4. Secretary General of the Lok Sabha

Question ID : 264330145266

Option 1 ID : 264330569322

Option 2 ID : 264330569320

Option 3 ID : 264330569321

Option 4 ID : 264330569319

Status : Answered

Chosen Option : 1

Q.7 Which state was the host of fifth Khelo India Youth Games 2022?

- Ans
- 1. Madhya Pradesh
 - 2. Uttarakhand
 - 3. Haryana
 - 4. Jharkhand

Question ID : 264330119246

Option 1 ID : 264330467273

Option 2 ID : 264330467272

Option 3 ID : 264330467274

Option 4 ID : 264330467271

Status : Answered

Chosen Option : 2

Q.8 Who among the following is considered as the 'Father of Carnatic Music in India'?

- Ans
- 1. Gopala
 - 2. Purandardas
 - 3. Narayan Tirtha
 - 4. Krishna Bharati

Question ID : 26433074823

Option 1 ID : 264330293381

Option 2 ID : 264330293380

Option 3 ID : 264330293383

Option 4 ID : 264330293382

Status : **Not Attempted and Marked For Review**

Chosen Option : --

Q.9 Terrestrial planets are composed of _____ .

- Ans
- 1. metals and air
 - 2. metals and gas
 - 3. rocks and gas
 - 4. rocks and metals

Question ID : 264330113352

Option 1 ID : 264330445495

Option 2 ID : 264330445493

Option 3 ID : 264330445494

Option 4 ID : 264330445496

Status : **Not Attempted and Marked For Review**

Chosen Option : --

Q.10 Which of the following is considered a capital expense?

- Ans
- 1. Payment of salaries
 - 2. Pension
 - 3. Construction of school buildings
 - 4. Subsidies

Question ID : 264330145243

Option 1 ID : 264330569229

Option 2 ID : 264330569230

Option 3 ID : 264330569227

Option 4 ID : 264330569228

Status : **Not Attempted and Marked For Review**

Chosen Option : --

Q.11 Which Goddess is associated with the Gangaur Festival celebrated in Central and Western India?

- Ans 1. Goddess Saraswati
 2. Goddess Lakshmi
 3. Goddess Parvati
 4. Goddess Kali

Question ID : 264330145142
Option 1 ID : 264330568826
Option 2 ID : 264330568823
Option 3 ID : 264330568825
Option 4 ID : 264330568824
Status : Answered
Chosen Option : 3

Q.12 In which of the following Indian states does the southwest monsoon set first to give rainfall?

- Ans 1. Goa
 2. Andhra Pradesh
 3. Kerala
 4. Tamil Nadu

Question ID : 264330119787
Option 1 ID : 264330469426
Option 2 ID : 264330469423
Option 3 ID : 264330469425
Option 4 ID : 264330469424
Status : Answered
Chosen Option : 3

Q.13 In which year did the 44th Amendment remove the right to property from the list of fundamental rights?

- Ans 1. 1975
 2. 1978
 3. 1981
 4. 1973

Question ID : 264330116398
Option 1 ID : 264330457678
Option 2 ID : 264330457679
Option 3 ID : 264330457680
Option 4 ID : 264330457677
Status : Answered
Chosen Option : 4

Q.14 In which year was the Small Industries Development Bank of India (SIDBI) set up?

- Ans 1. 1990
 2. 1988
 3. 1989
 4. 1987

Question ID : 264330145247
Option 1 ID : 264330569246
Option 2 ID : 264330569244
Option 3 ID : 264330569245
Option 4 ID : 264330569243
Status : Not Answered
Chosen Option : --

Q.15 Which Nobel Laureate conducted an experiment in the late 19th century and observed that a glass tube filled with a low-pressure gas emitted radiation when a voltage was applied between two metal plates?

- Ans
- 1. Victor Francis Hess
 - 2. Philipp Lenard
 - 3. Paul Dirac
 - 4. Hideki Yukawa

Question ID : 264330141665
Option 1 ID : 264330554979
Option 2 ID : 264330554982
Option 3 ID : 264330554980
Option 4 ID : 264330554981
Status : Not Answered
Chosen Option : --

Q.16 Which of the following Articles of the Indian Constitution mentions that all executive actions of the Government of India shall be expressed to be taken in the name of the President?

- Ans
- 1. Article 81
 - 2. Article 67
 - 3. Article 77
 - 4. Article 48

Question ID : 264330139436
Option 1 ID : 264330546177
Option 2 ID : 264330546176
Option 3 ID : 264330546178
Option 4 ID : 264330546175
Status : Answered
Chosen Option : 2

Q.17 Identify the third germinal layer found in triploblastic animals.

- Ans
- 1. Mesoderm
 - 2. Ectoderm
 - 3. Coelom
 - 4. Endoderm

Question ID : 264330145217
Option 1 ID : 264330569126
Option 2 ID : 264330569123
Option 3 ID : 264330569125
Option 4 ID : 264330569124
Status : Not Attempted and Marked For Review
Chosen Option : --

Q.18 What is the metric unit of pressure that is equal to 0.986923 atm?

- Ans 1. Bar
 2. Quart
 3. Gallon
 4. Yard

Question ID : 264330110059

Option 1 ID : 264330432516

Option 2 ID : 264330432513

Option 3 ID : 264330432515

Option 4 ID : 264330432514

Status : Not Attempted and
Marked For Review

Chosen Option : --

Q.19 Famous musician Talvin Singh is associated with playing the _____.

- Ans 1. shehnai
 2. flute
 3. veena
 4. tabla

Question ID : 264330145187

Option 1 ID : 264330569006

Option 2 ID : 264330569005

Option 3 ID : 264330569003

Option 4 ID : 264330569004

Status : Answered

Chosen Option : 3

Q.20 During the year 1991–92, the industrial production recorded a _____ growth of _____.

- Ans 1. negative; 1.1 Percent
 2. positive; 0.6 Percent
 3. positive; 1.1 Percent
 4. negative; 0.9 Percent

Question ID : 264330114279

Option 1 ID : 264330449203

Option 2 ID : 264330449202

Option 3 ID : 264330449204

Option 4 ID : 264330449201

Status : Not Attempted and
Marked For Review

Chosen Option : --

Q.21 Select the correct pair of classical dance and dancer.

- Ans 1. Padma Subrahmanyam – Bharatnatyam
 2. Mallika Sarabhai – Kathak
 3. Jhelum Paranjape – Kuchipudi
 4. K Uma Rama Rao – Odissi

Question ID : 264330141777

Option 1 ID : 264330555428

Option 2 ID : 264330555427

Option 3 ID : 264330555429

Option 4 ID : 264330555430

Status : Answered

Chosen Option : 1

Q.22 In which type of tax is the marginal tax rate higher than the average tax rate?

- Ans
- 1. Digressive
 - 2. Proportional
 - 3. Regressive
 - 4. Progressive

Question ID : 264330141432

Option 1 ID : 264330554065

Option 2 ID : 264330554063

Option 3 ID : 264330554066

Option 4 ID : 264330554064

Status : **Not Attempted and
Marked For Review**

Chosen Option : --

Q.23 Which of the following Governor Generals, under the British rule in India, professionalised, bureaucratised and Europeanised the administration of East India Company?

- Ans
- 1. Lord Canning
 - 2. Lord Cornwallis
 - 3. Warren Hastings
 - 4. Lord Dalhousie

Question ID : 264330165381

Option 1 ID : 264330648605

Option 2 ID : 264330648606

Option 3 ID : 264330648604

Option 4 ID : 264330648603

Status : **Not Attempted and
Marked For Review**

Chosen Option : --

Q.24 Which of the following elements is a member of the actinoid series?

- Ans
- 1. Magnesium
 - 2. Lanthanum
 - 3. Lutetium
 - 4. Thorium

Question ID : 264330131695

Option 1 ID : 264330515881

Option 2 ID : 264330515879

Option 3 ID : 264330515880

Option 4 ID : 264330515882

Status : **Not Attempted and
Marked For Review**

Chosen Option : --

Q.25 'The Great Indian Novel' is written by _____ in which he based 'The Mahabharata' as a framework for his satirical novel.

- Ans 1. Shashi Tharoor
 2. Khushwant Singh
 3. Sarojini Naidu
 4. Kuldip Nayyar

Question ID : 26433071685
Option 1 ID : 264330281167
Option 2 ID : 264330281166
Option 3 ID : 264330281165
Option 4 ID : 264330281164
Status : Answered
Chosen Option : 1

Q.26 Alarinel Valli is an Indian classical dancer and choreographer and a foremost exponent of the _____ dance form of Bharatanatyam.

- Ans 1. Tarangam style
 2. Pandanallur style
 3. Vazhuvoor style
 4. Melattur style

Question ID : 264330145149
Option 1 ID : 264330568854
Option 2 ID : 264330568851
Option 3 ID : 264330568852
Option 4 ID : 264330568853
Status : Not Attempted and Marked For Review
Chosen Option : --

Q.27 In which of the following processes nutrients or contaminants are carried away by water or moved into the lower layer of the soil?

- Ans 1. Ploughing
 2. Leaching
 3. Sowing
 4. Bleaching

Question ID : 264330163195
Option 1 ID : 264330640094
Option 2 ID : 264330640093
Option 3 ID : 264330640092
Option 4 ID : 264330640091
Status : Not Attempted and Marked For Review
Chosen Option : --

Q.28 In July 2018, an experiment aboard the International Space Station cooled a cloud of atoms of which chemical element to one ten-millionth of one Kelvin above absolute zero, forming a Bose-Einstein Condensate in space?

- Ans
- 1. Rubidium
 - 2. Plutonium
 - 3. Radium
 - 4. Thorium

Question ID : 264330110065

Option 1 ID : 264330432539

Option 2 ID : 264330432538

Option 3 ID : 264330432537

Option 4 ID : 264330432540

Status : **Not Attempted and Marked For Review**

Chosen Option : --

Q.29 Malavikagnimitra, a drama of the 5th century CE, was written by _____.

- Ans
- 1. Pingala
 - 2. Kalidasa
 - 3. Harisena
 - 4. Bhavabhuti

Question ID : 264330165577

Option 1 ID : 264330649388

Option 2 ID : 264330649387

Option 3 ID : 264330649389

Option 4 ID : 264330649390

Status : **Not Attempted and Marked For Review**

Chosen Option : --

Q.30 Who was the first winner of the Arjuna Award in Kabaddi?

- Ans
- 1. Sahanand Mahadev Shetty
 - 2. Manjeet Chhillar
 - 3. BC Ramesh
 - 4. Bholanath Guin

Question ID : 26433092338

Option 1 ID : 264330362649

Option 2 ID : 264330362652

Option 3 ID : 264330362650

Option 4 ID : 264330362651

Status : **Not Attempted and Marked For Review**

Chosen Option : --

Q.31 The number of Pawn in chess is_____.

Ans 1. 16

2. 14

3. 17

4. 15

Question ID : 264330109730

Option 1 ID : 264330431199

Option 2 ID : 264330431197

Option 3 ID : 264330431200

Option 4 ID : 264330431198

Status : Answered

Chosen Option : 1

Q.32 Who made the use of Gun powder common in North India to defeat enemies?

Ans 1. Ibrahim Lodi

2. Babur

3. Daulat Khan Lodi

4. Rana Sanga

Question ID : 264330109023

Option 1 ID : 264330428370

Option 2 ID : 264330428371

Option 3 ID : 264330428372

Option 4 ID : 264330428369

Status : Answered

Chosen Option : 2

Q.33 By which Indian Constitutional Amendment Act was the 11th fundamental duty added in the Indian Constitution?

Ans 1. 87th Constitutional Amendment Act

2. 88th Constitutional Amendment Act

3. 85th Constitutional Amendment Act

4. 86th Constitutional Amendment Act

Question ID : 264330111513

Option 1 ID : 264330438139

Option 2 ID : 264330438140

Option 3 ID : 264330438137

Option 4 ID : 264330438138

Status : Answered

Chosen Option : 1

Q.34 Which of the following Acts prevents disrespect to the National Flag and National Anthem?

Ans 1. Protection of National Honour Act, 1996

2. Civil Liberties Act, 2001

3. Unlawful Activities (Prevention) Act, 2006

4. Prevention of Insults to National Honour Act, 1971

Question ID : 264330114751

Option 1 ID : 264330451089

Option 2 ID : 264330451091

Option 3 ID : 264330451092

Option 4 ID : 264330451090

Status : Not Attempted and Marked For Review

Chosen Option : --

Q.35 In alchemy, aqua fortis is the classical name of which chemical compound that is used chiefly in the manufacture of explosives and fertilisers, and in organic synthesis?

- Ans**
- 1. Nitric acid
 - 2. Formic acid
 - 3. Chloric acid
 - 4. Hydrobromic acid

Question ID : 26433055081

Option 1 ID : 264330215310

Option 2 ID : 264330215308

Option 3 ID : 264330215309

Option 4 ID : 264330215311

Status : **Not Attempted and Marked For Review**

Chosen Option : --

Q.36 What is the height of the badminton net?

- Ans**
- 1. 6 feet
 - 2. 6.5 feet
 - 3. 5.1 feet
 - 4. 5.5 feet

Question ID : 26433071382

Option 1 ID : 264330279953

Option 2 ID : 264330279954

Option 3 ID : 264330279952

Option 4 ID : 264330279955

Status : **Answered**

Chosen Option : 2

Q.37 Which of the following mosques/masjids was built during the reign of Lodi dynasty of the Delhi Sultanate?

- Ans**
- 1. Begumpuri mosque, Delhi
 - 2. Lal Masjid, Delhi
 - 3. Moth ki Masjid, Delhi
 - 4. Quwwat al-Islam, Delhi

Question ID : 264330106563

Option 1 ID : 264330418554

Option 2 ID : 264330418556

Option 3 ID : 264330418555

Option 4 ID : 264330418553

Status : **Answered**

Chosen Option : 3

Q.38 Sattriya was recognised in _____ as a Classical Dance by Sangeet Natak Akademi.

Ans 1. 2000

2. 2010

3. 2020

4. 2005

Question ID : 26433054502

Option 1 ID : 264330212992

Option 2 ID : 264330212994

Option 3 ID : 264330212995

Option 4 ID : 264330212993

Status : Not Attempted and
Marked For Review

Chosen Option : --

Q.39 The synthesis of which chemical is inhibited due to aspirin?

Ans 1. Pyrites

2. Prostaglandins

3. Histamines

4. Analgesics

Question ID : 264330145207

Option 1 ID : 264330569086

Option 2 ID : 264330569083

Option 3 ID : 264330569084

Option 4 ID : 264330569085

Status : Not Attempted and
Marked For Review

Chosen Option : --

Q.40 Who was the first ecologist to describe the specific shape of eco-trophic interactions, which he called the pyramid of numbers, in the 1920s?

Ans 1. Charles Elton

2. Ernst Haeckel

3. Howard Thomas Odum

4. Edward O Wilson

Question ID : 264330145193

Option 1 ID : 264330569029

Option 2 ID : 264330569030

Option 3 ID : 264330569028

Option 4 ID : 264330569027

Status : Not Attempted and
Marked For Review

Chosen Option : --

Q.41 Siddheshvara Mahadeva temple in Bengal depicts the architecture of which dynasty?

- Ans
- 1. Chalukaya dynasty
 - 2. Shung dynasty
 - 3. Hussain Shahi dynasty
 - 4. Pala dynasty

Question ID : 264330164856

Option 1 ID : 264330646554

Option 2 ID : 264330646553

Option 3 ID : 264330646552

Option 4 ID : 264330646551

Status : Not Attempted and
Marked For Review

Chosen Option : --

Q.42 In 2010, considering its outstanding value and vulnerability, UNESCO recognised 'Mudiyettu', an age-old ritual-drama of _____, as an 'intangible cultural heritage of humanity'.

- Ans
- 1. Tamil Nadu
 - 2. Karnataka
 - 3. Kerala
 - 4. Telangana

Question ID : 26433054505

Option 1 ID : 264330213004

Option 2 ID : 264330213005

Option 3 ID : 264330213006

Option 4 ID : 264330213007

Status : Not Attempted and
Marked For Review

Chosen Option : --

Q.43 Choose the INCORRECT statement related to monsoon.

- Ans
- 1. The Southwest Monsoon winds blow over the warm oceans, gather moisture and bring widespread rainfall over the mainland of India.
 - 2. The intensity and position of the high-pressure area, east of Madagascar, affects the Indian Monsoon.
 - 3. The difference in pressure over Tahiti (Pacific Ocean), and Darwin in northern Australia (Indian Ocean) is computed to predict the intensity of the monsoons.
 - 4. The western cyclonic disturbances occur due to withdrawal or the retreat of the monsoon.

Question ID : 264330169316

Option 1 ID : 264330664043

Option 2 ID : 264330664045

Option 3 ID : 264330664044

Option 4 ID : 264330664046

Status : Not Attempted and
Marked For Review

Chosen Option : --

Q.44 The natural vegetation of India is broadly divided into _____ groups.

Ans 1. 6

2. 5

3. 9

4. 7

Question ID : 264330163241

Option 1 ID : 264330640277

Option 2 ID : 264330640278

Option 3 ID : 264330640275

Option 4 ID : 264330640276

Status : Not Attempted and
Marked For Review

Chosen Option : --

Q.45 According to the Census of India 2011, what was the percentage of Sikh communities in the total population in India?

Ans 1. 0.4%

2. 79.8%

3. 14.2%

4. 1.7%

Question ID : 264330166807

Option 1 ID : 264330654265

Option 2 ID : 264330654264

Option 3 ID : 264330654263

Option 4 ID : 264330654266

Status : Not Attempted and
Marked For Review

Chosen Option : --

Q.46 Which of the following is NOT a food preservative?

Ans 1. Aqua regia

2. Vinegar

3. Sodium chloride

4. Sodium nitrite

Question ID : 26433089678

Option 1 ID : 264330352216

Option 2 ID : 264330352213

Option 3 ID : 264330352215

Option 4 ID : 264330352214

Status : Not Attempted and
Marked For Review

Chosen Option : --

Q.47 Losar (a new year festival) is celebrated in which of the following states?

- Ans 1. Jharkhand
 2. Arunachal Pradesh
 3. Himachal Pradesh
 4. Uttarakhand

Question ID : 264330164808
Option 1 ID : 264330646360
Option 2 ID : 264330646359
Option 3 ID : 264330646362
Option 4 ID : 264330646361
Status : Answered
Chosen Option : 2

Q.48 Who among the following leaders founded the women's wing of Congress in 1940?

- Ans 1. Lakshmi Sahgal
 2. Sarojini Naidu
 3. Sucheta Kriplani
 4. Aruna Asaf Ali

Question ID : 26433099176
Option 1 ID : 264330389318
Option 2 ID : 264330389320
Option 3 ID : 264330389317
Option 4 ID : 264330389319
Status : Not Attempted and Marked For Review
Chosen Option : --

Q.49 Which of the following schemes adopts the One District One Product (ODOP) approach to reap the benefit of scale in terms of procurement of inputs, availing common services and marketing of products?

- Ans 1. Pradhan Mantri Kisan Sampada Yojana
 2. Micro and Small Enterprises Cluster Development Programme (MSE-CDP)
 3. Production Linked Incentive Scheme For Food Processing Industry (PLISFPI)
 4. Pradhan Mantri Formalisation of Micro Food Processing Enterprises (PMFME)

Question ID : 26433064564
Option 1 ID : 264330252849
Option 2 ID : 264330252851
Option 3 ID : 264330252850
Option 4 ID : 264330252848
Status : Not Attempted and Marked For Review
Chosen Option : --

Q.50 Which of the following Acts, enacted by the British Parliament, provided for the establishment of a Law Commission for the consolidation and codification of Indian Laws?

- Ans**
- 1. Indian Council Act, 1909
 - 2. Government of India Act, 1919
 - 3. Charter Act, 1813
 - 4. Charter Act, 1833

Question ID : 264330112336
Option 1 ID : 264330441432
Option 2 ID : 264330441429
Option 3 ID : 264330441431
Option 4 ID : 264330441430
Status : Not Answered
Chosen Option : --

Section : Quantitative Aptitude

Q.1 What should be the value in place of (?) in $7\frac{5}{8} + \frac{5}{8}$ of $184 \times 15 \div 5 - (?) = 0$.

- Ans**
- 1. $-352\frac{5}{8}$
 - 2. $152\frac{1}{8}$
 - 3. $-152\frac{1}{8}$
 - 4. $352\frac{5}{8}$

Question ID : 26433074217
Option 1 ID : 264330290991
Option 2 ID : 264330290990
Option 3 ID : 264330290988
Option 4 ID : 264330290989
Status : Not Attempted and Marked For Review
Chosen Option : --

Q.2

The following table shows the earning of different firms (in ₹ crore) in different years.

Firm \ Year	2012	2013	2014	2015	2016
P	50	45	49	56	57
Q	46	48	50	55	62
R	70	65	63	68	73
S	38	47	56	60	69

The earning (in ₹ crore) of which firm was highest in the year 2015?

- Ans
- 1. P
 - 2. S
 - 3. R
 - 4. Q

Question ID : 264330167426

Option 1 ID : 264330656675

Option 2 ID : 264330656678

Option 3 ID : 264330656677

Option 4 ID : 264330656676

Status : Answered

Chosen Option : 3

Q.3 A shopkeeper allows a discount of 15% on an article and still makes a profit of 20%. What does the shopkeeper pay for an article whose marked price is ₹7,200?

- Ans
- 1. ₹6,120
 - 2. ₹5,120
 - 3. ₹6,100
 - 4. ₹5,100

Question ID : 264330165164

Option 1 ID : 264330647756

Option 2 ID : 264330647757

Option 3 ID : 264330647758

Option 4 ID : 264330647755

Status : Answered

Chosen Option : 2

Q.4

If $\tan A = \frac{2}{5}$ find the value of $\frac{\sec^2 A}{\operatorname{cosec}^2 A}$.

Ans

1. $\frac{2}{5}$

2. $\frac{4}{25}$

3. $\frac{9}{25}$

4. $\frac{3}{5}$

Question ID : 264330145127

Option 1 ID : 264330568763

Option 2 ID : 264330568765

Option 3 ID : 264330568766

Option 4 ID : 264330568764

Status : Answered

Chosen Option : 2

Q.5 What is the compound interest on a sum of ₹25,000 after three years at a rate of 12 percent per annum interest compounded yearly?

Ans 1. ₹9,824.00

2. ₹10,520.00

3. ₹9,956.86

4. ₹10,123.20

Question ID : 264330145044

Option 1 ID : 264330568431

Option 2 ID : 264330568434

Option 3 ID : 264330568432

Option 4 ID : 264330568433

Status : Answered

Chosen Option : 4

Q.6 The least number which should be added to 1351 so that the sum is exactly divisible by 2,4,6 and 8 is:

Ans 1. 11

2. 15

3. 13

4. 17

Question ID : 26433075090

Option 1 ID : 264330294448

Option 2 ID : 264330294450

Option 3 ID : 264330294449

Option 4 ID : 264330294451

Status : Answered

Chosen Option : 4

Q.7 In a $\triangle PQR$ and $\triangle ABC$, $\angle P = \angle A$ and $AC = PR$. Which of the following conditions is true for triangle PQR and ABC to be congruent?

- Ans
- 1. $AB = PQ$ by SSS
 - 2. $AB = PQ$ by SAS
 - 3. $BC = QR$ by ASS
 - 4. $\angle Q = \angle B$ by AAA

Question ID : 264330157068

Option 1 ID : 264330615644

Option 2 ID : 264330615645

Option 3 ID : 264330615643

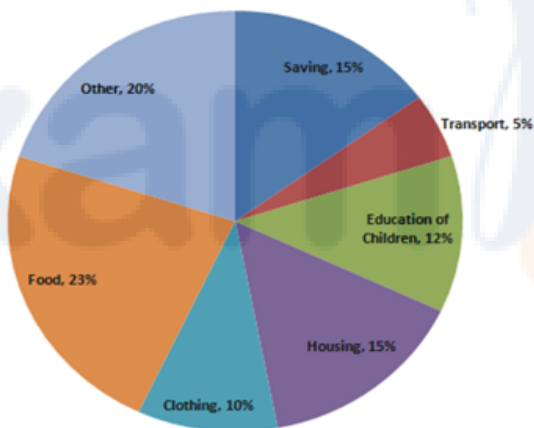
Option 4 ID : 264330615646

Status : Answered

Chosen Option : 3

Q.8 Study the given pie-chart and answer the question that follows.

The pie-chart shows the expenditure of a family on different items and their savings throughout the year 2021.



If the total income of the family was ₹1,00,000, how much money (in ₹) was spent on the education of the children?

- Ans
- 1. 12,500
 - 2. 12,000
 - 3. 13,500
 - 4. 13,000

Question ID : 264330163477

Option 1 ID : 264330641168

Option 2 ID : 264330641167

Option 3 ID : 264330641170

Option 4 ID : 264330641169

Status : Answered

Chosen Option : 2

Q.9 A vendor bought a book marked at ₹850 at successive discounts of 20% and 10%, respectively. He spent ₹55 on transport and sold the book for ₹980. What will be his profit percentage (rounded off to 2 decimal places)?

- Ans
- 1. 45.65%
 - 2. 48.25%
 - 3. 50.65%
 - 4. 46.93%

Question ID : 264330158255

Option 1 ID : 264330620379

Option 2 ID : 264330620381

Option 3 ID : 264330620382

Option 4 ID : 264330620380

Status : Not Attempted and
Marked For Review

Chosen Option : --

Q.10 Two numbers are in the ratio of 4 : 3. The product of their HCF and LCM is 2700. The difference between the numbers is:

- Ans
- 1. 15
 - 2. 30
 - 3. 25
 - 4. 105

Question ID : 26433063440

Option 1 ID : 264330248412

Option 2 ID : 264330248414

Option 3 ID : 264330248415

Option 4 ID : 264330248413

Status : Answered

Chosen Option : 1

Q.11 Ramesh borrowed some money at rate of 5% per annum for the first four years, 8% per annum for the next six years, and 12% per annum for the period beyond ten years. If the total interest paid by him at the end of twelve years is ₹9,016, then find the money borrowed by Ramesh.

- Ans
- 1. ₹9,816
 - 2. ₹9,800
 - 3. ₹9,016
 - 4. ₹9,616

Question ID : 264330165525

Option 1 ID : 264330649182

Option 2 ID : 264330649181

Option 3 ID : 264330649179

Option 4 ID : 264330649180

Status : Answered

Chosen Option : 2

Q.12 The area of an equilateral triangle is $4\sqrt{3}$ cm². Find the side (in cm) of the triangle.

- Ans
- 1. 2
 - 2. 4
 - 3. $\sqrt{3}$
 - 4. $2\sqrt{3}$

Question ID : 264330157739

Option 1 ID : 264330618317

Option 2 ID : 264330618318

Option 3 ID : 264330618315

Option 4 ID : 264330618316

Status : **Not Attempted and Marked For Review**

Chosen Option : --

Q.13 The following table shows the percentage of students passing out of four colleges (A,B,C and D) over four years. Study the table and answer the question that follows.

Years	College A	College B	College C	College D
2019	68	78	56	78
2020	72	86	78	82
2021	78	91	82	85
2022	80	87	84	87

In which college is the average percentage of passing students over the given four years the least?

- Ans
- 1. College D
 - 2. College C
 - 3. College B
 - 4. College A

Question ID : 264330165159

Option 1 ID : 264330647738

Option 2 ID : 264330647737

Option 3 ID : 264330647736

Option 4 ID : 264330647735

Status : **Answered**

Chosen Option : 4

Q.14 The average weight of 15 people increases by 3.2 kg when a new person comes in place of one of them weighing 52 kg. The weight of the new person is:

- Ans
- 1. 48 kg
 - 2. 96 kg
 - 3. 100 kg
 - 4. 52 kg

Question ID : 264330165641

Option 1 ID : 264330649643

Option 2 ID : 264330649645

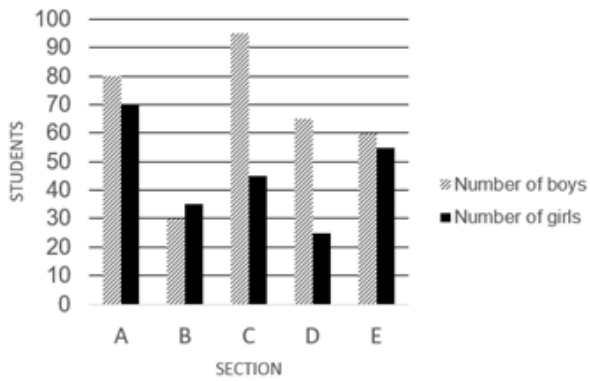
Option 3 ID : 264330649646

Option 4 ID : 264330649644

Status : **Not Attempted and Marked For Review**

Chosen Option : --

Q.15 Study the given graph and answer the following question.
Number of boys and girls students in each section.



The number of boy students in section B is approximately what percentage of the number of girl students in section E?

- Ans
- 1. 25%
 - 2. 55%
 - 3. 45%
 - 4. 15%

Question ID : 264330165429

Option 1 ID : 264330648796

Option 2 ID : 264330648798

Option 3 ID : 264330648797

Option 4 ID : 264330648795

Status : Not Attempted and
Marked For Review

Chosen Option : --

Q.16 If $x \left(5 - \frac{2}{x} \right) = \frac{5}{x}$, then the value of $x^2 + \frac{1}{x^2}$ is:

- Ans
- 1. $\frac{54}{25}$
 - 2. $\frac{53}{28}$
 - 3. $\frac{53}{27}$
 - 4. $\frac{54}{23}$

Question ID : 264330157071

Option 1 ID : 264330615657

Option 2 ID : 264330615656

Option 3 ID : 264330615655

Option 4 ID : 264330615658

Status : Answered

Chosen Option : 1

Q.17 The length and the breadth of the floor of a rectangular hall are 126 feet and 90 feet, respectively. What will be the area (in square feet) of each of the largest identical square tiles that can be used to tile this floor in a way that no part of the floor remains uncovered?

- Ans
- 1. 484
 - 2. 256
 - 3. 324
 - 4. 196

Question ID : 264330103226

Option 1 ID : 264330405211

Option 2 ID : 264330405210

Option 3 ID : 264330405212

Option 4 ID : 264330405209

Status : **Not Attempted and Marked For Review**

Chosen Option : --

Q.18 Study the given table and answer the question that follows.
The table shows the consumption of food grains per day (in grams) in the given set of following years.

Year	Rice	Wheat	Coarse grains	Pulses
1960-62	161	62	131	61
1970-72	197	81	116	64
1980-82	187	116	103	46
1990-92	189	124	101	44
2000-02	201	137	86	64

For which food grain consumption was there successive increase over the given set of years?

- Ans
- 1. Rice
 - 2. Pulses
 - 3. Coarse grains
 - 4. Wheat

Question ID : 264330165467

Option 1 ID : 264330648947

Option 2 ID : 264330648950

Option 3 ID : 264330648949

Option 4 ID : 264330648948

Status : **Answered**

Chosen Option : 4

Q.19 The LCM of two prime numbers x and y ($x > y$) is 533. The value of $4y - x$ is:

- Ans
- 1. 18
 - 2. 11
 - 3. 23
 - 4. 21

Question ID : 26433064887

Option 1 ID : 264330254143

Option 2 ID : 264330254141

Option 3 ID : 264330254142

Option 4 ID : 264330254140

Status : **Not Attempted and Marked For Review**

Chosen Option : --

Q.20 If $A + B = 90^\circ$, then the expression $\frac{\cot A}{\cot B} + \cos^2 A + \cos^2 B$ is equal to:

- Ans
- 1. $\cot^2 B$
 - 2. $\operatorname{cosec}^2 A$
 - 3. $\cot^2 A$
 - 4. $\operatorname{cosec}^2 B$

Question ID : 264330157076

Option 1 ID : 264330615675

Option 2 ID : 264330615676

Option 3 ID : 264330615677

Option 4 ID : 264330615678

Status : Not Attempted and
Marked For Review

Chosen Option : --

Q.21 Ramesh does half as much work as Parul in $\frac{4}{5}$ of the time. If together Ramesh and Parul take 24 days to complete the work, then how much time will Parul take to do it?

- Ans
- 1. 38 days
 - 2. 41 days
 - 3. 37 days
 - 4. 39 days

Question ID : 264330118430

Option 1 ID : 264330465121

Option 2 ID : 264330465123

Option 3 ID : 264330465124

Option 4 ID : 264330465122

Status : Not Attempted and
Marked For Review

Chosen Option : --

Q.22 Study the given table and answer the question that follows.
The table shows the number of employees in five different organisations A, B, C, D and E in different departments.

Dept ↓ Org →	A	B	C	D	E
HR	1050	1015	976	888	1004
Finance	1017	960	786	1025	963
Marketing	1382	1384	1275	1300	1290
Production	1542	1545	4550	1570	1580
Accounts	786	745	801	800	735
Legal	48	54	36	30	53
Total	5825	5703	5424	5613	5625

Which organisation has minimum number of employees?

- Ans
- ✓ 1. C
 - ✗ 2. B
 - ✗ 3. D
 - ✗ 4. E

Question ID : 264330157720

Option 1 ID : 264330618240

Option 2 ID : 264330618239

Option 3 ID : 264330618241

Option 4 ID : 264330618242

Status : Answered

Chosen Option : 1

Q.23 If $\sin \theta + \cos \theta = \frac{\sqrt{11}}{3}$, then the value of $(\cos \theta - \sin \theta)$ is:

- Ans
- ✗ 1. $\frac{\sqrt{5}}{3}$
 - ✗ 2. $\frac{7}{3}$
 - ✗ 3. $\frac{5}{3}$
 - ✓ 4. $\frac{\sqrt{7}}{3}$

Question ID : 264330158304

Option 1 ID : 264330620576

Option 2 ID : 264330620577

Option 3 ID : 264330620575

Option 4 ID : 264330620578

Status : Not Attempted and
Marked For Review

Chosen Option : --

Q.24 If $(48 \div 72 \times 3) - [15 \div 8 \times (40 - 32) - 10] + 2P = 6 \div 2$, then find the value of P?

Ans 1. 3

2. 4

3. 2

4. 1

Question ID : 26433071276

Option 1 ID : 264330279530

Option 2 ID : 264330279531

Option 3 ID : 264330279529

Option 4 ID : 264330279528

Status : Answered

Chosen Option : 1

Q.25 Mayur sold a watch at a profit of 7%. If he had sold it for ₹1,329 more, he would have gained 57%. Find the cost price (in ₹) of the watch.

Ans 1. 2580

2. 2658

3. 2420

4. 2856

Question ID : 264330102342

Option 1 ID : 264330401834

Option 2 ID : 264330401835

Option 3 ID : 264330401833

Option 4 ID : 264330401836

Status : Answered

Chosen Option : 2

Q.26 If $A + \frac{1}{1 + \frac{1}{2 + \frac{1}{3}}} = \frac{9}{10}$, then the value of A is:

Ans 1. $\frac{1}{5}$

2. $\frac{3}{10}$

3. $\frac{2}{5}$

4. $\frac{1}{10}$

Question ID : 264330157770

Option 1 ID : 264330618440

Option 2 ID : 264330618441

Option 3 ID : 264330618442

Option 4 ID : 264330618439

Status : Answered

Chosen Option : 1

Q.27 Find the area of a rhombus if the perimeter of the rhombus is 52 cm, and one of its diagonals is 10 cm long.

- Ans
- 1. 120 cm²
 - 2. 164 cm²
 - 3. 160 cm²
 - 4. 144 cm²

Question ID : 26433080062

Option 1 ID : 264330314197

Option 2 ID : 264330314199

Option 3 ID : 264330314196

Option 4 ID : 264330314198

Status : Not Attempted and
Marked For Review

Chosen Option : --

Q.28 The speed of a boat in still water is 20 km/h, while the river is flowing at a speed of 8 km/h and the time taken to cover a certain distance upstream is 6 h more than the time taken to cover the same distance downstream. Find the distance.

- Ans
- 1. 120 km
 - 2. 336 km
 - 3. 126 km
 - 4. 125 km

Question ID : 26433083049

Option 1 ID : 264330326030

Option 2 ID : 264330326032

Option 3 ID : 264330326029

Option 4 ID : 264330326031

Status : Not Attempted and
Marked For Review

Chosen Option : --

Q.29 In an election between P and Q, P gets 40% of the total votes and thus loses by 10 votes. The total number of votes is:

- Ans
- 1. 80
 - 2. 50
 - 3. 90
 - 4. 70

Question ID : 264330145039

Option 1 ID : 264330568412

Option 2 ID : 264330568414

Option 3 ID : 264330568413

Option 4 ID : 264330568411

Status : Answered

Chosen Option : 2

Q.30 The price of a treadmill is marked at ₹1,250. A shopkeeper earns a profit of 14% after allowing a discount of 14% on the marked price. Find the cost price (to the nearest rupee) of the treadmill.

- Ans
- 1. ₹845
 - 2. ₹840
 - 3. ₹1,043
 - 4. ₹943

Question ID : 264330104352

Option 1 ID : 264330409711

Option 2 ID : 264330409712

Option 3 ID : 264330409709

Option 4 ID : 264330409710

Status : Answered

Chosen Option : 4

Q.31 Jeevan can do a piece of work alone in 42 days, while Rishi and Jeevan together can do the same piece of work in 27 days. How many days will Rishi take to complete the same piece of work alone?

- Ans
- 1. $74\frac{3}{5}$
 - 2. $75\frac{1}{5}$
 - 3. $75\frac{4}{5}$
 - 4. $75\frac{3}{5}$

Question ID : 264330103285

Option 1 ID : 264330405445

Option 2 ID : 264330405446

Option 3 ID : 264330405448

Option 4 ID : 264330405447

Status : Answered

Chosen Option : 4

Q.32 A person covers 28 km while walking at a speed of 8 km/h. How much distance (in km) will he cover in same time if he walks at a speed of 6 km/h?

- Ans
- 1. 36
 - 2. 28
 - 3. 32
 - 4. 21

Question ID : 264330121721

Option 1 ID : 264330477058

Option 2 ID : 264330477056

Option 3 ID : 264330477057

Option 4 ID : 264330477055

Status : Answered

Chosen Option : 4

Q.33 The area of an equilateral triangle is 173.2 cm^2 . Its side will be _____.

- Ans 1. 20 cm
 2. 22 cm
 3. 17.32 cm
 4. 21.32 cm

Question ID : 264330145121

Option 1 ID : 264330568740

Option 2 ID : 264330568742

Option 3 ID : 264330568739

Option 4 ID : 264330568741

Status : Not Attempted and
Marked For Review

Chosen Option : --

Q.34 In two circles centred at O and O', the distance between the centres of both circles is 17 cm. The points of contact of a direct common tangent between the circles are P and Q. If the radii of both circles are 7 cm and 15 cm, respectively, then the length of PQ is equal to:

- Ans 1. 15 cm
 2. 17 cm
 3. 10 cm
 4. 22 cm

Question ID : 264330165495

Option 1 ID : 264330649061

Option 2 ID : 264330649062

Option 3 ID : 264330649059

Option 4 ID : 264330649060

Status : Answered

Chosen Option : 1

Q.35 If 4 men or 6 boys can finish a piece of work in 20 days, then in how many days can 6 men and 11 boys finish the same work?

- Ans 1. 5
 2. 6
 3. 7
 4. 8

Question ID : 26433082416

Option 1 ID : 264330323497

Option 2 ID : 264330323498

Option 3 ID : 264330323499

Option 4 ID : 264330323500

Status : Answered

Chosen Option : 2

Q.36 Aditya sold article X at a profit of 23% and article Y at a loss of 13%. He earned a profit of ₹180 in the entire transaction. If article X costs ₹90 less than article Y, then what is the price of article Y (in ₹)?

- Ans
- 1. 2,100
 - 2. 2,007
 - 3. 2,020
 - 4. 2,050

Question ID : 264330131520

Option 1 ID : 264330515186

Option 2 ID : 264330515183

Option 3 ID : 264330515184

Option 4 ID : 264330515185

Status : **Not Attempted and Marked For Review**

Chosen Option : --

Q.37 If $\sin 2A = \cos 15^\circ$, then the smallest positive value of A is:

- Ans
- 1. 75°
 - 2. 37.5°
 - 3. 7.5°
 - 4. 47.5°

Question ID : 264330157745

Option 1 ID : 264330618340

Option 2 ID : 264330618339

Option 3 ID : 264330618342

Option 4 ID : 264330618341

Status : **Answered**

Chosen Option : 2

Q.38 In an election, Ajay and Mohan are contesting for the Secretary post in a trade union of 9000 workers. 80% of the workers cast their votes, out of which 20% votes were found invalid. Ajay defeated Mohan by 1152 votes. How many votes did Ajay get?

- Ans
- 1. 3456
 - 2. 2304
 - 3. 4480
 - 4. 3546

Question ID : 264330103312

Option 1 ID : 264330405553

Option 2 ID : 264330405555

Option 3 ID : 264330405556

Option 4 ID : 264330405554

Status : **Not Attempted and Marked For Review**

Chosen Option : --

Q.39 Find the third proportional to 16 and 20.

- Ans
- ✓ 1. 25
 - ✗ 2. 23
 - ✗ 3. 24
 - ✗ 4. 26

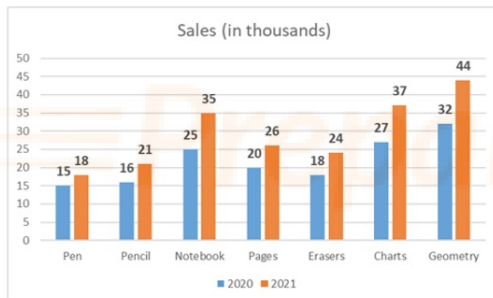
Question ID : 264330145046
Option 1 ID : 264330568441
Option 2 ID : 264330568439
Option 3 ID : 264330568440
Option 4 ID : 264330568442
Status : Answered
Chosen Option : 1

Q.40 The area of a sector of a circle of radius 8 cm, formed by an arc of length 4.6 cm, is

- Ans
- ✗ 1. 6.3 cm^2
 - ✗ 2. 9.2 cm^2
 - ✓ 3. 18.4 cm^2
 - ✗ 4. 12.6 cm^2

Question ID : 264330165440
Option 1 ID : 264330648842
Option 2 ID : 264330648839
Option 3 ID : 264330648840
Option 4 ID : 264330648841
Status : Not Attempted and Marked For Review
Chosen Option : --

Q.41 Following is the figure showing the sales of different items of a stationery shop. Which product recorded the highest percentage change from 2020 to 2021?



- Ans
- ✗ 1. Geometry
 - ✓ 2. Notebook
 - ✗ 3. Charts
 - ✗ 4. Pages

Question ID : 26433081649
Option 1 ID : 264330320431
Option 2 ID : 264330320429
Option 3 ID : 264330320430
Option 4 ID : 264330320432
Status : Not Attempted and Marked For Review
Chosen Option : --

Q.42 A solid sphere made of wax of radius 12 cm is melted and cast into solid hemispheres of radius 4 cm each. Find the number of such solid hemispheres.

- Ans 1. 54
 2. 27
 3. 14
 4. 28

Question ID : 264330145107

Option 1 ID : 264330568685

Option 2 ID : 264330568683

Option 3 ID : 264330568684

Option 4 ID : 264330568686

Status : Not Attempted and
Marked For Review

Chosen Option : --

Q.43 The curved surface area (CSA) and the total surface area (TSA) of a hemisphere whose radius is 7 cm are:

- Ans 1. CSA – 350 cm²; TSA – 500 cm²
 2. CSA – 320 cm²; TSA – 480 cm²
 3. CSA – 412 cm²; TSA – 544 cm²
 4. CSA – 308 cm²; TSA – 462 cm²

Question ID : 264330103750

Option 1 ID : 264330407307

Option 2 ID : 264330407306

Option 3 ID : 264330407308

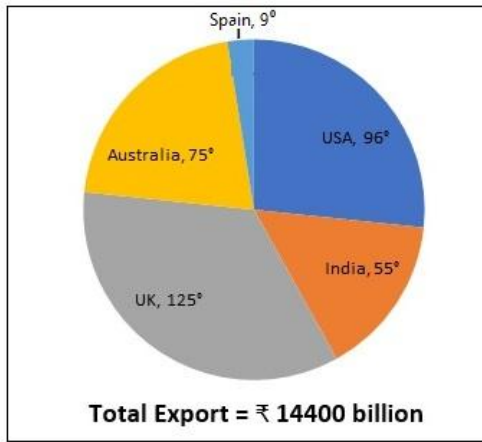
Option 4 ID : 264330407305

Status : Not Attempted and
Marked For Review

Chosen Option : --

Prepare 50% Faster

Q.44 Study the given pie-chart and answer the question that follows.
The pie-chart is about Country-wise Global Exports Presentation.



By how much does the value of the exports of UK exceed that of Australia (in ₹ billion)?

- Ans
- 1. 1,500
 - 2. 2,000
 - 3. 1,440
 - 4. 2,550

Question ID : 264330158280

Option 1 ID : 264330620480

Option 2 ID : 264330620481

Option 3 ID : 264330620479

Option 4 ID : 264330620482

Status : Not Attempted and Marked For Review

Chosen Option : --

Q.45 If the radius of a sphere is doubled, then its surface area will be increased by:

- Ans
- 1. 100%
 - 2. 200%
 - 3. 300%
 - 4. 400%

Question ID : 264330104213

Option 1 ID : 264330409153

Option 2 ID : 264330409154

Option 3 ID : 264330409155

Option 4 ID : 264330409156

Status : Answered

Chosen Option : 4

Q.46 Study the given table and answer the question that follows.

The table shows the number of pages printed by four printers in three days.

Days	Printers			
	A	B	C	D
Friday	350	451	412	206
Saturday	420	325	365	251
Sunday	238	198	258	326

What is the respective ratio between total number of pages printed by printer D on Friday and Sunday together and total number of pages printed by printer A on Friday and Saturday together?

Ans 1. 34 : 51

2. 38 : 55

3. 51 : 34

4. 55 : 38

Question ID : 264330158263

Option 1 ID : 264330620413

Option 2 ID : 264330620412

Option 3 ID : 264330620414

Option 4 ID : 264330620411

Status : Answered

Chosen Option : 1

Q.47 Find the third proportional to 23 and 31.

Ans

1. $\frac{31}{23}$

2. $\frac{961}{23}$

3. $\frac{23}{31}$

4. $\frac{23}{961}$

Question ID : 264330103972

Option 1 ID : 264330408191

Option 2 ID : 264330408192

Option 3 ID : 264330408190

Option 4 ID : 264330408189

Status : Answered

Chosen Option : 2

Q.48 A speedboat, whose speed in 20 km/h in still water, goes 35 km downstream and comes back in a total of 8 hours. What is the speed of the stream?

- Ans
- 1. 20 km/h
 - 2. 10 km/h
 - 3. 15 km/h
 - 4. 5 km/h

Question ID : 264330103744

Option 1 ID : 264330407284

Option 2 ID : 264330407282

Option 3 ID : 264330407283

Option 4 ID : 264330407281

Status : **Not Attempted and Marked For Review**

Chosen Option : --

Q.49 What is the HCF of 12, 18 and 42?

- Ans
- 1. 123
 - 2. 12
 - 3. 6
 - 4. 60

Question ID : 264330145080

Option 1 ID : 264330568578

Option 2 ID : 264330568576

Option 3 ID : 264330568575

Option 4 ID : 264330568577

Status : **Answered**

Chosen Option : 3

Q.50 If 60 litres of a milk solution has 40% milk in it, then how much milk should be added to make the milk 60% in the solution?

- Ans
- 1. 30 litres
 - 2. 25 litres
 - 3. 20 litres
 - 4. 35 litres

Question ID : 264330104487

Option 1 ID : 264330410250

Option 2 ID : 264330410251

Option 3 ID : 264330410249

Option 4 ID : 264330410252

Status : **Not Answered**

Chosen Option : --

Section : English Comprehension

Q.1 Select the most appropriate option that can substitute the underlined idiom/phrase in the given sentence.

You cannot throw dust into my eyes.

- Ans
- 1. terrify me
 - 2. hurt me
 - 3. abuse me
 - 4. mislead or deceive me

Question ID : 264330117252

Option 1 ID : 264330461067

Option 2 ID : 264330461065

Option 3 ID : 264330461066

Option 4 ID : 264330461068

Status : Answered

Chosen Option : 4

Q.2 Select the most appropriate option that can substitute the underlined segment in the given sentence.

O' Henry's short stories are read all over the world till now because they are pithy.

- Ans
- 1. fascinating and lengthy
 - 2. elusive and unreal
 - 3. exaggerated yet short
 - 4. concise and expressive

Question ID : 26433099879

Option 1 ID : 264330392107

Option 2 ID : 264330392105

Option 3 ID : 264330392106

Option 4 ID : 264330392108

Status : Answered

Chosen Option : 4

Q.3 Select the most appropriate meaning of the given idiom.

A plum job

- Ans
- 1. An easy and pleasant job
 - 2. A rare job
 - 3. A difficult job
 - 4. A job involving extensive travelling

Question ID : 264330134218

Option 1 ID : 264330525868

Option 2 ID : 264330525867

Option 3 ID : 264330525869

Option 4 ID : 264330525870

Status : Answered

Chosen Option : 1

Q.4 Select the most appropriate option that can substitute the underlined segment in the given sentence. If there is no need to substitute it, select 'No substitution'.
I like to read books, but my brother prefers to watching movies.

- Ans**
- 1. in watching
 - 2. to watch
 - 3. on watching
 - 4. No substitution

Question ID : 264330137493
Option 1 ID : 264330538593
Option 2 ID : 264330538591
Option 3 ID : 264330538592
Option 4 ID : 264330538594
Status : Answered
Chosen Option : 2

Q.5 Select the most appropriate ANTONYM of the given word.
Glad

- Ans**
- 1. Keen
 - 2. Loyal
 - 3. Sad
 - 4. Pleased

Question ID : 264330164170
Option 1 ID : 264330643933
Option 2 ID : 264330643934
Option 3 ID : 264330643932
Option 4 ID : 264330643931
Status : Answered
Chosen Option : 3

Q.6 The following sentence has been split into four segments. Identify the segment that contains a grammatical error.

There is a spectrum / of seas around that / land which attracts / tourists of all aging.

- Ans**
- 1. tourists of all aging.
 - 2. There is a spectrum
 - 3. land which attracts
 - 4. of seas around that

Question ID : 26433091958
Option 1 ID : 264330361172
Option 2 ID : 264330361169
Option 3 ID : 264330361171
Option 4 ID : 264330361170
Status : Answered
Chosen Option : 1

Q.7 Select the most appropriate meaning of the underlined word.
Saurabh imitates his boss perfectly.

- Ans
- 1. Admires
 - 2. Worships
 - 3. Copies
 - 4. Hates

Question ID : 264330121039
Option 1 ID : 264330474363
Option 2 ID : 264330474365
Option 3 ID : 264330474364
Option 4 ID : 264330474366
Status : Answered
Chosen Option : 4

Q.8 Select the most appropriate synonym of the given word.
Unequivocal

- Ans
- 1. Complete
 - 2. Articulate
 - 3. Unambiguous
 - 4. Doubted

Question ID : 26433099853
Option 1 ID : 264330392010
Option 2 ID : 264330392012
Option 3 ID : 264330392009
Option 4 ID : 264330392011
Status : Answered
Chosen Option : 4

Q.9 In the following sentence, four words are underlined, out of which one word is incorrectly spelt. Identify the INCORRECTLY spelt word.
Traffic accidents are increasing steadily, and large cities are plaged by traffic congestion. Worst of all is the air pollution caused by internal combustion engine, uninterruptedly.

- Ans
- 1. plaged
 - 2. uninterruptedly
 - 3. congestion
 - 4. combustion

Question ID : 264330132619
Option 1 ID : 264330519571
Option 2 ID : 264330519574
Option 3 ID : 264330519572
Option 4 ID : 264330519573
Status : Answered
Chosen Option : 1

Q.10 Select the most appropriate meaning of the given idiom.
Keep count of

- Ans
- 1. To remind of a deadline
 - 2. To act more politely
 - 3. To remember a total
 - 4. To accept an invitation

Question ID : 26433099653
Option 1 ID : 264330391219
Option 2 ID : 264330391218
Option 3 ID : 264330391217
Option 4 ID : 264330391220
Status : Answered
Chosen Option : 4

Q.11 Select the most appropriate one-word substitution of the given group of words.

A pretence of having a virtuous character, moral or religious beliefs or principles, etc., that one does not really possess.

- Ans
- 1. Shrewdness
 - 2. Naivety
 - 3. Gullibility
 - 4. Hypocrisy

Question ID : 26433090854
Option 1 ID : 264330356825
Option 2 ID : 264330356828
Option 3 ID : 264330356827
Option 4 ID : 264330356826
Status : Answered
Chosen Option : 4

Q.12 Select the most appropriate idiom that can substitute the underlined segment in the given sentence.

He made a mess of that bookcase he was supposed to be repairing.

- Ans
- 1. made a pig's ear
 - 2. had a butcher hook
 - 3. made a clean breast
 - 4. brought a dog's breast

Question ID : 264330164573
Option 1 ID : 264330645480
Option 2 ID : 264330645479
Option 3 ID : 264330645482
Option 4 ID : 264330645481
Status : Not Attempted and Marked For Review
Chosen Option : --

Q.13 The following sentence has been split into four segments. Identify the segment that contains a grammatical error.

My apartment / in Delhi / is situated / on second floor.

- Ans
- 1. is situated
 - 2. in Delhi
 - 3. My apartment
 - 4. on second floor

Question ID : 264330120572
Option 1 ID : 264330472532
Option 2 ID : 264330472534
Option 3 ID : 264330472531
Option 4 ID : 264330472533
Status : Answered
Chosen Option : 4

Q.14 Select the most appropriate option that can substitute the underlined segment in the given sentence. If there is no need to substitute it, select 'No substitution'.

This case is serious. You need to look into this matter; otherwise, the situation will get out of control soon.

- Ans
- 1. look up
 - 2. look at
 - 3. No substitution
 - 4. look after

Question ID : 26433072295
Option 1 ID : 264330283485
Option 2 ID : 264330283484
Option 3 ID : 264330283487
Option 4 ID : 264330283486
Status : Answered
Chosen Option : 3

Q.15 Select the most appropriate meaning of the given idiom.
Keep a straight face

- Ans
- 1. Become very confused
 - 2. Get on extremely well with someone
 - 3. Not laugh or change your expression even though you want to laugh
 - 4. Make more of an effort

Question ID : 264330135997
Option 1 ID : 264330532829
Option 2 ID : 264330532828
Option 3 ID : 264330532830
Option 4 ID : 264330532827
Status : Answered
Chosen Option : 1

Q.16 Select the option that can be used as a one-word substitute for the given group of words.

Huge fire for celebration

- Ans
- 1. Campaign
 - 2. Bonfire
 - 3. Agenda
 - 4. Crossfire

Question ID : 26433088756
Option 1 ID : 264330348578
Option 2 ID : 264330348577
Option 3 ID : 264330348580
Option 4 ID : 264330348579
Status : Answered
Chosen Option : 2

Q.17 Identify the option that rectifies the spelling of the incorrectly spelt word in the given sentence.

The disadvantages of listening to music at a loud volume include loss of hearing.

- Ans
- 1. Lissening
 - 2. Lose
 - 3. Heering
 - 4. Volume

Question ID : 26433089016
Option 1 ID : 264330349601
Option 2 ID : 264330349602
Option 3 ID : 264330349604
Option 4 ID : 264330349603
Status : Answered
Chosen Option : 3

Q.18 Select the most appropriate synonym of the word 'disclosed' in the given sentence and choose the correct option.

The linguist's analysis of the language revealed patterns and structures that were previously unknown.

- Ans
- 1. Linguist
 - 2. Patterns
 - 3. Revealed
 - 4. Unknown

Question ID : 264330163536
Option 1 ID : 264330641399
Option 2 ID : 264330641401
Option 3 ID : 264330641400
Option 4 ID : 264330641402
Status : Answered
Chosen Option : 3

Q.19 Select the INCORRECTLY spelt word.

- Ans
- 1. Gllidder
 - 2. Airplane
 - 3. Helicopter
 - 4. Ladybug

Question ID : 26433089011
Option 1 ID : 264330349582
Option 2 ID : 264330349581
Option 3 ID : 264330349583
Option 4 ID : 264330349584
Status : Answered
Chosen Option : 1

Q.20 Select the most appropriate meaning of the underlined word.
We shouldn't blame or envy anyone.

- Ans
- 1. Love
 - 2. Jealousy
 - 3. Curse
 - 4. Reap

Question ID : 264330121038
Option 1 ID : 264330474361
Option 2 ID : 264330474362
Option 3 ID : 264330474360
Option 4 ID : 264330474359
Status : Answered
Chosen Option : 3

Q.21 Select the option that can be used as a one-word substitute for the given group of words.

Minimum people needed for a meeting

- Ans
- 1. Forum
 - 2. Quorum
 - 3. Addendum
 - 4. Decorum

Question ID : 26433073673
Option 1 ID : 264330288833
Option 2 ID : 264330288835
Option 3 ID : 264330288834
Option 4 ID : 264330288832
Status : Answered
Chosen Option : 1

Q.22 Select the option that can be used as a one-word substitute for the given group of words.

Detailed list of goods dispatched with quantity and price to the purchaser.

- Ans
- 1. Ledger
 - 2. Sales
 - 3. Receipt
 - 4. Invoice

Question ID : 26433088807
Option 1 ID : 264330348783
Option 2 ID : 264330348784
Option 3 ID : 264330348782
Option 4 ID : 264330348781
Status : Answered
Chosen Option : 4

Q.23 Select the grammatically correct sentence.

- Ans
- 1. The simple mistake which was committed by the boy haunted her for years.
 - 2. An simple mistake which was committed by the boy haunted her for years.
 - 3. A simple mistake which was committed by an boy haunted her for years.
 - 4. The simple mistake which was committed by an boy haunted her for years.

Question ID : 264330117215
Option 1 ID : 264330460924
Option 2 ID : 264330460921
Option 3 ID : 264330460923
Option 4 ID : 264330460922
Status : Answered
Chosen Option : 1

Q.24 Select the most appropriate synonym of the given word.

Vulnerable

- Ans
- 1. Susceptible
 - 2. Guarded
 - 3. Amiable
 - 4. Delectable

Question ID : 264330163394
Option 1 ID : 264330640857
Option 2 ID : 264330640858
Option 3 ID : 264330640855
Option 4 ID : 264330640856
Status : Answered
Chosen Option : 1

Q.25 Select the most appropriate synonym of the given word.

Benevolent

- Ans 1. Generous
 2. Innocent
 3. Cruel
 4. Wicked

Question ID : 264330163357

Option 1 ID : 264330640719

Option 2 ID : 264330640721

Option 3 ID : 264330640722

Option 4 ID : 264330640720

Status : Answered

Chosen Option : 1

Q.26 In the following sentence, four words are underlined, out of which one word is incorrectly spelt. Identify the INCORRECTLY spelt word.
The ruins of many structures that still stand tall in their granduer are testimony to the fact that Mewar was not only the land of the courageous .

- Ans 1. testimony
 2. courageous
 3. granduer
 4. ruins

Question ID : 264330123786

Option 1 ID : 264330485082

Option 2 ID : 264330485083

Option 3 ID : 264330485081

Option 4 ID : 264330485080

Status : Answered

Chosen Option : 3

Q.27 Select the option that can be used as a one-word substitute for the given group of words.

To criticise someone severely

- Ans 1. Rate
 2. Remonstrate
 3. Chastise
 4. Scoff

Question ID : 26433088441

Option 1 ID : 264330347351

Option 2 ID : 264330347349

Option 3 ID : 264330347350

Option 4 ID : 264330347352

Status : Answered

Chosen Option : 4

Q.28 Select the most appropriate one-word substitution of the given group of words.

A state of intense happiness and self-confidence.

- Ans
- 1. Euphoria
 - 2. Intoxication
 - 3. Touché
 - 4. Oblivion

Question ID : 26433090855
Option 1 ID : 264330356832
Option 2 ID : 264330356830
Option 3 ID : 264330356829
Option 4 ID : 264330356831
Status : Answered
Chosen Option : 1

Q.29 Select the option that can be used as a one-word substitute for the given group of words.

To make a low continuous vibratory sound expressing contentment (of a cat).

- Ans
- 1. To meow
 - 2. To purr
 - 3. To buzz
 - 4. To roar

Question ID : 26433088972
Option 1 ID : 264330349428
Option 2 ID : 264330349427
Option 3 ID : 264330349425
Option 4 ID : 264330349426
Status : Answered
Chosen Option : 1

Q.30 Select the most appropriate meaning of the given idiom.

Face the music

- Ans
- 1. To work every possible way to succeed
 - 2. To accept punishment for some mistake which you have done
 - 3. To be cheated by someone you trust
 - 4. To have the problems with money

Question ID : 26433092077
Option 1 ID : 264330361632
Option 2 ID : 264330361629
Option 3 ID : 264330361631
Option 4 ID : 264330361630
Status : Answered
Chosen Option : 2

Q.31 Select the most appropriate idiom to fill in the blank.

I was going to mention it, but it _____.

- Ans
- 1. brought to mind
 - 2. changed my mind
 - 3. bore in mind
 - 4. slipped my mind

Question ID : 264330163336
Option 1 ID : 264330640643
Option 2 ID : 264330640646
Option 3 ID : 264330640645
Option 4 ID : 264330640644
Status : Answered
Chosen Option : 4

Q.32 Select the most appropriate phrasal verb to fill in the blank.
Though Pradeep _____ for Jamaica, he landed up in Nigeria.

- Ans
- 1. set aside
 - 2. set about
 - 3. set out
 - 4. set up

Question ID : 26433084919
Option 1 ID : 264330333400
Option 2 ID : 264330333398
Option 3 ID : 264330333399
Option 4 ID : 264330333397
Status : Answered
Chosen Option : 3

Q.33 Select the most appropriate ANTONYM of the given word.
Specific

- Ans
- 1. Topple
 - 2. Lawful
 - 3. Random
 - 4. Stroll

Question ID : 264330164273
Option 1 ID : 264330644317
Option 2 ID : 264330644318
Option 3 ID : 264330644315
Option 4 ID : 264330644316
Status : Answered
Chosen Option : 3

Q.34 Select the most appropriate ANTONYM of the given word.

Beneficent

- Ans 1. Cruel
 2. Lethargic
 3. Soft
 4. Friendly

Question ID : 264330163396
Option 1 ID : 264330640864
Option 2 ID : 264330640866
Option 3 ID : 264330640863
Option 4 ID : 264330640865
Status : Answered
Chosen Option : 1

Q.35 Select the most appropriate meaning of the given idiom.

Grasping at straws

- Ans 1. Trying to find the best way to compete with others when nothing you choose is likely to work
 2. Trying to find some way to succeed when you see others are also doing the same
 3. Trying to find some way to succeed when nothing you choose is likely to work
 4. Trying to find manipulative ways to succeed

Question ID : 264330163431
Option 1 ID : 264330641001
Option 2 ID : 264330640999
Option 3 ID : 264330641002
Option 4 ID : 264330641000
Status : Not Attempted and Marked For Review
Chosen Option : --

Q.36 Select the most appropriate ANTONYM of the given word.

Contempt

- Ans 1. Mockery
 2. Deny
 3. Regard
 4. Immoral

Question ID : 264330163362
Option 1 ID : 264330640740
Option 2 ID : 264330640741
Option 3 ID : 264330640742
Option 4 ID : 264330640739
Status : Answered
Chosen Option : 3

Q.37 Select the option that can be used as a one-word substitute for the given group of words.

No longer used because something new has been invented

- Ans
- 1. Classic
 - 2. Ancient
 - 3. Ornamental
 - 4. Obsolete

Question ID : 26433088196
Option 1 ID : 264330346378
Option 2 ID : 264330346380
Option 3 ID : 264330346379
Option 4 ID : 264330346377
Status : Answered
Chosen Option : 4

Q.38 Select the most appropriate idiom or phrase to complete the given sentence.

I like her because she never likes to make _____.

- Ans
- 1. a slap on the wrist
 - 2. a drop in the bucket
 - 3. a bed of roses
 - 4. a quick buck

Question ID : 26433099136
Option 1 ID : 264330389159
Option 2 ID : 264330389157
Option 3 ID : 264330389158
Option 4 ID : 264330389160
Status : Not Attempted and Marked For Review
Chosen Option : --

Q.39 Select the sentence that has a spelling error.

- A- A fisherman, enfeebled with age, could no longer go out to sea so he began fishing in the river.
- B- Every morning he would go down to the river and sit there fishing the whole day long.
- C- In the evening, he would sell whatever he had caught, buy food for himself and go home.
- D- One hot afternoon, while he was bemoaning his fate, a large bird alited near him.

- Ans
- 1. One hot afternoon, while he was bemoaning his fate, a large bird alited near him.
 - 2. In the evening, he would sell whatever he had caught, buy food for himself and go home.
 - 3. A fisherman, enfeebled with age, could no longer go out to sea so he began fishing in the river.
 - 4. Every morning he would go down to the river and sit there fishing the whole day long.

Question ID : 264330141563
Option 1 ID : 264330554590
Option 2 ID : 264330554589
Option 3 ID : 264330554587
Option 4 ID : 264330554588
Status : Answered
Chosen Option : 3

Q.40 Choose the most appropriate meaning of the underlined phrase.
Ram could not go to Delhi for vacation since he was banking on his arrears of pay which he did not get in time

- Ans
- 1. Sloping on
 - 2. Depending on his bank
 - 3. Calling on
 - 4. Relying on

Question ID : 264330137453

Option 1 ID : 264330538435

Option 2 ID : 264330538437

Option 3 ID : 264330538436

Option 4 ID : 264330538438

Status : **Not Attempted and
Marked For Review**

Chosen Option : --

Comprehension:

In the following passage, some words have been deleted. Read the passage carefully and select the most appropriate option to fill in each blank.

When another old cave is discovered in the south of France, it is not (1)_____ in news. Rather, it is an ordinary event. Such discoveries are so (2)_____ these days that hardly anybody pays heed to them. However, when the Lascaux cave complex was discovered in 1940, the world was (3)_____. Painted directly on its walls were hundreds of scenes showing how people lived thousands of years ago. The scenes show people hunting animals, such as bison or wild cats. Other images (4)_____ birds and, most noticeably, horses, which appear in more than 300 wall images, by far (5)_____ all other animals.

SubQuestion No : 41

Q.41 Select the most appropriate option to fill in blank number 1.

- Ans
- 1. suitably
 - 2. nearly
 - 3. merrily
 - 4. usually

Question ID : 264330163292

Option 1 ID : 264330640467

Option 2 ID : 264330640469

Option 3 ID : 264330640468

Option 4 ID : 264330640470

Status : **Answered**

Chosen Option : 4

Comprehension:

In the following passage, some words have been deleted. Read the passage carefully and select the most appropriate option to fill in each blank.

When another old cave is discovered in the south of France, it is not (1)_____ in news. Rather, it is an ordinary event. Such discoveries are so (2)_____ these days that hardly anybody pays heed to them. However, when the Lascaux cave complex was discovered in 1940, the world was (3)_____. Painted directly on its walls were hundreds of scenes showing how people lived thousands of years ago. The scenes show people hunting animals, such as bison or wild cats. Other images (4)_____ birds and, most noticeably, horses, which appear in more than 300 wall images, by far (5)_____ all other animals.

SubQuestion No : 42**Q.42 Select the most appropriate option to fill in blank number 2.**

- Ans 1. disorderly
 2. frequent
 3. ghastly
 4. delusional

Question ID : 264330163293

Option 1 ID : 264330640471

Option 2 ID : 264330640472

Option 3 ID : 264330640474

Option 4 ID : 264330640473

Status : Answered

Chosen Option : 3

Comprehension:

In the following passage, some words have been deleted. Read the passage carefully and select the most appropriate option to fill in each blank.

When another old cave is discovered in the south of France, it is not (1)_____ in news. Rather, it is an ordinary event. Such discoveries are so (2)_____ these days that hardly anybody pays heed to them. However, when the Lascaux cave complex was discovered in 1940, the world was (3)_____. Painted directly on its walls were hundreds of scenes showing how people lived thousands of years ago. The scenes show people hunting animals, such as bison or wild cats. Other images (4)_____ birds and, most noticeably, horses, which appear in more than 300 wall images, by far (5)_____ all other animals.

SubQuestion No : 43**Q.43 Select the most appropriate option to fill in blank number 3.**

- Ans 1. baffled
 2. overthrown
 3. encouraged
 4. crushed

Question ID : 264330163294

Option 1 ID : 264330640475

Option 2 ID : 264330640476

Option 3 ID : 264330640477

Option 4 ID : 264330640478

Status : Answered

Chosen Option : 1

Comprehension:

In the following passage, some words have been deleted. Read the passage carefully and select the most appropriate option to fill in each blank.

When another old cave is discovered in the south of France, it is not (1)_____ in news. Rather, it is an ordinary event. Such discoveries are so (2)_____ these days that hardly anybody pays heed to them. However, when the Lascaux cave complex was discovered in 1940, the world was (3)_____. Painted directly on its walls were hundreds of scenes showing how people lived thousands of years ago. The scenes show people hunting animals, such as bison or wild cats. Other images (4)_____ birds and, most noticeably, horses, which appear in more than 300 wall images, by far (5)_____ all other animals.

SubQuestion No : 44**Q.44** Select the most appropriate option to fill in blank number 4.

- Ans
- 1. imprint
 - 2. depict
 - 3. require
 - 4. determine

Question ID : 264330163295

Option 1 ID : 264330640482

Option 2 ID : 264330640481

Option 3 ID : 264330640479

Option 4 ID : 264330640480

Status : Answered

Chosen Option : 2

Comprehension:

In the following passage, some words have been deleted. Read the passage carefully and select the most appropriate option to fill in each blank.

When another old cave is discovered in the south of France, it is not (1)_____ in news. Rather, it is an ordinary event. Such discoveries are so (2)_____ these days that hardly anybody pays heed to them. However, when the Lascaux cave complex was discovered in 1940, the world was (3)_____. Painted directly on its walls were hundreds of scenes showing how people lived thousands of years ago. The scenes show people hunting animals, such as bison or wild cats. Other images (4)_____ birds and, most noticeably, horses, which appear in more than 300 wall images, by far (5)_____ all other animals.

SubQuestion No : 45**Q.45** Select the most appropriate option to fill in blank number 5.

- Ans
- 1. outnumbering
 - 2. outsourcing
 - 3. outlasting
 - 4. outreaching

Question ID : 264330163296

Option 1 ID : 264330640486

Option 2 ID : 264330640483

Option 3 ID : 264330640485

Option 4 ID : 264330640484

Status : Not Attempted and
Marked For Review

Chosen Option : --

Comprehension:

Read the given passage and answer the questions that follow.

Climate policy must now put health at the centre and promote climate change mitigation policies that bring health benefits simultaneously. Health-focused climate policy would help bring about a planet that has cleaner air, more abundant and safer freshwater and food, more effective and fairer health and social protection systems and, as a result, healthier people. Investment in clean energy will yield health gains that repay those investments twice over. There are proven interventions able to reduce emissions of short-lived climate pollutants, for instance applying higher standards for vehicle emissions, which have been calculated to save approximately 2.4 million lives per year, through improved air quality and reduce global warming by about 0.5°C by 2050. The cost of renewable sources of energy has decreased significantly in the last few years, and solar energy is now cheaper than coal or gas in most major economies.

SubQuestion No : 46

Q.46 What is the ANTONYM for the word 'intervention', from the passage?

- Ans
- 1. Specific
 - 2. Evidence
 - 3. Non-involvement
 - 4. Data

Question ID : 264330136030

Option 1 ID : 264330532939

Option 2 ID : 264330532942

Option 3 ID : 264330532941

Option 4 ID : 264330532940

Status : Answered

Chosen Option : 3

Comprehension:

Read the given passage and answer the questions that follow.

Climate policy must now put health at the centre and promote climate change mitigation policies that bring health benefits simultaneously. Health-focused climate policy would help bring about a planet that has cleaner air, more abundant and safer freshwater and food, more effective and fairer health and social protection systems and, as a result, healthier people. Investment in clean energy will yield health gains that repay those investments twice over. There are proven interventions able to reduce emissions of short-lived climate pollutants, for instance applying higher standards for vehicle emissions, which have been calculated to save approximately 2.4 million lives per year, through improved air quality and reduce global warming by about 0.5°C by 2050. The cost of renewable sources of energy has decreased significantly in the last few years, and solar energy is now cheaper than coal or gas in most major economies.

SubQuestion No : 47

Q.47 What is the ANTONYM for the word 'promote', from the passage?

- Ans
- 1. Conduct
 - 2. Obstruct
 - 3. Invade
 - 4. Exclude

Question ID : 264330136028

Option 1 ID : 264330532932

Option 2 ID : 264330532931

Option 3 ID : 264330532933

Option 4 ID : 264330532934

Status : Answered

Chosen Option : 2

Comprehension:

Read the given passage and answer the questions that follow.

Climate policy must now put health at the centre and promote climate change mitigation policies that bring health benefits simultaneously. Health-focused climate policy would help bring about a planet that has cleaner air, more abundant and safer freshwater and food, more effective and fairer health and social protection systems and, as a result, healthier people. Investment in clean energy will yield health gains that repay those investments twice over. There are proven interventions able to reduce emissions of short-lived climate pollutants, for instance applying higher standards for vehicle emissions, which have been calculated to save approximately 2.4 million lives per year, through improved air quality and reduce global warming by about 0.5°C by 2050. The cost of renewable sources of energy has decreased significantly in the last few years, and solar energy is now cheaper than coal or gas in most major economies.

SubQuestion No : 48

Q.48 Which of the following represents the structure of the passage?

- Ans 1. Chronology
 2. Critique
 3. Problem-solution
 4. Definition

Question ID : 264330136029

Option 1 ID : 264330532936

Option 2 ID : 264330532937

Option 3 ID : 264330532938

Option 4 ID : 264330532935

Status : Answered

Chosen Option : 3

Comprehension:

Read the given passage and answer the questions that follow.

Climate policy must now put health at the centre and promote climate change mitigation policies that bring health benefits simultaneously. Health-focused climate policy would help bring about a planet that has cleaner air, more abundant and safer freshwater and food, more effective and fairer health and social protection systems and, as a result, healthier people. Investment in clean energy will yield health gains that repay those investments twice over. There are proven interventions able to reduce emissions of short-lived climate pollutants, for instance applying higher standards for vehicle emissions, which have been calculated to save approximately 2.4 million lives per year, through improved air quality and reduce global warming by about 0.5°C by 2050. The cost of renewable sources of energy has decreased significantly in the last few years, and solar energy is now cheaper than coal or gas in most major economies.

SubQuestion No : 49

Q.49 Which of the following most accurately states the central idea of the passage?

- Ans 1. Greenhouse gases
 2. Pollution
 3. Climate policy for health
 4. Fossil fuels

Question ID : 264330136026

Option 1 ID : 264330532924

Option 2 ID : 264330532923

Option 3 ID : 264330532925

Option 4 ID : 264330532926

Status : Answered

Chosen Option : 2

Comprehension:

Read the given passage and answer the questions that follow.

Climate policy must now put health at the centre and promote climate change mitigation policies that bring health benefits simultaneously. Health-focused climate policy would help bring about a planet that has cleaner air, more abundant and safer freshwater and food, more effective and fairer health and social protection systems and, as a result, healthier people. Investment in clean energy will yield health gains that repay those investments twice over. There are proven interventions able to reduce emissions of short-lived climate pollutants, for instance applying higher standards for vehicle emissions, which have been calculated to save approximately 2.4 million lives per year, through improved air quality and reduce global warming by about 0.5°C by 2050. The cost of renewable sources of energy has decreased significantly in the last few years, and solar energy is now cheaper than coal or gas in most major economies.

SubQuestion No : 50

Q.50 Which is the best description of the tone of the passage?

- Ans
- 1. Biased
 - 2. Cynical
 - 3. Technical
 - 4. Humanistic

Question ID : 264330136027

Option 1 ID : 264330532927

Option 2 ID : 264330532928

Option 3 ID : 264330532929

Option 4 ID : 264330532930

Status : Answered

Chosen Option : 4

Sub Inspector in Delhi Police and Central Armed Police Forces Examination 2023 Paper I

Roll Number	
Candidate Name	
Venue Name	iON Digital Zone Chikalhana
Exam Date	04/10/2023
Exam Time	9:00 AM - 11:00 AM
Subject	SICPO Paper I 2023

Section : General Intelligence and Reasoning

Q.1 Three of the following letter-clusters are alike in some manner and one is different.
Select the one that is different.

- Ans
- 1. NQST
 - 2. GTHS
 - 3. PSUV
 - 4. SVXY

Question ID : 264330145349
Option 1 ID : 264330569653
Option 2 ID : 264330569654
Option 3 ID : 264330569652
Option 4 ID : 264330569651
Status : Answered
Chosen Option : 2

Q.2 Three statements are given followed by three conclusions numbered I, II and III.
Assuming the statements to be true, even if they seem to be at variance with commonly known facts, decide which of the conclusions logically follow(s) from the statements.

Statements:

Some elephants are fishes.
No fish is a tiger.
All deer are tigers.

Conclusions:

I. Some elephants are deer.
II. No elephant is a tiger.
III. No deer is a fish.

- Ans
- 1. Only conclusion III follows.
 - 2. Both conclusions I and III follow.
 - 3. Both conclusions I and II follow.
 - 4. Only conclusion II follows.

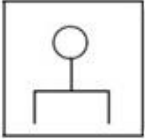
Question ID : 264330145343
Option 1 ID : 264330569630
Option 2 ID : 264330569628
Option 3 ID : 264330569627
Option 4 ID : 264330569629
Status : Answered
Chosen Option : 1

Q.3 Select the figure that will come next (?) in the following series.



Ans

✗ 1.



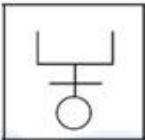
✗ 2.



✗ 3.



✓ 4.



Question ID : 26433082667

Option 1 ID : 264330324504

Option 2 ID : 264330324503

Option 3 ID : 264330324501

Option 4 ID : 264330324502

Status : Answered

Chosen Option : 4

Q.4 Six friends are sitting in a circle. All of them are facing the centre. Kanak sits third to the right of Sona. Kapil is an immediate neighbour of Mani. Goldy sits second to the right of Mani. Sona is an immediate neighbour of Kapil and Suresh. Who sits second to the left of Kanak?

Ans ✗ 1. Suresh

✓ 2. Kapil

✗ 3. Goldy

✗ 4. Mani

Question ID : 264330145406

Option 1 ID : 264330569879

Option 2 ID : 264330569880

Option 3 ID : 264330569882

Option 4 ID : 264330569881

Status : Answered

Chosen Option : 2

Q.5 In this question, three statements are given, followed by two conclusions numbered I and II. Assuming the statements to be true, even if they seem to be at variance with commonly known facts, decide which of the conclusions logically follows/follow from the statements.

Statements:

I. All buildings are towers.

II. No tower is a shop.

III. Some shops are offices.

Conclusions:

I. Some offices are towers.

II. No building is a shop.

Ans 1. Both conclusions I and II follow

2. Only conclusion I follows

3. Only conclusion II follows

4. Neither conclusion I nor II follows

Question ID : 264330104078

Option 1 ID : 264330408615

Option 2 ID : 264330408613

Option 3 ID : 264330408614

Option 4 ID : 264330408616

Status : Answered

Chosen Option : 3

Q.6 Which of the following numbers will replace the question mark (?) in the given series?

239, 274, 309, 354, 399, 454, ?

Ans 1. 499

2. 474

3. 539

4. 509

Question ID : 26433067874

Option 1 ID : 264330266011

Option 2 ID : 264330266009

Option 3 ID : 264330266008

Option 4 ID : 264330266010

Status : Answered

Chosen Option : 1

Q.7 If '+' means '-', '-' means 'x', 'x' means '÷' and '÷' means '+', what will come in place of '?' in the following equation?

$36 - 5 \div 240 \times 6 + 17 = ?$

Ans 1. 218

2. 221

3. 203

4. 237

Question ID : 264330101144

Option 1 ID : 264330397122

Option 2 ID : 264330397121

Option 3 ID : 264330397124

Option 4 ID : 264330397123

Status : Answered

Chosen Option : 3

Q.8 If A, B, C, D and E denote +, -, ×, ÷ and =, respectively, then which of the following options is correct?

- Ans 1. 4A9C6D2E40A9
 2. 4A9C6D2B40E9
 3. 4A9C6D2E40B9
 4. 4A9E6D2C40B9

Question ID : 26433057353
Option 1 ID : 264330224396
Option 2 ID : 264330224397
Option 3 ID : 264330224399
Option 4 ID : 264330224398
Status : Answered
Chosen Option : 2

Q.9 Which of the following numbers will replace the question mark (?) in the given series?
25, 26, 28, 32, 40, ?

- Ans 1. 50
 2. 56
 3. 58
 4. 52

Question ID : 26433057326
Option 1 ID : 264330224289
Option 2 ID : 264330224290
Option 3 ID : 264330224291
Option 4 ID : 264330224288
Status : Answered
Chosen Option : 2

Q.10 Which letter-cluster will replace the question mark (?) to complete the given series?
VQSN, ?, ROOL, PNMK, NMKJ

- Ans 1. PQMN
 2. TPQM
 3. PTMQ
 4. TQRN

Question ID : 264330180760
Option 1 ID : 264330709010
Option 2 ID : 264330709009
Option 3 ID : 264330709008
Option 4 ID : 264330709007
Status : Answered
Chosen Option : 2

Q.11 If '+' means 'x', 'x' means '-', '-' means '+' and '+' means '+', then what will come in place of the (?) in the following equation?
 $9 + 3 \div 2 \times 135 - 15 = ?$

- Ans
- 1. 22
 - 2. 25
 - 3. 18.5
 - 4. 20

Question ID : 264330114255
Option 1 ID : 264330449107
Option 2 ID : 264330449108
Option 3 ID : 264330449106
Option 4 ID : 264330449105
Status : Answered
Chosen Option : 4

Q.12 Select the correct option that indicates the arrangement of the given words in the order in which they appear in an English dictionary.

1. Realistic
2. Readily
3. Reach
4. Really
5. Reactor
6. Realize

- Ans
- 1. 3, 5, 1, 2, 6, 4
 - 2. 3, 5, 2, 1, 6, 4
 - 3. 3, 2, 6, 1, 5, 4
 - 4. 3, 5, 6, 1, 2, 4

Question ID : 264330145383
Option 1 ID : 264330569790
Option 2 ID : 264330569787
Option 3 ID : 264330569789
Option 4 ID : 264330569788
Status : Answered
Chosen Option : 2

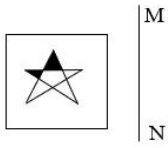
Q.13 Select the option that is related to the third word in the same way as the second word is related to the first word.
(The words must be considered as meaningful words and must not be related to each other based on the number of letters/number of consonants/vowels in the word.)

Derive : Infer :: Urge : ?

- Ans
- 1. Protest
 - 2. Hinder
 - 3. Censure
 - 4. Exhort

Question ID : 264330145398
Option 1 ID : 264330569848
Option 2 ID : 264330569850
Option 3 ID : 264330569847
Option 4 ID : 264330569849
Status : Answered
Chosen Option : 4

Q.14 Select the correct mirror image of the given figure when the mirror is placed at line MN as shown.



Ans

✗ 1.



✗ 2.



✓ 3.



✗ 4.



Question ID : 26433056625

Option 1 ID : 264330221485

Option 2 ID : 264330221484

Option 3 ID : 264330221486

Option 4 ID : 264330221487

Status : Answered

Chosen Option : 3

Q.15 'D @ G' means 'D is the father of G',
'D # G' means 'D is the daughter of G',
'D * G' means 'D is the mother of G', and
'D - G' means 'D is the husband of G'.
If A - Q * B @ R, how is A related to R?

Ans ✗ 1. Father

✗ 2. Husband

✗ 3. Son

✓ 4. Father's father

Question ID : 264330126661

Option 1 ID : 264330496319

Option 2 ID : 264330496316

Option 3 ID : 264330496317

Option 4 ID : 264330496318

Status : Answered

Chosen Option : 4

Q.16 If A denotes '+', B denotes 'x', C denotes '-', and D denotes '÷', then what will come in place of '?' in the following equation?
 $145 A 27 D 3 B ? = 163$

- Ans
- 1. 1
 - 2. 2
 - 3. 3
 - 4. 6

Question ID : 26433067673
Option 1 ID : 264330265204
Option 2 ID : 264330265206
Option 3 ID : 264330265207
Option 4 ID : 264330265205
Status : Answered
Chosen Option : 2

Q.17 In a certain code language, 'LIFE' is coded as '9351' and 'NEAR' is coded as '4692'.
What is the code for 'E' in the given code language?

- Ans
- 1. 3
 - 2. 4
 - 3. 1
 - 4. 9

Question ID : 264330169657
Option 1 ID : 264330665329
Option 2 ID : 264330665328
Option 3 ID : 264330665330
Option 4 ID : 264330665327
Status : Answered
Chosen Option : 4

Q.18 If '+' means '-', '-' means 'x', 'x' means '÷', '÷' means '+', then what will come in place of the question mark (?) in the following equation?
 $124 \times 4 \div 13 - 3 + 36 = ?$

- Ans
- 1. 31
 - 2. 34
 - 3. 45
 - 4. 42

Question ID : 264330126059
Option 1 ID : 264330493909
Option 2 ID : 264330493911
Option 3 ID : 264330493908
Option 4 ID : 264330493910
Status : Answered
Chosen Option : 2

Q.19 Select the correct mirror image of the given figure when the mirror is placed at MN as shown below



- Ans
- 1. R K \$ E H R
 - 2. R H \$ G H R
 - 3. X H \$ E G H X
 - 4. B K \$ 6 G H X

Question ID : 26433085400
Option 1 ID : 264330335302
Option 2 ID : 264330335304
Option 3 ID : 264330335303
Option 4 ID : 264330335301
Status : Answered
Chosen Option : 3

Q.20 In a certain code language, 'FIRE' is coded as '7391' and 'AGED' is coded as '8247'.
What is the code for 'E' in the given code language?

- Ans
- 1. 2
 - 2. 7
 - 3. 4
 - 4. 3

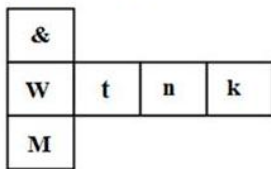
Question ID : 264330169658
Option 1 ID : 264330665333
Option 2 ID : 264330665332
Option 3 ID : 264330665334
Option 4 ID : 264330665331
Status : Answered
Chosen Option : 2

Q.21 A man is standing in the park facing North. He turns to 90° towards the left and walks 40 km. He again takes a 90° turn towards the right and walks 50 km. He takes the next 90° turn towards the right and walks 60 km. Lastly, he takes 90° turn towards the right and walks 50 km. How much distance is he from the starting point?

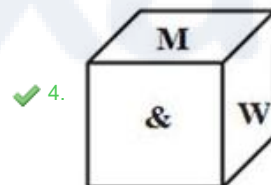
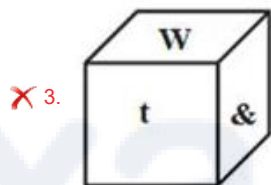
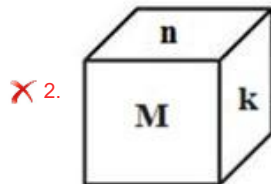
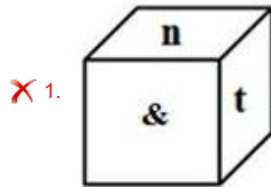
- Ans
- 1. 40 km
 - 2. 60 km
 - 3. 50 km
 - 4. 20 km

Question ID : 26433093124
Option 1 ID : 264330365749
Option 2 ID : 264330365752
Option 3 ID : 264330365750
Option 4 ID : 264330365751
Status : Answered
Chosen Option : 4

Q.22 If the given sheet is folded to form a cube, which of the following figures is NOT possible?



Ans



Question ID : 26433059914

Option 1 ID : 264330234491

Option 2 ID : 264330234490

Option 3 ID : 264330234489

Option 4 ID : 264330234488

Status : Answered

Chosen Option : 4

Q.23 Two statements are given, followed by two conclusions numbered I and II. Assuming the statements to be true, even if they seem to be at variance with commonly known facts, decide which of the conclusions logically follow(s) from the statements.

Statements:

All cars are vehicles.

All vehicles are trucks.

Conclusions:

I) All cars are trucks.

II) All trucks are vehicles.

Ans ✗ 1. Neither Conclusion I nor II follows.

✓ 2. Only Conclusion I follows.

✗ 3. Only Conclusion II follows.

✗ 4. Both Conclusions I and II follow

Question ID : 26433067701

Option 1 ID : 264330265319

Option 2 ID : 264330265316

Option 3 ID : 264330265317

Option 4 ID : 264330265318

Status : Answered

Chosen Option : 2

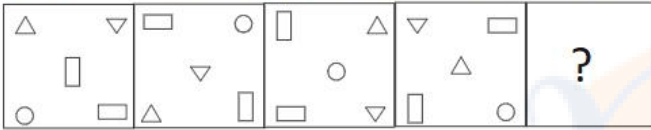
Q.24 Select the option that represents the letters which, when sequentially placed from left to right in the blanks below, will complete the letter series.

P _ _ H _ _ C E _ Z P _ E H _

- Ans
- 1. HZCZPEC
 - 2. CEZPHCZ
 - 3. ZCHPZCE
 - 4. EPZCHEC

Question ID : 26433086954
 Option 1 ID : 264330341459
 Option 2 ID : 264330341458
 Option 3 ID : 264330341457
 Option 4 ID : 264330341460
 Status : Answered
 Chosen Option : 2

Q.25 Select the figure that will replace the question mark (?) in the following figure series.



Ans

- 1.
- 2.
- 3.
- 4.

Question ID : 264330145493
 Option 1 ID : 264330570228
 Option 2 ID : 264330570229
 Option 3 ID : 264330570227
 Option 4 ID : 264330570230
 Status : Answered
 Chosen Option : 3

Q.26 Select the set in which the number are related in the same way as the numbers of the given sets. (NOTE : Operations should be performed on the whole numbers, without breaking down the numbers into its constituent digits. E.g. 13 – Operations on 13 such as adding /subtracting /multiplying etc. to 13 can be performed. Breaking down 13 into 1 and 3 and then performing mathematical operations on 1 and 3 is not allowed.)
(13, 14, 54)
(15, 18, 66)

- Ans**
- 1. (11, 13, 52)
 - 2. (15, 17, 66)
 - 3. (13, 19, 64)
 - 4. (12, 34, 90)

Question ID : 26433069109
 Option 1 ID : 264330270951
 Option 2 ID : 264330270950
 Option 3 ID : 264330270948
 Option 4 ID : 264330270949
 Status : Answered
 Chosen Option : 3

Q.27 Select the number from among the given options that can replace the question mark (?) in the following series.
61, 95, 138, 197, 279, ?

- Ans**
- 1. 397
 - 2. 389
 - 3. 391
 - 4. 395

Question ID : 26433057050
 Option 1 ID : 264330223186
 Option 2 ID : 264330223185
 Option 3 ID : 264330223184
 Option 4 ID : 264330223187
 Status : Answered
 Chosen Option : 3

Q.28 Which letter-cluster will replace the question mark (?) to complete the given series?
GOWB, MVEK, SCMT, ?, EQCL

- Ans**
- 1. YJUC
 - 2. YJCU
 - 3. YKUC
 - 4. YKCU

Question ID : 26433040788
 Option 1 ID : 264330159629
 Option 2 ID : 264330159627
 Option 3 ID : 264330159630
 Option 4 ID : 264330159628
 Status : Answered
 Chosen Option : 1

Q.29 Select the set in which the numbers are related in the same way as are the numbers of the following set.

(NOTE : Operations should be performed on the whole numbers, without breaking down the numbers into its constituent digits. E.g. 13 – Operations on 13 such as adding /subtracting /multiplying etc. to 13 can be performed. Breaking down 13 into 1 and 3 and then performing mathematical operations on 1 and 3 is NOT allowed)

(21, 5, 120)
(2, 7, 8)

- Ans 1. (3,4,10)
 2. (3,4,16)
 3. (2,6,21)
 4. (4,7,34)

Question ID : 264330145329
Option 1 ID : 264330569573
Option 2 ID : 264330569571
Option 3 ID : 264330569574
Option 4 ID : 264330569572
Status : Answered
Chosen Option : 4

Q.30 Select the option that is related to the third term in the same way as the second term is related to the first term and the sixth term is related to the fifth term.
142 : 108 :: 185 : ? :: 169 : 135

- Ans 1. 157
 2. 148
 3. 151
 4. 162

Question ID : 26433079157
Option 1 ID : 264330310635
Option 2 ID : 264330310632
Option 3 ID : 264330310633
Option 4 ID : 264330310634
Status : Answered
Chosen Option : 3

Q.31 In a certain code language, 'TRAUMA' is coded as '36' and 'STIL' is coded as '24'. How will 'OBEIDEINT' be coded in that language?

- Ans 1. 54
 2. 84
 3. 44
 4. 72

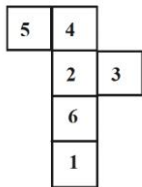
Question ID : 26433079049
Option 1 ID : 264330310201
Option 2 ID : 264330310203
Option 3 ID : 264330310200
Option 4 ID : 264330310202
Status : Answered
Chosen Option : 1

Q.32 Which of the following numbers will replace the question mark (?) in the given series?
352, 326, 284, 225, 148, ?

- Ans
- 1. 71
 - 2. 54
 - 3. 52
 - 4. 50

Question ID : 26433069399
Option 1 ID : 264330272109
Option 2 ID : 264330272110
Option 3 ID : 264330272108
Option 4 ID : 264330272111
Status : Answered
Chosen Option : 3

Q.33 A cube is made by folding the given sheet. In the cube so formed, what would be the number on the opposite side of the number '1'?



- Ans
- 1. 2
 - 2. 5
 - 3. 3
 - 4. 4

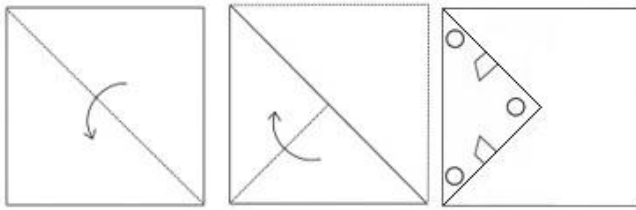
Question ID : 26433065676
Option 1 ID : 264330257266
Option 2 ID : 264330257264
Option 3 ID : 264330257267
Option 4 ID : 264330257265
Status : Answered
Chosen Option : 1

Q.34 Four letter-clusters have been given, out of which three are alike in some manner and one is different. Select the odd letter-cluster.

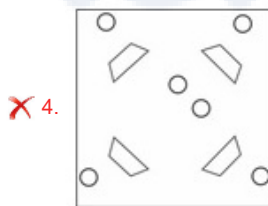
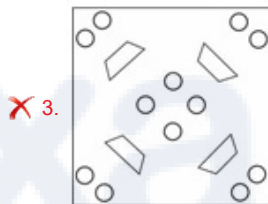
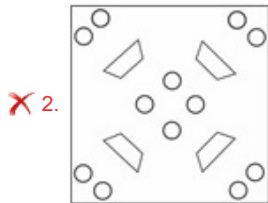
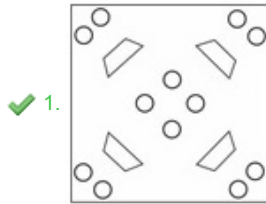
- Ans
- 1. ZSNK
 - 2. VOJG
 - 3. WNDD
 - 4. TMHE

Question ID : 264330180757
Option 1 ID : 264330708995
Option 2 ID : 264330708998
Option 3 ID : 264330708997
Option 4 ID : 264330708996
Status : Answered
Chosen Option : 3

Q.35 A paper is folded and cut as shown. How will it appear when unfolded?



Ans



Question ID : 26433040795

Option 1 ID : 264330159655

Option 2 ID : 264330159656

Option 3 ID : 264330159657

Option 4 ID : 264330159658

Status : Answered

Chosen Option : 1

Q.36 Select the set in which the numbers are related in the same way as are the numbers of the following sets.

(NOTE : Operations should be performed on the whole numbers, without breaking down the numbers into its constituent digits. E.g. 13 – Operations on 13 such as adding /subtracting /multiplying etc. to 13 can be performed. Breaking down 13 into 1 and 3 and then performing mathematical operations on 1 and 3 is NOT allowed)

(329, 145, 184), (567, 221, 346)

- Ans**
- 1. (308, 205, 192)
 - 2. (506, 302, 224)
 - 3. (676, 225, 451)
 - 4. (464, 264, 206)

Question ID : **264330145297**

Option 1 ID : **264330569446**

Option 2 ID : **264330569445**

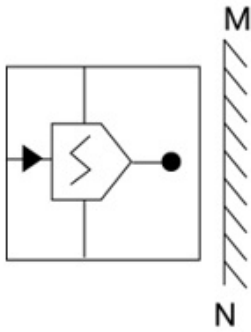
Option 3 ID : **264330569443**

Option 4 ID : **264330569444**

Status : **Answered**

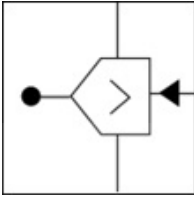
Chosen Option : **3**

Q.37 Select the correct mirror image of the given combination when the mirror is placed at 'MN' as shown below.

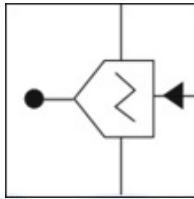


Ans

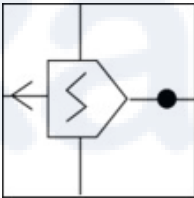
✗ 1.



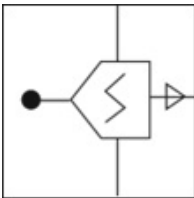
✓ 2.



✗ 3.



✗ 4.



Question ID : 264330130776

Option 1 ID : 264330512218

Option 2 ID : 264330512217

Option 3 ID : 264330512216

Option 4 ID : 264330512215

Status : Answered

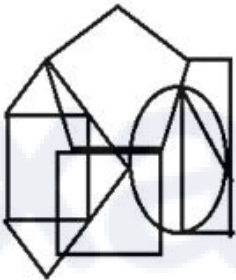
Chosen Option : 2

Q.38 Seven people, A, B, C, D, E, F and G, are sitting in a straight row, facing north (not necessarily in the same order). Only 2 people sit to the right of D. G is an immediate neighbour of D. Only 3 people sit between A and G. Only 2 people sit between B and C. E is not an immediate neighbour of C. F sits to the immediate right of G. How many people sit between E and D?

- Ans
- 1. 0
 - 2. 1
 - 3. 3
 - 4. 2

Question ID : 264330145409
 Option 1 ID : 264330569891
 Option 2 ID : 264330569892
 Option 3 ID : 264330569894
 Option 4 ID : 264330569893
 Status : Answered
 Chosen Option : 2

Q.39 Select the option figure which is embedded in the given figure as its part (rotation is NOT allowed).



Ans

- 1.
- 2.
- 3.
- 4.

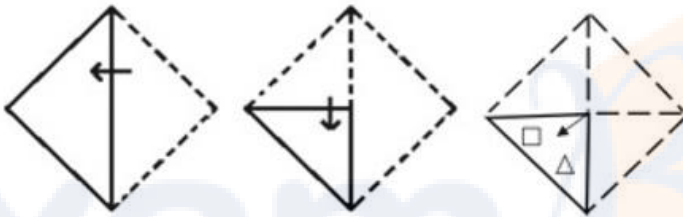
Question ID : 264330145463
 Option 1 ID : 264330570110
 Option 2 ID : 264330570108
 Option 3 ID : 264330570107
 Option 4 ID : 264330570109
 Status : Answered
 Chosen Option : 4

Q.40 B is west of E. A is north-west of B. F is north-east of B. D is south-east of F, such that F is north-west of E and D is south-east of E as well. If C is south-west of E, what is the position of A with respect to E? (All positions are arranged in GRID pattern)

- Ans
- 1. South-east
 - 2. North-east
 - 3. South-west
 - 4. North-west

Question ID : 26433068364
 Option 1 ID : 264330267968
 Option 2 ID : 264330267971
 Option 3 ID : 264330267970
 Option 4 ID : 264330267969
 Status : Answered
 Chosen Option : 4

Q.41 A paper is folded and cut as shown. How will it appear when unfolded?



Ans

- 1.
- 2.
- 3.
- 4.

Question ID : 26433068732
 Option 1 ID : 264330269443
 Option 2 ID : 264330269440
 Option 3 ID : 264330269441
 Option 4 ID : 264330269442
 Status : Answered
 Chosen Option : 4

Q.42 In a certain code language, 'ASIA' is written as 'ZHRZ' and 'IRELAND' is written as 'RIVOZMW'. How will 'NORWAY' be written in that language?

- Ans
- 1. NLISZB
 - 2. MLIDZB
 - 3. NJIDZB
 - 4. MJIDZB

Question ID : 26433079050
Option 1 ID : 264330310207
Option 2 ID : 264330310205
Option 3 ID : 264330310204
Option 4 ID : 264330310206
Status : Answered
Chosen Option : 2

Q.43 If '+' means '-', '-' means 'x', 'x' means '+', '+' means '-', then what will come in place of the question mark (?) in the following equation?
 $61 \div 9 \times 3 - 8 + 5 = ?$

- Ans
- 1. 80
 - 2. 75
 - 3. 89
 - 4. 72

Question ID : 264330126055
Option 1 ID : 264330493894
Option 2 ID : 264330493895
Option 3 ID : 264330493893
Option 4 ID : 264330493892
Status : Answered
Chosen Option : 1

Q.44 Given below are two statements and two conclusions. Take the statements to be true even if they are at variance with commonly known facts, and decide whether the conclusion(s) follow(s) the given statements.

Statements:

Some rats are mats.

All mats are ants.

Conclusions:

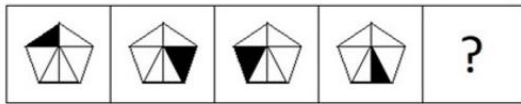
I. Some rats are ants.

II. Some ants are mats.

- Ans
- 1. Both the conclusions follow
 - 2. Neither conclusion I nor II follows
 - 3. Only conclusion II follows
 - 4. Only conclusion I follows

Question ID : 26433056645
Option 1 ID : 264330221566
Option 2 ID : 264330221567
Option 3 ID : 264330221565
Option 4 ID : 264330221564
Status : Answered
Chosen Option : 1

Q.45 Select the figure from among the given options that can replace the question mark (?) in the following series.



Ans

✗ 1.



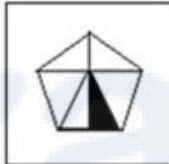
✓ 2.



✗ 3.



✗ 4.



Question ID : 26433087166
Option 1 ID : 264330342303
Option 2 ID : 264330342304
Option 3 ID : 264330342301
Option 4 ID : 264330342302
Status : Answered
Chosen Option : 2

Q.46 Which two signs should be interchanged to make the given equation correct?

$$114 \div 85 + 5 \times 4 - 33 = 149$$

Ans ✓ 1. + and +

✗ 2. + and -

✗ 3. + and ×

✗ 4. - and +

Question ID : 264330129523
Option 1 ID : 264330507459
Option 2 ID : 264330507458
Option 3 ID : 264330507461
Option 4 ID : 264330507460
Status : Answered
Chosen Option : 1

Q.47 In a certain code language, 'good morning' is coded as 'mu du', 'early morning tea' is coded as 'du tu se', 'tea is early' is coded as 'se re tu'. What is the code for the word 'is'?

- Ans
- 1. mu
 - 2. tu
 - 3. du
 - 4. re

Question ID : 26433074766
Option 1 ID : 264330293154
Option 2 ID : 264330293155
Option 3 ID : 264330293152
Option 4 ID : 264330293153
Status : Answered
Chosen Option : 4

Q.48 Select the option that represents the correct order of the given words as they would appear in an English dictionary?

- 1.Voice
- 2.Vocalist
- 3.Vivisection
- 4.Void
- 5.Vogue

- Ans
- 1. 3, 2, 5, 1, 4
 - 2. 5, 2, 3, 1, 4
 - 3. 2, 3, 5, 1, 4
 - 4. 4, 2, 3, 1, 5

Question ID : 26433067244
Option 1 ID : 264330263489
Option 2 ID : 264330263488
Option 3 ID : 264330263490
Option 4 ID : 264330263491
Status : Answered
Chosen Option : 1

Q.49 'A ? B' means 'A is the son of B'.
'A \$ B' means 'A is the daughter of B'.
'A * B' means 'A is the brother of B'.
'A = B' means 'A is the father of B'.
If H \$ Q * Y * N, then how is Y related to H?

- Ans
- 1. Father
 - 2. Brother
 - 3. Father's brother
 - 4. Father's father

Question ID : 264330145388
Option 1 ID : 264330569807
Option 2 ID : 264330569809
Option 3 ID : 264330569810
Option 4 ID : 264330569808
Status : Answered
Chosen Option : 3

Q.50 Select the option that is related to the third word in the same way as the second word is related to the first word. (The words must be considered as meaningful words and must not be related to each other based on the number of letters/number of consonants/vowels in the word.)

Wrestling : Arena :: Ice-Skating : ?

- Ans**
- 1. Track
 - 2. Rink
 - 3. Stadium
 - 4. Ground

Question ID : **26433091601**
Option 1 ID : **264330359771**
Option 2 ID : **264330359770**
Option 3 ID : **264330359772**
Option 4 ID : **264330359769**
Status : **Answered**
Chosen Option : **2**

Section : **General Knowledge and General Awareness**

Q.1 The Karewa formations are found in the _____.

- Ans**
- 1. North Eastern Hills
 - 2. Terai Region
 - 3. Uttaranchal Himalayas
 - 4. Kashmir Himalayas

Question ID : **264330119795**
Option 1 ID : **264330469458**
Option 2 ID : **264330469457**
Option 3 ID : **264330469456**
Option 4 ID : **264330469455**
Status : **Not Answered**
Chosen Option : **--**

Q.2 In which part of the Constitution are fundamental duties added?

- Ans**
- 1. Part III-B
 - 2. Part II-B
 - 3. Part I-A
 - 4. Part IV-A

Question ID : **264330116390**
Option 1 ID : **264330457647**
Option 2 ID : **264330457646**
Option 3 ID : **264330457645**
Option 4 ID : **264330457648**
Status : **Answered**
Chosen Option : **4**

Q.3 Who among the following applied European theatrical techniques to Indian Classical dance with folk and tribal dance?

- Ans
- 1. Guru Bipin Singh
 - 2. Uday Shankar
 - 3. Birju Maharaj
 - 4. Kelucharan Mohapatra

Question ID : 264330145163
Option 1 ID : 264330568910
Option 2 ID : 264330568909
Option 3 ID : 264330568908
Option 4 ID : 264330568907
Status : Answered
Chosen Option : 2

Q.4 Ravana Phadi cave and Durga Temple at Aihole portray the architectural style of which dynasty?

- Ans
- 1. Chalukya
 - 2. Pallava
 - 3. Hoysala
 - 4. Vijaynagara

Question ID : 264330141826
Option 1 ID : 264330555623
Option 2 ID : 264330555625
Option 3 ID : 264330555624
Option 4 ID : 264330555626
Status : Not Answered
Chosen Option : --

Q.5 Read the given statements and select the correct option.

- i) The Governor is the real head of the State Government.
- ii) The Chief Minister plays a key role in framing the laws and policies of the state government.
- iii) Governor of a State is appointed by the President.

- Ans
- 1. Both i and ii
 - 2. Only ii
 - 3. Both ii and iii
 - 4. Only i

Question ID : 264330158695
Option 1 ID : 264330622141
Option 2 ID : 264330622140
Option 3 ID : 264330622142
Option 4 ID : 264330622139
Status : Answered
Chosen Option : 3

Q.6 What do you call the drugs that bind to the receptor site and inhibit its natural function?

- Ans**
- 1. Antagonists
 - 2. Depressants
 - 3. Antidepressants
 - 4. Agonist

Question ID : 264330145208
Option 1 ID : 264330569088
Option 2 ID : 264330569087
Option 3 ID : 264330569090
Option 4 ID : 264330569089
Status : Not Answered
Chosen Option : --

Q.7 What is the dimension of the kabaddi play field for men?

- Ans**
- 1. 14 m × 10 m
 - 2. 14 m × 8 m
 - 3. 12.50 m × 10 m
 - 4. 13 m × 10 m

Question ID : 264330118471
Option 1 ID : 264330465288
Option 2 ID : 264330465287
Option 3 ID : 264330465285
Option 4 ID : 264330465286
Status : Answered
Chosen Option : 2

Q.8 In Which year did the Ministry of Health and Family Welfare of India launch the Weekly Iron and Folic Acid Supplementation (WIFS) program to meet the challenge of high prevalence and incidence of anaemia among adolescent girls and boys (56% girls and 30% boys)?

- Ans**
- 1. 2013
 - 2. 2011
 - 3. 2014
 - 4. 2012

Question ID : 264330145199
Option 1 ID : 264330569053
Option 2 ID : 264330569051
Option 3 ID : 264330569054
Option 4 ID : 264330569052
Status : Not Answered
Chosen Option : --

Q.9 Who among the following was the successor of Mughal emperor Shahjahan to the throne?

- Ans
- 1. Shah Shuja
 - 2. Aurangzeb
 - 3. Murad Bakhsh
 - 4. Dara Shikoh

Question ID : 26433054201
Option 1 ID : 264330211789
Option 2 ID : 264330211791
Option 3 ID : 264330211788
Option 4 ID : 264330211790
Status : Answered
Chosen Option : 4

Q.10 Who is the ex-officio Chairman of the Rajya Sabha?

- Ans
- 1. Vice President
 - 2. Prime Minister
 - 3. President
 - 4. Attorney General of India

Question ID : 264330113417
Option 1 ID : 264330445755
Option 2 ID : 264330445754
Option 3 ID : 264330445753
Option 4 ID : 264330445756
Status : Answered
Chosen Option : 1

Q.11 What is the full form of RIDF?

- Ans
- 1. Rural Infrastructure Development Forum
 - 2. Road Infrastructure Development Fund
 - 3. Rural Infrastructure Development Fund
 - 4. Rural Industries Development Fund

Question ID : 264330112515
Option 1 ID : 264330442146
Option 2 ID : 264330442145
Option 3 ID : 264330442148
Option 4 ID : 264330442147
Status : Answered
Chosen Option : 3

Q.12 Tansen, the music legend was a courtier in which of the following courts before coming to Akbar?

- Ans
- 1. Benaras
 - 2. Gandhara
 - 3. Rewa
 - 4. Maghad

Question ID : 264330145170
Option 1 ID : 264330568937
Option 2 ID : 264330568938
Option 3 ID : 264330568936
Option 4 ID : 264330568935
Status : Not Answered
Chosen Option : --

Q.13 How many fundamental rights were provided originally by the Indian Constitution in 1950?

Ans 1. Seven

2. Six

3. Nine

4. Five

Question ID : 264330113393

Option 1 ID : 264330445658

Option 2 ID : 264330445657

Option 3 ID : 264330445659

Option 4 ID : 264330445660

Status : Answered

Chosen Option : 1

Q.14 The five-year plans in India laid down not only specific objectives to be attained in the five years of a plan, but also what was to be achieved over a period of 20 years. This long-term plan is called a _____.

Ans 1. perspective plan

2. twenty-year plan

3. two-decade plan

4. perpetual plan

Question ID : 264330168853

Option 1 ID : 264330662225

Option 2 ID : 264330662223

Option 3 ID : 264330662224

Option 4 ID : 264330662226

Status : Answered

Chosen Option : 3

Q.15 Who among the following is the author of the book 'On Writing: A Memoir of the Craft'?

Ans 1. F Scott Fitzgerald

2. Ernest Hemingway

3. Stephen King

4. Clive Staples Lewis

Question ID : 26433071470

Option 1 ID : 264330280307

Option 2 ID : 264330280306

Option 3 ID : 264330280305

Option 4 ID : 264330280304

Status : Not Answered

Chosen Option : --

Q.16 What was the target growth rate of the Indian economy in the second five-year plan?

- Ans
- 1. 6.7%
 - 2. 2.8%
 - 3. 5.4%
 - 4. 4.5%

Question ID : 264330145230
Option 1 ID : 264330569176
Option 2 ID : 264330569175
Option 3 ID : 264330569178
Option 4 ID : 264330569177
Status : Answered
Chosen Option : 3

Q.17 Who among the following was the first president of IOC?

- Ans
- 1. Lord Killanin
 - 2. Pierre, Baron de Coubertin
 - 3. Demetrius Vikelas
 - 4. Avery Brundage

Question ID : 26433059387
Option 1 ID : 264330232417
Option 2 ID : 264330232416
Option 3 ID : 264330232418
Option 4 ID : 264330232419
Status : Not Answered
Chosen Option : --

Q.18 In which process is a solid substance volatilised by heating and the vapour is condensed back to the solid at a cold surface?

- Ans
- 1. Chromatography
 - 2. Filtration
 - 3. Distillation
 - 4. Sublimation

Question ID : 264330145220
Option 1 ID : 264330569137
Option 2 ID : 264330569138
Option 3 ID : 264330569136
Option 4 ID : 264330569135
Status : Answered
Chosen Option : 4

Q.19 The Olympic Winter Games 2026 would be played in _____.

- Ans
- 1. Brisbane
 - 2. Los Angeles
 - 3. Milano Cortina
 - 4. Paris

Question ID : 264330109850
Option 1 ID : 264330431680
Option 2 ID : 264330431679
Option 3 ID : 264330431678
Option 4 ID : 264330431677
Status : Answered
Chosen Option : 3

Q.20 Which ports belong to the western coast of India?

- Ans 1. Kandla port, Mormugao port, Kolkata port
 2. Kandla port, Mormugao port, Kochi port
 3. Kandla port, Mormugao port, Chennai port
 4. Kandla port, Haldia port, Kochi port

Question ID : 264330132716

Option 1 ID : 264330519961

Option 2 ID : 264330519959

Option 3 ID : 264330519962

Option 4 ID : 264330519960

Status : Answered

Chosen Option : 2

Q.21 Who among the following was the Vice President of the Interim Government formed by Congress in 1946?

- Ans 1. Vallabhbhai Patel
 2. Baldev Singh
 3. John Matthai
 4. Jawaharlal Nehru

Question ID : 264330112356

Option 1 ID : 264330441509

Option 2 ID : 264330441511

Option 3 ID : 264330441512

Option 4 ID : 264330441510

Status : Answered

Chosen Option : 2

Q.22 Which east-flowing river basin covers the states of Jharkhand, Chhattisgarh and Orissa and has a Drainage area of 39,033 sq km?

- Ans 1. Baitarni
 2. Brahmani
 3. Nagavali
 4. Sarada

Question ID : 264330131027

Option 1 ID : 264330513222

Option 2 ID : 264330513220

Option 3 ID : 264330513219

Option 4 ID : 264330513221

Status : Not Answered

Chosen Option : --

Q.23 Which of the following statements is NOT true for Indian monsoons?

- Ans 1. Monsoonal rainfall is affected by jet streams
 2. Monsoonal rainfall is the lifeline of Indian agriculture
 3. Himalayas play an important role in monsoonal rainfall
 4. Monsoonal rainfall is not affected by the relief features of the country

Question ID : 264330169989

Option 1 ID : 264330666632

Option 2 ID : 264330666631

Option 3 ID : 264330666634

Option 4 ID : 264330666633

Status : Answered

Chosen Option : 4

Q.24 Who among the following has written the biography of Buddha, Buddhacharita?

- Ans
- 1. Vasumitra
 - 2. Charaka
 - 3. Ashvaghosha
 - 4. Nagarjuna

Question ID : 264330165578
Option 1 ID : 264330649391
Option 2 ID : 264330649394
Option 3 ID : 264330649393
Option 4 ID : 264330649392
Status : Answered
Chosen Option : 4

Q.25 How many fundamental rights were there at the time of adoption of the Indian Constitution?

- Ans
- 1. Seven
 - 2. Five
 - 3. Six
 - 4. Eight

Question ID : 264330111502
Option 1 ID : 264330438095
Option 2 ID : 264330438093
Option 3 ID : 264330438094
Option 4 ID : 264330438096
Status : Answered
Chosen Option : 1

Q.26 Linthoi Chanabam is associated with which of the following sports events?

- Ans
- 1. Cricket
 - 2. Chess
 - 3. Badminton
 - 4. Judo

Question ID : 264330109688
Option 1 ID : 264330431030
Option 2 ID : 264330431032
Option 3 ID : 264330431031
Option 4 ID : 264330431029
Status : Answered
Chosen Option : 4

Q.27 In 1957, who redefined a model that predicted the shape of individual molecules based on the extent of electron-pair electrostatic repulsion?

- Ans
- 1. Nyholm and Gillespie
 - 2. Heitler and London
 - 3. Staudinger and Perey
 - 4. Marcet and Pauling

Question ID : 264330165460
Option 1 ID : 264330648922
Option 2 ID : 264330648920
Option 3 ID : 264330648919
Option 4 ID : 264330648921
Status : Not Answered
Chosen Option : --

Q.28 In which of the following states is Bonalu festival celebrated?

- Ans
- 1. Jharkhand
 - 2. Gujarat
 - 3. Telangana
 - 4. Uttar Pradesh

Question ID : 26433064691
Option 1 ID : 264330253356
Option 2 ID : 264330253359
Option 3 ID : 264330253357
Option 4 ID : 264330253358
Status : Answered
Chosen Option : 1

Q.29 Who among the following designed a campaign that came to be known as the 'Rowlatt Satyagrah'?

- Ans
- 1. Mahatma Gandhi
 - 2. Feroze Shah Mehta
 - 3. Mahadev Govind Ranade
 - 4. Bal Gangadhar Tilak

Question ID : 264330106610
Option 1 ID : 264330418743
Option 2 ID : 264330418744
Option 3 ID : 264330418742
Option 4 ID : 264330418741
Status : Answered
Chosen Option : 4

Q.30 Asad Ali Khan was known for playing which of the following Indian instruments?

- Ans
- 1. Sitar
 - 2. Tabla
 - 3. Rudra Veena
 - 4. Violin

Question ID : 26433074819
Option 1 ID : 264330293366
Option 2 ID : 264330293364
Option 3 ID : 264330293367
Option 4 ID : 264330293365
Status : Answered
Chosen Option : 1

Q.31 Recoveries of loans and advances, borrowings, are an example of _____.

- Ans
- 1. non-tax receipts
 - 2. capital receipts
 - 3. revenue receipts
 - 4. tax receipts

Question ID : 264330141433
Option 1 ID : 264330554070
Option 2 ID : 264330554068
Option 3 ID : 264330554067
Option 4 ID : 264330554069
Status : Answered
Chosen Option : 2

Q.32 Thullal dance originated in which of the following states?

- Ans 1. Uttarakhand
 2. Kerala
 3. Manipur
 4. Gujrat

Question ID : 264330164795
Option 1 ID : 264330646307
Option 2 ID : 264330646308
Option 3 ID : 264330646310
Option 4 ID : 264330646309
Status : Answered
Chosen Option : 2

Q.33 Which winds blow across the Asian continent at latitudes north of the Himalayas roughly parallel to the Tibetan highlands?

- Ans 1. Trade winds
 2. Southwest winds
 3. Jet streams
 4. Northwest winds

Question ID : 26433064771
Option 1 ID : 264330253679
Option 2 ID : 264330253678
Option 3 ID : 264330253677
Option 4 ID : 264330253676
Status : Answered
Chosen Option : 1

Q.34 What is the name of the Comprehensive Household Survey providing labour force statistics in India, which was first conducted in 1955?

- Ans 1. Periodic Labour Force Survey (PLFS)
 2. Employment-Unemployment Survey (EUS)
 3. Quarterly Employment Survey (QES)
 4. Area Frame Establishment Survey (AFES)

Question ID : 264330111360
Option 1 ID : 264330437526
Option 2 ID : 264330437528
Option 3 ID : 264330437527
Option 4 ID : 264330437525
Status : Answered
Chosen Option : 1

Q.35 During the British rule in India, which of the following Governor Generals devised the 'Doctrine of Lapse', a policy of annexation?

- Ans 1. Lord Cornwallis
 2. Lord Canning
 3. Warren Hastings
 4. Lord Dalhousie

Question ID : 264330165380
Option 1 ID : 264330648602
Option 2 ID : 264330648601
Option 3 ID : 264330648599
Option 4 ID : 264330648600
Status : Answered
Chosen Option : 4

Q.36 Which compound structure includes a saturated short-chain fatty acid with 4-carbon molecules, commonly found in esterified form in animal fats and plant oils?

- Ans 1. Butyric acid
 2. Propionic acid
 3. Succinic acid
 4. Lactic acid

Question ID : 264330110056
Option 1 ID : 264330432503
Option 2 ID : 264330432502
Option 3 ID : 264330432501
Option 4 ID : 264330432504
Status : Not Answered
Chosen Option : --

Q.37 In June _____, the Reserve Bank of India published a 'Consultative Document on Regulation of Microfinance'.

- Ans 1. 2021
 2. 2019
 3. 2022
 4. 2020

Question ID : 264330145233
Option 1 ID : 264330569189
Option 2 ID : 264330569187
Option 3 ID : 264330569190
Option 4 ID : 264330569188
Status : Not Answered
Chosen Option : --

Q.38 What amount of 'Seed Capital' is provided as support to a Self-Help Group under the Pradhan Mantri Formalisation of Micro Food Processing Enterprises Scheme?

- Ans 1. ₹20,000
 2. ₹30,000
 3. ₹50,000
 4. ₹40,000

Question ID : 26433064563
Option 1 ID : 264330252844
Option 2 ID : 264330252845
Option 3 ID : 264330252847
Option 4 ID : 264330252846
Status : Not Answered
Chosen Option : --

Q.39 The Beating Retreat ceremony is held at which of the following places?

- Ans 1. Chandni Chowk
 2. Connaught Place
 3. India Gate
 4. Vijay Chowk

Question ID : 264330164811
Option 1 ID : 264330646374
Option 2 ID : 264330646373
Option 3 ID : 264330646371
Option 4 ID : 264330646372
Status : Answered
Chosen Option : 4

Q.40 Soparrkar and the logo of his worldwide initiative 'Dance for a Cause' are being printed on an official postage stamp issued by the _____ government.

- Ans
- 1. Bangladesh
 - 2. Sri Lanka
 - 3. Bhutan
 - 4. Nepal

Question ID : 26433054506
Option 1 ID : 264330213010
Option 2 ID : 264330213011
Option 3 ID : 264330213009
Option 4 ID : 264330213008
Status : Not Answered
Chosen Option : --

Q.41 Who among the following Bahmani sultans transferred his capital from Gulbarga to Bidar?

- Ans
- 1. Humayun
 - 2. Mujahid Shah
 - 3. Ahmad Shah
 - 4. Firuz Shah

Question ID : 264330109015
Option 1 ID : 264330428340
Option 2 ID : 264330428338
Option 3 ID : 264330428339
Option 4 ID : 264330428337
Status : Not Answered
Chosen Option : --

Q.42 In which of the following cases the Supreme Court, while laying out the 'basic structure' of the Constitution held that the democratic character of the polity was an essential component of the 'basic structure'?

- Ans
- 1. Sajjan Singh vs State of Rajasthan
 - 2. Kesavananda Bharati vs State of Kerala
 - 3. Romesh Thappar vs State of Madras
 - 4. A K Gopalan vs State of Madras

Question ID : 264330145273
Option 1 ID : 264330569350
Option 2 ID : 264330569347
Option 3 ID : 264330569349
Option 4 ID : 264330569348
Status : Answered
Chosen Option : 2

Q.43 In 2015, the eminent danseuse and _____ exponent, Padma Subrahmanyam was selected for Kerala's prestigious choreography award 'Nishagandhi Puraskaram' instituted by the state tourism department.

- Ans
- 1. Kathakali
 - 2. Sattriya
 - 3. Bharatanatyam
 - 4. Kuchipudi

Question ID : 26433054509
Option 1 ID : 264330213021
Option 2 ID : 264330213023
Option 3 ID : 264330213022
Option 4 ID : 264330213020
Status : Answered
Chosen Option : 1

Q.44 What do you call the fluid matrix filling in the cell?

- Ans
- 1. Ribosome
 - 2. Plasmid
 - 3. Cytoplasm
 - 4. Golgi bodies

Question ID : 26433064758
Option 1 ID : 264330253624
Option 2 ID : 264330253627
Option 3 ID : 264330253626
Option 4 ID : 264330253625
Status : Answered
Chosen Option : 1

Q.45 'A Grain Of Sand In The Hourglass of Time' is an autobiography of which Indian politician?

- Ans
- 1. IK Gujral
 - 2. Arjun Singh
 - 3. Manmohan Singh
 - 4. LK Advani

Question ID : 264330145177
Option 1 ID : 264330568965
Option 2 ID : 264330568964
Option 3 ID : 264330568966
Option 4 ID : 264330568963
Status : Answered
Chosen Option : 2

Q.46 Which odourless, colourless, tasteless and chemically unreactive gas was invented by Daniel Rutherford in 1772 and was independently isolated at the same time by CW Scheele and H Cavendish?

- Ans
- 1. Nitrogen
 - 2. Argon
 - 3. Fluorine
 - 4. Oxygen

Question ID : 264330110057
Option 1 ID : 264330432505
Option 2 ID : 264330432508
Option 3 ID : 264330432506
Option 4 ID : 264330432507
Status : Answered
Chosen Option : 2

Q.47 _____ 2005 is referred to as the 'Right to Work' as it guaranteed 100 days of employment in a year by the Indian Government to people who are in need of and who are able to do work.

- Ans
- 1. Mahatma Gandhi Regional Employment Guarantee Act
 - 2. Mahatma Gandhi Rural Employment Act
 - 3. Mahatma Gandhi National Rural Employment Guarantee Act
 - 4. Mohan Gandhi Regional Guarantee Act

Question ID : 264330163259
Option 1 ID : 264330640350
Option 2 ID : 264330640349
Option 3 ID : 264330640347
Option 4 ID : 264330640348
Status : Answered
Chosen Option : 3

Q.48 In which year did Albert Einstein predict a new state of matter, the Bose-Einstein condensate (BEC), based on a quantum formulation by the Indian physicist Satyendra Nath Bose?

- Ans
- 1. 1919
 - 2. 1935
 - 3. 1924
 - 4. 1930

Question ID : 264330145219
Option 1 ID : 264330569131
Option 2 ID : 264330569134
Option 3 ID : 264330569132
Option 4 ID : 264330569133
Status : Answered
Chosen Option : 3

Q.49 The main function of centriole is:

- Ans
- 1. to help plant cell for multiplication
 - 2. to help cell division in animal cell
 - 3. to maintain rigidity in plant cell
 - 4. to maintain mineral composition in bacterial cell

Question ID : 26433082209

Option 1 ID : 264330322672

Option 2 ID : 264330322669

Option 3 ID : 264330322671

Option 4 ID : 264330322670

Status : Not Answered

Chosen Option : --

Q.50 How many planets are terrestrial planets?

- Ans
- 1. 3
 - 2. 6
 - 3. 4
 - 4. 5

Question ID : 264330113351

Option 1 ID : 264330445489

Option 2 ID : 264330445492

Option 3 ID : 264330445490

Option 4 ID : 264330445491

Status : Answered

Chosen Option : 3

Section : Quantitative Aptitude

Q.1 The total surface area of a square-based right pyramid is 1536 m^2 , of which 37.5% is the area of the base of the pyramid. What is the volume (in m^3) of this pyramid?

- Ans
- 1. 3048
 - 2. 3072
 - 3. 3144
 - 4. 3108

Question ID : 264330122882

Option 1 ID : 264330481596

Option 2 ID : 264330481598

Option 3 ID : 264330481597

Option 4 ID : 264330481595

Status : Not Answered

Chosen Option : --

Q.2 If $\sin A + \sin^2 A = 1$, then the value of $\cos^4 A + \cos^6 A$ is:

- Ans
- 1. $\cos A$
 - 2. $\sin A$
 - 3. 1
 - 4. 0

Question ID : 264330157757
Option 1 ID : 264330618388
Option 2 ID : 264330618387
Option 3 ID : 264330618389
Option 4 ID : 264330618390
Status : Not Answered
Chosen Option : --

Q.3 The radius of a circle is 1.75 cm. What is the circumference of the circle?

(Take $\pi = \frac{22}{7}$)

- Ans
- 1. 5.5 cm
 - 2. 11 cm
 - 3. 9.63 cm
 - 4. 22 cm

Question ID : 264330165442
Option 1 ID : 264330648848
Option 2 ID : 264330648847
Option 3 ID : 264330648850
Option 4 ID : 264330648849
Status : Answered
Chosen Option : 2

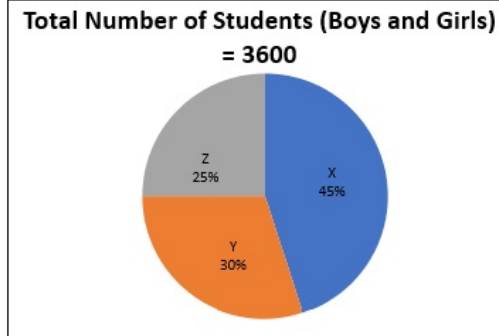
Q.4 Let the HCF of m and n be 'a' and let $n = ab$, LCM of m and n is given by:

- Ans
- 1. bm
 - 2. am
 - 3. ab
 - 4. mn

Question ID : 264330145031
Option 1 ID : 264330568380
Option 2 ID : 264330568379
Option 3 ID : 264330568381
Option 4 ID : 264330568382
Status : Answered
Chosen Option : 2

Q.5 Study the given pie-chart and answer the question that follows.

The pie-chart shows the number of students (boys and girls) studying in standard 10 of various schools (X, Y, Z in the year 2022).



What is the difference between the total number of students (boys and girls) in school Y and Z together and the total number of students (boys and girls) in school X and Y together?

- Ans
- ✓ 1. 720
 - ✗ 2. 840
 - ✗ 3. 780
 - ✗ 4. 820

Question ID : 264330158277

Option 1 ID : 264330620470

Option 2 ID : 264330620467

Option 3 ID : 264330620469

Option 4 ID : 264330620468

Status : Answered

Chosen Option : 1

Q.6 The radius of the base of a right circular cone is 5 cm. Its slant height is 13 cm.

What is its volume (in cm^3 , rounded off to 1 decimal place)? (Take $\pi = \frac{22}{7}$)

- Ans
- ✗ 1. 328.6
 - ✗ 2. 323.4
 - ✓ 3. 314.3
 - ✗ 4. 340.5

Question ID : 264330145116

Option 1 ID : 264330568720

Option 2 ID : 264330568721

Option 3 ID : 264330568722

Option 4 ID : 264330568719

Status : Answered

Chosen Option : 3

Q.7 A sum of money was invested at 10% interest per year, compounded half-yearly, for 18 months. If the amount payable on maturity was ₹64,827, what was the sum invested?

- Ans
- 1. ₹55,600
 - 2. ₹56,000
 - 3. ₹56,800
 - 4. ₹56,500

Question ID : 264330145055
Option 1 ID : 264330568476
Option 2 ID : 264330568475
Option 3 ID : 264330568478
Option 4 ID : 264330568477
Status : Answered
Chosen Option : 2

Q.8 Let C be a circle with centre O and radius 5 cm. Let PQ be a tangent to the circle and A be the point of tangency. Let B be a point on PQ such that the length of AB is 12 cm. If the line joining O and B intersects the circle at R, find the length of BR (in cm).

- Ans
- 1. 2
 - 2. 13
 - 3. 6
 - 4. 8

Question ID : 264330165413
Option 1 ID : 264330648731
Option 2 ID : 264330648732
Option 3 ID : 264330648734
Option 4 ID : 264330648733
Status : Answered
Chosen Option : 4

Q.9 The value of $1\frac{2}{5} - \left[3\frac{3}{4} \div \left\{ 1\frac{1}{4} \div \frac{1}{2} \left(1\frac{1}{2} \times 3\frac{1}{3} \div 1\frac{1}{3} \right) \right\} \right]$ is:

- Ans
- 1. 3
 - 2. 0
 - 3. 2
 - 4. 1

Question ID : 264330165154
Option 1 ID : 264330647718
Option 2 ID : 264330647717
Option 3 ID : 264330647715
Option 4 ID : 264330647716
Status : Answered
Chosen Option : 4

Q.10 When A alone does a piece of work, he takes 25 days more than the time taken by A and B to do the work together. On the other hand, B alone takes 16 days more than the time taken by A and B to do the work together. How many days will A and B, working together, take to do the work?

- Ans
- 1. 24
 - 2. 20
 - 3. 23
 - 4. 22

Question ID : 264330131527

Option 1 ID : 264330515211

Option 2 ID : 264330515214

Option 3 ID : 264330515212

Option 4 ID : 264330515213

Status : Answered

Chosen Option : 2

Q.11 In what proportion should a grocer mix wheat at ₹12 per kg and ₹25 per kg so as to make a mixture of worth ₹20 per kg?

- Ans
- 1. 8 : 3
 - 2. 3 : 5
 - 3. 5 : 8
 - 4. 5 : 7

Question ID : 264330104488

Option 1 ID : 264330410255

Option 2 ID : 264330410253

Option 3 ID : 264330410254

Option 4 ID : 264330410256

Status : Answered

Chosen Option : 3

Q.12 Find the mean proportional between 32 and 162.

- Ans
- 1. 99
 - 2. 65
 - 3. 72
 - 4. 97

Question ID : 264330103970

Option 1 ID : 264330408184

Option 2 ID : 264330408182

Option 3 ID : 264330408183

Option 4 ID : 264330408181

Status : Answered

Chosen Option : 3

Q.13 Rakhi purchased a basket, a wallet and a belt. She got discounts of 5%, 8% and 10% on the basket, the wallet and the belt, respectively, on their respective marked prices of ₹80, ₹150 and ₹350. How much amount (in ₹) did she pay in total?

- Ans 1. 529
 2. 51
 3. 580
 4. 519

Question ID : 264330105972
Option 1 ID : 264330416192
Option 2 ID : 264330416190
Option 3 ID : 264330416189
Option 4 ID : 264330416191
Status : Answered
Chosen Option : 1

Q.14 In $\triangle ABC$, $\angle B = 90^\circ$ and $AB : BC = 1 : 2$. The value of $\cos A + \tan C$ is:

- Ans 1. $\frac{5+\sqrt{5}}{2\sqrt{5}}$
 2. $\frac{1+\sqrt{5}}{2\sqrt{5}}$
 3. $\frac{2\sqrt{5}}{2+\sqrt{5}}$
 4. $\frac{2+\sqrt{5}}{2\sqrt{5}}$

Question ID : 264330145131
Option 1 ID : 264330568780
Option 2 ID : 264330568781
Option 3 ID : 264330568779
Option 4 ID : 264330568782
Status : Not Answered
Chosen Option : --

Q.15 The product of two numbers is 20000. If their LCM is 800, then what is their HCF?

- Ans 1. 25
 2. 30
 3. 35
 4. 20

Question ID : 26433073069
Option 1 ID : 264330286470
Option 2 ID : 264330286469
Option 3 ID : 264330286471
Option 4 ID : 264330286468
Status : Answered
Chosen Option : 4

Q.16 If $a + \frac{1}{a} = 3$, then the value of $a^4 + \frac{1}{a^4}$ is:

- Ans
- 1. 48
 - 2. 81
 - 3. 27
 - 4. 47

Question ID : 264330157776

Option 1 ID : 264330618464

Option 2 ID : 264330618463

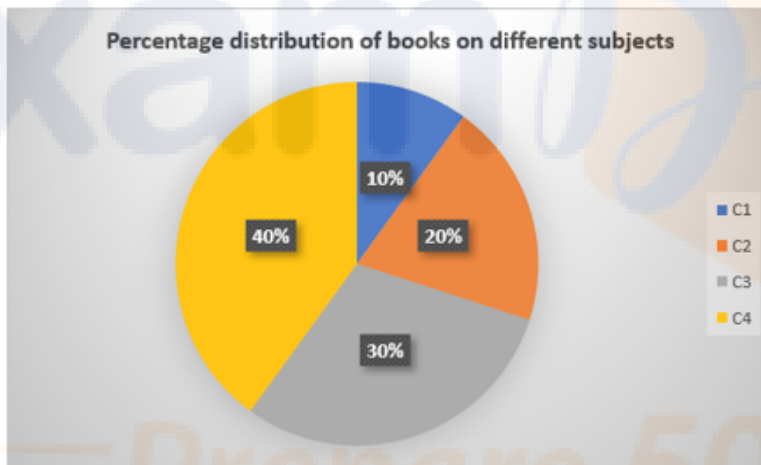
Option 3 ID : 264330618466

Option 4 ID : 264330618465

Status : Answered

Chosen Option : 4

Q.17 Study the given graph and answer the question that follows.
The given graph represents the percentage of books on different subjects that a person has in his library.



If the total number of books is 60, then what is the ratio of the number of books on subject C1 to the average number of books per subject?

- Ans
- 1. 3 : 7
 - 2. 2 : 3
 - 3. 3 : 5
 - 4. 2 : 5

Question ID : 264330157066

Option 1 ID : 264330615638

Option 2 ID : 264330615636

Option 3 ID : 264330615637

Option 4 ID : 264330615635

Status : Answered

Chosen Option : 2

Q.18 Find the value of $\frac{\cos 37^\circ}{\sin 53^\circ} - \cos 47^\circ \operatorname{cosec} 43^\circ$.

- Ans
- 1. 0
 - 2. -1
 - 3. 2
 - 4. 1

Question ID : 264330158293
Option 1 ID : 264330620533
Option 2 ID : 264330620534
Option 3 ID : 264330620531
Option 4 ID : 264330620532
Status : Not Answered
Chosen Option : --

Q.19 The volume of a sphere is given by 130977 cm^3 . Its surface area (in cm^2) is:

- Ans
- 1. 16847
 - 2. 12474
 - 3. 17424
 - 4. 14274

Question ID : 264330145111
Option 1 ID : 264330568701
Option 2 ID : 264330568702
Option 3 ID : 264330568700
Option 4 ID : 264330568699
Status : Answered
Chosen Option : 2

Q.20 The speed of a boat in standing water is 6 km/h and the speed of the stream is 2.5 km/h. A man rows to a place at a distance of 59.5 kilometres and comes back to the starting point. The total time taken by him is:

- Ans
- 1. 16 hours
 - 2. 24 hours
 - 3. 22 hours
 - 4. 18 hours

Question ID : 264330103627
Option 1 ID : 264330406813
Option 2 ID : 264330406816
Option 3 ID : 264330406815
Option 4 ID : 264330406814
Status : Answered
Chosen Option : 2

Q.21 The table below shows the number of students commuting to school by different modes of transport:

Modes of transport	School bus	Bicycle	Walking	Other vehicles
No. of boys	80	280	130	200
No. of girls	140	190	90	250

Which mode of transport is used by maximum number of students?

- Ans
- 1. Bicycle
 - 2. Walking
 - 3. Other vehicles
 - 4. School bus

Question ID : 264330165073
Option 1 ID : 264330647420
Option 2 ID : 264330647421
Option 3 ID : 264330647422
Option 4 ID : 264330647419
Status : Answered
Chosen Option : 1

Q.22 A boat covers a distance of 72 km downstream in 6 hours, while it takes 12 hours to cover the same distance upstream. What is the speed of the boat in still water?

- Ans
- 1. 6 km/h
 - 2. 9 km/h
 - 3. 10 km/h
 - 4. 8 km/h

Question ID : 264330145097
Option 1 ID : 264330568644
Option 2 ID : 264330568646
Option 3 ID : 264330568645
Option 4 ID : 264330568643
Status : Answered
Chosen Option : 2

Q.23 Simplify: $5\frac{1}{3} - \left\{ 4\frac{1}{3} + \left(3\frac{1}{3} \div 2\frac{1}{3} - \frac{1}{3} \right) \right\}$

- Ans
- 1. $\frac{2}{3}$
 - 2. $\frac{1}{3}$
 - 3. $-\frac{1}{3}$
 - 4. $-\frac{2}{3}$

Question ID : 26433074218
Option 1 ID : 264330290993
Option 2 ID : 264330290995
Option 3 ID : 264330290994
Option 4 ID : 264330290992
Status : Answered
Chosen Option : 4

Q.24

Simplify $\frac{1 - \frac{3}{7} \div \frac{9}{49} \times \frac{3}{14}}{1 + \frac{3}{5} \div \frac{1}{25} \times \frac{1}{30}}$.

Ans

1. $\frac{1}{7}$

2. $\frac{1}{6}$

3. $\frac{1}{3}$

4. $\frac{1}{5}$

Question ID : 26433074445

Option 1 ID : 264330291869

Option 2 ID : 264330291870

Option 3 ID : 264330291871

Option 4 ID : 264330291868

Status : Answered

Chosen Option : 3

Q.25 In an election between two candidates, 80% of the voters cast their votes, out of which 5% votes were declared invalid. A candidate got 9500 votes which were 80% of the valid votes. Find the total number of voters enrolled in that election.

Ans 1. 14780 2. 15100 3. 15625 4. 16100

Question ID : 264330158382

Option 1 ID : 264330620887

Option 2 ID : 264330620888

Option 3 ID : 264330620889

Option 4 ID : 264330620890

Status : Answered

Chosen Option : 4

Q.26 An inlet pipe can fill an empty tank in 3.6 hours, while an outlet pipe can drain a completely-filled tank in 6.3 hours. If both the pipes are opened simultaneously when the tank is empty, in how many hours will the tank get completely filled?

Ans 1. 9.0 2. 8.4 3. 8.1 4. 8.7

Question ID : 264330103286

Option 1 ID : 264330405452

Option 2 ID : 264330405450

Option 3 ID : 264330405449

Option 4 ID : 264330405451

Status : Answered

Chosen Option : 2

Q.27 Avi sold a house to Bhargav at a gain of 10% and Bhargav sold it to Chetan at a gain of 20%. If Chetan paid ₹2,64,00,000 for it, then at what price must Avi have purchased it?

- Ans 1. ₹2,00,00,000
 2. ₹2,30,00,000
 3. ₹2,50,00,000
 4. ₹1,75,00,000

Question ID : 264330126573

Option 1 ID : 264330495967

Option 2 ID : 264330495966

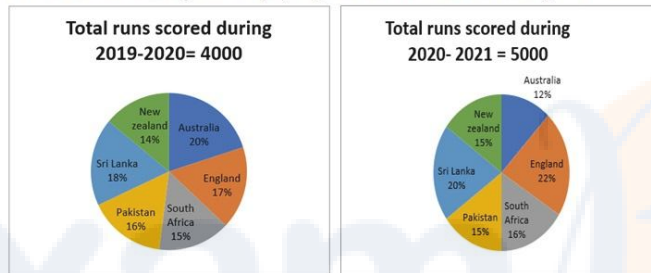
Option 3 ID : 264330495964

Option 4 ID : 264330495965

Status : Answered

Chosen Option : 1

Q.28 The pie chart 1 given below shows the runs scored by a player against 6 different countries during 2019-2020. Pie chart 2 shows the runs scored by the same player against the same 6 countries during 2020-2021.



Find the difference between the total runs scored against New Zealand and Pakistan during 2019-2020 and the total runs scored against Sri Lanka and Pakistan during 2020-2021.

- Ans 1. 500
 2. 600
 3. 650
 4. 550

Question ID : 264330158400

Option 1 ID : 264330620960

Option 2 ID : 264330620961

Option 3 ID : 264330620962

Option 4 ID : 264330620959

Status : Answered

Chosen Option : 4

Q.29 Find the total surface area of a sphere whose volume is $\frac{256}{3} \pi \text{ cm}^3$.

- Ans 1. $48 \pi \text{ cm}^2$
 2. $64 \pi \text{ cm}^2$
 3. $38 \pi \text{ cm}^2$
 4. $56 \pi \text{ cm}^2$

Question ID : 264330103635

Option 1 ID : 264330406847

Option 2 ID : 264330406845

Option 3 ID : 264330406848

Option 4 ID : 264330406846

Status : Answered

Chosen Option : 2

Q.30 If $k(\tan 45^\circ \sin 60^\circ) = \cos 60^\circ \cot 30^\circ$, then the value of k is:

- Ans 1. 1
 2. 2
 3. $\frac{1}{\sqrt{3}}$
 4. $\sqrt{3}$

Question ID : 264330157746
Option 1 ID : 264330618343
Option 2 ID : 264330618346
Option 3 ID : 264330618345
Option 4 ID : 264330618344
Status : Not Answered
Chosen Option : --

Q.31 An inspector is 288 metres behind a thief. The inspector runs 42 metres and the thief runs 30 metres in a minute. In how much time will the inspector catch the thief?

- Ans 1. 24 minutes
 2. 19 minutes
 3. 21 minutes
 4. 20 minutes

Question ID : 264330145067
Option 1 ID : 264330568526
Option 2 ID : 264330568523
Option 3 ID : 264330568524
Option 4 ID : 264330568525
Status : Answered
Chosen Option : 1

Q.32 Three boys, on an average, are 25 years old, and their age are in the ratio of 3 : 5 : 7. What is the age of youngest boy'?

- Ans 1. 24 years
 2. 21 years
 3. 12 years
 4. 15 years

Question ID : 264330145048
Option 1 ID : 264330568450
Option 2 ID : 264330568449
Option 3 ID : 264330568447
Option 4 ID : 264330568448
Status : Answered
Chosen Option : 4

Q.33 Two numbers are in the ratio 12:7. If their HCF is 25, find the numbers.

Ans 1. 225, 135

2. 300, 175

3. 300, 50

4. 175, 120

Question ID : 264330102309

Option 1 ID : 264330401701

Option 2 ID : 264330401704

Option 3 ID : 264330401703

Option 4 ID : 264330401702

Status : Answered

Chosen Option : 2

Q.34 A dealer sells his goods at 10% loss on the cost price but uses 25% less weight. What is his profit percentage?

Ans 1. 35%

2. 20%

3. 25%

4. 15%

Question ID : 264330102345

Option 1 ID : 264330401847

Option 2 ID : 264330401845

Option 3 ID : 264330401848

Option 4 ID : 264330401846

Status : Answered

Chosen Option : 2

Q.35 A and B undertake a project worth ₹36,000. A alone can do the work in 25 days. They worked together for 5 days. For the next five days, B worked alone. After that, A substituted B and completed the remaining work in 5 days. The share of A in the earnings is:

Ans 1. ₹14,400

2. ₹21,400

3. ₹14,600

4. ₹21,600

Question ID : 26433087395

Option 1 ID : 264330343217

Option 2 ID : 264330343220

Option 3 ID : 264330343219

Option 4 ID : 264330343218

Status : Answered

Chosen Option : 4

Q.36 A shopkeeper has a sale of ₹5,445, ₹5,937, ₹5,865 and ₹6,562 for 4 consecutive days. If he gets an average sale of ₹6,050 for 5 days, then his sale on the fifth day is:

- Ans
- 1. ₹6,131
 - 2. ₹6,341
 - 3. ₹6,441
 - 4. ₹6,231

Question ID : 264330165479
Option 1 ID : 264330648995
Option 2 ID : 264330648997
Option 3 ID : 264330648998
Option 4 ID : 264330648996
Status : Answered
Chosen Option : 3

Q.37 Study the given table and answer the question that follows.
The data given in the table is for the month of December 2022.

Company	Total number of employees	Number of female employees
P	4560	2210
Q	4258	1650
R	3052	1280
S	4350	1920

What is the difference between the number of male employees in company P and that in company R?

- Ans
- 1. 592
 - 2. 578
 - 3. 605
 - 4. 580

Question ID : 264330165502
Option 1 ID : 264330649089
Option 2 ID : 264330649087
Option 3 ID : 264330649090
Option 4 ID : 264330649088
Status : Answered
Chosen Option : 2

Q.38 The following table shows the mobile-addicted population of four different cities Hyderabad, Mumbai, Chennai, and Pune, and the ratio of males to females among them.

City	Mobile-Addicted population	Male : Female
Hyderabad	2,20,000	7 : 8
Mumbai	3,50,000	12 : 13
Chennai	2,00,000	11 : 9
Pune	1,50,000	9 : 11

Find the total number of addicted males in Chennai.

- Ans
- 1. 1,10,000
 - 2. 80,000
 - 3. 1,00,000
 - 4. 1,20,000

Question ID : 264330167242
Option 1 ID : 264330655964
Option 2 ID : 264330655966
Option 3 ID : 264330655963
Option 4 ID : 264330655965
Status : Answered
Chosen Option : 1

Q.39 A company is manufacturing boxes of three types – plastic, wood and glass. The ratio of the numbers of plastic, wood and glass boxes is 2 : 3 : 5. The difference between the numbers of wood and glass boxes is 144. If the number of plastic boxes is increased by 25%, then what will be the number of plastic boxes now?

- Ans
- 1. 144
 - 2. 360
 - 3. 216
 - 4. 180

Question ID : 264330103318
Option 1 ID : 264330405577
Option 2 ID : 264330405580
Option 3 ID : 264330405579
Option 4 ID : 264330405578
Status : Answered
Chosen Option : 4

Q.40 The fraction equivalent to $\frac{1}{5}\%$ is:

- Ans
- 1. $\frac{1}{125}$
 - 2. $\frac{1}{200}$
 - 3. $\frac{1}{40}$
 - 4. $\frac{1}{500}$

Question ID : 264330145076
Option 1 ID : 264330568560
Option 2 ID : 264330568561
Option 3 ID : 264330568559
Option 4 ID : 264330568562
Status : Answered
Chosen Option : 4

Q.41 After deducting a commission of 20%, a DVD set costs ₹9,080. Its marked price is:

- Ans
- 1. ₹11,200
 - 2. ₹11,350
 - 3. ₹10,000
 - 4. ₹10,100

Question ID : 264330130930
Option 1 ID : 264330512832
Option 2 ID : 264330512834
Option 3 ID : 264330512831
Option 4 ID : 264330512833
Status : Answered
Chosen Option : 2

Q.42 Anandi bought a smart watch from an electronic store for Rs.4,400. Since she had less money, she paid Rs.2,000 for down payment and the shopkeeper offered her an alternative to pay Rs.2,440 after 1 month. Find the rate of interest being charged at simple interest by the shopkeeper in this instalment option?

- Ans 1. 20%
 2. 10%
 3. 22%
 4. 15%

Question ID : 26433063338
Option 1 ID : 264330248005
Option 2 ID : 264330248006
Option 3 ID : 264330248007
Option 4 ID : 264330248004
Status : Answered
Chosen Option : 1

Q.43 PQR is a triangle. The bisectors of the internal angle $\angle Q$ and external angle $\angle R$ intersect at S. If $\angle QSR = 40^\circ$, then $\angle P$ is:

- Ans 1. 40°
 2. 60°
 3. 80°
 4. 30°

Question ID : 264330165660
Option 1 ID : 264330649720
Option 2 ID : 264330649721
Option 3 ID : 264330649722
Option 4 ID : 264330649719
Status : Answered
Chosen Option : 3

Q.44 If $x^4 + y^4 = x^2y^2$, then the value of $x^6 + y^6$ is:

- Ans 1. 2
 2. 0
 3. 1
 4. 3

Question ID : 264330157762
Option 1 ID : 264330618409
Option 2 ID : 264330618407
Option 3 ID : 264330618408
Option 4 ID : 264330618410
Status : Answered
Chosen Option : 1

Q.45 The given table shows the number of students from 4 schools during 2022-2023.

Schools	Total no. of students	Boys	Girls
A	2060	1339	721
B	1880	1034	846
C	2200	990	1210
D	1680	924	756

What is the percentage of girls in school B?

- Ans
- 1. 65%
 - 2. 45%
 - 3. 60%
 - 4. 55%

Question ID : 264330165489

Option 1 ID : 264330649038

Option 2 ID : 264330649035

Option 3 ID : 264330649037

Option 4 ID : 264330649036

Status : Answered

Chosen Option : 2

Q.46 E, F, G, and H are four points lying on the circumference of a circle to make a cyclic quadrilateral. If $\angle FGH = 57^\circ$, then what will be the measure of the $\angle HEF$?

- Ans
- 1. 33°
 - 2. 123°
 - 3. 93°
 - 4. 143°

Question ID : 264330165694

Option 1 ID : 264330649855

Option 2 ID : 264330649857

Option 3 ID : 264330649856

Option 4 ID : 264330649858

Status : Answered

Chosen Option : 2

Q.47 The square root of $(\frac{1}{4}) \times (\frac{1}{9}) \times (\frac{1}{25}) \times (\frac{1}{49}) \div (\frac{36}{121})$ is:

- Ans
- 1. $\frac{11}{1260}$
 - 2. $\frac{1260}{11}$
 - 3. $\frac{11}{12.60}$
 - 4. $\frac{1}{1260}$

Question ID : 26433063987

Option 1 ID : 264330250540

Option 2 ID : 264330250542

Option 3 ID : 264330250543

Option 4 ID : 264330250541

Status : Answered

Chosen Option : 1

Q.48 If the radius of a hemispherical balloon increases from 4 cm to 7 cm as air is pumped into it, find the ratio of the surface area of the new balloon to its original.

- Ans
- 1. 16 : 21
 - 2. 49 : 16
 - 3. 20 : 49
 - 4. 21 : 12

Question ID : 264330103638
Option 1 ID : 264330406860
Option 2 ID : 264330406857
Option 3 ID : 264330406859
Option 4 ID : 264330406858
Status : Answered
Chosen Option : 2

Q.49 The sales of batteries (in lakhs) manufactured by a company over the years are shown in the given table.

YEAR	TYPES OF BATTERIES					
	4AH	7AH	32AH	35AH	55AH	Total
1992	75	144	114	102	108	543
1993	90	126	102	84	126	528
1994	96	114	75	105	135	525
1995	105	90	150	90	75	510
1996	90	75	135	75	90	465
1997	105	60	165	45	120	495
1998	115	85	160	100	145	605

Which type of battery had the highest total sales over the last seven years?

- Ans
- 1. 32 AH
 - 2. 35 AH
 - 3. 4 AH
 - 4. 55 AH

Question ID : 264330145025
Option 1 ID : 264330568356
Option 2 ID : 264330568357
Option 3 ID : 264330568355
Option 4 ID : 264330568358
Status : Answered
Chosen Option : 1

Q.50 Study the given table and answer the question that follows.
The table shows the number of students studying in 6 different classes of 6 different schools.

Schools	V	VI	VII	VIII	IX	X
P	152	160	145	156	147	144
Q	148	166	150	155	157	143
R	161	152	140	145	143	165
S	159	142	149	140	142	168
T	147	144	158	163	154	150
U	150	160	162	160	160	140
Total	917	924	904	919	903	910

Which class has the maximum number of students from all schools together?

- Ans
- 1. X
 - 2. VII
 - 3. VI
 - 4. V

Question ID : 264330157724

Option 1 ID : 264330618258

Option 2 ID : 264330618257

Option 3 ID : 264330618256

Option 4 ID : 264330618255

Status : Answered

Chosen Option : 3

Section : English Comprehension

Q.1 Select the most appropriate synonym of the given word.

Spontaneous

- Ans
- 1. Attractive
 - 2. Exhaustive
 - 3. Instinctive
 - 4. Acquisitive

Question ID : 264330163330

Option 1 ID : 264330640622

Option 2 ID : 264330640621

Option 3 ID : 264330640619

Option 4 ID : 264330640620

Status : Answered

Chosen Option : 3

Q.2 Some words in the following sentence have been underlined and given as options.

Select the option that contains a spelling error.

The rolling waves on the beach were so trainquil and soothing.

- Ans
- 1. beach
 - 2. trainquil
 - 3. soothing
 - 4. rolling

Question ID : 264330121270

Option 1 ID : 264330475284

Option 2 ID : 264330475285

Option 3 ID : 264330475286

Option 4 ID : 264330475283

Status : Answered

Chosen Option : 2

Q.3 Parts of the following sentence have been given as options. Select the option that contains an error.

Rani was extreme upset with her results this year.

- Ans
- 1. extreme upset
 - 2. this year
 - 3. with her results
 - 4. Rani was

Question ID : 264330134123
Option 1 ID : 264330525516
Option 2 ID : 264330525518
Option 3 ID : 264330525517
Option 4 ID : 264330525515
Status : Answered
Chosen Option : 1

Q.4 Four words have been underlined in the given sentence of which one word has a spelling error. Identify the incorrectly spelt word.

The tiger thrshed (A) against his chains (B) in the cage at the circus (C) but nobody paid him any heed (D).

- Ans
- 1. thrshed
 - 2. circus
 - 3. chains
 - 4. heed

Question ID : 264330122806
Option 1 ID : 264330481291
Option 2 ID : 264330481293
Option 3 ID : 264330481292
Option 4 ID : 264330481294
Status : Answered
Chosen Option : 1

Q.5 Select the most appropriate meaning of the underlined idiom.

We've sent a very strong protest letter. That should make them sit up and take notice.

- Ans
- 1. Follow
 - 2. Attend
 - 3. Observe
 - 4. Consider

Question ID : 26433099070
Option 1 ID : 264330388916
Option 2 ID : 264330388915
Option 3 ID : 264330388913
Option 4 ID : 264330388914
Status : Answered
Chosen Option : 4

Q.6 Select the most appropriate ANTONYM of the given word.

Defunct

- Ans 1. Stoicism
 2. Extant
 3. Convoluted
 4. Redundant

Question ID : 264330163400
Option 1 ID : 264330640881
Option 2 ID : 264330640882
Option 3 ID : 264330640880
Option 4 ID : 264330640879
Status : Answered
Chosen Option : 1

Q.7 You are preparing a speech for the upcoming function. Select a synonym for the highlighted word to make it better.
The education system must evolve to keep pace with the rapid changes in the job market.

- Ans 1. Emanate
 2. Censor
 3. Demolish
 4. Conceal

Question ID : 264330121903
Option 1 ID : 264330477768
Option 2 ID : 264330477770
Option 3 ID : 264330477767
Option 4 ID : 264330477769
Status : Answered
Chosen Option : 1

Q.8 Select the option that will improve the underlined part of the given sentence.
The village Seoni is located 113 km away from the capital city of MP, Bhopal.

- Ans 1. adjacent from city capital of MP, Bhopal
 2. far from the capital city of MP, Bhopal
 3. near from the city capital of MP, Bhopal
 4. proximate from capital of MP, Bhopal

Question ID : 264330145290
Option 1 ID : 264330569415
Option 2 ID : 264330569418
Option 3 ID : 264330569416
Option 4 ID : 264330569417
Status : Answered
Chosen Option : 2

Q.9 Select the sentence that has a spelling error.

A- Keeping cities clean and free of germs is particularly essential for keeping their residents healthy.

B- Our health depends not just on our nutrition and personal hygiene but also on how we clean our cities and surroundings.

C- The spread of various diseases is intricately linked to the deteriorating state of public health condition.

D- The good news is that waste management, to keep cities clean, is now getting attention through the Swachh Bharat Mission.

- Ans
- 1. The good news is that waste management, to keep cities clean, is now getting attention through the Swachh Bharat Mission.
 - 2. The spread of various diseases is intricately linked to the deteriorating state of public health condition.
 - 3. Keeping cities clean and free of germs is particularly essential for keeping their residents healthy.
 - 4. Our health depends not just on our nutrition and personal hygiene but also on how we clean our cities and surroundings.

Question ID : 264330141564

Option 1 ID : 264330554594

Option 2 ID : 264330554593

Option 3 ID : 264330554591

Option 4 ID : 264330554592

Status : Answered

Chosen Option : 4

Q.10 Select the most appropriate option that can substitute the underlined word in the given sentence.

The new professor is liked by his students for his amiable approach.

- Ans
- 1. simple
 - 2. strict
 - 3. academic
 - 4. friendly

Question ID : 264330117217

Option 1 ID : 264330460932

Option 2 ID : 264330460929

Option 3 ID : 264330460931

Option 4 ID : 264330460930

Status : Answered

Chosen Option : 4

Q.11 Select the option that can be used as a one-word substitute for the given group of words.

Spoken or done without any previous thought or preparation

- Ans
- 1. Inaugural
 - 2. Maiden
 - 3. Extempore
 - 4. Initiative

Question ID : 26433088197

Option 1 ID : 264330346381

Option 2 ID : 264330346382

Option 3 ID : 264330346384

Option 4 ID : 264330346383

Status : Answered

Chosen Option : 3

Q.12 Select the option that can be used as a one-word substitute for the given group of words.

A place where coins are made

- Ans
- 1. Trough
 - 2. Post Office
 - 3. Grove
 - 4. Mint

Question ID : 26433088757
Option 1 ID : 264330348582
Option 2 ID : 264330348583
Option 3 ID : 264330348581
Option 4 ID : 264330348584
Status : Answered
Chosen Option : 4

Q.13 Select the most appropriate ANTONYM of the given word.
Vague

- Ans
- 1. Elegant
 - 2. Regal
 - 3. Definite
 - 4. Dwarf

Question ID : 264330164276
Option 1 ID : 264330644329
Option 2 ID : 264330644330
Option 3 ID : 264330644327
Option 4 ID : 264330644328
Status : Answered
Chosen Option : 4

Q.14 Select the option that can be used as a one-word substitute for the given group of words.

Something of monstrous size or power

- Ans
- 1. Bulk
 - 2. Amazon
 - 3. Heavyweight
 - 4. Behemoth

Question ID : 26433088439
Option 1 ID : 264330347342
Option 2 ID : 264330347341
Option 3 ID : 264330347344
Option 4 ID : 264330347343
Status : Answered
Chosen Option : 4

Q.15 Select the most appropriate idiomatic expression to fill in the blank.

Our Director took a meeting and asked us to express our views on _____ of the new HR policy.

- Ans
- 1. the bandwagon
 - 2. the pros and cons
 - 3. the hook
 - 4. the ups and downs

Question ID : 26433092080
Option 1 ID : 264330361644
Option 2 ID : 264330361641
Option 3 ID : 264330361643
Option 4 ID : 264330361642
Status : Answered
Chosen Option : 2

Q.16 Select the most appropriate idiom that can substitute the underlined segment in the given sentence.

He got a burst of energy and started digging again.

- Ans
- 1. took bull by the horns
 - 2. a fancy of someone
 - 3. second wind
 - 4. heart on the sleeve

Question ID : 264330117164
Option 1 ID : 264330460723
Option 2 ID : 264330460724
Option 3 ID : 264330460721
Option 4 ID : 264330460722
Status : Answered
Chosen Option : 3

Q.17 Select the most appropriate ANTONYM of the given word.
Brave

- Ans
- 1. Elegant
 - 2. Cordial
 - 3. Cowardly
 - 4. Courageous

Question ID : 264330164167
Option 1 ID : 264330643922
Option 2 ID : 264330643919
Option 3 ID : 264330643921
Option 4 ID : 264330643920
Status : Answered
Chosen Option : 3

Q.18 Select the most appropriate synonym of the given word.

Behold

- Ans 1. Look
 2. Burden
 3. Fortunate
 4. Predict

Question ID : 264330163370
Option 1 ID : 264330640769
Option 2 ID : 264330640770
Option 3 ID : 264330640768
Option 4 ID : 264330640767
Status : Answered
Chosen Option : 2

Q.19 Select the most appropriate option that can substitute the underlined segment in the given sentence.

A gust of wind came abruptly and our sand castle topped.

- Ans 1. tumbled down
 2. ran after
 3. turned up
 4. blew out

Question ID : 26433099884
Option 1 ID : 264330392127
Option 2 ID : 264330392126
Option 3 ID : 264330392128
Option 4 ID : 264330392125
Status : Answered
Chosen Option : 1

Q.20 Parts of the following sentence have been given as options. One of them may contain an error. Select the part that contains the error from the given options. If you don't find any error, mark 'No error' as your answer.

Luckily, I managed to get a room in the college hostel, and I move in there.

- Ans 1. and I move in there
 2. Luckily, I managed to get a room
 3. in the college hostel
 4. No error

Question ID : 26433090493
Option 1 ID : 264330355423
Option 2 ID : 264330355421
Option 3 ID : 264330355422
Option 4 ID : 264330355424
Status : Answered
Chosen Option : 1

Q.21 Select the most appropriate meaning of the given idiom.
Open your heart

- Ans
- 1. Immediately think of something
 - 2. Share your deepest feelings
 - 3. Feel relieved because the stress is removed
 - 4. Could do something very easily

Question ID : 264330135999
Option 1 ID : 264330532838
Option 2 ID : 264330532835
Option 3 ID : 264330532836
Option 4 ID : 264330532837
Status : Answered
Chosen Option : 2

Q.22 Select the most appropriate one-word substitution of the given group of words.

A list of source materials that are used or consulted in the preparation of a work or that are referred to in the text.

- Ans
- 1. Bibliography
 - 2. Bibliophile
 - 3. Bibliotheca
 - 4. Bibliomemoir

Question ID : 26433090850
Option 1 ID : 264330356810
Option 2 ID : 264330356809
Option 3 ID : 264330356812
Option 4 ID : 264330356811
Status : Answered
Chosen Option : 1

Q.23 Select the most appropriate idiom to fill in the blank.

The company had some initial problems, but now it is _____.

- Ans
- 1. flying like a rock
 - 2. flying the nest
 - 3. flying a kite
 - 4. flying high

Question ID : 264330163338
Option 1 ID : 264330640654
Option 2 ID : 264330640653
Option 3 ID : 264330640651
Option 4 ID : 264330640652
Status : Answered
Chosen Option : 4

Q.24 Select the most appropriate meaning of the given idiom.
Burn one's bridges

- Ans
- 1. Working very hard
 - 2. Impossible to return to an earlier state
 - 3. Having an overnight success
 - 4. Attack on one's enemy

Question ID : 264330135902
Option 1 ID : 264330532464
Option 2 ID : 264330532463
Option 3 ID : 264330532466
Option 4 ID : 264330532465
Status : Answered
Chosen Option : 2

Q.25 Select the option that can be used as a one-word substitute for the given group of words.

An ability to do several things at the same time.

- Ans
- 1. Indictment
 - 2. Blasphemy
 - 3. Unitasking
 - 4. Multitasking

Question ID : 26433088967
Option 1 ID : 264330349408
Option 2 ID : 264330349407
Option 3 ID : 264330349405
Option 4 ID : 264330349406
Status : Answered
Chosen Option : 4

Q.26 Select the most appropriate meaning of the underlined idiom that can be substituted in the following sentence.

Right now, my hands are full.

- Ans
- 1. My hands are filled up
 - 2. My hands are swollen
 - 3. I'm very tired
 - 4. I'm very busy

Question ID : 26433094758
Option 1 ID : 264330371865
Option 2 ID : 264330371866
Option 3 ID : 264330371868
Option 4 ID : 264330371867
Status : Answered
Chosen Option : 4

Q.27 Select the INCORRECTLY spelt word.

- Ans
- 1. Click
 - 2. Caricature
 - 3. Cumbersome
 - 4. Cumulative

Question ID : 26433089392
Option 1 ID : 264330351072
Option 2 ID : 264330351070
Option 3 ID : 264330351071
Option 4 ID : 264330351069
Status : Answered
Chosen Option : 2

Q.28 Select the most appropriate ANTONYM of the given word.
Credit

- Ans
- 1. Litigate
 - 2. Install
 - 3. Debit
 - 4. Impute

Question ID : 26433096221
Option 1 ID : 264330377640
Option 2 ID : 264330377639
Option 3 ID : 264330377637
Option 4 ID : 264330377638
Status : Answered
Chosen Option : 3

Q.29 Select the most appropriate meaning of the given idiom.
Boil the ocean

- Ans
- 1. Something very big
 - 2. Something which gets hot gradually
 - 3. Try to do something impossible
 - 4. To make someone very angry

Question ID : 264330135901
Option 1 ID : 264330532460
Option 2 ID : 264330532461
Option 3 ID : 264330532462
Option 4 ID : 264330532459
Status : Answered
Chosen Option : 3

Q.30 The following sentence has been split into four segments. Identify the segment that contains a grammatical error.
"You look so young! / When did you completed your graduation?" / asked Rekha / to her neighbour.

- Ans**
- 1. to her neighbour
 - 2. When did you completed your graduation?
 - 3. asked Rekha
 - 4. You look so young!

Question ID : 264330139157
Option 1 ID : 264330545206
Option 2 ID : 264330545204
Option 3 ID : 264330545205
Option 4 ID : 264330545203
Status : Answered
Chosen Option : 2

Q.31 Select the correct spelling of the incorrectly spelt word.

Diplomats believe that buaraucratic delays are inevitable.

- Ans**
- 1. inivitable
 - 2. burocratic
 - 3. beleave
 - 4. bureaucratic

Question ID : 26433088980
Option 1 ID : 264330349458
Option 2 ID : 264330349457
Option 3 ID : 264330349460
Option 4 ID : 264330349459
Status : Answered
Chosen Option : 4

Q.32 Select the option that can be used as a one-word substitute for the given group of words.

The compulsion to tell lies

- Ans**
- 1. Pyromania
 - 2. Nymphomania
 - 3. Megalomania
 - 4. Mythomania

Question ID : 26433088995
Option 1 ID : 264330349519
Option 2 ID : 264330349520
Option 3 ID : 264330349517
Option 4 ID : 264330349518
Status : Not Answered
Chosen Option : --

Q.33 Select the most appropriate ANTONYM of the word 'hinderance' in the given sentence and choose the correct option.

The refreshing breeze blew through the open window, bringing relief from the summer heat.

- Ans
- 1. Bringing
 - 2. Blew
 - 3. Refreshing
 - 4. Relief

Question ID : 264330163537
Option 1 ID : 264330641405
Option 2 ID : 264330641404
Option 3 ID : 264330641403
Option 4 ID : 264330641406
Status : Answered
Chosen Option : 4

Q.34 The following sentence has been divided into parts. One of them may contain an error. Select the part that contains the error from the given options. If you don't find any error, mark 'No error' as your answer.
Neem tastes / a little bitterly, / but is very useful.

- Ans
- 1. a little bitterly
 - 2. Neem tastes
 - 3. but is very useful
 - 4. No error

Question ID : 264330117146
Option 1 ID : 264330460654
Option 2 ID : 264330460653
Option 3 ID : 264330460655
Option 4 ID : 264330460656
Status : Answered
Chosen Option : 1

Q.35 Select the option that can be used as a one-word substitute for the given group of words.

Someone who pretends to have certain moral standards while secretly that person practices those very moral lapses.

- Ans
- 1. Sinner
 - 2. Actor
 - 3. Spy
 - 4. Hypocrite

Question ID : 26433088806
Option 1 ID : 264330348778
Option 2 ID : 264330348777
Option 3 ID : 264330348780
Option 4 ID : 264330348779
Status : Answered
Chosen Option : 4

Q.36 Select the most appropriate idiomatic expression to substitute for the underlined segment in the given sentence.

I had to work late in the night for nearly three months to write my first book.

- Ans
- 1. to take a back seat
 - 2. to burn the midnight oil
 - 3. to blow a fuse
 - 4. to look through coloured glasses

Question ID : 26433092082
Option 1 ID : 264330361650
Option 2 ID : 264330361652
Option 3 ID : 264330361649
Option 4 ID : 264330361651
Status : Answered
Chosen Option : 2

Q.37 Select the option that can be used as a one-word substitute for the given group of words.

A person who does not eat any animal product

- Ans
- 1. Vegetarian
 - 2. Veggie
 - 3. Vegan
 - 4. Non-vegetarian

Question ID : 26433088897
Option 1 ID : 264330349133
Option 2 ID : 264330349136
Option 3 ID : 264330349135
Option 4 ID : 264330349134
Status : Answered
Chosen Option : 3

Q.38 Select the most appropriate meaning of the underlined idiom.
You must lie in the bed you have made.

- Ans
- 1. Face the unpleasant consequences of your own acts
 - 2. Sleep on the bed you made yourself
 - 3. Sleep in your own bed
 - 4. Be contended always

Question ID : 26433098330
Option 1 ID : 264330385975
Option 2 ID : 264330385974
Option 3 ID : 264330385973
Option 4 ID : 264330385976
Status : Answered
Chosen Option : 1

Q.39 The following sentence has been split into four segments. Identify the segment that contains a grammatical error.

The postman / delivers the letters / through hand, / door to door.

- Ans**
- 1. The postman
 - 2. delivers the letters
 - 3. door to door
 - 4. through hand

Question ID : 264330145282

Option 1 ID : 264330569383

Option 2 ID : 264330569384

Option 3 ID : 264330569386

Option 4 ID : 264330569385

Status : Answered

Chosen Option : 4

Q.40 Select the most appropriate ANTONYM of the given word.

Demolish

- Ans**
- 1. Inferior
 - 2. Annihilate
 - 3. Unmethodical
 - 4. Fabricate

Question ID : 264330163373

Option 1 ID : 264330640780

Option 2 ID : 264330640781

Option 3 ID : 264330640782

Option 4 ID : 264330640779

Status : Answered

Chosen Option : 1

Comprehension:

In the following passage, some words have been deleted. Read the passage carefully and select the most appropriate option to fill in each blank.

It is said that everyone lives (1)_____ selling something. What you can (2)_____ from this statement is that teachers live by selling knowledge, philosophers live by selling wisdom and priests earn their living by selling spiritual comfort. Though it may be possible to measure the value of material goods in terms of money, it is extremely difficult to (3)_____ the true value of the services which people perform for us. There are times when we would (4)_____ give everything we possess to save our lives, yet we might grudge paying a surgeon a high fee for offering us precisely the same service. The (5)_____ of society are such that skills have to be paid for in the same way that goods are paid for at a shop.

SubQuestion No : 41

Q.41 Select the most appropriate option to fill in blank number 1.

- Ans**
- 1. by
 - 2. over
 - 3. of
 - 4. into

Question ID : 264330163286

Option 1 ID : 264330640448

Option 2 ID : 264330640449

Option 3 ID : 264330640450

Option 4 ID : 264330640447

Status : Answered

Chosen Option : 1

Comprehension:

In the following passage, some words have been deleted. Read the passage carefully and select the most appropriate option to fill in each blank.

It is said that everyone lives (1)_____ selling something. What you can (2)_____ from this statement is that teachers live by selling knowledge, philosophers live by selling wisdom and priests earn their living by selling spiritual comfort. Though it may be possible to measure the value of material goods in terms of money, it is extremely difficult to (3)_____ the true value of the services which people perform for us. There are times when we would (4)_____ give everything we possess to save our lives, yet we might grudge paying a surgeon a high fee for offering us precisely the same service. The (5)_____ of society are such that skills have to be paid for in the same way that goods are paid for at a shop.

SubQuestion No : 42**Q.42** Select the most appropriate option to fill in blank number 2.

- Ans 1. separate
 2. derive
 3. revive
 4. choose

Question ID : 264330163287

Option 1 ID : 264330640454

Option 2 ID : 264330640453

Option 3 ID : 264330640451

Option 4 ID : 264330640452

Status : Answered

Chosen Option : 2

Comprehension:

In the following passage, some words have been deleted. Read the passage carefully and select the most appropriate option to fill in each blank.

It is said that everyone lives (1)_____ selling something. What you can (2)_____ from this statement is that teachers live by selling knowledge, philosophers live by selling wisdom and priests earn their living by selling spiritual comfort. Though it may be possible to measure the value of material goods in terms of money, it is extremely difficult to (3)_____ the true value of the services which people perform for us. There are times when we would (4)_____ give everything we possess to save our lives, yet we might grudge paying a surgeon a high fee for offering us precisely the same service. The (5)_____ of society are such that skills have to be paid for in the same way that goods are paid for at a shop.

SubQuestion No : 43**Q.43** Select the most appropriate option to fill in blank number 3.

- Ans 1. extort
 2. mock
 3. conceal
 4. estimate

Question ID : 264330163288

Option 1 ID : 264330640456

Option 2 ID : 264330640457

Option 3 ID : 264330640455

Option 4 ID : 264330640458

Status : Answered

Chosen Option : 4

Comprehension:

In the following passage, some words have been deleted. Read the passage carefully and select the most appropriate option to fill in each blank.

It is said that everyone lives (1)_____ selling something. What you can (2)_____ from this statement is that teachers live by selling knowledge, philosophers live by selling wisdom and priests earn their living by selling spiritual comfort. Though it may be possible to measure the value of material goods in terms of money, it is extremely difficult to (3)_____ the true value of the services which people perform for us. There are times when we would (4)_____ give everything we possess to save our lives, yet we might grudge paying a surgeon a high fee for offering us precisely the same service. The (5)_____ of society are such that skills have to be paid for in the same way that goods are paid for at a shop.

SubQuestion No : 44**Q.44 Select the most appropriate option to fill in blank number 4.**

- Ans 1. willingly
 2. thoroughly
 3. perfectly
 4. thoughtfully

Question ID : 264330163289

Option 1 ID : 264330640459

Option 2 ID : 264330640460

Option 3 ID : 264330640461

Option 4 ID : 264330640462

Status : Answered

Chosen Option : 1

Comprehension:

In the following passage, some words have been deleted. Read the passage carefully and select the most appropriate option to fill in each blank.

It is said that everyone lives (1)_____ selling something. What you can (2)_____ from this statement is that teachers live by selling knowledge, philosophers live by selling wisdom and priests earn their living by selling spiritual comfort. Though it may be possible to measure the value of material goods in terms of money, it is extremely difficult to (3)_____ the true value of the services which people perform for us. There are times when we would (4)_____ give everything we possess to save our lives, yet we might grudge paying a surgeon a high fee for offering us precisely the same service. The (5)_____ of society are such that skills have to be paid for in the same way that goods are paid for at a shop.

SubQuestion No : 45**Q.45 Select the most appropriate option to fill in blank number 5.**

- Ans 1. obstacles
 2. interferences
 3. conditions
 4. connections

Question ID : 264330163290

Option 1 ID : 264330640466

Option 2 ID : 264330640463

Option 3 ID : 264330640465

Option 4 ID : 264330640464

Status : Answered

Chosen Option : 3

Comprehension:

Read the given passage carefully and answer the questions that follow.

As a society, we have come a long way in terms of progress and development. We have eradicated diseases, explored space, and created technological wonders that were once thought impossible. Yet, there is still one issue that continues to plague us: stupidity. Yes, stupidity. The thing that seems to be contagious and has been spreading faster than the common cold. It's everywhere you look - on social media, in politics, in the workplace. You can't escape it.

It's as if we've all collectively decided that intelligence and common sense are no longer important. Why bother using your brain when you can just rely on your gut feelings and conspiracy theories?

Take politics, for example. It used to be that politicians were expected to be knowledgeable and well-informed about the issues they were dealing with. Now, it seems that all you need is a catchy slogan and some empty promises to win an election.

And don't even get me started on social media. It's a breeding ground for stupidity. People will believe anything they read as long as it confirms their preconceived biases. And don't even think about trying to present them with actual facts and evidence. That's just a waste of time. But it's not just individuals who are to blame for this epidemic of stupidity. Our education system is failing us as well. We're teaching our kids how to pass tests instead of how to think critically and solve problems. It's no wonder we have a generation of adults who can't even find their way around a basic math problem.

Of course, there are some who would argue that stupidity is just a different way of thinking. That it's a valid perspective that deserves to be respected. To those people, I say this: if you want to be stupid, go ahead. Just don't expect the rest of us to respect your opinions when they're based on nothing but ignorance and misinformation.

It's time for us to take a stand against stupidity. We need to start valuing intelligence and critical thinking again. We need to hold our leaders accountable for their actions and demand that they be knowledgeable and well-informed. We need to teach our children how to think, not just how to memorise.

It won't be easy, but it's a fight worth fighting. Because if we don't, we'll be stuck in a world where stupidity reigns supreme, and there's no telling what kind of damage that could do. So let's all do our part and start using our brains again. It's time to put an end to the epidemic of stupidity once and for all.

SubQuestion No : 46

Q.46 Which of the following techniques has been used by the author of the passage to convey the message?

- Ans
- 1. Examples and anecdotes
 - 2. Factual and chronological account
 - 3. Humour and exaggeration
 - 4. Parody and mimicry

Question ID : 264330165143

Option 1 ID : 264330647677

Option 2 ID : 264330647675

Option 3 ID : 264330647676

Option 4 ID : 264330647678

Status : Answered

Chosen Option : 1

Comprehension:

Read the given passage carefully and answer the questions that follow.

As a society, we have come a long way in terms of progress and development. We have eradicated diseases, explored space, and created technological wonders that were once thought impossible. Yet, there is still one issue that continues to plague us: stupidity. Yes, stupidity. The thing that seems to be contagious and has been spreading faster than the common cold. It's everywhere you look - on social media, in politics, in the workplace. You can't escape it.

It's as if we've all collectively decided that intelligence and common sense are no longer important. Why bother using your brain when you can just rely on your gut feelings and conspiracy theories?

Take politics, for example. It used to be that politicians were expected to be knowledgeable and well-informed about the issues they were dealing with. Now, it seems that all you need is a catchy slogan and some empty promises to win an election.

And don't even get me started on social media. It's a breeding ground for stupidity. People will believe anything they read as long as it confirms their preconceived biases. And don't even think about trying to present them with actual facts and evidence. That's just a waste of time. But it's not just individuals who are to blame for this epidemic of stupidity. Our education system is failing us as well. We're teaching our kids how to pass tests instead of how to think critically and solve problems. It's no wonder we have a generation of adults who can't even find their way around a basic math problem.

Of course, there are some who would argue that stupidity is just a different way of thinking. That it's a valid perspective that deserves to be respected. To those people, I say this: if you want to be stupid, go ahead. Just don't expect the rest of us to respect your opinions when they're based on nothing but ignorance and misinformation.

It's time for us to take a stand against stupidity. We need to start valuing intelligence and critical thinking again. We need to hold our leaders accountable for their actions and demand that they be knowledgeable and well-informed. We need to teach our children how to think, not just how to memorise.

It won't be easy, but it's a fight worth fighting. Because if we don't, we'll be stuck in a world where stupidity reigns supreme, and there's no telling what kind of damage that could do. So let's all do our part and start using our brains again. It's time to put an end to the epidemic of stupidity once and for all.

SubQuestion No : 47

Q.47 According to the passage, what is the solution to the issue of stupidity in society?

- Ans**
- 1. Embracing ignorance and misinformation
 - 2. Teaching students how to pass tests
 - 3. Electing politicians with catchy slogans
 - 4. Encouraging critical thinking and problem-solving skills

Question ID : 264330165142

Option 1 ID : 264330647671

Option 2 ID : 264330647673

Option 3 ID : 264330647674

Option 4 ID : 264330647672

Status : Answered

Chosen Option : 4

Comprehension:

Read the given passage carefully and answer the questions that follow.

As a society, we have come a long way in terms of progress and development. We have eradicated diseases, explored space, and created technological wonders that were once thought impossible. Yet, there is still one issue that continues to plague us: stupidity. Yes, stupidity. The thing that seems to be contagious and has been spreading faster than the common cold. It's everywhere you look - on social media, in politics, in the workplace. You can't escape it.

It's as if we've all collectively decided that intelligence and common sense are no longer important. Why bother using your brain when you can just rely on your gut feelings and conspiracy theories?

Take politics, for example. It used to be that politicians were expected to be knowledgeable and well-informed about the issues they were dealing with. Now, it seems that all you need is a catchy slogan and some empty promises to win an election.

And don't even get me started on social media. It's a breeding ground for stupidity. People will believe anything they read as long as it confirms their preconceived biases. And don't even think about trying to present them with actual facts and evidence. That's just a waste of time. But it's not just individuals who are to blame for this epidemic of stupidity. Our education system is failing us as well. We're teaching our kids how to pass tests instead of how to think critically and solve problems. It's no wonder we have a generation of adults who can't even find their way around a basic math problem.

Of course, there are some who would argue that stupidity is just a different way of thinking. That it's a valid perspective that deserves to be respected. To those people, I say this: if you want to be stupid, go ahead. Just don't expect the rest of us to respect your opinions when they're based on nothing but ignorance and misinformation.

It's time for us to take a stand against stupidity. We need to start valuing intelligence and critical thinking again. We need to hold our leaders accountable for their actions and demand that they be knowledgeable and well-informed. We need to teach our children how to think, not just how to memorise.

It won't be easy, but it's a fight worth fighting. Because if we don't, we'll be stuck in a world where stupidity reigns supreme, and there's no telling what kind of damage that could do. So let's all do our part and start using our brains again. It's time to put an end to the epidemic of stupidity once and for all.

SubQuestion No : 48

Q.48 What is the tone of the passage?

Ans 1. Sarcastic

2. Serious

3. Melancholic

4. Joyful

Question ID : 264330165139

Option 1 ID : 264330647660

Option 2 ID : 264330647661

Option 3 ID : 264330647662

Option 4 ID : 264330647659

Status : Answered

Chosen Option : 3

Comprehension:

Read the given passage carefully and answer the questions that follow.

As a society, we have come a long way in terms of progress and development. We have eradicated diseases, explored space, and created technological wonders that were once thought impossible. Yet, there is still one issue that continues to plague us: stupidity. Yes, stupidity. The thing that seems to be contagious and has been spreading faster than the common cold. It's everywhere you look - on social media, in politics, in the workplace. You can't escape it.

It's as if we've all collectively decided that intelligence and common sense are no longer important. Why bother using your brain when you can just rely on your gut feelings and conspiracy theories?

Take politics, for example. It used to be that politicians were expected to be knowledgeable and well-informed about the issues they were dealing with. Now, it seems that all you need is a catchy slogan and some empty promises to win an election.

And don't even get me started on social media. It's a breeding ground for stupidity. People will believe anything they read as long as it confirms their preconceived biases. And don't even think about trying to present them with actual facts and evidence. That's just a waste of time. But it's not just individuals who are to blame for this epidemic of stupidity. Our education system is failing us as well. We're teaching our kids how to pass tests instead of how to think critically and solve problems. It's no wonder we have a generation of adults who can't even find their way around a basic math problem.

Of course, there are some who would argue that stupidity is just a different way of thinking. That it's a valid perspective that deserves to be respected. To those people, I say this: if you want to be stupid, go ahead. Just don't expect the rest of us to respect your opinions when they're based on nothing but ignorance and misinformation.

It's time for us to take a stand against stupidity. We need to start valuing intelligence and critical thinking again. We need to hold our leaders accountable for their actions and demand that they be knowledgeable and well-informed. We need to teach our children how to think, not just how to memorise.

It won't be easy, but it's a fight worth fighting. Because if we don't, we'll be stuck in a world where stupidity reigns supreme, and there's no telling what kind of damage that could do. So let's all do our part and start using our brains again. It's time to put an end to the epidemic of stupidity once and for all.

SubQuestion No : 49

Q.49 According to the author of the passage, who among the following is NOT responsible for the spread of stupidity?

- Ans
- 1. Politicians
 - 2. Education system
 - 3. Individuals
 - 4. Children

Question ID : 264330165140

Option 1 ID : 264330647664

Option 2 ID : 264330647665

Option 3 ID : 264330647663

Option 4 ID : 264330647666

Status : Answered

Chosen Option : 4

Comprehension:

Read the given passage carefully and answer the questions that follow.

As a society, we have come a long way in terms of progress and development. We have eradicated diseases, explored space, and created technological wonders that were once thought impossible. Yet, there is still one issue that continues to plague us: stupidity. Yes, stupidity. The thing that seems to be contagious and has been spreading faster than the common cold. It's everywhere you look - on social media, in politics, in the workplace. You can't escape it.

It's as if we've all collectively decided that intelligence and common sense are no longer important. Why bother using your brain when you can just rely on your gut feelings and conspiracy theories?

Take politics, for example. It used to be that politicians were expected to be knowledgeable and well-informed about the issues they were dealing with. Now, it seems that all you need is a catchy slogan and some empty promises to win an election.

And don't even get me started on social media. It's a breeding ground for stupidity. People will believe anything they read as long as it confirms their preconceived biases. And don't even think about trying to present them with actual facts and evidence. That's just a waste of time. But it's not just individuals who are to blame for this epidemic of stupidity. Our education system is failing us as well. We're teaching our kids how to pass tests instead of how to think critically and solve problems. It's no wonder we have a generation of adults who can't even find their way around a basic math problem.

Of course, there are some who would argue that stupidity is just a different way of thinking. That it's a valid perspective that deserves to be respected. To those people, I say this: if you want to be stupid, go ahead. Just don't expect the rest of us to respect your opinions when they're based on nothing but ignorance and misinformation.

It's time for us to take a stand against stupidity. We need to start valuing intelligence and critical thinking again. We need to hold our leaders accountable for their actions and demand that they be knowledgeable and well-informed. We need to teach our children how to think, not just how to memorise.

It won't be easy, but it's a fight worth fighting. Because if we don't, we'll be stuck in a world where stupidity reigns supreme, and there's no telling what kind of damage that could do. So let's all do our part and start using our brains again. It's time to put an end to the epidemic of stupidity once and for all.

SubQuestion No : 50

Q.50 What could be a suitable title for the passage?

- Ans
- 1. The Evils of Social Media
 - 2. The Benefits of Stupidity
 - 3. The Joy of Living in a World of Ignorance
 - 4. The Importance of Critical Thinking

Question ID : 264330165141

Option 1 ID : 264330647667

Option 2 ID : 264330647668

Option 3 ID : 264330647670

Option 4 ID : 264330647669

Status : Answered

Chosen Option : 4

Sub Inspector in Delhi Police and Central Armed Police Forces Examination 2023 Paper I

Roll Number	
Candidate Name	
Venue Name	iON Digital Zone iDZ Purnea
Exam Date	04/10/2023
Exam Time	12:30 PM - 2:30 PM
Subject	SICPO Paper I 2023


Section : General Intelligence and Reasoning

Q.1 Select the option figure in which the given figure is embedded as its part (rotation is NOT allowed).



Ans

✗ 1.



✓ 2.



✗ 3.



✗ 4.



Question ID : 264330117425

Option 1 ID : 264330461742

Option 2 ID : 264330461744

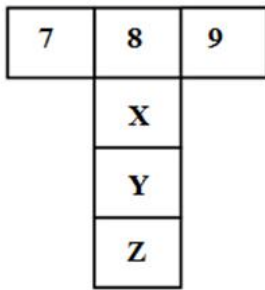
Option 3 ID : 264330461743

Option 4 ID : 264330461741

Status : Answered

Chosen Option : 2

Q.2 If the given sheet is folded to form a cube, which of the following figures is possible?



Ans

✗ 1.



✓ 2.



✗ 3.



✗ 4.



Question ID : 26433059911

Option 1 ID : 264330234478

Option 2 ID : 264330234479

Option 3 ID : 264330234476

Option 4 ID : 264330234477

Status : Answered

Chosen Option : 2

Q.3 Which letter-cluster will replace the question mark (?) to complete the given series?
AXFN, GCJQ, MHNT, ?, YRVZ

- Ans
- 1. SWMR
 - 2. QRLV
 - 3. RLQV
 - 4. SMRW

Question ID : 2643307666
Option 1 ID : 264330300729
Option 2 ID : 264330300728
Option 3 ID : 264330300730
Option 4 ID : 264330300731
Status : Answered
Chosen Option : 4

Q.4 'F \$ G' means 'F is the mother of G'.
'F # G' means 'F is the father of G'.
'F @ G' means 'F is the husband of G'.
'F % G' means 'F is the daughter of G'.
If J @ C \$ B # R, then how is J related to R?

- Ans
- 1. Mother's brother
 - 2. Father
 - 3. Father's sister
 - 4. Father's father

Question ID : 264330145392
Option 1 ID : 264330569823
Option 2 ID : 264330569825
Option 3 ID : 264330569826
Option 4 ID : 264330569824
Status : Answered
Chosen Option : 4

Q.5 In a certain code language, 'SUGAR' is coded as 81 and 'FILL' is coded as 51. How will
'CREAM' be coded in that language?

- Ans
- 1. 52
 - 2. 60
 - 3. 57
 - 4. 55

Question ID : 26433074709
Option 1 ID : 264330292924
Option 2 ID : 264330292927
Option 3 ID : 264330292926
Option 4 ID : 264330292925
Status : Answered
Chosen Option : 4

Q.6 Select the set in which the numbers are related in the same way as are the numbers of the following sets.

(NOTE : Operations should be performed on the whole numbers, without breaking down the numbers into its constituent digits. E.g. 13- Operations on 13 such as adding/subtracting/multiplying etc. to 13 can be performed. Breaking down 13 into 1 and 3 and then performing mathematical operations on 1 and 3 is not allowed.)

(7, 2, 70)

(6, 4, 120)

- Ans**
- 1. (3, 8, 120)
 - 2. (13, 4, 208)
 - 3. (5, 9, 270)
 - 4. (11, 6, 143)

Question ID : 26433057454

Option 1 ID : 264330224801

Option 2 ID : 264330224803

Option 3 ID : 264330224800

Option 4 ID : 264330224802

Status : Answered

Chosen Option : 1

Q.7 Select the option that is related to the third term in the same way as the second term is related to the first term and the sixth term is related to the fifth term.

16 : 106 :: 11 : ? :: 10 : 22

- Ans**
- 1. 36
 - 2. 42
 - 3. 40
 - 4. 31

Question ID : 26433079160

Option 1 ID : 264330310646

Option 2 ID : 264330310644

Option 3 ID : 264330310645

Option 4 ID : 264330310647

Status : Not Attempted and Marked For Review

Chosen Option : --

Q.8 Which figure from the given options would replace the question mark (?) if the following figure series were to be continued?

U	T	C	→	←	C	↑	n	?
↓	D	←	D	D	→	D	↓	

Ans

✗ 1.

↓	D
n	↑

✗ 2.

n	↓
↑	D

✗ 3.

U	T
↓	D

✓ 4.

D	↑
↓	n

Question ID : 264330145479

Option 1 ID : 264330570173

Option 2 ID : 264330570171

Option 3 ID : 264330570172

Option 4 ID : 264330570174

Status : Answered

Chosen Option : 4

Q.9 Which letter-cluster will replace the question mark (?) to complete the given series?
PJVG, VBZB, BTDW, HLHR, ?

- Ans
- 1. NDLN
 - 2. MDLN
 - 3. MDLM
 - 4. NDLM

Question ID : 26433040789

Option 1 ID : 264330159633

Option 2 ID : 264330159631

Option 3 ID : 264330159632

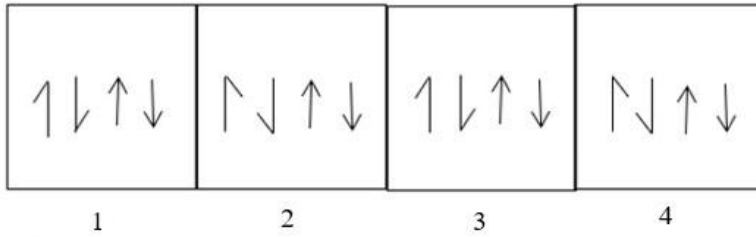
Option 4 ID : 264330159634

Status : Answered

Chosen Option : 4

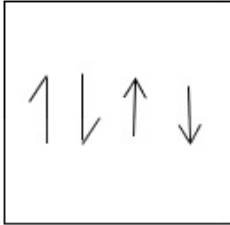


Q.10 Which of the given figures when placed in the 5th position would continue the series that is established by the first four figures?

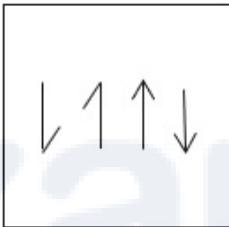


Ans

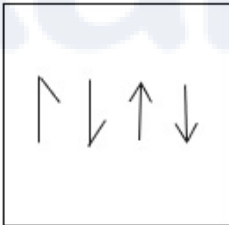
✓ 1.



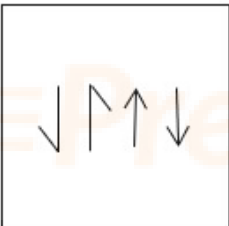
✗ 2.



✗ 3.



✗ 4.



Question ID : 26433087305

Option 1 ID : 264330342858

Option 2 ID : 264330342860

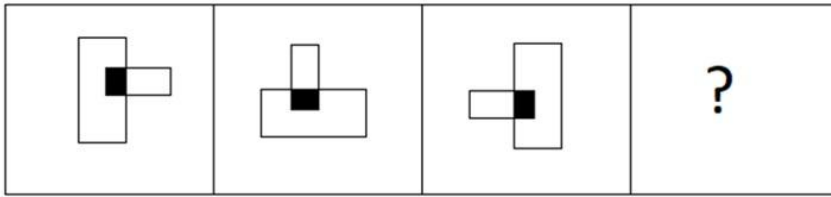
Option 3 ID : 264330342857

Option 4 ID : 264330342859

Status : Answered

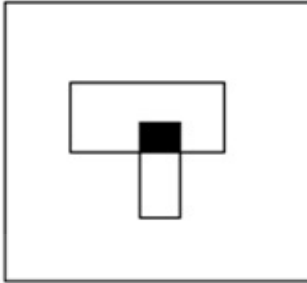
Chosen Option : 1

Q.11 Select the figure that will come next in the following figure series.

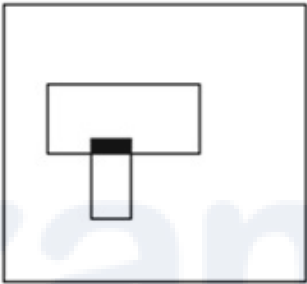


Ans

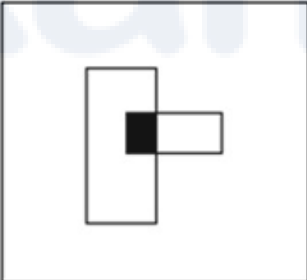
✓ 1.



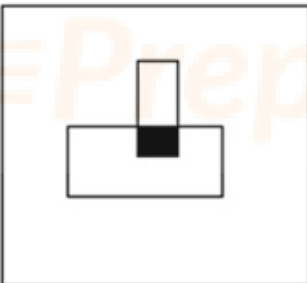
✗ 2.



✗ 3.



✗ 4.



Question ID : 26433087070

Option 1 ID : 264330341924

Option 2 ID : 264330341922

Option 3 ID : 264330341923

Option 4 ID : 264330341921

Status : Answered

Chosen Option : 1

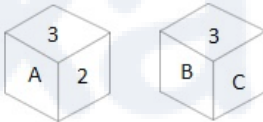
Q.12 Select the correct option that indicates the arrangement of the given words in the order in which they appear in an English dictionary.

1. Doctor
2. Doctorate
3. Docile
4. Documentary
5. Dock
6. Doctrine

- Ans 1. 3, 5, 1, 2, 6, 4
 2. 3, 5, 1, 6, 2, 4
 3. 3, 5, 2, 1, 6, 4
 4. 3, 4, 5, 1, 2, 6,

Question ID : 264330145375
Option 1 ID : 264330569755
Option 2 ID : 264330569758
Option 3 ID : 264330569757
Option 4 ID : 264330569756
Status : Answered
Chosen Option : 3

Q.13 Six characters A, B, C, 1, 2 and 3 are written on different faces of a dice. Two positions of this dice are shown in the figure. Find the character on the face opposite to A.



- Ans 1. C
 2. 2
 3. B
 4. 1

Question ID : 264330109200
Option 1 ID : 264330429079
Option 2 ID : 264330429080
Option 3 ID : 264330429078
Option 4 ID : 264330429077
Status : Answered
Chosen Option : 3

Q.14 Which of the following numbers will replace the question mark (?) in the given series?

$$\frac{1}{121}, \frac{1}{11}, 1, ?, 121$$

- Ans 1. 11
 2. 12
 3. 21
 4. 1

Question ID : 26433092491
Option 1 ID : 264330363254
Option 2 ID : 264330363256
Option 3 ID : 264330363255
Option 4 ID : 264330363253
Status : Answered
Chosen Option : 1

Q.15 Two statements are given, followed by two conclusions numbered I and II. Assuming the statements to be true, even if they seem to be at variance with commonly known facts, decide which of the conclusions logically follow(s) from the statements.

Statements:

Some movies are dramas.

Some dramas are fiction.

Conclusions:

I. Some movies are fiction.

II. All fiction are movies.

- Ans**
- 1. Only conclusion I follows
 - 2. Only conclusion II follows
 - 3. Neither conclusion I nor II follows
 - 4. Both conclusions I and II follow

Question ID : 26433056712

Option 1 ID : 264330221832

Option 2 ID : 264330221833

Option 3 ID : 264330221835

Option 4 ID : 264330221834

Status : Answered

Chosen Option : 3

Q.16 If A denotes '+', B denotes '×', C denotes '−', and D denotes '÷', then what will be the value of the following equation?

22 B 7 C 288 D 12 A 27 = ?

- Ans**
- 1. 160
 - 2. 103
 - 3. 130
 - 4. 157

Question ID : 264330129782

Option 1 ID : 264330508362

Option 2 ID : 264330508359

Option 3 ID : 264330508360

Option 4 ID : 264330508361

Status : Answered

Chosen Option : 4

Q.17 Select the option that is related to the fourth term in the same way as the first term is related to the second term and the fifth term is related to the sixth term.

12 : 64 :: ? : 116 :: 32 : 144

- Ans**
- 1. 25
 - 2. 46
 - 3. 35
 - 4. 14

Question ID : 26433079359

Option 1 ID : 264330311427

Option 2 ID : 264330311426

Option 3 ID : 264330311425

Option 4 ID : 264330311424

Status : Not Attempted and Marked For Review

Chosen Option : --

Q.18 If A denotes '+', B denotes 'x', C denotes '-', and D denotes '÷', then what will be the value of the following equation?
21 B 14 C 154 D 14 A 42 = ?

- Ans
- 1. 357
 - 2. 325
 - 3. 342
 - 4. 352

Question ID : 264330129786
Option 1 ID : 264330508377
Option 2 ID : 264330508376
Option 3 ID : 264330508375
Option 4 ID : 264330508378
Status : Answered
Chosen Option : 2

Q.19 If A denotes '+', B denotes 'x', C denotes '-', and D denotes '÷', then what will come in place of '?' in the following equation?
56 D 8 B 7 = ? B 7

- Ans
- 1. 9
 - 2. 7
 - 3. 8
 - 4. 12

Question ID : 26433067665
Option 1 ID : 264330265175
Option 2 ID : 264330265174
Option 3 ID : 264330265172
Option 4 ID : 264330265173
Status : Answered
Chosen Option : 2

Q.20 Aunt Gloria walked out of her house and walked 65 m towards the east. She took a left turn and walked 28 m. Again, she took a left turn and walked 110 m to reach a public library. How far (shortest distance) and in which direction is the library from Aunt Gloria's house?

- Ans
- 1. 48 m, North-East
 - 2. 48 m, North-West
 - 3. 53 m, North-East
 - 4. 53 m, North-West

Question ID : 26433057306
Option 1 ID : 264330224211
Option 2 ID : 264330224209
Option 3 ID : 264330224208
Option 4 ID : 264330224210
Status : Not Attempted and Marked For Review
Chosen Option : --

Q.21 Select the set in which the numbers are related in the same way as are the numbers of the following set.

(NOTE : Operations should be performed on the whole numbers, without breaking down the numbers into its constituent digits. E.g. 13 – Operations on 13 such as adding /subtracting/ multiplying etc. to 13 can be performed. Breaking down 13 into 1 and 3 and then performing mathematical operations on 1 and 3 is NOT allowed)

(9, 1, 19)
(5, 2, 14)

- Ans
- 1. (3,5,56)
 - 2. (3,2,10)
 - 3. (2,5,12)
 - 4. (4,7,37)

Question ID : 264330145321

Option 1 ID : 264330569539

Option 2 ID : 264330569541

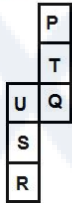
Option 3 ID : 264330569542

Option 4 ID : 264330569540

Status : Not Attempted and Marked For Review

Chosen Option : --

Q.22 A cube is made by folding the given sheet. In the cube so formed, which pair of letters will be on the opposite faces?



- Ans
- 1. T and S
 - 2. R and P
 - 3. P and U
 - 4. U and T

Question ID : 26433065669

Option 1 ID : 264330257238

Option 2 ID : 264330257239

Option 3 ID : 264330257236

Option 4 ID : 264330257237

Status : Answered

Chosen Option : 1

Q.23 A @ B means 'A is the husband of B'
A & B means 'A is the mother of B'
A # B means 'A is the daughter of B'
If Z # L @ P & K @ J # X, then how is K related to Z?

- Ans
- 1. Brother
 - 2. Sister
 - 3. Mother
 - 4. Brother' wife

Question ID : 264330126025

Option 1 ID : 264330493774

Option 2 ID : 264330493772

Option 3 ID : 264330493775

Option 4 ID : 264330493773

Status : Answered

Chosen Option : 1

Q.24 In a certain code language, 'ALIVE' is coded as 64 and 'HALL' is coded as 45. How will 'MOVIE' be coded in that language?

- Ans
- 1. 71
 - 2. 80
 - 3. 79
 - 4. 58

Question ID : 26433074710
Option 1 ID : 264330292929
Option 2 ID : 264330292928
Option 3 ID : 264330292930
Option 4 ID : 264330292931
Status : Answered
Chosen Option : 3

Q.25 Six students Prateek, Sameer, Kabir, Ziya, Joseph, Kiran are sitting around a circular table facing the centre (not necessarily in the same order). Prateek is an immediate neighbour of both Sameer and Kabir. Ziya is sitting second to the right of Sameer. Kiran is sitting third to the left of Kabir. Joseph is an immediate neighbour of both Ziya and Kabir.
Who is an immediate neighbour of Ziya?

- Ans
- 1. Prateek
 - 2. Kabir
 - 3. Sameer
 - 4. Kiran

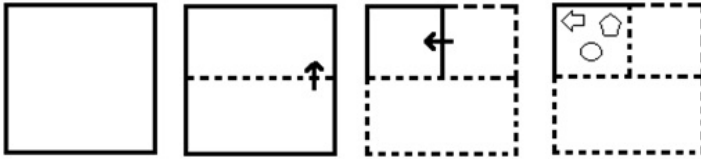
Question ID : 26433082279
Option 1 ID : 264330322950
Option 2 ID : 264330322949
Option 3 ID : 264330322952
Option 4 ID : 264330322951
Status : Answered
Chosen Option : 4

Q.26 If A denotes '+', B denotes '×', C denotes '-', and D denotes '÷', then what will be the value of the following expression?
89 A 94 C 35 D 8 B 8 = ?

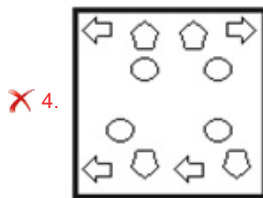
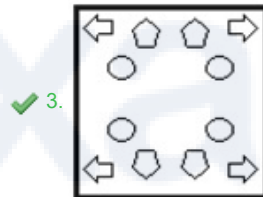
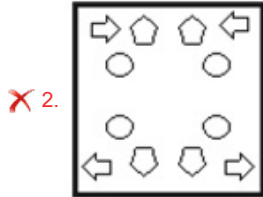
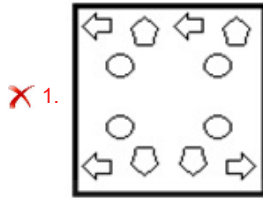
- Ans
- 1. 148
 - 2. 189
 - 3. 169
 - 4. 135

Question ID : 26433085363
Option 1 ID : 264330335156
Option 2 ID : 264330335154
Option 3 ID : 264330335153
Option 4 ID : 264330335155
Status : Answered
Chosen Option : 1

Q.27 The sequence of folding a piece of paper and the manner in which the folded paper is cut is shown in the following figures. How would this paper look when unfolded?



Ans



Question ID : 26433074792

Option 1 ID : 264330293257

Option 2 ID : 264330293259

Option 3 ID : 264330293256

Option 4 ID : 264330293258

Status : Answered

Chosen Option : 3

Q.28 Select the option that represents the letters which, when sequentially placed from left to right in the blanks below, will complete the letter series.

F _ _ Y _ _ K B _ O F _ B Y _

Ans ✗ 1. OFKBOYK

✗ 2. BYOKFOK

✓ 3. KBOFYKO

✗ 4. YOKBFOK

Question ID : 26433086955

Option 1 ID : 264330341462

Option 2 ID : 264330341461

Option 3 ID : 264330341464

Option 4 ID : 264330341463

Status : Answered

Chosen Option : 3

Q.29 Select the option that is related to the fifth letter-cluster in the same way as the second letter-cluster is related to the first letter-cluster and the fourth letter-cluster is related to the third letter-cluster.

INDIA : FKAFX :: ESTONIA : BPQLKFX:: MALAYSIA : ?

- Ans
- 1. JPFXXIXV
 - 2. JXVPFXXI
 - 3. JXIXFXVP
 - 4. JXIXVPFX

Question ID : 264330145395
Option 1 ID : 264330569836
Option 2 ID : 264330569835
Option 3 ID : 264330569837
Option 4 ID : 264330569838
Status : Answered
Chosen Option : 4

Q.30 In a certain code language, 'PAINT' is written as 'ODYTN' and 'BRUSH' is written as 'CMMOZ'. How will 'HOUSE' be written in that language?

- Ans
- 1. WDNOS
 - 2. WPMOC
 - 3. PHYWS
 - 4. PBOMS

Question ID : 26433074758
Option 1 ID : 264330293122
Option 2 ID : 264330293120
Option 3 ID : 264330293121
Option 4 ID : 264330293123
Status : Not Attempted and Marked For Review
Chosen Option : --

Q.31 Select the option that represents the correct order of the given words as they would appear in an English dictionary?

- 1.Wrist
- 2.Wrangle
- 3.Workable
- 4.Wrongful
- 5.Woodland

- Ans
- 1. 3, 5, 2, 1, 4
 - 2. 3, 2, 5, 1, 4
 - 3. 5, 2, 3, 1, 4
 - 4. 5, 3, 2, 1, 4

Question ID : 26433067245
Option 1 ID : 264330263493
Option 2 ID : 264330263492
Option 3 ID : 264330263495
Option 4 ID : 264330263494
Status : Answered
Chosen Option : 4

Q.32 Select the correct mirror image of the given figure when the mirror is placed at MN as shown below.



- Ans
- 1. 8BEYTK@8
 - 2. 8BEYTK@8
 - 3. 8BEYTK@8
 - 4. 8BEYTK@8

Question ID : 26433085395
Option 1 ID : 264330335284
Option 2 ID : 264330335282
Option 3 ID : 264330335283
Option 4 ID : 264330335281
Status : Answered
Chosen Option : 3

Q.33 Two statements are given, followed by two conclusions numbered I and II. Assuming the statements to be true, even if they seem to be at variance with commonly known facts, decide which of the conclusions logically follow(s) from the statements.

Statements:

Some apples are oranges.

All oranges are fruits.

Conclusions:

I) All apples are fruits.

II) Some fruits are oranges.

- Ans
- 1. Neither Conclusion I nor II follows.
 - 2. Only Conclusion II follows.
 - 3. Both Conclusions I and II follow.
 - 4. Only Conclusion I follows

Question ID : 26433067702
Option 1 ID : 264330265323
Option 2 ID : 264330265321
Option 3 ID : 264330265322
Option 4 ID : 264330265320
Status : Answered
Chosen Option : 2

Q.34 Manohar cycles X km towards west and then turns right and cycles Y km to reach his office. Now, the shortest distance between the starting point and his office is 13 km. What can be the value of X and Y, respectively, (in km)?

- Ans
- 1. 12 and 5
 - 2. 8 and 5
 - 3. 11 and 6
 - 4. 6 and 7

Question ID : 264330129770
Option 1 ID : 264330508314
Option 2 ID : 264330508312
Option 3 ID : 264330508313
Option 4 ID : 264330508311
Status : Answered
Chosen Option : 1

Q.35 In a certain code language, 'EARS' is coded as '4268' and 'NICE' is coded as '9723'.
What is the code for 'E' in the given code language?

- Ans 1. 3
 2. 2
 3. 9
 4. 4

Question ID : 264330169653
Option 1 ID : 264330665312
Option 2 ID : 264330665313
Option 3 ID : 264330665314
Option 4 ID : 264330665311
Status : Answered
Chosen Option : 2

Q.36 Six people are sitting around a circular table facing the centre. P sits second to the left of Q. S is an immediate neighbour of both Q and U. T sits second to the left of R. Who is the immediate neighbour of both P and U?

- Ans 1. T
 2. S
 3. Q
 4. R

Question ID : 26433068169
Option 1 ID : 264330267188
Option 2 ID : 264330267190
Option 3 ID : 264330267191
Option 4 ID : 264330267189
Status : Answered
Chosen Option : 1

Q.37 Based on the position in the English alphabetical order, three of the following letter-clusters are alike in some manner and one is different. Select the odd letter-cluster.

- Ans 1. SWYX
 2. PTVU
 3. RVXW
 4. LOQP

Question ID : 264330145353
Option 1 ID : 264330569667
Option 2 ID : 264330569668
Option 3 ID : 264330569670
Option 4 ID : 264330569669
Status : Answered
Chosen Option : 4

Q.38 Four letter-clusters have been given, out of which three are alike in some manner and one is different. Select the odd letter-cluster.

- Ans
- 1. GCKD
 - 2. UQYR
 - 3. XOTP
 - 4. NJRK

Question ID : 264330180754
Option 1 ID : 264330708986
Option 2 ID : 264330708985
Option 3 ID : 264330708983
Option 4 ID : 264330708984
Status : Answered
Chosen Option : 3

Q.39 Two statements are given, followed by two conclusions numbered I and II. Assuming the statements to be true, even if they seem to be at variance with commonly known facts, decide which of the conclusions logically follow(s) from the statements.

Statements:

Some rivers are oceans.

All oceans are beaches.

Conclusions:

I. Some rivers are beaches.

II. All oceans are rivers.

- Ans
- 1. Only conclusion II follows
 - 2. Both conclusions I and II follow
 - 3. Neither conclusion I nor II follows
 - 4. Only conclusion I follows

Question ID : 26433056709
Option 1 ID : 264330221821
Option 2 ID : 264330221822
Option 3 ID : 264330221823
Option 4 ID : 264330221820
Status : Answered
Chosen Option : 4

Q.40 If '+' means 'x', '-' means '÷', 'x' means '+', and '÷' means '-', then what will be the value of the following expression?
 $42 \times 168 - 8 \div 4 + 3 = ?$

- Ans
- 1. 62
 - 2. 45
 - 3. 56
 - 4. 51

Question ID : 264330101246
Option 1 ID : 264330397532
Option 2 ID : 264330397530
Option 3 ID : 264330397531
Option 4 ID : 264330397529
Status : Answered
Chosen Option : 4

Q.41 Select the option that is related to the third word in the same way as the second word is related to the first word.

(The words must be considered as meaningful words and must not be related to each other based on the number of letters/number of consonants/vowels in the word.)

Artist : Painting :: Cobbler : ?

- Ans
- 1. Stitching clothes
 - 2. Fixing shoes
 - 3. Wooden repair work
 - 4. Fixes electricity

Question ID : 26433087295
 Option 1 ID : 264330342817
 Option 2 ID : 264330342818
 Option 3 ID : 264330342819
 Option 4 ID : 264330342820
 Status : Answered
 Chosen Option : 2

Q.42 Which two mathematical signs should be interchanged to make the given equation correct?

$$15 \times 3 \div 15 - (45 \times 3) - 10 + (13 \div 2) = 76$$

- Ans
- 1. + and ×
 - 2. × and +
 - 3. × and −
 - 4. + and +

Question ID : 264330145314
 Option 1 ID : 264330569512
 Option 2 ID : 264330569514
 Option 3 ID : 264330569513
 Option 4 ID : 264330569511
 Status : Answered
 Chosen Option : 1

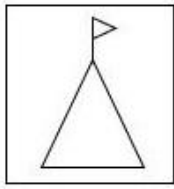
Q.43 If '+' means '-', '-' means '×', '×' means '÷', '÷' means '+', then what will come in place of the question mark (?) in the following equation?

$$23 - 5 \div 240 \times 8 + 14 = ?$$

- Ans
- 1. 145
 - 2. 119
 - 3. 131
 - 4. 124

Question ID : 264330126057
 Option 1 ID : 264330493903
 Option 2 ID : 264330493900
 Option 3 ID : 264330493901
 Option 4 ID : 264330493902
 Status : Answered
 Chosen Option : 3

Q.44 Select the correct mirror image of the given figure when the mirror is placed at line MN as shown.

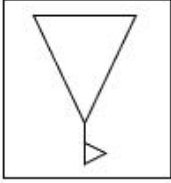


M

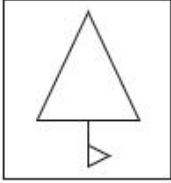
N

Ans

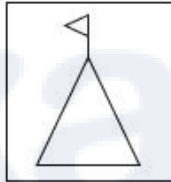
✗ 1.



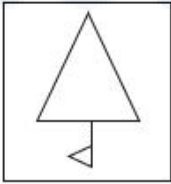
✗ 2.



✓ 3.



✗ 4.



Question ID : 26433056623

Option 1 ID : 264330221478

Option 2 ID : 264330221477

Option 3 ID : 264330221479

Option 4 ID : 264330221476

Status : Answered

Chosen Option : 3

Q.45 Two statements are given followed by two conclusions numbered I and II. Assuming the statements to be true, even if they seem to be at variance with commonly known facts, decide which of the conclusions logically follow(s) from the statements.

Statements:

All teas are juices.

All juices are cocktails.

Conclusions:

I. All teas are cocktails.

II. All cocktails are definitely juices.

- Ans**
- 1. Both conclusions I and II follow
 - 2. Only conclusion II follows
 - 3. Only conclusion I follows
 - 4. Neither conclusion I nor II follows

Question ID : 26433058039

Option 1 ID : 264330227142

Option 2 ID : 264330227141

Option 3 ID : 264330227140

Option 4 ID : 264330227143

Status : Answered

Chosen Option : 3

Q.46 In a certain code language, 'ACTOR' is coded as ROYCA and 'NURSE' is coded as ESWUN. How will 'JUDGE' be coded in the same language?

- Ans**
- 1. EGJUI
 - 2. GEIUJ
 - 3. EGUIJ
 - 4. EGIUJ

Question ID : 264330132201

Option 1 ID : 264330517902

Option 2 ID : 264330517900

Option 3 ID : 264330517899

Option 4 ID : 264330517901

Status : Answered

Chosen Option : 4

Q.47 Which of the following numbers will replace the question mark (?) in the given series?
76, 99, 135, 185, 250, ?

- Ans**
- 1. 330
 - 2. 331
 - 3. 328
 - 4. 315

Question ID : 26433069398

Option 1 ID : 264330272106

Option 2 ID : 264330272107

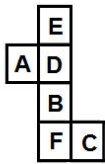
Option 3 ID : 264330272104

Option 4 ID : 264330272105

Status : Answered

Chosen Option : 2

Q.48 A cube is made by folding the given sheet. In the cube so formed, which letter will be on the face opposite to the face having 'F'?



- Ans 1. D
 2. E
 3. B
 4. A

Question ID : 26433065671
Option 1 ID : 264330257245
Option 2 ID : 264330257244
Option 3 ID : 264330257246
Option 4 ID : 264330257247
Status : Answered
Chosen Option : 1

Q.49 Which of the following numbers will replace the question mark (?) in the given series?

4, 11, 19, 31, 52, 89, ?

- Ans 1. 151
 2. 105
 3. 150
 4. 115

Question ID : 26433059922
Option 1 ID : 264330234521
Option 2 ID : 264330234522
Option 3 ID : 264330234523
Option 4 ID : 264330234520
Status : Answered
Chosen Option : 1

Q.50 Which of the following numbers will replace the question mark (?) in the given series?

134, 129, 122, ?, 102, 89

- Ans 1. 117
 2. 113
 3. 111
 4. 115

Question ID : 26433091010
Option 1 ID : 264330357450
Option 2 ID : 264330357449
Option 3 ID : 264330357452
Option 4 ID : 264330357451
Status : Answered
Chosen Option : 3

Section : General Knowledge and General Awareness

Q.1 Which of the following Articles of the Indian Constitution empowers the Parliament to restrict or abrogate the fundamental rights of the members of the armed forces, para-military forces, police forces, intelligence agencies and analogous forces?

- Ans
- 1. Article 35
 - 2. Article 31
 - 3. Article 33
 - 4. Article 37

Question ID : 264330113391
Option 1 ID : 264330445651
Option 2 ID : 264330445649
Option 3 ID : 264330445652
Option 4 ID : 264330445650
Status : Not Answered
Chosen Option : --

Q.2 Mohenjodaro site of Harappan civilisation is situated on the bank of which river?

- Ans
- 1. Jhelum river
 - 2. Indus river
 - 3. Gharghara river
 - 4. Beas river

Question ID : 264330164839
Option 1 ID : 264330646485
Option 2 ID : 264330646484
Option 3 ID : 264330646483
Option 4 ID : 264330646486
Status : Answered
Chosen Option : 2

Q.3 The Wadali Brothers are _____ singers.

- Ans
- 1. Pandavani
 - 2. Lavani
 - 3. Sufi
 - 4. Bhatiali

Question ID : 264330145157
Option 1 ID : 264330568885
Option 2 ID : 264330568883
Option 3 ID : 264330568884
Option 4 ID : 264330568886
Status : Answered
Chosen Option : 3

Q.4 Rongker festival is celebrated by which of the following tribes?

- Ans
- 1. Karbi
 - 2. Gond
 - 3. Bhil
 - 4. Ao

Question ID : 264330164804
Option 1 ID : 264330646344
Option 2 ID : 264330646345
Option 3 ID : 264330646346
Option 4 ID : 264330646343
Status : Not Answered
Chosen Option : --

Q.5 Who among the following Mauryan kings turned to Buddhism and its tenet of non-violence after the Kalinga war?

- Ans
- 1. Chandragupta Maurya
 - 2. Bindusara
 - 3. Ashoka
 - 4. Dasharatha

Question ID : 264330165559
Option 1 ID : 264330649315
Option 2 ID : 264330649316
Option 3 ID : 264330649317
Option 4 ID : 264330649318
Status : Answered
Chosen Option : 3

Q.6 What is the name of the large supercontinent that existed 200 million years ago when all the continents were together?

- Ans
- 1. Asia
 - 2. India
 - 3. Pangea
 - 4. America

Question ID : 26433064468
Option 1 ID : 264330252464
Option 2 ID : 264330252465
Option 3 ID : 264330252467
Option 4 ID : 264330252466
Status : Answered
Chosen Option : 3

Q.7 Who explained the structure of protein?

- Ans
- 1. RF Rose
 - 2. Emil Fischer
 - 3. Johnson and Cristae
 - 4. Pauling and Corey

Question ID : 26433086616
Option 1 ID : 264330340106
Option 2 ID : 264330340105
Option 3 ID : 264330340107
Option 4 ID : 264330340108
Status : Answered
Chosen Option : 1

Q.8 According to Census of India 2011, identify the third largest spoken language in India.

- Ans
- 1. Tamil
 - 2. Marathi
 - 3. Bengali
 - 4. Hindi

Question ID : 264330166809
Option 1 ID : 264330654272
Option 2 ID : 264330654273
Option 3 ID : 264330654271
Option 4 ID : 264330654274
Status : Answered
Chosen Option : 1

Q.9 Which of the following taxes is proportional in nature?

- Ans
- 1. Capital Gains Tax
 - 2. Income Tax
 - 3. Corporation Tax
 - 4. Goods and Services Tax

Question ID : 264330145241

Option 1 ID : 264330569222

Option 2 ID : 264330569221

Option 3 ID : 264330569219

Option 4 ID : 264330569220

Status : Not Answered

Chosen Option : --

Q.10 Gopika Varma has won the Sangeet Natak Akademi Award in 2019 in which of the following dance forms?

- Ans
- 1. Kathak
 - 2. Bharatanatyam
 - 3. Mohiniyattam
 - 4. Kuchipudi

Question ID : 264330145155

Option 1 ID : 264330568876

Option 2 ID : 264330568877

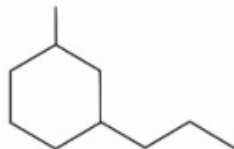
Option 3 ID : 264330568878

Option 4 ID : 264330568875

Status : Answered

Chosen Option : 1

Q.11 What is the IUPAC name of the organic compound depicted in the figure?



- Ans
- 1. 1-Methyl-1-Propylcyclohexane
 - 2. 1-Methyl-2-Propylcyclohexane
 - 3. 1-Methyl-4-Propylcyclohexane
 - 4. 1-Methyl-3-Propylcyclohexane

Question ID : 264330131672

Option 1 ID : 264330515787

Option 2 ID : 264330515788

Option 3 ID : 264330515790

Option 4 ID : 264330515789

Status : Answered

Chosen Option : 3

Q.12 Identify whether the given statements about ionisation energy are correct or incorrect.
Statement A: The ionisation energy of an atom is the amount of energy that is required to remove an electron from a mole of atoms in the gas phase.
Statement B: The ionisation energy increases from top to bottom in groups and decreases from left to right across a period.

- Ans
- 1. Both Statements A and B are correct
 - 2. Only Statement A is correct
 - 3. Both Statements A and B are incorrect
 - 4. Only Statement B is correct

Question ID : 264330137996

Option 1 ID : 264330540594

Option 2 ID : 264330540591

Option 3 ID : 264330540592

Option 4 ID : 264330540593

Status : Not Attempted and Marked For Review

Chosen Option : --

Q.13 Which of the following sports does NOT have its apex national governing body headquartered in New Delhi?

- Ans
- 1. Athletes Federation of India
 - 2. Badminton Association of India
 - 3. Volleyball Federation of India
 - 4. Hockey India

Question ID : 26433092331

Option 1 ID : 264330362623

Option 2 ID : 264330362624

Option 3 ID : 264330362621

Option 4 ID : 264330362622

Status : Answered

Chosen Option : 3

Q.14 Which of the following is an autobiography of a Bengali illiterate woman who secretly acquired literacy skills to read sacred texts in an age when girls and women were denied education and deemed fit only for household chores?

- Ans
- 1. Ente Katha by Kamala Das
 - 2. Amar Jiban by Rassundari Devi
 - 3. Jina Amucha by Baby Kamble
 - 4. Smritichitre by Lakshmbai Tilak

Question ID : 26433071427

Option 1 ID : 264330280133

Option 2 ID : 264330280134

Option 3 ID : 264330280135

Option 4 ID : 264330280132

Status : Answered

Chosen Option : 2

Q.15 The Lucknow Pact was signed in _____ by Congress and the Muslim League to work in alliance for representative government.

- Ans
- 1. 1920
 - 2. 1914
 - 3. 1916
 - 4. 1918

Question ID : 264330112346
Option 1 ID : 264330441472
Option 2 ID : 264330441469
Option 3 ID : 264330441470
Option 4 ID : 264330441471
Status : Answered
Chosen Option : 3

Q.16 What is most important health benefits of Vitamin D?

- Ans
- 1. Strengthening of bones and muscles
 - 2. Reducing the blood pressure
 - 3. Rapid growth after teenage years
 - 4. Elevation of heartbeat

Question ID : 26433066708
Option 1 ID : 264330261357
Option 2 ID : 264330261358
Option 3 ID : 264330261356
Option 4 ID : 264330261359
Status : Answered
Chosen Option : 2

Q.17 What is the name of the geostationary satellite launched by ISRO in 1983 that provides high power TV broadcasting and telecommunications national coverage transponders?

- Ans
- 1. Bhaskara-I
 - 2. Insat-1B
 - 3. GSAT-7
 - 4. RISAT-1

Question ID : 264330111325
Option 1 ID : 264330437387
Option 2 ID : 264330437388
Option 3 ID : 264330437385
Option 4 ID : 264330437386
Status : Answered
Chosen Option : 3

Q.18 Which Article of the Indian Constitution provides for equal opportunity for all citizens in the matter of employment under the state?

- Ans
- 1. Article 17
 - 2. Article 16
 - 3. Article 18
 - 4. Article 15

Question ID : 264330114489
Option 1 ID : 264330450043
Option 2 ID : 264330450042
Option 3 ID : 264330450044
Option 4 ID : 264330450041
Status : Answered
Chosen Option : 4

Q.19 Which Rajput princess belonged to the Bhakti tradition of Medieval India, whose songs were devoted to Lord Krishna?

- Ans
- 1. Mirabai
 - 2. Muddupalani
 - 3. Lal Ded
 - 4. Akka Mahadevi

Question ID : 26433074821
Option 1 ID : 264330293373
Option 2 ID : 264330293375
Option 3 ID : 264330293372
Option 4 ID : 264330293374
Status : Answered
Chosen Option : 1

Q.20 When was the National Interim Government of India formed, under Jawaharlal Nehru?

- Ans
- 1. 2 September 1946
 - 2. 2 September 1947
 - 3. 20 September 1946
 - 4. 2 September 1945

Question ID : 264330106613
Option 1 ID : 264330418756
Option 2 ID : 264330418754
Option 3 ID : 264330418755
Option 4 ID : 264330418753
Status : Answered
Chosen Option : 4

Q.21 Which among the following is INCORRECT about the salient features of the 73rd Amendment Act?

- Ans
- 1. The Act gives a Constitutional status to the Panchayati Raj Institutions.
 - 2. It contains 29 functional items of the Panchayats and deals with Article 243 to 243(O).
 - 3. The Act has added the Eleventh Schedule to the Constitution of India.
 - 4. The Act corresponds to Part III of the Constitution of India.

Question ID : 264330145272
Option 1 ID : 264330569346
Option 2 ID : 264330569345
Option 3 ID : 264330569344
Option 4 ID : 264330569343
Status : Answered
Chosen Option : 3

Q.22 Which element of the boron family has a high boiling point, making it ideal for recording temperatures that would vaporize a thermometer?

- Ans
- 1. Thallium
 - 2. Aluminium
 - 3. Gallium
 - 4. Indium

Question ID : 264330110058
Option 1 ID : 264330432509
Option 2 ID : 264330432512
Option 3 ID : 264330432510
Option 4 ID : 264330432511
Status : Answered
Chosen Option : 1

Q.23 How many medal(s) did India win in the World Athletics Championship 2022?

- Ans
- 1. 4
 - 2. 2
 - 3. 3
 - 4. 1

Question ID : 264330109685
Option 1 ID : 264330431020
Option 2 ID : 264330431018
Option 3 ID : 264330431019
Option 4 ID : 264330431017
Status : Answered
Chosen Option : 3

Q.24 Who became the first Indian to win the prestigious Zurich Diamond League Final 2022 in Switzerland?

- Ans
- 1. Rameshbabu Pragganandhaa
 - 2. Mary Kom
 - 3. Neeraj Chopra
 - 4. PV Sindhu

Question ID : 264330119248
Option 1 ID : 264330467279
Option 2 ID : 264330467280
Option 3 ID : 264330467282
Option 4 ID : 264330467281
Status : Answered
Chosen Option : 3

Q.25 Which of the following government departments is associated with infrastructure development in India?

- Ans
- 1. Division of Economic Agenda
 - 2. Division of Electricity Agenda
 - 3. Department of Energy Affairs
 - 4. Department of Economic Affairs

Question ID : 264330163203
Option 1 ID : 264330640124
Option 2 ID : 264330640126
Option 3 ID : 264330640123
Option 4 ID : 264330640125
Status : Answered
Chosen Option : 4

Q.26 Identify an anomaly element that belongs to both group 1 and group 17.

- Ans 1. Oxygen
 2. Hydrogen
 3. Chlorine
 4. Nitrogen

Question ID : 264330134866
Option 1 ID : 264330528400
Option 2 ID : 264330528399
Option 3 ID : 264330528402
Option 4 ID : 264330528401
Status : Answered
Chosen Option : 2

Q.27 The Vijayanagar kingdom was established by _____ in 1336.

- Ans 1. Venkata II
 2. Devaraya II
 3. Krishnadevaraya
 4. Harihara and Bukka

Question ID : 264330106565
Option 1 ID : 264330418563
Option 2 ID : 264330418564
Option 3 ID : 264330418562
Option 4 ID : 264330418561
Status : Answered
Chosen Option : 4

Q.28 Which of the following is the new alluvium deposited by floods in the Ganga Plain?

- Ans 1. Regur
 2. Khadar
 3. Kachhar
 4. Bhangar

Question ID : 264330119789
Option 1 ID : 264330469433
Option 2 ID : 264330469432
Option 3 ID : 264330469431
Option 4 ID : 264330469434
Status : Answered
Chosen Option : 2

Q.29 Which of the following Articles of the Constitution of India provides that the Governor appoints the Chief Minister and later, the Chief Minister recommends the appointment of ministers to the Governor?

- Ans 1. Article 167
 2. Article 165
 3. Article 164
 4. Article 163

Question ID : 264330113440
Option 1 ID : 264330445846
Option 2 ID : 264330445847
Option 3 ID : 264330445848
Option 4 ID : 264330445845
Status : Answered
Chosen Option : 3

Q.30 What was the rural literacy rate in India, according to the 2011 Census?

- Ans
- 1. 67.00%
 - 2. 66.77%
 - 3. 67.77%
 - 4. 69.00%

Question ID : 264330110657
Option 1 ID : 264330434906
Option 2 ID : 264330434905
Option 3 ID : 264330434908
Option 4 ID : 264330434907
Status : Answered
Chosen Option : 2

Q.31 FIFA Women's World Cup 2023 will be hosted by_____.

- Ans
- 1. Australia and New Zealand
 - 2. USA and Canada
 - 3. France and Germany
 - 4. Brazil and Argentina

Question ID : 264330109845
Option 1 ID : 264330431659
Option 2 ID : 264330431660
Option 3 ID : 264330431657
Option 4 ID : 264330431658
Status : Answered
Chosen Option : 3

Q.32 The President of India decides on the question as to the disqualification of Members of Parliament in consultation with the _____.

- Ans
- 1. Supreme Court of India
 - 2. Parliament
 - 3. Vice President
 - 4. Election Commission of India

Question ID : 264330130470
Option 1 ID : 264330510993
Option 2 ID : 264330510991
Option 3 ID : 264330510992
Option 4 ID : 264330510994
Status : Answered
Chosen Option : 1

Q.33 Mohiniyattam, a classical dance of India belongs to which of the following states?

- Ans
- 1. Uttar Pradesh
 - 2. Kerala
 - 3. Andhra Pradesh
 - 4. Manipur

Question ID : 26433094863
Option 1 ID : 264330372273
Option 2 ID : 264330372276
Option 3 ID : 264330372274
Option 4 ID : 264330372275
Status : Answered
Chosen Option : 2

Q.34 Which of the following is NOT an example of manufacturing activity?

- Ans
- 1. Yarn made from cotton
 - 2. Sugar made from sugarcane
 - 3. Paper made from wood
 - 4. Mutual fund product made by combining debt and equity funds

Question ID : 264330168856
Option 1 ID : 264330662238
Option 2 ID : 264330662236
Option 3 ID : 264330662235
Option 4 ID : 264330662237
Status : Answered
Chosen Option : 4

Q.35 Which of the following is INCORRECT match?

- Ans
- 1. Pressure – Pascal
 - 2. Volume – Meter
 - 3. Force – Newton
 - 4. Work done – Joule

Question ID : 264330131764
Option 1 ID : 264330516158
Option 2 ID : 264330516157
Option 3 ID : 264330516156
Option 4 ID : 264330516155
Status : Answered
Chosen Option : 2

Q.36 Which part of the Indian Constitution deals with directive principles of state policy?

- Ans
- 1. Part VII
 - 2. Part VI
 - 3. Part V
 - 4. Part IV

Question ID : 264330111527
Option 1 ID : 264330438196
Option 2 ID : 264330438195
Option 3 ID : 264330438194
Option 4 ID : 264330438193
Status : Answered
Chosen Option : 4

Q.37 Mango showers are:

- Ans
- 1. cyclones
 - 2. jet streams
 - 3. storms
 - 4. pre-monsoon showers

Question ID : 264330169988
Option 1 ID : 264330666628
Option 2 ID : 264330666629
Option 3 ID : 264330666630
Option 4 ID : 264330666627
Status : Answered
Chosen Option : 4

Q.38 What type of climate is found in North Western Europe, West Coast of North America, North of California, Southern Chile, South-eastern Australia and New Zealand?

- Ans
- 1. Marine west coast climate
 - 2. Cold snow forest climate
 - 3. Subtropical steppe climate
 - 4. Tropical wet and dry climate

Question ID : 264330145190
Option 1 ID : 264330569015
Option 2 ID : 264330569016
Option 3 ID : 264330569017
Option 4 ID : 264330569018
Status : Answered
Chosen Option : 1

Q.39 Which of the following places of India can have maximum temperature difference between the day and night?

- Ans
- 1. Thiruvananthapuram
 - 2. Jaisalmer
 - 3. Port Blair
 - 4. Kanyakumari

Question ID : 264330169312
Option 1 ID : 264330664028
Option 2 ID : 264330664027
Option 3 ID : 264330664029
Option 4 ID : 264330664030
Status : Answered
Chosen Option : 2

Q.40 Mohiniyattam belongs to which of the following states?

- Ans
- 1. Jharkhand
 - 2. Chhattisgarh
 - 3. Karnataka
 - 4. Kerala

Question ID : 264330164789
Option 1 ID : 264330646284
Option 2 ID : 264330646285
Option 3 ID : 264330646286
Option 4 ID : 264330646283
Status : Answered
Chosen Option : 4

Q.41 Haripriya Nambodiri is an exponent of which Indian classical dance form?

- Ans
- 1. Kathakali
 - 2. Kuchipudi
 - 3. Odissi
 - 4. Bharatanatyam

Question ID : 26433086721
Option 1 ID : 264330340526
Option 2 ID : 264330340528
Option 3 ID : 264330340527
Option 4 ID : 264330340525
Status : Not Answered
Chosen Option : --

Q.42 During one of the Five-Year Plans which of the following politicians gave the slogan 'Garibi Hatao'?

- Ans
- 1. Charan Singh
 - 2. Gaiji Zail Singh
 - 3. Morarji Desai
 - 4. Indira Gandhi

Question ID : 264330145248
Option 1 ID : 264330569250
Option 2 ID : 264330569249
Option 3 ID : 264330569247
Option 4 ID : 264330569248
Status : Not Answered
Chosen Option : --

Q.43 During Which phase of the cell cycle does metabolic changes assemble the cytoplasmic material required for mitosis and cytokinesis?

- Ans
- 1. G2 phase
 - 2. G1 phase
 - 3. S phase
 - 4. M phase

Question ID : 264330145197
Option 1 ID : 264330569045
Option 2 ID : 264330569044
Option 3 ID : 264330569043
Option 4 ID : 264330569046
Status : Not Answered
Chosen Option : --

Q.44 Expenditure of the government on health facilities, education and fixed-asset acquisition is termed as _____.

- Ans
- 1. revenue expenditure
 - 2. plan expenditure
 - 3. non-plan revenue expenditure
 - 4. capital expenditure

Question ID : 264330141435
Option 1 ID : 264330554075
Option 2 ID : 264330554076
Option 3 ID : 264330554078
Option 4 ID : 264330554077
Status : Answered
Chosen Option : 4

Q.45 Which of the following is the autobiography of the first Indian President Dr. Rajendra Prasad?

- Ans
- 1. Atmavrittanta
 - 2. Atmakatha
 - 3. A Shot at History
 - 4. My Country My Life

Question ID : 264330145182
Option 1 ID : 264330568986
Option 2 ID : 264330568983
Option 3 ID : 264330568984
Option 4 ID : 264330568985
Status : Answered
Chosen Option : 1

Q.46 Which of the following policy measures is a step towards liberalisation?

- Ans
- 1. Enhancing tariffs
 - 2. Eliminating licenses for importing a majority of goods
 - 3. Imposing limits on capital accumulation
 - 4. Increasing requirements for bank reserves and restrictions on interest rates

Question ID : 26433064579
Option 1 ID : 264330252910
Option 2 ID : 264330252909
Option 3 ID : 264330252908
Option 4 ID : 264330252911
Status : Answered
Chosen Option : 2

Q.47 Which of the following cultural festivals of South India is associated with the folklore of King Mahabali?

- Ans
- 1. Gudi Padwa
 - 2. Ugadi
 - 3. Pongal
 - 4. Onam

Question ID : 264330145144
Option 1 ID : 264330568833
Option 2 ID : 264330568834
Option 3 ID : 264330568831
Option 4 ID : 264330568832
Status : Answered
Chosen Option : 2

Q.48 Europeans entered India with a mindset of trading only. This streak was initiated by which of the following European nations?

- Ans
- 1. French
 - 2. Portuguese
 - 3. British
 - 4. Dutch

Question ID : 264330165386
Option 1 ID : 264330648623
Option 2 ID : 264330648625
Option 3 ID : 264330648626
Option 4 ID : 264330648624
Status : Answered
Chosen Option : 2

Q.49 How big are red blood cells in diameter?

- Ans
- 1. 7.5 μm
 - 2. 2.0 μm
 - 3. 4.0 μm
 - 4. 40.0 μm

Question ID : 264330145215

Option 1 ID : 264330569116

Option 2 ID : 264330569115

Option 3 ID : 264330569118

Option 4 ID : 264330569117

Status : Not Answered

Chosen Option : --

Q.50 In which year Timur's invasion of Delhi took place?

- Ans
- 1. 1492
 - 2. 1221
 - 3. 1526
 - 4. 1398

Question ID : 264330109005

Option 1 ID : 264330428300

Option 2 ID : 264330428297

Option 3 ID : 264330428299

Option 4 ID : 264330428298

Status : Not Answered

Chosen Option : --

Section : Quantitative Aptitude

Q.1 Find the value of $\sqrt{\frac{1 - \tan A}{1 + \tan A}}$

- Ans
- 1. $\sqrt{\frac{1 + \sin 2A}{\cos 2A}}$
 - 2. $\sqrt{\frac{1 - \sin 2A}{\cos 2A}}$
 - 3. $\sqrt{\frac{1 + \sin A}{\cos A}}$
 - 4. $\sqrt{\frac{1 - \sin A}{\cos A}}$

Question ID : 264330131547

Option 1 ID : 264330515291

Option 2 ID : 264330515292

Option 3 ID : 264330515294

Option 4 ID : 264330515293

Status : Answered

Chosen Option : 2

Q.2 If the diameter of a sphere is reduced to its half, then the volume would be:

Ans

- 1. increased by $\frac{1}{4}$ of the former volume
- 2. reduced by $\frac{1}{4}$ of the former volume
- 3. increased by $\frac{1}{8}$ of the former volume
- 4. reduced by $\frac{1}{8}$ of the former volume

Question ID : 264330145110

Option 1 ID : 264330568695

Option 2 ID : 264330568697

Option 3 ID : 264330568698

Option 4 ID : 264330568696

Status : Answered

Chosen Option : 4

Q.3 The HCF of 3888 and 3969 is:

Ans

- 1. 81
- 2. 73
- 3. 83
- 4. 71

Question ID : 264330145042

Option 1 ID : 264330568423

Option 2 ID : 264330568426

Option 3 ID : 264330568425

Option 4 ID : 264330568424

Status : Answered

Chosen Option : 1

Q.4 Which is the smallest natural number that is exactly divisible by each of 96, 108 and 144?

Ans

- 1. 864
- 2. 2592
- 3. 1296
- 4. 1728

Question ID : 264330103227

Option 1 ID : 264330405215

Option 2 ID : 264330405214

Option 3 ID : 264330405213

Option 4 ID : 264330405216

Status : Answered

Chosen Option : 1

Q.5 Find the HCF of 240, 280 and 560.

- Ans**
- 1. 30
 - 2. 10
 - 3. 20
 - 4. 40

Question ID : 26433065034

Option 1 ID : 264330254731

Option 2 ID : 264330254730

Option 3 ID : 264330254729

Option 4 ID : 264330254728

Status : Answered

Chosen Option : 4

Q.6 The following table shows the number of mobile phones sold by four different stores in four different years.

Stores	2012	2013	2014	2015
P	178	183	205	225
Q	133	198	220	235
R	284	250	220	198
S	225	243	199	205

Find the difference between the number of mobile phones sold by store Q in 2013 and store S in 2015.

- Ans**
- 1. 12
 - 2. 7
 - 3. 10
 - 4. 8

Question ID : 264330158616

Option 1 ID : 264330621825

Option 2 ID : 264330621824

Option 3 ID : 264330621823

Option 4 ID : 264330621826

Status : Answered

Chosen Option : 2

Q.7 The table below shows the production of jute fabric (in lakh metre) by two Companies P and Q during 2001 to 2005.

Year	Company P	Company Q
2001	100	96
2002	120	130
2003	108	100
2004	190	180
2005	240	275

In which year/years, did Company Q produce more fabric than Company P?

- Ans
- 1. 2002
 - 2. 2005
 - 3. 2003, 2005
 - 4. 2002, 2005

Question ID : 264330165072

Option 1 ID : 264330647415

Option 2 ID : 264330647417

Option 3 ID : 264330647418

Option 4 ID : 264330647416

Status : Answered

Chosen Option : 1

Q.8 A car, during its entire journey of 5 hours, travels the first 45 minutes at a certain speed, the next 75 minutes at a speed of 85 km/h, and the last 3 hours at a speed of 70 km/h. During its entire journey, the average speed of the car is found to be 73 km/h. What is the speed (in km/h) of the car during the first 45 minutes?

- Ans
- 1. 65
 - 2. 68
 - 3. 62
 - 4. 72

Question ID : 264330103989

Option 1 ID : 264330408258

Option 2 ID : 264330408257

Option 3 ID : 264330408260

Option 4 ID : 264330408259

Status : Answered

Chosen Option : 1

Q.9 Peter invested a certain sum of money in a scheme paying 10% simple interest per annum, while Rachel invested half of the sum that Peter invested in a scheme paying 10% interest per annum compounded annually. Also, while Peter invested for 2 years, Rachel invested for 3 years. If the difference in the interest earned by Peter and Rachel was ₹897, what was the sum that Rachel had invested?

- Ans
- 1. ₹13,000
 - 2. ₹12,900
 - 3. ₹13,100
 - 4. ₹12,960

Question ID : 264330145053

Option 1 ID : 264330568470

Option 2 ID : 264330568468

Option 3 ID : 264330568469

Option 4 ID : 264330568467

Status : Not Attempted and Marked For Review

Chosen Option : --

Q.10 The price of almonds is increased by 10%. By what percentage should the consumption be decreased so that the expenditure remains the same?

- Ans
- ✓ 1. $9\frac{1}{11}\%$
 - ✗ 2. $5\frac{3}{11}\%$
 - ✗ 3. $8\frac{1}{11}\%$
 - ✗ 4. $10\frac{3}{11}\%$

Question ID : 264330145038

Option 1 ID : 264330568408

Option 2 ID : 264330568410

Option 3 ID : 264330568407

Option 4 ID : 264330568409

Status : Answered

Chosen Option : 1

Q.11 A vendor marked the selling price of a table at ₹5,670 after adding 35% profit to its cost price. Since the sale was very low at this price level, he decided to sell the table with 12% profit. Find the new selling price (in ₹).

- Ans
- ✗ 1. 4,810
 - ✗ 2. 4,750
 - ✓ 3. 4,704
 - ✗ 4. 4,608

Question ID : 264330131519

Option 1 ID : 264330515179

Option 2 ID : 264330515180

Option 3 ID : 264330515181

Option 4 ID : 264330515182

Status : Answered

Chosen Option : 3

Q.12 The time taken to travel the same distance by three cars is in the ratio of 12:15:10. What is the ratio of the speeds of the three cars?

- Ans
- ✗ 1. 4 : 5 : 6
 - ✗ 2. 4 : 6 : 5
 - ✓ 3. 5 : 4 : 6
 - ✗ 4. 5 : 6 : 4

Question ID : 264330103971

Option 1 ID : 264330408186

Option 2 ID : 264330408187

Option 3 ID : 264330408185

Option 4 ID : 264330408188

Status : Answered

Chosen Option : 3

Q.13 Find the area of a triangle whose length of two sides are 4 cm and 5 cm and the angle between them is 45° .

- Ans
- 1. $4\sqrt{2} \text{ cm}^2$
 - 2. $7\sqrt{2} \text{ cm}^2$
 - 3. $5\sqrt{2} \text{ cm}^2$
 - 4. $6\sqrt{2} \text{ cm}^2$

Question ID : 264330103632
Option 1 ID : 264330406836
Option 2 ID : 264330406833
Option 3 ID : 264330406835
Option 4 ID : 264330406834
Status : Answered
Chosen Option : 3

Q.14 If a shopkeeper allows a discount of 10% to his customers and still gains 30%, then the marked price of an article which costs ₹450 is:

- Ans
- 1. ₹700
 - 2. ₹650
 - 3. ₹500
 - 4. ₹750

Question ID : 264330104506
Option 1 ID : 264330410327
Option 2 ID : 264330410326
Option 3 ID : 264330410325
Option 4 ID : 264330410328
Status : Answered
Chosen Option : 2

Q.15 The fourth proportional to 0.3, 0.8 and 0.108 is:

- Ans
- 1. 0.144
 - 2. 0.124
 - 3. 0.288
 - 4. 0.482

Question ID : 264330145036
Option 1 ID : 264330568399
Option 2 ID : 264330568401
Option 3 ID : 264330568400
Option 4 ID : 264330568402
Status : Answered
Chosen Option : 3

Q.16 Simplify the given expression.

$$\frac{(3.254 \times 3.254 \times 3.254) - (0.746 \times 0.746 \times 0.746)}{(3.254 \times 3.254) + (0.746 \times 0.746) + (3.254 \times 0.746)}$$

- Ans
- 1. 3.156
 - 2. 4.508
 - 3. 2.146
 - 4. 2.508

Question ID : 264330157769

Option 1 ID : 264330618437

Option 2 ID : 264330618436

Option 3 ID : 264330618438

Option 4 ID : 264330618435

Status : Answered

Chosen Option : 4

Q.17 The price of a land passing through three hands rises on the whole by 65%. The first and second sellers earned 20% and 25% profit, respectively. Find the profit percentage earned by the third seller.

- Ans
- 1. 10%
 - 2. 20%
 - 3. 25%
 - 4. 15%

Question ID : 264330102343

Option 1 ID : 264330401838

Option 2 ID : 264330401837

Option 3 ID : 264330401840

Option 4 ID : 264330401839

Status : Answered

Chosen Option : 1

Q.18 Study the given table and answer the question that follows.

The table shows the number of people who responded to a survey about their favourite style of music.

Age	18-20	21-30	31+
Classical	8	5	15
Pop	5	11	10
Hip-Hop	6	9	8
Rock	9	7	13
Total	28	32	46

What percentage of the total sample indicated that Rock is their favourite style of music (rounded off to 2 decimal places)?

- Ans
- ✓ 1. 27.36%
 - ✗ 2. 18.25%
 - ✗ 3. 29.65%
 - ✗ 4. 22.35%

Question ID : 264330158262

Option 1 ID : 264330620409

Option 2 ID : 264330620407

Option 3 ID : 264330620410

Option 4 ID : 264330620408

Status : Not Attempted and Marked For Review

Chosen Option : --

Q.19 The following table shows the percentage population of four towns below poverty line and the proportion of males and females:

Town	Percentage of population below poverty line	Below poverty line	Above poverty line
		Male : Female	Male : Female
A	10	1 : 3	3 : 2
B	15	3 : 4	1 : 2
C	20	2 : 3	5 : 3
D	25	4 : 5	5 : 4

If the total population of town C is 8000 then what is the number of females above the poverty line in state C?

- Ans
- ✗ 1. 2000
 - ✗ 2. 2200
 - ✓ 3. 2400
 - ✗ 4. 2600

Question ID : 264330167244

Option 1 ID : 264330655971

Option 2 ID : 264330655972

Option 3 ID : 264330655973

Option 4 ID : 264330655974

Status : Answered

Chosen Option : 3

Q.20

The value of $\frac{(157 \times 157) + (157 \times 133) + (133 \times 133)}{(157 \times 157 \times 157) - (133 \times 133 \times 133)}$ is:

Ans

✓ 1. $\frac{1}{24}$

✗ 2. 24

✗ 3. 290

✗ 4. $\frac{1}{290}$

Question ID : 264330157765

Option 1 ID : 264330618420

Option 2 ID : 264330618419

Option 3 ID : 264330618421

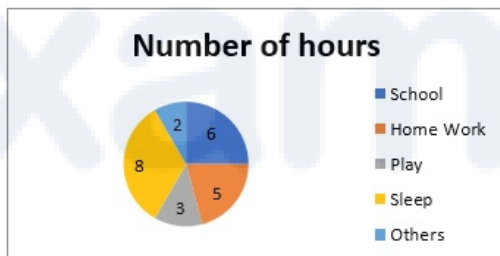
Option 4 ID : 264330618422

Status : Answered

Chosen Option : 1

Q.21

The number of hours spent by a student on different activities as shown in the following pie chart:



The central angle corresponding to the sleeping time is what percentage of the whole central angle?

Ans ✗ 1. 66.66%

✓ 2. 33.33%

✗ 3. 55%

✗ 4. 50%

Question ID : 264330145081

Option 1 ID : 264330568580

Option 2 ID : 264330568579

Option 3 ID : 264330568582

Option 4 ID : 264330568581

Status : Answered

Chosen Option : 2

Q.22 The area of a rectangular field is 480 m^2 . If the length is 20% more than the breadth, then the length of the rectangular field is:

- Ans
- 1. 30 m
 - 2. 20 m
 - 3. 24 m
 - 4. 27 m

Question ID : 264330165653

Option 1 ID : 264330649691

Option 2 ID : 264330649694

Option 3 ID : 264330649693

Option 4 ID : 264330649692

Status : Answered

Chosen Option : 3

Q.23 In a circle centred at O, PQ is a tangent at P. Furthermore, AB is the chord of the circle and is extended to Q. If $PQ = 12 \text{ cm}$ and $QB = 8 \text{ cm}$, then the length of AB is equal to:

- Ans
- 1. 20 cm
 - 2. 4 cm
 - 3. 10 cm
 - 4. 8 cm

Question ID : 264330165494

Option 1 ID : 264330649058

Option 2 ID : 264330649055

Option 3 ID : 264330649057

Option 4 ID : 264330649056

Status : Answered

Chosen Option : 1

Q.24 The upstream speed of a boat is 8 km/h and the downstream is 15 km/h . What is the speed of the boat in still water and the speed of the stream (in km/h), respectively?

- Ans
- 1. 11 and 3
 - 2. 3 and 11
 - 3. 11.5 and 3.5
 - 4. 3.5 and 11.5

Question ID : 264330119531

Option 1 ID : 264330468409

Option 2 ID : 264330468410

Option 3 ID : 264330468407

Option 4 ID : 264330468408

Status : Answered

Chosen Option : 3

Q.25 A number is first decreased by 28% and then increased by 28%. The number so obtained is 784 less than the original number. Find the value of the original number.

- Ans
- 1. 1000
 - 2. 15000
 - 3. 10000
 - 4. 1500

Question ID : 264330103389

Option 1 ID : 264330405862

Option 2 ID : 264330405863


Option 3 ID : 264330405861

Option 4 ID : 264330405864

Status : Answered

Chosen Option : 2

Q.26 The following pie chart shows the number of students who failed in different subjects in an examination. Examine the chart and answer the following question. The total number of students who have failed is 350.



The number of students failed in mathematics is less than the number of students failed in all other subjects by:

- Ans
- 1. 190
 - 2. 256
 - 3. 95
 - 4. 161

Question ID : 264330165435

Option 1 ID : 264330648822

Option 2 ID : 264330648821

Option 3 ID : 264330648819

Option 4 ID : 264330648820

Status : Answered

Chosen Option : 4

Q.27 Simplify the following.

$$19 \div 5 \text{ of } (27 - \overline{15 - 21}) + 37$$

- Ans
- ✓ 1. $\frac{6124}{165}$
 - ✗ 2. $\frac{19}{165}$
 - ✗ 3. $\frac{6142}{165}$
 - ✗ 4. $\frac{37}{165}$

Question ID : 26433073053
Option 1 ID : 264330286406
Option 2 ID : 264330286405
Option 3 ID : 264330286404
Option 4 ID : 264330286407
Status : Answered
Chosen Option : 1

Q.28 The price of a stock increased by 30% in the first year and decreased by 20% in the second year. If an investor bought 100 shares of the stock for ₹1,000, then what is the final value of the investment after 2 years?

- Ans
- ✗ 1. ₹960
 - ✓ 2. ₹1,040
 - ✗ 3. ₹1,400
 - ✗ 4. ₹1,020

Question ID : 264330157709
Option 1 ID : 264330618198
Option 2 ID : 264330618197
Option 3 ID : 264330618196
Option 4 ID : 264330618195
Status : Answered
Chosen Option : 2

Q.29 The LCM of two numbers is 660 and their HCF is 5. If one of the numbers is 55, find the other.

- Ans
- ✗ 1. 275
 - ✗ 2. 12
 - ✗ 3. 110
 - ✓ 4. 60

Question ID : 264330102312
Option 1 ID : 264330401714
Option 2 ID : 264330401713
Option 3 ID : 264330401716
Option 4 ID : 264330401715
Status : Answered
Chosen Option : 4

Q.30 Some medicine in liquid form is prepared in a hemispherical container of diameter 36 cm. When the container is full of medicine, the medicine is transferred to small cylindrical bottles of diameter 6 cm and height 6 cm. How many bottles are required to empty the container?

- Ans
- 1. 76
 - 2. 72
 - 3. 70
 - 4. 75

Question ID : 264330145118
Option 1 ID : 264330568730
Option 2 ID : 264330568728
Option 3 ID : 264330568727
Option 4 ID : 264330568729
Status : Answered
Chosen Option : 2

Q.31 Tom can do a piece of work in 7 days, whereas Jay can do the same work in 14 days. How long will they take to finish the work if both work together?

- Ans
- 1. $5\frac{2}{3}$ days
 - 2. $4\frac{2}{3}$ days
 - 3. $7\frac{2}{3}$ days
 - 4. $2\frac{2}{3}$ days

Question ID : 264330102373
Option 1 ID : 264330401957
Option 2 ID : 264330401958
Option 3 ID : 264330401960
Option 4 ID : 264330401959
Status : Answered
Chosen Option : 2

Q.32 Two trains of lengths 200 m and 250 m are running on parallel rail tracks at speeds of 68 km/h and 50 km/h, respectively. In how much time (in seconds) will they cross each other if they are running in the same direction?

- Ans
- 1. 90
 - 2. 85
 - 3. 80
 - 4. 75

Question ID : 26433082986
Option 1 ID : 264330325780
Option 2 ID : 264330325779
Option 3 ID : 264330325778
Option 4 ID : 264330325777
Status : Answered
Chosen Option : 1

Q.33 Travelling a distance of 1000 km, a train slowed down due to repairs of the tracks. Its average speed for the trip reduced by 75 km/h and the time of travel increased by 3 hours. The original duration of the travel is:

- Ans
- 1. 6 hours
 - 2. 5 hours
 - 3. 5.5 hours
 - 4. 6.5 hours

Question ID : 264330104389

Option 1 ID : 264330409859

Option 2 ID : 264330409858

Option 3 ID : 264330409860

Option 4 ID : 264330409857

Status : **Not Attempted and Marked For Review**

Chosen Option : --

Q.34 $7 \sin^2 A + 3 \cos^2 A = 4$, then find $\cot A$:

- Ans
- 1. $\sqrt{3}$
 - 2. $\sqrt{2}$
 - 3. $\frac{1}{\sqrt{2}}$
 - 4. $\frac{1}{\sqrt{3}}$

Question ID : 264330158421

Option 1 ID : 264330621043

Option 2 ID : 264330621045

Option 3 ID : 264330621046

Option 4 ID : 264330621044

Status : **Answered**

Chosen Option : 1

Q.35 If $\sec A - \tan A = p$, then find the value of $\sec A$.

- Ans
- 1. $\frac{p^2 - 1}{p^2 + 1}$
 - 2. $\frac{p^2 + 1}{p^2 - 1}$
 - 3. $\frac{p^2 + 1}{p}$
 - 4. $\frac{p^2 + 1}{2p}$

Question ID : 264330157747

Option 1 ID : 264330618350

Option 2 ID : 264330618349

Option 3 ID : 264330618348

Option 4 ID : 264330618347

Status : **Answered**

Chosen Option : 4

Q.36 $2(\sin 1^\circ \times \sec 89^\circ) + 3(\cos 11^\circ \times \operatorname{cosec} 79^\circ) + 5(\tan 21^\circ \times \tan 69^\circ) = ?$

- Ans
- 1. 11
 - 2. 12
 - 3. 20
 - 4. 10

Question ID : 264330145124
Option 1 ID : 264330568753
Option 2 ID : 264330568751
Option 3 ID : 264330568752
Option 4 ID : 264330568754
Status : Answered
Chosen Option : 4

Q.37 A person has three iron bars whose lengths are 20, 30 and 40 metres, respectively. He wants to cut pieces of the same length from each of the three bars. What is the least number of total pieces if he cuts without any wastage?

- Ans
- 1. 8
 - 2. 10
 - 3. 9
 - 4. 11

Question ID : 26433063434
Option 1 ID : 264330248391
Option 2 ID : 264330248389
Option 3 ID : 264330248388
Option 4 ID : 264330248390
Status : Answered
Chosen Option : 2

Q.38 In a ΔPQR , $\angle P : \angle Q : \angle R = 3 : 4 : 8$. The shortest side and the longest side of the triangle, respectively, are:

- Ans
- 1. PQ and PR
 - 2. QR and PR
 - 3. PQ and QR
 - 4. QR and PQ

Question ID : 264330158284
Option 1 ID : 264330620496
Option 2 ID : 264330620498
Option 3 ID : 264330620495
Option 4 ID : 264330620497
Status : Answered
Chosen Option : 4

Q.39 In a triangle ABC, if $\angle B = 90^\circ$, $\angle C = 45^\circ$ and $AC = 4$ cm, then the value of BC is:

- Ans
- 1. $\sqrt{2}$ cm
 - 2. 4 cm
 - 3. $2\sqrt{2}$ cm
 - 4. $4\sqrt{2}$ cm

Question ID : 264330157741

Option 1 ID : 264330618326

Option 2 ID : 264330618325

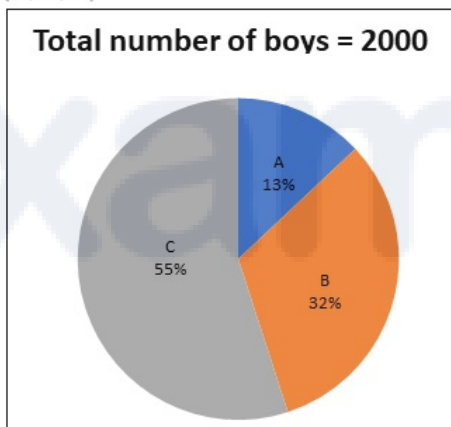
Option 3 ID : 264330618324

Option 4 ID : 264330618323

Status : Answered

Chosen Option : 1

Q.40 Study the given pie-chart and answer the question that follows.
The pie-chart shows the number of boys studying in play group of various schools (A, B, C).



What is the average number of boys studying in schools A and C?

- Ans
- 1. 740
 - 2. 920
 - 3. 560
 - 4. 680

Question ID : 264330158278

Option 1 ID : 264330620472

Option 2 ID : 264330620471

Option 3 ID : 264330620474

Option 4 ID : 264330620473

Status : Answered

Chosen Option : 4

Q.41 In an office, 75 employees can finish a project in 60 days. After few days, 15 employees left the job and the project was completed in 65 days. After how many days did the 15 employees leave?

- Ans
- 1. 50
 - 2. 45
 - 3. 30
 - 4. 40

Question ID : 264330118107
Option 1 ID : 264330464245
Option 2 ID : 264330464244
Option 3 ID : 264330464246
Option 4 ID : 264330464243
Status : Answered
Chosen Option : 4

Q.42 Ramesh borrowed ₹15,000 at a certain rate of simple interest from a bank. He repaid (the principal but not interest) ₹6,000 after 5 years, and after 5 more years he paid ₹18,600 and settled his account. Find the rate of simple interest per annum.

- Ans
- 1. 12%
 - 2. 10%
 - 3. 8%
 - 4. 6%

Question ID : 264330169924
Option 1 ID : 264330666374
Option 2 ID : 264330666373
Option 3 ID : 264330666372
Option 4 ID : 264330666371
Status : Not Attempted and Marked For Review
Chosen Option : --

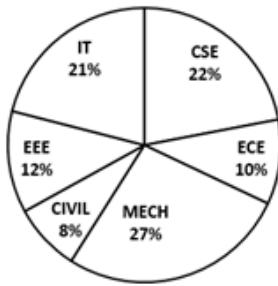
Q.43 Let ABC, PQR be two congruent triangles such that $\angle A = \angle P = 90^\circ$. If BC = 17 cm, PR = 8 cm, find AB (in cm).

- Ans
- 1. 12
 - 2. 15
 - 3. 14
 - 4. 9

Question ID : 264330157743
Option 1 ID : 264330618332
Option 2 ID : 264330618334
Option 3 ID : 264330618333
Option 4 ID : 264330618331
Status : Answered
Chosen Option : 2

Q.44 Study the pie-chart given below, and answer the question that follows.
Percentage-wise break up of students in terms of specialisation in BTech

TOTAL NUMBER OF STUDENTS = 6700



What is the total number of students having specialisation in CSE, ECE and CIVIL?

- Ans 1. 2680
 2. 2840
 3. 2860
 4. 2480

Question ID : 264330165433
Option 1 ID : 264330648813
Option 2 ID : 264330648814
Option 3 ID : 264330648812
Option 4 ID : 264330648811
Status : Answered
Chosen Option : 1

Q.45 The LCM and HCF of two numbers are 1105 and 5. If the LCM is 17 times the first number, then find the two numbers.

- Ans 1. 65 and 85
 2. 55 and 85
 3. 65 and 75
 4. 60 and 80

Question ID : 26433065039
Option 1 ID : 264330254748
Option 2 ID : 264330254750
Option 3 ID : 264330254749
Option 4 ID : 264330254751
Status : Answered
Chosen Option : 1

Q.46 Akshita and Raina are typing a book, but have only one laptop to work upon. They decided that they will work on alternate basis such that Akshita works for the first day, Raina works for the second day, Akshita for the third day and so on. Akshita alone can finish the typing work in 16 days, while Raina will take 24 days if she works alone on the entire book. How many days will they take to finish the typing work if they work on alternate basis?

- Ans
- 1. 15
 - 2. 18
 - 3. 19
 - 4. 17

Question ID : 26433082512

Option 1 ID : 264330323883

Option 2 ID : 264330323882

Option 3 ID : 264330323884

Option 4 ID : 264330323881

Status : Not Attempted and Marked For Review

Chosen Option : --

Q.47 A train covers a distance of 540 km between two stations in 240 minutes. It travels at a speed of 90 km/h to another station in 5 hours. What is the average speed of the train (in km/h)?

- Ans
- 1. 112
 - 2. 110
 - 3. 100
 - 4. 120

Question ID : 264330106345

Option 1 ID : 264330417681

Option 2 ID : 264330417684

Option 3 ID : 264330417682

Option 4 ID : 264330417683

Status : Answered

Chosen Option : 2

Q.48 The heights of two cones are in the ratio 7:5 and their diameters are in the ratio 10:21. What is the ratio of their volumes? (Where $\pi = \frac{22}{7}$)

- Ans
- 1. 26:47
 - 2. 14:19
 - 3. 20:63
 - 4. 17:21

Question ID : 264330104376

Option 1 ID : 264330409808

Option 2 ID : 264330409807

Option 3 ID : 264330409806

Option 4 ID : 264330409805

Status : Answered

Chosen Option : 3

Q.49 What is the difference between a single discount of 35% on ₹700 and two successive discounts of 18% and 12% on the same amount (correct to two places of decimals)?

- Ans
- 1. ₹51.20
 - 2. ₹50.12
 - 3. ₹52.10
 - 4. ₹49.80

Question ID : 264330165523

Option 1 ID : 264330649171

Option 2 ID : 264330649173

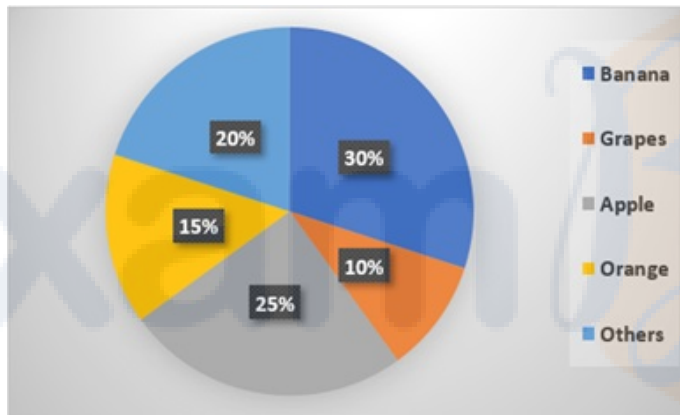
Option 3 ID : 264330649172

Option 4 ID : 264330649174

Status : Not Attempted and Marked For Review

Chosen Option : --

Q.50 Study the given pie-chart and answer the question that follows.
The pie-chart shows the sale of different fruits in a shop in a day.



If a total of 1200 kg of fruits were sold in a day, calculate the amount of bananas sold (in kg).

- Ans
- 1. 360
 - 2. 290
 - 3. 330
 - 4. 260

Question ID : 264330157737

Option 1 ID : 264330618310

Option 2 ID : 264330618308

Option 3 ID : 264330618309

Option 4 ID : 264330618307

Status : Answered

Chosen Option : 1

Section : English Comprehension

Q.1 Select the most appropriate ANTONYM of the given word.
Transparent

- Ans 1. Crossover
 2. Linger
 3. Opaque
 4. Oppress

Question ID : 264330164277
Option 1 ID : 264330644333
Option 2 ID : 264330644332
Option 3 ID : 264330644334
Option 4 ID : 264330644331
Status : Answered
Chosen Option : 3

Q.2 Select the most appropriate meaning of the underlined idiom.
The office management was in dire straits after the financial crash.

- Ans 1. To be extremely happy
 2. In a very bad situation
 3. Being direct or fair
 4. To walk on already trodden paths

Question ID : 264330120620
Option 1 ID : 264330472721
Option 2 ID : 264330472719
Option 3 ID : 264330472720
Option 4 ID : 264330472722
Status : Answered
Chosen Option : 2

Q.3 Select the INCORRECTLY spelt word.

- Ans 1. Puzzled
 2. Nasal
 3. Councel
 4. Embezzlement

Question ID : 26433089104
Option 1 ID : 264330349934
Option 2 ID : 264330349935
Option 3 ID : 264330349936
Option 4 ID : 264330349933
Status : Answered
Chosen Option : 3

Q.4 Select the option that can be used as a one-word substitute for the given group of words.

Lasting for a very short time

- Ans
- 1. Eternal
 - 2. Ephemeral
 - 3. Blasphemy
 - 4. Chronology

Question ID : 26433091809

Option 1 ID : 264330360575

Option 2 ID : 264330360576

Option 3 ID : 264330360573

Option 4 ID : 264330360574

Status : Answered

Chosen Option : 2

Q.5 Select the most appropriate idiom that can substitute the underlined segment in the given sentence.

Do you believe that you have a possibility of getting that job?

- Ans
- 1. spill the beans
 - 2. snow job
 - 3. stand a chance
 - 4. shoot the breeze

Question ID : 264330117475

Option 1 ID : 264330461931

Option 2 ID : 264330461932

Option 3 ID : 264330461930

Option 4 ID : 264330461929

Status : Answered

Chosen Option : 3

Q.6 Select the most appropriate synonym of the given word.

Aggravate

- Ans
- 1. Annoy
 - 2. Mitigate
 - 3. Enhance
 - 4. Satisfy

Question ID : 264330163332

Option 1 ID : 264330640630

Option 2 ID : 264330640628

Option 3 ID : 264330640629

Option 4 ID : 264330640627

Status : Answered

Chosen Option : 3

Q.7 Choose the idiom that can best substitute the underlined part of the given sentence.

Shelley ignored her father's wish of studying arts and instead took admission in commerce.

- Ans
- 1. Blew over
 - 2. Big fish
 - 3. Bid defiance to
 - 4. Beyond the pale

Question ID : 26433094748
Option 1 ID : 264330371827
Option 2 ID : 264330371825
Option 3 ID : 264330371828
Option 4 ID : 264330371826
Status : Answered
Chosen Option : 3

Q.8 Select the most appropriate meaning of the given idiom.

Get your act together

- Ans
- 1. To ruin one's plans
 - 2. To organise yourself so that you can do something properly
 - 3. To get the conversation going
 - 4. To understand something complicated

Question ID : 264330163401
Option 1 ID : 264330640883
Option 2 ID : 264330640885
Option 3 ID : 264330640886
Option 4 ID : 264330640884
Status : Answered
Chosen Option : 2

Q.9 Identify from the given options the word most similar in meaning to the underlined word according to its meaning in the following sentence.
He is a person who holds old fashioned opinions.

- Ans
- 1. obsolete
 - 2. ancient
 - 3. antique
 - 4. senior citizen

Question ID : 264330101442
Option 1 ID : 264330398279
Option 2 ID : 264330398277
Option 3 ID : 264330398278
Option 4 ID : 264330398280
Status : Answered
Chosen Option : 1

Q.10 Select the most appropriate option that can substitute the underlined words in the given sentence.

Kiran's teacher was doubtful on her success.

- Ans
- 1. doubtful beyond
 - 2. doubtful in
 - 3. doubtful off
 - 4. doubtful of

Question ID : 26433099936
Option 1 ID : 264330392319
Option 2 ID : 264330392318
Option 3 ID : 264330392320
Option 4 ID : 264330392317
Status : Answered
Chosen Option : 4

Q.11 Select the correct spelling for the INCORRECTLY spelt word in the given sentence.

The Eustachian tube and vestibular complex in the middle and inner ear, respectively, have an important role to play.

- Ans
- 1. vestibular
 - 2. midle
 - 3. respictevely
 - 4. impoportent

Question ID : 26433090499
Option 1 ID : 264330355445
Option 2 ID : 264330355446
Option 3 ID : 264330355447
Option 4 ID : 264330355448
Status : Answered
Chosen Option : 1

Q.12 Select the most appropriate idiom to fill in the blank.

There are others waiting to grab an opportunity; if you don't act fast, you are going to _____.

- Ans
- 1. be in the same boat
 - 2. a full boat
 - 3. push the boat out
 - 4. miss the boat

Question ID : 264330163335
Option 1 ID : 264330640639
Option 2 ID : 264330640642
Option 3 ID : 264330640640
Option 4 ID : 264330640641
Status : Answered
Chosen Option : 4

Q.13 The following sentence has been split into four segments. Identify the segment that contains a grammatical error.
Mr. Khanna and family / have visit / Manali during / the summer vacation.

- Ans
- 1. have visit
 - 2. Mr. Khanna and family
 - 3. the summer vacation.
 - 4. Manali during

Question ID : 26433059759
Option 1 ID : 264330233869
Option 2 ID : 264330233868
Option 3 ID : 264330233871
Option 4 ID : 264330233870
Status : Answered
Chosen Option : 1

Q.14 Select the most appropriate idiom for the given situation.

He started with an online company and became a millionaire. Then, he sold it and invested in the share market and earned more money. Now, he has invested in the transportation industry and is generating huge wealth. What does he have?

- Ans
- 1. As genuine as a three-dollar bill
 - 2. Midas touch
 - 3. Rule of thumb
 - 4. Sticky fingers

Question ID : 26433093038
Option 1 ID : 264330365406
Option 2 ID : 264330365407
Option 3 ID : 264330365408
Option 4 ID : 264330365405
Status : Answered
Chosen Option : 2

Q.15 The following sentence has been divided into parts. One of them may contain an error. Select the part that contains the error from the given options. If you don't find any error, mark 'No error' as your answer.

There was no other book / in the English language / which is as interesting as this one.

- Ans
- 1. There was no other book
 - 2. in the English language
 - 3. No error
 - 4. which is as interesting as this one

Question ID : 264330120599
Option 1 ID : 264330472635
Option 2 ID : 264330472636
Option 3 ID : 264330472638
Option 4 ID : 264330472637
Status : Answered
Chosen Option : 1

Q.16 Select the option that can be used as a one-word substitute for the given group of words.

Very attractive and easy to feel love for

- Ans
- 1. Flamboyant
 - 2. Adorable
 - 3. Mysterious
 - 4. Laudable

Question ID : 26433088194

Option 1 ID : 264330346369

Option 2 ID : 264330346371

Option 3 ID : 264330346372

Option 4 ID : 264330346370

Status : Answered

Chosen Option : 2

Q.17 Select the most appropriate meaning of the underlined word.
He uses one of the finest ingredients in his cooking.

- Ans
- 1. Components
 - 2. Mixtures
 - 3. Culinary
 - 4. Preparations

Question ID : 264330121040

Option 1 ID : 264330474367

Option 2 ID : 264330474368

Option 3 ID : 264330474370

Option 4 ID : 264330474369

Status : Answered

Chosen Option : 1

Q.18 Select the most appropriate ANTONYM of the given word.

Abhor

- Ans
- 1. Occupy
 - 2. Despise
 - 3. Danger
 - 4. Love

Question ID : 264330163376

Option 1 ID : 264330640794

Option 2 ID : 264330640791

Option 3 ID : 264330640792

Option 4 ID : 264330640793

Status : Answered

Chosen Option : 4

Q.19 Select the option that can be used as a one-word substitute for the underlined words.

He was not willing to attend the technical session of the conference.

- Ans
- 1. dejecting
 - 2. reluctant
 - 3. curious
 - 4. comprehensive

Question ID : 26433099922
Option 1 ID : 264330392269
Option 2 ID : 264330392270
Option 3 ID : 264330392272
Option 4 ID : 264330392271
Status : Answered
Chosen Option : 2

Q.20 Select the option that can be used as a one-word substitute for the given group of words.

A disease prevalent in a community or a specific region at a specific time, affecting a large area.

- Ans
- 1. Pandemic
 - 2. Eradicate
 - 3. Epidemic
 - 4. Endemic

Question ID : 26433088805
Option 1 ID : 264330348774
Option 2 ID : 264330348776
Option 3 ID : 264330348775
Option 4 ID : 264330348773
Status : Answered
Chosen Option : 3

Q.21 Select the most appropriate ANTONYM of the given word.

Apex

- Ans
- 1. Pinnacle
 - 2. Bottom
 - 3. Farthest
 - 4. Watchful

Question ID : 264330163397
Option 1 ID : 264330640867
Option 2 ID : 264330640869
Option 3 ID : 264330640868
Option 4 ID : 264330640870
Status : Answered
Chosen Option : 2

Q.22 Select the most appropriate meaning of the underlined word.
Ram was abandoned by his parents at a very early age.

- Ans
- 1. Loved
 - 2. Left
 - 3. Hated
 - 4. Disgraced

Question ID : 264330121035
Option 1 ID : 264330474349
Option 2 ID : 264330474347
Option 3 ID : 264330474348
Option 4 ID : 264330474350
Status : Answered
Chosen Option : 2

Q.23 Select the most appropriate meaning of the given idiom.

Part and parcel

- Ans
- 1. Passing blame to someone else
 - 2. Agreement with someone
 - 3. A payment system for parcels
 - 4. Basic or essential element

Question ID : 26433091884
Option 1 ID : 264330360874
Option 2 ID : 264330360875
Option 3 ID : 264330360873
Option 4 ID : 264330360876
Status : Answered
Chosen Option : 4

Q.24 Choose the most appropriate meaning of the underlined phrase.
What we need is skilled and energetic planning and elbow grease.

- Ans
- 1. The grease that is earned through labour
 - 2. Hard work that one puts into cleaning one's elbow
 - 3. Hard work that one puts into removing grease
 - 4. Hard work that one puts into doing something

Question ID : 264330137457
Option 1 ID : 264330538453
Option 2 ID : 264330538452
Option 3 ID : 264330538451
Option 4 ID : 264330538454
Status : Answered
Chosen Option : 4

Q.25 Select the most appropriate synonym of the given word.

Robe

- Ans
- 1. Robbery
 - 2. Mishap
 - 3. Success
 - 4. Cloak

Question ID : 264330163358

Option 1 ID : 264330640723

Option 2 ID : 264330640725

Option 3 ID : 264330640726

Option 4 ID : 264330640724

Status : Not Attempted and
Marked For Review

Chosen Option : --

Q.26 Select the most appropriate meaning of the given idiom.
A snowball effect

- Ans
- 1. An accelerating growth of magnitude
 - 2. Trick someone completely
 - 3. Cold and uncomfortable
 - 4. Slow movement

Question ID : 264330117376

Option 1 ID : 264330461548

Option 2 ID : 264330461547

Option 3 ID : 264330461545

Option 4 ID : 264330461546

Status : Not Attempted and
Marked For Review

Chosen Option : --

Q.27 Some words in the following sentence have been underlined and given as options.
Select the option that contains a spelling error.
Roshni does a fabulouous job at her company and has been offered a promotion.

- Ans
- 1. fabulouous
 - 2. company
 - 3. promotion
 - 4. offered

Question ID : 264330121268

Option 1 ID : 264330475275

Option 2 ID : 264330475276

Option 3 ID : 264330475278

Option 4 ID : 264330475277

Status : Answered

Chosen Option : 1

Q.28 The following sentence has been split into four segments. Identify the segment that contains a grammatical error.

I have never / come to / such a kind person / like my friend.

- Ans
- 1. such a kind person
 - 2. like my friend
 - 3. come to
 - 4. I have never

Question ID : 26433070491
Option 1 ID : 264330276442
Option 2 ID : 264330276443
Option 3 ID : 264330276441
Option 4 ID : 264330276440
Status : Answered
Chosen Option : 3

Q.29 Select the most appropriate option that can substitute the underlined word in the given sentence.

The Board of Film Analysts vituperated the novice Indonesian film-maker and cancelled its nomination for the 'Golden Globe Award'.

- Ans
- 1. lamented the untimely death of
 - 2. censured with harsh and abusive language
 - 3. dealt in a delicate and polite manner
 - 4. recognised and praised the talent of

Question ID : 26433070504
Option 1 ID : 264330276493
Option 2 ID : 264330276494
Option 3 ID : 264330276495
Option 4 ID : 264330276492
Status : Answered
Chosen Option : 2

Q.30 Select the most appropriate idiom to substitute the underlined segment in the given sentence.

My final round of Spell Bee Competition is coming up and to win this event, I need to study hard from today.

- Ans
- 1. burn the books
 - 2. hit the books
 - 3. cut to the chase
 - 4. pour my heart out

Question ID : 264330135908
Option 1 ID : 264330532487
Option 2 ID : 264330532488
Option 3 ID : 264330532489
Option 4 ID : 264330532490
Status : Answered
Chosen Option : 2

Q.31 Select the option that can be used as a one-word substitute for the given group of words.

To have a strong emotional effect on.

- Ans
- 1. To forfeit
 - 2. To overwhelm
 - 3. To smother
 - 4. To yield

Question ID : 26433088971
Option 1 ID : 264330349424
Option 2 ID : 264330349423
Option 3 ID : 264330349421
Option 4 ID : 264330349422
Status : Answered
Chosen Option : 2

Q.32 Select the INCORRECTLY spelt word.

- Ans
- 1. Ocassion
 - 2. Agreeable
 - 3. Formulae
 - 4. Waitress

Question ID : 264330163411
Option 1 ID : 264330640924
Option 2 ID : 264330640925
Option 3 ID : 264330640926
Option 4 ID : 264330640923
Status : Answered
Chosen Option : 2

Q.33 Select the most appropriate option that can substitute the underlined segment in the given sentence. If there is no need to substitute it, select 'No substitution required'.
Harry is the one sitting on the corner.

- Ans
- 1. No substitution required
 - 2. upon
 - 3. onto
 - 4. in

Question ID : 26433070769
Option 1 ID : 264330277535
Option 2 ID : 264330277533
Option 3 ID : 264330277534
Option 4 ID : 264330277532
Status : Answered
Chosen Option : 4

Q.34 Select the **INCORRECTLY** spelt word from the underlined words in the following sentence.

Communities must build their resileince, including adopting appropriate technologies while making the most of traditional knowledge, and diversifying their livelihoods to cope with current and future climate stress.

- Ans**
- 1. livelihoods
 - 2. diversifying
 - 3. appropriate
 - 4. resileince

Question ID : 264330141159

Option 1 ID : 264330552982

Option 2 ID : 264330552981

Option 3 ID : 264330552980

Option 4 ID : 264330552979

Status : Answered

Chosen Option : 4

Q.35 The following sentence has been split into four segments. Identify the segment that contains a grammatical error.

The university has putting off / the semester examination / for the second time now / due to technical issues.

- Ans**
- 1. the semester examination
 - 2. due to technical issues
 - 3. for the second time now
 - 4. The university has putting off

Question ID : 264330145278

Option 1 ID : 264330569368

Option 2 ID : 264330569370

Option 3 ID : 264330569369

Option 4 ID : 264330569367

Status : Answered

Chosen Option : 4

Q.36 Select the correct option to substitute the underlined segment in the given sentence. If no substitution is required, select 'No substitution'.

Her smile is similar to her mother.

- Ans**
- 1. No substitution
 - 2. her mother's
 - 3. mother
 - 4. the mother

Question ID : 26433090821

Option 1 ID : 264330356708

Option 2 ID : 264330356705

Option 3 ID : 264330356707

Option 4 ID : 264330356706

Status : Answered

Chosen Option : 2

Q.37 Select the most appropriate ANTONYM of the given word.

Inquisitive

- Ans
- 1. Careful
 - 2. Dull
 - 3. Uninterested
 - 4. Indolent

Question ID : 264330120606
Option 1 ID : 264330472666
Option 2 ID : 264330472664
Option 3 ID : 264330472663
Option 4 ID : 264330472665
Status : Answered
Chosen Option : 3

Q.38 Parts of the following sentence have been given as options. One of them may contain an error. Select the part that contains the error from the given options. If you don't find any error, mark 'No error' as your answer.

Anant was telling a story about his most recent exploits when a tree branch break the living room window.

- Ans
- 1. about his most recent exploits
 - 2. when a tree branch break the living room window
 - 3. Anant was telling a story
 - 4. No error

Question ID : 26433092136
Option 1 ID : 264330361858
Option 2 ID : 264330361859
Option 3 ID : 264330361857
Option 4 ID : 264330361860
Status : Answered
Chosen Option : 2

Q.39 Select the option that can be used as a one-word substitute for the given group of words.

An animal or a person that eats all types of food, especially plants and meat

- Ans
- 1. Vegetarian
 - 2. Herbivore
 - 3. Omnivore
 - 4. Carnivore

Question ID : 26433088198
Option 1 ID : 264330346385
Option 2 ID : 264330346388
Option 3 ID : 264330346386
Option 4 ID : 264330346387
Status : Answered
Chosen Option : 3

Q.40 Select the most appropriate ANTONYM of the given word.

Bombastic

- Ans 1. Essential
 2. Sarcastic
 3. Plain
 4. Rhythmic

Question ID : 264330163399
Option 1 ID : 264330640877
Option 2 ID : 264330640876
Option 3 ID : 264330640875
Option 4 ID : 264330640878
Status : Answered
Chosen Option : 3

Comprehension:

In the following passage some words have been deleted. Read the passage carefully and select the most appropriate option to fill in each blank.

Among the largest species of cats in the world, tigers are powerful hunters with (1) _____ teeth, strong jaws and agile bodies. They range across Asia from Russia all the way to Sumatra and mainland Southeast Asia. Researchers still have much to learn (2) _____ these beautiful, endangered (3) _____. There is currently one recognized species of tiger, *Panthera tigris*. Scientists have further (4) _____ the tiger into nine subspecies: the extinct Bali, Caspian and Javan subspecies, and the living Malayan, Sumatran, South China, Indochinese, Bengal and Amur (or Siberian) subspecies. Of these six subspecies, AZA-accredited zoos currently manage three: Amur, Malayan, and Sumatran. The Smithsonian's National Zoo and Conservation Biology Institute is home to Sumatran and Amur tigers; Sumatran tigers are (5) _____ as Critically Endangered on the International Union for Conservation of Nature's Red List, and Amur tigers have been classified as Endangered.

SubQuestion No : 41

Q.41 Select the most appropriate option to fill blank number 1.

- Ans 1. Long
 2. Small
 3. Blunt
 4. Sharp

Question ID : 264330163389
Option 1 ID : 264330640837
Option 2 ID : 264330640835
Option 3 ID : 264330640836
Option 4 ID : 264330640838
Status : Answered
Chosen Option : 4

Comprehension:

In the following passage some words have been deleted. Read the passage carefully and select the most appropriate option to fill in each blank.

Among the largest species of cats in the world, tigers are powerful hunters with (1) _____ teeth, strong jaws and agile bodies. They range across Asia from Russia all the way to Sumatra and mainland Southeast Asia. Researchers still have much to learn (2) _____ these beautiful, endangered (3) _____.

There is currently one recognized species of tiger, *Panthera tigris*. Scientists have further (4) _____ the tiger into nine subspecies: the extinct Bali, Caspian and Javan subspecies, and the living Malayan, Sumatran, South China, Indochinese, Bengal and Amur (or Siberian) subspecies. Of these six subspecies, AZA-accredited zoos currently manage three: Amur, Malayan, and Sumatran. The Smithsonian's National Zoo and Conservation Biology Institute is home to Sumatran and Amur tigers; Sumatran tigers are (5) _____ as Critically Endangered on the International Union for Conservation of Nature's Red List, and Amur tigers have been classified as Endangered.

SubQuestion No : 42**Q.42 Select the most appropriate option to fill blank number 2.**

- Ans 1. With
 2. Into
 3. About
 4. Along

Question ID : 264330163390

Option 1 ID : 264330640839

Option 2 ID : 264330640842

Option 3 ID : 264330640841

Option 4 ID : 264330640840

Status : Answered

Chosen Option : 3

Comprehension:

In the following passage some words have been deleted. Read the passage carefully and select the most appropriate option to fill in each blank.

Among the largest species of cats in the world, tigers are powerful hunters with (1) _____ teeth, strong jaws and agile bodies. They range across Asia from Russia all the way to Sumatra and mainland Southeast Asia. Researchers still have much to learn (2) _____ these beautiful, endangered (3) _____.

There is currently one recognized species of tiger, *Panthera tigris*. Scientists have further (4) _____ the tiger into nine subspecies: the extinct Bali, Caspian and Javan subspecies, and the living Malayan, Sumatran, South China, Indochinese, Bengal and Amur (or Siberian) subspecies. Of these six subspecies, AZA-accredited zoos currently manage three: Amur, Malayan, and Sumatran. The Smithsonian's National Zoo and Conservation Biology Institute is home to Sumatran and Amur tigers; Sumatran tigers are (5) _____ as Critically Endangered on the International Union for Conservation of Nature's Red List, and Amur tigers have been classified as Endangered.

SubQuestion No : 43**Q.43 Select the most appropriate option to fill blank number 3.**

- Ans 1. Rabbits
 2. Cats
 3. Elephants
 4. Dogs

Question ID : 264330163391

Option 1 ID : 264330640845

Option 2 ID : 264330640843

Option 3 ID : 264330640846

Option 4 ID : 264330640844

Status : Answered

Chosen Option : 2

Comprehension:

In the following passage some words have been deleted. Read the passage carefully and select the most appropriate option to fill in each blank.

Among the largest species of cats in the world, tigers are powerful hunters with (1) _____ teeth, strong jaws and agile bodies. They range across Asia from Russia all the way to Sumatra and mainland Southeast Asia. Researchers still have much to learn (2) _____ these beautiful, endangered (3) _____. There is currently one recognized species of tiger, *Panthera tigris*. Scientists have further (4) _____ the tiger into nine subspecies: the extinct Bali, Caspian and Javan subspecies, and the living Malayan, Sumatran, South China, Indochinese, Bengal and Amur (or Siberian) subspecies. Of these six subspecies, AZA-accredited zoos currently manage three: Amur, Malayan, and Sumatran. The Smithsonian's National Zoo and Conservation Biology Institute is home to Sumatran and Amur tigers; Sumatran tigers are (5) _____ as Critically Endangered on the International Union for Conservation of Nature's Red List, and Amur tigers have been classified as Endangered.

SubQuestion No : 44

Q.44 Select the most appropriate option to fill blank number 4.

- Ans
- 1. Declared
 - 2. Restricted
 - 3. Generalized
 - 4. Classified

Question ID : 264330163392

Option 1 ID : 264330640849

Option 2 ID : 264330640848

Option 3 ID : 264330640850

Option 4 ID : 264330640847

Status : Answered

Chosen Option : 4

Comprehension:

In the following passage some words have been deleted. Read the passage carefully and select the most appropriate option to fill in each blank.

Among the largest species of cats in the world, tigers are powerful hunters with (1) _____ teeth, strong jaws and agile bodies. They range across Asia from Russia all the way to Sumatra and mainland Southeast Asia. Researchers still have much to learn (2) _____ these beautiful, endangered (3) _____. There is currently one recognized species of tiger, *Panthera tigris*. Scientists have further (4) _____ the tiger into nine subspecies: the extinct Bali, Caspian and Javan subspecies, and the living Malayan, Sumatran, South China, Indochinese, Bengal and Amur (or Siberian) subspecies. Of these six subspecies, AZA-accredited zoos currently manage three: Amur, Malayan, and Sumatran. The Smithsonian's National Zoo and Conservation Biology Institute is home to Sumatran and Amur tigers; Sumatran tigers are (5) _____ as Critically Endangered on the International Union for Conservation of Nature's Red List, and Amur tigers have been classified as Endangered.

SubQuestion No : 45

Q.45 Select the most appropriate option to fill blank number 5.

- Ans
- 1. Numerated
 - 2. Detailed
 - 3. Recorded
 - 4. Listed

Question ID : 264330163393

Option 1 ID : 264330640854

Option 2 ID : 264330640853

Option 3 ID : 264330640851

Option 4 ID : 264330640852

Status : Answered

Chosen Option : 4

Comprehension:

Read the given passage and answer the questions that follow.

What if globally designed products could radically change how we work, produce and consume? Several examples across continents show the way we are producing and consuming goods could be improved by relying on globally shared digital resources, such as design, knowledge and software.

Imagine a prosthetic hand designed by geographically dispersed communities of scientists, designers and enthusiasts in a collaborative manner via the web. All knowledge and software related to the hand is shared globally as a digital commons.

People from all over the world who are connected online and have access to local manufacturing machines (from 3D printing and CNC machines to low-tech crafts and tools) can, ideally with the help of an expert, manufacture a customised hand. This is the case of the Open Bionics project, which produces designs for robotic and bionic devices.

There are no patent costs to pay for. Less transportation of materials is needed, since a considerable part of the manufacturing takes place locally; maintenance is easier, products are designed to last as long as possible, and costs are thus much lower.

SubQuestion No : 46**Q.46 Identify the most suitable title for the given passage.**

- Ans
- 1. Knowledge Explosion
 - 2. Customised Hand
 - 3. Shared Information
 - 4. Digital Globalisation

Question ID : 264330136482

Option 1 ID : 264330534678

Option 2 ID : 264330534676

Option 3 ID : 264330534675

Option 4 ID : 264330534677

Status : Answered

Chosen Option : 3

Comprehension:

Read the given passage and answer the questions that follow.

What if globally designed products could radically change how we work, produce and consume? Several examples across continents show the way we are producing and consuming goods could be improved by relying on globally shared digital resources, such as design, knowledge and software.

Imagine a prosthetic hand designed by geographically dispersed communities of scientists, designers and enthusiasts in a collaborative manner via the web. All knowledge and software related to the hand is shared globally as a digital commons.

People from all over the world who are connected online and have access to local manufacturing machines (from 3D printing and CNC machines to low-tech crafts and tools) can, ideally with the help of an expert, manufacture a customised hand. This is the case of the Open Bionics project, which produces designs for robotic and bionic devices.

There are no patent costs to pay for. Less transportation of materials is needed, since a considerable part of the manufacturing takes place locally; maintenance is easier, products are designed to last as long as possible, and costs are thus much lower.

SubQuestion No : 47**Q.47 What is the term used in the passage for globally shared digital things?**

- Ans
- 1. Digital commons
 - 2. Digital information
 - 3. Digital resources
 - 4. Digital world

Question ID : 264330136479

Option 1 ID : 264330534666

Option 2 ID : 264330534664

Option 3 ID : 264330534663

Option 4 ID : 264330534665

Status : Answered

Chosen Option : 3

Comprehension:

Read the given passage and answer the questions that follow.

What if globally designed products could radically change how we work, produce and consume? Several examples across continents show the way we are producing and consuming goods could be improved by relying on globally shared digital resources, such as design, knowledge and software.

Imagine a prosthetic hand designed by geographically dispersed communities of scientists, designers and enthusiasts in a collaborative manner via the web. All knowledge and software related to the hand is shared globally as a digital commons.

People from all over the world who are connected online and have access to local manufacturing machines (from 3D printing and CNC machines to low-tech crafts and tools) can, ideally with the help of an expert, manufacture a customised hand. This is the case of the Open Bionics project, which produces designs for robotic and bionic devices.

There are no patent costs to pay for. Less transportation of materials is needed, since a considerable part of the manufacturing takes place locally; maintenance is easier, products are designed to last as long as possible, and costs are thus much lower.

SubQuestion No : 48**Q.48 What is the tone of the author?****Ans** ✓ 1. Speculative

✗ 2. Caustic

✗ 3. Acerbic

✗ 4. Belligerent

Question ID : 264330136481

Option 1 ID : 264330534674

Option 2 ID : 264330534673

Option 3 ID : 264330534671

Option 4 ID : 264330534672

Status : Answered

Chosen Option : 1

Comprehension:

Read the given passage and answer the questions that follow.

What if globally designed products could radically change how we work, produce and consume? Several examples across continents show the way we are producing and consuming goods could be improved by relying on globally shared digital resources, such as design, knowledge and software.

Imagine a prosthetic hand designed by geographically dispersed communities of scientists, designers and enthusiasts in a collaborative manner via the web. All knowledge and software related to the hand is shared globally as a digital commons.

People from all over the world who are connected online and have access to local manufacturing machines (from 3D printing and CNC machines to low-tech crafts and tools) can, ideally with the help of an expert, manufacture a customised hand. This is the case of the Open Bionics project, which produces designs for robotic and bionic devices.

There are no patent costs to pay for. Less transportation of materials is needed, since a considerable part of the manufacturing takes place locally; maintenance is easier, products are designed to last as long as possible, and costs are thus much lower.

SubQuestion No : 49**Q.49 Which of the following is NOT a globally shared digital resource?****Ans** ✗ 1. Knowledge

✗ 2. Design

✓ 3. Automobile

✗ 4. Software

Question ID : 264330136478

Option 1 ID : 264330534659

Option 2 ID : 264330534660

Option 3 ID : 264330534661

Option 4 ID : 264330534662

Status : Answered

Chosen Option : 3

Comprehension:

Read the given passage and answer the questions that follow.

What if globally designed products could radically change how we work, produce and consume? Several examples across continents show the way we are producing and consuming goods could be improved by relying on globally shared digital resources, such as design, knowledge and software.

Imagine a prosthetic hand designed by geographically dispersed communities of scientists, designers and enthusiasts in a collaborative manner via the web. All knowledge and software related to the hand is shared globally as a digital commons.

People from all over the world who are connected online and have access to local manufacturing machines (from 3D printing and CNC machines to low-tech crafts and tools) can, ideally with the help of an expert, manufacture a customised hand. This is the case of the Open Bionics project, which produces designs for robotic and bionic devices.

There are no patent costs to pay for. Less transportation of materials is needed, since a considerable part of the manufacturing takes place locally; maintenance is easier, products are designed to last as long as possible, and costs are thus much lower.

SubQuestion No : 50

Q.50 Select the most suitable word from the passage which means 'scattered'.

- Ans 1. Collaborative
 2. Shared
 3. Customised
 4. Dispersed

Question ID : 264330136480

Option 1 ID : 264330534669

Option 2 ID : 264330534667

Option 3 ID : 264330534670

Option 4 ID : 264330534668

Status : Answered

Chosen Option : 4

Sub Inspector in Delhi Police and Central Armed Police Forces Examination 2023 Paper I



Prepare 50% Faster

Roll Number	
Candidate Name	
Venue Name	iON Digital Zone iDZ Karsua
Exam Date	04/10/2023
Exam Time	4:00 PM - 6:00 PM
Subject	SICPO Paper I 2023

Section : General Intelligence and Reasoning

Q.1 In a certain code language, 'ACTION' is written as 'TXANLI' and 'DEBATE' is written as 'BVDEGA'. How will 'CHANGE' be written in that language?

- Ans
- 1. ATHFN
 - 2. HRPEIU
 - 3. BJDLER
 - 4. ASCETN

Question ID : 26433074764
Option 1 ID : 264330293144
Option 2 ID : 264330293145
Option 3 ID : 264330293147
Option 4 ID : 264330293146
Status : Answered
Chosen Option : 4

Q.2 Which of the following numbers will replace the question mark (?) in the given series?

38, 57, 40, 59, 42, ?

- Ans
- 1. 59
 - 2. 62
 - 3. 60
 - 4. 61

Question ID : 26433057339
Option 1 ID : 264330224340
Option 2 ID : 264330224343
Option 3 ID : 264330224341
Option 4 ID : 264330224342
Status : Answered
Chosen Option : 4

Q.3 Which of the following numbers will replace the question mark (?) in the given series?
112, 129, 150, 175, 204, ?

- Ans
- 1. 240
 - 2. 234
 - 3. 237
 - 4. 245

Question ID : 26433067867
Option 1 ID : 264330265980
Option 2 ID : 264330265981
Option 3 ID : 264330265982
Option 4 ID : 264330265983
Status : Answered
Chosen Option : 3



Prepare 50% Faster

Q.4 In a certain code language, 'COACH' is coded as XAOHC and 'BERTH' is coded as WREHT. How will 'TRAIN' be coded in the same language?

- Ans
- 1. OARNI
 - 2. PARNI
 - 3. PARIN
 - 4. ONIAR

Question ID : 264330132209
Option 1 ID : 264330517934
Option 2 ID : 264330517931
Option 3 ID : 264330517933
Option 4 ID : 264330517932
Status : Answered
Chosen Option : 1

Q.5 If '+' means '-', '-' means 'x', 'x' means '÷' and '÷' means '+', what will come in place of '?' in the following equation?
 $121 \times 11 \div 28 - 3 + 46 = ?$

- Ans
- 1. 49
 - 2. 43
 - 3. 65
 - 4. 71

Question ID : 264330101148
Option 1 ID : 264330397140
Option 2 ID : 264330397137
Option 3 ID : 264330397138
Option 4 ID : 264330397139
Status : Answered
Chosen Option : 1

Q.6 Which of the following terms will replace the question mark (?) in the given series?

LDEA NGIF ? RMQP TPUU

- Ans
- 1. PMJK
 - 2. PIMK
 - 3. PMIK
 - 4. PJMK

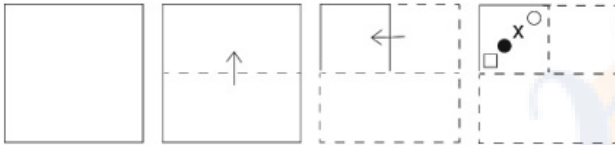
Question ID : 26433085319
Option 1 ID : 264330334980
Option 2 ID : 264330334977
Option 3 ID : 264330334979
Option 4 ID : 264330334978
Status : Answered
Chosen Option : 4

Q.7 If '+' means '-', '-' means 'x', 'x' means '÷' and '÷' means '+', then what will come in place of (?) in the given equation?
 $30 + 5 - 2 \times 10 \div 2 = ?$

- Ans
- 1. 50
 - 2. 31
 - 3. 80
 - 4. 60

Question ID : 264330106671
 Option 1 ID : 264330418985
 Option 2 ID : 264330418986
 Option 3 ID : 264330418988
 Option 4 ID : 264330418987
 Status : Answered
 Chosen Option : 2

Q.8 A paper is folded and cut as shown below. How will it appear when unfolded?



Ans

- 1.
- 2.
- 3.
- 4.

Question ID : 264330103007
 Option 1 ID : 264330404418
 Option 2 ID : 264330404417
 Option 3 ID : 264330404419
 Option 4 ID : 264330404420
 Status : Answered
 Chosen Option : 2

Q.9 In a certain code language, 'HORSE' is coded as 75 and 'MOVE' is coded as 63. How will 'RACE' be coded in that language?

- Ans
- 1. 46
 - 2. 32
 - 3. 48
 - 4. 35

Question ID : 26433074708
Option 1 ID : 264330292922
Option 2 ID : 264330292920
Option 3 ID : 264330292923
Option 4 ID : 264330292921
Status : Answered
Chosen Option : 4

Q.10 उस विकल्प का चयन कीजिए, जो तीसरे शब्द से उसी प्रकार संबंधित है, जिस प्रकार दूसरा शब्द पहले शब्द से संबंधित है। (शब्दों को अर्थपूर्ण शब्दों के रूप में माना जाना चाहिए, और वह शब्द में अक्षरों की संख्या/व्यंजन/स्वरों की संख्या के आधार पर एक-दूसरे से संबंधित नहीं होना चाहिए।)

आह (Alas) : शोक (woe) :: सुंदरता (Beauty) : ?

- Ans
- 1. मिटाना (Expunge)
 - 2. असुरूपता (Inelegance)
 - 3. असभ्यता (Crudeness)
 - 4. आकर्षण (Charm)

Question ID : 264330145403
Option 1 ID : 264330569870
Option 2 ID : 264330569867
Option 3 ID : 264330569869
Option 4 ID : 264330569868
Status : Answered
Chosen Option : 4

Q.11 Sona goes to a park every day for walking. One morning, she started walking from her home and walked 40 km towards the north. Then she turned to the right and walked 60 km. Again, she turned right and walked 40 km. Lastly, she took a left turn and walked 60 km. In which direction and how far is she from her home?

- Ans
- 1. East, 90 km
 - 2. West, 120 km
 - 3. West, 60 km
 - 4. East, 120 km

Question ID : 26433097223
Option 1 ID : 264330381590
Option 2 ID : 264330381591
Option 3 ID : 264330381589
Option 4 ID : 264330381592
Status : Answered
Chosen Option : 4

Q.12 Which of the following numbers will replace the question mark (?) in the given series?

3, 5, 7, 12, 37, 69, 357, ?

- Ans 1. 656
 2. 645
 3. 665
 4. 654

Question ID : 264330145294

Option 1 ID : 264330569432

Option 2 ID : 264330569433

Option 3 ID : 264330569431

Option 4 ID : 264330569434

Status : Not Attempted and
Marked For Review

Chosen Option : --

Q.13 Three Statements are given followed by Three conclusions numbered I, II and III. Assuming the statements to be true, even if they seem to be at variance with commonly known facts, decide which of the conclusions logically follow(s) from the statements.

Statements:

All plains are mountains.

No sea is a mountain.

Some valleys are seas.

Conclusions:

I. Some valleys are plains.

II. No valley is a mountain.

III. No sea is a plain.

- Ans 1. Only conclusion III follows.
 2. Only conclusion II follows.
 3. Both conclusions I and II follow.
 4. Only conclusion I follows.

Question ID : 264330145340

Option 1 ID : 264330569616

Option 2 ID : 264330569617

Option 3 ID : 264330569615

Option 4 ID : 264330569618

Status : Answered

Chosen Option : 1

Q.14 Select the option that represents the letters that, when placed from left to right in the blanks below, will complete the letter series.

P _ R R _ P Q _ _ S _ Q R _ S P _ R R S

- Ans 1. RQPQRSQ
 2. SQRRQPR
 3. SQQRRPQ
 4. QSRRPRQ

Question ID : 264330180746

Option 1 ID : 264330708954

Option 2 ID : 264330708951

Option 3 ID : 264330708953

Option 4 ID : 264330708952

Status : Answered

Chosen Option : 4

Q.15 If A denotes '+', B denotes '×', C denotes '−', and D denotes '÷', then what will be the value of the following equation?
16 B 5 A 112 D 8 C 32 = ?

- Ans
- 1. 65
 - 2. 72
 - 3. 62
 - 4. 57

Question ID : 264330129783
Option 1 ID : 264330508364
Option 2 ID : 264330508365
Option 3 ID : 264330508366
Option 4 ID : 264330508363
Status : Answered
Chosen Option : 3

Q.16 Six students Shree, Dayal, Sharda, Tripti, Shrishti and Manju are sitting around a circular table facing the centre (not necessarily in the same order). Shree is an immediate neighbour of both Dayal and Tripti. Manju is sitting second to the right of Dayal. Shrishti is an immediate neighbour of both Manju and Tripti. Who is an immediate neighbour of Sharda?

- Ans
- 1. Dayal
 - 2. Shree
 - 3. Tripti
 - 4. Shrishti

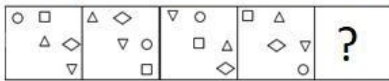
Question ID : 26433082278
Option 1 ID : 264330322946
Option 2 ID : 264330322945
Option 3 ID : 264330322947
Option 4 ID : 264330322948
Status : Answered
Chosen Option : 1

Q.17 Select the option that is related to the fourth term in the same way as the first term is related to the second term and the fifth term is related to the sixth term.
2 : 26 :: ? : 152 :: 27 : 1026

- Ans
- 1. 6
 - 2. 8
 - 3. 24
 - 4. 13

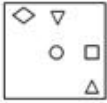
Question ID : 26433079358
Option 1 ID : 264330311421
Option 2 ID : 264330311422
Option 3 ID : 264330311423
Option 4 ID : 264330311420
Status : Answered
Chosen Option : 2

Q.18 Select the figure that will replace the question mark (?) in the following figure series.



Ans

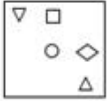
✓ 1.



✗ 2.



✗ 3.



✗ 4.



Question ID : 264330145491

Option 1 ID : 264330570220

Option 2 ID : 264330570219

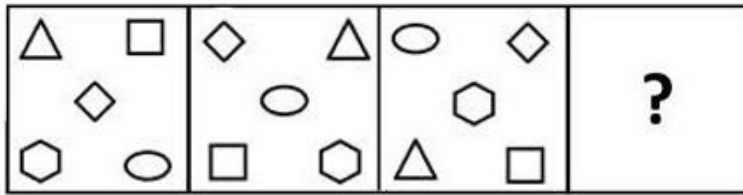
Option 3 ID : 264330570222

Option 4 ID : 264330570221

Status : Answered

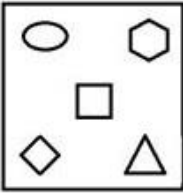
Chosen Option : 1

Q.19 Select a suitable figure from the answer figures which would replace the question mark (?).

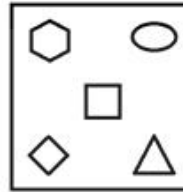


Ans

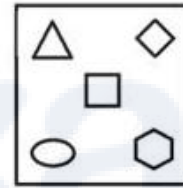
✗ 1.



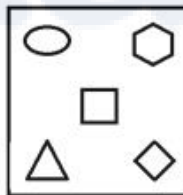
✓ 2.



✗ 3.



✗ 4.



Question ID : 26433066046

Option 1 ID : 264330258728

Option 2 ID : 264330258729

Option 3 ID : 264330258731

Option 4 ID : 264330258730

Status : Answered

Chosen Option : 2

Q.20 If '+' means '-', '-' means 'x', 'x' means '÷' and '÷' means '+', what will come in place of '?' in the following equation?

$$83 \div 12 - 65 \times 13 + 47 = ?$$

Ans ✗ 1. 92

✓ 2. 96

✗ 3. 79

✗ 4. 108

Question ID : 264330101151

Option 1 ID : 264330397149

Option 2 ID : 264330397151

Option 3 ID : 264330397152

Option 4 ID : 264330397150

Status : Answered

Chosen Option : 2

Q.21 In a certain code language, "GBTA" is coded as "24" and "ZWQVI" is coded as "30".
How will "DLUCPR" be coded in that language?

- Ans
- 1. 30
 - 2. 28
 - 3. 24
 - 4. 36

Question ID : 264330132245

Option 1 ID : 264330518077

Option 2 ID : 264330518075

Option 3 ID : 264330518076

Option 4 ID : 264330518078

Status : Answered

Chosen Option : 4

Q.22 In this question, three statements are given, followed by two conclusions numbered I and II. Assuming the statements to be true, even if they seem to be at variance with commonly known facts, decide which of the conclusions logically follows/follow from the statements.

Statements:

- I. Some rooms are cages.
- II. Some cages are enclosures.
- III. All enclosures are houses.

Conclusions:

- I. Some houses are cages.
- II. All rooms are enclosures.

- Ans
- 1. Both conclusions I and II follow
 - 2. Only conclusion I follows
 - 3. Neither conclusion I nor II follows
 - 4. Only conclusion II follows

Question ID : 264330104077

Option 1 ID : 264330408611

Option 2 ID : 264330408609

Option 3 ID : 264330408612

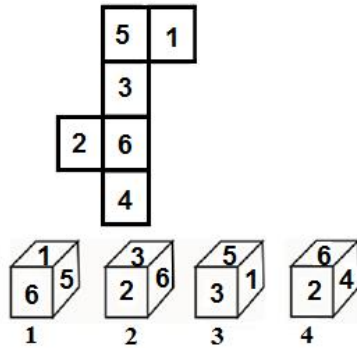
Option 4 ID : 264330408610

Status : Answered

Chosen Option : 2

Q.23 If the given sheet is folded to form a cube, which of the given figures are possible?

(The numbers are shown to indicate the sides only.)



- Ans
- 1. All 1, 2, 3 and 4
 - 2. Only 2 and 3
 - 3. Only 1, 2 and 3
 - 4. Only 2, 3 and 4

Question ID : 26433065673
Option 1 ID : 264330257252
Option 2 ID : 264330257254
Option 3 ID : 264330257253
Option 4 ID : 264330257255
Status : Answered
Chosen Option : 4

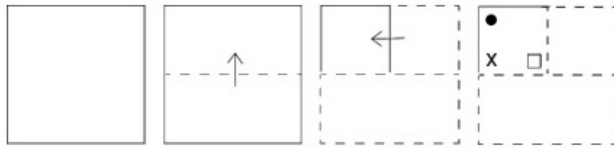
Q.24 If '+' means '-', '-' means 'x', 'x' means '÷', '÷' means '+', then what will come in place of the question mark (?) in the following equation?

$$14 - 7 \div 42 \times 6 + 33 = ?$$

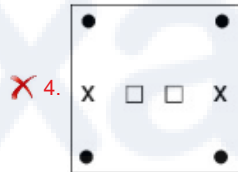
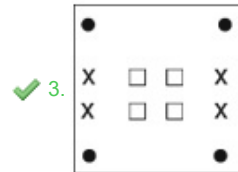
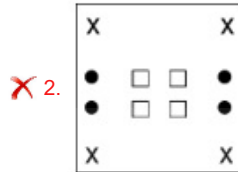
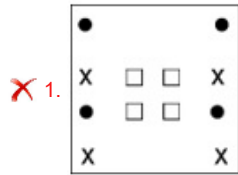
- Ans
- 1. 72
 - 2. 84
 - 3. 68
 - 4. 56

Question ID : 264330126056
Option 1 ID : 264330493899
Option 2 ID : 264330493896
Option 3 ID : 264330493898
Option 4 ID : 264330493897
Status : Answered
Chosen Option : 1

Q.25 A paper is folded and cut as shown below. How will it appear when unfolded?



Ans



Question ID : 264330103005

Option 1 ID : 264330404411

Option 2 ID : 264330404410

Option 3 ID : 264330404412

Option 4 ID : 264330404409

Status : Answered

Chosen Option : 3

Q.26 Two statements are given, followed by two conclusions numbered I and II. Assuming the statements to be true, even if they seem to be at variance with commonly known facts, decide which of the conclusions logically follow(s) from the statements.

Statements:

All kids are small.

Some funny are kids.

Conclusions:

I) Some funny are small.

II) Some small are kids.

- Ans
- ✗ 1. Only Conclusion I follows
 - ✓ 2. Both Conclusions I and II follow.
 - ✗ 3. Only Conclusion II follows.
 - ✗ 4. Neither Conclusion I nor II follows.

Question ID : 26433067703

Option 1 ID : 264330265324

Option 2 ID : 264330265326

Option 3 ID : 264330265325

Option 4 ID : 264330265327

Status : Answered

Chosen Option : 2

Q.27 Select the option that represents the correct order of the given words as they would appear in an English dictionary?

- 1.Puritan
- 2.Purpose
- 3.Purge
- 4.Purgatory
- 5.Purify

Ans 1. 3, 4, 5, 1, 2
 2. 5, 4, 3, 1, 2
 3. 4, 5, 3, 1, 2
 4. 4, 3, 5, 1, 2

Question ID : 26433067242

Option 1 ID : 264330263483

Option 2 ID : 264330263480

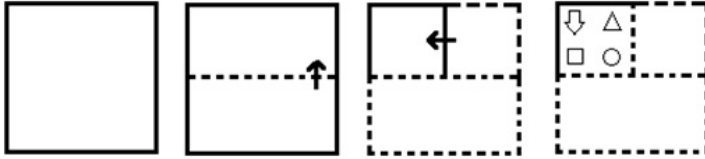
Option 3 ID : 264330263482

Option 4 ID : 264330263481

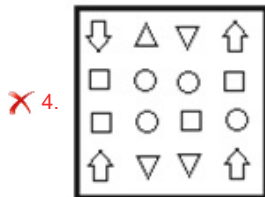
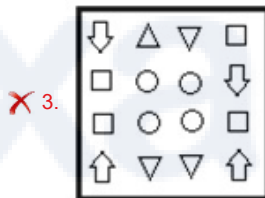
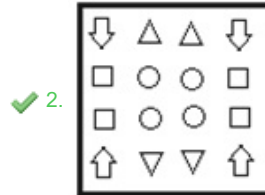
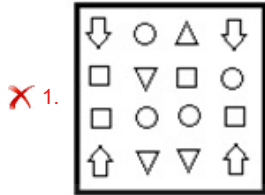
Status : Answered

Chosen Option : 4

Q.28 The sequence of folding a piece of paper and the manner in which the folded paper is cut is shown in the following figures. How would this paper look when unfolded?



Ans

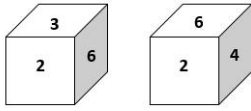


Question ID : 26433074794
 Option 1 ID : 264330293264
 Option 2 ID : 264330293266
 Option 3 ID : 264330293267
 Option 4 ID : 264330293265

Status : Answered

Chosen Option : 2

Q.29 Two different positions of the same dice are shown, the six faces of which are numbered from 1 to 6. Select the number that will be on the face opposite to the one showing '4'.



- Ans**
- 1. 5
 - 2. 1
 - 3. 3
 - 4. 6

Question ID : 26433058065
Option 1 ID : 264330227244
Option 2 ID : 264330227245
Option 3 ID : 264330227246
Option 4 ID : 264330227247
Status : Answered
Chosen Option : 3

Q.30 उस विकल्प का चयन करें, जो तीसरे शब्द से उसी प्रकार संबंधित है, जिस प्रकार दूसरा शब्द पहले शब्द से संबंधित है। (शब्दों को अर्थपूर्ण शब्दों के रूप में माना जाना चाहिए, और इनको शब्द में अक्षरों की संख्या/व्यंजनों/स्वरों की संख्या के आधार पर एक-दूसरे से संबंधित नहीं किया जाना चाहिए।)
व्हेल (Whale) : स्तनपायी (Mammal) :: मगरमच्छ (Crocodile) : ?

- Ans**
- 1. कृतक (Rodent)
 - 2. उभयचर (Amphibian)
 - 3. समुद्र (Sea)
 - 4. सरीसृप (Reptile)

Question ID : 26433091600
Option 1 ID : 264330359766
Option 2 ID : 264330359765
Option 3 ID : 264330359768
Option 4 ID : 264330359767
Status : Answered
Chosen Option : 4

Q.31 X, from his house, ran 200 steps towards the east and then ran 30 steps after turning to his right to reach a monastery. He then ran 30 steps towards his right and reached a point W. He then turned again towards his right and ran 30 steps. From there, turning towards his right he ran 130 steps. He then turned towards his left and ran 10 steps to reach a bakery. In which direction is the bakery with respect to X's house?

- Ans**
- 1. East
 - 2. South-East
 - 3. North-East
 - 4. North

Question ID : 26433057309
Option 1 ID : 264330224221
Option 2 ID : 264330224223
Option 3 ID : 264330224222
Option 4 ID : 264330224220
Status : Answered
Chosen Option : 3

Q.32 Four letter-clusters have been given, out of which three are alike in some manner and one is different. Select the odd letter-cluster.

- Ans 1. NJPM
 2. EAFD
 3. VRWU
 4. LHMK

Question ID : 264330180755
Option 1 ID : 264330708990
Option 2 ID : 264330708987
Option 3 ID : 264330708989
Option 4 ID : 264330708988
Status : Answered
Chosen Option : 1

Q.33 Select the option that is related to the fourth term in the same way as the first term is related to the second term and the fifth term is related to the sixth term.
5 : 24 :: ? : 143 :: 4 : 15

- Ans 1. 7
 2. 12
 3. 8
 4. 11

Question ID : 26433079355
Option 1 ID : 264330311408
Option 2 ID : 264330311410
Option 3 ID : 264330311409
Option 4 ID : 264330311411
Status : Answered
Chosen Option : 2

Q.34 If '+' means 'divided by', '-' means 'added to', 'x' means 'subtracted from' and '÷' means 'multiplied by', then what will be the value of the following expression?

$$[{\{(23 \times 15) - (2 \div 2)\} + (2 - 4)}] \div 2$$

- Ans 1. 8
 2. 2
 3. 6
 4. 4

Question ID : 264330130376
Option 1 ID : 264330510618
Option 2 ID : 264330510615
Option 3 ID : 264330510617
Option 4 ID : 264330510616
Status : Answered
Chosen Option : 4

Q.35 Which of the following numbers will replace the question mark (?) in the given series?
261, 232, 203, ?, 145, 116

- Ans
- ✓ 1. 174
 - ✗ 2. 188
 - ✗ 3. 192
 - ✗ 4. 186

Question ID : 26433067625
Option 1 ID : 264330265013
Option 2 ID : 264330265015
Option 3 ID : 264330265014
Option 4 ID : 264330265012
Status : Answered
Chosen Option : 1





Q.36 In a certain code language, 'HUSTLE' is written as 'SFHEOT' and 'BRIGHT' is written as 'IIBTSG'. How will 'TUNNEL' be written in that language?

- Ans
- ✗ 1. NRTPEN
 - ✗ 2. NGTYPN
 - ✓ 3. NFTLVN
 - ✗ 4. RNLPED

Question ID : 26433074761
Option 1 ID : 264330293134
Option 2 ID : 264330293132
Option 3 ID : 264330293133
Option 4 ID : 264330293135
Status : Answered
Chosen Option : 3

Q.37 Select the Venn diagram that best illustrates the relationship between the following classes.

Spoon, Soup, Rice

- Ans
- ✓ 1. 
 - ✗ 2. 
 - ✗ 3. 
 - ✗ 4. 


Question ID : 264330145360
Option 1 ID : 264330569697
Option 2 ID : 264330569698
Option 3 ID : 264330569695
Option 4 ID : 264330569696
Status : Answered
Chosen Option : 1

Q.38 Select the option figure in which the given figure is embedded as its part (rotation is NOT allowed).

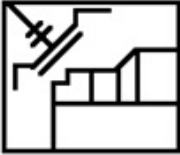


Ans

✗ 1.



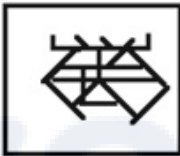
✗ 2.



✗ 3.



✓ 4.



Question ID : 264330117423

Option 1 ID : 264330461734

Option 2 ID : 264330461736

Option 3 ID : 264330461735

Option 4 ID : 264330461733

Status : Answered

Chosen Option : 4

Q.39 'P \$ Q' means 'P is the daughter of Q'
'P ? Q' means 'P is the son of Q'
'P * Q' means 'P is the sister of Q '
'P = Q' means 'P is the father of Q '
If 'D \$ G * U ? F', how is G related to F?

Ans ✗ 1. Father's sister

✗ 2. Mother's sister

✗ 3. Brother

✓ 4. Daughter

Question ID : 26433090231

Option 1 ID : 264330354402

Option 2 ID : 264330354401

Option 3 ID : 264330354404

Option 4 ID : 264330354403

Status : Answered

Chosen Option : 4

Q.40 Select the set in which the numbers are related in the same way as are the numbers of the following sets.

(NOTE : Operations should be performed on the whole numbers, without breaking down the numbers into its constituent digits. E.g. 13- Operations on 13 such as adding /subtracting /multiplying etc. to 13 can be performed. Breaking down 13 into 1 and 3 and then performing mathematical operations on 1 and 3 is not allowed.)

(13, 18, 21)
(11, 25, 8)

- Ans**
- 1. (6, 10, 12)
 - 2. (4, 12, 24)
 - 3. (8, 16, 23)
 - 4. (14, 33, 9)

Question ID : **26433057438**
 Option 1 ID : **264330224739**
 Option 2 ID : **264330224737**
 Option 3 ID : **264330224738**
 Option 4 ID : **264330224736**
 Status : **Answered**
 Chosen Option : **4**

Q.41 Which two signs should be interchanged to make the given equation correct?

$$31 \div 48 \times 7 - 322 + 23 = 353$$

- Ans**
- 1. + and -
 - 2. - and ×
 - 3. × and +
 - 4. ÷ and +

Question ID : **264330129527**
 Option 1 ID : **264330507474**
 Option 2 ID : **264330507477**
 Option 3 ID : **264330507476**
 Option 4 ID : **264330507475**
 Status : **Answered**
 Chosen Option : **4**

Q.42 Seven students A, B, C, D, E, F and G are sitting around a circular table facing the centre. C is an immediate neighbour of both E and F. D is sitting third to the left of C and to the immediate right of A. A is sitting second to the right of E. B is an immediate neighbour of both E and A. G is to the immediate left of F. Who is the immediate neighbour of both C and G?

- Ans**
- 1. E
 - 2. F
 - 3. A
 - 4. D

Question ID : **264330145421**
 Option 1 ID : **264330569941**
 Option 2 ID : **264330569939**
 Option 3 ID : **264330569940**
 Option 4 ID : **264330569942**
 Status : **Answered**
 Chosen Option : **2**

Q.43 Select the correct option that indicates the arrangement of the given words in the order in which they appear in an English dictionary.

1. Stoop
2. Stoke
3. Storage
4. Stock
5. Storey
6. Stomach

- Ans
- 1. 2, 4, 6, 3, 1, 5
 - 2. 2, 4, 6, 1, 3, 5
 - 3. 4, 2, 6, 3, 1, 5
 - 4. 4, 2, 6, 1, 3, 5

Question ID : 264330145380
Option 1 ID : 264330569775
Option 2 ID : 264330569778
Option 3 ID : 264330569776
Option 4 ID : 264330569777
Status : Answered
Chosen Option : 4


Q.44 Three of the following letter-clusters are alike in some manner and one is different.
Select the one that is different.

- Ans
- 1. JEAX
 - 2. DYUR
 - 3. WDXC
 - 4. QLHE

Question ID : 264330145346
Option 1 ID : 264330569641
Option 2 ID : 264330569640
Option 3 ID : 264330569639
Option 4 ID : 264330569642
Status : Answered
Chosen Option : 3

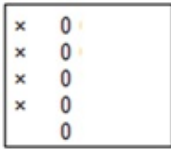
Q.45 Select the figure from among the given options that can replace the question mark

(?) in the following series.




Ans

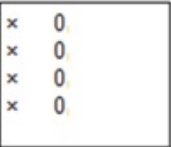
✓ 1.




✗ 2.



✗ 3.



✗ 4.



Question ID : 26433087153
Option 1 ID : 264330342252
Option 2 ID : 264330342250
Option 3 ID : 264330342251
Option 4 ID : 264330342249
Status : Answered
Chosen Option : 1


Prepare 50% Faster

Q.46 Select the option figure in which the given figure is embedded as its part (rotation is NOT allowed).



Ans

✓ 1.



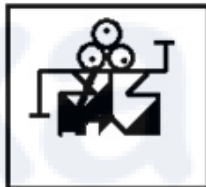
✗ 2.



✗ 3.



✗ 4.



Question ID : 264330117426

Option 1 ID : 264330461746

Option 2 ID : 264330461748

Option 3 ID : 264330461747

Option 4 ID : 264330461745

Status : Answered

Chosen Option : 1

Q.47 Select the set in which the numbers are related in the same way as are the numbers of the following set.

(NOTE : Operations should be performed on the whole numbers, without breaking down the numbers into its constituent digits. E.g. 13 – Operations on 13 such as adding /subtracting /multiplying etc. to 13 can be performed. Breaking down 13 into 1 and 3 and then performing mathematical operations on 1 and 3 is NOT allowed)

(1, 16, 3)

(21, 529, 2)

Ans ✗ 1. (5, 189, 8)

✗ 2. (7, 364, 12)

✗ 3. (11, 429, 2)

✓ 4. (8, 100, 2)

Question ID : 264330145317

Option 1 ID : 264330569524

Option 2 ID : 264330569525

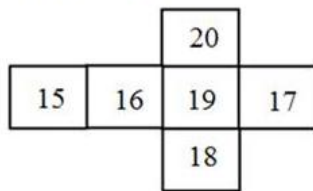
Option 3 ID : 264330569526

Option 4 ID : 264330569523

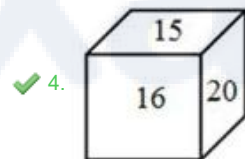
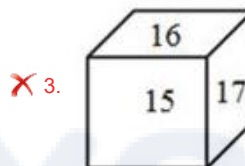
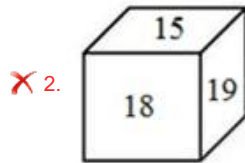
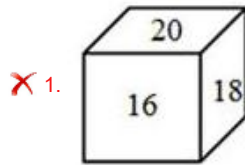
Status : Answered

Chosen Option : 4

Q.48 If the given sheet is folded to form a cube, which of the following figures is possible?



Ans



Question ID : 26433059913

Option 1 ID : 264330234484

Option 2 ID : 264330234487

Option 3 ID : 264330234485

Option 4 ID : 264330234486

Status : Answered

Chosen Option : 4

Q.49 Select the option that represents the letters that, when sequentially placed from left to right in the blanks below, will complete the letter series.

P _ _ O N _ L B _ N P L _ O _ P L _ _ N

Ans ✓ 1. LBPOBNBO

✗ 2. LBPBONBO

✗ 3. LPBOBNNO

✗ 4. LBPOBBNO

Question ID : 26433068924

Option 1 ID : 264330270210

Option 2 ID : 264330270211

Option 3 ID : 264330270209

Option 4 ID : 264330270208

Status : Answered

Chosen Option : 1

Q.50 A @ B means 'A is the husband of B'
A & B means 'A is the mother of B'
A # B means 'A is the daughter of B'
If L @ M & K @ J # P, then how is J related to L?

- Ans
- 1. Son's wife
 - 2. Daughter's husband
 - 3. Mother
 - 4. Son

Question ID : 264330126022
Option 1 ID : 264330493762
Option 2 ID : 264330493760
Option 3 ID : 264330493763
Option 4 ID : 264330493761
Status : Answered
Chosen Option : 1

Section : General Knowledge and General Awareness

Q.1 Choose the INCORRECT statement out of the following.

- Ans
- 1. Most parts of the country receive rainfall from June to September.
 - 2. The annual precipitation in Meghalaya is over 400 cm.
 - 3. Some parts like the Tamil Nadu's coast gets a large portion of its rains during October and November.
 - 4. There is increase in rainfall generally from east to west in the Northern Plains.

Question ID : 264330169313
Option 1 ID : 264330664032
Option 2 ID : 264330664031
Option 3 ID : 264330664033
Option 4 ID : 264330664034
Status : Answered
Chosen Option : 4

Q.2 How many cities are covered under the Atal Mission for Rejuvenation and Urban Transformation (AMRUT) scheme?

- Ans
- 1. 200
 - 2. 300
 - 3. 400
 - 4. 500

Question ID : 26433064567
Option 1 ID : 264330252863
Option 2 ID : 264330252862
Option 3 ID : 264330252861
Option 4 ID : 264330252860
Status : Not Answered
Chosen Option : --

Q.3 Select the correct combination of the temple and the state in which it is located.

- Ans**
- 1. Mahakaleshwar Jyotirlinga–Uttarakhand
 - 2. Kamakhya Temple–Assam
 - 3. Jagannath Temple–West Bengal
 - 4. Somnath Jyotirlinga Temple–Maharashtra

Question ID : 264330141822
Option 1 ID : 264330555608
Option 2 ID : 264330555607
Option 3 ID : 264330555609
Option 4 ID : 264330555610
Status : Answered
Chosen Option : 2

Q.4 The liability to pay the tax and the actual burden of which of the following taxes lie on two different persons?

- Ans**
- 1. Corporation Tax
 - 2. Income Tax
 - 3. Capital Gains Tax
 - 4. Goods and Services Tax

Question ID : 264330145240
Option 1 ID : 264330569215
Option 2 ID : 264330569218
Option 3 ID : 264330569216
Option 4 ID : 264330569217
Status : Answered
Chosen Option : 4

Q.5 Which of the following CANNOT be grouped under physiographic divisions of India?

- Ans**
- 1. The Himalayas
 - 2. Appalachian Mountains
 - 3. The Indian Desert
 - 4. The Island

Question ID : 264330163235
Option 1 ID : 264330640252
Option 2 ID : 264330640251
Option 3 ID : 264330640254
Option 4 ID : 264330640253
Status : Not Answered
Chosen Option : --

Q.6 Why do pickles last longer?

- Ans**
- 1. Only beneficial bacteria can grow in the pickle.
 - 2. The water content of the pickle protect the pickle from spoilage.
 - 3. Pickle is prepared in a vacuum so that no harmful bacteria can grow on it.
 - 4. Bacterial and fungal cells get plasmolysed in high salt concentration of pickle.

Question ID : 26433089677
Option 1 ID : 264330352209
Option 2 ID : 264330352210
Option 3 ID : 264330352211
Option 4 ID : 264330352212
Status : Answered
Chosen Option : 4

Q.7 When was the Prime Minister's Employment Generation Programme (PMEGP) launched?

- Ans
- 1. 2006
 - 2. 2008
 - 3. 2012
 - 4. 2009

Question ID : 264330157101
Option 1 ID : 264330615776
Option 2 ID : 264330615777
Option 3 ID : 264330615778
Option 4 ID : 264330615775
Status : Not Answered
Chosen Option : --

Q.8 Which state among the following started the Hornbill Festival to encourage interaction among the tribes and to promote the cultural heritage of the state?

- Ans
- 1. Chhattisgarh
 - 2. West Bengal
 - 3. Assam
 - 4. Nagaland

Question ID : 26433054216
Option 1 ID : 264330211848
Option 2 ID : 264330211851
Option 3 ID : 264330211850
Option 4 ID : 264330211849
Status : Answered
Chosen Option : 4

Q.9 The agricultural land below the main canal water level forms the _____.

- Ans
- 1. flow system
 - 2. lift system
 - 3. command area
 - 4. warebandi

Question ID : 264330163192
Option 1 ID : 264330640081
Option 2 ID : 264330640082
Option 3 ID : 264330640079
Option 4 ID : 264330640080
Status : Answered
Chosen Option : 1

Q.10 Identify the pigment that gives blood its colour.

- Ans
- 1. Ferritin
 - 2. Chlorophyll
 - 3. Xanthophyll
 - 4. Haemoglobin

Question ID : 26433064753
Option 1 ID : 264330253606
Option 2 ID : 264330253605
Option 3 ID : 264330253604
Option 4 ID : 264330253607
Status : Answered
Chosen Option : 1

Q.11 Who was the teacher of the famous musician Tansen?

Ans 1. Ravidas

2. Swami Haridas

3. Kalidas

4. Surdas

Question ID : 26433074861

Option 1 ID : 264330293533

Option 2 ID : 264330293535

Option 3 ID : 264330293534

Option 4 ID : 264330293532

Status : Answered

Chosen Option : 4

Q.12 Pandit Ram Narayan a famous instrumentalist, is known for playing which of the following instruments?

Ans 1. Ghatam

2. Veena

3. Sarod

4. Sarangi

Question ID : 264330145168

Option 1 ID : 264330568930

Option 2 ID : 264330568929

Option 3 ID : 264330568927

Option 4 ID : 264330568928

Status : Not Answered

Chosen Option : --

Q.13 Which scientist synthesised an organic compound, urea, from an inorganic compound, ammonium cyanate?

Ans 1. F Wohler

2. Kolbe

3. Berthelot

4. Berzelius

Question ID : 264330145224

Option 1 ID : 264330569152

Option 2 ID : 264330569153

Option 3 ID : 264330569151

Option 4 ID : 264330569154

Status : Answered

Chosen Option : 1

Q.14 Which of the following is an autobiography of the international tennis player Andre Agassi?

Ans 1. Open: An Autobiography

2. Becoming

3. Too Many Reasons to Live

4. Me

Question ID : 264330145178

Option 1 ID : 264330568969

Option 2 ID : 264330568967

Option 3 ID : 264330568968

Option 4 ID : 264330568970

Status : Not Answered

Chosen Option : --

Q.15 The Bishnu Rabha Award 2019 went to the noted _____ dance exponent Kumari Laitjonam Ebampisok Devi.

- Ans
- 1. Odissi
 - 2. Manipuri
 - 3. Kuchipudi
 - 4. Kathakali

Question ID : 26433054503
Option 1 ID : 264330212999
Option 2 ID : 264330212996
Option 3 ID : 264330212998
Option 4 ID : 264330212997
Status : Not Answered
Chosen Option : --

Q.16 Which of the following rights was deleted from the list of fundamental rights by the 44th Constitutional Amendment Act?

- Ans
- 1. Right to freedom of religion
 - 2. Right to property
 - 3. Right to freedom
 - 4. Right to equality

Question ID : 264330111521
Option 1 ID : 264330438171
Option 2 ID : 264330438172
Option 3 ID : 264330438170
Option 4 ID : 264330438169
Status : Answered
Chosen Option : 2

Q.17 Which Manipuri dance expert founded Govindji Nartanalaya dance school for women in Imphal ?

- Ans
- 1. Guru Bipin Singh
 - 2. Rajkumar Singhajit Singh
 - 3. Guru Amubi
 - 4. Phanjoubam Iboton Singh

Question ID : 26433054508
Option 1 ID : 264330213016
Option 2 ID : 264330213017
Option 3 ID : 264330213018
Option 4 ID : 264330213019
Status : Not Answered
Chosen Option : --

Q.18 Who was the eldest of four sons of Babur?

- Ans
- 1. Hindal
 - 2. Askari
 - 3. Kamran
 - 4. Humayun

Question ID : 264330109024
Option 1 ID : 264330428375
Option 2 ID : 264330428374
Option 3 ID : 264330428373
Option 4 ID : 264330428376
Status : Not Answered
Chosen Option : --

Q.19 As per Article 361 of the Constitution of India, who among the following shall NOT be answerable to any court for the exercise and performance of the powers and duties of his/her office?

- Ans
- 1. Chief Minister
 - 2. Secretary
 - 3. Prime Minister
 - 4. Governor

Question ID : 264330145271
Option 1 ID : 264330569340
Option 2 ID : 264330569342
Option 3 ID : 264330569339
Option 4 ID : 264330569341
Status : Answered
Chosen Option : 4

Q.20 What is the chemical formula for the aldehyde group?

- Ans
- 1. -COOH
 - 2. -OH
 - 3. -CH₂O
 - 4. -CHO

Question ID : 264330145223
Option 1 ID : 264330569149
Option 2 ID : 264330569148
Option 3 ID : 264330569150
Option 4 ID : 264330569147
Status : Answered
Chosen Option : 4

Q.21 How many balls are there in an over in cricket?

- Ans
- 1. 4
 - 2. 6
 - 3. 7
 - 4. 5

Question ID : 264330118905
Option 1 ID : 264330466275
Option 2 ID : 264330466277
Option 3 ID : 264330466278
Option 4 ID : 264330466276
Status : Answered
Chosen Option : 2

Q.22 In Which year did Ernst Haeckel introduced the term 'ecology' to describe the economies of living forms?

- Ans
- 1. 1888
 - 2. 1884
 - 3. 1887
 - 4. 1866

Question ID : 264330145194
Option 1 ID : 264330569034
Option 2 ID : 264330569031
Option 3 ID : 264330569033
Option 4 ID : 264330569032
Status : Answered
Chosen Option : 4

Q.23 Which schedule of the Constitution of India contains provisions for disqualification of legislator on the ground of defection?

- Ans 1. Schedule-X
 2. Schedule-IX
 3. Schedule-XI
 4. Schedule-VIII

Question ID : 264330130474
Option 1 ID : 264330511008
Option 2 ID : 264330511007
Option 3 ID : 264330511009
Option 4 ID : 264330511010
Status : Answered
Chosen Option : 1

Q.24 When was the first World Weightlifting Championship organized by the World Weightlifting Federation in London, UK?

- Ans 1. March 1891
 2. March 1991
 3. March 2000
 4. March 1895

Question ID : 26433059423
Option 1 ID : 264330232563
Option 2 ID : 264330232560
Option 3 ID : 264330232561
Option 4 ID : 264330232562
Status : Not Answered
Chosen Option : --

Q.25 Which of the following years was declared as the international year of micro credit by the UN?

- Ans 1. 2008
 2. 2004
 3. 2002
 4. 2005

Question ID : 264330141450
Option 1 ID : 264330554138
Option 2 ID : 264330554136
Option 3 ID : 264330554135
Option 4 ID : 264330554137
Status : Not Answered
Chosen Option : --

Q.26 Chapchar Kut festival is predominantly celebrated in _____.

- Ans 1. Nagaland
 2. Mizoram
 3. Manipur
 4. Meghalaya

Question ID : 264330164807
Option 1 ID : 264330646357
Option 2 ID : 264330646356
Option 3 ID : 264330646358
Option 4 ID : 264330646355
Status : Answered
Chosen Option : 2

Q.27 The age of the Earth is currently thought to be:

- Ans 1. 4.5 billion years
 2. 4 billion years
 3. 3.5 billion years
 4. 5 billion years

Question ID : 26433064466
Option 1 ID : 264330252457
Option 2 ID : 264330252458
Option 3 ID : 264330252459
Option 4 ID : 264330252456
Status : Not Answered
Chosen Option : --

Q.28 When did the first Five-Year Plan end?

- Ans 1. March 1956
 2. January 1956
 3. December 1955
 4. February 1956

Question ID : 264330145250
Option 1 ID : 264330569258
Option 2 ID : 264330569256
Option 3 ID : 264330569255
Option 4 ID : 264330569257
Status : Not Answered
Chosen Option : --

Q.29 Which Article of the Constitution clarifies that policies like 'reservation' is not a violation of right to equality?

- Ans 1. Article 16 (4)
 2. Article 14 (1)
 3. Article 21
 4. Article 15 (2)

Question ID : 264330116396
Option 1 ID : 264330457671
Option 2 ID : 264330457669
Option 3 ID : 264330457672
Option 4 ID : 264330457670
Status : Answered
Chosen Option : 1

Q.30 Which of the following is NOT a correct match?

- Ans 1. Voltage - Volts
 2. Resistance - Ohm
 3. Conductance - Siemens
 4. Capacitance - Dyne

Question ID : 264330111864
Option 1 ID : 264330439543
Option 2 ID : 264330439541
Option 3 ID : 264330439542
Option 4 ID : 264330439544
Status : Answered
Chosen Option : 4

Q.31 Who first observed ribosomes in the mid-1950s and described them as small particles in the cytoplasm that were preferentially attached to the endoplasmic reticulum membrane?

- Ans
- 1. Ernst Abbe
 - 2. Albert Kolliker
 - 3. Carl Zeiss
 - 4. George E Palade

Question ID : 264330145198
Option 1 ID : 264330569047
Option 2 ID : 264330569050
Option 3 ID : 264330569048
Option 4 ID : 264330569049
Status : Not Answered
Chosen Option : --

Q.32 Who among the following was the successor of Muhammad-Bin Tughlaq to the throne?

- Ans
- 1. Nais-ud-Din Mahmud Shah Tughlaq
 - 2. Firuz Shah Tughlaq
 - 3. Abu Bakr Shah Tughlaq
 - 4. Ghiyath-ud-din Tughlaq Shah II

Question ID : 26433071394
Option 1 ID : 264330280003
Option 2 ID : 264330280001
Option 3 ID : 264330280000
Option 4 ID : 264330280002
Status : Not Answered
Chosen Option : --

Q.33 According to the 2011 Census, any person aged _____ and above and has the ability to read and write is considered literate.

- Ans
- 1. twelve
 - 2. six
 - 3. seven
 - 4. ten

Question ID : 264330110656
Option 1 ID : 264330434904
Option 2 ID : 264330434903
Option 3 ID : 264330434902
Option 4 ID : 264330434901
Status : Answered
Chosen Option : 1

Q.34 Kuchipudi originated in which of the following states?

- Ans
- 1. Kerala
 - 2. Tamil Nadu
 - 3. Gujarat
 - 4. Andhra Pradesh

Question ID : 264330164791
Option 1 ID : 264330646294
Option 2 ID : 264330646293
Option 3 ID : 264330646291
Option 4 ID : 264330646292
Status : Answered
Chosen Option : 1

Q.35 Padma Bhushan awardee Kumudini Lakhia is renowned for which of the following dance forms?

- Ans
- 1. Bharatanatyam
 - 2. Kathak
 - 3. Kuchipudi
 - 4. Odissi

Question ID : 264330145166
Option 1 ID : 264330568919
Option 2 ID : 264330568920
Option 3 ID : 264330568921
Option 4 ID : 264330568922
Status : Not Answered
Chosen Option : --

Q.36 The black soil of the Deccan Plateau lacks which of the following minerals?

- Ans
- 1. Phosphorous
 - 2. Potash
 - 3. Iron
 - 4. Lime

Question ID : 264330119790
Option 1 ID : 264330469435
Option 2 ID : 264330469436
Option 3 ID : 264330469437
Option 4 ID : 264330469438
Status : Not Answered
Chosen Option : --

Q.37 Which Article of the Constitution of India prohibits forced labour?

- Ans
- 1. Article 23
 - 2. Article 21
 - 3. Article 22
 - 4. Article 20

Question ID : 264330130680
Option 1 ID : 264330511834
Option 2 ID : 264330511832
Option 3 ID : 264330511833
Option 4 ID : 264330511831
Status : Answered
Chosen Option : 1

Q.38 Consider the following statements regarding the Indo Greeks.

1. The most celebrated Indo-Greek ruler was Menander.
 2. Menander has been identified with King Milinda mentioned in the famous Buddhist text Milindapanho.
 3. Milindapanho contains philosophical questions that Milinda asked Amrapali.
 4. Impressed by the answers, King Milinda accepted Buddhism as his religion.
- Which among the above statements are correct.

- Ans**
- 1. Only 1, 2 and 3
 - 2. Only 1, 3 and 4
 - 3. Only 1, 2 and 4
 - 4. Only 3, 2 and 4

Question ID : 264330123784

Option 1 ID : 264330485074

Option 2 ID : 264330485075

Option 3 ID : 264330485072

Option 4 ID : 264330485073

Status : Not Answered

Chosen Option : --

Q.39 Which of the following options are homogeneous mixtures?

- Ans**
- 1. Solution, colloid, suspension, milk, toothpaste, salt water, brass
 - 2. Solution, salt water, brass
 - 3. Solution, colloid, milk, toothpaste, salt water, brass
 - 4. Colloid, suspension, milk, toothpaste

Question ID : 264330169308

Option 1 ID : 264330664011

Option 2 ID : 264330664013

Option 3 ID : 264330664012

Option 4 ID : 264330664014

Status : Not Answered

Chosen Option : --

Q.40 Match list I to list II.

List I

- a) Second Five-year plan
- b) Fifth Five-year plan
- c) Eight Five-year plan

List II

- i) 1974-1979
- ii) 1956-1961
- iii) 1992-1997

- Ans**
- 1. a-iii, b-i, c-ii
 - 2. a-i, b-ii, c-iii
 - 3. a-i, b-iii, c-ii
 - 4. a-ii, b-i, c-iii

Question ID : 264330141495

Option 1 ID : 264330554317

Option 2 ID : 264330554315

Option 3 ID : 264330554318

Option 4 ID : 264330554316

Status : Answered

Chosen Option : 4

Q.41 Which Article of the Indian Constitution lays the condition that the President, once elected, shall NOT be a member of the either House of Parliament or state legislature?

- Ans
- 1. Article 62
 - 2. Article 59
 - 3. Article 80
 - 4. Article 79

Question ID : 264330114495
Option 1 ID : 264330450066
Option 2 ID : 264330450065
Option 3 ID : 264330450068
Option 4 ID : 264330450067
Status : Answered
Chosen Option : 2

Q.42 Which of the following books has been written by the Booker Prize winner Kiran Desai?

- Ans
- 1. A Fine Balance
 - 2. The Year of Runaways
 - 3. The Inheritance of Loss
 - 4. Shantaram

Question ID : 26433071482
Option 1 ID : 264330280353
Option 2 ID : 264330280352
Option 3 ID : 264330280355
Option 4 ID : 264330280354
Status : Not Answered
Chosen Option : --

Q.43 Who among the following was NOT associated with 'Prarthana Sabha'?

- Ans
- 1. Govind Ranade
 - 2. Atmaram Pandurang
 - 3. RG Bhandarkar
 - 4. Motilal Nehru

Question ID : 264330165393
Option 1 ID : 264330648651
Option 2 ID : 264330648653
Option 3 ID : 264330648654
Option 4 ID : 264330648652
Status : Answered
Chosen Option : 4

Q.44 Identify the group of major Jute producing states of India.

- Ans
- 1. Kerala, Tamil Nadu, Telangana, Madhya Pradesh
 - 2. West Bengal, Bihar, Assam, Odisha
 - 3. Punjab, Haryana, Uttarakhand, Himachal Pradesh
 - 4. Rajasthan, Maharashtra, Karnataka, Gujarat

Question ID : 264330113263
Option 1 ID : 264330445140
Option 2 ID : 264330445137
Option 3 ID : 264330445139
Option 4 ID : 264330445138
Status : Answered
Chosen Option : 2

Q.45 Which trend is found about the distance between the galaxies?

- Ans
- 1. Constant
 - 2. Increasing
 - 3. Unpredictable
 - 4. Decreasing

Question ID : 264330113349
Option 1 ID : 264330445483
Option 2 ID : 264330445481
Option 3 ID : 264330445484
Option 4 ID : 264330445482
Status : Not Answered
Chosen Option : --

Q.46 Under the Regulating Act of 1773, the King-in-Council created a Supreme Court in which of the following places?

- Ans
- 1. Calcutta
 - 2. Delhi
 - 3. Madras
 - 4. Bombay

Question ID : 26433099166
Option 1 ID : 264330389279
Option 2 ID : 264330389277
Option 3 ID : 264330389280
Option 4 ID : 264330389278
Status : Answered
Chosen Option : 1

Q.47 The Landholder's Society was founded to look after the interests of which class?

- Ans
- 1. Landlords
 - 2. Labour
 - 3. Farmers
 - 4. Traders

Question ID : 264330112182
Option 1 ID : 264330440814
Option 2 ID : 264330440813
Option 3 ID : 264330440815
Option 4 ID : 264330440816
Status : Not Answered
Chosen Option : --

Q.48 Which of the following is a primary arylamine in which an amino functional group is substituted for one of the benzene hydrogens?

- Ans
- 1. Quinoline
 - 2. Aniline
 - 3. Pyridine
 - 4. Toluidine

Question ID : 264330110055
Option 1 ID : 264330432498
Option 2 ID : 264330432500
Option 3 ID : 264330432497
Option 4 ID : 264330432499
Status : Not Answered
Chosen Option : --

Q.49 Which of the following states will host 2023 Men's Hockey World Cup?

- Ans 1. Chhattisgarh
 2. Jharkhand
 3. Maharashtra
 4. Odisha

Question ID : 264330109848
Option 1 ID : 264330431672
Option 2 ID : 264330431671
Option 3 ID : 264330431670
Option 4 ID : 264330431669
Status : Answered
Chosen Option : 4

Q.50 In football, a kick is awarded to the opposition player when a player has committed a foul. What is the kick called?

- Ans 1. Bicycle kick
 2. Free kick
 3. Wide kick
 4. Goal kick

Question ID : 26433092339
Option 1 ID : 264330362656
Option 2 ID : 264330362655
Option 3 ID : 264330362653
Option 4 ID : 264330362654
Status : Answered
Chosen Option : 2

Section : Quantitative Aptitude

Q.1 Two mixtures A and B have the following compositions:

Mixture A has copper and tin in a ratio of 1:2

Mixture B has copper and tin in a ratio of 1:3

If equal quantities of mixtures A and B are used for producing mixture C, then find the ratio of copper and tin in mixture C.

- Ans 1. 2:5
 2. 1:5
 3. 7:17
 4. 7:12

Question ID : 264330104187
Option 1 ID : 264330409050
Option 2 ID : 264330409049
Option 3 ID : 264330409052
Option 4 ID : 264330409051
Status : Answered
Chosen Option : 4

Q.2 If the volume of a sphere is 38808 cm^3 , then its surface area is:

- Ans
- 1. 5554 cm^2
 - 2. 5574 cm^2
 - 3. 5564 cm^2
 - 4. 5544 cm^2

Question ID : 264330145135
Option 1 ID : 264330568796
Option 2 ID : 264330568798
Option 3 ID : 264330568797
Option 4 ID : 264330568795
Status : Answered
Chosen Option : 4

Q.3 The area of a rhombus having one side measuring 17 cm and one diagonal measuring 16 cm is:

- Ans
- 1. 280 cm^2
 - 2. 180 cm^2
 - 3. 240 cm^2
 - 4. 210 cm^2

Question ID : 264330106083
Option 1 ID : 264330416634
Option 2 ID : 264330416633
Option 3 ID : 264330416635
Option 4 ID : 264330416636
Status : Answered
Chosen Option : 3

Q.4 By selling 42 m of cloth, Vijay gains the selling price of 7 m of cloth. Find the profit percentage.

- Ans
- 1. 15%
 - 2. 30%
 - 3. 20%
 - 4. 25%

Question ID : 264330131518
Option 1 ID : 264330515175
Option 2 ID : 264330515178
Option 3 ID : 264330515176
Option 4 ID : 264330515177
Status : Answered
Chosen Option : 3

Q.5 Ramesh gives fifteen per cent additional discount along with a discount of 25% on the marked price of a sofa set. If the selling price of the sofa set is ₹12,750, then find the marked price of the sofa set.

- Ans
- ✓ 1. ₹20,000
 - ✗ 2. ₹23,000
 - ✗ 3. ₹22,000
 - ✗ 4. ₹24,000

Question ID : 264330165522
Option 1 ID : 264330649167
Option 2 ID : 264330649169
Option 3 ID : 264330649168
Option 4 ID : 264330649170
Status : Answered
Chosen Option : 1

Q.6 Two pipes can fill a cistern in 12 hours and 16 hours, respectively. The pipes are opened simultaneously and it is found that due to leakage at the bottom, it takes 90 minutes more to fill the cistern. How much time will the leakage take to empty the completely filled tank?

- Ans
- ✗ 1. $36\frac{29}{49}$ h
 - ✓ 2. $38\frac{10}{49}$ h
 - ✗ 3. $39\frac{13}{49}$ h
 - ✗ 4. $37\frac{15}{49}$ h

Question ID : 264330122993
Option 1 ID : 264330482038
Option 2 ID : 264330482036
Option 3 ID : 264330482037
Option 4 ID : 264330482035
Status : Not Attempted and Marked For Review
Chosen Option : --

Q.7 A sum of money amounts to ₹1,200 in 2 years and becomes ₹1,260 in 3 years at compound interest, when interest is compounded annually. What is the rate of compound interest per annum?

- Ans
- ✓ 1. 5%
 - ✗ 2. 3%
 - ✗ 3. 4%
 - ✗ 4. 6%

Question ID : 264330145059
Option 1 ID : 264330568493
Option 2 ID : 264330568491
Option 3 ID : 264330568492
Option 4 ID : 264330568494
Status : Answered
Chosen Option : 1

Q.8 Find the least value of $16\operatorname{cosec}^2\theta + 25\sin^2\theta$.

Ans 1. 40

2. 42

3. 35

4. 38

Question ID : 264330145125

Option 1 ID : 264330568757

Option 2 ID : 264330568758

Option 3 ID : 264330568755

Option 4 ID : 264330568756

Status : Not Answered

Chosen Option : --

Q.9 In a megastore, the following data reveals the units purchased during the years.
What is the percentage growth in total units purchased (of all the three products) from 2015 to 2020?

Year	Tea	Coffee	Cold drink
2015	650	450	1008
2016	730	402	1092
2017	710	354	770
2018	570	438	812
2019	820	390	1043
2020	830	501	1330

Ans 1. 21.68 percent

2. 22.75 percent

3. 26.23 percent

4. 25.76 percent

Question ID : 26433081647

Option 1 ID : 264330320423

Option 2 ID : 264330320424

Option 3 ID : 264330320421

Option 4 ID : 264330320422

Status : Answered

Chosen Option : 3

Q.10 If $\cos A = \frac{1}{11}$, then find the value of $\cot A$.

- Ans
- 1. $\frac{2\sqrt{30}}{11}$
 - 2. $2\sqrt{30}$
 - 3. $\frac{1}{2\sqrt{30}}$
 - 4. $\frac{11}{2\sqrt{30}}$

Question ID : 264330158291

Option 1 ID : 264330620526

Option 2 ID : 264330620525

Option 3 ID : 264330620524

Option 4 ID : 264330620523

Status : Answered

Chosen Option : 3

Q.11 The following bar graph shows the milk production (in million tons) details for 4 years for three brands (P, Q, R):



What was the average production of milk (in million tons) per year over the period of 4 years?

- Ans
- 1. 90
 - 2. 50
 - 3. 30
 - 4. 70

Question ID : 264330158396

Option 1 ID : 264330620946

Option 2 ID : 264330620944

Option 3 ID : 264330620943

Option 4 ID : 264330620945

Status : Answered

Chosen Option : 1

Q.12 If $\operatorname{cosec} A + \cot A = 3$, $0 \leq A \leq 90^\circ$, then find the value of $\cos A$.

Ans

1. $\frac{3}{4}$

2. $\frac{2}{5}$

3. $\frac{3}{5}$

4. $\frac{4}{5}$

Question ID : 264330157759

Option 1 ID : 264330618397

Option 2 ID : 264330618398

Option 3 ID : 264330618395

Option 4 ID : 264330618396

Status : Answered

Chosen Option : 4

Q.13 36 equally efficient workers can paint 25 identical walls in 48 days. In how many days can 45 such workers paint 60 such walls?

Ans 1. 92.36

2. 92.16

3. 91.96

4. 91.16

Question ID : 264330103289

Option 1 ID : 264330405463

Option 2 ID : 264330405464

Option 3 ID : 264330405461

Option 4 ID : 264330405462

Status : Answered

Chosen Option : 2

Q.14 Which of the following numbers leaves the remainder equal to the highest common factor of 6, 8 and 9, when divided by 6, 8 and 9?

Ans 1. 291

2. 575

3. 506

4. 433

Question ID : 26433066165

Option 1 ID : 264330259195

Option 2 ID : 264330259194

Option 3 ID : 264330259193

Option 4 ID : 264330259192

Status : Answered

Chosen Option : 4

Q.15 Simplify the given expression.

$$(1 + x)^3 + (1 - x)^3 + (-2)^3$$

- Ans
- 1. $6(1-x^2)$
 - 2. $-3(1-x^2)$
 - 3. $-6(1-x^2)$
 - 4. $3(1-x^2)$

Question ID : 264330157763

Option 1 ID : 264330618411

Option 2 ID : 264330618414

Option 3 ID : 264330618412

Option 4 ID : 264330618413

Status : Answered

Chosen Option : 3

Q.16 If $1 \frac{1}{3} \div \frac{2}{5} \times \frac{x}{5} = 1 \frac{1}{4} \times \frac{2}{3} \div \frac{1}{6}$, then the value of x is:

- Ans
- 1. 5.5
 - 2. 7.5
 - 3. 7.0
 - 4. 15

Question ID : 26433063986

Option 1 ID : 264330250538

Option 2 ID : 264330250536

Option 3 ID : 264330250539

Option 4 ID : 264330250537

Status : Answered

Chosen Option : 2

Q.17 The average weight of 49 students is 53 kg. When a new student is admitted to the class, the average decreases by 500 g. Find the weight of the new student.

- Ans
- 1. 48 kg
 - 2. 18 kg
 - 3. 28 kg
 - 4. 38 kg

Question ID : 264330104284

Option 1 ID : 264330409440

Option 2 ID : 264330409437

Option 3 ID : 264330409438

Option 4 ID : 264330409439

Status : Answered

Chosen Option : 3

Q.18 In an election between two candidates, the difference between the candidates who won and lost was 2,500 votes. The candidate who won got 75% of the votes, and there were no invalid votes. The total number of votes polled of the losing candidate was:

- Ans
- 1. 1875
 - 2. 5000
 - 3. 1250
 - 4. 3750

Question ID : 264330145061
Option 1 ID : 264330568500
Option 2 ID : 264330568502
Option 3 ID : 264330568499
Option 4 ID : 264330568501
Status : Answered
Chosen Option : 3

Q.19 In an election between two candidates, 30% of the electorate did not cast their votes. 20% of the votes polled were found invalid. The winning candidate got 64% of the valid votes and won by a majority of 3136 votes. Find the number of voters enrolled in the voter list.

- Ans
- 1. 20000
 - 2. 25000
 - 3. 24000
 - 4. 30000

Question ID : 264330103392
Option 1 ID : 264330405873
Option 2 ID : 264330405874
Option 3 ID : 264330405875
Option 4 ID : 264330405876
Status : Answered
Chosen Option : 1

Q.20 Find the mean proportion of x^3y and xy^3 .

- Ans
- 1. x^2y^2
 - 2. x^3y^3
 - 3. xy
 - 4. x^4y^4

Question ID : 264330145074
Option 1 ID : 264330568552
Option 2 ID : 264330568553
Option 3 ID : 264330568551
Option 4 ID : 264330568554
Status : Answered
Chosen Option : 1

Q.21 The least common multiple of 12, 18 and 27 is :

- Ans 1. 54
 2. 216
 3. 27
 4. 108

Question ID : 26433066158
Option 1 ID : 264330259164
Option 2 ID : 264330259167
Option 3 ID : 264330259165
Option 4 ID : 264330259166
Status : Answered
Chosen Option : 4

Q.22 Jimmy has to cover a distance of 88 km in 16 hours. If she covers half of the journey in $\frac{3}{4}$ time, then what should be her speed to cover the remaining distance in the time left?

- Ans 1. 12 km/h
 2. 10 km/h
 3. 11 km/h
 4. 13 km/h

Question ID : 26433082849
Option 1 ID : 264330325231
Option 2 ID : 264330325230
Option 3 ID : 264330325229
Option 4 ID : 264330325232
Status : Answered
Chosen Option : 3

Q.23 What is the smallest perfect square number which is completely divisible by 4, 6, 9, 12 and 15?

- Ans 1. 784
 2. 900
 3. 961
 4. 841

Question ID : 26433073067
Option 1 ID : 264330286463
Option 2 ID : 264330286461
Option 3 ID : 264330286462
Option 4 ID : 264330286460
Status : Answered
Chosen Option : 2

Q.24 A vehicle is going at one-fourth of its usual speed and it takes an extra 45 minutes to reach its destination. Its usual time to cover the same distance is:

- Ans 1. 15 minutes
 2. 10 minutes
 3. 30 minutes
 4. 20 minutes

Question ID : 264330103740
Option 1 ID : 264330407266
Option 2 ID : 264330407265
Option 3 ID : 264330407268
Option 4 ID : 264330407267
Status : Answered
Chosen Option : 1

Q.25 Kanchan lent ₹10,000 for 2 years and ₹5,000 for 4 years at the same rate of simple interest. If the total interest received by Kanchan is ₹2,000, then what was the rate of interest?

- Ans 1. 5%
 2. 2%
 3. 3%
 4. 4%

Question ID : 264330165672
Option 1 ID : 264330649770
Option 2 ID : 264330649767
Option 3 ID : 264330649768
Option 4 ID : 264330649769
Status : Answered
Chosen Option : 1

Q.26 The average weight of A, B and C is 77 kg. If the average weight of A and B is 68 kg and that of B and C is 83 kg, then the weight (in kg) of B is:

- Ans 1. 74
 2. 71
 3. 73
 4. 67

Question ID : 264330170130
Option 1 ID : 264330667198
Option 2 ID : 264330667197
Option 3 ID : 264330667196
Option 4 ID : 264330667195
Status : Answered
Chosen Option : 2

Q.27 The diameter of a hemisphere is equal to the diagonal of a rectangle of length 4 cm and breadth 3 cm. Find the total surface area (in cm^2) of the hemisphere.

- Ans
- 1. 25π
 - 2. $\frac{75\pi}{4}$
 - 3. $\frac{50\pi}{4}$
 - 4. $\frac{25\pi}{4}$

Question ID : 264330145108
Option 1 ID : 264330568690
Option 2 ID : 264330568688
Option 3 ID : 264330568689
Option 4 ID : 264330568687
Status : Answered
Chosen Option : 2

Q.28 A cylindrical metallic rod of diameter 2 cm and length 45 cm is melted and converted into wire of uniform thickness and length 5 m. The diameter of the wire is:

- Ans
- 1. 3 mm
 - 2. 2 mm
 - 3. 6 mm
 - 4. 5 mm

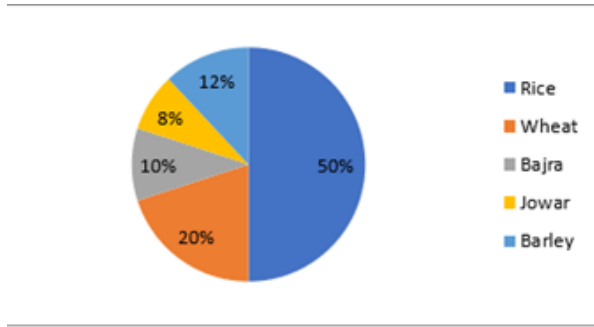
Question ID : 264330123006
Option 1 ID : 264330482087
Option 2 ID : 264330482090
Option 3 ID : 264330482089
Option 4 ID : 264330482088
Status : Answered
Chosen Option : 1

Q.29 If the base radius and the height of a right circular cone are increased by 10%, then the percentage increase in the volume is:

- Ans
- 1. 30.2%
 - 2. 22.1%
 - 3. 33.1%
 - 4. 20.2%

Question ID : 264330103640
Option 1 ID : 264330406867
Option 2 ID : 264330406866
Option 3 ID : 264330406868
Option 4 ID : 264330406865
Status : Answered
Chosen Option : 3

Q.30 The given pie chart shows the distribution of land under various food crops. The expenditure invested on these food crops is ₹25,000 per annum. Study the pie chart carefully and answer the question that follows.



The expenditure invested in Rice and Barley is what percentage (correct to 2 decimal places) of the expenditure invested in Wheat and Bajra?

- Ans
- 1. 206.55%
 - 2. 206.66%
 - 3. 260.66%
 - 4. 260.55%

Question ID : 264330165410

Option 1 ID : 264330648720

Option 2 ID : 264330648722

Option 3 ID : 264330648721

Option 4 ID : 264330648719

Status : Answered

Chosen Option : 2

Q.31 If perimeter of the circle is 13.2 cm, then the radius of the circle is ____.

(Take $\pi = \frac{22}{7}$)

- Ans
- 1. 6.6 cm
 - 2. 4.2 cm
 - 3. 2.1 cm
 - 4. 3.3 cm

Question ID : 264330165443

Option 1 ID : 264330648853

Option 2 ID : 264330648851

Option 3 ID : 264330648852

Option 4 ID : 264330648854

Status : Answered

Chosen Option : 3

Q.32 A goods train 350 m long passes through a tunnel of 1250m in 80 seconds. What is the speed of the train?

- Ans
- 1. 72 km/h
 - 2. 64 km/h
 - 3. 78 km/h
 - 4. 56 km/h

Question ID : 264330145068

Option 1 ID : 264330568528

Option 2 ID : 264330568529

Option 3 ID : 264330568530

Option 4 ID : 264330568527

Status : Answered

Chosen Option : 1

Q.33 Study the given table and answer the question that follows.
The table shows the number of employees in five different organisations A, B, C, D and E in different departments.

Dept ↓ Org →	A	B	C	D	E
HR	1050	1015	976	888	1004
Finance	1017	960	786	1025	963
Marketing	1382	1384	1275	1300	1290
Production	1542	1545	4550	1570	1580
Accounts	786	745	801	800	735
Legal	48	54	36	30	53
Total	5825	5703	5424	5613	5625

Which department has a minimum number of employees in each organisation?

- Ans
- 1. Marketing
 - 2. Production
 - 3. Accounts
 - 4. Legal

Question ID : 264330157722

Option 1 ID : 264330618247

Option 2 ID : 264330618248

Option 3 ID : 264330618249

Option 4 ID : 264330618250

Status : Answered

Chosen Option : 4

Q.34 The value of $\frac{a^2 - (b - c)^2}{(a + c)^2 - b^2} + \frac{b^2 - (a - c)^2}{(a + b)^2 - c^2} + \frac{c^2 - (a - b)^2}{(b + c)^2 - a^2}$ is:

- Ans
- 1. 1
 - 2. 2
 - 3. -1
 - 4. 3

Question ID : 264330157772

Option 1 ID : 264330618448

Option 2 ID : 264330618449

Option 3 ID : 264330618447

Option 4 ID : 264330618450

Status : Not Answered

Chosen Option : --

Q.35 In a triangle LMN, OP is a line segment drawn parallel to the side MN. OP intersects the sides LM and LN at O and P, respectively. If LM = 15 cm, OM = 4 cm, and PN = 5 cm, then what is the length (in cm) of the side LN?

- Ans
- 1. 16.25
 - 2. 18.75
 - 3. 20.25
 - 4. 22.75

Question ID : 264330165690

Option 1 ID : 264330649839

Option 2 ID : 264330649840

Option 3 ID : 264330649841

Option 4 ID : 264330649842

Status : Answered

Chosen Option : 2

Q.36

The value of $\sqrt{\frac{1 + \sin A}{1 - \sin A}}$ is:

- Ans
- 1. $\sec A - \tan A$
 - 2. $\operatorname{cosec} A + \cot A$
 - 3. $\sec A + \tan A$
 - 4. $\operatorname{cosec} A - \cot A$

Question ID : 264330157754

Option 1 ID : 264330618376

Option 2 ID : 264330618377

Option 3 ID : 264330618375

Option 4 ID : 264330618378

Status : Answered

Chosen Option : 3

Q.37 Determine the LCM of two numbers if their HCF is 12 and their ratio is 13 : 15.

- Ans
- 1. 1780
 - 2. 2450
 - 3. 1890
 - 4. 2340

Question ID : 26433071295

Option 1 ID : 264330279604

Option 2 ID : 264330279607

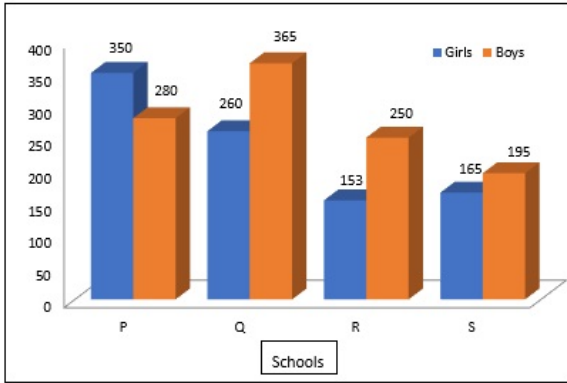
Option 3 ID : 264330279606

Option 4 ID : 264330279605

Status : Answered

Chosen Option : 4

Q.38 Study the given graph and answer the question that follows.
The graph shows data regarding number of boys and girls studying in class 5 in four different schools.



What is the difference between total number of boys studying in school P and Q together and the total number of girls in the same schools together?

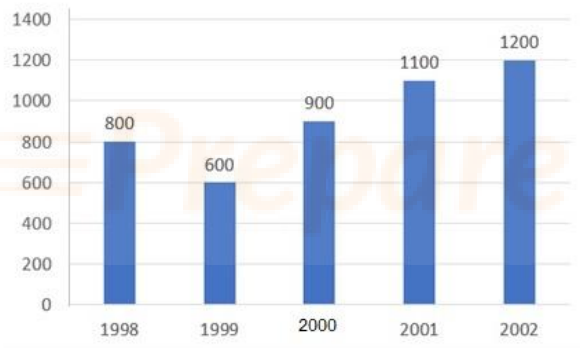
- Ans**
- 1. 38
 - 2. 45
 - 3. 40
 - 4. 35

Question ID : 264330158275
Option 1 ID : 264330620460
Option 2 ID : 264330620462
Option 3 ID : 264330620461
Option 4 ID : 264330620459

Status : Answered

Chosen Option : 4

Q.39 Study the given bar-graph and answer the question that follows.
The bar-graph displays the number of bicycles produced at a factory from 1998 to 2002.



What was the average number of bicycles produced at the factory per year from 1998-2002?

- Ans**
- 1. 940
 - 2. 960
 - 3. 920
 - 4. 880

Question ID : 264330157734
Option 1 ID : 264330618296
Option 2 ID : 264330618295
Option 3 ID : 264330618297
Option 4 ID : 264330618298

Status : Answered

Chosen Option : 3

Q.40 Find the least number which when divided by 4, 9, 12 and 15, leaves the remainder 3 in each case.

- Ans 1. 360
 2. 183
 3. 193
 4. 180

Question ID : 26433063994
Option 1 ID : 264330250569
Option 2 ID : 264330250570
Option 3 ID : 264330250568
Option 4 ID : 264330250571
Status : Answered
Chosen Option : 2

Q.41 The table below shows the number of trees planted by the government in 4 different years.

Year	Neem	Oak	Birch
2019	2000	3000	4000
2020	3000	4000	5000
2021	5000	6000	7000
2022	7000	8000	9000

Find the ratio between the number of neem trees planted in the year 2021 and the number of birch trees planted in the year 2022.

- Ans 1. 5:9
 2. 3:7
 3. 5:8
 4. 3:8

Question ID : 264330158385
Option 1 ID : 264330620902
Option 2 ID : 264330620901
Option 3 ID : 264330620899
Option 4 ID : 264330620900
Status : Answered
Chosen Option : 1

Q.42 On an item, there is an 18% discount on the marked price of ₹26,000. After giving an additional season's discount, the item is sold at ₹16,000. How much was the season's discount correct upto two places of decimal?

- Ans 1. 22.45%
 2. 24.95%
 3. 24.65%
 4. 35.25%

Question ID : 264330104407
Option 1 ID : 264330409929
Option 2 ID : 264330409931
Option 3 ID : 264330409930
Option 4 ID : 264330409932
Status : Answered
Chosen Option : 2

Q.43 In a ΔPQR , $\angle P=90^\circ$, $\angle R=47^\circ$ and $PS \perp QR$. Find the value of $\angle QPS$.

Ans 1. 43°

2. 47°

3. 45°

4. 40°

Question ID : 264330158285

Option 1 ID : 264330620500

Option 2 ID : 264330620502

Option 3 ID : 264330620501

Option 4 ID : 264330620499

Status : Answered

Chosen Option : 1

Q.44 Sanjay and Rohan can complete a work in 8 days and 12 days, respectively. Starting with Sanjay, they work on alternate days. In how many days will the work be completed?

Ans 1. $8\frac{1}{2}$

2. $9\frac{1}{2}$

3. $9\frac{2}{3}$

4. $9\frac{1}{3}$

Question ID : 26433087393

Option 1 ID : 264330343212

Option 2 ID : 264330343209

Option 3 ID : 264330343211

Option 4 ID : 264330343210

Status : Answered

Chosen Option : 2

Prepare 50% Faster

Q.45 Study the given table and answer the question that follows.

The table shows the percentage population of four states below poverty line and proportion of male to female.

State	Percentage of population below poverty line	Proportion of male to female	
		Below poverty line	Above poverty line
		Male : Female	Male : Female
P	28	3 : 2	7 : 3
Q	15	4 : 7	6 : 5
R	24	5 : 3	3 : 3
S	13	2 : 5	1 : 3

If the total population of state R is 26,000, then what is the number of females above poverty line in state R?

- Ans
- 1. 9,780
 - 2. 9,880
 - 3. 9,560
 - 4. 9,950

Question ID : 264330158261
Option 1 ID : 264330620404
Option 2 ID : 264330620405
Option 3 ID : 264330620403
Option 4 ID : 264330620406
Status : Answered
Chosen Option : 2

Q.46 AB is a chord of a circle having radius 1.7 cm. If the distance of this chord AB from the centre of the circle is 0.8 cm, then what is the length (in cm) of the chord AB?

- Ans
- 1. 4
 - 2. 1
 - 3. 3
 - 4. 2

Question ID : 264330165692
Option 1 ID : 264330649850
Option 2 ID : 264330649847
Option 3 ID : 264330649849
Option 4 ID : 264330649848
Status : Answered
Chosen Option : 3

Q.47 The monthly budget of an average household is given in the following table.

Category	Food	Clothing	Rent	Savings
Amount	8000	2000	6000	4000

The percentage of the monthly budget spent on clothing is:

- Ans 1. 10%
 2. 12%
 3. 8%
 4. 4%

Question ID : 264330167239

Option 1 ID : 264330655952

Option 2 ID : 264330655954

Option 3 ID : 264330655953

Option 4 ID : 264330655951

Status : Answered

Chosen Option : 1

Q.48 If the HCF of 45 and 55 is expressible in the form of $55 \times 5 + 45m$, then what is the value of m?

- Ans 1. -6
 2. 5
 3. 6
 4. -5

Question ID : 26433074253

Option 1 ID : 264330291134

Option 2 ID : 264330291133

Option 3 ID : 264330291135

Option 4 ID : 264330291132

Status : Not Answered

Chosen Option : --

Q.49 The monthly salary of a person is ₹50,000. He spends 40% of his salary on household expenses, 25% on rent, and 15% on transportation, and saves the remaining amount. What is his yearly savings?

- Ans 1. ₹1,00,000
 2. ₹1,10,000
 3. ₹1,20,000
 4. ₹90,000

Question ID : 264330157713

Option 1 ID : 264330618212

Option 2 ID : 264330618213

Option 3 ID : 264330618214

Option 4 ID : 264330618211

Status : Answered

Chosen Option : 3

Q.50 The cost price of pulses is 12% less than the selling price. Using a faulty weighing machine, shopkeeper is able to earn 25% profit. How much per cent of the faulty machine shows more weight as compared to the actual weight (Rounded off to the nearest integer)?

- Ans
- 1. 13%
 - 2. 15%
 - 3. 10%
 - 4. 14%

Question ID : 264330102068
Option 1 ID : 264330400779
Option 2 ID : 264330400780
Option 3 ID : 264330400777
Option 4 ID : 264330400778
Status : Answered
Chosen Option : 3

Section : English Comprehension

Q.1 Select the option that can be used as a one-word substitute for the given group of words.

A collection of historical documents or records providing information about a place, institution, or group of people

- Ans
- 1. Museum
 - 2. Apostate
 - 3. Asylum
 - 4. Archive

Question ID : 264330164298
Option 1 ID : 264330644410
Option 2 ID : 264330644409
Option 3 ID : 264330644408
Option 4 ID : 264330644407
Status : Answered
Chosen Option : 1

Q.2 Select the most appropriate idiom for the given situation focusing on the underlined segment.

The modern era statistics data provides useful advantage to the players at competent level.

- Ans
- 1. Cost an arm and a leg
 - 2. Grist to the mill
 - 3. Put something on ice
 - 4. Play it by ear

Question ID : 264330163409
Option 1 ID : 264330640917
Option 2 ID : 264330640915
Option 3 ID : 264330640916
Option 4 ID : 264330640918
Status : Answered
Chosen Option : 2

Q.3 The following sentence has been divided into parts. One of them may contain an error. Select the part that contains the error from the given options. If you don't find any error, mark 'No error' as your answer.
We should / not make an noise / in the class.

- Ans**
- 1. in the class
 - 2. We should
 - 3. No error
 - 4. not make an noise

Question ID : 264330117174
Option 1 ID : 264330460763
Option 2 ID : 264330460761
Option 3 ID : 264330460764
Option 4 ID : 264330460762
Status : Answered
Chosen Option : 4

Q.4 Identify the ANTONYM of the following word in the given sentence.
Languid
The animated infantry was marching forward for another rehearsal.

- Ans**
- 1. infantry
 - 2. rehearsal
 - 3. forward
 - 4. animated

Question ID : 264330167910
Option 1 ID : 264330658561
Option 2 ID : 264330658562
Option 3 ID : 264330658560
Option 4 ID : 264330658559
Status : Answered
Chosen Option : 4

Q.5 Select the most appropriate meaning of the given idiom.
Steer clear of

- Ans**
- 1. Loose temper and react furiously to someone
 - 2. Avoid someone or something because it is dangerous for you
 - 3. Show someone how to do a job or activity
 - 4. Be kind and empathetic to someone

Question ID : 264330135998
Option 1 ID : 264330532833
Option 2 ID : 264330532832
Option 3 ID : 264330532831
Option 4 ID : 264330532834
Status : Answered
Chosen Option : 2

Q.6 Select the most appropriate ANTONYM for the highlighted word.
The malice he developed for all caused a lot of damage.

- Ans**
- 1. avarice
 - 2. grace
 - 3. oppression
 - 4. sympathy

Question ID : 264330120741
Option 1 ID : 264330473179
Option 2 ID : 264330473181
Option 3 ID : 264330473182
Option 4 ID : 264330473180
Status : Answered
Chosen Option : 4

Q.7 The following sentence has been divided into parts. One of them may contain an error.
Select the part that contains the error from the given options. If you don't find any error, mark 'No error' as your answer.

I was wish / to meet her / on her birthday.

- Ans**
- 1. I was wish
 - 2. No error
 - 3. to meet her
 - 4. on her birthday

Question ID : 26433073521
Option 1 ID : 264330288232
Option 2 ID : 264330288235
Option 3 ID : 264330288233
Option 4 ID : 264330288234
Status : Answered
Chosen Option : 1

Q.8 The following sentence has been split into four segments. Identify the segment that contains a grammatical error.

It is take / a couple of minutes / for the computer / to boot up.

- Ans**
- 1. for the computer
 - 2. to boot up
 - 3. a couple of minutes
 - 4. It is take

Question ID : 264330145277
Option 1 ID : 264330569365
Option 2 ID : 264330569366
Option 3 ID : 264330569364
Option 4 ID : 264330569363
Status : Answered
Chosen Option : 4

Q.9 You are preparing a speech for an upcoming function. Select a synonym for the highlighted word to make it better.

Sexual assault is a severe and pervasive issue that can have a significant impact on a victim's life.

- Ans
- 1. Retrospective
 - 2. Longitudinal
 - 3. Widespread
 - 4. Equatorial

Question ID : 264330121905
Option 1 ID : 264330477776
Option 2 ID : 264330477777
Option 3 ID : 264330477775
Option 4 ID : 264330477778
Status : Answered
Chosen Option : 3

Q.10 Select the INCORRECTLY spelt word.

- Ans
- 1. Adjourn
 - 2. Addict
 - 3. Abdact
 - 4. Advise

Question ID : 26433089398
Option 1 ID : 264330351095
Option 2 ID : 264330351094
Option 3 ID : 264330351093
Option 4 ID : 264330351096
Status : Answered
Chosen Option : 3

Q.11 Choose the option which means the same as the underlined segment.
The boss wanted to finish the case before the arrival of the Inspection team.

- Ans
- 1. be over and done with
 - 2. be over one's head
 - 3. be over and over
 - 4. be over a barrel

Question ID : 264330120535
Option 1 ID : 264330472389
Option 2 ID : 264330472388
Option 3 ID : 264330472387
Option 4 ID : 264330472390
Status : Answered
Chosen Option : 1

Q.12 Select the most appropriate synonym of the given word.

Cruise

- Ans 1. Bounce
 2. Fall
 3. Distance
 4. Voyage

Question ID : 264330163369
Option 1 ID : 264330640764
Option 2 ID : 264330640765
Option 3 ID : 264330640763
Option 4 ID : 264330640766
Status : Not Answered
Chosen Option : --

Q.13 Select the most appropriate meaning of the highlighted idiom in the given sentence.

Nancy held a grudge against her teacher for a long time, but she finally decided to let bygones be bygones.

- Ans 1. Change the past
 2. Take revenge
 3. Flatter someone
 4. Ignore the past

Question ID : 264330108899
Option 1 ID : 264330427875
Option 2 ID : 264330427873
Option 3 ID : 264330427876
Option 4 ID : 264330427874
Status : Answered
Chosen Option : 4

Q.14 Select the option that will improve the underlined part of the given sentence.

Farmers have harvested wheat by using whatever labour that was available to them.

- Ans 1. by using amalgamated labour
 2. by using limited labour
 3. by using dispersed labour
 4. by using united labour

Question ID : 264330145291
Option 1 ID : 264330569420
Option 2 ID : 264330569421
Option 3 ID : 264330569422
Option 4 ID : 264330569419
Status : Answered
Chosen Option : 2

Q.15 Select the most appropriate meaning of the underlined idiom in the following sentence.

Rahim had to eat a humble pie in starting a row with his neighbour over a trifle.

- Ans
- 1. To remain without food
 - 2. To be punished for doing something wrong
 - 3. To take simple food
 - 4. To feel sorry and apologise for a mistake

Question ID : 264330157063

Option 1 ID : 264330615625

Option 2 ID : 264330615626

Option 3 ID : 264330615624

Option 4 ID : 264330615623

Status : Answered

Chosen Option : 4

Q.16 Select the most appropriate option that can substitute the underlined segment in the given sentence.

Malati has a difficult job, but she does it good.

- Ans
- 1. better
 - 2. well
 - 3. best
 - 4. nice

Question ID : 264330120553

Option 1 ID : 264330472457

Option 2 ID : 264330472456

Option 3 ID : 264330472458

Option 4 ID : 264330472455

Status : Answered

Chosen Option : 2

Q.17 Select the most appropriate synonym of the given word.

Fierce

- Ans
- 1. Lame
 - 2. Lavish
 - 3. Strange
 - 4. Furious

Question ID : 264330117153

Option 1 ID : 264330460677

Option 2 ID : 264330460680

Option 3 ID : 264330460679

Option 4 ID : 264330460678

Status : Answered

Chosen Option : 4

Q.18 Select the most appropriate synonym of the given word.
Faithful

- Ans
- 1. Daring
 - 2. Unfaithful
 - 3. Cheerful
 - 4. Loyal

Question ID : 264330164163
Option 1 ID : 264330643903
Option 2 ID : 264330643904
Option 3 ID : 264330643906
Option 4 ID : 264330643905
Status : Marked For Review
Chosen Option : 4

Q.19 Select the most appropriate meaning of the underlined idiom.
Yamini is a great singer. She will make it big one day.

- Ans
- 1. Succeed and become famous
 - 2. Become financially sound
 - 3. Educated and rich
 - 4. Migrate and settle

Question ID : 264330132897
Option 1 ID : 264330520649
Option 2 ID : 264330520648
Option 3 ID : 264330520647
Option 4 ID : 264330520650
Status : Answered
Chosen Option : 1

Q.20 Select the most appropriate ANTONYM of the given word.
Malice

- Ans
- 1. Torsion
 - 2. Haughtiness
 - 3. Kindness
 - 4. Tremor

Question ID : 26433097019
Option 1 ID : 264330380812
Option 2 ID : 264330380809
Option 3 ID : 264330380810
Option 4 ID : 264330380811
Status : Answered
Chosen Option : 3

Q.21 Select the most appropriate option that can substitute the underlined segment in the given sentence. If there is no need to substitute it, select 'No substitution required'.
He travelled the whole world, but found piece at home.

- Ans
- 1. peach
 - 2. No substitution required
 - 3. prize
 - 4. peace

Question ID : 26433070773
Option 1 ID : 264330277550
Option 2 ID : 264330277551
Option 3 ID : 264330277548
Option 4 ID : 264330277549
Status : Answered
Chosen Option : 4

Q.22 Select the most appropriate meaning of the given word.

Trousseau

- Ans
- 1. Being true to oneself
 - 2. The clothes, linen, and other belongings collected by a bride for her marriage
 - 3. A large cabinet full of expensive clothes
 - 4. Single leg side of a trouser

Question ID : 26433073743
Option 1 ID : 264330289112
Option 2 ID : 264330289114
Option 3 ID : 264330289115
Option 4 ID : 264330289113
Status : Answered
Chosen Option : 2

Q.23 Select the option that can be used as a one-word substitute for the underlined group of words.

Since God is an all-powerful creator, he has absolute control over those whom he has created.

- Ans
- 1. Voracious
 - 2. Omnipotent
 - 3. Incurable
 - 4. Omniscient

Question ID : 26433088835
Option 1 ID : 264330348895
Option 2 ID : 264330348893
Option 3 ID : 264330348894
Option 4 ID : 264330348896
Status : Answered
Chosen Option : 2

Q.24 Select the most appropriate option to substitute the underlined segment in the given sentence.

At some point in the past, there were rows of temporary shops that used to display various cooking utensils.

- Ans
- 1. One upon a time
 - 2. Before now
 - 3. In the past few years
 - 4. Long ago

Question ID : 26433070646
Option 1 ID : 264330277046
Option 2 ID : 264330277044
Option 3 ID : 264330277045
Option 4 ID : 264330277047
Status : Answered
Chosen Option : 1

Q.25 Select the option that can be used as a one-word substitute for the given group of words.

A structure in the garden where climbing plants can grow and people can walk under

- Ans
- 1. Tomb
 - 2. Outhouse
 - 3. Pergola
 - 4. Treehouse

Question ID : 26433088896
Option 1 ID : 264330349132
Option 2 ID : 264330349130
Option 3 ID : 264330349129
Option 4 ID : 264330349131
Status : Answered
Chosen Option : 3

Q.26 Select the most appropriate option that can substitute the underlined segment in the given sentence.

She was yearning for a trip to the mountains.

- Ans
- 1. leaving for
 - 2. deeply repenting
 - 3. keenly desiring
 - 4. saving money for

Question ID : 26433099881
Option 1 ID : 264330392113
Option 2 ID : 264330392115
Option 3 ID : 264330392114
Option 4 ID : 264330392116
Status : Answered
Chosen Option : 4

Q.27 Select the most appropriate idiom for the given situation.
You wanted to speak but you controlled yourself and became patient. What have you done?

- Ans
- 1. Pin drop silence
 - 2. Dragged your feet
 - 3. Herculean task
 - 4. Held your horses

Question ID : 264330100296
Option 1 ID : 264330393749
Option 2 ID : 264330393752
Option 3 ID : 264330393751
Option 4 ID : 264330393750
Status : Answered
Chosen Option : 4

Q.28 Select the most appropriate meaning of the given idiom.

Step up to the plate

- Ans
- 1. Think about a crisis
 - 2. Plan for better performance
 - 3. Implement a plan
 - 4. Take control of a situation

Question ID : 26433099939
Option 1 ID : 264330392331
Option 2 ID : 264330392330
Option 3 ID : 264330392329
Option 4 ID : 264330392332
Status : Not Answered
Chosen Option : --

Q.29 Select the most appropriate meaning of the underlined idiom.
He ate the whole bunch of grapes under the nose of all of us.

- Ans
- 1. After much persuasion
 - 2. In full view of somebody
 - 3. Sharing equally
 - 4. Secretly

Question ID : 264330122978
Option 1 ID : 264330481978
Option 2 ID : 264330481977
Option 3 ID : 264330481976
Option 4 ID : 264330481975
Status : Answered
Chosen Option : 2

Q.30 Select the INCORRECTLY spelt word.

- Ans
- 1. Prefered
 - 2. Revered
 - 3. Answered
 - 4. Reference

Question ID : 264330163412
Option 1 ID : 264330640928
Option 2 ID : 264330640929
Option 3 ID : 264330640930
Option 4 ID : 264330640927
Status : Answered
Chosen Option : 1

Q.31 Select the option that can be used as a one-word substitute for the given group of words.

Extremely beautiful, elaborate or impressive

- Ans
- 1. Proficient
 - 2. Magnificent
 - 3. Transient
 - 4. Deficient

Question ID : 26433089338
Option 1 ID : 264330350854
Option 2 ID : 264330350855
Option 3 ID : 264330350856
Option 4 ID : 264330350853
Status : Answered
Chosen Option : 2

Q.32 Select the most appropriate meaning of the given idiom.
To burn the midnight oil

- Ans
- 1. To waste time
 - 2. To stay up late working or studying
 - 3. To overthink
 - 4. To be relaxed and calm

Question ID : 264330139773
Option 1 ID : 264330547509
Option 2 ID : 264330547508
Option 3 ID : 264330547510
Option 4 ID : 264330547507
Status : Answered
Chosen Option : 2

Q.33 Select the most appropriate synonym of the underlined word.
It was inevitable that the team management would sack him after his rude behaviour.

- Ans
- 1. impassionate
 - 2. amiable
 - 3. measurable
 - 4. unavoidable

Question ID : 264330120616
Option 1 ID : 264330472706
Option 2 ID : 264330472703
Option 3 ID : 264330472704
Option 4 ID : 264330472705
Status : Answered
Chosen Option : 4

Q.34 Select the INCORRECTLY spelt word from the underlined words in the following sentence.

As affidevit is a statement or declaration in writing an oath or affirmation, sworn before a person having authority to administer oath.

- Ans
- 1. affidevit
 - 2. administer
 - 3. authority
 - 4. affirmation

Question ID : 264330141155
Option 1 ID : 264330552963
Option 2 ID : 264330552966
Option 3 ID : 264330552965
Option 4 ID : 264330552964
Status : Answered
Chosen Option : 1

Q.35 The following sentence has been split into four segments. Identify the segment that contains a grammatical error.

We have being / arranged the stay / for the guests at / a hillside resort.

- Ans
- 1. a hillside resort
 - 2. We have being
 - 3. arranged the stay
 - 4. for the guests at

Question ID : 26433091957
Option 1 ID : 264330361168
Option 2 ID : 264330361165
Option 3 ID : 264330361166
Option 4 ID : 264330361167
Status : Answered
Chosen Option : 2

Q.36 Select the most appropriate synonym of the given word.

Extravagance

- Ans
- 1. Simplicity
 - 2. Love
 - 3. Fortune
 - 4. Self-indulgence

Question ID : 264330163371
Option 1 ID : 264330640773
Option 2 ID : 264330640774
Option 3 ID : 264330640772
Option 4 ID : 264330640771
Status : Answered
Chosen Option : 4

Q.37 Select the most appropriate synonym of the given word.

Antique

- Ans
- 1. Ancient
 - 2. New
 - 3. Gothic
 - 4. Modern

Question ID : 264330163355
Option 1 ID : 264330640713
Option 2 ID : 264330640714
Option 3 ID : 264330640712
Option 4 ID : 264330640711
Status : Not Answered
Chosen Option : --

Q.38 Select the INCORRECTLY spelt word in the given sentence.

The Egyptian Pharaohs were the Kings of ancient Egypt and were considered as the literal embodiment of God himself.

- Ans
- 1. literal
 - 2. ancient
 - 3. pharaohs
 - 4. embodiment

Question ID : 26433089738
Option 1 ID : 264330352446
Option 2 ID : 264330352448
Option 3 ID : 264330352447
Option 4 ID : 264330352445
Status : Answered
Chosen Option : 4

Q.39 Select the INCORRECTLY spelt word.

- Ans
- 1. Isle
 - 2. Braed
 - 3. Achieve
 - 4. Amicable

Question ID : 264330163410
Option 1 ID : 264330640921
Option 2 ID : 264330640922
Option 3 ID : 264330640920
Option 4 ID : 264330640919
Status : Answered
Chosen Option : 2

Q.40 Select the most appropriate option that can substitute the underlined segment in the given sentence.

Naina is leaving and I am think to apply for her job.

- Ans
- 1. thinking in applying
 - 2. thinking about applying
 - 3. thinking about apply
 - 4. thinking on applying

Question ID : 264330108915
Option 1 ID : 264330427938
Option 2 ID : 264330427940
Option 3 ID : 264330427937
Option 4 ID : 264330427939
Status : Answered
Chosen Option : 2

Comprehension:

In the following passage, some words have been deleted. Read the passage carefully and select the most appropriate option to fill in each blank.

Discrimination refers to the inequitable or (1)_____ treatment of individuals or collectives on the basis of attributes such as ethnicity, sex, age and sexual orientation. Studies have indicated that the perception of discrimination can (2)_____ a series of stress-induced alterations in an individual's mental, physiological and behavioural responses. The experience of stress is known to elicit unfavourable emotional reactions, including but not limited to (3)_____, despair and resentment. Furthermore, anxiety has been linked to a rise in health-compromising behaviours such as smoking, drinking and (4)_____ drug use, while simultaneously causing a (5)_____ in health-promoting activities such as quality sleep and vigorous exercise.

SubQuestion No : 41

Q.41 Select the most appropriate option to fill in blank no. 1.

- Ans
- 1. systematic
 - 2. biased
 - 3. pathetic
 - 4. tragic

Question ID : 264330163437
Option 1 ID : 264330641021
Option 2 ID : 264330641020
Option 3 ID : 264330641019
Option 4 ID : 264330641022
Status : Answered
Chosen Option : 3

Comprehension:

In the following passage, some words have been deleted. Read the passage carefully and select the most appropriate option to fill in each blank.

Discrimination refers to the inequitable or (1)_____ treatment of individuals or collectives on the basis of attributes such as ethnicity, sex, age and sexual orientation. Studies have indicated that the perception of discrimination can (2)_____ a series of stress-induced alterations in an individual's mental, physiological and behavioural responses. The experience of stress is known to elicit unfavourable emotional reactions, including but not limited to (3)_____, despair and resentment. Furthermore, anxiety has been linked to a rise in health-compromising behaviours such as smoking, drinking and (4)_____ drug use, while simultaneously causing a (5)_____ in health-promoting activities such as quality sleep and vigorous exercise.

SubQuestion No : 42

Q.42 Select the most appropriate option to fill in blank no. 2.

- Ans 1. support
 2. inspire
 3. trigger
 4. motivate

Question ID : 264330163438

Option 1 ID : 264330641026

Option 2 ID : 264330641025

Option 3 ID : 264330641023

Option 4 ID : 264330641024

Status : Answered

Chosen Option : 3

Comprehension:

In the following passage, some words have been deleted. Read the passage carefully and select the most appropriate option to fill in each blank.

Discrimination refers to the inequitable or (1)_____ treatment of individuals or collectives on the basis of attributes such as ethnicity, sex, age and sexual orientation. Studies have indicated that the perception of discrimination can (2)_____ a series of stress-induced alterations in an individual's mental, physiological and behavioural responses. The experience of stress is known to elicit unfavourable emotional reactions, including but not limited to (3)_____, despair and resentment. Furthermore, anxiety has been linked to a rise in health-compromising behaviours such as smoking, drinking and (4)_____ drug use, while simultaneously causing a (5)_____ in health-promoting activities such as quality sleep and vigorous exercise.

SubQuestion No : 43

Q.43 Select the most appropriate option to fill in blank no. 3.

- Ans 1. death
 2. anxiety
 3. deafness
 4. impairment

Question ID : 264330163439

Option 1 ID : 264330641029

Option 2 ID : 264330641030

Option 3 ID : 264330641027

Option 4 ID : 264330641028

Status : Answered

Chosen Option : 2

Comprehension:

In the following passage, some words have been deleted. Read the passage carefully and select the most appropriate option to fill in each blank.

Discrimination refers to the inequitable or (1)_____ treatment of individuals or collectives on the basis of attributes such as ethnicity, sex, age and sexual orientation. Studies have indicated that the perception of discrimination can (2)_____ a series of stress-induced alterations in an individual's mental, physiological and behavioural responses. The experience of stress is known to elicit unfavourable emotional reactions, including but not limited to (3)_____, despair and resentment. Furthermore, anxiety has been linked to a rise in health-compromising behaviours such as smoking, drinking and (4)_____ drug use, while simultaneously causing a (5)_____ in health-promoting activities such as quality sleep and vigorous exercise.

SubQuestion No : 44

Q.44 Select the most appropriate option to fill in blank no. 4.

- Ans 1. prescribed
 2. mandatory
 3. illicit
 4. legitimate

Question ID : 264330163440

Option 1 ID : 264330641033

Option 2 ID : 264330641034

Option 3 ID : 264330641032

Option 4 ID : 264330641031

Status : Answered

Chosen Option : 3

Comprehension:

In the following passage, some words have been deleted. Read the passage carefully and select the most appropriate option to fill in each blank.

Discrimination refers to the inequitable or (1)_____ treatment of individuals or collectives on the basis of attributes such as ethnicity, sex, age and sexual orientation. Studies have indicated that the perception of discrimination can (2)_____ a series of stress-induced alterations in an individual's mental, physiological and behavioural responses. The experience of stress is known to elicit unfavourable emotional reactions, including but not limited to (3)_____, despair and resentment. Furthermore, anxiety has been linked to a rise in health-compromising behaviours such as smoking, drinking and (4)_____ drug use, while simultaneously causing a (5)_____ in health-promoting activities such as quality sleep and vigorous exercise.

SubQuestion No : 45

Q.45 Select the most appropriate option to fill in blank no. 5.

- Ans 1. rise
 2. unfruitful
 3. decline
 4. upheaval

Question ID : 264330163441

Option 1 ID : 264330641035

Option 2 ID : 264330641038

Option 3 ID : 264330641036

Option 4 ID : 264330641037

Status : Answered

Chosen Option : 3

Comprehension:

Read the given passage carefully and answer the questions that follow.

The world of social media is a strange and wondrous place. It's a world where you can connect with people from all over the globe, share your thoughts and opinions, and maybe even go viral if you're lucky. But let's be real, it's also a world filled with endless cat videos, oversharing, and drama.

One of the most interesting things about social media is the way it's changed the way we communicate. We've gone from long, thoughtful emails to quick, abbreviated messages with emojis and acronyms. And don't even get me started on the whole hashtag phenomenon. It's like we're all speaking a different language now.

But there are also some downsides to this constant connection. It's easy to get sucked into the world of social media and forget about the real world around us. We're so busy scrolling through our feeds that we forget to enjoy the little moments in life. And let's not forget about the pressure to present the perfect life online. It's like we're all in a competition to see who can be the most popular, the most successful, the most enviable.

Despite all of this, I have to admit, I'm still a fan of social media. It's a great way to stay connected with friends and family, and I've even made some new friends through various online communities. Plus, let's face it, sometimes you just need a good laugh at a ridiculous meme.

SubQuestion No : 46

Q.46 What is the ANTONYM of the word 'perfect', as used in the passage?

- Ans 1. Troublesome
 2. Limited
 3. Unsatisfactory
 4. Laughable

Question ID : 264330165131

Option 1 ID : 264330647636

Option 2 ID : 264330647635

Option 3 ID : 264330647637

Option 4 ID : 264330647638

Status : Answered

Chosen Option : 3

Comprehension:

Read the given passage carefully and answer the questions that follow.

The world of social media is a strange and wondrous place. It's a world where you can connect with people from all over the globe, share your thoughts and opinions, and maybe even go viral if you're lucky. But let's be real, it's also a world filled with endless cat videos, oversharing, and drama.

One of the most interesting things about social media is the way it's changed the way we communicate. We've gone from long, thoughtful emails to quick, abbreviated messages with emojis and acronyms. And don't even get me started on the whole hashtag phenomenon. It's like we're all speaking a different language now.

But there are also some downsides to this constant connection. It's easy to get sucked into the world of social media and forget about the real world around us. We're so busy scrolling through our feeds that we forget to enjoy the little moments in life. And let's not forget about the pressure to present the perfect life online. It's like we're all in a competition to see who can be the most popular, the most successful, the most enviable.

Despite all of this, I have to admit, I'm still a fan of social media. It's a great way to stay connected with friends and family, and I've even made some new friends through various online communities. Plus, let's face it, sometimes you just need a good laugh at a ridiculous meme.

SubQuestion No : 47

Q.47 Which of the following is NOT mentioned as a way social media has changed the way we communicate?

- Ans**
- 1. Quick, abbreviated messages with emojis and acronyms.
 - 2. Video conferencing for more meaningful conversations.
 - 3. Connecting with people from all over the world.
 - 4. The use of hashtags.

Question ID : 264330165130

Option 1 ID : 264330647631

Option 2 ID : 264330647633

Option 3 ID : 264330647634

Option 4 ID : 264330647632

Status : Answered

Chosen Option : 2

Comprehension:

Read the given passage carefully and answer the questions that follow.

The world of social media is a strange and wondrous place. It's a world where you can connect with people from all over the globe, share your thoughts and opinions, and maybe even go viral if you're lucky. But let's be real, it's also a world filled with endless cat videos, oversharing, and drama.

One of the most interesting things about social media is the way it's changed the way we communicate. We've gone from long, thoughtful emails to quick, abbreviated messages with emojis and acronyms. And don't even get me started on the whole hashtag phenomenon. It's like we're all speaking a different language now.

But there are also some downsides to this constant connection. It's easy to get sucked into the world of social media and forget about the real world around us. We're so busy scrolling through our feeds that we forget to enjoy the little moments in life. And let's not forget about the pressure to present the perfect life online. It's like we're all in a competition to see who can be the most popular, the most successful, the most enviable.

Despite all of this, I have to admit, I'm still a fan of social media. It's a great way to stay connected with friends and family, and I've even made some new friends through various online communities. Plus, let's face it, sometimes you just need a good laugh at a ridiculous meme.

SubQuestion No : 48

Q.48 Which of the following would be the most appropriate title for this passage?

- Ans 1. The Joys and Sorrows of Social Media
 2. The Benefits of Social Media
 3. The Dark Side of Social Media
 4. Mastering the Art of Social Media

Question ID : 264330165127

Option 1 ID : 264330647622

Option 2 ID : 264330647619

Option 3 ID : 264330647620

Option 4 ID : 264330647621

Status : Answered

Chosen Option : 1

Comprehension:

Read the given passage carefully and answer the questions that follow.

The world of social media is a strange and wondrous place. It's a world where you can connect with people from all over the globe, share your thoughts and opinions, and maybe even go viral if you're lucky. But let's be real, it's also a world filled with endless cat videos, oversharing, and drama.

One of the most interesting things about social media is the way it's changed the way we communicate. We've gone from long, thoughtful emails to quick, abbreviated messages with emojis and acronyms. And don't even get me started on the whole hashtag phenomenon. It's like we're all speaking a different language now.

But there are also some downsides to this constant connection. It's easy to get sucked into the world of social media and forget about the real world around us. We're so busy scrolling through our feeds that we forget to enjoy the little moments in life. And let's not forget about the pressure to present the perfect life online. It's like we're all in a competition to see who can be the most popular, the most successful, the most enviable.

Despite all of this, I have to admit, I'm still a fan of social media. It's a great way to stay connected with friends and family, and I've even made some new friends through various online communities. Plus, let's face it, sometimes you just need a good laugh at a ridiculous meme.

SubQuestion No : 49

Q.49 What is one of the downsides of social media mentioned in the passage?

- Ans 1. It can help connect with people all over the globe.
 2. It's a great way to stay connected with friends and family.
 3. It encourages people to enjoy the little moments in life.
 4. It can lead to pressure to present a perfect life online.

Question ID : 264330165128

Option 1 ID : 264330647624

Option 2 ID : 264330647623

Option 3 ID : 264330647626

Option 4 ID : 264330647625

Status : Answered

Chosen Option : 4

Comprehension:

Read the given passage carefully and answer the questions that follow.

The world of social media is a strange and wondrous place. It's a world where you can connect with people from all over the globe, share your thoughts and opinions, and maybe even go viral if you're lucky. But let's be real, it's also a world filled with endless cat videos, oversharing, and drama.

One of the most interesting things about social media is the way it's changed the way we communicate. We've gone from long, thoughtful emails to quick, abbreviated messages with emojis and acronyms. And don't even get me started on the whole hashtag phenomenon. It's like we're all speaking a different language now.

But there are also some downsides to this constant connection. It's easy to get sucked into the world of social media and forget about the real world around us. We're so busy scrolling through our feeds that we forget to enjoy the little moments in life. And let's not forget about the pressure to present the perfect life online. It's like we're all in a competition to see who can be the most popular, the most successful, the most enviable.

Despite all of this, I have to admit, I'm still a fan of social media. It's a great way to stay connected with friends and family, and I've even made some new friends through various online communities. Plus, let's face it, sometimes you just need a good laugh at a ridiculous meme.

SubQuestion No : 50

Q.50 What is the theme of the passage?

- Ans
- 1. The dangers of spending too much time online.
 - 2. The importance of social media for businesses.
 - 3. The positive and negative effects of social media.
 - 4. The history of social media.

Question ID : 264330165129

Option 1 ID : 264330647629

Option 2 ID : 264330647628

Option 3 ID : 264330647627

Option 4 ID : 264330647630

Status : Answered

Chosen Option : 3

Sub Inspector in Delhi Police and Central Armed Police Forces Examination 2023 Paper I

Roll Number	
Candidate Name	
Venue Name	G.B Infotech
Exam Date	05/10/2023
Exam Time	9:00 AM - 11:00 AM
Subject	SICPO Paper I 2023

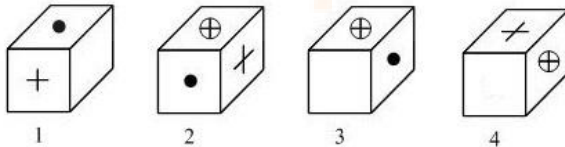
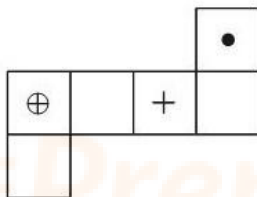
Section : General Intelligence and Reasoning

Q.1 Three of the following letter-clusters are alike in some manner and one is different.
Select the one that is different.

- Ans** ✔ 1. LOKP
✘ 2. HMIL
✘ 3. KPLO
✘ 4. SXTW

Question ID : **264330180759**
 Option 1 ID : **264330709006**
 Option 2 ID : **264330709005**
 Option 3 ID : **264330709003**
 Option 4 ID : **264330709004**
 Status : **Answered**
 Chosen Option : **1**

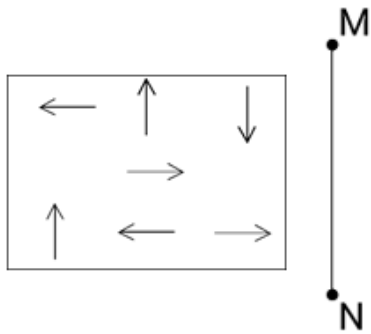
Q.2 If the given sheet is folded to form a cube, which of the given figures are possible?
 (The elements are shown to indicate the sides only.)



- Ans** ✘ 1. Only 2 and 3
✘ 2. Only 2 and 4
✔ 3. Only 1 and 3
✘ 4. Only 1 and 4

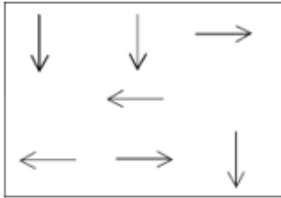
Question ID : **26433065677**
 Option 1 ID : **264330257271**
 Option 2 ID : **264330257269**
 Option 3 ID : **264330257270**
 Option 4 ID : **264330257268**
 Status : **Answered**
 Chosen Option : **3**

Q.3 Select the correct mirror image of the given figure, when the mirror is placed at line MN as shown.

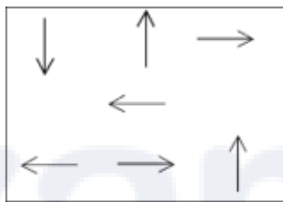


Ans

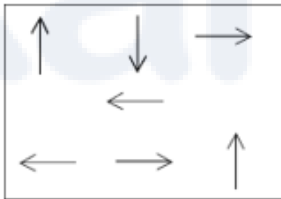
✗ 1.



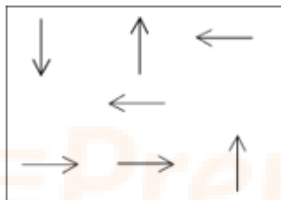
✓ 2.



✗ 3.



✗ 4.



Question ID : 264330170164

Option 1 ID : 264330667334

Option 2 ID : 264330667331

Option 3 ID : 264330667332

Option 4 ID : 264330667333

Status : Answered

Chosen Option : 2

Q.4 If A denotes '+', B denotes 'x', C denotes '-', and D denotes '÷', then what will be the value of the following equation?
94 C 12 B 6 A 216 D 9 = ?

- Ans 1. 46
 2. 52
 3. 47
 4. 68

Question ID : 264330129785
Option 1 ID : 264330508372
Option 2 ID : 264330508373
Option 3 ID : 264330508374
Option 4 ID : 264330508371
Status : Answered
Chosen Option : 1

Q.5 Which of the following numbers will replace the question mark (?) in the given series?

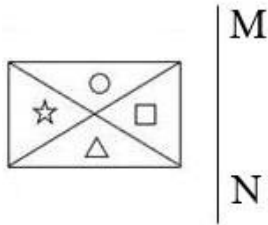
42, 53, 46, ?, 53, 66

- Ans 1. 58
 2. 51
 3. 55
 4. 48

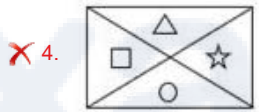
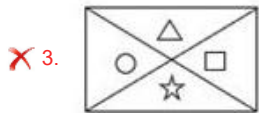
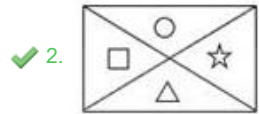
Question ID : 26433091012
Option 1 ID : 264330357458
Option 2 ID : 264330357460
Option 3 ID : 264330357459
Option 4 ID : 264330357457
Status : Not Answered
Chosen Option : --

Prepare 50% Faster

Q.6 Select the correct mirror image of the given figure when the mirror is placed at line MN as shown.



Ans



Question ID : 26433056624
 Option 1 ID : 264330221483
 Option 2 ID : 264330221480
 Option 3 ID : 264330221482
 Option 4 ID : 264330221481
 Status : Answered
 Chosen Option : 2

Q.7 Six friends are sitting in a circle facing the centre. Sumit sits second to the right of Amit. Karan is an immediate neighbour of Param. Tony sits third to the right of Amit. Dharam is an immediate neighbour of Amit and Sumit. Karan sits second to the right of Sumit.
 Who sits fourth to the right of Param?

- Ans
- ✗ 1. Karan
 - ✗ 2. Sumit
 - ✗ 3. Dharam
 - ✓ 4. Tony

Question ID : 264330145407
 Option 1 ID : 264330569885
 Option 2 ID : 264330569884
 Option 3 ID : 264330569886
 Option 4 ID : 264330569883
 Status : Answered
 Chosen Option : 4

Q.8 Select the option that is related to the fifth number in the same way as the first number is related to the second number and the third number is related to the fourth number.
 $32 : 10 :: 24 : 12 :: 98 : ?$

- Ans
- 1. 25
 - 2. 24
 - 3. 43
 - 4. 34

Question ID : 26433079116
Option 1 ID : 264330310471
Option 2 ID : 264330310468
Option 3 ID : 264330310469
Option 4 ID : 264330310470
Status : Not Answered
Chosen Option : --

Q.9 Select the set in which the numbers are related in the same way as are the numbers of the following sets.

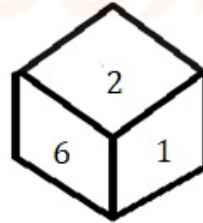
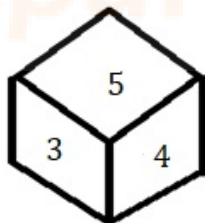
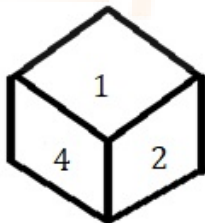
(NOTE : Operations should be performed on the whole numbers, without breaking down the numbers into its constituent digits. E.g. 13 – Operations on 13 such as adding /subtracting /multiplying etc. to 13 can be performed. Breaking down 13 into 1 and 3 and then performing mathematical operations on 1 and 3 is NOT allowed)

(7, 52), (9, 84)

- Ans
- 1. (13, 172)
 - 2. (11, 125)
 - 3. (14, 196)
 - 4. (8, 65)

Question ID : 264330145295
Option 1 ID : 264330569435
Option 2 ID : 264330569437
Option 3 ID : 264330569438
Option 4 ID : 264330569436
Status : Answered
Chosen Option : 1

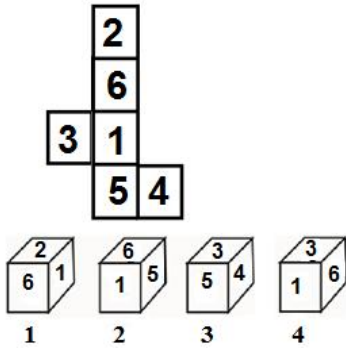
Q.10 Three different positions of the same dice are shown. Find the number on the face opposite the face showing '6'.



- Ans
- 1. 4
 - 2. 3
 - 3. 1
 - 4. 2

Question ID : 264330108969
Option 1 ID : 264330428156
Option 2 ID : 264330428155
Option 3 ID : 264330428153
Option 4 ID : 264330428154
Status : Answered
Chosen Option : 1

Q.11 If the given sheet is folded to form a cube, which of the figures is/are possible?
(The numbers are shown to indicate the sides only.)



- Ans 1. Only 4
 2. Only 3
 3. Only 1 and 4
 4. Only 2

Question ID : 26433065672
 Option 1 ID : 264330257251
 Option 2 ID : 264330257250
 Option 3 ID : 264330257248
 Option 4 ID : 264330257249
 Status : Answered
 Chosen Option : 1

Q.12 In a certain code language, 'COLD' is coded as '6428' and 'TIDE' is coded as '9673'.
What is the code for 'D' in the given code language?

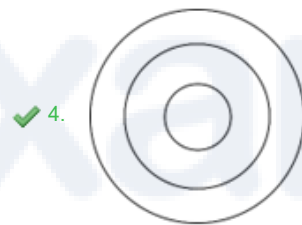
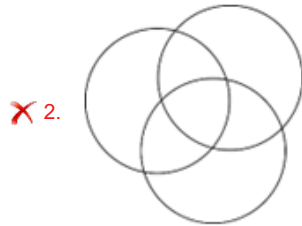
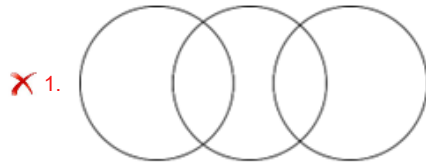
- Ans 1. 2
 2. 6
 3. 3
 4. 9

Question ID : 264330169654
 Option 1 ID : 264330665315
 Option 2 ID : 264330665317
 Option 3 ID : 264330665316
 Option 4 ID : 264330665318
 Status : Answered
 Chosen Option : 2

Q.13 Select the Venn diagram that best illustrates the relationship between the following classes.

Europe, United Kingdom, London

Ans



Question ID : 264330132030

Option 1 ID : 264330517216

Option 2 ID : 264330517215

Option 3 ID : 264330517218

Option 4 ID : 264330517217

Status : Answered

Chosen Option : 4

Q.14 'Z @ A' means 'Z is the son of A'.

'Z * A' means 'Z is the brother of A'.

'Z x A' means 'Z is the father of A'.

'Z # A' means 'Z is the sister of A'.

'Z \$ A' means 'Z is the daughter of A'.

'Z = A' means 'Z is the mother of A'.

How is A related to Y in the following expression?

A * S = J @ M x Y

Ans ✗ 1. A is the father of Y.

✗ 2. A is the brother of Y.

✓ 3. A is the brother of Y's mother.

✗ 4. A is the cousin of Y.

Question ID : 26433057298

Option 1 ID : 264330224179

Option 2 ID : 264330224176

Option 3 ID : 264330224177

Option 4 ID : 264330224178

Status : Answered

Chosen Option : 3

Q.15 Which letter-cluster will replace the question mark (?) to complete the given series?
ZFKQ, BCMN, ?, FWQH, HTSE

- Ans
- 1. DZPJ
 - 2. DBOM
 - 3. DAOL
 - 4. DZOK

Question ID : 26433076663
Option 1 ID : 264330300719
Option 2 ID : 264330300718
Option 3 ID : 264330300717
Option 4 ID : 264330300716
Status : Answered
Chosen Option : 4

Q.16 If '+' means '÷', '-' means '+', 'x' means '-' and '÷' means 'x', then what will come in place of (?) in the given equation?

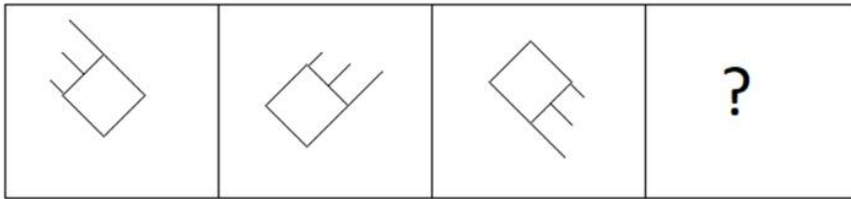
$$8 \div 5 - 5 \times 10 + 2 = ?$$

- Ans
- 1. 40
 - 2. 30
 - 3. 35
 - 4. 45

Question ID : 26433091648
Option 1 ID : 264330359958
Option 2 ID : 264330359960
Option 3 ID : 264330359957
Option 4 ID : 264330359959
Status : Answered
Chosen Option : 1

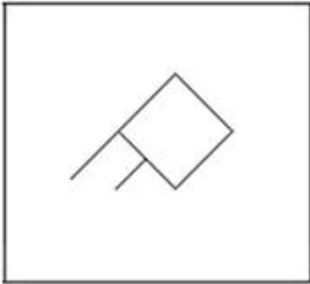
Prepare 50% Faster

Q.17 Select the figure that will come next in the following figure series.

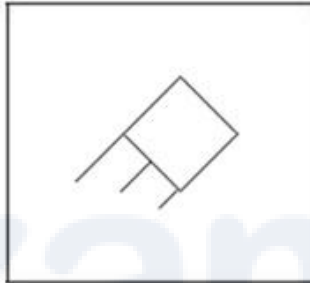


Ans

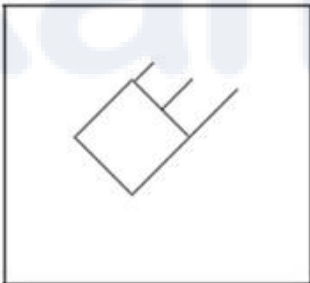
✗ 1.



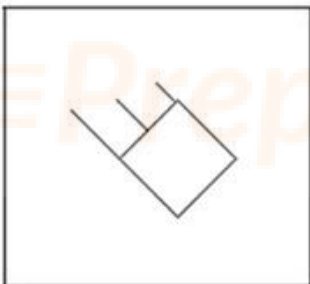
✓ 2.



✗ 3.



✗ 4.



Question ID : 26433087071

Option 1 ID : 264330341927

Option 2 ID : 264330341928

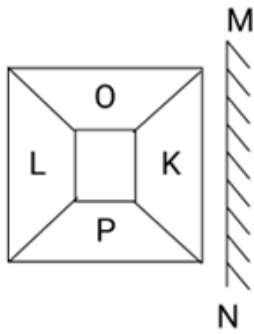
Option 3 ID : 264330341926

Option 4 ID : 264330341925

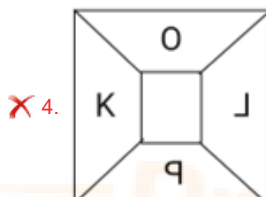
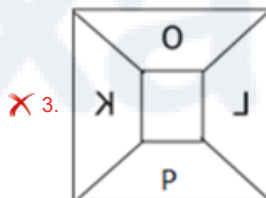
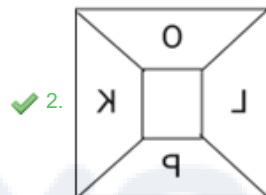
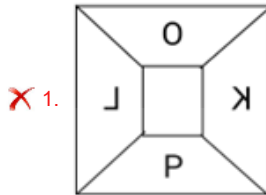
Status : Answered

Chosen Option : 2

Q.18 Select the correct mirror image of the given pattern when the mirror is placed at 'MN' as shown below.



Ans



Question ID : 264330134117

Option 1 ID : 264330525492

Option 2 ID : 264330525491

Option 3 ID : 264330525493

Option 4 ID : 264330525494

Status : Answered

Chosen Option : 2

Q.19 F is the brother of J. E is the sister of D. K is the sister of L. D is the son of L. J is the father of E. How is D related to F?

Ans ✗ 1. Sister's husband

✓ 2. Brother's son

✗ 3. Wife

✗ 4. Brother's daughter

Question ID : 264330126019

Option 1 ID : 264330493749

Option 2 ID : 264330493751

Option 3 ID : 264330493750

Option 4 ID : 264330493748

Status : Answered

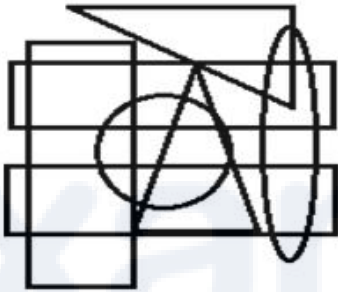
Chosen Option : 4

Q.20 In a certain code language, 'EDUCATION' is written as 'FCVBBSJNO' and 'MICROSOFT' is written as 'NHDQPRPEU'. How will 'SEMICIRCLE' be written in that language?

- Ans
- ✓ 1. TDNHDSBMD
 - ✗ 2. TDNHDSBFM
 - ✗ 3. TDHNDHSFBD
 - ✗ 4. TDNHDSBFD

Question ID : 26433070268
Option 1 ID : 264330275548
Option 2 ID : 264330275551
Option 3 ID : 264330275550
Option 4 ID : 264330275549
Status : Answered
Chosen Option : 1

Q.21 Select the option figure which is embedded in the given figure as its part (rotation is NOT allowed).



- Ans
- ✓ 1.
 - ✗ 2.
 - ✗ 3.
 - ✗ 4.

Question ID : 264330145464
Option 1 ID : 264330570112
Option 2 ID : 264330570111
Option 3 ID : 264330570114
Option 4 ID : 264330570113
Status : Answered
Chosen Option : 1

Q.22 Select the option that is related to the third word in the same way as the second word is related to the first word.

(The words must be considered as meaningful words and must not be related to each other based on the number of letters/number of consonants/vowels in the word.)

Pedal : Bicycle :: Oar : ?

- Ans
- 1. Car
 - 2. Television
 - 3. Canoe
 - 4. Motorcycle

Question ID : 26433087294
Option 1 ID : 264330342813
Option 2 ID : 264330342816
Option 3 ID : 264330342814
Option 4 ID : 264330342815
Status : Answered
Chosen Option : 3

Q.23 P is to the north of Q. T is to the east of Q and S is to the east of P. S is to the north-east of T and south-west of R. What is the position of R with respect to Q? (All positions are arranged in GRID pattern)

- Ans
- 1. North-east
 - 2. South-west
 - 3. East
 - 4. South

Question ID : 26433068362
Option 1 ID : 264330267962
Option 2 ID : 264330267963
Option 3 ID : 264330267961
Option 4 ID : 264330267960
Status : Answered
Chosen Option : 1

Q.24 Choose one of the following correct combinations of mathematical signs which can be filled to balance the following equation.

$$86 \bigcirc 42 \bigcirc 12 \bigcirc 3 \bigcirc 12 \bigcirc 3 \bigcirc 4$$

- Ans
- 1. +, -, +, x, =, +
 - 2. -, -, +, =, x, +
 - 3. -, +, +, x, =, +
 - 4. -, +, x, =, +, +

Question ID : 264330129642
Option 1 ID : 264330507935
Option 2 ID : 264330507936
Option 3 ID : 264330507937
Option 4 ID : 264330507934
Status : Answered
Chosen Option : 2

Q.25 Six students are sitting around a circular table facing the centre. A is an immediate neighbour of both E and D. E sits third to the right of C. D sits third to the left of F. E is an immediate neighbour of F. B sits second to the left of E. Who is the immediate neighbour of both A and C?

- Ans
- 1. E
 - 2. D
 - 3. F
 - 4. B

Question ID : 26433068168

Option 1 ID : 264330267187

Option 2 ID : 264330267184

Option 3 ID : 264330267185

Option 4 ID : 264330267186

Status : Answered

Chosen Option : 2

Q.26 If '+' means '-', '-' means '+', '÷' means 'x' and 'x' means '+', then what will come in place of the (?) in the following equation?
 $15 \times 30 + 15 - 3 \div 2 = ?$

- Ans
- 1. 15
 - 2. 30
 - 3. 35
 - 4. 40

Question ID : 264330114249

Option 1 ID : 264330449081

Option 2 ID : 264330449082

Option 3 ID : 264330449083

Option 4 ID : 264330449084

Status : Answered

Chosen Option : 3

Q.27 Which of the following terms will replace the question mark (?) in the given series?
HKOE , KNOE , ? , QTOE , TWOE

- Ans
- 1. NQOE
 - 2. QNOE
 - 3. NQEO
 - 4. NOQE

Question ID : 264330102492

Option 1 ID : 264330402397

Option 2 ID : 264330402398

Option 3 ID : 264330402399

Option 4 ID : 264330402400

Status : Answered

Chosen Option : 1

Q.28 उस विकल्प का चयन कीजिए, जो तीसरे शब्द से उसी प्रकार संबंधित है, जिस प्रकार दूसरा शब्द पहले शब्द से संबंधित है। (शब्दों को अर्थपूर्ण शब्दों के रूप में माना जाना चाहिए, और वह शब्द में अक्षरों की संख्या/व्यंजनों/स्वरों की संख्या के आधार पर एक-दूसरे से संबंधित नहीं होना चाहिए।)

इच्छा करना (Yearn) : लालसा करना (Crave) :: फुर्ती (Haste) : ?

- Ans
- 1. तत्परता (Alacrity)
 - 2. तरसना (Hanker)
 - 3. विलंब (Delay)
 - 4. विश्राम (Leisure)

Question ID : 264330145399
 Option 1 ID : 264330569854
 Option 2 ID : 264330569851
 Option 3 ID : 264330569852
 Option 4 ID : 264330569853
 Status : Answered
 Chosen Option : 1

Q.29 Select the set in which the numbers are related in the same way as are the numbers of the following sets.

(NOTE : Operations should be performed on the whole numbers, without breaking down the numbers into its constituent digits. E.g. 13- Operations on 13 such as adding /subtracting /multiplying etc. to 13 can be performed. Breaking down 13 into 1 and 3 and then performing mathematical operations on 1 and 3 is not allowed.)

(23, 6, 35)
 (13, 5, 23)

- Ans
- 1. (24, 5, 33)
 - 2. (16, 4, 20)
 - 3. (25, 8, 41)
 - 4. (13, 7, 28)

Question ID : 26433057444
 Option 1 ID : 264330224762
 Option 2 ID : 264330224760
 Option 3 ID : 264330224763
 Option 4 ID : 264330224761
 Status : Answered
 Chosen Option : 3

Q.30 If '+' means '-', '-' means 'x', 'x' means '÷' and '÷' means '+', what will come in place of '?' in the following equation?

$$42 \times 6 - 7 \div 13 + 28 = ?$$

- Ans
- 1. 43
 - 2. 27
 - 3. 34
 - 4. 39

Question ID : 264330101146
 Option 1 ID : 264330397132
 Option 2 ID : 264330397129
 Option 3 ID : 264330397130
 Option 4 ID : 264330397131
 Status : Answered
 Chosen Option : 3

Q.31 In a certain code language, 'GRAPE' is coded as 21-54-3-48-15 and 'MELON' is coded as 39-15-36-45-42. How will 'PEACH' be coded in the same language?

- Ans
- 1. 48-15-3-8-27
 - 2. 48-15-3-9-24
 - 3. 49-15-3-9-27
 - 4. 45-16-3-9-24

Question ID : 264330132208
Option 1 ID : 264330517927
Option 2 ID : 264330517928
Option 3 ID : 264330517930
Option 4 ID : 264330517929
Status : Answered
Chosen Option : 2

Q.32 Which number will replace the question mark (?) in the following series?
6, 20, 42, ?, 110, 156

- Ans
- 1. 80
 - 2. 72
 - 3. 50
 - 4. 64

Question ID : 26433067831
Option 1 ID : 264330265836
Option 2 ID : 264330265837
Option 3 ID : 264330265839
Option 4 ID : 264330265838
Status : Not Answered
Chosen Option : --

Q.33 Which of the following numbers will replace the question mark (?) in the given series?
473, 517, 561, ?, 649, 693

- Ans
- 1. 607
 - 2. 598
 - 3. 603
 - 4. 605

Question ID : 26433067627
Option 1 ID : 264330265022
Option 2 ID : 264330265020
Option 3 ID : 264330265021
Option 4 ID : 264330265023
Status : Answered
Chosen Option : 4

Q.34 Select the option that represents the letters which, when sequentially placed from left to right in the blanks below, will complete the letter series.

_ L _ _ K S _ T U _ S L _ _ K

- Ans
- 1. LUSKTUK
 - 2. UTSKTLU
 - 3. STULKU
 - 4. KTULUTS

Question ID : 26433086953
Option 1 ID : 264330341454
Option 2 ID : 264330341453
Option 3 ID : 264330341455
Option 4 ID : 264330341456
Status : Answered
Chosen Option : 3

Q.35 Select the option that represents the correct order of the given words as they would appear in an English dictionary?

1. Flint
2. Flec
3. Flaw
4. Fleet
5. Flight

- Ans
- 1. 3, 5, 4, 2, 1
 - 2. 2, 3, 4, 5, 1
 - 3. 3, 2, 4, 5, 1
 - 4. 3, 4, 2, 5, 1

Question ID : 26433067248
Option 1 ID : 264330263504
Option 2 ID : 264330263506
Option 3 ID : 264330263505
Option 4 ID : 264330263507
Status : Answered
Chosen Option : 3

Prepare 50% Faster

Q.36 Which figure from the given options would replace the question mark (?) if the following figure series were to be continued?

○	↑	□	2	2	○	↑	□	
B	T	△	△	B	T	T	△	B
2		□	↑	○	□	↑	○	2
								?

Ans

✗ 1.

○		↑
B	T	△
2		□

✓ 2.

□		2
△	B	T
↑		○

✗ 3.

○		↑
△	B	T
2		□

✗ 4.

□		2
B	T	△
↑		○

Question ID : 264330145481

Option 1 ID : 264330570181

Option 2 ID : 264330570179

Option 3 ID : 264330570180

Option 4 ID : 264330570182

Status : Answered

Chosen Option : 3

Q.37 Select the set in which the numbers are related in the same way as are the numbers of the following set.

(NOTE : Operations should be performed on the whole numbers, without breaking down the numbers into its constituent digits. E.g. 13 – Operations on 13 such as adding /subtracting /multiplying etc. to 13 can be performed. Breaking down 13 into 1 and 3 and then performing mathematical operations on 1 and 3 is NOT allowed)

(2, 5, 341)
(1, 7, 510)

- Ans 1. (8,2,140)
 2. (1,2,25)
 3. (2,5,56)
 4. (3,6,64)

Question ID : 264330145323

Option 1 ID : 264330569547

Option 2 ID : 264330569549

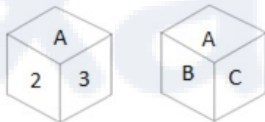
Option 3 ID : 264330569550

Option 4 ID : 264330569548

Status : Answered

Chosen Option : 2

Q.38 Six characters A, B, C, 1, 2 and 3 are written on different faces of a dice. Two positions of this dice are shown in the figure. Find the character on the face opposite to C.



- Ans 1. 2
 2. 1
 3. 3
 4. B

Question ID : 264330109201

Option 1 ID : 264330429081

Option 2 ID : 264330429084

Option 3 ID : 264330429083

Option 4 ID : 264330429082

Status : Answered

Chosen Option : 3

Q.39 Given below are two statements and two conclusions. Take the statements to be true even if they are at variance with commonly known facts, and decide whether the conclusion(s) follow(s) the given statements.

Statements:

Some dates are hazelnuts.

All hazelnuts are walnuts.

Conclusions:

I. Some dates are walnuts.

II. Some walnuts are hazelnuts.

Ans 1. Both the conclusions follow

2. Only conclusion I follows

3. Neither conclusion I nor II follows

4. Only conclusion II follows

Question ID : 26433056646

Option 1 ID : 264330221570

Option 2 ID : 264330221568

Option 3 ID : 264330221571

Option 4 ID : 264330221569

Status : Answered

Chosen Option : 1

Q.40 Pooja drives 4 km towards east from point A. She takes a right turn and drives 2 km. Then she takes a left turn and drives 3 km. Again, she takes a left turn and drives 2 km to reach point B. How far and towards which direction should she drive now in order to reach point A again?

Ans 1. 7 km towards west

2. 4 km towards south

3. 4 km towards east

4. 5 km towards north

Question ID : 26433091676

Option 1 ID : 264330360071

Option 2 ID : 264330360069

Option 3 ID : 264330360072

Option 4 ID : 264330360070

Status : Answered

Chosen Option : 1

Q.41 In this question, three statements are given, followed by two conclusions numbered I and II. Assuming the statements to be true, even if they seem to be at variance with commonly known facts, decide which of the conclusions logically follows/follow from the statements.

Statements:

I. All teas are coffees.

II. All coffees are beverages.

III. Some teas are drinks

Conclusions:

I. All teas are beverages.

II. No drink is a coffee.

Ans 1. Only conclusion I follows

2. Only conclusion II follows

3. Both conclusions I and II follow

4. Neither conclusion I nor II follows

Question ID : 264330104075

Option 1 ID : 264330408601

Option 2 ID : 264330408602

Option 3 ID : 264330408603

Option 4 ID : 264330408604

Status : Answered

Chosen Option : 1

Q.42 Given below are two statements and two conclusions. Take the statements to be true even if they are at variance with commonly known facts, and decide whether the conclusion(s) follow(s) the given statements.

Statements:

All irons are coppers.

All coppers are aluminiums.

Conclusions:

I. Some aluminiums are irons

II. Some aluminiums are coppers

- Ans**
- 1. Only conclusion II follows
 - 2. Neither conclusion I nor II follows
 - 3. Only conclusion I follows
 - 4. Both the conclusions follow

Question ID : 26433056641
 Option 1 ID : 264330221549
 Option 2 ID : 264330221551
 Option 3 ID : 264330221548
 Option 4 ID : 264330221550
 Status : Answered
 Chosen Option : 4

Q.43 Select the correct option that indicates the arrangement of the given words in the order in which they appear in an English dictionary.

1. Desperate
2. Desolate
3. Destruction
4. Desire
5. Descend
6. Destination

- Ans**
- 1. 5, 4, 2, 1, 3, 6
 - 2. 5, 4, 1, 6, 2, 3
 - 3. 5, 4, 2, 1, 6, 3
 - 4. 5, 4, 1, 2, 6, 3

Question ID : 264330145379
 Option 1 ID : 264330569773
 Option 2 ID : 264330569771
 Option 3 ID : 264330569772
 Option 4 ID : 264330569774
 Status : Answered
 Chosen Option : 3

Q.44 In a certain code language, 'YATCH' is coded as 67 and 'DINE' is coded as 40. How will 'MANGO' be coded in that language?

- Ans**
- 1. 57
 - 2. 60
 - 3. 62
 - 4. 65

Question ID : 26433074707
 Option 1 ID : 264330292917
 Option 2 ID : 264330292918
 Option 3 ID : 264330292919
 Option 4 ID : 264330292916
 Status : Answered
 Chosen Option : 2

Q.45 Which of the given figures when placed in the 5th position would continue the series that is established by the first four figures?

M	+	W	S	+
S	2	+	M	2

1 2 3 4

Ans

✗ 1.

M	S
	+

✓ 2.

S	M
	+

✗ 3.

M	+
	S

✗ 4.

S	W
	+

Question ID : 26433087308

Option 1 ID : 264330342871

Option 2 ID : 264330342870

Option 3 ID : 264330342869

Option 4 ID : 264330342872

Status : Answered

Chosen Option : 2

Q.46 If '+' means '-', '-' means 'x', 'x' means '÷' and '÷' means '+', what will come in place of '?' in the following equation?
 $45 - 3 \div 144 \times 12 + 38 = ?$

- Ans
- 1. 123
 - 2. 109
 - 3. 91
 - 4. 95

Question ID : 264330101153
Option 1 ID : 264330397159
Option 2 ID : 264330397158
Option 3 ID : 264330397160
Option 4 ID : 264330397157
Status : Answered
Chosen Option : 2

Q.47 Three of the following letter-clusters are alike in some manner and one is different.
Select the one that is different.

- Ans
- 1. OKNL
 - 2. JQAZ
 - 3. FBEC
 - 4. HDGE

Question ID : 264330145347
Option 1 ID : 264330569643
Option 2 ID : 264330569644
Option 3 ID : 264330569645
Option 4 ID : 264330569646
Status : Answered
Chosen Option : 2

Q.48 In a certain code language, 'STORY' is coded as '97' and 'PULL' is coded as '61'. How will 'INCOME' be coded in that language?

- Ans
- 1. 54
 - 2. 49
 - 3. 59
 - 4. 47

Question ID : 26433079044
Option 1 ID : 264330310183
Option 2 ID : 264330310180
Option 3 ID : 264330310181
Option 4 ID : 264330310182
Status : Answered
Chosen Option : 3

Q.49 Which of the following numbers will replace the question mark (?) in the given series

32, 32, 32, 34, ?, 106, 530

- Ans
- 1. 96
 - 2. 38
 - 3. 102
 - 4. 34

Question ID : 264330145336
Option 1 ID : 264330569599
Option 2 ID : 264330569600
Option 3 ID : 264330569602
Option 4 ID : 264330569601
Status : Not Answered
Chosen Option : --

Q.50 Which two signs should be interchanged to make the given equation correct?

$$729 \times 9 - (56 - 6) \times 5 \div 2 + 152 \times 19 = 69$$

- Ans
- 1. \times and $+$
 - 2. \times and $-$
 - 3. $+$ and $-$
 - 4. $+$ and $-$

Question ID : 264330145337
Option 1 ID : 264330569603
Option 2 ID : 264330569605
Option 3 ID : 264330569606
Option 4 ID : 264330569604
Status : Answered
Chosen Option : 2

Section : General Knowledge and General Awareness

Q.1 Ashtadhyayi, is a Sanskrit treatise on grammar, written in the 6th to 5th century BCE by _____.

- Ans
- 1. Panini
 - 2. Patanjali
 - 3. Agastya
 - 4. Vishvamitra

Question ID : 264330165550
Option 1 ID : 264330649282
Option 2 ID : 264330649280
Option 3 ID : 264330649279
Option 4 ID : 264330649281
Status : Answered
Chosen Option : 1

Q.2 The provision of fundamental duties in the Indian Constitution is inspired by _____.

- Ans
- 1. the constitution of USSR
 - 2. the constitution of France
 - 3. the constitution of Canada
 - 4. the constitution of USA

Question ID : 264330111510
Option 1 ID : 264330438125
Option 2 ID : 264330438128
Option 3 ID : 264330438127
Option 4 ID : 264330438126
Status : Answered
Chosen Option : 1

Q.3 Which of the following is NOT included in inventory investment when calculating national income?

- Ans
- 1. Change in sales during the year
 - 2. Change in stock of raw material
 - 3. Change in stock of semi-finished goods
 - 4. Change in stock of finished goods

Question ID : 264330120865
Option 1 ID : 264330473678
Option 2 ID : 264330473677
Option 3 ID : 264330473676
Option 4 ID : 264330473675
Status : Not Answered
Chosen Option : --

Q.4 The _____ birth rate indicates the number of live births occurring during the year per 1000 population estimated at midyear.

- Ans
- 1. crude
 - 2. positive
 - 3. negative
 - 4. neutral

Question ID : 264330163246
Option 1 ID : 264330640298
Option 2 ID : 264330640296
Option 3 ID : 264330640297
Option 4 ID : 264330640295
Status : Not Answered
Chosen Option : --

Q.5 The shape of a basketball court is a _____.

- Ans
- 1. square
 - 2. rectangle
 - 3. triangle
 - 4. circle

Question ID : 264330109852
Option 1 ID : 264330431685
Option 2 ID : 264330431686
Option 3 ID : 264330431688
Option 4 ID : 264330431687
Status : Answered
Chosen Option : 4

Q.6 Under which Article of the Indian Constitution shall the executive power of the Union be vested in the President?

- Ans 1. Article 53
 2. Article 55
 3. Article 58
 4. Article 56

Question ID : 264330114494

Option 1 ID : 264330450061

Option 2 ID : 264330450062

Option 3 ID : 264330450064

Option 4 ID : 264330450063

Status : Answered

Chosen Option : 1

Q.7 आप उस प्रकार की दवाओं को क्या कहते हैं, जो ग्राही (receptor) को स्विच ऑन करके प्राकृतिक संदेशवाहक (natural messenger) की प्रतिकृति करती हैं?

- Ans 1. प्रति-अवसादक (Antidepressants)
 2. एगोनिस्ट (Agonist)
 3. अवसादक (Depressants)
 4. एंटागोनिस्ट (Antagonist)

Question ID : 264330145209

Option 1 ID : 264330569094

Option 2 ID : 264330569093

Option 3 ID : 264330569091

Option 4 ID : 264330569092

Status : Not Answered

Chosen Option : --

Q.8 In which of the following years did the government opt for a plan holiday after the seventh five-year plan?

- Ans 1. From 1991 to 1993
 2. From 1990 to 1992
 3. From 1992 to 1993
 4. From 1989 to 1991

Question ID : 264330145226

Option 1 ID : 264330569160

Option 2 ID : 264330569161

Option 3 ID : 264330569162

Option 4 ID : 264330569159

Status : Not Answered

Chosen Option : --

Q.9 Which of the following did NOT emerge as a result of disintegration of the Bahmani kingdom during the 16th century?

- Ans 1. Ahmadnagar
 2. Gaur
 3. Golconda
 4. Bidar

Question ID : 264330106564
Option 1 ID : 264330418558
Option 2 ID : 264330418560
Option 3 ID : 264330418559
Option 4 ID : 264330418557
Status : Not Answered
Chosen Option : --

Q.10 When was the 8th round of the General Agreement on Tariffs and Trade (GATT), the so-called 'Uruguay Round' which led to the establishment of World Trade Organization (WTO) completed?

- Ans 1. 1993
 2. 1994
 3. 1991
 4. 1992

Question ID : 26433064581
Option 1 ID : 264330252918
Option 2 ID : 264330252919
Option 3 ID : 264330252916
Option 4 ID : 264330252917
Status : Not Answered
Chosen Option : --

Q.11 In which of the following languages is 'Childhood Days - A Memoir' by Satyajit Ray written?

- Ans 1. Hindi
 2. Telugu
 3. Kannada
 4. Bengali

Question ID : 264330145183
Option 1 ID : 264330568988
Option 2 ID : 264330568989
Option 3 ID : 264330568990
Option 4 ID : 264330568987
Status : Not Answered
Chosen Option : --

Q.12 Which of the following dance forms originated in Southeastern India?

- Ans
- 1. Chhau
 - 2. Sattriya
 - 3. Kathak
 - 4. Kuchipudi

Question ID : 26433064643
Option 1 ID : 264330253167
Option 2 ID : 264330253166
Option 3 ID : 264330253164
Option 4 ID : 264330253165
Status : Not Answered
Chosen Option : --

Q.13 Where is Red Lake found?

- Ans
- 1. USA
 - 2. UK
 - 3. China
 - 4. Japan

Question ID : 26433064474
Option 1 ID : 264330252490
Option 2 ID : 264330252491
Option 3 ID : 264330252488
Option 4 ID : 264330252489
Status : Not Answered
Chosen Option : --

Q.14 How many fundamental duties are listed in the Indian Constitution as of 2022?

- Ans
- 1. 13
 - 2. 10
 - 3. 12
 - 4. 11

Question ID : 264330113380
Option 1 ID : 264330445608
Option 2 ID : 264330445605
Option 3 ID : 264330445607
Option 4 ID : 264330445606
Status : Not Answered
Chosen Option : --

Q.15 Which of the following is NOT an example of small savings?

- Ans
- 1. Mutual Funds
 - 2. National Savings Certificates
 - 3. Kisan Vikas Patras
 - 4. Post Office Deposits

Question ID : 264330145238
Option 1 ID : 264330569209
Option 2 ID : 264330569207
Option 3 ID : 264330569210
Option 4 ID : 264330569208
Status : Not Answered
Chosen Option : --

Q.16 _____ land is suitable for cropping on a regular basis.

- Ans
- 1. Urban
 - 2. Barren
 - 3. Arable
 - 4. Marginal

Question ID : 264330163191
Option 1 ID : 264330640075
Option 2 ID : 264330640076
Option 3 ID : 264330640077
Option 4 ID : 264330640078
Status : Not Answered
Chosen Option : --

Q.17 Who among the following had written the novel Coolie, that concentrated on social misery caused by inhumanity?

- Ans
- 1. RK Narayan
 - 2. Vijay Tendulkar
 - 3. VS Naipal
 - 4. Mulk Raj Anand

Question ID : 26433071684
Option 1 ID : 264330281162
Option 2 ID : 264330281163
Option 3 ID : 264330281160
Option 4 ID : 264330281161
Status : Not Answered
Chosen Option : --

Q.18 Which of the following dance forms traces its lineage to the ancient dance of Sadir Attam?

- Ans
- 1. Bharatanatyam
 - 2. Kuchipudi
 - 3. Mohiniyattam
 - 4. Kathakali

Question ID : 264330145146
Option 1 ID : 264330568840
Option 2 ID : 264330568841
Option 3 ID : 264330568839
Option 4 ID : 264330568842
Status : Answered
Chosen Option : 1

Q.19 What percentage of jobs in India are at risk of automation, as per World Bank data, 2016?

- Ans
- 1. 77%
 - 2. 40%
 - 3. 69%
 - 4. 55%

Question ID : 264330111359

Option 1 ID : 264330437521

Option 2 ID : 264330437524

Option 3 ID : 264330437522

Option 4 ID : 264330437523

Status : Not Answered

Chosen Option : --

Q.20 निम्नलिखित में से कौन-सा गोलकृमि है?

- Ans
- 1. प्लैनेरिया (Planaria)
 - 2. एस्केरिस (Ascaris)
 - 3. यकृत पर्णकृमि (Liver fluke)
 - 4. टीनिया (Taenia)

Question ID : 26433082205

Option 1 ID : 264330322656

Option 2 ID : 264330322653

Option 3 ID : 264330322655

Option 4 ID : 264330322654

Status : Not Answered

Chosen Option : --

Q.21 Which of the following indicates the system introduced by Lord Cornwallis granting legal ownership of land to the zamindars in Bengal in order to get a fixed revenue by a fixed date?

- Ans
- 1. The Ryotwari System
 - 2. Mahalwari System
 - 3. Taluqdari System
 - 4. The Permanent Settlement

Question ID : 26433099165

Option 1 ID : 264330389273

Option 2 ID : 264330389276

Option 3 ID : 264330389275

Option 4 ID : 264330389274

Status : Not Answered

Chosen Option : --

Q.22 Vultures are:

- Ans 1. carnivores
 2. omnivores
 3. decomposers
 4. herbivores

Question ID : 26433086613
Option 1 ID : 264330340096
Option 2 ID : 264330340094
Option 3 ID : 264330340093
Option 4 ID : 264330340095
Status : Answered
Chosen Option : 1

Q.23 Which of the following is NOT an example of a minor industrial region of India?

- Ans 1. Durg-Raipur region
 2. Ambala-Amritsar region
 3. Northern Malabar region
 4. Hugli region

Question ID : 264330145256
Option 1 ID : 264330569282
Option 2 ID : 264330569281
Option 3 ID : 264330569280
Option 4 ID : 264330569279
Status : Not Answered
Chosen Option : --

Q.24 Jagjit Singh is associated with which form of singing?

- Ans 1. Ghazal
 2. Thumri
 3. Dhrupad
 4. Tappa

Question ID : 26433074854
Option 1 ID : 264330293507
Option 2 ID : 264330293504
Option 3 ID : 264330293505
Option 4 ID : 264330293506
Status : Answered
Chosen Option : 1

Q.25 By observing the motion of objects on an inclined plane _____ deduced that objects move with a constant speed when no force acts on them.

- Ans 1. Michael Faraday
 2. Johannes Kepler
 3. Galileo
 4. Archimedes

Question ID : 26433055071
Option 1 ID : 264330215270
Option 2 ID : 264330215271
Option 3 ID : 264330215268
Option 4 ID : 264330215269
Status : Not Answered
Chosen Option : --

Q.26 In which type of rainfall, winds move out from a high-pressure area with wind direction clockwise in the northern hemisphere, and anti-clockwise in the southern hemisphere?

- Ans**
- 1. Orography
 - 2. Cyclones
 - 3. Anticyclone
 - 4. Convection

Question ID : 264330111911
Option 1 ID : 264330439732
Option 2 ID : 264330439731
Option 3 ID : 264330439729
Option 4 ID : 264330439730
Status : Not Answered
Chosen Option : --

Q.27 From the given options, choose the one which is NOT a product of the decomposition reaction of Lead nitrate.

- Ans**
- 1. Nitrogen dioxide
 - 2. Oxygen
 - 3. Nitrogen
 - 4. Lead oxide

Question ID : 264330169298
Option 1 ID : 264330663972
Option 2 ID : 264330663973
Option 3 ID : 264330663974
Option 4 ID : 264330663971
Status : Not Answered
Chosen Option : --

Q.28 The Eastern Ghats stretch from the _____ to the Nigiris in the south.

- Ans**
- 1. Damodar Valley
 - 2. Son Valley
 - 3. Mahanadi Valley
 - 4. Godavari Valley

Question ID : 264330119793
Option 1 ID : 264330469449
Option 2 ID : 264330469447
Option 3 ID : 264330469448
Option 4 ID : 264330469450
Status : Not Answered
Chosen Option : --

Q.29 When was the Atmiya Sabha founded to attack the evils within Hinduism?

- Ans**
- 1. 1845
 - 2. 1814
 - 3. 1839
 - 4. 1828

Question ID : 264330112194
Option 1 ID : 264330440864
Option 2 ID : 264330440862
Option 3 ID : 264330440863
Option 4 ID : 264330440861
Status : Not Answered
Chosen Option : --

Q.30 The 'Servants of India Society' was the brainchild of which of the following leaders?

Ans 1. Chittaranjan Das

2. Gopal Krishna Gokhale

3. BR Ambedkar

4. Lala Lajpat Rai

Question ID : 264330165392

Option 1 ID : 264330648648

Option 2 ID : 264330648647

Option 3 ID : 264330648649

Option 4 ID : 264330648650

Status : Not Answered

Chosen Option : --

Q.31 The President of which of the following countries was invited as the Chief Guest for the Republic Day parade on 26 January 2020?

Ans 1. New Zealand

2. Australia

3. Brazil

4. Indonesia

Question ID : 26433070819

Option 1 ID : 264330277725

Option 2 ID : 264330277726

Option 3 ID : 264330277724

Option 4 ID : 264330277727

Status : Not Answered

Chosen Option : --

Q.32 1 kilowatt is equivalent to:

Ans 1. 3600 KJ/h

2. 3600 calorie

3. 7200 KJ/h

4. 7200 Joule

Question ID : 264330131763

Option 1 ID : 264330516151

Option 2 ID : 264330516153

Option 3 ID : 264330516152

Option 4 ID : 264330516154

Status : Not Answered

Chosen Option : --

Q.33 The star-shaped temples were built during the reign of:

Ans 1. Chalukaya

2. Badami

3. Cholas

4. Hoysala

Question ID : 264330164855

Option 1 ID : 264330646548

Option 2 ID : 264330646547

Option 3 ID : 264330646550

Option 4 ID : 264330646549

Status : Not Answered

Chosen Option : --

Q.34 Hara Shankar Bhattacharya is a maestro of _____.

- Ans 1. sitar
 2. sarangi
 3. violin
 4. santoor

Question ID : 264330145186
Option 1 ID : 264330569001
Option 2 ID : 264330569000
Option 3 ID : 264330569002
Option 4 ID : 264330568999
Status : Not Answered
Chosen Option : --

Q.35 Which radioactive element with atomic number 43 in the modern periodic table is unstable, and the half-lives of all its isotopes are relatively short, from 4.2 million years to 5.0 s?

- Ans 1. Nobelium
 2. Promethium
 3. Neptunium
 4. Technetium

Question ID : 264330110064
Option 1 ID : 264330432536
Option 2 ID : 264330432533
Option 3 ID : 264330432535
Option 4 ID : 264330432534
Status : Not Answered
Chosen Option : --

Q.36 The Himalayas have been divided on the basis of regions from west to east. The correct order of regions from west to east is:

- Ans 1. Punjab Himalayas, Nepal Himalayas, Kumaon Himalayas and Assam Himalayas
 2. Punjab Himalayas, Kumaon Himalayas, Nepal Himalayas and Assam Himalayas
 3. Punjab Himalayas, Kumaon Himalayas, Assam Himalayas and Nepal Himalayas
 4. Punjab Himalayas, Nepal Himalayas, Assam Himalayas and Kumaon Himalayas

Question ID : 264330169318
Option 1 ID : 264330664053
Option 2 ID : 264330664054
Option 3 ID : 264330664052
Option 4 ID : 264330664051
Status : Not Answered
Chosen Option : --

Q.37 How many times has India won the ICC T20 Men's World Cup in cricket?

- Ans 1. 3
 2. 2
 3. 1
 4. 4

Question ID : 26433071373
Option 1 ID : 264330279918
Option 2 ID : 264330279917
Option 3 ID : 264330279916
Option 4 ID : 264330279919
Status : Not Answered
Chosen Option : --

Q.38 Which chemical element of Group 18 of the periodic table is produced by the natural radioactive decay of uranium in soils and rocks?

- Ans
- 1. Oganesson
 - 2. Krypton
 - 3. Radon
 - 4. Neon

Question ID : 264330110061
Option 1 ID : 264330432523
Option 2 ID : 264330432522
Option 3 ID : 264330432524
Option 4 ID : 264330432521
Status : Not Answered
Chosen Option : --

Q.39 Chad Sukra festival is celebrated by the Jaintia tribe of _____.

- Ans
- 1. Jharkhand
 - 2. Assam
 - 3. Punjab
 - 4. Meghalaya

Question ID : 26433086641
Option 1 ID : 264330340208
Option 2 ID : 264330340207
Option 3 ID : 264330340205
Option 4 ID : 264330340206
Status : Answered
Chosen Option : 4

Q.40 Which of the following industries was NOT in Schedule A of Industrial Policy 1956?

- Ans
- 1. Air transport
 - 2. Mining of salt
 - 3. Mineral oils
 - 4. Iron and steel

Question ID : 264330141497
Option 1 ID : 264330554325
Option 2 ID : 264330554326
Option 3 ID : 264330554324
Option 4 ID : 264330554323
Status : Not Answered
Chosen Option : --

Q.41 Which Article of the Constitution of India states that the Prime Minister is appointed by the President of India?

- Ans
- 1. Article 73
 - 2. Article 75
 - 3. Article 74
 - 4. Article 76

Question ID : 264330130471
Option 1 ID : 264330510995
Option 2 ID : 264330510997
Option 3 ID : 264330510996
Option 4 ID : 264330510998
Status : Answered
Chosen Option : 3

Q.42 Ammannur Madhava Chakyar was conferred the Padma Shri for his contribution to which of the following dance forms?

- Ans 1. Kutiyattam
 2. Kuchipudi
 3. Kathakali
 4. Yakshagana

Question ID : 264330145160
Option 1 ID : 264330568895
Option 2 ID : 264330568898
Option 3 ID : 264330568897
Option 4 ID : 264330568896
Status : Not Answered
Chosen Option : --

Q.43 Which cell organelle appears as rounded or sausage-shaped structures under electron microscopy, measuring about 0.5-1.0 μm in diameter and 2-8 μm in length?

- Ans 1. Ribosomes
 2. Lysosomes
 3. Mitochondria
 4. Plastids

Question ID : 264330145196
Option 1 ID : 264330569039
Option 2 ID : 264330569041
Option 3 ID : 264330569042
Option 4 ID : 264330569040
Status : Not Answered
Chosen Option : --

Q.44 When was Khandesh merged into the Mughal empire by Akbar?

- Ans 1. 1601
 2. 1595
 3. 1597
 4. 1605

Question ID : 264330109022
Option 1 ID : 264330428367
Option 2 ID : 264330428365
Option 3 ID : 264330428368
Option 4 ID : 264330428366
Status : Not Answered
Chosen Option : --

Q.45 How many types of the amendment are mentioned by the Indian Constitution as per Article 368?

- Ans 1. Five
 2. Four
 3. Two
 4. Three

Question ID : 264330118523
Option 1 ID : 264330465493
Option 2 ID : 264330465494
Option 3 ID : 264330465496
Option 4 ID : 264330465495
Status : Not Answered
Chosen Option : --

Q.46 In the game of Ice hockey, during normal play how many players are there in each team on the ice at any one time to compete?

- Ans
- 1. 12
 - 2. 6
 - 3. 10
 - 4. 5

Question ID : 26433089942
Option 1 ID : 264330353247
Option 2 ID : 264330353245
Option 3 ID : 264330353246
Option 4 ID : 264330353248
Status : Not Answered
Chosen Option : --

Q.47 Siachen in Himalayas is:

- Ans
- 1. a glacier
 - 2. a national park
 - 3. a dam
 - 4. a lake

Question ID : 264330169991
Option 1 ID : 264330666640
Option 2 ID : 264330666641
Option 3 ID : 264330666639
Option 4 ID : 264330666642
Status : Answered
Chosen Option : 1

Q.48 Maimata is a popular folk dance of which of the following states?

- Ans
- 1. Tripura
 - 2. Uttarakhand
 - 3. Haryana
 - 4. Punjab

Question ID : 264330164794
Option 1 ID : 264330646306
Option 2 ID : 264330646303
Option 3 ID : 264330646304
Option 4 ID : 264330646305
Status : Not Answered
Chosen Option : --

Q.49 To which feature of the Constitution of India does the appointment of the Governor by the Centre belong?

- Ans
- 1. Federal feature
 - 2. Directive Principles
 - 3. Supremacy of the Constitution
 - 4. Unitary system

Question ID : 264330145268
Option 1 ID : 264330569330
Option 2 ID : 264330569327
Option 3 ID : 264330569329
Option 4 ID : 264330569328
Status : Answered
Chosen Option : 4

Q.50 The term 'inning' is related to which of the following sports?

- Ans** 1. Volleyball
 2. Kho-Kho
 3. Hockey
 4. Basketball

Question ID : 264330118473

Option 1 ID : 264330465294

Option 2 ID : 264330465295

Option 3 ID : 264330465296

Option 4 ID : 264330465293

Status : Not Answered

Chosen Option : --

Section : Quantitative Aptitude

Q.1 Find the fourth proportional to 0.48, 0.84 and 32.

- Ans** 1. 65
 2. 34
 3. 56
 4. 43

Question ID : 264330103973

Option 1 ID : 264330408194

Option 2 ID : 264330408195

Option 3 ID : 264330408193

Option 4 ID : 264330408196

Status : Answered

Chosen Option : 3

Prepare 50% Faster

Q.2 Study the given table and answer the question that follows.
The table shows data of population and literacy/illiteracy rate among the population in three different villages.

Village	Respective ratio between number of males and females	Percentage of literates (Males and females) out of total population	Number of illiterates (Males and females) out of total population
P	2 : 5	45	380
Q	3 : 7	65	270
R	1 : 3	80	150

The number of illiterates in village R is what percentage less than that in village P?

- Ans
- 1. $60\frac{11}{19}\%$
 - 2. $60\frac{9}{19}\%$
 - 3. $60\frac{10}{19}\%$
 - 4. $60\frac{8}{19}\%$

Question ID : 264330165501

Option 1 ID : 264330649083

Option 2 ID : 264330649085

Option 3 ID : 264330649084

Option 4 ID : 264330649086

Status : Answered

Chosen Option : 3

Q.3 In a circle of radius 42 cm, an arc subtends an angle of 60° at the centre. Find the length of the arc.

(Take $\pi = \frac{22}{7}$)

- Ans
- 1. 44 cm
 - 2. 21 cm
 - 3. 22 cm
 - 4. 42 cm

Question ID : 264330165441

Option 1 ID : 264330648843

Option 2 ID : 264330648846

Option 3 ID : 264330648844

Option 4 ID : 264330648845

Status : Answered

Chosen Option : 1

Q.4 Mihir buys a book for ₹625. However, because of certain urgency, he sells it for ₹550. Find his loss percentage.

- Ans
- 1. 12%
 - 2. 14%
 - 3. 10%
 - 4. 15%

Question ID : 264330102340
Option 1 ID : 264330401826
Option 2 ID : 264330401827
Option 3 ID : 264330401825
Option 4 ID : 264330401828
Status : Answered
Chosen Option : 1

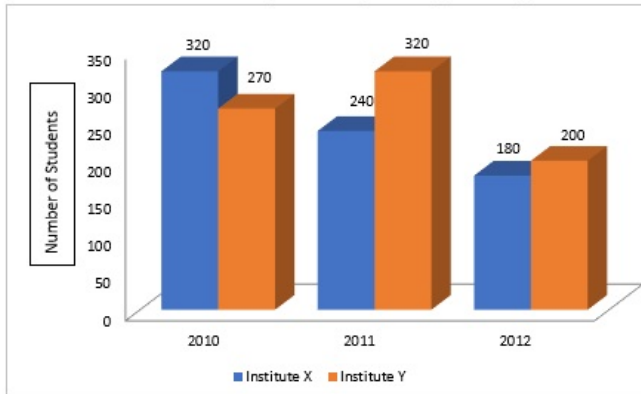
Q.5 The salary of Arpit fell by 5% after 1 year and further fell by 8% after the second year due to bad performance. Initially, his salary was ₹80,000. What is his current salary (in ₹)?

- Ans
- 1. 69620
 - 2. 69920
 - 3. 70920
 - 4. 65720

Question ID : 264330103310
Option 1 ID : 264330405546
Option 2 ID : 264330405547
Option 3 ID : 264330405545
Option 4 ID : 264330405548
Status : Answered
Chosen Option : 2

Prepare 50% Faster

- Q.6** Study the given graph and answer the question that follows.
The graph shows data related to number of students enrolled for a vocational course in two institutes (X and Y) during three years.



What is the difference between the average number of students enrolled in institute X in 2010 and 2011 and that in institute Y in 2011 and 2012?

- Ans** 1. 20
 2. 15
 3. 18
 4. 22

Question ID : 264330158274
 Option 1 ID : 264330620457
 Option 2 ID : 264330620455
 Option 3 ID : 264330620456
 Option 4 ID : 264330620458

Status : Answered

Chosen Option : 1

- Q.7** The total surface area of a solid hemisphere is 4158 cm^2 . Find its volume (in cm^3).

- Ans** 1. 462
 2. 9702
 3. 1848
 4. 19404

Question ID : 264330145109
 Option 1 ID : 264330568692
 Option 2 ID : 264330568691
 Option 3 ID : 264330568693
 Option 4 ID : 264330568694

Status : Answered

Chosen Option : 4

Q.8 The average weight of 8 students is 48 kg. If four students of average weight 44 kg and four students of average weight 58 kg is also added, then find the average weight of 16 students.

- Ans
- 1. 49.5 kg
 - 2. 48 kg
 - 3. 49 kg
 - 4. 48.5 kg

Question ID : 264330165520
Option 1 ID : 264330649162
Option 2 ID : 264330649159
Option 3 ID : 264330649160
Option 4 ID : 264330649161
Status : Answered
Chosen Option : 1

Q.9 Simplify the given expression.

$$(1 - 2x)^2 - (1 + 2x)^2$$

- Ans
- 1. $8x$
 - 2. $-8x$
 - 3. $-(2 + 8x^2)$
 - 4. $2 + 8x^2$

Question ID : 264330157760
Option 1 ID : 264330618401
Option 2 ID : 264330618402
Option 3 ID : 264330618400
Option 4 ID : 264330618399
Status : Answered
Chosen Option : 2

Q.10 The table below shows the number of laptops sold by the 4 sellers and the ratio of Brand1 laptops sold to Brand 2 laptops sold.

Seller	Total laptops sold	Brand1 laptops sold: Brand2 laptops sold
A	4000	3 : 1
B	6000	2 : 1
C	8000	5 : 3
D	5000	1 : 4

The number of Brand1 laptops sold by A seller is how many more than the number of Brand2 laptops sold by B seller?

- Ans
- 1. 1200
 - 2. 800
 - 3. 1000
 - 4. 600

Question ID : 264330167245
Option 1 ID : 264330655977
Option 2 ID : 264330655976
Option 3 ID : 264330655978
Option 4 ID : 264330655975
Status : Answered
Chosen Option : 3

Q.11 A boy goes from home to school at a speed of 30 km/h and returns back at a speed of 70 km/h. What is his average speed for the journey?

- Ans 1. 42 km/h
 2. 48 km/h
 3. 38 km/h
 4. 36 km/h

Question ID : 264330104489
Option 1 ID : 264330410259
Option 2 ID : 264330410257
Option 3 ID : 264330410258
Option 4 ID : 264330410260
Status : Answered
Chosen Option : 1

Q.12 Rupu's income is 20% more than Madhu's income. Madhu's income is less than Rupu's income by:

- Ans 1. $17\frac{2}{3}\%$
 2. 20%
 3. $18\frac{2}{3}\%$
 4. $16\frac{2}{3}\%$

Question ID : 264330145077
Option 1 ID : 264330568565
Option 2 ID : 264330568563
Option 3 ID : 264330568564
Option 4 ID : 264330568566
Status : Answered
Chosen Option : 4

Q.13 What annual instalment (in ₹) will discharge a debt of ₹9,429 due in three years at 12.25% simple interest per annum? [Note: Instalments will be paid at the end of Year 1, Year 2 and Year 3.]

- Ans 1. 2,840
 2. 2800
 3. 2700
 4. 2760

Question ID : 264330112545
Option 1 ID : 264330442265
Option 2 ID : 264330442268
Option 3 ID : 264330442267
Option 4 ID : 264330442266
Status : Not Answered
Chosen Option : --

Q.14 Study the given table and answer the question that follows.
The table shows the number of students studying in 6 different classes of 6 different schools.

Schools	V	VI	VII	VIII	IX	X
P	152	160	145	156	147	144
Q	148	166	150	155	157	143
R	161	152	140	145	143	165
S	159	142	149	140	142	168
T	147	144	158	163	154	150
U	150	160	162	160	160	140
Total	917	924	904	919	903	910

Which class has the minimum number of students from all schools together?

- Ans 1. VIII
 2. IX
 3. VII
 4. X

Question ID : 264330157723

Option 1 ID : 264330618252

Option 2 ID : 264330618253

Option 3 ID : 264330618251

Option 4 ID : 264330618254

Status : Answered

Chosen Option : 2

Q.15 Find the least number which is exactly divisible by 20, 28, 34, 60 and 75.

- Ans 1. 36220
 2. 35900
 3. 34500
 4. 35700

Question ID : 264330102310

Option 1 ID : 264330401706

Option 2 ID : 264330401707

Option 3 ID : 264330401708

Option 4 ID : 264330401705

Status : Answered

Chosen Option : 4

Q.16 The mean proportional between 0.03 and 0.0003 is:

- Ans 1. 0.0003
 2. 0.0013
 3. 0.003
 4. 0.033

Question ID : 264330145037

Option 1 ID : 264330568405

Option 2 ID : 264330568403

Option 3 ID : 264330568404

Option 4 ID : 264330568406

Status : Answered

Chosen Option : 3

Q.17 If $a + b + c = 5$ and $ab + bc + ca = 7$, then the value of $a^3 + b^3 + c^3 - 3abc$ is:

- Ans
- 1. 15
 - 2. 20
 - 3. 25
 - 4. 30

Question ID : 264330157773

Option 1 ID : 264330618451

Option 2 ID : 264330618452

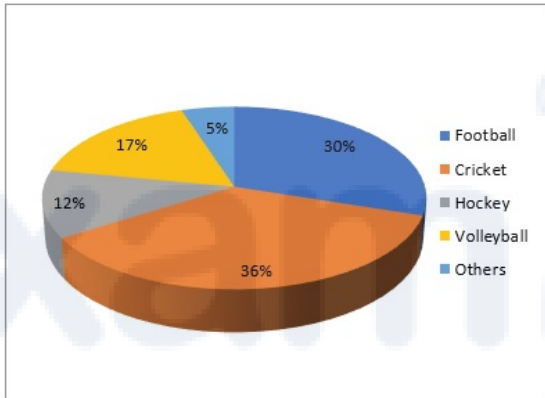
Option 3 ID : 264330618453

Option 4 ID : 264330618454

Status : Answered

Chosen Option : 2

Q.18 The given pie-chart represents the survey report on favourite games of a group of young people.



If a total of 4980 people were surveyed, then what is the central angle produced by the sector indicating football?

- Ans
- 1. 108°
 - 2. 105°
 - 3. 100°
 - 4. 90°

Question ID : 264330145024

Option 1 ID : 264330568351

Option 2 ID : 264330568354

Option 3 ID : 264330568353

Option 4 ID : 264330568352

Status : Answered

Chosen Option : 1

Q.19 A shopkeeper increases the cost price of an item by 50% and offers a discount of 40% on this marked price. What is his loss percentage?

- Ans
- 1. 15%
 - 2. 20%
 - 3. 10%
 - 4. 5%

Question ID : 264330104507

Option 1 ID : 264330410329

Option 2 ID : 264330410330

Option 3 ID : 264330410332

Option 4 ID : 264330410331

Status : Answered

Chosen Option : 3

Q.20 An item with a marked price of ₹z was sold for ₹6,622, after a discount of 12% was offered. What was the value of z?

- Ans
- 1. ₹7,425
 - 2. ₹7,500
 - 3. ₹7,525
 - 4. ₹7,575

Question ID : 264330131159

Option 1 ID : 264330513750

Option 2 ID : 264330513748

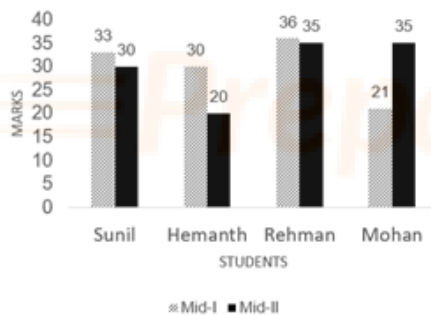
Option 3 ID : 264330513747

Option 4 ID : 264330513749

Status : Answered

Chosen Option : 3

Q.21 Study the given bar graph carefully to answer the question that follows.
Marks obtained by four students in Mid-I and Mid-II.



Marks obtain by Hemanth in Mid-I are what percentage of the total marks obtained by all the students in Mid-I?

- Ans
- 1. 30%
 - 2. 15%
 - 3. 20%
 - 4. 25%

Question ID : 264330165426

Option 1 ID : 264330648783

Option 2 ID : 264330648784

Option 3 ID : 264330648785

Option 4 ID : 264330648786

Status : Answered

Chosen Option : 4

Q.22 The following table shows the income of a company in a year from various sectors:

Sectors	Finance	Communication	Production	Sales	Transportation
Amount (in lakh ₹)	85	60	67	115	75

What is the difference (in lakh ₹) between the income from the maximum earning sector and the minimum earning sector?

- Ans
- 1. 48
 - 2. 40
 - 3. 30
 - 4. 55

Question ID : 264330165074

Option 1 ID : 264330647423

Option 2 ID : 264330647424

Option 3 ID : 264330647425

Option 4 ID : 264330647426

Status : Answered

Chosen Option : 4

Q.23 If interest be compounded half-yearly, then find the compound interest on ₹8,000 at 20% p.a. for 1 year.

- Ans
- 1. ₹1,675
 - 2. ₹1,690
 - 3. ₹1,685
 - 4. ₹1,680

Question ID : 264330145058

Option 1 ID : 264330568487

Option 2 ID : 264330568490

Option 3 ID : 264330568489

Option 4 ID : 264330568488

Status : Answered

Chosen Option : 4

Q.24 What is the HCF of $(x^6 + 1)$ and $(x^4 - 1)$?

- Ans
- 1. 1
 - 2. $(1 + x)$
 - 3. $(1 - x^2)$
 - 4. $(1 + x^2)$

Question ID : 26433064881

Option 1 ID : 264330254118

Option 2 ID : 264330254117

Option 3 ID : 264330254116

Option 4 ID : 264330254119

Status : Answered

Chosen Option : 1

Q.25

The value of $\frac{1\frac{1}{2} \div 3\frac{1}{4} + \frac{1}{2} \div \frac{13}{14} + \frac{1}{5}}{\frac{1}{5} \times 3\frac{1}{2} - \frac{1}{3} \div 1\frac{3}{4} \times 3\frac{1}{2}}$ is:

- Ans
- 1. 33
 - 2. 36
 - 3. 38
 - 4. 40

Question ID : 26433064877

Option 1 ID : 264330254103

Option 2 ID : 264330254100

Option 3 ID : 264330254102

Option 4 ID : 264330254101

Status : Answered

Chosen Option : 2

Q.26 If 2 men or 4 women can build a wall in 34 days, in how many days can 6 men and 5 women build the same wall?

- Ans
- 1. 24
 - 2. 8
 - 3. 12
 - 4. 16

Question ID : 264330102378

Option 1 ID : 264330401980

Option 2 ID : 264330401977

Option 3 ID : 264330401978

Option 4 ID : 264330401979

Status : Answered

Chosen Option : 2

Q.27 Find the HCF of 78, 84, 90 and 112.

- Ans
- 1. 1
 - 2. 2
 - 3. 5
 - 4. 7

Question ID : 264330102308

Option 1 ID : 264330401697

Option 2 ID : 264330401698

Option 3 ID : 264330401699

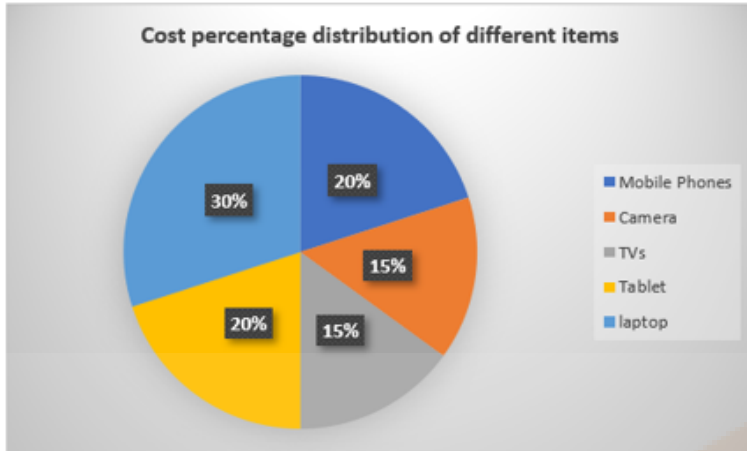
Option 4 ID : 264330401700

Status : Answered

Chosen Option : 2

Q.28

Study the given graph and answer the question that follows.
The following graph shows the distribution of the cost percentage of different items.



If a person purchased all the items for ₹3,00,000, then the cost of a TV is less than that of a laptop by:

- Ans
- 1. ₹40,000
 - 2. ₹55,000
 - 3. ₹50,000
 - 4. ₹45,000

Question ID : 264330157065

Option 1 ID : 264330615633

Option 2 ID : 264330615634

Option 3 ID : 264330615631

Option 4 ID : 264330615632

Status : Answered

Chosen Option : 4

Q.29

If $\cos A = \frac{1}{2}$, $0 \leq A \leq 90^\circ$, then what is the value of $\sin (180 - A)$?

- Ans
- 1. $\frac{1}{2}$
 - 2. $\frac{\sqrt{3}}{2}$
 - 3. $\frac{1}{\sqrt{3}}$
 - 4. 1

Question ID : 264330157753

Option 1 ID : 264330618371

Option 2 ID : 264330618372

Option 3 ID : 264330618374

Option 4 ID : 264330618373

Status : Answered

Chosen Option : 2

Q.30 Mahesh agreed to sell rice with 24% loss, as the rice got rotten. However, he cheated customers and gave only 19 gm of rice in place of 50 gm of rice. What is the percentage of his profit or loss?

- Ans
- 1. 100% loss
 - 2. $\frac{100}{3}\%$ loss
 - 3. $\frac{100}{3}\%$ profit
 - 4. 100% profit

Question ID : 264330131521

Option 1 ID : 264330515188

Option 2 ID : 264330515190

Option 3 ID : 264330515189

Option 4 ID : 264330515187

Status : Answered

Chosen Option : 4

Q.31 A cylinder has some water in it at a height of 16 cm. If a sphere of radius 9 cm is put into it, then find the rise in the height of the water if the radius of the cylinder is 12 cm.

- Ans
- 1. 8 cm
 - 2. 6 cm
 - 3. 8.75 cm
 - 4. 6.75 cm

Question ID : 264330104421

Option 1 ID : 264330409987

Option 2 ID : 264330409985

Option 3 ID : 264330409988

Option 4 ID : 264330409986

Status : Answered

Chosen Option : 4

Q.32 A can do $\frac{1}{5}$ of a piece of work in 20 days, B can do 30% of the same work in 36 days, while C can do 80% of the same work in 160 days. B and C together started and worked for x days. After x days B left the work, and A joined C and both completed the remaining work in (x - 41) days. If the ratio between the work done by (B + C) together to the work done by (A + C) together is 19 : 6, then what fraction of the same work can be completed by C alone in 2x days?

- Ans
- 1. $\frac{57}{100}$
 - 2. $\frac{13}{25}$
 - 3. $\frac{19}{25}$
 - 4. $\frac{6}{25}$

Question ID : 264330114533

Option 1 ID : 264330450220

Option 2 ID : 264330450217

Option 3 ID : 264330450219

Option 4 ID : 264330450218

Status : Answered

Chosen Option : 4

Q.33 If the radius of two circles be 6 cm and 9 cm and the length of the transverse common tangent be 20 cm, then find the distance between the two centres.

- Ans 1. 25 cm
 2. 22 cm
 3. 24 cm
 4. 27 cm

Question ID : 264330165540
Option 1 ID : 264330649241
Option 2 ID : 264330649239
Option 3 ID : 264330649240
Option 4 ID : 264330649242
Status : Answered
Chosen Option : 1

Q.34 Nikunj goes 4 kilometres against the current of a stream in 1 hour, and 2 kilometres along the current in 15 minutes. How long will it take him to go 7 kilometres in stationary water?

- Ans 1. 1 hour 15 minutes
 2. 1 hour 20 minutes
 3. 1 hour 10 minutes
 4. 1 hour 5 minutes

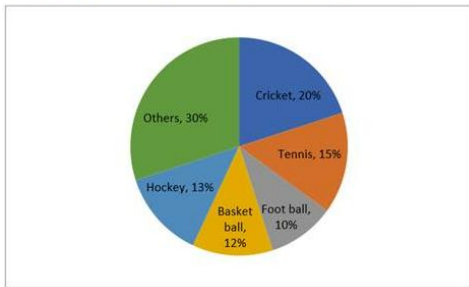
Question ID : 264330103626
Option 1 ID : 264330406811
Option 2 ID : 264330406812
Option 3 ID : 264330406810
Option 4 ID : 264330406809
Status : Answered
Chosen Option : 3

Q.35 At 7: 30 P.M. the owner of a Cycle noticed that a thief is taking away his cycle from his home and is cycling in a particular direction at an estimated speed of 10 km per hour. He informed the police about the theft and the policeman started from the same point, half an hour later than the time of the theft but with a speed of 12 km per hour. At what time will Policeman catch the thief?

- Ans 1. 10:45 P.M.
 2. 9: 30 P.M.
 3. 10:00 P.M.
 4. 10:30 P.M.

Question ID : 26433090262
Option 1 ID : 264330354528
Option 2 ID : 264330354525
Option 3 ID : 264330354526
Option 4 ID : 264330354527
Status : Answered
Chosen Option : 3

Q.36 The pie chart below shows the spendings of a state on various sports during a particular year:



If the total amount spent on sports during the year was ₹75,00,000 then how much (in ₹) was spent on cricket and hockey together?

- Ans**
- 1. ₹18,75,000
 - 2. ₹26,80,000
 - 3. ₹24,75,000
 - 4. ₹21,55,000

Question ID : 264330158399

Option 1 ID : 264330620955

Option 2 ID : 264330620958

Option 3 ID : 264330620957

Option 4 ID : 264330620956

Status : Answered

Chosen Option : 3

Q.37 In a $\triangle ABC$, the bisectors of angle ABC and angle ACB intersect each other at point O . If the angle BOC is 125° , then the angle BAC is equal to:

- Ans**
- 1. 75°
 - 2. 78°
 - 3. 70°
 - 4. 82°

Question ID : 264330165492

Option 1 ID : 264330649047

Option 2 ID : 264330649049

Option 3 ID : 264330649048

Option 4 ID : 264330649050

Status : Answered

Chosen Option : 3

Q.38 Two trains Mumbai Rajdhani and Kissan Express of lengths 850 m and 700 m are 1050 m apart, and are running on parallel tracks towards each other. Mumbai Rajdhani is running at 62 km/h and Kissan Express is running at 55 km/h. In how much time (in sec) will the trains cross each other?

- Ans**
- 1. 70
 - 2. 45
 - 3. 75
 - 4. 80

Question ID : 26433058800

Option 1 ID : 264330230139

Option 2 ID : 264330230137

Option 3 ID : 264330230136

Option 4 ID : 264330230138

Status : Answered

Chosen Option : 4

Q.39 If $\sin \beta = \frac{1}{3}$, $(\sec \beta - \tan \beta)^2$ is equal to:

- Ans
- 1. $\frac{3}{4}$
 - 2. $\frac{2}{3}$
 - 3. $\frac{1}{2}$
 - 4. $\frac{1}{3}$

Question ID : 264330145128
Option 1 ID : 264330568769
Option 2 ID : 264330568768
Option 3 ID : 264330568770
Option 4 ID : 264330568767
Status : Answered
Chosen Option : 3

Q.40 A right square pyramid having lateral surface area is 624 cm^2 . If the length of the diagonal of the square is $24\sqrt{2}$, then the volume of the pyramid is:

- Ans
- 1. 1150 cm^3
 - 2. 780 cm^3
 - 3. 1083 cm^3
 - 4. 960 cm^3

Question ID : 264330123011
Option 1 ID : 264330482110
Option 2 ID : 264330482109
Option 3 ID : 264330482107
Option 4 ID : 264330482108
Status : Answered
Chosen Option : 4

Q.41 The sides of a rectangle are in the ratio of 3 : 8 and its area is 1944 cm^2 . What is its perimeter?

- Ans
- 1. 189 cm
 - 2. 208 cm
 - 3. 198 cm
 - 4. 308 cm

Question ID : 264330106082
Option 1 ID : 264330416632
Option 2 ID : 264330416629
Option 3 ID : 264330416631
Option 4 ID : 264330416630
Status : Answered
Chosen Option : 3

Q.42 A and B complete a work in 24 and 30 days, respectively, working 10 hours per day. The work is to be done in two shifts. The morning shift is for 6 hours and the evening shift is for 4 hours. On the first day, A works in the morning and B works in the evening, and they interchange their shifts every day. On which day did the work get completed?

- Ans**
- 1. 21st day
 - 2. 24th day
 - 3. 30th day
 - 4. 27th day

Question ID : 26433091569
 Option 1 ID : 264330359641
 Option 2 ID : 264330359642
 Option 3 ID : 264330359644
 Option 4 ID : 264330359643
 Status : Answered
 Chosen Option : 4

Q.43 If $\sin A = \frac{\sqrt{3}}{2}$, $0 < A < 90^\circ$, then find the value of $2(\operatorname{cosec} A + \cot A)$.

- Ans**
- 1. $2\sqrt{3}$
 - 2. $\sqrt{3}$
 - 3. $\frac{2}{\sqrt{3}}$
 - 4. $\frac{1}{\sqrt{3}}$

Question ID : 264330157749
 Option 1 ID : 264330618356
 Option 2 ID : 264330618355
 Option 3 ID : 264330618358
 Option 4 ID : 264330618357
 Status : Answered
 Chosen Option : 1

Q.44 The height and the radius of the base of a right circular cone are in the ratio of 12 : 5. If its volume is 314 cm^3 , then what is the slant height of the cone? (Use $\pi = 3.14$)

- Ans**
- 1. 12 cm
 - 2. 11 cm
 - 3. 13 cm
 - 4. 14 cm

Question ID : 264330145134
 Option 1 ID : 264330568792
 Option 2 ID : 264330568791
 Option 3 ID : 264330568793
 Option 4 ID : 264330568794
 Status : Answered
 Chosen Option : 3

Q.45 Three numbers are in the ratio of 5 : 7 : 9 and their LCM is 34,650. Their HCF is:

- Ans 1. 315
 2. 55
 3. 110
 4. 99

Question ID : 26433063670
Option 1 ID : 264330249293
Option 2 ID : 264330249292
Option 3 ID : 264330249294
Option 4 ID : 264330249295
Status : Answered
Chosen Option : 3

Q.46 Which is the largest number that divides each of 1036, 1813 and 3885 without leaving any remainder?

- Ans 1. 333
 2. 111
 3. 259
 4. 37

Question ID : 264330103225
Option 1 ID : 264330405208
Option 2 ID : 264330405207
Option 3 ID : 264330405206
Option 4 ID : 264330405205
Status : Answered
Chosen Option : 4

Q.47 If $\sin A = \frac{2}{3}$, then find the value of $(7 - \tan A)(3 + \cos A)$.

- Ans 1. $\frac{61}{3} + \frac{17}{3\sqrt{5}}$
 2. $\frac{61}{3\sqrt{5}} + \frac{17}{3}$
 3. $\frac{61}{3} + \frac{17}{\sqrt{5}}$
 4. $\frac{61}{3} - \frac{17}{3\sqrt{5}}$

Question ID : 264330158301
Option 1 ID : 264330620565
Option 2 ID : 264330620564
Option 3 ID : 264330620566
Option 4 ID : 264330620563
Status : Answered
Chosen Option : 1

Q.48 In an election between two candidates, 20% of the voters on the voters list did not cast their votes and 80 voters cast their ballot papers blank. The winner secured 45% of all the voters in the list and he got 280 votes more than his rival. The number of voters on the list was:

- Ans
- 1. 1500
 - 2. 2800
 - 3. 2500
 - 4. 2000

Question ID : 264330158381

Option 1 ID : 264330620883

Option 2 ID : 264330620886

Option 3 ID : 264330620885

Option 4 ID : 264330620884

Status : Answered

Chosen Option : 4

Q.49 Find the LCM of 73 and 657.

- Ans
- 1. 73
 - 2. 657
 - 3. 146
 - 4. 365

Question ID : 26433065037

Option 1 ID : 264330254743

Option 2 ID : 264330254742

Option 3 ID : 264330254741

Option 4 ID : 264330254740

Status : Answered

Chosen Option : 2

Q.50 In a circle, chords AB and CD intersect internally at E. If $CD = 18$ cm, $DE = 5$ cm, $AE = 13$ cm, then the length of BE is:

- Ans
- 1. 4 cm
 - 2. 7 cm
 - 3. 3 cm
 - 4. 5 cm

Question ID : 264330168755

Option 1 ID : 264330661832

Option 2 ID : 264330661833

Option 3 ID : 264330661831

Option 4 ID : 264330661834

Status : Answered

Chosen Option : 4

Section : English Comprehension

Q.1 Select the most appropriate meaning of the given idiom.
Fit as a fiddle

- Ans
- 1. To be extremely excited and energetic
 - 2. To be in good health
 - 3. Something is perfect
 - 4. A good and useful invention

Question ID : 264330164175
Option 1 ID : 264330643953
Option 2 ID : 264330643951
Option 3 ID : 264330643954
Option 4 ID : 264330643952
Status : Answered
Chosen Option : 2

Q.2 Select the most appropriate meaning of the underlined word.
She has become a familiar figure in the world of politics.

- Ans
- 1. Known
 - 2. Legend
 - 3. Elevated
 - 4. Fancy

Question ID : 264330121037
Option 1 ID : 264330474356
Option 2 ID : 264330474357
Option 3 ID : 264330474358
Option 4 ID : 264330474355
Status : Answered
Chosen Option : 1

Q.3 Select the most appropriate ANTONYM of the given word.
Authentic

- Ans
- 1. Genuine
 - 2. Fake
 - 3. Basic
 - 4. Different

Question ID : 264330164169
Option 1 ID : 264330643927
Option 2 ID : 264330643930
Option 3 ID : 264330643928
Option 4 ID : 264330643929
Status : Answered
Chosen Option : 2

Q.4 Select the most appropriate ANTONYM of the given word.
Inquisitive

- Ans
- 1. Innocent
 - 2. Indifferent
 - 3. Curious
 - 4. Studious

Question ID : 264330165247
Option 1 ID : 264330648088
Option 2 ID : 264330648090
Option 3 ID : 264330648087
Option 4 ID : 264330648089
Status : Not Answered
Chosen Option : --

Q.5 Select the INCORRECTLY spelt word from the underlined words in the following sentence.

It is important to see school holistically, it is not a set of atomic items of rooms, library, assembly halls, canteen and playgrounds; it is all of these but in symbiotic relationship with each other, the contors of which are often far too obvious and often simply mysterious.

- Ans
- 1. mysterious
 - 2. symbiotic
 - 3. contors
 - 4. holistically

Question ID : 264330141158
Option 1 ID : 264330552978
Option 2 ID : 264330552976
Option 3 ID : 264330552977
Option 4 ID : 264330552975
Status : Answered
Chosen Option : 3

Q.6 The following sentence has been split into four segments. Identify the segment that contains an error.

Will Ramya / had completed / that work / by 2025?

- Ans
- 1. by 2025
 - 2. that work
 - 3. had completed
 - 4. Will Ramya

Question ID : 26433088292
Option 1 ID : 264330346764
Option 2 ID : 264330346763
Option 3 ID : 264330346762
Option 4 ID : 264330346761
Status : Answered
Chosen Option : 3

Q.7 Select the most appropriate meaning of the given idiom.
Apple of discord

- Ans
- 1. Practical
 - 2. Distant love
 - 3. Bone of contention
 - 4. Centre of attraction

Question ID : 264330141095
Option 1 ID : 264330552730
Option 2 ID : 264330552729
Option 3 ID : 264330552727
Option 4 ID : 264330552728
Status : Answered
Chosen Option : 3

Q.8 Fill in the blank by selecting the meaningful and correctly spelt word from the given options.

They knew that the stock of the food was getting reduced and the fund _____ for that was not enough for the next week.

- Ans
- 1. asserted
 - 2. allotted
 - 3. alerted
 - 4. abandoned

Question ID : 26433059538
Option 1 ID : 264330233000
Option 2 ID : 264330233003
Option 3 ID : 264330233001
Option 4 ID : 264330233002
Status : Answered
Chosen Option : 2

Q.9 Select the most appropriate option that can substitute the underlined segment in the given sentence. If there is no need to substitute it, select 'No substitution required'
The unexpected turn beside the project put the company in a big financial crisis.

- Ans
- 1. in the project
 - 2. until the project
 - 3. No substitution required
 - 4. between the project

Question ID : 264330117212
Option 1 ID : 264330460909
Option 2 ID : 264330460911
Option 3 ID : 264330460912
Option 4 ID : 264330460910
Status : Answered
Chosen Option : 1

Q.10 Select the most appropriate option that can substitute the underlined segment in the given sentence.

We all should respect each other.

- Ans
- 1. every other
 - 2. all other
 - 3. one another
 - 4. all of us

Question ID : 26433084644
Option 1 ID : 264330332346
Option 2 ID : 264330332347
Option 3 ID : 264330332345
Option 4 ID : 264330332348
Status : Answered
Chosen Option : 3

Q.11 Select the most appropriate one-word substitution of the given group of words.

A form of government in which the supreme power is vested in the people and exercised by their elected agents under a free electoral system.

- Ans
- 1. Democracy
 - 2. Anarchy
 - 3. Monarchy
 - 4. Autocracy

Question ID : 26433090856
Option 1 ID : 264330356834
Option 2 ID : 264330356835
Option 3 ID : 264330356836
Option 4 ID : 264330356833
Status : Answered
Chosen Option : 1

Q.12 Select the most appropriate meaning of the given idiom.

Come what may

- Ans
- 1. To be among the latest
 - 2. No matter what happens
 - 3. To get frightened
 - 4. Meeting someone

Question ID : 26433091883
Option 1 ID : 264330360871
Option 2 ID : 264330360870
Option 3 ID : 264330360872
Option 4 ID : 264330360869
Status : Answered
Chosen Option : 2

Q.13 Select the most appropriate option that can substitute the underlined segment in the given sentence.

The decision to engage in an armed conflict is tacit.

- Ans
- 1. incomprehensible for some
 - 2. ineffective completely
 - 3. regretted by everyone
 - 4. implied without being stated

Question ID : 26433099887
Option 1 ID : 264330392140
Option 2 ID : 264330392138
Option 3 ID : 264330392137
Option 4 ID : 264330392139
Status : Answered
Chosen Option : 4

Q.14 The following sentence has been divided into parts. One of them may contain an error. Select the part that contains the error from the given options. If you don't find any error, mark 'No error' as your answer.

My elder brother / yesterday had took / my Facebook password.

- Ans
- 1. my Facebook password
 - 2. yesterday had took
 - 3. My elder brother
 - 4. No error

Question ID : 26433073526
Option 1 ID : 264330288254
Option 2 ID : 264330288253
Option 3 ID : 264330288252
Option 4 ID : 264330288255
Status : Answered
Chosen Option : 2

Q.15 Select the option that can be used as a one-word substitute for the given group of words.

To tell the nature of a disease by its symptoms.

- Ans
- 1. Design
 - 2. Diagnosis
 - 3. Decisive
 - 4. Dosage

Question ID : 26433088804
Option 1 ID : 264330348771
Option 2 ID : 264330348770
Option 3 ID : 264330348769
Option 4 ID : 264330348772
Status : Answered
Chosen Option : 2

Q.16 Select the most appropriate meaning of the given idiom.

Fit as a fiddle

- Ans
- 1. At the last moment
 - 2. To ignore what someone is saying
 - 3. To betray a close person
 - 4. In good health

Question ID : 26433091831
Option 1 ID : 264330360662
Option 2 ID : 264330360663
Option 3 ID : 264330360664
Option 4 ID : 264330360661
Status : Answered
Chosen Option : 4

Q.17 The following sentence has been split into four segments. Identify the segment that contains a grammatical error.

The students / are expected / to come / in the right time.

- Ans
- 1. in the right time
 - 2. The students
 - 3. to come
 - 4. are expected

Question ID : 264330145283
Option 1 ID : 264330569390
Option 2 ID : 264330569387
Option 3 ID : 264330569389
Option 4 ID : 264330569388
Status : Answered
Chosen Option : 1

Q.18 Select the option that best expresses the meaning of the underlined idiom.
Christy should discuss this with her face to face.

- Ans
- 1. With another person in their presence rather than, say, by phone or letter
 - 2. Come to fully accept or understand something
 - 3. Remained normal and realistic
 - 4. Almost always

Question ID : 264330136000
Option 1 ID : 264330532841
Option 2 ID : 264330532839
Option 3 ID : 264330532842
Option 4 ID : 264330532840
Status : Answered
Chosen Option : 1

Q.19 Select the most appropriate option that can substitute the underlined segment in the given sentence.

The book narrated the athlete's proWess in a lucid manner.

- Ans
- 1. refined arguments
 - 2. exceptional mastery
 - 3. difficult situation
 - 4. affluent days

Question ID : 26433099883
Option 1 ID : 264330392123
Option 2 ID : 264330392121
Option 3 ID : 264330392122
Option 4 ID : 264330392124
Status : Not Answered
Chosen Option : --

Q.20 Select the most appropriate meaning of the underlined word.
She has no desire for money.

- Ans
- 1. Disgust
 - 2. Despise
 - 3. Care
 - 4. Wish

Question ID : 264330121036
Option 1 ID : 264330474352
Option 2 ID : 264330474351
Option 3 ID : 264330474354
Option 4 ID : 264330474353
Status : Answered
Chosen Option : 4

Q.21 Select the most appropriate meaning of the underlined phrase.
She can't make up her mind where to go for her summer vacation.

- Ans
- 1. Decide between alternatives or come to a decision
 - 2. Decide on a suitable parlour
 - 3. Decide how to do her makeup
 - 4. Engage her mind in creative activities

Question ID : 264330139841
Option 1 ID : 264330547760
Option 2 ID : 264330547761
Option 3 ID : 264330547759
Option 4 ID : 264330547762
Status : Answered
Chosen Option : 1

Q.22 Select the most appropriate ANTONYM of the underlined word.
He is so stingy that I have never seen him spending money on basic necessities.

- Ans
- 1. Wicked
 - 2. Extravagant
 - 3. Obnoxious
 - 4. Indecent

Question ID : 264330121873
Option 1 ID : 264330477652
Option 2 ID : 264330477654
Option 3 ID : 264330477651
Option 4 ID : 264330477653
Status : Answered
Chosen Option : 2

Q.23 Select the option that can be used as a one-word substitute for the given group of words.

A book published after author's death.

- Ans
- 1. Posthuman publication
 - 2. Posthumous publication
 - 3. Supernatural publication
 - 4. Predecessor publication

Question ID : 26433088809
Option 1 ID : 264330348789
Option 2 ID : 264330348790
Option 3 ID : 264330348791
Option 4 ID : 264330348792
Status : Answered
Chosen Option : 2

Q.24 Select the most appropriate synonym of the given word.
Rehabilitate

- Ans
- 1. Reinstall
 - 2. Develop
 - 3. Absolve
 - 4. Decline

Question ID : 264330117194
Option 1 ID : 264330460837
Option 2 ID : 264330460840
Option 3 ID : 264330460838
Option 4 ID : 264330460839
Status : Answered
Chosen Option : 4

Q.25 Select the most appropriate option that can substitute the underlined segment in the given sentence.

You can become confident to speak English within one year.

- Ans
- 1. convinced to speaking
 - 2. reassured of speaking
 - 3. assured of speaking
 - 4. confident in speaking

Question ID : 26433098973
Option 1 ID : 264330388542
Option 2 ID : 264330388543
Option 3 ID : 264330388541
Option 4 ID : 264330388544
Status : Answered
Chosen Option : 4

Q.26 Select the option that can be used as a one-word substitute for the given group of words.

Centre of public attention

- Ans
- 1. Ambiguity
 - 2. Obscurity
 - 3. Fuzziness
 - 4. Limelight

Question ID : 26433088968
Option 1 ID : 264330349412
Option 2 ID : 264330349409
Option 3 ID : 264330349411
Option 4 ID : 264330349410
Status : Answered
Chosen Option : 4

Q.27 The following sentence has been divided into parts. One of them may contain an error.

Select the part that contains the error from the given options. If you don't find any error, mark 'No error' as your answer.

We will / have been know the result / of the CAT exam by next week.

- Ans
- 1. of the CAT exam by next week
 - 2. We will
 - 3. have been know the result
 - 4. No error

Question ID : 26433059005
Option 1 ID : 264330230910
Option 2 ID : 264330230908
Option 3 ID : 264330230909
Option 4 ID : 264330230911
Status : Answered
Chosen Option : 3

Q.28 Select the most appropriate meaning of the given idiom.
Break a leg

- Ans
- 1. To hurt someone
 - 2. To avoid someone
 - 3. To wish someone good luck
 - 4. To love someone

Question ID : 264330117234
Option 1 ID : 264330460993
Option 2 ID : 264330460994
Option 3 ID : 264330460995
Option 4 ID : 264330460996
Status : Answered
Chosen Option : 3

Q.29 Select the most appropriate meaning of the given idiom.
To hit the nail on the head

- Ans
- 1. To hit something accurately
 - 2. To be indecisive
 - 3. To miss an opportunity
 - 4. To express an idea with great precision

Question ID : 264330140553
Option 1 ID : 264330550568
Option 2 ID : 264330550570
Option 3 ID : 264330550569
Option 4 ID : 264330550567
Status : Answered
Chosen Option : 4

Q.30 Select the most appropriate option that can substitute the underlined segment in the given sentence.

Rajib's habit of sneering at the beliefs of others often hurts others' sentiments.

- Ans
- 1. manipulation
 - 2. cynicism
 - 3. certainty
 - 4. cleverness

Question ID : 26433070593
Option 1 ID : 264330276837
Option 2 ID : 264330276839
Option 3 ID : 264330276836
Option 4 ID : 264330276838
Status : Answered
Chosen Option : 2

Q.31 Select the most appropriate option that can substitute the underlined segment in the given sentence. If there is no need to substitute it, select 'No substitution required'.
Politics and money go together in this country.

- Ans
- 1. go arm in arm
 - 2. go holding hands
 - 3. go hand in hand
 - 4. No substitution required

Question ID : 264330117195
Option 1 ID : 264330460842
Option 2 ID : 264330460841
Option 3 ID : 264330460843
Option 4 ID : 264330460844
Status : Answered
Chosen Option : 1

Q.32 Select the most appropriate ANTONYM of the underlined word in the given sentence.

After losing his job and his home, he found himself destitute and living on the streets.

- Ans
- 1. glorious
 - 2. disturbed
 - 3. affluent
 - 4. ridiculous

Question ID : 264330164568
Option 1 ID : 264330645460
Option 2 ID : 264330645462
Option 3 ID : 264330645461
Option 4 ID : 264330645459
Status : Answered
Chosen Option : 3

Q.33 Select the most appropriate synonym of the highlighted word in the given sentence.

The plane crash was a harrowing experience for everyone involved.

- Ans
- 1. Exterminate
 - 2. Excruciating
 - 3. Awesome
 - 4. Sad

Question ID : 264330108891
Option 1 ID : 264330427844
Option 2 ID : 264330427841
Option 3 ID : 264330427842
Option 4 ID : 264330427843
Status : Not Answered
Chosen Option : --

Q.34 Identify the option that rectifies the spelling of the incorrectly spelt word in the given sentence.

Students should have a good vocabulary to write an essay efectively.

- Ans
- 1. Gud
 - 2. Effectively
 - 3. Wriite
 - 4. Voicabulary

Question ID : 26433089015
Option 1 ID : 264330349600
Option 2 ID : 264330349597
Option 3 ID : 264330349599
Option 4 ID : 264330349598
Status : Answered
Chosen Option : 2

Q.35 Select the most appropriate synonym of the word 'factual' in the given sentence and choose the correct option.

The scientist's hypothesis was based on empirical evidence and rigorous experimentation.

- Ans
- 1. Rigorous
 - 2. Hypothesis
 - 3. Evidence
 - 4. Empirical

Question ID : 264330163535
Option 1 ID : 264330641397
Option 2 ID : 264330641395
Option 3 ID : 264330641398
Option 4 ID : 264330641396
Status : Answered
Chosen Option : 3

Q.36 Select the INCORRECTLY spelt word in the given sentence.

It is beyond my cognitive capacity to solve the mathematical problems.

- Ans
- 1. problems
 - 2. cognative
 - 3. mathematical
 - 4. capacity

Question ID : 264330163432
Option 1 ID : 264330641005
Option 2 ID : 264330641003
Option 3 ID : 264330641004
Option 4 ID : 264330641006
Status : Answered
Chosen Option : 2

Q.37 Select the most appropriate option that can substitute the underlined word which has been incorrectly spelt.

Mrs. Lal taught me English gramar.

- Ans
- 1. grammar
 - 2. gramarr
 - 3. gramerr
 - 4. gramer

Question ID : 264330123044

Option 1 ID : 264330482241

Option 2 ID : 264330482239

Option 3 ID : 264330482240

Option 4 ID : 264330482242

Status : Answered

Chosen Option : 1

Q.38 Select the most appropriate meaning of the underlined idiom.
Sanchit stands by his friends through thick and thin .

- Ans
- 1. In winter and summer
 - 2. In favourable situations
 - 3. In crowded areas
 - 4. Under all circumstances

Question ID : 264330122977

Option 1 ID : 264330481974

Option 2 ID : 264330481972

Option 3 ID : 264330481973

Option 4 ID : 264330481971

Status : Answered

Chosen Option : 4

Q.39 Select the option that can be used as a one-word substitute for the given phrase.

One who goes from place to place, begging

- Ans
- 1. Misogamist
 - 2. Malleable
 - 3. Meticulous
 - 4. Mendicant

Question ID : 26433073742

Option 1 ID : 264330289111

Option 2 ID : 264330289110

Option 3 ID : 264330289109

Option 4 ID : 264330289108

Status : Answered

Chosen Option : 3

Q.40 Select the most appropriate synonym of the given word.

Reminiscence

- Ans 1. Harsh
 2. Remembrance
 3. Benevolence
 4. Oblivion

Question ID : 264330163372
Option 1 ID : 264330640776
Option 2 ID : 264330640778
Option 3 ID : 264330640775
Option 4 ID : 264330640777
Status : Not Answered
Chosen Option : --

Comprehension:

In the following passage some words have been deleted. Read the passage carefully and select the most appropriate option to fill in each blank.

Swans are large waterbirds that (1) _____ to the family Anatidae, which also includes ducks and geese. They (2) _____ for their beauty and grace and are often used as symbols of love, fidelity, and elegance. They are also famous for their (3) _____ features, such as their long necks, large wingspans, and striking white feathers. (4) _____, not all swan species are white; the Black Swan, (5) _____, has black feathers with a red bill. Swans are found on every continent and are known for their strong pair bonds. They mate for life and can live up to 20 years.

SubQuestion No : 41

Q.41 Select the most appropriate option to fill in blank number 1.

- Ans 1. belonged
 2. belonging
 3. belong
 4. belongs

Question ID : 264330163346
Option 1 ID : 264330640678
Option 2 ID : 264330640677
Option 3 ID : 264330640676
Option 4 ID : 264330640675
Status : Answered
Chosen Option : 3

Comprehension:

In the following passage some words have been deleted. Read the passage carefully and select the most appropriate option to fill in each blank.

Swans are large waterbirds that (1) _____ to the family Anatidae, which also includes ducks and geese. They (2) _____ for their beauty and grace and are often used as symbols of love, fidelity, and elegance. They are also famous for their (3) _____ features, such as their long necks, large wingspans, and striking white feathers. (4) _____, not all swan species are white; the Black Swan, (5) _____, has black feathers with a red bill. Swans are found on every continent and are known for their strong pair bonds. They mate for life and can live up to 20 years.

SubQuestion No : 42**Q.42** Select the most appropriate option to fill in blank number 2.

- Ans
- 1. were known
 - 2. have knowing
 - 3. had know
 - 4. are known

Question ID : 264330163347

Option 1 ID : 264330640680

Option 2 ID : 264330640681

Option 3 ID : 264330640682

Option 4 ID : 264330640679

Status : Answered

Chosen Option : 4

Comprehension:

In the following passage some words have been deleted. Read the passage carefully and select the most appropriate option to fill in each blank.

Swans are large waterbirds that (1) _____ to the family Anatidae, which also includes ducks and geese. They (2) _____ for their beauty and grace and are often used as symbols of love, fidelity, and elegance. They are also famous for their (3) _____ features, such as their long necks, large wingspans, and striking white feathers. (4) _____, not all swan species are white; the Black Swan, (5) _____, has black feathers with a red bill. Swans are found on every continent and are known for their strong pair bonds. They mate for life and can live up to 20 years.

SubQuestion No : 43**Q.43** Select the most appropriate option to fill in blank number 3.

- Ans
- 1. finite
 - 2. similar
 - 3. popular
 - 4. distinctive

Question ID : 264330163348

Option 1 ID : 264330640685

Option 2 ID : 264330640683

Option 3 ID : 264330640684

Option 4 ID : 264330640686

Status : Answered

Chosen Option : 4

Comprehension:

In the following passage some words have been deleted. Read the passage carefully and select the most appropriate option to fill in each blank.

Swans are large waterbirds that (1) _____ to the family Anatidae, which also includes ducks and geese. They (2) _____ for their beauty and grace and are often used as symbols of love, fidelity, and elegance. They are also famous for their (3) _____ features, such as their long necks, large wingspans, and striking white feathers. (4) _____, not all swan species are white; the Black Swan, (5) _____, has black feathers with a red bill. Swans are found on every continent and are known for their strong pair bonds. They mate for life and can live up to 20 years.

SubQuestion No : 44**Q.44** Select the most appropriate option to fill in blank number 4.

- Ans 1. Consequently
 2. Because
 3. Formerly
 4. However

Question ID : 264330163349

Option 1 ID : 264330640689

Option 2 ID : 264330640690

Option 3 ID : 264330640687

Option 4 ID : 264330640688

Status : Answered

Chosen Option : 4

Comprehension:

In the following passage some words have been deleted. Read the passage carefully and select the most appropriate option to fill in each blank.

Swans are large waterbirds that (1) _____ to the family Anatidae, which also includes ducks and geese. They (2) _____ for their beauty and grace and are often used as symbols of love, fidelity, and elegance. They are also famous for their (3) _____ features, such as their long necks, large wingspans, and striking white feathers. (4) _____, not all swan species are white; the Black Swan, (5) _____, has black feathers with a red bill. Swans are found on every continent and are known for their strong pair bonds. They mate for life and can live up to 20 years.

SubQuestion No : 45**Q.45** Select the most appropriate option to fill in blank number 5.

- Ans 1. for example
 2. of course
 3. after all
 4. in addition

Question ID : 264330163350

Option 1 ID : 264330640693

Option 2 ID : 264330640694

Option 3 ID : 264330640691

Option 4 ID : 264330640692

Status : Answered

Chosen Option : 4

Comprehension:

Read the given passage carefully and answer the questions that follow.

As the world's population approaches 8 billion and resource use intensifies, pollution is ever more extensive, pervasive, and persistent. It affects our health through the food we eat, the water we drink and the air we breathe. By 2025, the world's cities will produce 2.2 billion tonnes of waste every year, more than three times the amount produced in 2009. That said, pollution is not a new phenomenon and is largely controllable and often avoidable, as shown in some countries and cities that have succeeded in decoupling economic growth from pollution and waste accumulation.

With the end goal to eradicate all forms of pollution by 2030, the UN Environment Programme was tasked by the UN Environment Assembly to coordinate the implementation of a global plan reiterating that pollution is not only an environmental priority, it's a priority for the achievement of the Sustainable Development Goals.

SubQuestion No : 46**Q.46 Which is the best description of the tone of the passage?**

- Ans 1. Technical
 2. Sarcastic
 3. Dogmatic
 4. Humanistic

Question ID : 264330164714

Option 1 ID : 264330646009

Option 2 ID : 264330646008

Option 3 ID : 264330646010

Option 4 ID : 264330646007

Status : Answered

Chosen Option : 4

Comprehension:

Read the given passage carefully and answer the questions that follow.

As the world's population approaches 8 billion and resource use intensifies, pollution is ever more extensive, pervasive, and persistent. It affects our health through the food we eat, the water we drink and the air we breathe. By 2025, the world's cities will produce 2.2 billion tonnes of waste every year, more than three times the amount produced in 2009. That said, pollution is not a new phenomenon and is largely controllable and often avoidable, as shown in some countries and cities that have succeeded in decoupling economic growth from pollution and waste accumulation.

With the end goal to eradicate all forms of pollution by 2030, the UN Environment Programme was tasked by the UN Environment Assembly to coordinate the implementation of a global plan reiterating that pollution is not only an environmental priority, it's a priority for the achievement of the Sustainable Development Goals.

SubQuestion No : 47**Q.47 Which of the following most accurately states the central idea of the passage?**

- Ans 1. United Nations
 2. Pollution free planet
 3. Population explosion
 4. Economic growth

Question ID : 264330164713

Option 1 ID : 264330646003

Option 2 ID : 264330646006

Option 3 ID : 264330646005

Option 4 ID : 264330646004

Status : Answered

Chosen Option : 2

Comprehension:

Read the given passage carefully and answer the questions that follow.

As the world's population approaches 8 billion and resource use intensifies, pollution is ever more extensive, pervasive, and persistent. It affects our health through the food we eat, the water we drink and the air we breathe. By 2025, the world's cities will produce 2.2 billion tonnes of waste every year, more than three times the amount produced in 2009. That said, pollution is not a new phenomenon and is largely controllable and often avoidable, as shown in some countries and cities that have succeeded in decoupling economic growth from pollution and waste accumulation.

With the end goal to eradicate all forms of pollution by 2030, the UN Environment Programme was tasked by the UN Environment Assembly to coordinate the implementation of a global plan reiterating that pollution is not only an environmental priority, it's a priority for the achievement of the Sustainable Development Goals.

SubQuestion No : 48**Q.48 Which of the following represents the structure of the passage?**

- Ans 1. Definition
 2. Cause-effect
 3. Critique
 4. Chronology

Question ID : 264330164716

Option 1 ID : 264330646016

Option 2 ID : 264330646015

Option 3 ID : 264330646018

Option 4 ID : 264330646017

Status : Answered

Chosen Option : 2

Comprehension:

Read the given passage carefully and answer the questions that follow.

As the world's population approaches 8 billion and resource use intensifies, pollution is ever more extensive, pervasive, and persistent. It affects our health through the food we eat, the water we drink and the air we breathe. By 2025, the world's cities will produce 2.2 billion tonnes of waste every year, more than three times the amount produced in 2009. That said, pollution is not a new phenomenon and is largely controllable and often avoidable, as shown in some countries and cities that have succeeded in decoupling economic growth from pollution and waste accumulation.

With the end goal to eradicate all forms of pollution by 2030, the UN Environment Programme was tasked by the UN Environment Assembly to coordinate the implementation of a global plan reiterating that pollution is not only an environmental priority, it's a priority for the achievement of the Sustainable Development Goals.

SubQuestion No : 49**Q.49 What is the ANTONYM for the word 'pervasive' from the passage?**

- Ans 1. Clear
 2. Emotional
 3. Limited
 4. Offensive

Question ID : 264330164715

Option 1 ID : 264330646014

Option 2 ID : 264330646013

Option 3 ID : 264330646012

Option 4 ID : 264330646011

Status : Answered

Chosen Option : 3

Comprehension:

Read the given passage carefully and answer the questions that follow.

As the world's population approaches 8 billion and resource use intensifies, pollution is ever more extensive, pervasive, and persistent. It affects our health through the food we eat, the water we drink and the air we breathe. By 2025, the world's cities will produce 2.2 billion tonnes of waste every year, more than three times the amount produced in 2009. That said, pollution is not a new phenomenon and is largely controllable and often avoidable, as shown in some countries and cities that have succeeded in decoupling economic growth from pollution and waste accumulation.

With the end goal to eradicate all forms of pollution by 2030, the UN Environment Programme was tasked by the UN Environment Assembly to coordinate the implementation of a global plan reiterating that pollution is not only an environmental priority, it's a priority for the achievement of the Sustainable Development Goals.

SubQuestion No : 50

Q.50 What is the ANTONYM for the word 'priority' from the passage?

- Ans**
- 1. Factor
 - 2. Last
 - 3. Part
 - 4. Task

Question ID : **264330164717**

Option 1 ID : **264330646021**

Option 2 ID : **264330646019**

Option 3 ID : **264330646022**

Option 4 ID : **264330646020**

Status : **Answered**

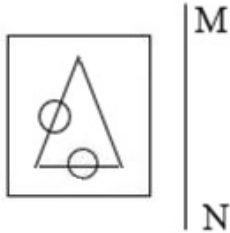
Chosen Option : **2**

Sub Inspector in Delhi Police and Central Armed Police Forces Examination 2023 Paper I

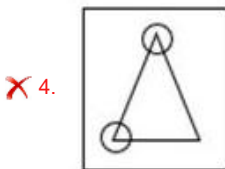
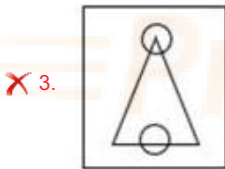
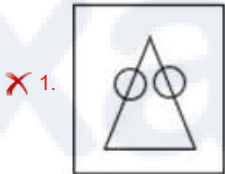
Roll Number	
Candidate Name	
Venue Name	Shiva Infotech
Exam Date	05/10/2023
Exam Time	12:30 PM - 2:30 PM
Subject	SICPO Paper I 2023

Section : General Intelligence and Reasoning

Q.1 Select the correct mirror image of the given figure when the mirror is placed at line MN as shown.



Ans



Question ID : 26433056628
Option 1 ID : 264330221499
Option 2 ID : 264330221497
Option 3 ID : 264330221496
Option 4 ID : 264330221498

Status : Answered

Chosen Option : 2

Q.2 Two statements are given followed by Three conclusions numbered I, II and III. Assuming the statements to be true, even if they seem to be at variance with commonly known facts, decide which of the conclusions logically follow(s) from the statements.

Statements:

All knives are guns.

Some bullets are knives.

Conclusions:

I. Some guns are bullets.

II. No bullet is a gun.

III. Some guns are knives.

- Ans
- 1. Both conclusions II and III follow.
 - 2. Both conclusions I and III follow.
 - 3. Conclusions I, II and III follow.
 - 4. Both conclusions I and II follow.

Question ID : 26433056066
 Option 1 ID : 264330219250
 Option 2 ID : 264330219249
 Option 3 ID : 264330219251
 Option 4 ID : 264330219248
 Status : Answered
 Chosen Option : 2

Q.3 Select the correct option that indicates the arrangement of the given words in the order in which they appear in an English dictionary.

1. Channel
2. Chariot
3. Charcoal
4. Chapel
5. Chamber
6. Chance

- Ans
- 1. 5, 6, 1, 4, 3, 2
 - 2. 5, 1, 6, 4, 3, 2
 - 3. 5, 1, 6, 4, 2, 3
 - 4. 5, 6, 1, 4, 2, 3

Question ID : 264330145374
 Option 1 ID : 264330569754
 Option 2 ID : 264330569751
 Option 3 ID : 264330569753
 Option 4 ID : 264330569752
 Status : Answered
 Chosen Option : 1

Q.4 Select the option that represents the correct order of the given words as they would appear in an English dictionary?

- 1.Sermonize
- 2.Serious
- 3.Servant
- 4.Session
- 5.Serrated

- Ans
- 1. 3, 1, 5, 2, 4
 - 2. 2, 3, 5, 1, 4
 - 3. 3, 2, 5, 1, 4
 - 4. 2, 1, 5, 3, 4

Question ID : 26433067243
 Option 1 ID : 264330263486
 Option 2 ID : 264330263485
 Option 3 ID : 264330263487
 Option 4 ID : 264330263484
 Status : Answered
 Chosen Option : 4

Q.5 Select the option that is related to the third word in the same way as the second word is related to the first word.
(The words must be considered as meaningful words and must not be related to each other based on the number of letters/number of consonants/vowels in the word.)

Pamper: Gratify :: Devour:?

- Ans**
- 1. Build
 - 2. Ravage
 - 3. Receive
 - 4. Abstain

Question ID : 264330145404
Option 1 ID : 264330569871
Option 2 ID : 264330569873
Option 3 ID : 264330569872
Option 4 ID : 264330569874
Status : Not Answered
Chosen Option : --

Q.6 In a certain code language, 'CANADA' is written as 'XZMWZ' and 'AFRICA' is written as 'ZUIRXZ'. How will 'DEPRESSION' be written in that language?

- Ans**
- 1. XVKIVGGPLM
 - 2. WVKIVHRLM
 - 3. XVKIVGGRLM
 - 4. WVKIVGGPLM

Question ID : 26433079051
Option 1 ID : 264330310211
Option 2 ID : 264330310208
Option 3 ID : 264330310209
Option 4 ID : 264330310210
Status : Answered
Chosen Option : 2

Q.7 Which letter-cluster will replace the question mark (?) to complete the given series?
FMQX, DJSA, ?, ZDWG, XAYJ

- Ans**
- 1. BFUC
 - 2. BGDU
 - 3. BGUD
 - 4. BEDF

Question ID : 26433076665
Option 1 ID : 264330300724
Option 2 ID : 264330300726
Option 3 ID : 264330300725
Option 4 ID : 264330300727
Status : Answered
Chosen Option : 3

Q.8 Which of the following letters will replace the question mark (?) in the given series?
B, D, G, K, P, ?

- Ans
- 1. V
 - 2. R
 - 3. Q
 - 4. S

Question ID : 264330106618
Option 1 ID : 264330418773
Option 2 ID : 264330418774
Option 3 ID : 264330418775
Option 4 ID : 264330418776
Status : Answered
Chosen Option : 1

Q.9 Amsterdam is located to the South of Barcelona. Munich is to the West of Amsterdam. Detroit is to the East of Munich. Toronto is to the South of Detroit and to the South-East of Barcelona. What is the position of Amsterdam with respect to Detroit? (All positions are arranged in GRID pattern)

- Ans
- 1. West
 - 2. North
 - 3. South
 - 4. East

Question ID : 26433068155
Option 1 ID : 264330267133
Option 2 ID : 264330267134
Option 3 ID : 264330267135
Option 4 ID : 264330267132
Status : Answered
Chosen Option : 1

Q.10 Select the option that is related to the third term in the same way as the second term is related to the first term and the sixth term is related to the fifth term.
98 : 115 :: 74 : ? :: 67 : 84

- Ans
- 1. 85
 - 2. 91
 - 3. 95
 - 4. 80

Question ID : 26433079158
Option 1 ID : 264330310636
Option 2 ID : 264330310638
Option 3 ID : 264330310639
Option 4 ID : 264330310637
Status : Answered
Chosen Option : 2

Q.11 Six students P, Q, R, S, T and U are sitting around a circular table facing the centre. R is an immediate neighbour of both T and U. P is sitting third to the right of U. Q is sitting to the immediate left of S. S is sitting second to the right of P. Who is the immediate neighbour of both R and S?

- Ans
- 1. T
 - 2. Q
 - 3. U
 - 4. P

Question ID : 264330145420

Option 1 ID : 264330569937

Option 2 ID : 264330569935

Option 3 ID : 264330569938

Option 4 ID : 264330569936

Status : Answered

Chosen Option : 3

Q.12 A @ B means 'A is the husband of B'
A & B means 'A is the mother of B'
A # B means 'A is the daughter of B'
If J # L @ Y & K @ Z, then how is J related to Z?

- Ans
- 1. Brother's wife
 - 2. Sister's husband
 - 3. Husband's sister
 - 4. Mother

Question ID : 264330126026

Option 1 ID : 264330493779

Option 2 ID : 264330493778

Option 3 ID : 264330493776

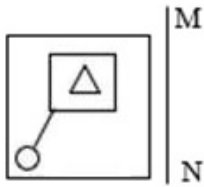
Option 4 ID : 264330493777

Status : Not Answered

Chosen Option : --

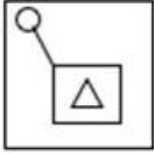
Prepare 50% Faster

Q.13 Select the correct mirror image of the given figure when the mirror is placed at line MN as shown.

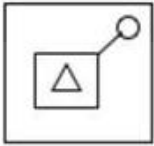


Ans

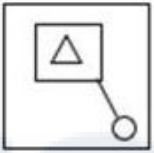
✗ 1.



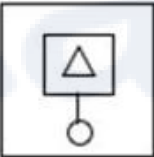
✗ 2.



✓ 3.



✗ 4.



Question ID : 26433056629

Option 1 ID : 264330221501

Option 2 ID : 264330221502

Option 3 ID : 264330221503

Option 4 ID : 264330221500

Status : Answered

Chosen Option : 3

Q.14 If '+' means '-', '-' means '÷', '÷' means '×' and '×' means '+', then what will come in place of the (?) in the following equation?
 $300 - 2 + 50 \times 3 \div 2 = ?$

Ans ✗ 1. 23

✓ 2. 106

✗ 3. 61

✗ 4. 661

Question ID : 264330114253

Option 1 ID : 264330449100

Option 2 ID : 264330449097

Option 3 ID : 264330449098

Option 4 ID : 264330449099

Status : Answered

Chosen Option : 2

Q.15 In a certain code language, 'BAKED' is written as 'CCNII' and 'COOK' is written as 'DQRO'. How will 'EATING' be written in that language?

- Ans
- 1. FDVMRM
 - 2. FCWMTM
 - 3. GDXTN
 - 4. FCWMSM

Question ID : 26433070266

Option 1 ID : 264330275541

Option 2 ID : 264330275543

Option 3 ID : 264330275542

Option 4 ID : 264330275540

Status : Answered

Chosen Option : 4

Q.16 Select the option that is related to the fourth term in the same way as the first term is related to the second term and the fifth term is related to the sixth term.

7 : 40 :: ? : 667 :: 39 : 1512

- Ans
- 1. 34
 - 2. 25
 - 3. 47
 - 4. 26

Question ID : 26433079357

Option 1 ID : 264330311417

Option 2 ID : 264330311416

Option 3 ID : 264330311418

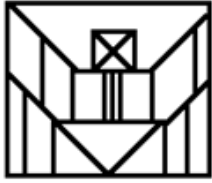
Option 4 ID : 264330311419

Status : Not Answered

Chosen Option : --

Prepare 50% Faster

Q.17 Select the option figure that is embedded in the given figure as its part (rotation is NOT allowed)



Ans



Question ID : 264330114742

Option 1 ID : 264330451055

Option 2 ID : 264330451053

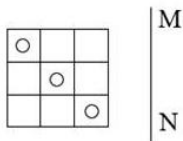
Option 3 ID : 264330451056

Option 4 ID : 264330451054

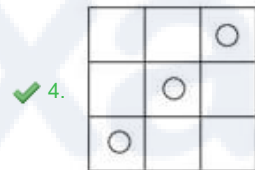
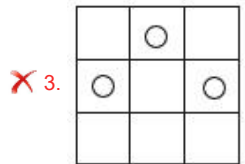
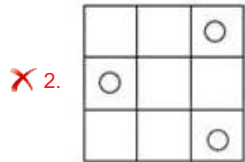
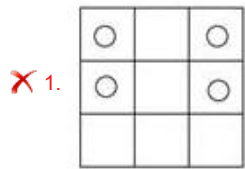
Status : Answered

Chosen Option : 3

Q.18 Select the correct mirror image of the given figure when the mirror is placed at line MN as shown.



Ans



Question ID : 26433056621
 Option 1 ID : 264330221470
 Option 2 ID : 264330221471
 Option 3 ID : 264330221469
 Option 4 ID : 264330221468

Status : Answered

Chosen Option : 4

Q.19 'A # B' means 'A is the brother of B'.
 'A * B' means 'A is the wife of B'.
 'A \$ B' means 'A is the daughter of B'.
 'A = B' means 'A is the father of B'.
 If $P * V \# D \$ B = Z$, then how is B related to P?

- Ans
- ✗ 1. Wife
 - ✗ 2. Husband
 - ✓ 3. Husband's father
 - ✗ 4. Brother

Question ID : 264330145386
 Option 1 ID : 264330569800
 Option 2 ID : 264330569799
 Option 3 ID : 264330569802
 Option 4 ID : 264330569801

Status : Not Answered

Chosen Option : --

Q.20 Select the set in which the numbers are related in the same way as are the numbers of the following set.

(NOTE : Operations should be performed on the whole numbers, without breaking down the numbers into its constituent digits. E.g. 13 – Operations on 13 such as adding /subtracting /multiplying etc. to 13 can be performed. Breaking down 13 into 1 and 3 and then performing mathematical operations on 1 and 3 is NOT allowed)

(6, 15, 1)
(5, 6, 3)

- Ans
- 1. (12,46,5)
 - 2. (7,42,5)
 - 3. (5,32,7)
 - 4. (15,21,8)

Question ID : 264330145325

Option 1 ID : 264330569555

Option 2 ID : 264330569556

Option 3 ID : 264330569557

Option 4 ID : 264330569558

Status : Not Answered

Chosen Option : --

Q.21 In a certain code language, 'RING' is coded as 64 and 'WATCH' is coded as 125. How will 'BRACELET' be coded in the same language?

- Ans
- 1. 512
 - 2. 504
 - 3. 478
 - 4. 343

Question ID : 264330132202

Option 1 ID : 264330517906

Option 2 ID : 264330517903

Option 3 ID : 264330517905

Option 4 ID : 264330517904

Status : Answered

Chosen Option : 1

Q.22 In a certain code language, 'CHALK' is coded as 6-16-2-24-22 and 'BOARD' is coded as 4-30-2-36-8. How will 'PAPER' be coded in the same language?

- Ans
- 1. 32-2-32-12-36
 - 2. 32-2-32-10-36
 - 3. 36-2-36-12-32
 - 4. 36-2-36-10-32

Question ID : 264330132203

Option 1 ID : 264330517910

Option 2 ID : 264330517907

Option 3 ID : 264330517909

Option 4 ID : 264330517908

Status : Answered

Chosen Option : 2

Q.23 Two statements are given, followed by two conclusions numbered I and II. Assuming the statements to be true, even if they seem to be at variance with commonly known facts, decide which of the conclusions logically follow(s) from the statements.

Statements:

All actors are singers.

Some musicians are dancers.

Conclusion:

I) All dancers are musicians.

II) Some singers are actors.

Ans 1. Neither Conclusion I nor II follows.

2. Only Conclusion II follows.

3. Both Conclusions I and II follow.

4. Only Conclusion I follows

Question ID : **26433067707**

Option 1 ID : **264330265343**

Option 2 ID : **264330265341**

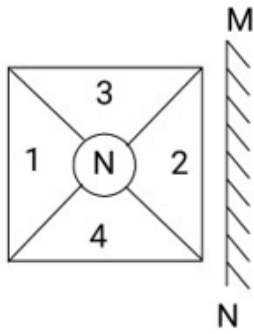
Option 3 ID : **264330265342**

Option 4 ID : **264330265340**

Status : **Answered**

Chosen Option : **2**

Q.24 Select the correct mirror image of the given combination when the mirror is placed at 'MN' as shown below.



Ans

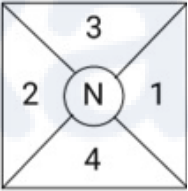
✓ 1.



✗ 2.



✗ 3.



✗ 4.



Question ID : 264330130774

Option 1 ID : 264330512210

Option 2 ID : 264330512209

Option 3 ID : 264330512207

Option 4 ID : 264330512208

Status : Answered

Chosen Option : 1

Q.25 6 friends are sitting around a circular table. Vini, Urja and Tanvi are sitting facing the centre and two out of Abhay, Bala and Chan are not sitting facing the centre. Vini is sitting second to the left of Chan. Urja is sitting second to the right of Abhay. Bala is sitting third to the left of Tanvi. Chan is sitting second to the right of Tanvi. Abhay is sitting next to Vini.

Who is sitting fourth to the right of Chan?

- Ans
- 1. Tanvi
 - 2. Urja
 - 3. Vini
 - 4. Bala

Question ID : 26433085628
Option 1 ID : 264330336215
Option 2 ID : 264330336213
Option 3 ID : 264330336216
Option 4 ID : 264330336214
Status : Not Answered
Chosen Option : --

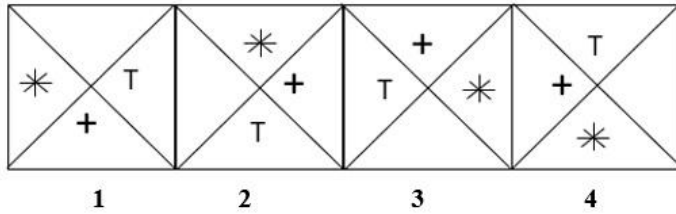
Q.26 If P denotes '×', Q denotes '+', R denotes '+', and S denotes '-', then what will come in place of '?' in the following equation?

$$\sqrt{256} P 3 S 66 Q 11 P 5 R 43 = ?$$

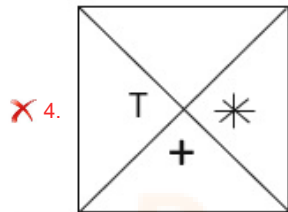
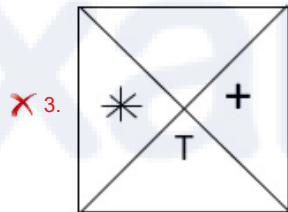
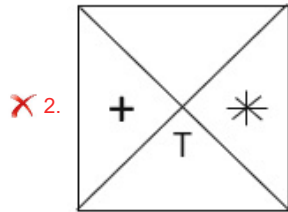
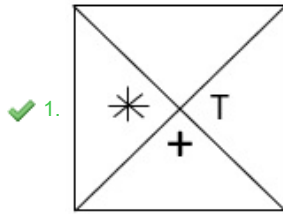
- Ans
- 1. 72
 - 2. 58
 - 3. 61
 - 4. 69

Question ID : 26433057630
Option 1 ID : 264330225507
Option 2 ID : 264330225504
Option 3 ID : 264330225506
Option 4 ID : 264330225505
Status : Answered
Chosen Option : 3

Q.27 Which of the given figures when placed in the 5th position would continue the series that is established by the first four figures?



Ans



Question ID : 26433087306
 Option 1 ID : 264330342864
 Option 2 ID : 264330342863
 Option 3 ID : 264330342861
 Option 4 ID : 264330342862
 Status : Answered
 Chosen Option : 1

Q.28 In a certain code language, 'BABY' is coded as '29' and 'GENDER' is coded as '52'.
 How will 'CRIPPLE' be coded in that language?

- Ans
- ✗ 1. 74
 - ✗ 2. 84
 - ✓ 3. 78
 - ✗ 4. 88

Question ID : 26433079045
 Option 1 ID : 264330310184
 Option 2 ID : 264330310185
 Option 3 ID : 264330310186
 Option 4 ID : 264330310187
 Status : Answered
 Chosen Option : 3

Q.29 Which of the following numbers will replace the question mark (?) in the given series?
98, 126, 165, 216, 280, ?

- Ans
- 1. 344
 - 2. 358
 - 3. 356
 - 4. 348

Question ID : 26433069397
Option 1 ID : 264330272103
Option 2 ID : 264330272101
Option 3 ID : 264330272102
Option 4 ID : 264330272100
Status : Answered
Chosen Option : 2

Q.30 Three of the following letter-clusters are alike in some manner and one is different.
Select the one that is different.

- Ans
- 1. NPOQ
 - 2. XZYA
 - 3. QSRT
 - 4. PKQJ

Question ID : 264330180758
Option 1 ID : 264330709002
Option 2 ID : 264330709000
Option 3 ID : 264330708999
Option 4 ID : 264330709001
Status : Answered
Chosen Option : 4

Q.31 Three of the following letter-clusters are alike in some manner and one is different.
Select the one that is different.

- Ans
- 1. AZBY
 - 2. ZUYV
 - 3. FAEB
 - 4. UPTQ

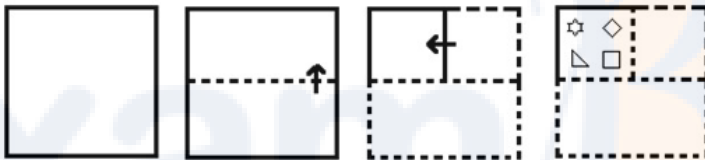
Question ID : 264330145345
Option 1 ID : 264330569636
Option 2 ID : 264330569637
Option 3 ID : 264330569635
Option 4 ID : 264330569638
Status : Answered
Chosen Option : 1

Q.32 If '+' means '-', '-' means 'x', 'x' means '÷' and '÷' means '+', what will come in place of '?' in the following equation?
 $137 \div 80 \times 5 - 4 + 34 = ?$

- Ans
- ✓ 1. 167
 - ✗ 2. 235
 - ✗ 3. 184
 - ✗ 4. 141

Question ID : 264330101149
 Option 1 ID : 264330397141
 Option 2 ID : 264330397142
 Option 3 ID : 264330397143
 Option 4 ID : 264330397144
 Status : Answered
 Chosen Option : 1

Q.33 The sequence of folding a piece of paper and the manner in which the folded paper is cut is shown in the following figures. How would this paper look when unfolded?



- Ans
- ✓ 1.
 - ✗ 2.
 - ✗ 3.
 - ✗ 4.

Question ID : 26433074793
 Option 1 ID : 264330293261
 Option 2 ID : 264330293262
 Option 3 ID : 264330293263
 Option 4 ID : 264330293260
 Status : Answered
 Chosen Option : 1

Q.34 If '+' means 'x', 'x' means '-', '-' means '÷' and '÷' means '+', then what will come in place of the (?) in the following equation?
 $150 - 5 + 3 \div 23 \times 3 = ?$

- Ans
- 1. 145
 - 2. 111
 - 3. 155
 - 4. 110

Question ID : 264330114252

Option 1 ID : 264330449093

Option 2 ID : 264330449096

Option 3 ID : 264330449095

Option 4 ID : 264330449094

Status : Answered

Chosen Option : 4

Q.35 Which of the following terms will replace the question mark (?) in the given series?

EQUE ? GOWC HNXB IMYA

- Ans
- 1. FDVD
 - 2. FIVD
 - 3. FPVD
 - 4. FEVD

Question ID : 26433085321

Option 1 ID : 264330334985

Option 2 ID : 264330334986

Option 3 ID : 264330334987

Option 4 ID : 264330334988

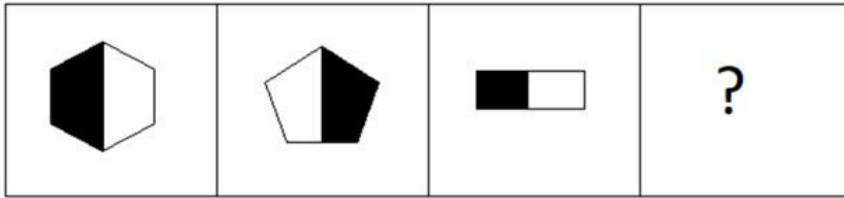
Status : Answered

Chosen Option : 3

Prepare 50% Faster

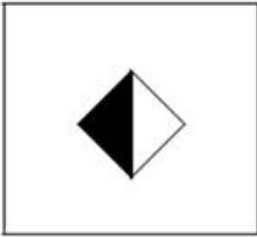
Q.36

Select the figure that will come next in the following figure series.

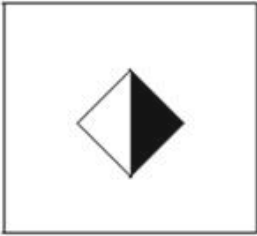


Ans

✗ 1.



✗ 2.



✓ 3.



✗ 4.



Question ID : 26433087078

Option 1 ID : 264330341956

Option 2 ID : 264330341955

Option 3 ID : 264330341953

Option 4 ID : 264330341954

Status : Answered

Chosen Option : 3

Q.37 Two statements are given, followed by two conclusions numbered I and II. Assuming the statements to be true, even if they seem to be at variance with commonly known facts, decide which of the conclusions logically follow(s) from the statements.

Statements:

All cardiologists are doctors.

Some cardiologists are neurologists.

Conclusions:

I) Some doctors are cardiologists.

II) Some doctors are neurologists.

- Ans**
- 1. Both Conclusions I and II follow.
 - 2. Neither Conclusion I nor II follows.
 - 3. Only Conclusion I follows.
 - 4. Only Conclusion II follows.

Question ID : 26433067700
 Option 1 ID : 264330265314
 Option 2 ID : 264330265315
 Option 3 ID : 264330265312
 Option 4 ID : 264330265313
 Status : Answered
 Chosen Option : 1

Q.38 If '+' means '÷', '-' means '+', '×' means '-' and '÷' means '×', then what will come in place of (?) in the given equation?

$$5 \div 2 - 20 + 5 \times 2 = ?$$

- Ans**
- 1. 12
 - 2. 15
 - 3. 20
 - 4. 10

Question ID : 264330145292
 Option 1 ID : 264330569424
 Option 2 ID : 264330569423
 Option 3 ID : 264330569426
 Option 4 ID : 264330569425
 Status : Answered
 Chosen Option : 1

Q.39 Which of the following numbers will replace the question mark (?) in the given series?

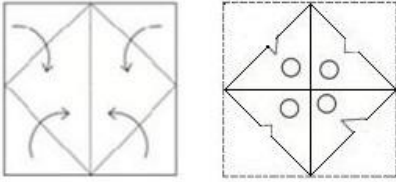
$$96, 12, \frac{3}{2}, ?, \frac{3}{128}$$

- Ans**
- 1. $\frac{3}{12}$
 - 2. $\frac{1}{128}$
 - 3. $\frac{3}{64}$
 - 4. $\frac{3}{16}$

Question ID : 26433092494
 Option 1 ID : 264330363267
 Option 2 ID : 264330363268
 Option 3 ID : 264330363266
 Option 4 ID : 264330363265
 Status : Answered
 Chosen Option : 4

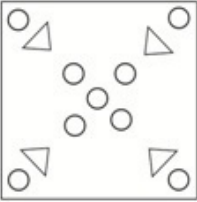
Q.40

A paper is folded and cut as shown. How will it appear when unfolded?

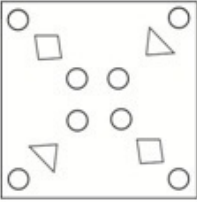


Ans

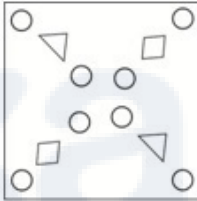
X 1.



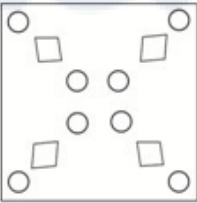
X 2.



✓ 3.



X 4.



Question ID : 26433040796

Option 1 ID : 264330159660

Option 2 ID : 264330159662

Option 3 ID : 264330159659

Option 4 ID : 264330159661

Status : Answered

Chosen Option : 4

Q.41 Which of the following numbers will replace the question mark (?) in the given series?

18, 6, 2, ?, $\frac{2}{9}$

Ans

1. $\frac{1}{3}$

2. $\frac{1}{9}$

3. $\frac{2}{3}$

4. 1

Question ID : 26433092493

Option 1 ID : 264330363261

Option 2 ID : 264330363264

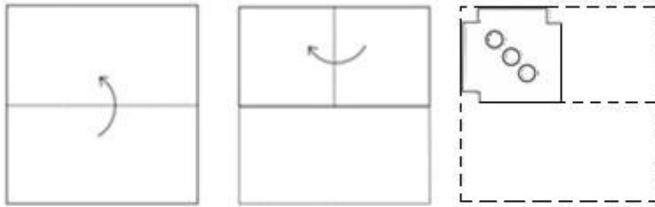
Option 3 ID : 264330363262

Option 4 ID : 264330363263

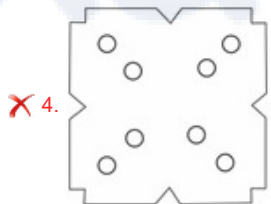
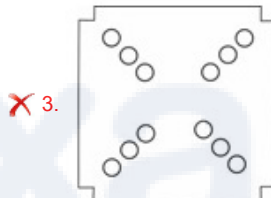
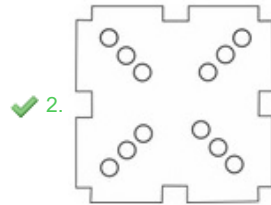
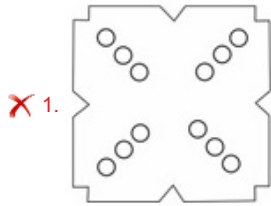
Status : Answered

Chosen Option : 3

Q.42 A paper is folded and cut as shown. How will it appear when unfolded?



Ans



Question ID : 26433040797

Option 1 ID : 264330159665

Option 2 ID : 264330159664

Option 3 ID : 264330159663

Option 4 ID : 264330159666

Status : Answered

Chosen Option : 2

Q.43 Param drives 8 km towards north from point A. He takes a right turn and drives 8 km. Again he takes a right turn and drives 4 km. Finally, he takes a right turn and drives 8 km to reach point B. How far and towards which direction should he drive in order to reach point A again?

- Ans
- ✗ 1. 5 km towards north
 - ✓ 2. 4 km towards south
 - ✗ 3. 6 km towards east
 - ✗ 4. 3 km towards west

Question ID : 26433068275

Option 1 ID : 264330267613

Option 2 ID : 264330267612

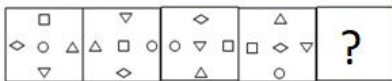
Option 3 ID : 264330267615

Option 4 ID : 264330267614

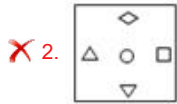
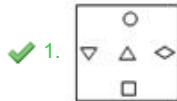
Status : Answered

Chosen Option : 2

Q.44 Select the figure that will replace the question mark (?) in the following figure series.



Ans



Question ID : 264330145489

Option 1 ID : 264330570212

Option 2 ID : 264330570214

Option 3 ID : 264330570211

Option 4 ID : 264330570213

Status : Not Answered

Chosen Option : --

Q.45 Three Statements are given followed by Three conclusions numbered I, II and III. Assuming the statements to be true, even if they seem to be at variance with commonly known facts, decide which of the conclusions logically follow(s) from the statements.

Statements:

All elephants are fishes.

No fish is a tiger.

Some deer are elephants.

Conclusions:

I. Some fishes are deer.

II. No elephant is a deer.

III. Some tigers are fishes.

Ans ✗ 1. Both conclusions I and III follow.

✗ 2. Only conclusion II follows.

✗ 3. Both conclusions I and II follow.

✓ 4. Only conclusion I follows.

Question ID : 264330145342

Option 1 ID : 264330569624

Option 2 ID : 264330569625

Option 3 ID : 264330569623

Option 4 ID : 264330569626

Status : Answered

Chosen Option : 4

Q.46 If A denotes '+', B denotes '×', C denotes '−', and D denotes '+', then what will be the value of the following expression?

17 B 3 A 14 D 7 C 5 = ?

Ans ✓ 1. 48

✗ 2. 38

✗ 3. 29

✗ 4. 57

Question ID : 26433085381

Option 1 ID : 264330335228

Option 2 ID : 264330335226

Option 3 ID : 264330335227

Option 4 ID : 264330335225

Status : Answered

Chosen Option : 1

Q.47 Which number will replace the question mark (?) in the following series?

28, 30, ?, 188, 754, 3772

Ans ✗ 1. 120

✓ 2. 62

✗ 3. 60

✗ 4. 122

Question ID : 26433068967

Option 1 ID : 264330270381

Option 2 ID : 264330270382

Option 3 ID : 264330270380

Option 4 ID : 264330270383

Status : Answered

Chosen Option : 2

Q.48 Which of the following interchange of numbers (not digit) would make the given equation correct?

$16 \times 5 \div 20 + 6 + 50 = 40$

Ans ✓ 1. 40, 50

✗ 2. 6, 40

✗ 3. 20, 40

✗ 4. 5, 40

Question ID : 264330129640

Option 1 ID : 264330507929

Option 2 ID : 264330507926

Option 3 ID : 264330507927

Option 4 ID : 264330507928

Status : Answered

Chosen Option : 1

Q.49 Select the set in which the numbers are related in the same way as are the numbers of the following sets.

(NOTE : Operations should be performed on the whole numbers, without breaking down the numbers into its constituent digits. E.g. 13- Operations on 13 such as adding/subtracting/multiplying etc. to 13 can be performed. Breaking down 13 into 1 and 3 and then performing mathematical operations on 1 and 3 is not allowed.)

(12,14, 38)

(6, 23, 35)

- Ans
- 1. (8, 10, 24)
 - 2. (19, 9, 38)
 - 3. (16, 11, 43)
 - 4. (4, 5, 20)

Question ID : 26433057452

Option 1 ID : 264330224794

Option 2 ID : 264330224793

Option 3 ID : 264330224795

Option 4 ID : 264330224792

Status : Answered

Chosen Option : 3

Q.50 Select the option that is related to the third word in the same way as the second word is related to the first word.

(The words must be considered as meaningful words and must not be related to each other based on the number of letters/number of consonants/vowels in the word.)

Pencil : Lead :: Pen : ?

- Ans
- 1. Black
 - 2. Gas
 - 3. Ink
 - 4. Water

Question ID : 26433087292

Option 1 ID : 264330342805

Option 2 ID : 264330342806

Option 3 ID : 264330342808

Option 4 ID : 264330342807

Status : Answered

Chosen Option : 3

Section : General Knowledge and General Awareness

Q.1 The Delhi sultan, who succumbed to injuries as a result of his fall from horse was _____

- Ans
- 1. Iltutmish
 - 2. Balban
 - 3. Behram Shah
 - 4. Qutubuddin Aibak

Question ID : 264330109004

Option 1 ID : 264330428294

Option 2 ID : 264330428295

Option 3 ID : 264330428296

Option 4 ID : 264330428293

Status : Answered

Chosen Option : 4

Q.2 M Balamuralikrishna is associated with which form of music?

- Ans
- 1. Folk music
 - 2. Carnatic Sangeet
 - 3. Haveli Sangeet
 - 4. Hindustani Sangeet

Question ID : 26433074857
Option 1 ID : 264330293518
Option 2 ID : 264330293517
Option 3 ID : 264330293519
Option 4 ID : 264330293516
Status : Answered
Chosen Option : 1

Q.3 Who among the following had written 'The Dark Room' that presents an Indian woman in stiff opposition to male domination?

- Ans
- 1. Kuldip Nayyar
 - 2. RK Narayan
 - 3. Kazi Nazrul Islam
 - 4. Mulk Raj Anand

Question ID : 264330145181
Option 1 ID : 264330568980
Option 2 ID : 264330568982
Option 3 ID : 264330568979
Option 4 ID : 264330568981
Status : Answered
Chosen Option : 2

Q.4 Which of the following is responsible for attending to disputes concerning recruitment and conditions of service of public personnel at the Centre?

- Ans
- 1. Joint Administrative Tribunal
 - 2. The Settlement and Appellate Tribunal
 - 3. The Competition Appellate Tribunal
 - 4. Central Administrative Tribunal

Question ID : 264330145263
Option 1 ID : 264330569309
Option 2 ID : 264330569308
Option 3 ID : 264330569307
Option 4 ID : 264330569310
Status : Not Answered
Chosen Option : --

Q.5 What is the length of a bacterial cell?

- Ans
- 1. 3 to 5 μm
 - 2. 1 to 40 μm
 - 3. 30 to 50 μm
 - 4. 0 to 3 μm

Question ID : 264330145216
Option 1 ID : 264330569121
Option 2 ID : 264330569120
Option 3 ID : 264330569122
Option 4 ID : 264330569119
Status : Not Answered
Chosen Option : --

Q.6 According to National Statistical Office (NSO) data, India's average literacy rate in 2021 was _____.

- Ans
- 1. 78.71%
 - 2. 76.70%
 - 3. 77.70%
 - 4. 70.50%

Question ID : 264330110661
Option 1 ID : 264330434922
Option 2 ID : 264330434923
Option 3 ID : 264330434924
Option 4 ID : 264330434921
Status : Answered
Chosen Option : 2

Q.7 Which of the following can degrade detritus into simpler inorganic substances?

- Ans
- 1. Lichens
 - 2. Fungal enzymes
 - 3. Algae
 - 4. Phytoplankton

Question ID : 264330145210
Option 1 ID : 264330569095
Option 2 ID : 264330569097
Option 3 ID : 264330569096
Option 4 ID : 264330569098
Status : Answered
Chosen Option : 1

Q.8 The food component present in sugar is:

- Ans
- 1. protein
 - 2. vitamins
 - 3. carbohydrates
 - 4. fats

Question ID : 26433086608
Option 1 ID : 264330340075
Option 2 ID : 264330340073
Option 3 ID : 264330340074
Option 4 ID : 264330340076
Status : Answered
Chosen Option : 3

Q.9 Which of the following states has the lowest literacy rate in India according to census 2011?

- Ans
- 1. Bihar
 - 2. Andhra Pradesh
 - 3. Odisha
 - 4. Haryana

Question ID : 264330166212
Option 1 ID : 264330651918
Option 2 ID : 264330651915
Option 3 ID : 264330651917
Option 4 ID : 264330651916
Status : Answered
Chosen Option : 1

Q.10 In test match cricket, how many minimum overs can a team play in a day?

Ans 1. 80

2. 90

3. 70

4. 60

Question ID : 264330118907

Option 1 ID : 264330466285

Option 2 ID : 264330466286

Option 3 ID : 264330466284

Option 4 ID : 264330466283

Status : Answered

Chosen Option : 2

Q.11 In a basketball game, how many players from one team play on the court at any given time?

Ans 1. 5

2. 6

3. 4

4. 7

Question ID : 264330109853

Option 1 ID : 264330431689

Option 2 ID : 264330431692

Option 3 ID : 264330431691

Option 4 ID : 264330431690

Status : Answered

Chosen Option : 1

Q.12 Which of the following places experiences extreme cold in winter and pleasant weather in summer?

Ans 1. Amritsar

2. Leh

3. Chennai

4. New Delhi

Question ID : 264330111910

Option 1 ID : 264330439725

Option 2 ID : 264330439726

Option 3 ID : 264330439727

Option 4 ID : 264330439728

Status : Answered

Chosen Option : 4

Q.13 French possessions in India were restored after the Battle of Wandiwash by the Treaty of _____ signed in the year 1763 between Britain and France.

Ans 1. Paris

2. Surat

3. Tordesillas

4. Purandar

Question ID : 264330165388

Option 1 ID : 264330648631

Option 2 ID : 264330648633

Option 3 ID : 264330648634

Option 4 ID : 264330648632

Status : Not Answered

Chosen Option : --

Q.14 When did Heinrich Hertz discover the photoelectric effect and observe that shining ultraviolet light on the electrodes caused a change in voltage between them?

- Ans
- 1. 1916
 - 2. 1902
 - 3. 1990
 - 4. 1887

Question ID : 264330141667
Option 1 ID : 264330554990
Option 2 ID : 264330554989
Option 3 ID : 264330554988
Option 4 ID : 264330554987
Status : Not Answered
Chosen Option : --

Q.15 Which of the following statements is correct?

- Ans
- 1. Zinc oxide is a form of rust.
 - 2. Copper can also turn into rust upon hydration.
 - 3. Chemically rust is hydrated ferric oxide.
 - 4. Chemically rust is non-hydrated ferric oxide.

Question ID : 264330111865
Option 1 ID : 264330439548
Option 2 ID : 264330439547
Option 3 ID : 264330439545
Option 4 ID : 264330439546
Status : Not Answered
Chosen Option : --

Q.16 Ugadi is a _____ New Year celebrated in the month of March.

- Ans
- 1. Marathi
 - 2. Bengali
 - 3. Telugu
 - 4. Punjabi

Question ID : 26433054141
Option 1 ID : 264330211549
Option 2 ID : 264330211551
Option 3 ID : 264330211550
Option 4 ID : 264330211548
Status : Answered
Chosen Option : 4

Q.17 Ustad Asad Ali Khan is famous for which of the following schools of Dhrupad as an instrumentalist?

- Ans
- 1. Gauri
 - 2. Dagar
 - 3. Nauhar
 - 4. Khandarbani

Question ID : 264330145169
Option 1 ID : 264330568932
Option 2 ID : 264330568934
Option 3 ID : 264330568933
Option 4 ID : 264330568931
Status : Not Answered
Chosen Option : --

Q.18 The drainage system formed when rivers discharge their waters from all directions in a lake or depression, as in the case of Loktak Lake in Manipur, is called _____.

- Ans 1. centripetal
 2. radial
 3. trellis
 4. dendritic

Question ID : 264330119650
Option 1 ID : 264330468878
Option 2 ID : 264330468876
Option 3 ID : 264330468877
Option 4 ID : 264330468875
Status : Not Answered
Chosen Option : --

Q.19 Which report is NOT associated with Fundamental Rights?

- Ans 1. Tej Bahadur Sapru Report
 2. Sarkaria Commission Report
 3. JB Kripalani Report
 4. Motilal Nehru Report

Question ID : 264330130679
Option 1 ID : 264330511829
Option 2 ID : 264330511827
Option 3 ID : 264330511830
Option 4 ID : 264330511828
Status : Not Answered
Chosen Option : --

Q.20 The preferred IUPAC name of Allyl bromide is:

- Ans 1. 3-Bromopropene
 2. 3-Bromobutene
 3. 2-Bromopropene
 4. 1-Bromopentene

Question ID : 264330111869
Option 1 ID : 264330439563
Option 2 ID : 264330439562
Option 3 ID : 264330439561
Option 4 ID : 264330439564
Status : Not Answered
Chosen Option : --

Q.21 Kanaka Raju has been awarded Padma Shri in 2021 for which of the following folk dances?

- Ans 1. Gussadi
 2. Ganagor
 3. Bhavai
 4. Fugdi

Question ID : 264330145156
Option 1 ID : 264330568880
Option 2 ID : 264330568882
Option 3 ID : 264330568879
Option 4 ID : 264330568881
Status : Not Answered
Chosen Option : --

Q.22 Articles 36 to 51 of the Indian Constitution deal with _____.

- Ans
- 1. fundamental rights
 - 2. fundamental duties
 - 3. directive principles of state policy
 - 4. preamble of Indian constitution

Question ID : 264330111528

Option 1 ID : 264330438198

Option 2 ID : 264330438199

Option 3 ID : 264330438200

Option 4 ID : 264330438197

Status : Answered

Chosen Option : 3

Q.23 Calculate the GDP at factor cost given in the following data.

GDP at market price = 600 crores
Consumption of fixed capital = 100 crores
Indirect taxes = 200 crores
Subsidies = 50 crores

- Ans
- 1. 350 crores
 - 2. 850 crores
 - 3. 950 crores
 - 4. 450 crores

Question ID : 264330145252

Option 1 ID : 264330569263

Option 2 ID : 264330569265

Option 3 ID : 264330569266

Option 4 ID : 264330569264

Status : Not Answered

Chosen Option : --

Q.24 Which of the following was the major export item from India in 2021?

- Ans
- 1. Automobiles
 - 2. Jewellery
 - 3. Petroleum products
 - 4. Pharmaceuticals

Question ID : 264330112516

Option 1 ID : 264330442149

Option 2 ID : 264330442150

Option 3 ID : 264330442152

Option 4 ID : 264330442151

Status : Answered

Chosen Option : 3

Q.25 Tomb of Iltutmish was built in which year?

- Ans
- 1. 1388 AD
 - 2. 1458 AD
 - 3. 1235 AD
 - 4. 1199 AD

Question ID : 264330164849
Option 1 ID : 264330646524
Option 2 ID : 264330646525
Option 3 ID : 264330646526
Option 4 ID : 264330646523
Status : Answered
Chosen Option : 3

Q.26 Which of the following events took place in 1398?

- Ans
- 1. Humayun's flight to Persia
 - 2. Timur invasion of India
 - 3. Babur's invasion of Delhi
 - 4. Battle of Haldighati

Question ID : 26433091457
Option 1 ID : 264330359195
Option 2 ID : 264330359194
Option 3 ID : 264330359193
Option 4 ID : 264330359196
Status : Not Answered
Chosen Option : --

Q.27 After how many days of absence from Parliament without permission will a Member of Parliament be disqualified?

- Ans
- 1. 30 days
 - 2. 50 days
 - 3. 20 days
 - 4. 60 days

Question ID : 264330133080
Option 1 ID : 264330521372
Option 2 ID : 264330521374
Option 3 ID : 264330521373
Option 4 ID : 264330521371
Status : Not Answered
Chosen Option : --

Q.28 Which of the following statements is INCORRECT with regard to the Green Revolution?

- Ans
- 1. It was funded by international agencies.
 - 2. It was introduced in areas that were rain-fed.
 - 3. It was targeted mainly at the wheat and rice-growing areas.
 - 4. It was a government programme of agricultural modernisation.

Question ID : 264330168859
Option 1 ID : 264330662248
Option 2 ID : 264330662249
Option 3 ID : 264330662250
Option 4 ID : 264330662247
Status : Not Answered
Chosen Option : --

Q.29 The Fundamental Rights in the Indian Constitution are inspired by the 'Bill of Rights' of which of the following countries?

- Ans
- 1. Australia
 - 2. Japan
 - 3. The USSR
 - 4. The USA

Question ID : 264330113390

Option 1 ID : 264330445645

Option 2 ID : 264330445648

Option 3 ID : 264330445646

Option 4 ID : 264330445647

Status : Answered

Chosen Option : 4

Q.30 Who succeeded Alivardi Khan as Nawab of Bengal?

- Ans
- 1. Mir Jaffar
 - 2. Siraj-ud-Daulah
 - 3. Mir Kasim
 - 4. Shaukat Jang

Question ID : 264330112183

Option 1 ID : 264330440818

Option 2 ID : 264330440820

Option 3 ID : 264330440817

Option 4 ID : 264330440819

Status : Not Answered

Chosen Option : --

Q.31 Identify the correct statement about gravity.

- Ans
- 1. The unit of g is the same as that of velocity.
 - 2. The unit of g is the same as that of friction.
 - 3. The unit of g is the same as that of mass.
 - 4. The unit of g is the same as that of acceleration.

Question ID : 26433066663

Option 1 ID : 264330261178

Option 2 ID : 264330261177

Option 3 ID : 264330261179

Option 4 ID : 264330261176

Status : Answered

Chosen Option : 4

Q.32 Which of the following sets of statements are correct about Inter Tropical Convergence Zone (ITCZ)?

- a. The ITCZ is a broad trough of low pressure in equatorial latitudes.
- b. This is where the northeast and the southeast trade winds converge.
- c. The ITCZ is the equatorial trough normally positioned about 5°N of the equator and remain there throughout the year.
- d. The ITCZ moves over to the plane of Ganga in Summer.

- Ans
1. a, b and c
 2. Only a and c
 3. a, b and d
 4. Only b and c

Question ID : 264330169317
Option 1 ID : 264330664048
Option 2 ID : 264330664050
Option 3 ID : 264330664047
Option 4 ID : 264330664049
Status : Not Answered
Chosen Option : --

Q.33 'Wings of Fire' is the autobiography of _____.

- Ans
1. Zakir Husain
 2. Rajendra Prasad
 3. APJ Abdul Kalam
 4. KR Narayanan

Question ID : 26433071673
Option 1 ID : 264330281117
Option 2 ID : 264330281119
Option 3 ID : 264330281118
Option 4 ID : 264330281116
Status : Answered
Chosen Option : 3

Q.34 The Harshacharita is written in Sanskrit by _____.

- Ans
1. Harisena
 2. Banabhatta
 3. Harshavardhana
 4. Nagasena

Question ID : 264330165569
Option 1 ID : 264330649358
Option 2 ID : 264330649356
Option 3 ID : 264330649357
Option 4 ID : 264330649355
Status : Answered
Chosen Option : 2

Q.35 Which of the following policy measures is NOT a step towards liberalisation?

- Ans
- 1. Increase in equity limit of foreign investment
 - 2. Enhancement in tariffs
 - 3. Removal of industrial licensing for certain industries
 - 4. Removal of requirement of registration for certain industries

Question ID : 26433064578
Option 1 ID : 264330252907
Option 2 ID : 264330252906
Option 3 ID : 264330252904
Option 4 ID : 264330252905
Status : Not Answered
Chosen Option : --

Q.36 The Madhya Pradesh government conferred the Dhananjayans, a celebrated _____ couple from Chennai, with the prestigious Rashtriya Kalidas Samman for 2019-2020.

- Ans
- 1. Sattriya
 - 2. Kathakali
 - 3. Kuchipudi
 - 4. Bharatanatyam

Question ID : 26433054510
Option 1 ID : 264330213026
Option 2 ID : 264330213025
Option 3 ID : 264330213024
Option 4 ID : 264330213027
Status : Answered
Chosen Option : 4

Q.37 The _____ Five-Year Plan was the first plan to focus on gender issues, women empowerment and the growing inequalities amongst the states and inter-regional disparities.

- Ans
- 1. Sixth
 - 2. Third
 - 3. Fourth
 - 4. Fifth

Question ID : 264330145249
Option 1 ID : 264330569251
Option 2 ID : 264330569254
Option 3 ID : 264330569253
Option 4 ID : 264330569252
Status : Answered
Chosen Option : 1

Q.38 Who was the Lieutenant Governor of Jammu and Kashmir in October 2022?

- Ans 1. Satya Pal Malik
 2. Girish Chandra Murmu
 3. Manoj Sinha
 4. NN Vohra

Question ID : 264330113441
Option 1 ID : 264330445852
Option 2 ID : 264330445849
Option 3 ID : 264330445851
Option 4 ID : 264330445850
Status : Answered
Chosen Option : 3

Q.39 Which of the following is a source of tax revenue?

- Ans 1. Penalties
 2. Customs
 3. Profits
 4. Grants

Question ID : 264330145239
Option 1 ID : 264330569213
Option 2 ID : 264330569214
Option 3 ID : 264330569211
Option 4 ID : 264330569212
Status : Answered
Chosen Option : 2

Q.40 _____ are NOT considered surface water.

- Ans 1. Oceans
 2. Lakes
 3. Rivers
 4. Aquifers

Question ID : 264330163231
Option 1 ID : 264330640238
Option 2 ID : 264330640237
Option 3 ID : 264330640235
Option 4 ID : 264330640236
Status : Answered
Chosen Option : 4

Q.41 Bharatanatyam is traditionally performed to which type of music?

- Ans 1. Carnatic
 2. Baul
 3. Hindustani
 4. Lavani

Question ID : 26433092387
Option 1 ID : 264330362838
Option 2 ID : 264330362839
Option 3 ID : 264330362837
Option 4 ID : 264330362840
Status : Not Answered
Chosen Option : --

Q.42 Cricket became an international game with the formation of the Imperial Cricket Conference (ICC) in the year _____.

- Ans
- 1. 1947
 - 2. 1951
 - 3. 1909
 - 4. 1921

Question ID : 26433055190
Option 1 ID : 264330215747
Option 2 ID : 264330215745
Option 3 ID : 264330215744
Option 4 ID : 264330215746
Status : Answered
Chosen Option : 3

Q.43 _____ is characterized by abundant dissolved oxygen, sunlight, nutrients, generally high wave energies and water motion, and, in the intertidal subzone, alternating submergence and exposure.

- Ans
- 1. The Lentic Zone
 - 2. The Limnetic Zone
 - 3. The Littoral Zone
 - 4. The Benthic Zone

Question ID : 26433064210
Option 1 ID : 264330251433
Option 2 ID : 264330251434
Option 3 ID : 264330251432
Option 4 ID : 264330251435
Status : Not Answered
Chosen Option : --

Q.44 The first Indian who won a medal in World Athletics Championship is _____.

- Ans
- 1. Neeraj Chopra
 - 2. Anju Bobby George
 - 3. Murali Sreeshankar
 - 4. Annu Rani

Question ID : 264330109687
Option 1 ID : 264330431026
Option 2 ID : 264330431025
Option 3 ID : 264330431027
Option 4 ID : 264330431028
Status : Answered
Chosen Option : 1

Q.45 Which ecosystem is the only one that does NOT thrive on solar energy?

- Ans
- 1. Marine organisms
 - 2. Phytoplanktons
 - 3. Deep sea hydro-thermal ecosystem
 - 4. Nitrogen fixing bacteria

Question ID : 26433086751
Option 1 ID : 264330340647
Option 2 ID : 264330340646
Option 3 ID : 264330340648
Option 4 ID : 264330340645
Status : Not Answered
Chosen Option : --

Q.46 Nauroz is celebrated by which of the following communities in India?

- Ans 1. Buddhist
 2. Jain
 3. Sikh
 4. Parsi

Question ID : 264330164803
Option 1 ID : 264330646342
Option 2 ID : 264330646341
Option 3 ID : 264330646339
Option 4 ID : 264330646340
Status : Not Answered
Chosen Option : --

Q.47 Match the columns.

Seaport	State
1. Tuticorin Port	a. West Bengal
2. Haldia Port	b. Tamil Nadu
3. Mangalore Port	c. Karnataka

- Ans 1. 1-b, 2-a, 3-c
 2. 1-a, 2-b, 3-c
 3. 1-c, 2-a, 3-b
 4. 1-c, 2-b, 3-a

Question ID : 264330132721
Option 1 ID : 264330519980
Option 2 ID : 264330519979
Option 3 ID : 264330519981
Option 4 ID : 264330519982
Status : Answered
Chosen Option : 1

Q.48 Aluna Kabuini is associated with which of the following dances?

- Ans 1. Mohiniyattam
 2. Kathak
 3. Manipuri
 4. Sattriya

Question ID : 264330164797
Option 1 ID : 264330646316
Option 2 ID : 264330646315
Option 3 ID : 264330646317
Option 4 ID : 264330646318
Status : Not Answered
Chosen Option : --

Q.49 Identify the **INCORRECT** statement for the universal law of gravitation.

- Ans** 1. It is the force that binds us to earth
 2. It is the force causing tides due to the stars and earth
 3. It is the forces that assists motion of the moon around earth
 4. It is the force keeps motion of planets around the Sun

Question ID : 264330103818

Option 1 ID : 264330407573

Option 2 ID : 264330407576

Option 3 ID : 264330407574

Option 4 ID : 264330407575

Status : Not Answered

Chosen Option : --

Q.50 In the Interim Government formed on 2 September 1946, Liaquat Ali Khan was given the charge of:

- Ans** 1. the Home Ministry
 2. the Finance Ministry
 3. the External Affairs Ministry
 4. the Defence Ministry

Question ID : 264330106645

Option 1 ID : 264330418881

Option 2 ID : 264330418882

Option 3 ID : 264330418883

Option 4 ID : 264330418884

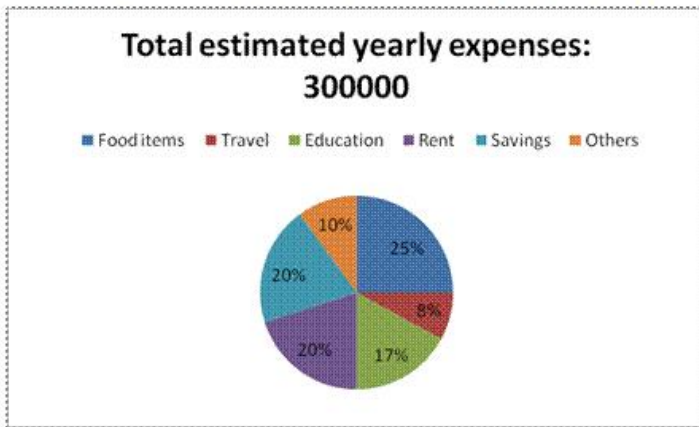
Status : Not Answered

Chosen Option : --

Section : Quantitative Aptitude

Prepare 50% Faster

Q.1 Study the following pie chart and answer the below question:



How much per cent is more expense on rent than the expense on others?

- Ans
- 1. 10%
 - 2. 150%
 - 3. 50%
 - 4. 100%

Question ID : 264330158397

Option 1 ID : 264330620947

Option 2 ID : 264330620950

Option 3 ID : 264330620948

Option 4 ID : 264330620949

Status : Answered

Chosen Option : 4

Q.2 A person sold two cars for ₹60,000 each. On one, he gained 20% while on the other he lost 20%. Find the percentage of his gain or loss.

- Ans
- 1. Gain 4%
 - 2. Loss 4%
 - 3. Loss 2%
 - 4. No profit and no loss

Question ID : 264330130383

Option 1 ID : 264330510645

Option 2 ID : 264330510644

Option 3 ID : 264330510646

Option 4 ID : 264330510643

Status : Answered

Chosen Option : 2

Q.3 The LCM of 96, 132 and 438 is:

- Ans
- 1. 86084
 - 2. 67055
 - 3. 85046
 - 4. 77088

Question ID : 26433064884

Option 1 ID : 264330254129

Option 2 ID : 264330254131

Option 3 ID : 264330254128

Option 4 ID : 264330254130

Status : Answered

Chosen Option : 4

Q.4 Three candidates contested an election and won 1136, 7636 and 11628 votes, respectively. What percentage of the total votes did the winning candidate get?

- Ans
- 1. 45
 - 2. 49
 - 3. 33
 - 4. 57

Question ID : 264330145050
Option 1 ID : 264330568457
Option 2 ID : 264330568456
Option 3 ID : 264330568458
Option 4 ID : 264330568455
Status : Not Answered
Chosen Option : --

Q.5 Ram has 12 hens and 5 cows, Shyam has 18 hens and 9 cows, Preetham has 4 hens and 8 cows, and Vinay has 10 hens and 7 cows. Who has a greater ratio of hens to cows?

- Ans
- 1. Preetham
 - 2. Shyam
 - 3. Ram
 - 4. Vinay

Question ID : 264330104253
Option 1 ID : 264330409316
Option 2 ID : 264330409313
Option 3 ID : 264330409314
Option 4 ID : 264330409315
Status : Answered
Chosen Option : 3

Q.6 A sphere and another solid hemisphere have the same surface area. The ratio of their volumes is:

- Ans
- 1. $2\sqrt{3} : 8$
 - 2. $3\sqrt{3} : 8$
 - 3. $3\sqrt{3} : 4$
 - 4. $\sqrt{3} : 4$

Question ID : 264330123007
Option 1 ID : 264330482093
Option 2 ID : 264330482094
Option 3 ID : 264330482092
Option 4 ID : 264330482091
Status : Answered
Chosen Option : 2

Q.7 The curved surface area of a solid cylinder of height 15 cm is 660 cm^2 . What is the volume (in cm^3) of the cylinder? (Take $\pi = \frac{22}{7}$)

- Ans
- 1. 2060
 - 2. 2540
 - 3. 2310
 - 4. 3210

Question ID : 264330145115
Option 1 ID : 264330568717
Option 2 ID : 264330568715
Option 3 ID : 264330568716
Option 4 ID : 264330568718
Status : Answered
Chosen Option : 3

Q.8 The total surface area of a cone whose radius is 3 cm and height is 4 cm is:

- Ans
- 1. $\frac{425}{7} \text{ cm}^2$
 - 2. $\frac{501}{9} \text{ cm}^2$
 - 3. $\frac{475}{8} \text{ cm}^2$
 - 4. $\frac{528}{7} \text{ cm}^2$

Question ID : 264330103752
Option 1 ID : 264330407313
Option 2 ID : 264330407315
Option 3 ID : 264330407314
Option 4 ID : 264330407316
Status : Answered
Chosen Option : 4

Q.9 Julie and Soma start from the same point and walk in opposite directions. Julie walks 4 km/h faster than Soma. After 4 hours they are 40 km apart. How fast did each walk?

- Ans
- 1. Julie – 8 km/h; Soma – 4 km/h
 - 2. Julie – 7 km/h; Soma – 3 km/h
 - 3. Julie – 9 km/h; Soma – 5 km/h
 - 4. Julie – 10 km/h; Soma – 6 km/h

Question ID : 264330103741
Option 1 ID : 264330407270
Option 2 ID : 264330407269
Option 3 ID : 264330407271
Option 4 ID : 264330407272
Status : Answered
Chosen Option : 4

Q.10 Arbind has 650 kg of wheat. A part of which he sells at 9% profit and the rest at 19% profit to get 15% profit on the whole. What is the quantity (in kg) of wheat sold by Arbind at 9% profit?

- Ans 1. 260
 2. 195
 3. 455
 4. 390

Question ID : 264330108980
Option 1 ID : 264330428197
Option 2 ID : 264330428199
Option 3 ID : 264330428200
Option 4 ID : 264330428198
Status : Answered
Chosen Option : 1

Q.11 What is the LCM of 0.15, 0.18 and 0.45?

- Ans 1. 0.9
 2. 0.09
 3. 0.81
 4. 0.6

Question ID : 26433063279
Option 1 ID : 264330247770
Option 2 ID : 264330247769
Option 3 ID : 264330247771
Option 4 ID : 264330247768
Status : Answered
Chosen Option : 2

Q.12 A train of length 180 m takes 40 seconds to cross a tunnel of length 500 m. What is the speed of the train, in km/h?

- Ans 1. 71.2
 2. 61.2
 3. 80.5
 4. 52.5

Question ID : 264330145033
Option 1 ID : 264330568389
Option 2 ID : 264330568388
Option 3 ID : 264330568390
Option 4 ID : 264330568387
Status : Answered
Chosen Option : 2

Q.13

Find the value of $\frac{\sin^2 39^\circ + \sin^2(90^\circ - 39^\circ)}{\cos^2 35^\circ + \cos^2(90^\circ - 35^\circ)} + 3\tan 25^\circ \tan 75^\circ$:

- Ans
- 1. 2
 - 2. 4
 - 3. 3
 - 4. 1

Question ID : 264330158422
Option 1 ID : 264330621049
Option 2 ID : 264330621047
Option 3 ID : 264330621048
Option 4 ID : 264330621050
Status : Answered
Chosen Option : 3

Q.14 Which of the following ratios is the greatest?

- Ans
- 1. 2 : 5
 - 2. 7 : 10
 - 3. 5 : 6
 - 4. 1 : 3

Question ID : 264330145075
Option 1 ID : 264330568556
Option 2 ID : 264330568558
Option 3 ID : 264330568557
Option 4 ID : 264330568555
Status : Answered
Chosen Option : 3

Q.15 Find the LCM of 20, 30, 45 and 65.

- Ans
- 1. 2000
 - 2. 2340
 - 3. 2240
 - 4. 180

Question ID : 26433063435
Option 1 ID : 264330248393
Option 2 ID : 264330248394
Option 3 ID : 264330248392
Option 4 ID : 264330248395
Status : Answered
Chosen Option : 2

Q.16 The greatest possible length that can be used to measure exactly the lengths of 3 m 15 cm, 5 m, and 6 m 85 cm is:

- Ans
- 1. 9 cm
 - 2. 11 cm
 - 3. 7 cm
 - 4. 5 cm

Question ID : 26433091512
Option 1 ID : 264330359415
Option 2 ID : 264330359416
Option 3 ID : 264330359414
Option 4 ID : 264330359413
Status : Answered
Chosen Option : 4

Q.17

If $\frac{x}{4y} = \frac{3}{4}$, then the value of $\frac{2x + 3y}{x - 2y}$ is:

- Ans
- 1. 7
 - 2. 9
 - 3. 6
 - 4. 8

Question ID : 264330157771

Option 1 ID : 264330618444

Option 2 ID : 264330618446

Option 3 ID : 264330618443

Option 4 ID : 264330618445

Status : Answered

Chosen Option : 2

Q.18 The difference between a discount of 30% on ₹5,000 and two successive discounts of 15% and 25% on the same amount is:

- Ans
- 1. ₹315.50
 - 2. ₹350.50
 - 3. ₹312.50
 - 4. ₹412.50

Question ID : 264330104509

Option 1 ID : 264330410337

Option 2 ID : 264330410340

Option 3 ID : 264330410338

Option 4 ID : 264330410339

Status : Answered

Chosen Option : 3

Q.19 Two circles with centres P and Q of radii 6 cm and 4 cm, respectively, touch each other internally. If the perpendicular bisector of PQ meets the bigger circle in A and B, then the value of AB is:

- Ans
- 1. $\sqrt{5}$ cm
 - 2. $2\sqrt{35}$ cm
 - 3. $\sqrt{35}$ cm
 - 4. $2\sqrt{5}$ cm

Question ID : 264330163483

Option 1 ID : 264330641194

Option 2 ID : 264330641192

Option 3 ID : 264330641191

Option 4 ID : 264330641193

Status : Answered

Chosen Option : 4

Q.20 The monthly income of an employee was ₹26,500 and his monthly expenditure was ₹22,000. Next year his income increased by 20% and his expenditure increased by 15%. Find the percentage increase in his savings.

Ans

1. $44\frac{7}{9}\%$

2. $44\frac{8}{9}\%$

3. $44\frac{5}{9}\%$

4. $44\frac{4}{9}\%$

Question ID : 264330157712

Option 1 ID : 264330618209

Option 2 ID : 264330618210

Option 3 ID : 264330618208

Option 4 ID : 264330618207

Status : Answered

Chosen Option : 4

Q.21 Find the value of $\sin(50^\circ + A) - \cos(40^\circ - A)$.

Ans

1. 2

2. 0

3. -1

4. 1

Question ID : 264330157748

Option 1 ID : 264330618354

Option 2 ID : 264330618351

Option 3 ID : 264330618353

Option 4 ID : 264330618352

Status : Answered

Chosen Option : 2

Q.22 A sum amounts to ₹7,656 in 4 years and to ₹8,120 in 5 years at a certain simple interest rate per cent per annum. The rate of interest is:

Ans

1. 4%

2. 3%

3. 7%

4. 8%

Question ID : 264330165156

Option 1 ID : 264330647723

Option 2 ID : 264330647725

Option 3 ID : 264330647724

Option 4 ID : 264330647726

Status : Answered

Chosen Option : 4

Q.23

If $a - \frac{1}{a} = 4$, then the value of $a + \frac{1}{a}$ is:

- Ans
- 1. $5\sqrt{5}$
 - 2. $4\sqrt{5}$
 - 3. $2\sqrt{5}$
 - 4. $3\sqrt{5}$

Question ID : 264330157764

Option 1 ID : 264330618418

Option 2 ID : 264330618417

Option 3 ID : 264330618415

Option 4 ID : 264330618416

Status : Answered

Chosen Option : 3

Q.24 Vipin can do a piece of work in 2 days; Vaibhav can do the same work in 3 days and Chirag can do the same work in 6 days. If they start working together, how many days will they take to complete the work?

- Ans
- 1. 3
 - 2. 1
 - 3. 5
 - 4. 4

Question ID : 264330102374

Option 1 ID : 264330401963

Option 2 ID : 264330401964

Option 3 ID : 264330401961

Option 4 ID : 264330401962

Status : Answered

Chosen Option : 2

Q.25 Two successive discounts of 30% and 20% are equivalent to a single discount of:

- Ans
- 1. 44%
 - 2. 52%
 - 3. 45%
 - 4. 50%

Question ID : 264330129421

Option 1 ID : 264330507050

Option 2 ID : 264330507053

Option 3 ID : 264330507052

Option 4 ID : 264330507051

Status : Answered

Chosen Option : 1

Q.26 The LCM of $x^2 - 8x + 15$ and $x^2 - 5x + 6$ is:

- Ans
- 1. $(x - 2)(x - 3)^2(x - 5)$
 - 2. $(x + 5)(x + 2)(x + 3)$
 - 3. $(x + 5)(x - 2)(x - 3)$
 - 4. $(x - 5)(x - 2)(x - 3)$

Question ID : 26433063990

Option 1 ID : 264330250554

Option 2 ID : 264330250555

Option 3 ID : 264330250552

Option 4 ID : 264330250553

Status : Answered

Chosen Option : 4

Q.27 The average of 45 numbers was found to be 39. Later on, it was detected that a number 65 was misread as 56. Find the correct average of the given numbers.

- Ans
- 1. 39.2
 - 2. 37.2
 - 3. 38.2
 - 4. 36.2

Question ID : 264330104283

Option 1 ID : 264330409436

Option 2 ID : 264330409434

Option 3 ID : 264330409435

Option 4 ID : 264330409433

Status : Answered

Chosen Option : 1

Q.28 Robert takes twice as much time as Tom and thrice as much time as George to complete a work. If working together, they can complete it in 23 hours, then find the time that Tom will take to complete the work.

- Ans
- 1. 46 hours
 - 2. 69 hours
 - 3. 11 hours
 - 4. 39 hours

Question ID : 26433083054

Option 1 ID : 264330326051

Option 2 ID : 264330326050

Option 3 ID : 264330326052

Option 4 ID : 264330326049

Status : Answered

Chosen Option : 2

Q.29 Two metallic balls P and Q are such that the diameter of P is four times the diameter of Q. What is the ratio between the volumes of P and Q?

- Ans
- 1. 32:1
 - 2. 16:1
 - 3. 8:1
 - 4. 64:1

Question ID : 264330104212
Option 1 ID : 264330409151
Option 2 ID : 264330409150
Option 3 ID : 264330409149
Option 4 ID : 264330409152
Status : Answered
Chosen Option : 4

Q.30 A runner runs a 750-metre race in 54 seconds. Find the runner's speed (in km/h).

- Ans
- 1. 40
 - 2. 30
 - 3. 14
 - 4. 50

Question ID : 264330145069
Option 1 ID : 264330568533
Option 2 ID : 264330568532
Option 3 ID : 264330568531
Option 4 ID : 264330568534
Status : Answered
Chosen Option : 4

Q.31 Out of two concentric circles, the radius of the outer circle is 6 cm and the chord PQ of the length 10 cm is a tangent to the inner circle. Find the radius (in cm) of the inner circle.

- Ans
- 1. 4
 - 2. $\sqrt{7}$
 - 3. $\sqrt{13}$
 - 4. $\sqrt{11}$

Question ID : 264330163484
Option 1 ID : 264330641198
Option 2 ID : 264330641195
Option 3 ID : 264330641197
Option 4 ID : 264330641196
Status : Answered
Chosen Option : 4

Q.32 Simplify the following.

$$9 \times 2 \div 3 \text{ of } 24 - 3 \div 2 \times (6 - 7) \times 2 + 3 \div 3 \text{ of } 5$$

Ans 1. 3

2. $\frac{9}{20}$

3. 4

4. $\frac{69}{20}$

Question ID : 26433073054

Option 1 ID : 264330286410

Option 2 ID : 264330286409

Option 3 ID : 264330286411

Option 4 ID : 264330286408

Status : Answered

Chosen Option : 4

Q.33 What will be the area of a plot of quadrilateral shape, one of whose diagonals is 20 m and lengths of the perpendiculars from the opposite vertices on it are 12 m and 18 m, respectively?

Ans 1. 400 m²

2. 250 m²

3. 200 m²

4. 300 m²

Question ID : 264330145136

Option 1 ID : 264330568802

Option 2 ID : 264330568800

Option 3 ID : 264330568799

Option 4 ID : 264330568801

Status : Not Answered

Chosen Option : --

Q.34 In a survey, 200 respondents were asked whether they owned a vehicle or not. Their responses are tabulated below. What percentage of respondents do NOT own a car?

		Men	Women
Own Vehicle	Scooter	30	20
	Car	25	10
	Both	15	5
Do not own vehicle		50	45

Ans 1. 68.5%

2. 75%

3. 65%

4. 72.5%

Question ID : 264330167240

Option 1 ID : 264330655956

Option 2 ID : 264330655958

Option 3 ID : 264330655955

Option 4 ID : 264330655957

Status : Not Answered

Chosen Option : --

Q.35 Study the given table and answer the question that follows.

The table shows the number of students studying in six different classes of six different schools.

School	Class V	Class VI	Class VII	Class VIII	Class IX	Class X
P	152	160	145	156	147	144
Q	148	166	150	155	157	143
R	161	152	140	145	143	165
S	159	142	149	140	142	168
T	147	144	158	163	154	150
U	150	160	162	160	161	140
Total	917	924	904	919	904	910

The number of students studying in class VII from school U is what percentage of the total number of students from all the classes together from that school (rounded off to 2 digits after decimal)?

- Ans**
- 1. 16.48%
 - 2. 18.25%
 - 3. 15.63%
 - 4. 17.36%

Question ID : 264330145101
Option 1 ID : 264330568660
Option 2 ID : 264330568662
Option 3 ID : 264330568659
Option 4 ID : 264330568661

Status : Answered

Chosen Option : 4

Q.36 Study the following table carefully and answer the questions based on it.

The following table shows the domestic sales of vehicles of four manufacturers from 2010 to 2015.

Manufacturer	2010	2011	2012	2013	2014	2015
A	560000	580000	600000	620000	650000	680000
B	540000	590000	570000	630000	710000	550000
C	610000	580000	620000	680000	690000	630000
D	630000	570000	700000	690000	700000	640000

With respect to which of the following combinations, is the sales of vehicles lowest over the given period?

- Ans**
- 1. A, 2010
 - 2. B, 2015
 - 3. B, 2010
 - 4. A, 2011

Question ID : 26433074318
Option 1 ID : 264330291393
Option 2 ID : 264330291395
Option 3 ID : 264330291392
Option 4 ID : 264330291394

Status : Not Answered

Chosen Option : --

Q.37

If $\sin \theta + \cos \theta = \frac{\sqrt{11}}{3}$, then what is $\sin \theta - \cos \theta$?

Ans

✗ 1. $\frac{\sqrt{7}}{4}$

✓ 2. $\frac{\sqrt{7}}{3}$

✗ 3. $\frac{\sqrt{5}}{3}$

✗ 4. $\frac{\sqrt{5}}{2}$

Question ID : 264330130415

Option 1 ID : 264330510772

Option 2 ID : 264330510774

Option 3 ID : 264330510771

Option 4 ID : 264330510773

Status : Answered

Chosen Option : 3

Q.38 The following table shows the marks obtained out of 100, by 5 students in 5 different subjects.

Students	Hindi	English	Maths	Science	Social
Ravi	78	84	88	75	79
Abhishek	84	86	78	89	80
Ayush	88	80	90	82	85
Rohit	72	85	88	89	78
Aryan	86	88	77	79	89

What are the total marks scored by Ayush in all the subjects?

Ans ✗ 1. 435

✗ 2. 465

✗ 3. 445

✓ 4. 425

Question ID : 264330158617

Option 1 ID : 264330621828

Option 2 ID : 264330621830

Option 3 ID : 264330621829

Option 4 ID : 264330621827

Status : Answered

Chosen Option : 4

Q.39 A family earns ₹75,000, out of which 10% is saved. 30% of the expenditure is incurred on education, while ₹30,375 is spent on health and the remaining amount is spent on food. What is the percentage of food expenditure to the total income?

- Ans
- 1. 32.5%
 - 2. 22.5%
 - 3. 20%
 - 4. 21.5%

Question ID : 264330103314
Option 1 ID : 264330405562
Option 2 ID : 264330405564
Option 3 ID : 264330405563
Option 4 ID : 264330405561
Status : Not Answered
Chosen Option : --

Q.40 Study the given table and answer the question that follows.
The table shows the number of employees in five different organisations A, B, C, D and E in different departments.

Dept ↓ Org →	A	B	C	D	E
HR	1050	1015	976	888	1004
Finance	1017	960	786	1025	963
Marketing	1382	1384	1275	1300	1290
Production	1542	1545	4550	1570	1580
Accounts	786	745	801	800	735
Legal	48	54	36	30	53
Total	5825	5703	5424	5613	5625

Which organisation has maximum number of employees?

- Ans
- 1. A
 - 2. B
 - 3. D
 - 4. E

Question ID : 264330157715
Option 1 ID : 264330618219
Option 2 ID : 264330618220
Option 3 ID : 264330618221
Option 4 ID : 264330618222
Status : Answered
Chosen Option : 1

Q.41 Find the amount (integral value only) if a sum of ₹6,500 is being borrowed at 10% interest per annum for 2 years if interest is compounded half-yearly.

- Ans
- 1. ₹8,250
 - 2. ₹7,650
 - 3. ₹8,150
 - 4. ₹7,900

Question ID : 264330145056
Option 1 ID : 264330568481
Option 2 ID : 264330568480
Option 3 ID : 264330568482
Option 4 ID : 264330568479
Status : Answered
Chosen Option : 4

Q.42 A can do a certain piece of work in 2.4 times the number of days in which B and C together can do it. If A and B together can do the said piece of work in 27 days and C alone can do it in 75 days, then how many days will B take to do this piece of work alone?

- Ans
- 1. 54
 - 2. 48
 - 3. 45
 - 4. 42

Question ID : 264330114535
Option 1 ID : 264330450228
Option 2 ID : 264330450226
Option 3 ID : 264330450225
Option 4 ID : 264330450227
Status : Not Answered
Chosen Option : --

Q.43 Two circles touch each other externally at C. AB is a direct common tangent to the two circles, A and B are points of contact and $\angle CAB = 55^\circ$. Then $\angle ACB$ is:

- Ans
- 1. 35°
 - 2. 90°
 - 3. 55°
 - 4. 45°

Question ID : 264330165663
Option 1 ID : 264330649732
Option 2 ID : 264330649733
Option 3 ID : 264330649731
Option 4 ID : 264330649734
Status : Not Answered
Chosen Option : --

Q.44 The following table shows the data of 10th grade students of Portland High school.

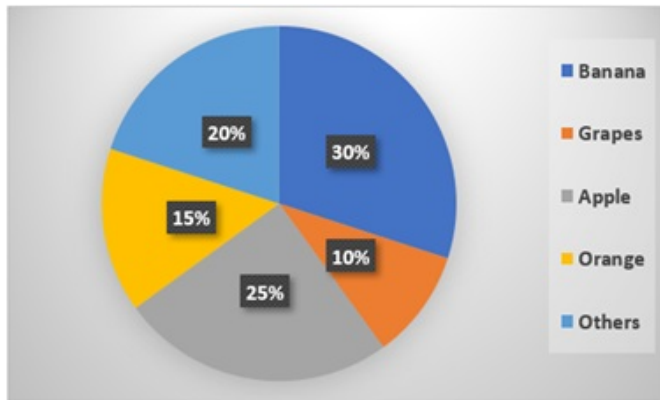
	Boys	Girls
Enrolled in Science	25	20
Not enrolled in Science	20	30

What is the approximate percentage of the 10th grade boys of Portland High school who are NOT enrolled in Science?

- Ans
- 1. 22.22%
 - 2. 55.55%
 - 3. 33.33%
 - 4. 44.44%

Question ID : 264330167243
Option 1 ID : 264330655970
Option 2 ID : 264330655968
Option 3 ID : 264330655967
Option 4 ID : 264330655969
Status : Answered
Chosen Option : 4

Q.45 Study the given pie-chart and answer the question that follows.
The pie-chart shows the sale of different fruits in a shop in a day.



If a total of 1200 kg of fruits were sold in a day, find the difference between sales of grapes and oranges (in kg).

- Ans
- ✓ 1. 60
 - ✗ 2. 55
 - ✗ 3. 65
 - ✗ 4. 45

Question ID : 264330157736
 Option 1 ID : 264330618305
 Option 2 ID : 264330618304
 Option 3 ID : 264330618306
 Option 4 ID : 264330618303
 Status : Answered
 Chosen Option : 1

Q.46 Study the given table chart carefully and answer the question that follows.
The given table represents the number of employees in five different organisations, i.e., A, B, C, D and E in 2019, 2020, 2021 and 2022.

Organisation	Years			
	2019	2020	2021	2022
A	4000	7800	2600	5200
B	3800	9200	9100	7300
C	4500	5500	7800	3250
D	7000	3800	8000	4650
E	6600	6200	7600	2880

The ratio of the number of employees in 2019 in organisations D and E taken together to that in 2021 in the same organisations is:

- Ans
- ✗ 1. 9 : 14
 - ✗ 2. 39 : 34
 - ✗ 3. 14 : 9
 - ✓ 4. 34 : 39

Question ID : 264330165171
 Option 1 ID : 264330647785
 Option 2 ID : 264330647784
 Option 3 ID : 264330647786
 Option 4 ID : 264330647783
 Status : Answered
 Chosen Option : 4

Q.47 If $\tan\theta + \cot\theta = 2$, θ is an acute angle, then find the value of $2 \tan^{25} \theta + 3 \cot^{20} \theta + 5 \tan^{30} \theta \cot^{15} \theta$.

- Ans
- 1. 1.8
 - 2. 2.6
 - 3. 10
 - 4. 12

Question ID : 264330145126

Option 1 ID : 264330568760

Option 2 ID : 264330568759

Option 3 ID : 264330568761

Option 4 ID : 264330568762

Status : Not Answered

Chosen Option : --

Q.48 In an equilateral $\triangle PQR$, S is point on the side QR such that $QR = 3QS$. If $PQ = 9$ cm, then what will be the length (in cm) of PS?

- Ans
- 1. $\sqrt{60}$
 - 2. $\sqrt{63}$
 - 3. $\sqrt{62}$
 - 4. $\sqrt{61}$

Question ID : 264330165691

Option 1 ID : 264330649843

Option 2 ID : 264330649846

Option 3 ID : 264330649845

Option 4 ID : 264330649844

Status : Not Answered

Chosen Option : --

Q.49 By selling a table for ₹1,596, Aarav loses 24%. At what price (in ₹) should he sell it to gain 24%?

- Ans
- 1. 3196
 - 2. 3024
 - 3. 1979
 - 4. 2604

Question ID : 264330102341

Option 1 ID : 264330401830

Option 2 ID : 264330401831

Option 3 ID : 264330401829

Option 4 ID : 264330401832

Status : Answered

Chosen Option : 4

Q.50 What will be the least number which when doubled will be exactly divisible by 12, 14, 16 and 18?

- Ans
- 1. 636
 - 2. 428
 - 3. 504
 - 4. 226

Question ID : 26433075091
Option 1 ID : 264330294455
Option 2 ID : 264330294453
Option 3 ID : 264330294454
Option 4 ID : 264330294452
Status : Answered
Chosen Option : 3

Section : English Comprehension

Q.1 Select the most appropriate ANTONYM for the highlighted word.
They drank some spurious drink and fainted.

- Ans
- 1. curious
 - 2. artificial
 - 3. nefarious
 - 4. genuine

Question ID : 264330120740
Option 1 ID : 264330473176
Option 2 ID : 264330473175
Option 3 ID : 264330473177
Option 4 ID : 264330473178
Status : Not Answered
Chosen Option : --

Q.2 Select the option that can be used as a one-word substitute for the underlined group of words.

Children and adolescents with a morbid compulsion to steal experience a growing sense of tension just before stealing, followed by pleasure, relief or gratification during or just after stealing.

- Ans
- 1. Pyromania
 - 2. Kleptomania
 - 3. Dipsomania
 - 4. Megalomania

Question ID : 26433088834
Option 1 ID : 264330348889
Option 2 ID : 264330348892
Option 3 ID : 264330348891
Option 4 ID : 264330348890
Status : Answered
Chosen Option : 2

Q.3 Select the most appropriate idiom for the given situation focusing on the underlined segment.

I know every detail of his accident because I heard the facts directly from him.

- Ans
- 1. Speak of the devil
 - 2. Get something out of your system
 - 3. Pour one's heart out
 - 4. Straight from horse's mouth

Question ID : 264330163407

Option 1 ID : 264330640909

Option 2 ID : 264330640908

Option 3 ID : 264330640907

Option 4 ID : 264330640910

Status : Answered

Chosen Option : 4

Q.4 Select the option that can be used as a one-word substitute for the given group of words.

Study of coins

- Ans
- 1. Philately
 - 2. Antiquary
 - 3. Numismatics
 - 4. Apothecary

Question ID : 26433088808

Option 1 ID : 264330348787

Option 2 ID : 264330348786

Option 3 ID : 264330348788

Option 4 ID : 264330348785

Status : Answered

Chosen Option : 3

Q.5 Select the most appropriate option that can substitute the underlined segment in the given sentence. If there is no need to substitute it, select 'No substitution'.
The teacher asked the students to be quite during the exam.

- Ans
- 1. No substitution
 - 2. be quiet
 - 3. have quiet
 - 4. been quiet

Question ID : 264330137494

Option 1 ID : 264330538598

Option 2 ID : 264330538595

Option 3 ID : 264330538597

Option 4 ID : 264330538596

Status : Answered

Chosen Option : 2

Q.6 Select the most appropriate option that can substitute the underlined segment in the given sentence.

The platter was insipid, so we refused to pay the bill.

- Ans
- 1. full of flavours
 - 2. filled with dirt
 - 3. full of spices
 - 4. lacking taste

Question ID : 26433099886
Option 1 ID : 264330392135
Option 2 ID : 264330392134
Option 3 ID : 264330392133
Option 4 ID : 264330392136
Status : Not Answered
Chosen Option : --

Q.7 Select the most appropriate meaning of the underlined idiom.
Doctors are raising hue and cry against the RTH bill.

- Ans
- 1. Enquire
 - 2. Protest
 - 3. Postpone
 - 4. Abandon

Question ID : 264330139489
Option 1 ID : 264330546388
Option 2 ID : 264330546387
Option 3 ID : 264330546390
Option 4 ID : 264330546389
Status : Answered
Chosen Option : 1

Q.8 Select the most appropriate meaning of the underlined idiom.

Technology has become a part and parcel of modern lifestyle.

- Ans
- 1. an obstacle
 - 2. a myth
 - 3. a useless part
 - 4. an integral part

Question ID : 26433099086
Option 1 ID : 264330388978
Option 2 ID : 264330388980
Option 3 ID : 264330388977
Option 4 ID : 264330388979
Status : Answered
Chosen Option : 4

Q.9 Select the most appropriate synonym of the given word.

Major

- Ans
- 1. Diligent
 - 2. Shallow
 - 3. Considerable
 - 4. Creviced

Question ID : 264330120279
Option 1 ID : 264330471369
Option 2 ID : 264330471370
Option 3 ID : 264330471368
Option 4 ID : 264330471367
Status : Answered
Chosen Option : 1

Q.10 Select the most appropriate option to fill in the blank.

Being courteous _____ costs you nothing.

- Ans
- 1. No article required
 - 2. an
 - 3. a
 - 4. the

Question ID : 264330145276
Option 1 ID : 264330569362
Option 2 ID : 264330569361
Option 3 ID : 264330569360
Option 4 ID : 264330569359
Status : Answered
Chosen Option : 4

Q.11 Select the most appropriate meaning of the given idiom.
Hear someone out

- Ans
- 1. Let someone complete what they are saying
 - 2. Hear from far away
 - 3. Dismiss someone from listening to you
 - 4. Keep someone out

Question ID : 264330137448
Option 1 ID : 264330538417
Option 2 ID : 264330538416
Option 3 ID : 264330538415
Option 4 ID : 264330538418
Status : Answered
Chosen Option : 1

Q.12 Select the most appropriate ANTONYM of the given word.

Ethical

- Ans
- 1. Discord
 - 2. Joyous
 - 3. Mourning
 - 4. Immoral

Question ID : 264330163377
Option 1 ID : 264330640796
Option 2 ID : 264330640798
Option 3 ID : 264330640795
Option 4 ID : 264330640797
Status : Not Answered
Chosen Option : --

Q.13 Select the most appropriate synonym of the given word.
Vagrancy

- Ans
- 1. Vagueness
 - 2. Exploration
 - 3. Vagabond
 - 4. Fragrance

Question ID : 26433099848
Option 1 ID : 264330391989
Option 2 ID : 264330391992
Option 3 ID : 264330391991
Option 4 ID : 264330391990
Status : Not Answered
Chosen Option : --

Q.14 Select the most appropriate meaning of the given idiom.
Build castles in the air

- Ans
- 1. To make useless efforts
 - 2. To talk pointlessly
 - 3. To make imaginary schemes
 - 4. To build a palatial house

Question ID : 264330117183
Option 1 ID : 264330460793
Option 2 ID : 264330460795
Option 3 ID : 264330460794
Option 4 ID : 264330460796
Status : Answered
Chosen Option : 3

Q.15 Select the most appropriate meaning of the given idiom.

Bite your tongue

- Ans
- 1. To scold someone verbally
 - 2. To drink very heavily
 - 3. To avoid saying something
 - 4. To have something explored

Question ID : 26433092310
Option 1 ID : 264330362538
Option 2 ID : 264330362537
Option 3 ID : 264330362539
Option 4 ID : 264330362540
Status : Answered
Chosen Option : 3

Q.16 Select the option that will improve the underlined part of the given sentence. In case no improvement is needed, select 'No improvement required'.
Lily has dedicate her life towards becoming a doctor.

- Ans
- 1. had dedicate
 - 2. is dedicate
 - 3. No improvement required
 - 4. has dedicated

Question ID : 26433060758
Option 1 ID : 264330237805
Option 2 ID : 264330237806
Option 3 ID : 264330237807
Option 4 ID : 264330237804
Status : Answered
Chosen Option : 4

Q.17 Select the most appropriate synonym of the given word.

Diabolical

- Ans
- 1. Malicious
 - 2. Sycophant
 - 3. Celestial
 - 4. Sophisticated

Question ID : 264330163395
Option 1 ID : 264330640860
Option 2 ID : 264330640862
Option 3 ID : 264330640859
Option 4 ID : 264330640861
Status : Not Answered
Chosen Option : --

Q.18 Select the INCORRECTLY spelt word

- Ans
- 1. Legitimate
 - 2. Exaggerate
 - 3. Propagate
 - 4. Promulgate

Question ID : 26433089354
Option 1 ID : 264330350919
Option 2 ID : 264330350917
Option 3 ID : 264330350918
Option 4 ID : 264330350920
Status : Answered
Chosen Option : 2

Q.19 Select the most appropriate ANTONYM of the underlined word in the given sentence.

The court absolved the defendant of all charges due to lack of evidence.

- Ans
- 1. accused
 - 2. condemned
 - 3. attacked
 - 4. criticised

Question ID : 264330164569
Option 1 ID : 264330645464
Option 2 ID : 264330645466
Option 3 ID : 264330645463
Option 4 ID : 264330645465
Status : Not Answered
Chosen Option : --

Q.20 Select the correctly spelt sentence.

- Ans
- 1. The country's GDP bloomed despite the ongoing war situation.
 - 2. The country's GDP bloomed dispete the ongoing war situation.
 - 3. The country's GDP bloomed despete the ongoing war situation
 - 4. The country's GDP bloomed dispite the ongoing war situation.

Question ID : 26433088907
Option 1 ID : 264330349175
Option 2 ID : 264330349174
Option 3 ID : 264330349173
Option 4 ID : 264330349176
Status : Answered
Chosen Option : 1

Q.21 Select the most appropriate ANTONYM of the given word.
Calm

- Ans
- 1. Turbulent
 - 2. Shocked
 - 3. Variable
 - 4. Confused

Question ID : 26433099659
Option 1 ID : 264330391242
Option 2 ID : 264330391243
Option 3 ID : 264330391241
Option 4 ID : 264330391244
Status : Answered
Chosen Option : 4

Q.22 Select the most appropriate option that can substitute the underlined segment in the given sentence. If there is no need to substitute it, select 'No substitution required'.

The cat climbed a tree and perched itself on a branch.

- Ans
- 1. parched
 - 2. No substitution required
 - 3. perked
 - 4. perished

Question ID : 26433090851
Option 1 ID : 264330356813
Option 2 ID : 264330356816
Option 3 ID : 264330356815
Option 4 ID : 264330356814
Status : Answered
Chosen Option : 1

Q.23 Select the INCORRECTLY spelt word from the underlined words in the following sentence.

But he waited with the inconceivable patience and persistancy of the race; besides, he was certain, the cat was a creature of absolute convictions and his faith in his deductions never wavered.

- Ans
- 1. inconceivable
 - 2. deductions
 - 3. convictions
 - 4. persistancy

Question ID : 264330141160
Option 1 ID : 264330552983
Option 2 ID : 264330552986
Option 3 ID : 264330552985
Option 4 ID : 264330552984
Status : Answered
Chosen Option : 4

Q.24 The following sentence has been divided into parts. One of them may contain an error.

Select the part that contains the error from the given options. If you don't find any error, mark 'No error' as your answer.

I am sure Helena / would passes / with flying colours.

- Ans
- 1. would passes
 - 2. No error
 - 3. I am sure Helena
 - 4. with flying colours

Question ID : 26433060175
Option 1 ID : 264330235533
Option 2 ID : 264330235535
Option 3 ID : 264330235532
Option 4 ID : 264330235534
Status : Not Answered
Chosen Option : --

Q.25 Select the most appropriate option that can substitute the underlined segment in the given sentence.

The manager noticed a discrepancy between the two audit reports.

- Ans
- 1. deliberate mistake
 - 2. selfish interest
 - 3. major difference
 - 4. great similarity

Question ID : 26433099882
Option 1 ID : 264330392119
Option 2 ID : 264330392118
Option 3 ID : 264330392120
Option 4 ID : 264330392117
Status : Not Answered
Chosen Option : --

Q.26 Select the most appropriate option that can substitute the underlined segment in the given sentence. If there is no need to substitute it, select 'No substitution required'.
Despite of an injury, he won the match.

- Ans
- 1. No substitution required
 - 2. In spite off
 - 3. Despite
 - 4. In despite of

Question ID : 26433070776
Option 1 ID : 264330277563
Option 2 ID : 264330277561
Option 3 ID : 264330277560
Option 4 ID : 264330277562
Status : Answered
Chosen Option : 3

Q.27 Identify the error in tense and choose the correct form of the verb in present tense from the following options.
My teacher often forget the name of students.

- Ans
- 1. was forgetting
 - 2. have been forgetting
 - 3. forgot
 - 4. forgets

Question ID : 26433059189
Option 1 ID : 264330231634
Option 2 ID : 264330231633
Option 3 ID : 264330231632
Option 4 ID : 264330231635
Status : Not Answered
Chosen Option : --

Q.28 Select the most appropriate idiom to fill in the blank and complete the meaning of the sentence.

Most of the ministers are concerned with the _____ of office than the service of man.

- Ans
- 1. leaps and bounds
 - 2. loaves and fishes
 - 3. wear and tear
 - 4. Herculean task

Question ID : 264330120611
Option 1 ID : 264330472686
Option 2 ID : 264330472685
Option 3 ID : 264330472684
Option 4 ID : 264330472683
Status : Not Answered
Chosen Option : --

Q.29 Select the most appropriate meaning of the given idiom.
To let the cat out of the bag

- Ans
- 1. To hide the truth
 - 2. To be in a hurry
 - 3. To be careful
 - 4. To reveal a secret

Question ID : 264330139774
Option 1 ID : 264330547512
Option 2 ID : 264330547513
Option 3 ID : 264330547514
Option 4 ID : 264330547511
Status : Answered
Chosen Option : 4

Q.30 Select the most appropriate ANTONYM of the given word.

Sluggish

- Ans
- 1. Abnormal
 - 2. Utterly
 - 3. Swift
 - 4. Slow

Question ID : 264330163378
Option 1 ID : 264330640800
Option 2 ID : 264330640801
Option 3 ID : 264330640802
Option 4 ID : 264330640799
Status : Not Answered
Chosen Option : --

Q.31 Select the most appropriate meaning of the given idiom.
Pull yourself together

- Ans
- 1. Feel agitated
 - 2. Encourage the rich
 - 3. Calm down after an upsetting incident
 - 4. Discourage the orphans

Question ID : 264330117375
Option 1 ID : 264330461541
Option 2 ID : 264330461542
Option 3 ID : 264330461544
Option 4 ID : 264330461543
Status : Not Answered
Chosen Option : --

Q.32 The following sentence has been divided into parts. One of them may contain an error.
Select the part that contains the error from the given options. If you don't find any error, mark 'No error' as your answer.

He are very thirsty. / Give him / a little water to drink.

- Ans
- 1. Give him
 - 2. a little water to drink
 - 3. He are very thirsty
 - 4. No error

Question ID : 264330120598
Option 1 ID : 264330472632
Option 2 ID : 264330472633
Option 3 ID : 264330472631
Option 4 ID : 264330472634
Status : Answered
Chosen Option : 3

Q.33 Select the most appropriate meaning of the underlined idiom.
I did not even listen to him; he was only talking through his hat.

- Ans
- 1. Talking non-stop
 - 2. Talking garrulously
 - 3. Talking nonsense
 - 4. Talking ignorantly

Question ID : 26433099632
Option 1 ID : 264330391142
Option 2 ID : 264330391143
Option 3 ID : 264330391144
Option 4 ID : 264330391141
Status : Not Answered
Chosen Option : --

Q.34 Select the option that can be used as a one-word substitute for the given group of words.

A person who eats too much

- Ans
- 1. Glutton
 - 2. Garrulous
 - 3. Greedy
 - 4. Gullible

Question ID : 264330164301
Option 1 ID : 264330644421
Option 2 ID : 264330644419
Option 3 ID : 264330644422
Option 4 ID : 264330644420
Status : Answered
Chosen Option : 1

Q.35 Select the most appropriate ANTONYM of the given word.
Profane

- Ans
- 1. Perverse
 - 2. Immaterial
 - 3. Divine
 - 4. Barnyard

Question ID : 264330165263
Option 1 ID : 264330648145
Option 2 ID : 264330648144
Option 3 ID : 264330648143
Option 4 ID : 264330648146
Status : Not Answered
Chosen Option : --

Q.36 Select the most appropriate option that can substitute the underlined segment in the given sentence.
Fifty rupees feels too much for such a pen.

- Ans
- 1. looks
 - 2. minds
 - 3. price
 - 4. seems

Question ID : 26433098972
Option 1 ID : 264330388538
Option 2 ID : 264330388539
Option 3 ID : 264330388540
Option 4 ID : 264330388537
Status : Not Answered
Chosen Option : --

Q.37 Select the most appropriate ANTONYM of the given word.

Hideous

- Ans 1. Attractive
 2. Restorative
 3. Lament
 4. Healthful

Question ID : 264330163427
Option 1 ID : 264330640985
Option 2 ID : 264330640986
Option 3 ID : 264330640984
Option 4 ID : 264330640983
Status : Not Answered
Chosen Option : --

Q.38 Identify the option that rectifies the underlined spelling error in the given sentence.

Mountainering is now looked upon as the king of sports.

- Ans 1. Mountheeneering
 2. Mountaineering
 3. Mountaineering
 4. Mountainouring

Question ID : 264330117253
Option 1 ID : 264330461070
Option 2 ID : 264330461072
Option 3 ID : 264330461069
Option 4 ID : 264330461071
Status : Answered
Chosen Option : 3

Q.39 The following sentence has been split into four segments. Identify the segment that contains a grammatical error.

One of their freighters, / a Neptune, / will be leaving/ in two weeks.

- Ans 1. One of their freighters
 2. will be leaving
 3. in two weeks
 4. a Neptune

Question ID : 264330117236
Option 1 ID : 264330461001
Option 2 ID : 264330461003
Option 3 ID : 264330461004
Option 4 ID : 264330461002
Status : Not Answered
Chosen Option : --

Q.40 Select the INCORRECTLY spelt word.

Ans 1. Commission

2. Comutter

3. Committee

4. Camouflage

Question ID : 264330123025

Option 1 ID : 264330482163

Option 2 ID : 264330482165

Option 3 ID : 264330482164

Option 4 ID : 264330482166

Status : Answered

Chosen Option : 2

Comprehension:

In the following passage some words have been deleted. Read the passage carefully and select the most appropriate option to fill in each blank.

The concept of motivation focuses on explaining what 'moves' behaviour. In fact, the term (1)_____ is derived from the Latin word 'movere', referring to movement of activity. Most of our everyday explanation of (2)_____ is given in terms of motives. Motives also help in making (3)_____ about behaviour. A person will work hard in school, in sports, in business, in music, and in many other situations, if he/she has a very strong need for (4)_____. Hence, motives are the general states that enable us to make predictions about behaviour in many different situations. In other words, motivation is one of the (5)_____ of behaviour. Instincts, drives, needs, goals, and incentives come under the broad cluster of motivation.

SubQuestion No : 41

Q.41 Select the most appropriate option to fill in blank number 1.

Ans 1. psychology

2. human behaviour

3. instinct

4. motivation

Question ID : 264330163364

Option 1 ID : 264330640743

Option 2 ID : 264330640745

Option 3 ID : 264330640746

Option 4 ID : 264330640744

Status : Answered

Chosen Option : 4

Comprehension:

In the following passage some words have been deleted. Read the passage carefully and select the most appropriate option to fill in each blank.

The concept of motivation focuses on explaining what 'moves' behaviour. In fact, the term (1)_____ is derived from the Latin word 'movere', referring to movement of activity. Most of our everyday explanation of (2)_____ is given in terms of motives. Motives also help in making (3)_____ about behaviour. A person will work hard in school, in sports, in business, in music, and in many other situations, if he/she has a very strong need for (4)_____. Hence, motives are the general states that enable us to make predictions about behaviour in many different situations. In other words, motivation is one of the (5)_____ of behaviour. Instincts, drives, needs, goals, and incentives come under the broad cluster of motivation.

SubQuestion No : 42

Q.42 Select the most appropriate option to fill in blank number 2.

- Ans** 1. behaviour
 2. goal
 3. incentive
 4. motivation

Question ID : 264330163365

Option 1 ID : 264330640750

Option 2 ID : 264330640749

Option 3 ID : 264330640747

Option 4 ID : 264330640748

Status : Answered

Chosen Option : 1

Comprehension:

In the following passage some words have been deleted. Read the passage carefully and select the most appropriate option to fill in each blank.

The concept of motivation focuses on explaining what 'moves' behaviour. In fact, the term (1)_____ is derived from the Latin word 'movere', referring to movement of activity. Most of our everyday explanation of (2)_____ is given in terms of motives. Motives also help in making (3)_____ about behaviour. A person will work hard in school, in sports, in business, in music, and in many other situations, if he/she has a very strong need for (4)_____. Hence, motives are the general states that enable us to make predictions about behaviour in many different situations. In other words, motivation is one of the (5)_____ of behaviour. Instincts, drives, needs, goals, and incentives come under the broad cluster of motivation.

SubQuestion No : 43

Q.43 Select the most appropriate option to fill in blank number 3.

- Ans** 1. clarifications
 2. predictions
 3. directions
 4. decisions

Question ID : 264330163366

Option 1 ID : 264330640752

Option 2 ID : 264330640753

Option 3 ID : 264330640751

Option 4 ID : 264330640754

Status : Answered

Chosen Option : 4

Comprehension:

In the following passage some words have been deleted. Read the passage carefully and select the most appropriate option to fill in each blank.

The concept of motivation focuses on explaining what 'moves' behaviour. In fact, the term (1)_____ is derived from the Latin word 'movere', referring to movement of activity. Most of our everyday explanation of (2)_____ is given in terms of motives. Motives also help in making (3)_____ about behaviour. A person will work hard in school, in sports, in business, in music, and in many other situations, if he/she has a very strong need for (4)_____. Hence, motives are the general states that enable us to make predictions about behaviour in many different situations. In other words, motivation is one of the (5)_____ of behaviour. Instincts, drives, needs, goals, and incentives come under the broad cluster of motivation.

SubQuestion No : 44

Q.44 Select the most appropriate option to fill in blank number 4.

- Ans** 1. achievements
 2. motivation
 3. desire
 4. grow

Question ID : 264330163367

Option 1 ID : 264330640756

Option 2 ID : 264330640758

Option 3 ID : 264330640757

Option 4 ID : 264330640755

Status : Answered

Chosen Option : 1

Comprehension:

In the following passage some words have been deleted. Read the passage carefully and select the most appropriate option to fill in each blank.

The concept of motivation focuses on explaining what 'moves' behaviour. In fact, the term (1)_____ is derived from the Latin word 'movere', referring to movement of activity. Most of our everyday explanation of (2)_____ is given in terms of motives. Motives also help in making (3)_____ about behaviour. A person will work hard in school, in sports, in business, in music, and in many other situations, if he/she has a very strong need for (4)_____. Hence, motives are the general states that enable us to make predictions about behaviour in many different situations. In other words, motivation is one of the (5)_____ of behaviour. Instincts, drives, needs, goals, and incentives come under the broad cluster of motivation.

SubQuestion No : 45

Q.45 Select the most appropriate option to fill in blank number 5.

- Ans** 1. meaning
 2. causes
 3. ways
 4. determinants

Question ID : 264330163368

Option 1 ID : 264330640761

Option 2 ID : 264330640759

Option 3 ID : 264330640762

Option 4 ID : 264330640760

Status : Answered

Chosen Option : 4

Comprehension:

Read the given passage carefully and answer the questions that follow.

The rise of social media has undoubtedly changed the way we communicate with one another. It has connected people from all over the world and provided a platform for voices that were once silenced. However, as with any form of communication, social media has its downsides.

One of the most significant downsides is the spread of misinformation. With the rise of social media, anyone can become a content creator, which means that anyone can share information without fact-checking or considering the consequences. This has led to a proliferation of false information, from conspiracy theories to hoaxes, that can quickly spread and cause harm.

One recent example of this is the COVID-19 pandemic. Social media has played a significant role in the spread of misinformation about the virus and the vaccines. False claims about the safety and effectiveness of the vaccines have caused many people to be hesitant or outright refuse to get vaccinated. This, in turn, has led to the prolongation of the pandemic and the loss of many lives.

The spread of misinformation on social media is not a new phenomenon. In fact, it has been around for centuries. However, the speed and ease with which misinformation can spread on social media have made it a particularly pernicious problem in our modern world.

Throughout history, misinformation has been used to sow discord and manipulate people. For example, during World War II, the Nazi regime used propaganda to spread false information about Jews, Roma, and other targeted groups in order to justify their persecution and ultimately their extermination. Similarly, during the Cold War, both the United States and the Soviet Union used propaganda to demonise one another and sway public opinion.

The difference now is that social media has made it easier than ever to spread false information. A single post or tweet can reach millions of people within seconds, and it can be difficult to counteract the effects of that misinformation once it has spread.

So, what can we do about it? The answer is not simple, but it starts with education. We need to teach people how to think critically, how to fact-check, and how to discern between credible sources and fake news. We also need to hold social media companies accountable for the content on their platforms and ensure that they are doing their part to combat the spread of misinformation.

In short, the rise of social media has given us a powerful tool for communication, but we must use it wisely. We must be vigilant against the spread of misinformation and work together to ensure that the information we consume and share is accurate and reliable.

SubQuestion No : 46

Q.46 What is the ANTONYM of the word 'accurate', " as used in the passage?

- Ans
- 1. Correct
 - 2. Inexact
 - 3. Precise
 - 4. Reliable

Question ID : 264330165147

Option 1 ID : 264330647690

Option 2 ID : 264330647688

Option 3 ID : 264330647687

Option 4 ID : 264330647689

Status : Answered

Chosen Option : 1

Comprehension:

Read the given passage carefully and answer the questions that follow.

The rise of social media has undoubtedly changed the way we communicate with one another. It has connected people from all over the world and provided a platform for voices that were once silenced. However, as with any form of communication, social media has its downsides.

One of the most significant downsides is the spread of misinformation. With the rise of social media, anyone can become a content creator, which means that anyone can share information without fact-checking or considering the consequences. This has led to a proliferation of false information, from conspiracy theories to hoaxes, that can quickly spread and cause harm.

One recent example of this is the COVID-19 pandemic. Social media has played a significant role in the spread of misinformation about the virus and the vaccines. False claims about the safety and effectiveness of the vaccines have caused many people to be hesitant or outright refuse to get vaccinated. This, in turn, has led to the prolongation of the pandemic and the loss of many lives.

The spread of misinformation on social media is not a new phenomenon. In fact, it has been around for centuries. However, the speed and ease with which misinformation can spread on social media have made it a particularly pernicious problem in our modern world.

Throughout history, misinformation has been used to sow discord and manipulate people. For example, during World War II, the Nazi regime used propaganda to spread false information about Jews, Roma, and other targeted groups in order to justify their persecution and ultimately their extermination. Similarly, during the Cold War, both the United States and the Soviet Union used propaganda to demonise one another and sway public opinion.

The difference now is that social media has made it easier than ever to spread false information. A single post or tweet can reach millions of people within seconds, and it can be difficult to counteract the effects of that misinformation once it has spread.

So, what can we do about it? The answer is not simple, but it starts with education. We need to teach people how to think critically, how to fact-check, and how to discern between credible sources and fake news. We also need to hold social media companies accountable for the content on their platforms and ensure that they are doing their part to combat the spread of misinformation.

In short, the rise of social media has given us a powerful tool for communication, but we must use it wisely. We must be vigilant against the spread of misinformation and work together to ensure that the information we consume and share is accurate and reliable.

SubQuestion No : 47

Q.47 Identify the main theme of the passage.

- Ans
- 1. The role of education in combating misinformation.
 - 2. The dangers of spreading false information on social media.
 - 3. The significance of propaganda and misinformation.
 - 4. The benefits of social media for communication.

Question ID : 264330165145

Option 1 ID : 264330647682

Option 2 ID : 264330647681

Option 3 ID : 264330647680

Option 4 ID : 264330647679

Status : Answered

Chosen Option : 1

Comprehension:

Read the given passage carefully and answer the questions that follow.

The rise of social media has undoubtedly changed the way we communicate with one another. It has connected people from all over the world and provided a platform for voices that were once silenced. However, as with any form of communication, social media has its downsides.

One of the most significant downsides is the spread of misinformation. With the rise of social media, anyone can become a content creator, which means that anyone can share information without fact-checking or considering the consequences. This has led to a proliferation of false information, from conspiracy theories to hoaxes, that can quickly spread and cause harm.

One recent example of this is the COVID-19 pandemic. Social media has played a significant role in the spread of misinformation about the virus and the vaccines. False claims about the safety and effectiveness of the vaccines have caused many people to be hesitant or outright refuse to get vaccinated. This, in turn, has led to the prolongation of the pandemic and the loss of many lives.

The spread of misinformation on social media is not a new phenomenon. In fact, it has been around for centuries. However, the speed and ease with which misinformation can spread on social media have made it a particularly pernicious problem in our modern world.

Throughout history, misinformation has been used to sow discord and manipulate people. For example, during World War II, the Nazi regime used propaganda to spread false information about Jews, Roma, and other targeted groups in order to justify their persecution and ultimately their extermination. Similarly, during the Cold War, both the United States and the Soviet Union used propaganda to demonise one another and sway public opinion.

The difference now is that social media has made it easier than ever to spread false information. A single post or tweet can reach millions of people within seconds, and it can be difficult to counteract the effects of that misinformation once it has spread.

So, what can we do about it? The answer is not simple, but it starts with education. We need to teach people how to think critically, how to fact-check, and how to discern between credible sources and fake news. We also need to hold social media companies accountable for the content on their platforms and ensure that they are doing their part to combat the spread of misinformation.

In short, the rise of social media has given us a powerful tool for communication, but we must use it wisely. We must be vigilant against the spread of misinformation and work together to ensure that the information we consume and share is accurate and reliable.

SubQuestion No : 48

Q.48 According to the passage, which of the following is NOT a cause of the spread of false information on social media?

- Ans**
- 1. Lack of education and critical thinking skills among social media users.
 - 2. Inability to discern between credible sources and fake news.
 - 3. Social media companies' failure to regulate false information on their platforms.
 - 4. The desire of people to engage in controversial and sensational content.

Question ID : 264330165146

Option 1 ID : 264330647685

Option 2 ID : 264330647683

Option 3 ID : 264330647686

Option 4 ID : 264330647684

Status : Not Answered

Chosen Option : --

Comprehension:

Read the given passage carefully and answer the questions that follow.

The rise of social media has undoubtedly changed the way we communicate with one another. It has connected people from all over the world and provided a platform for voices that were once silenced. However, as with any form of communication, social media has its downsides.

One of the most significant downsides is the spread of misinformation. With the rise of social media, anyone can become a content creator, which means that anyone can share information without fact-checking or considering the consequences. This has led to a proliferation of false information, from conspiracy theories to hoaxes, that can quickly spread and cause harm.

One recent example of this is the COVID-19 pandemic. Social media has played a significant role in the spread of misinformation about the virus and the vaccines. False claims about the safety and effectiveness of the vaccines have caused many people to be hesitant or outright refuse to get vaccinated. This, in turn, has led to the prolongation of the pandemic and the loss of many lives.

The spread of misinformation on social media is not a new phenomenon. In fact, it has been around for centuries. However, the speed and ease with which misinformation can spread on social media have made it a particularly pernicious problem in our modern world.

Throughout history, misinformation has been used to sow discord and manipulate people. For example, during World War II, the Nazi regime used propaganda to spread false information about Jews, Roma, and other targeted groups in order to justify their persecution and ultimately their extermination. Similarly, during the Cold War, both the United States and the Soviet Union used propaganda to demonise one another and sway public opinion.

The difference now is that social media has made it easier than ever to spread false information. A single post or tweet can reach millions of people within seconds, and it can be difficult to counteract the effects of that misinformation once it has spread.

So, what can we do about it? The answer is not simple, but it starts with education. We need to teach people how to think critically, how to fact-check, and how to discern between credible sources and fake news. We also need to hold social media companies accountable for the content on their platforms and ensure that they are doing their part to combat the spread of misinformation.

In short, the rise of social media has given us a powerful tool for communication, but we must use it wisely. We must be vigilant against the spread of misinformation and work together to ensure that the information we consume and share is accurate and reliable.

SubQuestion No : 49

Q.49 What is the author's opinion of social media in this passage?

- Ans**
- 1. Social media has had a mostly positive impact on society, despite some drawbacks.
 - 2. Social media is responsible for the spread of false information, but its impact on society is otherwise neutral.
 - 3. Social media has changed the way we communicate, but has also brought about significant negative consequences.
 - 4. Social media is a powerful tool for communication that has many benefits.

Question ID : 264330165148

Option 1 ID : 264330647692

Option 2 ID : 264330647694

Option 3 ID : 264330647693

Option 4 ID : 264330647691

Status : Answered

Chosen Option : 3

Comprehension:

Read the given passage carefully and answer the questions that follow.

The rise of social media has undoubtedly changed the way we communicate with one another. It has connected people from all over the world and provided a platform for voices that were once silenced. However, as with any form of communication, social media has its downsides.

One of the most significant downsides is the spread of misinformation. With the rise of social media, anyone can become a content creator, which means that anyone can share information without fact-checking or considering the consequences. This has led to a proliferation of false information, from conspiracy theories to hoaxes, that can quickly spread and cause harm.

One recent example of this is the COVID-19 pandemic. Social media has played a significant role in the spread of misinformation about the virus and the vaccines. False claims about the safety and effectiveness of the vaccines have caused many people to be hesitant or outright refuse to get vaccinated. This, in turn, has led to the prolongation of the pandemic and the loss of many lives.

The spread of misinformation on social media is not a new phenomenon. In fact, it has been around for centuries. However, the speed and ease with which misinformation can spread on social media have made it a particularly pernicious problem in our modern world.

Throughout history, misinformation has been used to sow discord and manipulate people. For example, during World War II, the Nazi regime used propaganda to spread false information about Jews, Roma, and other targeted groups in order to justify their persecution and ultimately their extermination. Similarly, during the Cold War, both the United States and the Soviet Union used propaganda to demonise one another and sway public opinion.

The difference now is that social media has made it easier than ever to spread false information. A single post or tweet can reach millions of people within seconds, and it can be difficult to counteract the effects of that misinformation once it has spread.

So, what can we do about it? The answer is not simple, but it starts with education. We need to teach people how to think critically, how to fact-check, and how to discern between credible sources and fake news. We also need to hold social media companies accountable for the content on their platforms and ensure that they are doing their part to combat the spread of misinformation.

In short, the rise of social media has given us a powerful tool for communication, but we must use it wisely. We must be vigilant against the spread of misinformation and work together to ensure that the information we consume and share is accurate and reliable.

SubQuestion No : 50

Q.50 What is the author's purpose in writing this passage?

- Ans** 1. To warn readers of the dangers of spreading false information on social media.
2. To provide an in-depth analysis of the benefits of social media for communication.
3. To explain the history of propaganda and misinformation and its impact on society.
4. To persuade readers to delete their social media accounts.

Question ID : 264330165149

Option 1 ID : 264330647697

Option 2 ID : 264330647695

Option 3 ID : 264330647696

Option 4 ID : 264330647698

Status : Not Answered

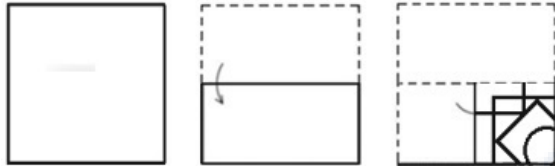
Chosen Option : --

Sub Inspector in Delhi Police and Central Armed Police Forces Examination 2023 Paper I

Roll Number	
Candidate Name	
Venue Name	iON Dizital Zone Faridabad
Exam Date	05/10/2023
Exam Time	4:00 PM - 6:00 PM
Subject	SICPO Paper I 2023

Section : General Intelligence and Reasoning

Q.1 A paper is folded and cut as shown. How will it appear when unfolded?



Ans

- ✗ 1.
- ✓ 2.
- ✗ 3.
- ✗ 4.

Question ID : **26433040798**
 Option 1 ID : **264330159669**
 Option 2 ID : **264330159667**
 Option 3 ID : **264330159668**
 Option 4 ID : **264330159670**
 Status : **Answered**
 Chosen Option : **2**

Q.2 Select the set in which the numbers are related in the same way as are the numbers of the following sets.

(NOTE : Operations should be performed on the whole numbers, without breaking down the numbers into its constituent digits. E.g. 13- Operations on 13 such as adding/subtracting/multiplying etc. to 13 can be performed. Breaking down 13 into 1 and 3 and then performing mathematical operations on 1 and 3 is not allowed.)

(53, 36, 25)
(71, 54, 43)

- Ans 1. (41, 23, 18)
 2. (99, 82, 71)
 3. (66, 53, 41)
 4. (32, 14, 7)

Question ID : 26433057459

Option 1 ID : 264330224821

Option 2 ID : 264330224822

Option 3 ID : 264330224820

Option 4 ID : 264330224823

Status : Not Answered

Chosen Option : --

Q.3 Six characters A, B, C, 1, 2 and 3 are written on different faces of a dice. Two positions of this dice are shown in the figure. Find the character on the face opposite to C.



- Ans 1. A
 2. 2
 3. 3
 4. B

Question ID : 264330109198

Option 1 ID : 264330429072

Option 2 ID : 264330429071

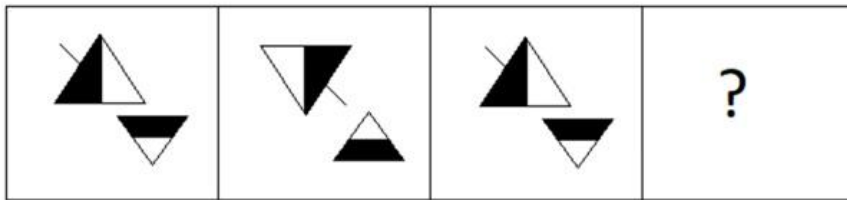
Option 3 ID : 264330429069

Option 4 ID : 264330429070

Status : Answered

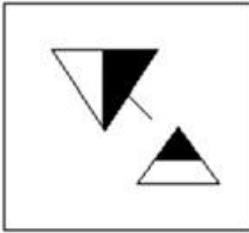
Chosen Option : 2

Q.4 Select the figure that will come next in the following figure series.

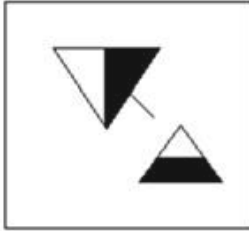


Ans

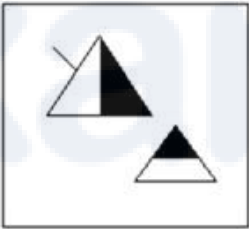
✗ 1.



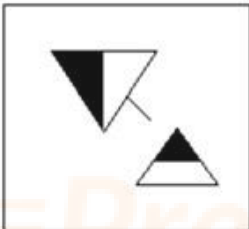
✓ 2.



✗ 3.



✗ 4.



Question ID : 26433087083

Option 1 ID : 264330341973

Option 2 ID : 264330341974

Option 3 ID : 264330341976

Option 4 ID : 264330341975

Status : Answered

Chosen Option : 2

Q.5 Select the option that represents the letters that, when sequentially placed in the blanks below, will complete the letter-series.
a, b, a, b, b, _, a, b, a, b, _, a, a, b, a, b, b, _

- Ans
- 1. b, a, b
 - 2. a, b, a
 - 3. b, b, b
 - 4. a, a, a

Question ID : 264330106617
Option 1 ID : 264330418772
Option 2 ID : 264330418769
Option 3 ID : 264330418770
Option 4 ID : 264330418771
Status : Answered
Chosen Option : 2

Q.6 Select the number from among the given options that can replace the question mark (?) in the following series.
144, 171, 200, ?, 264

- Ans
- 1. 240
 - 2. 256
 - 3. 225
 - 4. 231

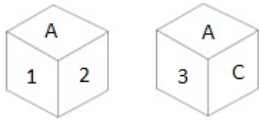
Question ID : 26433074540
Option 1 ID : 264330292251
Option 2 ID : 264330292249
Option 3 ID : 264330292248
Option 4 ID : 264330292250
Status : Answered
Chosen Option : 4

Q.7 Which letter-cluster will replace the question mark (?) to complete the given series?
FOHV, CKER, ?, WCYJ, TYVF

- Ans
- 1. XHBM
 - 2. ZGBN
 - 3. AFCP
 - 4. AHCO

Question ID : 26433086264
Option 1 ID : 264330338749
Option 2 ID : 264330338751
Option 3 ID : 264330338750
Option 4 ID : 264330338752
Status : Answered
Chosen Option : 2

Q.8 Six characters A, B, C, 1, 2 and 3 are written on different faces of a dice. Two positions of this dice are shown in the figure. Find the character on the face opposite to 3.



- Ans
- 1. B
 - 2. 1
 - 3. 2
 - 4. C

Question ID : 264330109199
 Option 1 ID : 264330429075
 Option 2 ID : 264330429073
 Option 3 ID : 264330429074
 Option 4 ID : 264330429076
 Status : Answered
 Chosen Option : 2

Q.9 In a certain code language, 'BLOCK' is coded as LBCON and 'CABIN' is coded as ACIBQ. How will 'SUITE' be coded in the same language?

- Ans
- 1. USTIH
 - 2. UTSEH
 - 3. ETHUS
 - 4. USHTI

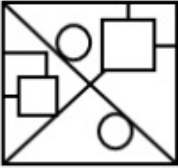
Question ID : 264330132205
 Option 1 ID : 264330517916
 Option 2 ID : 264330517918
 Option 3 ID : 264330517915
 Option 4 ID : 264330517917
 Status : Answered
 Chosen Option : 1

Q.10 Select the option in which the given figure is embedded (rotation is NOT allowed).

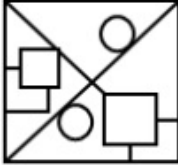


Ans

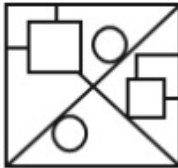
✗ 1.



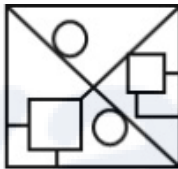
✗ 2.



✓ 3.



✗ 4.



Question ID : 264330126080

Option 1 ID : 264330493992

Option 2 ID : 264330493994

Option 3 ID : 264330493993

Option 4 ID : 264330493995

Status : Answered

Chosen Option : 3

Q.11 In a certain code language, 'MOBILE' is written as 'NQEMQK' and 'BISHOP' is written as 'CKVLTV'. How will 'CHARGE' be written in that language?

Ans ✗ 1. DJEVLJ

✗ 2. DJDWLK

✓ 3. DJDVLK

✗ 4. DJDVKL

Question ID : 26433070269

Option 1 ID : 264330275553

Option 2 ID : 264330275555

Option 3 ID : 264330275554

Option 4 ID : 264330275552

Status : Answered

Chosen Option : 3

Q.12 Select the correct option that indicates the arrangement of the given words in the order in which they appear in an English dictionary.

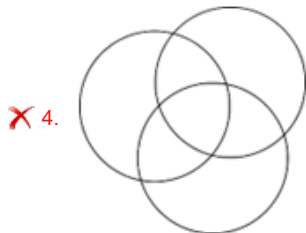
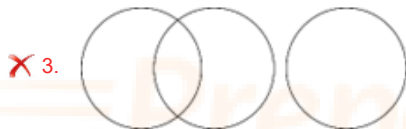
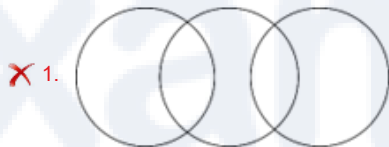
1. Warehouse
2. Warden
3. Warship
4. Wardrobe
5. Warrant
6. Warfare

- Ans
- 1. 4, 2, 1, 6, 5, 3
 - 2. 2, 4, 1, 6, 5, 3
 - 3. 2, 4, 6, 5, 1, 3
 - 4. 2, 4, 1, 5, 6, 3

Question ID : 264330145381
Option 1 ID : 264330569781
Option 2 ID : 264330569780
Option 3 ID : 264330569779
Option 4 ID : 264330569782
Status : Answered
Chosen Option : 2

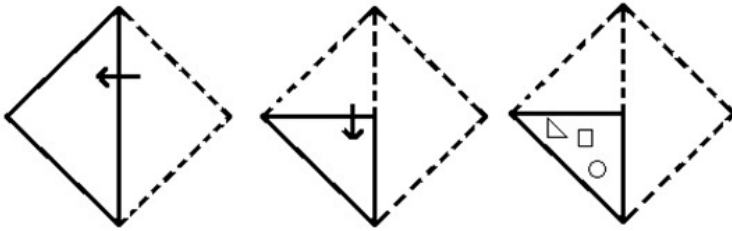
Q.13 Select the Venn diagram that best illustrates the relationship between the following classes.
Clothes, Shoes, Shirts

Ans



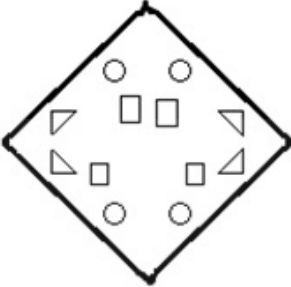
Question ID : 264330132029
Option 1 ID : 264330517212
Option 2 ID : 264330517214
Option 3 ID : 264330517211
Option 4 ID : 264330517213
Status : Answered
Chosen Option : 2

Q.14 The sequence of folding a piece of paper and the manner in which the folded paper is cut is shown in the following figures. How would this paper look when unfolded?

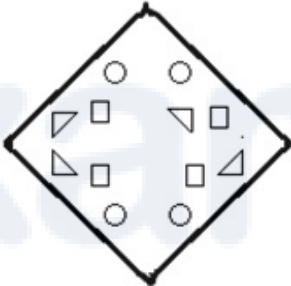


Ans

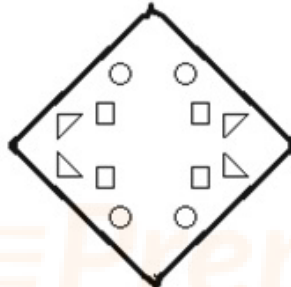
✗ 1.



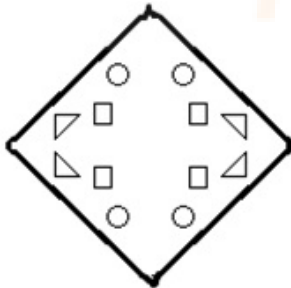
✗ 2.



✗ 3.



✓ 4.



Question ID : 26433074791

Option 1 ID : 264330293252

Option 2 ID : 264330293255

Option 3 ID : 264330293254

Option 4 ID : 264330293253

Status : Answered

Chosen Option : 4

Q.15 If A denotes '+', B denotes '×', C denotes '−', and D denotes '÷', then what will be the value of the following equation?
11 B 12 C 144 D 24 A 57 = ?

- Ans
- 1. 180
 - 2. 183
 - 3. 186
 - 4. 160

Question ID : 264330129780
Option 1 ID : 264330508351
Option 2 ID : 264330508352
Option 3 ID : 264330508354
Option 4 ID : 264330508353
Status : Answered
Chosen Option : 2

Q.16 Q + J means "Q is the Husband of J"
Q – J means "Q is the Father of J"
Q × J means "Q is the Mother of J"
Q * J means "Q is the Daughter of J"

If D * V + B × U, how is D related to U?

- Ans
- 1. Sister
 - 2. Mother
 - 3. Brother
 - 4. Daughter

Question ID : 264330130334
Option 1 ID : 264330510448
Option 2 ID : 264330510450
Option 3 ID : 264330510447
Option 4 ID : 264330510449
Status : Answered
Chosen Option : 1

Q.17 Q is to the east of S. E is to the south of S. P is to the north-east of Q and north of T. If T is to the south-east of Q, what is the position of S with respect to T? (All positions are arranged in GRID pattern)

- Ans
- 1. South-east
 - 2. South-west
 - 3. West
 - 4. North-west

Question ID : 26433089523
Option 1 ID : 264330351596
Option 2 ID : 264330351595
Option 3 ID : 264330351594
Option 4 ID : 264330351593
Status : Answered
Chosen Option : 4

Q.18 In a certain code language, 'SPAM' is coded as '36' and 'JUG' is coded as '27'. How will 'FROCK' be coded in that language?

- Ans
- 1. 72
 - 2. 45
 - 3. 90
 - 4. 48

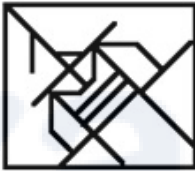
Question ID : 26433079046
Option 1 ID : 264330310189
Option 2 ID : 264330310191
Option 3 ID : 264330310188
Option 4 ID : 264330310190
Status : Answered
Chosen Option : 2

Q.19 Select the option figure in which the given figure is embedded as its part (rotation is NOT allowed).




Ans

1.



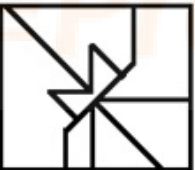
2.



3.



4.



Question ID : 264330117424
Option 1 ID : 264330461739
Option 2 ID : 264330461738
Option 3 ID : 264330461740
Option 4 ID : 264330461737
Status : Answered
Chosen Option : 1

Q.20 Four letter-clusters have been given, out of which three are alike in some manner and one is different. Select the odd letter-cluster.

- Ans
- 1. SRWX
 - 2. HGLM
 - 3. POTU
 - 4. DBGH

Question ID : 264330180751

Option 1 ID : 264330708974

Option 2 ID : 264330708972

Option 3 ID : 264330708973

Option 4 ID : 264330708971

Status : Answered

Chosen Option : 4

Q.21 'T + U' means 'T is the mother of U'.
'T - U' means 'T is the father of U'.
'T \$ U' means 'T is the husband of U'.
'T # U' means 'T is the daughter of U'.
If A # C \$ V + X, then how is A related to X?

- Ans
- 1. Brother
 - 2. Sister
 - 3. Father
 - 4. Daughter

Question ID : 264330145387

Option 1 ID : 264330569803

Option 2 ID : 264330569804

Option 3 ID : 264330569806

Option 4 ID : 264330569805

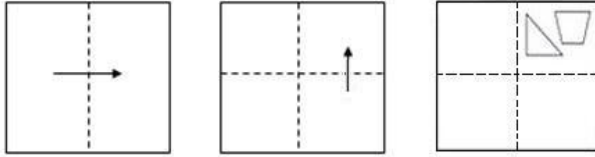
Status : Answered

Chosen Option : 2

Prepare 50% Faster

Q.22

A paper is folded and cut as shown below. How will it appear when unfolded?



Ans

- ✓ 1.
- ✗ 2.
- ✗ 3.
- ✗ 4.

Question ID : 26433091688

Option 1 ID : 264330360118

Option 2 ID : 264330360119

Option 3 ID : 264330360117

Option 4 ID : 264330360120

Status : Answered

Chosen Option : 1

Q.23 Select the set in which the numbers are related in the same way as are the numbers of the following sets.

(NOTE : Operations should be performed on the whole numbers, without breaking down the numbers into its constituent digits. E.g. 13 – Operations on 13 such as adding /subtracting /multiplying etc. to 13 can be performed. Breaking down 13 into 1 and 3 and then performing mathematical operations on 1 and 3 is not allowed)

(112, 327, 215), (98, 254, 156)

- Ans
- 1. (108, 209, 184)
 - 2. (105, 347, 322)
 - 3. (126, 268, 142)
 - 4. (281, 490,309)

Question ID : 264330145298
Option 1 ID : 264330569448
Option 2 ID : 264330569447
Option 3 ID : 264330569450
Option 4 ID : 264330569449
Status : Answered
Chosen Option : 3

Q.24 Select the set in which the numbers are related in the same way as are the numbers of the following set.

(NOTE : Operations should be performed on the whole numbers, without breaking down the numbers into its constituent digits. E.g. 13 – Operations on 13 such as adding/ subtracting/ multiplying etc. to 13 can be performed. Breaking down 13 into 1 and 3 and then performing mathematical operations on 1 and 3 is NOT allowed)

(5, 4, 2)
(9, 9, 3)

- Ans
- 1. (21,39,1)
 - 2. (5,2,6)
 - 3. (24,43,34)
 - 4. (17,6,5)

Question ID : 264330145333
Option 1 ID : 264330569590
Option 2 ID : 264330569588
Option 3 ID : 264330569589
Option 4 ID : 264330569587
Status : Not Answered
Chosen Option : --

Q.25 Seven people, A, B, C, D, E, F and G, are sitting in a straight row, facing north. Only 2 people sit to the right of D. G is an immediate neighbour of D. Only 3 people sit between A and G. Only 2 people sit between B and C. E is not an immediate neighbour of C. F sits to the immediate right of G. Who sits to the immediate left of A?

- Ans
- 1. E
 - 2. C
 - 3. D
 - 4. B

Question ID : 264330145410
Option 1 ID : 264330569897
Option 2 ID : 264330569896
Option 3 ID : 264330569898
Option 4 ID : 264330569895
Status : Answered
Chosen Option : 2

Q.26 Select the option that represents the correct order of the given words as they would appear in an English dictionary?

1. Brochure
2. Brine
3. Bright
4. Brief
5. Brocade

- Ans
- 1. 1, 2, 3, 4, 5
 - 2. 1, 2, 3, 5, 4
 - 3. 4, 3, 2, 5, 1
 - 4. 3, 2, 5, 4, 1

Question ID : 26433067247

Option 1 ID : 264330263500

Option 2 ID : 264330263502

Option 3 ID : 264330263503

Option 4 ID : 264330263501

Status : Answered

Chosen Option : 3

Q.27 If '+' means '-', '-' means 'x', 'x' means '÷' and '÷' means '+', what will come in place of '?' in the following equation?

$$79 \div 64 \times 8 - 7 + 12 = ?$$

- Ans
- 1. 123
 - 2. 117
 - 3. 138
 - 4. 147

Question ID : 264330101147

Option 1 ID : 264330397135

Option 2 ID : 264330397136

Option 3 ID : 264330397134

Option 4 ID : 264330397133

Status : Answered

Chosen Option : 1

Q.28 Two statements are given followed by three conclusions numbered I, II and III. Assuming the statements to be true, even if they seem to be at variance with commonly known facts, decide which of the conclusions logically follow(s) from the statements.

Statements:

All keys are locks.

No door is a lock.

Conclusions:

I. Some locks are doors.

II. Some locks are keys.

III. No key is a door.

- Ans
- 1. Both conclusions I and II follow.
 - 2. Conclusions I, II and III follow.
 - 3. Both conclusions II and III follow.
 - 4. Both conclusions I and III follow.

Question ID : 26433056067

Option 1 ID : 264330219252

Option 2 ID : 264330219255

Option 3 ID : 264330219254

Option 4 ID : 264330219253

Status : Answered

Chosen Option : 3

Q.29 In a certain code language, 'Live long' is coded as 'mu ae', 'Road is long' is coded as 'ae si du' and 'Game is live' is coded as 'si mu zt'. What is the code for the word 'Game'?

- Ans
- 1. si
 - 2. mu
 - 3. zt
 - 4. ae

Question ID : 26433074769
Option 1 ID : 264330293164
Option 2 ID : 264330293167
Option 3 ID : 264330293165
Option 4 ID : 264330293166
Status : Answered
Chosen Option : 3

Q.30 Which two signs should be interchanged to make the given equation correct?
 $42 \div 7 + 11 \times 87 - 12 = 141$

- Ans
- 1. + and -
 - 2. ÷ and +
 - 3. x and +
 - 4. - and ×

Question ID : 264330129526
Option 1 ID : 264330507470
Option 2 ID : 264330507471
Option 3 ID : 264330507472
Option 4 ID : 264330507473
Status : Answered
Chosen Option : 3

Q.31 Select the option that is related to the third word in the same way as the second word is related to the first word.

(The words must be considered as meaningful words and must not be related to each other based on the number of letters/number of consonants/vowels in the word.)

Pressure : Barometer :: Electricity : ?

- Ans
- 1. Cyclotron
 - 2. Bolometer
 - 3. Audiometer
 - 4. Multimeter

Question ID : 26433087296
Option 1 ID : 264330342821
Option 2 ID : 264330342823
Option 3 ID : 264330342822
Option 4 ID : 264330342824
Status : Answered
Chosen Option : 4

Q.32 Which of the following numbers will replace the question mark (?) in the given series?
270, 241, 212, ?, 154, 125

- Ans
- 1. 198
 - 2. 186
 - 3. 183
 - 4. 192

Question ID : 26433067626
Option 1 ID : 264330265016
Option 2 ID : 264330265018
Option 3 ID : 264330265019
Option 4 ID : 264330265017
Status : Answered
Chosen Option : 3

Q.33 Select the option that is related to the third term in the same way as the second term is related to the first term and the sixth term is related to the fifth term.
25 : 18 :: 37 : ? :: 49 : 36

- Ans
- 1. 29
 - 2. 32
 - 3. 30
 - 4. 27

Question ID : 26433079159
Option 1 ID : 264330310643
Option 2 ID : 264330310640
Option 3 ID : 264330310642
Option 4 ID : 264330310641
Status : Answered
Chosen Option : 4

Q.34 Six students Meera, Jigyasa, Tarun, Naina, Shambhavi and Avni are sitting around a circular table facing the centre (not necessarily in the same order). Shambhavi is an immediate neighbour of both Jigyasa and Avni. Tarun is sitting third to the left of Jigyasa. Meera is sitting second to the right of Avni. Who is sitting second to the left of Jigyasa?

- Ans
- 1. Meera
 - 2. Naina
 - 3. Avni
 - 4. Tarun

Question ID : 26433082277
Option 1 ID : 264330322943
Option 2 ID : 264330322944
Option 3 ID : 264330322941
Option 4 ID : 264330322942
Status : Answered
Chosen Option : 2

Q.35 Which letter-cluster will replace the question mark (?) to complete the given series?
BRCQ, EPFO, ?, KLLK, NJOI


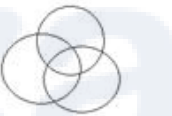
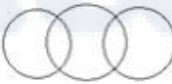

- Ans
- 1. HINO
 - 2. GNMI
 - 3. HNIM
 - 4. GINO

Question ID : 264330180761
Option 1 ID : 264330709011
Option 2 ID : 264330709014
Option 3 ID : 264330709012
Option 4 ID : 264330709013
Status : Answered
Chosen Option : 3

Q.36 Select the Venn diagram that best illustrates the relationship between the following classes.

Animal, Jungle, Wild Animal

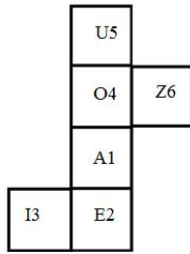
Ans

- 1. 
- 2. 
- 3. 
- 4. 

Question ID : 264330145359
Option 1 ID : 264330569692
Option 2 ID : 264330569693
Option 3 ID : 264330569694
Option 4 ID : 264330569691
Status : Answered
Chosen Option : 4

Q.37 When the following figure is folded to form a cube, which letter-number will be on the face opposite to the face showing the letter-number 'A1'?

(The elements are shown to indicate the sides only.)



- Ans**
- 1. U5
 - 2. O4
 - 3. I3
 - 4. E2

Question ID : 26433065674

Option 1 ID : 264330257257

Option 2 ID : 264330257256

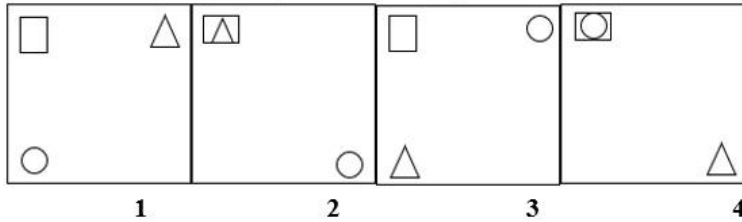
Option 3 ID : 264330257259

Option 4 ID : 264330257258

Status : Answered

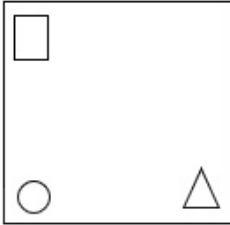
Chosen Option : 1

Q.38 Which of the given figures when placed in the 5th position would continue the series that is established by the first four figures?

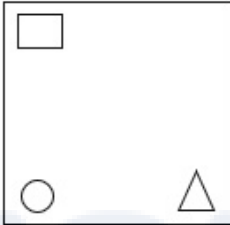


Ans

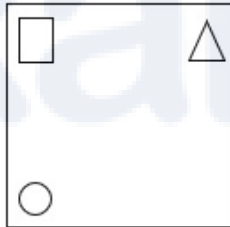
✗ 1.



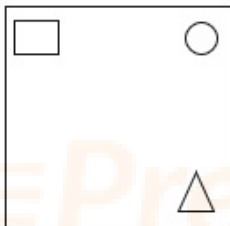
✗ 2.



✓ 3.



✗ 4.



Question ID : 26433087304
 Option 1 ID : 264330342854
 Option 2 ID : 264330342853
 Option 3 ID : 264330342856
 Option 4 ID : 264330342855
 Status : Answered
 Chosen Option : 3

Q.39 Select the option that is related to the third word in the same way as the second word is related to the first word.
(The words must be considered as meaningful words and must not be related to each other based on the number of letters/number of consonants/vowels in the word.)

Centre : Focus :: Vicar : ?

- Ans
- 1. Life
 - 2. Priest
 - 3. Building
 - 4. Riddle

Question ID : 264330145397

Option 1 ID : 264330569846

Option 2 ID : 264330569845

Option 3 ID : 264330569844

Option 4 ID : 264330569843

Status : Answered

Chosen Option : 4

Q.40 Three of the following four letter-clusters are alike in a certain way and one is different.
Pick the odd one out.

- Ans
- 1. MOKN
 - 2. SQUH
 - 3. GIET
 - 4. CEAX

Question ID : 26433068791

Option 1 ID : 264330269679

Option 2 ID : 264330269677

Option 3 ID : 264330269678

Option 4 ID : 264330269676

Status : Answered

Chosen Option : 2

Q.41 Which two signs should be interchanged to make the given equation correct?
 $39 \div 3 - 11 + 57 \times 29 = 171$

- Ans
- 1. - and ×
 - 2. - and +
 - 3. + and +
 - 4. + and -

Question ID : 264330129524

Option 1 ID : 264330507465

Option 2 ID : 264330507464

Option 3 ID : 264330507463

Option 4 ID : 264330507462

Status : Answered

Chosen Option : 1

Q.42 Stanley starts cycling from Point A. He cycles X km towards the west and then turns right and cycles 3 km. He again turns right and cycles for X+1 km. He again turns right and cycles for 2X+1 km. He takes a final right turn and cycles for 1 km to stop at Point B. Point B is 6 km south of Point A. What is the value of X?

- Ans 1. 9
 2. 3
 3. 4
 4. 5

Question ID : 26433097236
Option 1 ID : 264330381644
Option 2 ID : 264330381641
Option 3 ID : 264330381643
Option 4 ID : 264330381642
Status : Answered
Chosen Option : 3

Q.43 In a certain code language, 'PIN' is coded as 9 and 'CHARGER' is coded as 49. How will 'CABLE' be coded in the same language?

- Ans 1. 27
 2. 25
 3. 18
 4. 36

Question ID : 264330132204
Option 1 ID : 264330517912
Option 2 ID : 264330517911
Option 3 ID : 264330517913
Option 4 ID : 264330517914
Status : Answered
Chosen Option : 2

Q.44 Which of the following numbers will replace the question mark (?) in the given series?
5, 20, 60, 240, 720, ?

- Ans 1. 2580
 2. 2880
 3. 2160
 4. 2675

Question ID : 26433057344
Option 1 ID : 264330224361
Option 2 ID : 264330224362
Option 3 ID : 264330224363
Option 4 ID : 264330224360
Status : Answered
Chosen Option : 2

Q.45 Two statements are given, followed by two conclusions numbered I and II. Assuming the statements to be true, even if they seem to be at variance with commonly known facts, decide which of the conclusions logically follow(s) from the statements.

Statements:

All rivers are lakes.

Some seas are rivers.

Conclusion:

I)Some seas are lakes.

II)All lakes are rivers.

Ans 1. Neither Conclusion I nor II follows.

2. Only Conclusion II follows.

3. Only Conclusion I follows

4. Both Conclusions I and II follow.

Question ID : **26433067708**

Option 1 ID : **264330265347**

Option 2 ID : **264330265345**

Option 3 ID : **264330265344**

Option 4 ID : **264330265346**

Status : **Answered**

Chosen Option : **3**

Q.46 If '+' means '-', '-' means 'x', 'x' means '÷', '÷' means '+', then what will come in place of the question mark (?) in the following equation?

$$39 \times 3 - 11 \div 57 + 29 = ?$$

Ans 1. 163

2. 190

3. 185

4. 171

Question ID : **264330126060**

Option 1 ID : **264330493912**

Option 2 ID : **264330493915**

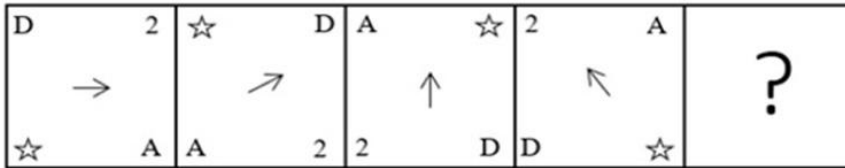
Option 3 ID : **264330493914**

Option 4 ID : **264330493913**

Status : **Answered**

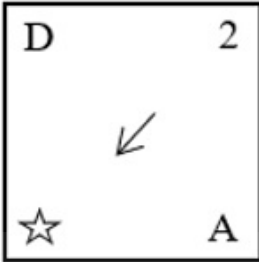
Chosen Option : **4**

Q.47 Which figure from the given options would replace the question mark (?) if the following figure series were to be continued?

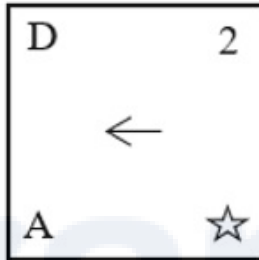


Ans

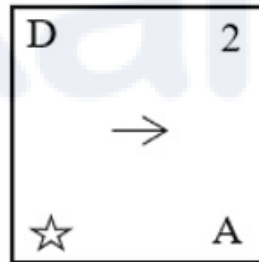
✗ 1.



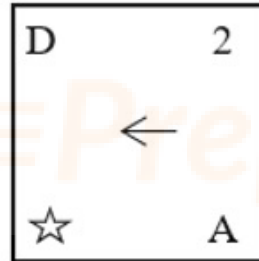
✗ 2.



✗ 3.



✓ 4.



Question ID : 264330145483

Option 1 ID : 264330570188

Option 2 ID : 264330570189

Option 3 ID : 264330570190

Option 4 ID : 264330570187

Status : Answered

Chosen Option : 4

Q.48 If M denotes '-', N denotes '+', O denotes '×', and P denotes '÷', then what will come in place of '?' in the following equation?

$$21 \text{ O } 5 \text{ P } 69 \text{ N } 3 \text{ P } \sqrt{225} \text{ M } 88 = ?$$

- Ans**
- 1. 61
 - 2. 65
 - 3. 55
 - 4. 50

Question ID : 26433057620
Option 1 ID : 264330225467
Option 2 ID : 264330225464
Option 3 ID : 264330225466
Option 4 ID : 264330225465
Status : Answered
Chosen Option : 3

Q.49 Which of the following numbers will replace the question mark (?) in the given series?

69, 65, 67, 63, ?, 61

- Ans**
- 1. 65
 - 2. 60
 - 3. 62
 - 4. 64

Question ID : 26433091008
Option 1 ID : 264330357444
Option 2 ID : 264330357442
Option 3 ID : 264330357441
Option 4 ID : 264330357443
Status : Answered
Chosen Option : 1

Q.50 Which two mathematical signs should be interchanged to make the given equation correct?

$$(45 \times 2) \div 15 - (6 \times 3) + 10 - (63 \div 21) = 17$$

- Ans**
- 1. + and +
 - 2. × and -
 - 3. - and +
 - 4. + and ×

Question ID : 264330145313
Option 1 ID : 264330569507
Option 2 ID : 264330569509
Option 3 ID : 264330569510
Option 4 ID : 264330569508
Status : Answered
Chosen Option : 3

Section : General Knowledge and General Awareness

Q.1 Lavani is a traditional dance of which of the following states?

- Ans
- 1. Uttar Pradesh
 - 2. Maharashtra
 - 3. Himachal Pradesh
 - 4. Madhya Pradesh

Question ID : 264330164796
Option 1 ID : 264330646311
Option 2 ID : 264330646312
Option 3 ID : 264330646314
Option 4 ID : 264330646313
Status : Answered
Chosen Option : 2

Q.2 Which of the following scientists provided the Law of Octaves?

- Ans
- 1. Galileo Galilei
 - 2. John Newlands
 - 3. Michael Faraday
 - 4. Marie Curie

Question ID : 264330131108
Option 1 ID : 264330513544
Option 2 ID : 264330513543
Option 3 ID : 264330513545
Option 4 ID : 264330513546
Status : Answered
Chosen Option : 2

Q.3 Who among the following Bahmani sultan was noted for cruelty and hence got the title as 'Zalim'?

- Ans
- 1. Humayun
 - 2. Firuz Shah
 - 3. Mujahid Shah
 - 4. Ahmad Shah

Question ID : 264330109014
Option 1 ID : 264330428334
Option 2 ID : 264330428335
Option 3 ID : 264330428336
Option 4 ID : 264330428333
Status : Answered
Chosen Option : 4

Q.4 According to the Koppen classification, Which regions experience cold humid winter with short summers?

- Ans
- 1. Western Rajasthan
 - 2. Northern Madhya Pradesh
 - 3. South of Goa
 - 4. Arunachal Pradesh

Question ID : 264330145192
Option 1 ID : 264330569023
Option 2 ID : 264330569026
Option 3 ID : 264330569025
Option 4 ID : 264330569024
Status : Answered
Chosen Option : 4

Q.5 The Rajpath was decided to be a permanent venue for the Republic Day parade from which of the following year onwards?

- Ans
- 1. 1959
 - 2. 1951
 - 3. 1955
 - 4. 1958

Question ID : 264330145139
Option 1 ID : 264330568814
Option 2 ID : 264330568813
Option 3 ID : 264330568811
Option 4 ID : 264330568812
Status : Not Answered
Chosen Option : --

Q.6 Which disease is caused by NOT having enough vitamin C in the diet for at least 3 months leading to weakness, anaemia, gum disease and skin problems?

- Ans
- 1. Pellagra
 - 2. Rickets
 - 3. Beriberi
 - 4. Scurvy

Question ID : 264330145200
Option 1 ID : 264330569056
Option 2 ID : 264330569058
Option 3 ID : 264330569057
Option 4 ID : 264330569055
Status : Answered
Chosen Option : 4

Q.7 What do you call a Glycocalyx that is a loose sheath type?

- Ans
- 1. Mesosomes
 - 2. Capsule
 - 3. Tubules
 - 4. Slime layer

Question ID : 264330145212
Option 1 ID : 264330569105
Option 2 ID : 264330569104
Option 3 ID : 264330569106
Option 4 ID : 264330569103
Status : Not Answered
Chosen Option : --

Q.8 Assessment of the country's GDP growth, external balance and fiscal balance are presented in which part of the budget document?

- Ans
- 1. Medium-term Fiscal Policy Statement
 - 2. Appropriation bill
 - 3. Fiscal Policy Strategy Statement
 - 4. Macroeconomic Framework Statement

Question ID : 264330141436
Option 1 ID : 264330554079
Option 2 ID : 264330554082
Option 3 ID : 264330554080
Option 4 ID : 264330554081
Status : Answered
Chosen Option : 3

Q.9 The seven years of war in the 18th century was fought between Britain and _____.

- Ans
- 1. Spain
 - 2. France
 - 3. Germany
 - 4. Portugal

Question ID : 264330165387
Option 1 ID : 264330648630
Option 2 ID : 264330648628
Option 3 ID : 264330648627
Option 4 ID : 264330648629
Status : Answered
Chosen Option : 2

Q.10 At the time of launch of the Smart Cities Mission, how many cities were proposed to be covered under this scheme?

- Ans
- 1. 100
 - 2. 50
 - 3. 75
 - 4. 25

Question ID : 26433064565
Option 1 ID : 264330252855
Option 2 ID : 264330252853
Option 3 ID : 264330252854
Option 4 ID : 264330252852
Status : Not Answered
Chosen Option : --

Q.11 What is the standard weight of a hockey ball?

- Ans
- 1. 161 gm - 156 gm
 - 2. 162 gm - 156 gm
 - 3. 160 gm - 156 gm
 - 4. 163 gm - 156 gm

Question ID : 264330118470
Option 1 ID : 264330465282
Option 2 ID : 264330465283
Option 3 ID : 264330465281
Option 4 ID : 264330465284
Status : Not Answered
Chosen Option : --

Q.12 Choose the correct statement(s) related to 'continentality'.

- a. The sea exerts a moderating influence on climate.
- b. As the distance from the sea increases, the people experience extreme weather conditions.
- c. As one goes from the surface of the earth to higher altitudes, the atmosphere becomes less dense and temperature decreases.

- Ans
- 1. a and c
 - 2. Only c
 - 3. b and c
 - 4. a and b

Question ID : 264330169314

Option 1 ID : 264330664038

Option 2 ID : 264330664035

Option 3 ID : 264330664037

Option 4 ID : 264330664036

Status : Not Answered

Chosen Option : --

Q.13 The Arms Act was passed in _____ that prevented Indians from keeping arms without an appropriate license.

- Ans
- 1. 1909
 - 2. 1897
 - 3. 1878
 - 4. 1912

Question ID : 264330112335

Option 1 ID : 264330441428

Option 2 ID : 264330441427

Option 3 ID : 264330441425

Option 4 ID : 264330441426

Status : Answered

Chosen Option : 3

Q.14 Who takes the salute during the Republic Day parade at New Delhi?

- Ans
- 1. Governor
 - 2. President
 - 3. Chief Justice
 - 4. Prime Minister

Question ID : 264330164810

Option 1 ID : 264330646369

Option 2 ID : 264330646368

Option 3 ID : 264330646370

Option 4 ID : 264330646367

Status : Answered

Chosen Option : 2

Q.15 According to the Census of India 2011, which of the following states has the highest Hindu population percentage of total population?

- Ans
- 1. Madhya Pradesh
 - 2. Haryana
 - 3. Himachal Pradesh
 - 4. Uttar Pradesh

Question ID : 264330166808
Option 1 ID : 264330654270
Option 2 ID : 264330654269
Option 3 ID : 264330654267
Option 4 ID : 264330654268
Status : Answered
Chosen Option : 3

Q.16 Which Article of the Indian Constitution mentions that all the authorities— civil and judicial— in the territory of India shall act in aid of the Supreme Court?

- Ans
- 1. Article 143
 - 2. Article 144
 - 3. Article 142
 - 4. Article 141

Question ID : 264330164950
Option 1 ID : 264330646929
Option 2 ID : 264330646930
Option 3 ID : 264330646928
Option 4 ID : 264330646927
Status : Not Answered
Chosen Option : --

Q.17 _____ river has the least storage capacity of usable water.

- Ans
- 1. Godavari
 - 2. Ganges
 - 3. Brahmaputra
 - 4. Krishna

Question ID : 264330163238
Option 1 ID : 264330640263
Option 2 ID : 264330640264
Option 3 ID : 264330640266
Option 4 ID : 264330640265
Status : Not Answered
Chosen Option : --

Q.18 Dihang and Lohit are rivers in which of the following regions?

- Ans
- 1. Sikkim and Manipur
 - 2. Punjab and Himachal
 - 3. Arunachal Pradesh and Assam
 - 4. Jammu and Kashmir

Question ID : 264330119796
Option 1 ID : 264330469462
Option 2 ID : 264330469459
Option 3 ID : 264330469461
Option 4 ID : 264330469460
Status : Answered
Chosen Option : 3

Q.19 With which of the following dance forms is Thumri music associated?

- Ans
- 1. Sattriya
 - 2. Kathakali
 - 3. Kathak
 - 4. Bharatanatyam

Question ID : 26433064645
Option 1 ID : 264330253174
Option 2 ID : 264330253173
Option 3 ID : 264330253175
Option 4 ID : 264330253172
Status : Not Answered
Chosen Option : --

Q.20 Who among the following Mauryan king fasted to death and died at Shravanabelagola?

- Ans
- 1. Bindusara
 - 2. Dasharatha
 - 3. Chandragupta Maurya
 - 4. Ashoka

Question ID : 264330165560
Option 1 ID : 264330649320
Option 2 ID : 264330649322
Option 3 ID : 264330649319
Option 4 ID : 264330649321
Status : Answered
Chosen Option : 3

Q.21 Shifting agriculture is known as _____ in the Western Ghats.

- Ans
- 1. kumari
 - 2. dahiya
 - 3. koman
 - 4. waltre

Question ID : 264330113261
Option 1 ID : 264330445130
Option 2 ID : 264330445131
Option 3 ID : 264330445129
Option 4 ID : 264330445132
Status : Not Answered
Chosen Option : --

Q.22 In which of the following states are Aus, Boro and Aman paddy crops grown in a year?

- Ans
- 1. Punjab
 - 2. Odisha
 - 3. Haryana
 - 4. Uttarakhand

Question ID : 264330163196
Option 1 ID : 264330640096
Option 2 ID : 264330640095
Option 3 ID : 264330640097
Option 4 ID : 264330640098
Status : Not Answered
Chosen Option : --

Q.23 The measure of the force that can cause an object to rotate about an axis is called:

- Ans
- 1. moment of inertia
 - 2. power
 - 3. torque
 - 4. centripetal force

Question ID : 264330111861

Option 1 ID : 264330439532

Option 2 ID : 264330439530

Option 3 ID : 264330439529

Option 4 ID : 264330439531

Status : Answered

Chosen Option : 3

Q.24 Who among the following classical poets of the Sultanate period in India popularised Qawwali, a form of music which derived its name from the Arabic word 'qaul', meaning 'to speak'?

- Ans
- 1. Nizam al-Din Awliya
 - 2. Jalal al-Din Muhammad Rumi
 - 3. Amir Khusrau
 - 4. Shams al-Din Muhammad Hafiz

Question ID : 26433074824

Option 1 ID : 264330293385

Option 2 ID : 264330293386

Option 3 ID : 264330293384

Option 4 ID : 264330293387

Status : Answered

Chosen Option : 3

Q.25 What is the name of the 1,3-isomer (or meta-isomer) of benzenediol with the chemical formula $C_6H_4(OH)_2$?

- Ans
- 1. m-Cresol
 - 2. Resorcinol
 - 3. Catechol
 - 4. Glycerol

Question ID : 264330110054

Option 1 ID : 264330432496

Option 2 ID : 264330432495

Option 3 ID : 264330432494

Option 4 ID : 264330432493

Status : Not Answered

Chosen Option : --

Q.26 Who was/were the founder(s) of the Theosophical Society?

- Ans
- 1. H P Blavatsky and Colonel Olcott
 - 2. Madam Bhikaji Cama
 - 3. Annie Besant
 - 4. Charles W Leadbeater and Emily Lutyens

Question ID : 26433099178

Option 1 ID : 264330389328

Option 2 ID : 264330389327

Option 3 ID : 264330389325

Option 4 ID : 264330389326

Status : Answered

Chosen Option : 2

Q.27 Which Articles of the Indian Constitution describe Fundamental Rights?

- Ans 1. Articles 5 to 11
 2. Articles 12 to 35
 3. Articles 36 to 51
 4. Articles 52 to 62

Question ID : 264330111520
Option 1 ID : 264330438165
Option 2 ID : 264330438166
Option 3 ID : 264330438167
Option 4 ID : 264330438168
Status : Answered
Chosen Option : 2

Q.28 Which of the following organisms belongs to phylum Apicomplexa?

- Ans 1. Sponge
 2. Physalia
 3. Hydra
 4. Plasmodium

Question ID : 26433082204
Option 1 ID : 264330322651
Option 2 ID : 264330322649
Option 3 ID : 264330322650
Option 4 ID : 264330322652
Status : Answered
Chosen Option : 2

Q.29 Select the INCORRECT pair of a famous minaret and its construction year in India.

- Ans 1. Shaheed Minar-1828 CE
 2. Chand Minar-1435 CE
 3. Char Minar-1664 CE
 4. Jhulta Minar-1452 CE

Question ID : 264330141821
Option 1 ID : 264330555606
Option 2 ID : 264330555603
Option 3 ID : 264330555604
Option 4 ID : 264330555605
Status : Not Answered
Chosen Option : --

Q.30 In 1932, who discovered the positron, a particle described as 'carrying a positive charge but having a mass of the same order of magnitude as that normally possessed by a free negative electron'?

- Ans 1. Niels Bohr
 2. Paul Dirac
 3. Ernest Rutherford
 4. Carl Anderson

Question ID : 26433055070
Option 1 ID : 264330215267
Option 2 ID : 264330215264
Option 3 ID : 264330215265
Option 4 ID : 264330215266
Status : Answered
Chosen Option : 3

Q.31 Which of the following rights forbids employment of children below the age of 14 years in dangerous jobs?

- Ans
- 1. Right to Equality
 - 2. Right to Constitutional Remedies
 - 3. Right against Exploitation
 - 4. Right to Freedom

Question ID : 264330116399
Option 1 ID : 264330457684
Option 2 ID : 264330457683
Option 3 ID : 264330457681
Option 4 ID : 264330457682
Status : Answered
Chosen Option : 3

Q.32 Which of the following is NOT the manifestation of Iron-deficiency anaemia (IDA)?

- Ans
- 1. Soft palate
 - 2. Blindness
 - 3. General pallor
 - 4. Paleness of conjunctiva of eyes

Question ID : 26433086903
Option 1 ID : 264330341255
Option 2 ID : 264330341256
Option 3 ID : 264330341253
Option 4 ID : 264330341254
Status : Answered
Chosen Option : 2

Q.33 Which of the following books is an autobiography of the Indian politician LK Advani?

- Ans
- 1. Wings of Fire: An Autobiography
 - 2. My Country My Life
 - 3. My Times: An Autobiography
 - 4. In Pursuit of Justice: An Autobiography

Question ID : 264330145179
Option 1 ID : 264330568974
Option 2 ID : 264330568972
Option 3 ID : 264330568971
Option 4 ID : 264330568973
Status : Answered
Chosen Option : 2

Q.34 From which five-year plan did India start its journey of industrialisation?

- Ans
- 1. Third Five-year Plan
 - 2. Second Five-year Plan
 - 3. Fifth Five-year Plan
 - 4. Fourth Five-year Plan

Question ID : 264330145231
Option 1 ID : 264330569180
Option 2 ID : 264330569182
Option 3 ID : 264330569179
Option 4 ID : 264330569181
Status : Answered
Chosen Option : 2

Q.35 Which of the following statements about green revolution is/are correct?
I. Green revolution began in the 1960s.
II. HYV of a seed made green revolution a success.
III. Extensive use of cattle was also one constituent of green revolution.

- Ans 1. Only II and III
 2. Only I and II
 3. Only I
 4. Only II

Question ID : 264330141499
Option 1 ID : 264330554333
Option 2 ID : 264330554334
Option 3 ID : 264330554331
Option 4 ID : 264330554332
Status : Answered
Chosen Option : 2

Q.36 Ghanakanta Bora Borbayan has been conferred the Padma Shri award for his contribution to which of the following fields?

- Ans 1. Bhortal
 2. Bagurumba
 3. Sattriya
 4. Chhau

Question ID : 264330145161
Option 1 ID : 264330568900
Option 2 ID : 264330568899
Option 3 ID : 264330568901
Option 4 ID : 264330568902
Status : Answered
Chosen Option : 4

Q.37 The masculine aspect of the Manipuri classical dance is known as:

- Ans 1. Ras
 2. Choloms
 3. Pareng
 4. Maiba

Question ID : 26433092386
Option 1 ID : 264330362834
Option 2 ID : 264330362833
Option 3 ID : 264330362835
Option 4 ID : 264330362836
Status : Answered
Chosen Option : 2

Q.38 Which of the following Articles of the Constitution of India lays down the establishment of Public Service Commissions for the Union and for the States?

- Ans 1. Article 315
 2. Article 316
 3. Article 317
 4. Article 318

Question ID : 264330145262
Option 1 ID : 264330569303
Option 2 ID : 264330569304
Option 3 ID : 264330569305
Option 4 ID : 264330569306
Status : Answered
Chosen Option : 1

Q.39 Which of the following is an indirect tax?

- Ans 1. Death duty
 2. Interest tax
 3. Goods and services tax
 4. Capital gains tax

Question ID : 264330145244
Option 1 ID : 264330569233
Option 2 ID : 264330569232
Option 3 ID : 264330569234
Option 4 ID : 264330569231
Status : Answered
Chosen Option : 3

Q.40 The ball colour in the sport of Ball Badminton should be:

- Ans 1. yellow
 2. green
 3. pink
 4. red

Question ID : 26433059449
Option 1 ID : 264330232667
Option 2 ID : 264330232666
Option 3 ID : 264330232664
Option 4 ID : 264330232665
Status : Not Answered
Chosen Option : --

Q.41 What is the bicameral legislature of the Indian Constitution?

- Ans 1. It is legislative body with three houses.
 2. It is legislative body with two houses.
 3. It is legislative body with one house.
 4. It is legislative body with four houses.

Question ID : 264330118527
Option 1 ID : 264330465511
Option 2 ID : 264330465510
Option 3 ID : 264330465509
Option 4 ID : 264330465512
Status : Answered
Chosen Option : 2

Q.42 Neeruswamy Pillai and Rajaratnam Pillai are exponents of which musical instrument?

Ans 1. Nadaswaran

2. Mandolin

3. Mridangam

4. Sarangi

Question ID : 264330145152

Option 1 ID : 264330568863

Option 2 ID : 264330568865

Option 3 ID : 264330568864

Option 4 ID : 264330568866

Status : Not Answered

Chosen Option : --

Q.43 Living organisms have been on Earth for how much percent of Earth's history?

Ans 1. 80%

2. 20%

3. 60%

4. 40%

Question ID : 26433064467

Option 1 ID : 264330252460

Option 2 ID : 264330252463

Option 3 ID : 264330252461

Option 4 ID : 264330252462

Status : Not Answered

Chosen Option : --

Q.44 According to the 2011 Census, which state recorded the lowest literacy rate?

Ans 1. Arunachal Pradesh

2. Bihar

3. Andhra Pradesh

4. Jharkhand

Question ID : 264330110658

Option 1 ID : 264330434909

Option 2 ID : 264330434911

Option 3 ID : 264330434912

Option 4 ID : 264330434910

Status : Answered

Chosen Option : 2

Q.45 Which Article of the Indian Constitution refers to the Rights of Ministers with respect to the State Legislature?

Ans 1. Article 178

2. Article 177

3. Article 175

4. Article 176

Question ID : 264330114503

Option 1 ID : 264330450100

Option 2 ID : 264330450099

Option 3 ID : 264330450097

Option 4 ID : 264330450098

Status : Not Answered

Chosen Option : --

Q.46 In Ball Badminton, players change the ends in each game when a side first scores all of the following, EXCEPT:

- Ans
- 1. 18
 - 2. 9
 - 3. 27
 - 4. 11

Question ID : 26433059450
Option 1 ID : 264330232670
Option 2 ID : 264330232668
Option 3 ID : 264330232671
Option 4 ID : 264330232669
Status : Not Answered
Chosen Option : --

Q.47 In 1928, which equation was derived and combines quantum theory and special relativity to describe the behaviour of an electron moving at a relativistic speed?

- Ans
- 1. Bernoulli's equation
 - 2. Lorentz equation
 - 3. Helmholtz equation
 - 4. Dirac equation

Question ID : 264330141666
Option 1 ID : 264330554985
Option 2 ID : 264330554983
Option 3 ID : 264330554986
Option 4 ID : 264330554984
Status : Not Answered
Chosen Option : --

Q.48 The term 'Dribble' is generally associated with_____.

- Ans
- 1. cricket
 - 2. baseball
 - 3. basketball
 - 4. tennis

Question ID : 264330109729
Option 1 ID : 264330431195
Option 2 ID : 264330431193
Option 3 ID : 264330431194
Option 4 ID : 264330431196
Status : Answered
Chosen Option : 3

Q.49 Which of the following Sultans of Delhi was appointed as Amir-i-Tuzuk (Master of Ceremonies) before becoming the Sultan?

- Ans
- 1. Muhammad Bin Tughlaq
 - 2. Alauddin Khalji
 - 3. Balban
 - 4. Iltutmish

Question ID : 264330165362
Option 1 ID : 264330648527
Option 2 ID : 264330648529
Option 3 ID : 264330648528
Option 4 ID : 264330648530
Status : Answered
Chosen Option : 3

Q.50 Who is the author of the book 'The Soul of a Butterfly: Reflections on Life's Journey'?

- Ans
- 1. Jake LaMotta
 - 2. Eugene J Bullard
 - 3. Roberto Duran
 - 4. Muhammad Ali

Question ID : 26433071469
Option 1 ID : 264330280302
Option 2 ID : 264330280303
Option 3 ID : 264330280301
Option 4 ID : 264330280300
Status : Not Answered
Chosen Option : --

Section : Quantitative Aptitude

Q.1 Find the fourth proportional of 22, 66 and 11.

- Ans
- 1. 23
 - 2. 33
 - 3. 17
 - 4. 39

Question ID : 264330104221
Option 1 ID : 264330409186
Option 2 ID : 264330409188
Option 3 ID : 264330409187
Option 4 ID : 264330409185
Status : Answered
Chosen Option : 2

Q.2 An article is sold at a discount of 25% and an additional discount of 28% is allowed on cash payment. If Ramendra purchased the article by paying ₹10,800 in cash, then what was the marked price of the article?

- Ans
- 1. ₹19,800
 - 2. ₹20,800
 - 3. ₹20,000
 - 4. ₹18,000

Question ID : 264330165524
Option 1 ID : 264330649176
Option 2 ID : 264330649178
Option 3 ID : 264330649177
Option 4 ID : 264330649175
Status : Answered
Chosen Option : 3

Q.3 A shopkeeper marked the price as ₹15,000 on an article, and a successive discount of 5%, 10% and 20% was allowed on it. What is the selling price?

- Ans
- 1. ₹10,260
 - 2. ₹13,520
 - 3. ₹11,520
 - 4. ₹9,850

Question ID : 264330104400
Option 1 ID : 264330409902
Option 2 ID : 264330409904
Option 3 ID : 264330409901
Option 4 ID : 264330409903
Status : Answered
Chosen Option : 1

Q.4 The value of a washing machine depreciated from ₹40,960 to ₹21,970 in 3 years. Find the yearly rate of depreciation.

- Ans
- 1. 2.5%
 - 2. 16.25%
 - 3. 18.75%
 - 4. 20%

Question ID : 264330145063
Option 1 ID : 264330568507
Option 2 ID : 264330568508
Option 3 ID : 264330568509
Option 4 ID : 264330568510
Status : Answered
Chosen Option : 3

Q.5 A and B are equally efficient, and each can individually complete a piece of work in 36 days, if none takes any holiday. A and B started working together on this piece of work, but A took a day off after every five days of work, while B took a day off after every seven days of work. If the duo had started work on 1 July 2021, on which date was the work completed?

- Ans
- 1. 22 July 2021
 - 2. 19 July 2021
 - 3. 21 July 2021
 - 4. 20 July 2021

Question ID : 264330114532
Option 1 ID : 264330450216
Option 2 ID : 264330450215
Option 3 ID : 264330450214
Option 4 ID : 264330450213
Status : Answered
Chosen Option : 3

Q.6 The radius of a metallic spherical ball is 3 cm. If the metallic ball is melted and recast into x number of hemispheres of radius equal to half the radius of the metallic spherical ball, then find the value of x .

- Ans
- 1. 15
 - 2. 14
 - 3. 16
 - 4. 13

Question ID : 264330103636
Option 1 ID : 264330406851
Option 2 ID : 264330406850
Option 3 ID : 264330406852
Option 4 ID : 264330406849
Status : Answered
Chosen Option : 3

Q.7 Some ice pieces, spherical in shape, of diameter 6 cm are dropped in a cylindrical container containing some juice and are fully submerged. If the diameter of the container is 18 cm and level of juice rises by 40 cm, then how many ice pieces are dropped in the container?

- Ans
- 1. 95
 - 2. 85
 - 3. 80
 - 4. 90

Question ID : 264330145119
Option 1 ID : 264330568734
Option 2 ID : 264330568733
Option 3 ID : 264330568731
Option 4 ID : 264330568732
Status : Answered
Chosen Option : 4

Q.8 If the slant height of a cone is 29 cm and its height is 20 cm, find the ratio between the magnitudes of total surface area and the volume.

- Ans
- 1. 5 : 14
 - 2. 7 : 15
 - 3. 3 : 7
 - 4. 3 : 14

Question ID : 264330145106
Option 1 ID : 264330568682
Option 2 ID : 264330568680
Option 3 ID : 264330568681
Option 4 ID : 264330568679
Status : Answered
Chosen Option : 1

Q.9 In $\triangle ABC$ with sides 8 cm, 9 cm and 12 cm, the angle bisector of the largest angle divides the opposite sides into two segments. What is the length of the shorter segment?

- Ans
- ✓ 1. $5\frac{11}{17}$ cm
 - ✗ 2. $4\frac{11}{17}$ cm
 - ✗ 3. $6\frac{13}{17}$ cm
 - ✗ 4. $3\frac{9}{17}$ cm

Question ID : 264330170152

Option 1 ID : 264330667283

Option 2 ID : 264330667286

Option 3 ID : 264330667284

Option 4 ID : 264330667285

Status : Answered

Chosen Option : 1

Q.10 If $\cot^2\theta = 1 - e^2$, then the value of $\operatorname{cosec}\theta + \cot^3\theta \sec\theta$ is:

- Ans
- ✗ 1. $(2 - e^2)^{\frac{1}{2}}$
 - ✗ 2. $(1 - e^2)^{\frac{3}{2}}$
 - ✗ 3. $(1 - e^2)$
 - ✓ 4. $(2 - e^2)^{\frac{3}{2}}$

Question ID : 264330145133

Option 1 ID : 264330568789

Option 2 ID : 264330568787

Option 3 ID : 264330568790

Option 4 ID : 264330568788

Status : Answered

Chosen Option : 4

Q.11 If $\frac{2 \sin A - \cos A}{\sin A + \cos A} = 1$, then find the value of $\cot A$.

- Ans
- ✗ 1. 1
 - ✓ 2. $\frac{1}{2}$
 - ✗ 3. $\frac{1}{3}$
 - ✗ 4. 2

Question ID : 264330157750

Option 1 ID : 264330618359

Option 2 ID : 264330618361

Option 3 ID : 264330618362

Option 4 ID : 264330618360

Status : Answered

Chosen Option : 2

Q.12 A, B and C can do a piece of work in 11 days, 20 days and 55 days respectively. How soon can the work be done if A works with B on first day, A works with C on second day and so on?

- Ans
- 1. $8\frac{1}{2}$ days
 - 2. $9\frac{1}{2}$ days
 - 3. 8 days
 - 4. 9 days

Question ID : 26433082415
Option 1 ID : 264330323494
Option 2 ID : 264330323496
Option 3 ID : 264330323493
Option 4 ID : 264330323495
Status : Answered
Chosen Option : 3

Q.13 Study the given table and answer the question that follows.

Number of children	Number of families
0	4
1	22
2	15
3	6
4	2

The average number of children per family is:

- Ans
- 1. 1.47
 - 2. 1.59
 - 3. 1.23
 - 4. 1.72

Question ID : 264330145023
Option 1 ID : 264330568348
Option 2 ID : 264330568349
Option 3 ID : 264330568347
Option 4 ID : 264330568350
Status : Answered
Chosen Option : 2

Q.14 A fast local of Mumbai takes 45 minutes less than a slow local for a journey of 150 km. If the speed of the fast local is 10 km/h more than that of the slow local, find the speed (in km/h) of the slow local train.

- Ans
- 1. 30
 - 2. 35
 - 3. 45
 - 4. 40

Question ID : 264330103988
Option 1 ID : 264330408253
Option 2 ID : 264330408254
Option 3 ID : 264330408256
Option 4 ID : 264330408255
Status : Answered
Chosen Option : 4

Q.15 In a school of 720 students, the ratio of boys to girls is 3 : 5. Find how many new boys may be allowed to the school if 18 new girls are admitted, so that the ratio of boys to girls changes to 2 : 3.

- Ans 1. 42
 2. 44
 3. 50
 4. 38

Question ID : 264330145047
Option 1 ID : 264330568443
Option 2 ID : 264330568445
Option 3 ID : 264330568446
Option 4 ID : 264330568444
Status : Answered
Chosen Option : 1

Q.16 The given graph shows the income and expenditure of a family. Study the graph and answer the question that follows.



The expenditure of the family increased by _____ from 2017 to 2018.

- Ans 1. 25%
 2. 11%
 3. 22%
 4. 20%

Question ID : 264330165431
Option 1 ID : 264330648803
Option 2 ID : 264330648805
Option 3 ID : 264330648804
Option 4 ID : 264330648806
Status : Answered
Chosen Option : 1

Q.17 Which of the following is the greatest four-digit number that is divisible by 15, 25, 40, and 75?

- Ans 1. 9200
 2. 9500
 3. 9600
 4. 9000

Question ID : 264330145051
Option 1 ID : 264330568460
Option 2 ID : 264330568462
Option 3 ID : 264330568461
Option 4 ID : 264330568459
Status : Answered
Chosen Option : 3

Q.18 What is the average of the first six prime numbers?

- Ans
- 1. $6\frac{1}{3}$
 - 2. $6\frac{5}{6}$
 - 3. $6\frac{2}{3}$
 - 4. $6\frac{1}{6}$

Question ID : 264330104485

Option 1 ID : 264330410242

Option 2 ID : 264330410243

Option 3 ID : 264330410244

Option 4 ID : 264330410241

Status : Answered

Chosen Option : 2

Q.19 Ayush spends 25% of an amount of money on an insurance policy, 26% on food, 23% on children's education and 19% on recreation. He deposits the remaining amount of ₹26,600 in the bank. What is the total amount (in ₹) that he spends on food and recreation together?

- Ans
- 1. 1,95,000
 - 2. 1,71,000
 - 3. 1,62,000
 - 4. 1,83,000

Question ID : 264330158256

Option 1 ID : 264330620383

Option 2 ID : 264330620385

Option 3 ID : 264330620386

Option 4 ID : 264330620384

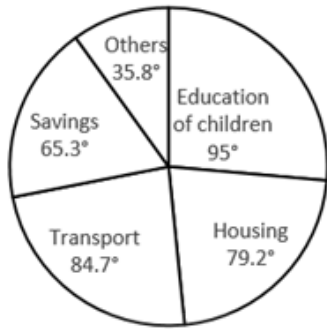
Status : Answered

Chosen Option : 2

Prepare 50% Faster

Q.20 Study the given pie-chart carefully and answer the question that follows.
Degree wise Break-up of Expenditure of a Family in a Month

Total Amount Spent In a
Month = ₹56800.



What is the amount spent by the family on housing?

- Ans
- 1. ₹11,814
 - 2. ₹6,248
 - 3. ₹10,615
 - 4. ₹12,496

Question ID : 264330165434

Option 1 ID : 264330648815

Option 2 ID : 264330648818

Option 3 ID : 264330648817

Option 4 ID : 264330648816

Status : Answered

Chosen Option : 4

Q.21 The number of balls, each one is 4 cm in the diameter that can be made from a solid metallic sphere of diameter 32 cm is:

- Ans
- 1. 256
 - 2. 64
 - 3. 512
 - 4. 1024

Question ID : 264330165654

Option 1 ID : 264330649697

Option 2 ID : 264330649695

Option 3 ID : 264330649696

Option 4 ID : 264330649698

Status : Answered

Chosen Option : 3

Q.22 Simplify the given expression.

$$b + 2a - [(3b + a) - (2a + b) + 2a] - a$$

- Ans
- 1. $-a$
 - 2. b
 - 3. $-b$
 - 4. a

Question ID : 264330157761
Option 1 ID : 264330618406
Option 2 ID : 264330618403
Option 3 ID : 264330618404
Option 4 ID : 264330618405
Status : Answered
Chosen Option : 3

Q.23 In a store, Arun has two options to buy a mobile phone, either he can pay the full amount of Rs.2,500 or he may buy at an instalment scheme, i.e. Rs.520 in down payment and four equal instalments, rate of interest being charged at 25% p.a. simple interest. Arun buys a mobile phone on the instalment scheme. What is the monthly instalment for Arun?

- Ans
- 1. Rs.510
 - 2. Rs.530
 - 3. Rs.550
 - 4. Rs.520

Question ID : 26433063339
Option 1 ID : 264330248011
Option 2 ID : 264330248008
Option 3 ID : 264330248009
Option 4 ID : 264330248010
Status : Answered
Chosen Option : 3

Q.24 In a 1200 m race, Rakesh reaches the final point in 36 seconds and Rajesh reaches in 40 sec. By how much distance does Rakesh beat Rajesh?

- Ans
- 1. 130 m
 - 2. 120 m
 - 3. 140 m
 - 4. 150 m

Question ID : 264330145065
Option 1 ID : 264330568516
Option 2 ID : 264330568515
Option 3 ID : 264330568517
Option 4 ID : 264330568518
Status : Answered
Chosen Option : 2

Q.25 Rakesh runs a coaching institute having 50 faculty members. The average monthly salary of 35 faculty members is ₹37,500. What will be the average monthly salary (in ₹) of the other 15 faculty members, if the average monthly salary of all the 50 faculty members is found to be ₹30,000?

- Ans
- 1. 13,000
 - 2. 13,500
 - 3. 12,500
 - 4. 12,000

Question ID : 264330165667

Option 1 ID : 264330649749

Option 2 ID : 264330649750

Option 3 ID : 264330649748

Option 4 ID : 264330649747

Status : Answered

Chosen Option : 3

Q.26 If $\sin\theta + \cos\theta = \sqrt{2} \cos\theta$, then find $\frac{\sin\theta - \cos\theta}{\sin\theta}$:

- Ans
- 1. $-\sqrt{2}$
 - 2. -1
 - 3. 1
 - 4. $\sqrt{2}$

Question ID : 264330158420

Option 1 ID : 264330621042

Option 2 ID : 264330621040

Option 3 ID : 264330621039

Option 4 ID : 264330621041

Status : Answered

Chosen Option : 1

Q.27 Ankita sold three toys. The first toy was sold for ₹1,500 at a profit of 25%; the second toy was sold for ₹2,800 at a loss of 50% and the third toy was sold for ₹3,500 at a profit of 25%. Find her total profit or loss percentage.

- Ans
- 1. 15.25% loss
 - 2. 15.25% profit
 - 3. 18.75% profit
 - 4. 18.75% loss

Question ID : 264330131457

Option 1 ID : 264330514932

Option 2 ID : 264330514931

Option 3 ID : 264330514933

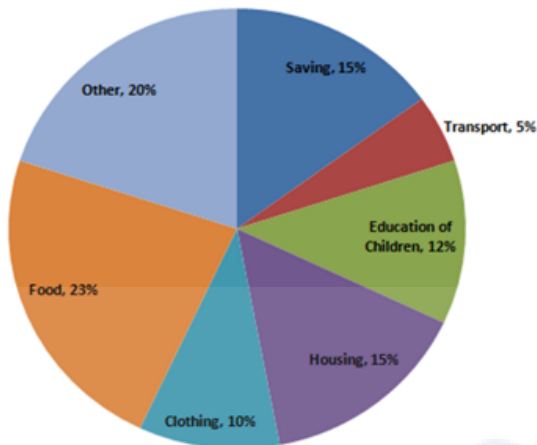
Option 4 ID : 264330514934

Status : Answered

Chosen Option : 4

Q.28 Study the given pie-chart and answer the question that follows.

The pie-chart shows the expenditure of a family on different items and their savings throughout the year 2021.



If the total income for the year was ₹1,00,000, then the difference in the expenses (in ₹) between housing and transport was:

- Ans
- 1. 9,500
 - 2. 10,500
 - 3. 9,000
 - 4. 10,000

Question ID : 264330163476

Option 1 ID : 264330641164

Option 2 ID : 264330641166

Option 3 ID : 264330641163

Option 4 ID : 264330641165

Status : Answered

Chosen Option : 4

Q.29 Simplify the given expression.

$$(x - 2y)(y - 3x) + (x + y)(x - y) + (x - 3y)(2x + y)$$

- Ans
- 1. $2y(x - 3y)$
 - 2. $2y(x + 3y)$
 - 3. $2x(x - 3y)$
 - 4. $2x(x + 3y)$

Question ID : 264330157774

Option 1 ID : 264330618456

Option 2 ID : 264330618458

Option 3 ID : 264330618455

Option 4 ID : 264330618457

Status : Answered

Chosen Option : 1

Q.30 The least number of five digits which is exactly divisible by 9, 12, 15, 25 and 27 is:

Ans 1. 10800

2. 10250

3. 10700

4. 10600

Question ID : 26433064889

Option 1 ID : 264330254149

Option 2 ID : 264330254151

Option 3 ID : 264330254150

Option 4 ID : 264330254148

Status : Answered

Chosen Option : 1

Q.31 The LCM of two numbers is five times their HCF. If the product of the two numbers is 20480, then find their HCF and LCM, respectively.

Ans 1. 46 and 230

2. 48 and 240

3. 64 and 320

4. 56 and 280

Question ID : 26433065040

Option 1 ID : 264330254753

Option 2 ID : 264330254754

Option 3 ID : 264330254752

Option 4 ID : 264330254755

Status : Answered

Chosen Option : 3

Q.32 Find the HCF of 125, 250 and 750.

Ans 1. 50

2. 25

3. 125

4. 75

Question ID : 26433065033

Option 1 ID : 264330254725

Option 2 ID : 264330254724

Option 3 ID : 264330254727

Option 4 ID : 264330254726

Status : Answered

Chosen Option : 3

Q.33 The LCM of 8, 12 and 18 is:

Ans 1. 24

2. 80

3. 72

4. 36

Question ID : 264330145079

Option 1 ID : 264330568571

Option 2 ID : 264330568574

Option 3 ID : 264330568573

Option 4 ID : 264330568572

Status : Answered

Chosen Option : 3

Q.34 Study the given table and answer the question that follows.

The table shows the number of employees in three organisations during three years.

Year	2018	2019	2020
Organization			
P	75	69	85
Q	96	81	74
R	85	63	90

What is the respective ratio between total number of employees in organisations P and R together in 2019 and total number of employees in organisations Q and R together in 2020?

- Ans
- 1. 23 : 41
 - 2. 33 : 41
 - 3. 41 : 31
 - 4. 33 : 23

Question ID : 264330158264

Option 1 ID : 264330620415

Option 2 ID : 264330620418

Option 3 ID : 264330620417

Option 4 ID : 264330620416

Status : Answered

Chosen Option : 2

Q.35 The ratio of monthly income and expenditure of a man is 7:3. If his expenditure is ₹5,400, find his monthly income.

- Ans
- 1. ₹12,600
 - 2. ₹13,300
 - 3. ₹11,500
 - 4. ₹10,400

Question ID : 264330145070

Option 1 ID : 264330568537

Option 2 ID : 264330568538

Option 3 ID : 264330568536

Option 4 ID : 264330568535

Status : Answered

Chosen Option : 1

Q.36 If 30% of Ravi's income is equal to 40% of Suresh's income, then 50% of Ravi's income is equal to what percentage of Suresh's income?

- Ans
- 1. $66\frac{1}{3}\%$
 - 2. $33\frac{1}{3}\%$
 - 3. $33\frac{2}{3}\%$
 - 4. $66\frac{2}{3}\%$

Question ID : 264330103394
Option 1 ID : 264330405882
Option 2 ID : 264330405883
Option 3 ID : 264330405884
Option 4 ID : 264330405881
Status : Answered
Chosen Option : 4

Q.37 If Arun can complete $\frac{2}{3}$ rd of a work in 12 days, then in how many days can he complete $\frac{1}{6}$ th of the same work?

- Ans
- 1. 3
 - 2. 4
 - 3. 5
 - 4. 2

Question ID : 264330101377
Option 1 ID : 264330398056
Option 2 ID : 264330398055
Option 3 ID : 264330398054
Option 4 ID : 264330398053
Status : Answered
Chosen Option : 1

Q.38 The chord of a circle is equal to its radius. Find the difference between the angle subtended by this chord at the minor arc and major arc of the circle.

- Ans
- 1. 30°
 - 2. 120°
 - 3. 60°
 - 4. 150°

Question ID : 264330165539
Option 1 ID : 264330649235
Option 2 ID : 264330649236
Option 3 ID : 264330649237
Option 4 ID : 264330649238
Status : Answered
Chosen Option : 2

Q.39 The length of the common chord of two intersecting circles is 24 cm. If the diameter of the circles are 30 cm and 26 cm, then the distance between the centres (in cm) is:

- Ans
- 1. 16 cm
 - 2. 14 cm
 - 3. 18 cm
 - 4. 12 cm

Question ID : 264330170155

Option 1 ID : 264330667296

Option 2 ID : 264330667298

Option 3 ID : 264330667297

Option 4 ID : 264330667295

Status : Answered

Chosen Option : 2

Q.40 Study the given table and answer the question that follows.

The table shows the number of students in various courses in various cities A, B, C, D and E in India during the academic year 2022-2023.

City	MBA	Science	Engineering	Medicine	MCA	Total
A	1200	2560	4520	1100	960	10340
B	1350	2650	5100	1050	850	11000
C	1250	2640	4580	1120	750	10340
D	1960	1250	3500	1850	1600	10160
E	1200	2100	3500	960	540	8300

During the academic year 2022-2023, which city had the largest number of students?

- Ans
- 1. C
 - 2. D
 - 3. A
 - 4. B

Question ID : 264330157714

Option 1 ID : 264330618217

Option 2 ID : 264330618218

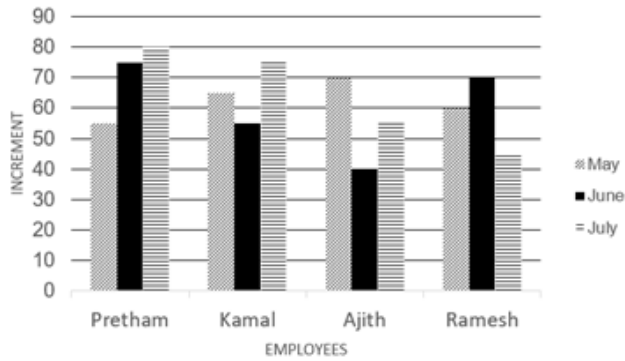
Option 3 ID : 264330618215

Option 4 ID : 264330618216

Status : Answered

Chosen Option : 4

Q.41 Study the given bar graph carefully and answer the question that follows. Increment of four employees (in ₹) in the months of May, June and July.



What is Kamal's overall average increment in three months?

- Ans
- 1. ₹60
 - 2. ₹70
 - 3. ₹75
 - 4. ₹65

Question ID : 264330165427

Option 1 ID : 264330648788

Option 2 ID : 264330648790

Option 3 ID : 264330648789

Option 4 ID : 264330648787

Status : Answered

Chosen Option : 4

Q.42 A hollow cylindrical tube made of plastic is 3 cm thick. If the external diameter is 20 cm and length of the tube is 49 cm, find the volume of the plastic.

- Ans
- 1. 7238 cm³
 - 2. 7644 cm³
 - 3. 7546 cm³
 - 4. 7854 cm³

Question ID : 264330103644

Option 1 ID : 264330406882

Option 2 ID : 264330406884

Option 3 ID : 264330406881

Option 4 ID : 264330406883

Status : Answered

Chosen Option : 4

Q.43 The value of $2\tan^2 45^\circ + \cos^2 30^\circ - \sin^2 60^\circ$ is:

- Ans
- 1. 2
 - 2. 1
 - 3. -1
 - 4. -2

Question ID : 264330157752

Option 1 ID : 264330618368

Option 2 ID : 264330618367

Option 3 ID : 264330618369

Option 4 ID : 264330618370

Status : Answered

Chosen Option : 1

Q.44 A shopkeeper sells sugar at ₹40 per kg, which he purchased at ₹36 per kg. His weighing machine is faulty and it weighs only 800 gm while selling. His percentage profit (correct to 2 decimal places) is:

- Ans
- 1. 37.58%
 - 2. 40%
 - 3. 39.28%
 - 4. 38.89%

Question ID : 26433099045
Option 1 ID : 264330388820
Option 2 ID : 264330388817
Option 3 ID : 264330388818
Option 4 ID : 264330388819
Status : Answered
Chosen Option : 4

Q.45 ΔPQR is right angled at Q such that $PQ=(x-y)$, $QR=x$ and $PR=(x+y)$. S is a point on QR such that $QS=PQ$. The ratio QS:SR for any values of x and y is:

- Ans
- 1. 3 : 1
 - 2. 2 : 1
 - 3. 1 : 2
 - 4. 1 : 3

Question ID : 264330158286
Option 1 ID : 264330620503
Option 2 ID : 264330620505
Option 3 ID : 264330620506
Option 4 ID : 264330620504
Status : Not Answered
Chosen Option : --

Q.46 The following table represents the number of scooters sold by 5 stores in 4 different months in the year 2022.

Months \ Stores	A	B	C	D	E
January	212	168	173	182	190
February	312	250	212	175	182
March	280	275	265	255	245
April	270	280	290	305	275

Find the ratio between the total number of scooters sold by stores A and B together in January and the total number of scooters sold by stores D and E together in March?

- Ans
- 1. 20 : 23
 - 2. 18 : 23
 - 3. 17 : 25
 - 4. 19 : 25

Question ID : 264330167250
Option 1 ID : 264330655996
Option 2 ID : 264330655997
Option 3 ID : 264330655998
Option 4 ID : 264330655995
Status : Answered
Chosen Option : 4

Q.47 A man covers a certain distance by bike. If he covers 25% of the distance at the speed of 25 km/h, 50% of the distance at the speed of 50 km/h and the remaining distance at the speed of 12.5 km/h, find his average speed over the whole journey.

- Ans
- 1. 20 km/h
 - 2. 30 km/h
 - 3. 25 km/h
 - 4. 35 km/h

Question ID : 26433063952
Option 1 ID : 264330250400
Option 2 ID : 264330250402
Option 3 ID : 264330250401
Option 4 ID : 264330250403
Status : Answered
Chosen Option : 3

Q.48 If the sum of two numbers is 60 and their HCF and LCM are 5 and 60, respectively, then the sum of the reciprocals of the numbers will be:

- Ans
- 1. $\frac{1}{11}$
 - 2. $\frac{1}{6}$
 - 3. $\frac{1}{4}$
 - 4. $\frac{1}{5}$

Question ID : 26433096373
Option 1 ID : 264330378232
Option 2 ID : 264330378231
Option 3 ID : 264330378229
Option 4 ID : 264330378230
Status : Answered
Chosen Option : 4

Q.49 The following table gives the number of different types of batteries sold by a company over the years (numbers in hundreds).

Year	Type of battery			
	7AH	32AH	35AH	55AH
2018	20	30	40	50
2019	40	35	45	45
2020	50	40	40	40
2021	40	50	50	45
2022	45	45	35	55

What is the difference in the number of 7AH batteries sold in 2021 and 2022?

- Ans
- 1. 200
 - 2. 700
 - 3. 300
 - 4. 500

Question ID : 264330167252
Option 1 ID : 264330656003
Option 2 ID : 264330656006
Option 3 ID : 264330656004
Option 4 ID : 264330656005
Status : Answered
Chosen Option : 4

Q.50 The HCF and LCM of two numbers are 9 and 126, respectively. Find the larger number, if the ratio between the numbers is 2 : 7.

- Ans
- 1. 42
 - 2. 63
 - 3. 77
 - 4. 21

Question ID : 26433063284
Option 1 ID : 264330247790
Option 2 ID : 264330247789
Option 3 ID : 264330247791
Option 4 ID : 264330247788
Status : Answered
Chosen Option : 2

Section : English Comprehension

Q.1 Select the most appropriate option that can substitute the underlined segment in the given sentence.

The concert was filled with rapt teenage listeners.

- Ans
- 1. really fashionable
 - 2. boldly dressed
 - 3. truly energetic
 - 4. fully attentive

Question ID : 26433099880
Option 1 ID : 264330392109
Option 2 ID : 264330392112
Option 3 ID : 264330392110
Option 4 ID : 264330392111
Status : Answered
Chosen Option : 3

Q.2 Select the most appropriate ANTONYM of the given word.
Decline

- Ans
- 1. Escape
 - 2. Ascend
 - 3. Demonstrate
 - 4. Traverse

Question ID : 26433099652
Option 1 ID : 264330391214
Option 2 ID : 264330391216
Option 3 ID : 264330391213
Option 4 ID : 264330391215
Status : Answered
Chosen Option : 2

Q.3 Select the most appropriate option that can substitute the underlined segment in the given sentence. If there is no need to substitute it, select 'No substitution required'.
It was a quite afternoon, so Dan decided to take a nap.

- Ans
- 1. an quiet
 - 2. an quite
 - 3. No substitution required
 - 4. a quiet

Question ID : 26433070770
Option 1 ID : 264330277538
Option 2 ID : 264330277536
Option 3 ID : 264330277539
Option 4 ID : 264330277537
Status : Answered
Chosen Option : 3

Q.4 Select the most appropriate option to fill in the blank.
This is not _____ exhaustive list of words.

- Ans
- 1. many
 - 2. an
 - 3. a
 - 4. No word required

Question ID : 264330145275
Option 1 ID : 264330569355
Option 2 ID : 264330569357
Option 3 ID : 264330569356
Option 4 ID : 264330569358
Status : Answered
Chosen Option : 2

Q.5 Select the most appropriate meaning of the highlighted idiom in the given sentence.

She said she liked my hair, but it turned out to be a left handed compliment.

- Ans
- 1. A joke
 - 2. A flattery
 - 3. An insult
 - 4. A praise

Question ID : 264330108898
Option 1 ID : 264330427870
Option 2 ID : 264330427871
Option 3 ID : 264330427872
Option 4 ID : 264330427869
Status : Answered
Chosen Option : 3

Q.6 Select the most appropriate ANTONYM of the given word.

Redemption

- Ans
- 1. Salvation
 - 2. Blasphemy
 - 3. Corrugation
 - 4. Conjunction

Question ID : 264330163398
Option 1 ID : 264330640871
Option 2 ID : 264330640872
Option 3 ID : 264330640873
Option 4 ID : 264330640874
Status : Answered
Chosen Option : 2

Q.7 Parts of the following sentence have been underlined and given as options. Select the option that contains an error.

Have they been work in that particular shop for several years?

- Ans
- 1. work
 - 2. been
 - 3. for
 - 4. Have

Question ID : 26433089373
Option 1 ID : 264330350995
Option 2 ID : 264330350994
Option 3 ID : 264330350996
Option 4 ID : 264330350993
Status : Answered
Chosen Option : 1

Q.8 Select the correct spelling of the incorrectly spelt word.

He had a round face made jovial by bright, almost boyish eyes and eyebrows
ridiculusly small for a man his size.

- Ans
- 1. ridicolusly
 - 2. jouvial
 - 3. juvial
 - 4. ridiculously

Question ID : 26433088981
Option 1 ID : 264330349463
Option 2 ID : 264330349462
Option 3 ID : 264330349464
Option 4 ID : 264330349461
Status : Answered
Chosen Option : 4

Q.9 Select the word segment that substitutes (replaces) the bracketed word segment correctly and completes the sentence meaningfully:
Unless you (do will not prepare) well you will not perform well.

- Ans
- 1. would not prepare
 - 2. prepare
 - 3. will do not prepare
 - 4. will prepare

Question ID : 26433088800
Option 1 ID : 264330348756
Option 2 ID : 264330348754
Option 3 ID : 264330348753
Option 4 ID : 264330348755
Status : Answered
Chosen Option : 2

Q.10 Select the most appropriate meaning of the given idiom.

Bite the bullet

- Ans
- 1. Decide to do what is good
 - 2. To bite something very hard
 - 3. Decide to do the inevitable which you were avoiding
 - 4. Decide to take the easier way out

Question ID : 264330163380
Option 1 ID : 264330640808
Option 2 ID : 264330640807
Option 3 ID : 264330640809
Option 4 ID : 264330640810
Status : Answered
Chosen Option : 3

Q.11 Select the most appropriate ANTONYM of the given word.
Resolute

- Ans
- 1. Serious
 - 2. Wavering
 - 3. Steadfast
 - 4. Brave

Question ID : 26433098994
Option 1 ID : 264330388620
Option 2 ID : 264330388618
Option 3 ID : 264330388617
Option 4 ID : 264330388619
Status : Answered
Chosen Option : 2

Q.12 The following sentence has been split into four segments. Identify the segment that contains a grammatical error.

Roger went / to an United Kingdom / with his wife / to celebrate Christmas.

- Ans
- 1. Roger went
 - 2. to an United Kingdom
 - 3. to celebrate Christmas
 - 4. with his wife

Question ID : 264330120603

Option 1 ID : 264330472651

Option 2 ID : 264330472652

Option 3 ID : 264330472654

Option 4 ID : 264330472653

Status : Answered

Chosen Option : 2

Q.13 Some words in the following sentences have been underlined and given as options. Select the option that contains a spelling error.

Why is everyone so dressed up? What's the occaseon? Is it a wedding?

- Ans
- 1. wedding
 - 2. occaseon
 - 3. everyone
 - 4. dressed

Question ID : 264330121269

Option 1 ID : 264330475282

Option 2 ID : 264330475281

Option 3 ID : 264330475279

Option 4 ID : 264330475280

Status : Answered

Chosen Option : 2

Q.14 Select the option that can be used as a one-word substitute for the given group of words.

To restrain or compel a person to do something by force.

- Ans
- 1. Convoy
 - 2. Consensus
 - 3. Coerce
 - 4. Casualty

Question ID : 26433088803

Option 1 ID : 264330348765

Option 2 ID : 264330348767

Option 3 ID : 264330348768

Option 4 ID : 264330348766

Status : Answered

Chosen Option : 3

Q.15 Select the most appropriate option that can substitute the underlined segment in the given sentence.

Health insurance are important today since anyone can face a medical emergency without warning.

- Ans
- 1. will be important
 - 2. has been important
 - 3. was important
 - 4. is important

Question ID : 26433081324
Option 1 ID : 264330319141
Option 2 ID : 264330319144
Option 3 ID : 264330319143
Option 4 ID : 264330319142
Status : Answered
Chosen Option : 4

Q.16 Select the most appropriate meaning of the given idiom.
Spill the beans

- Ans
- 1. To make anything visible
 - 2. To reveal secret information
 - 3. To ruin someone's plan
 - 4. To talk randomly

Question ID : 264330117235
Option 1 ID : 264330460998
Option 2 ID : 264330461000
Option 3 ID : 264330460999
Option 4 ID : 264330460997
Status : Answered
Chosen Option : 2

Q.17 Select the option that will improve the underlined part of the given sentence.
People say different things at different times.

- Ans
- 1. should say fanciful things at different times
 - 2. says delectable things at different times
 - 3. says whimsical things at different times
 - 4. say diverse things at different times

Question ID : 264330145289
Option 1 ID : 264330569413
Option 2 ID : 264330569412
Option 3 ID : 264330569411
Option 4 ID : 264330569414
Status : Answered
Chosen Option : 4

Q.18 Select the most appropriate ANTONYM of the given word.
Together

- Ans 1. Apart
 2. United
 3. Freight
 4. Engulf

Question ID : 264330164274
Option 1 ID : 264330644320
Option 2 ID : 264330644319
Option 3 ID : 264330644322
Option 4 ID : 264330644321
Status : Answered
Chosen Option : 1

Q.19 Select the most appropriate ANTONYM of the given word.
Magnificent

- Ans 1. Impressive
 2. Peaceful
 3. Quiet
 4. Modest

Question ID : 264330164171
Option 1 ID : 264330643936
Option 2 ID : 264330643937
Option 3 ID : 264330643938
Option 4 ID : 264330643935
Status : Answered
Chosen Option : 4

Q.20 Select the most appropriate idiom to fill in the blank.
I have all the technical and communication skills necessary to crack any interview; it
will be _____.

- Ans 1. a storm in a tea cup
 2. a chip on my shoulder
 3. a hard nut to crack
 4. a piece of cake for me

Question ID : 264330134220
Option 1 ID : 264330525878
Option 2 ID : 264330525876
Option 3 ID : 264330525875
Option 4 ID : 264330525877
Status : Answered
Chosen Option : 4

Q.21 Select the most appropriate idiom for the underlined word segment.
He seems to be undecided about whether to move to another city for better prospects.

- Ans
- 1. Bouncing off the walls
 - 2. Running out of steam
 - 3. Sitting on the fence
 - 4. Counting down the days

Question ID : 264330167999
Option 1 ID : 264330658888
Option 2 ID : 264330658890
Option 3 ID : 264330658889
Option 4 ID : 264330658887
Status : Answered
Chosen Option : 3

Q.22 The following sentence has been split into four segments. Identify the segment that contains a grammatical error.

I have a dog and a cow. / A dog is black / but the cow is / black and white.

- Ans
- 1. A dog is black
 - 2. black and white
 - 3. but the cow is
 - 4. I have a dog and a cow

Question ID : 264330120602
Option 1 ID : 264330472648
Option 2 ID : 264330472650
Option 3 ID : 264330472649
Option 4 ID : 264330472647
Status : Answered
Chosen Option : 1

Q.23 Select the most appropriate synonym of the underlined word.
Improved rail transport is essential for business.

- Ans
- 1. Recommended
 - 2. Trivial
 - 3. Crucial
 - 4. Technical

Question ID : 264330117332
Option 1 ID : 264330461381
Option 2 ID : 264330461384
Option 3 ID : 264330461383
Option 4 ID : 264330461382
Status : Answered
Chosen Option : 3

Q.24 Select the most appropriate synonym of the given word.

Desolate

- Ans
- 1. Fortunate
 - 2. Sturdy
 - 3. Depressive
 - 4. Hopeful

Question ID : 264330163331
Option 1 ID : 264330640623
Option 2 ID : 264330640626
Option 3 ID : 264330640625
Option 4 ID : 264330640624
Status : Answered
Chosen Option : 3

Q.25 Select the option that can be used as a one-word substitute for the given group of words.

An act of exchanging information

- Ans
- 1. Collaboration
 - 2. Communication
 - 3. Touch
 - 4. Hold

Question ID : 26433088440
Option 1 ID : 264330347348
Option 2 ID : 264330347345
Option 3 ID : 264330347347
Option 4 ID : 264330347346
Status : Answered
Chosen Option : 2

Q.26 Select the correct spelling of the incorrectly spelt word.

They were more often abnoxious than not, impatient with me because my services had been essentially imposed upon them.

- Ans
- 1. obnoxious
 - 2. impatint
 - 3. servises
 - 4. essentialy

Question ID : 26433088984
Option 1 ID : 264330349475
Option 2 ID : 264330349473
Option 3 ID : 264330349474
Option 4 ID : 264330349476
Status : Answered
Chosen Option : 1

Q.27 Select the most appropriate ANTONYM of the underlined word in the given sentence.

All members of the association adhere to a strict code of practice.

- Ans
- 1. observe
 - 2. cling
 - 3. flout
 - 4. comply

Question ID : 264330117116
Option 1 ID : 264330460534
Option 2 ID : 264330460536
Option 3 ID : 264330460535
Option 4 ID : 264330460533
Status : Answered
Chosen Option : 3

Q.28 Select the most appropriate ANTONYM for the highlighted word.
She has a penchant for art and craft.

- Ans
- 1. anxiety
 - 2. hatred
 - 3. fear
 - 4. joy

Question ID : 264330120739
Option 1 ID : 264330473173
Option 2 ID : 264330473171
Option 3 ID : 264330473174
Option 4 ID : 264330473172
Status : Answered
Chosen Option : 2

Q.29 Select the most appropriate option that can substitute the underlined segment in the given sentence.

The team leader tried to remain positive or optimistic in the situation, even though they were facing tough competition and limited resources.

- Ans
- 1. to put a strong hand forward
 - 2. to put on a strong exterior
 - 3. to put a strong desire in front of
 - 4. to put a brave face on

Question ID : 264330139271
Option 1 ID : 264330545600
Option 2 ID : 264330545601
Option 3 ID : 264330545599
Option 4 ID : 264330545602
Status : Answered
Chosen Option : 4

Q.30 Select the most appropriate ANTONYM of the given word.
Superb

- Ans
- 1. Infallible
 - 2. Incurable
 - 3. Inferior
 - 4. Splendid

Question ID : 264330164275
Option 1 ID : 264330644325
Option 2 ID : 264330644324
Option 3 ID : 264330644326
Option 4 ID : 264330644323
Status : Answered
Chosen Option : 3

Q.31 Choose the most appropriate meaning of the underlined phrase.
He was carried off his feet when he was declared to have won the prize.

- Ans
- 1. Was wild with excitement
 - 2. Was dizzy
 - 3. Became delirious
 - 4. Danced on his toes

Question ID : 264330137452
Option 1 ID : 264330538432
Option 2 ID : 264330538433
Option 3 ID : 264330538434
Option 4 ID : 264330538431
Status : Answered
Chosen Option : 1

Q.32 Select the most appropriate phrasal verb to fill in the blank.
It took seven years for Harish to _____ his migraine.

- Ans
- 1. shake down
 - 2. shake up
 - 3. shake out
 - 4. shake off

Question ID : 26433084920
Option 1 ID : 264330333403
Option 2 ID : 264330333404
Option 3 ID : 264330333401
Option 4 ID : 264330333402
Status : Answered
Chosen Option : 3

Q.33 Select the most appropriate meaning of the underlined idiom that can be substituted in the following sentence.

The new routine will suit you to a T.

- Ans
- 1. nicely
 - 2. a little bit
 - 3. exactly
 - 4. very poorly

Question ID : 26433094760
Option 1 ID : 264330371873
Option 2 ID : 264330371876
Option 3 ID : 264330371874
Option 4 ID : 264330371875
Status : Answered
Chosen Option : 3

Q.34 Select the most appropriate meaning of the given idiom.

Spill the beans

- Ans
- 1. Sound familiar
 - 2. Fail to make an impact
 - 3. To be very expensive
 - 4. Give away a secret

Question ID : 26433091830
Option 1 ID : 264330360659
Option 2 ID : 264330360657
Option 3 ID : 264330360660
Option 4 ID : 264330360658
Status : Answered
Chosen Option : 4

Q.35 Replace the underlined segment with the most appropriate idiom/phrase from the following options.

This is the critical point of the issue. One should always be focused on it.

- Ans
- 1. Chip off the old block
 - 2. A black sheep
 - 3. The crux of the matter
 - 4. Don't cry over spilt milk

Question ID : 26433091834
Option 1 ID : 264330360673
Option 2 ID : 264330360675
Option 3 ID : 264330360676
Option 4 ID : 264330360674
Status : Answered
Chosen Option : 3

Q.36 Select the most appropriate option that can substitute the underlined segment in the given sentence.

I like all games instead of cricket.

- Ans
- 1. rather
 - 2. exclude
 - 3. object
 - 4. except

Question ID : 26433098974
Option 1 ID : 264330388548
Option 2 ID : 264330388545
Option 3 ID : 264330388546
Option 4 ID : 264330388547
Status : Answered
Chosen Option : 4

Q.37 Select the option that can be used as a one-word substitute for the given group of words.

Requiring exceptional skill or caution in performance or handling

- Ans
- 1. Blunt
 - 2. Tricky
 - 3. Sustainable
 - 4. Abstract

Question ID : 26433088447
Option 1 ID : 264330347376
Option 2 ID : 264330347374
Option 3 ID : 264330347375
Option 4 ID : 264330347373
Status : Answered
Chosen Option : 2

Q.38 The following sentence has been divided into parts. One of them may contain an error.

Select the part that contains the error from the given options. If you don't find any error, mark 'No error' as your answer.

(1) He could / (2) be pass his exams / (3) if he studied harder. / (4) No error

- Ans
- 1. 2
 - 2. 1
 - 3. 3
 - 4. 4

Question ID : 264330164351
Option 1 ID : 264330644616
Option 2 ID : 264330644615
Option 3 ID : 264330644617
Option 4 ID : 264330644618
Status : Answered
Chosen Option : 1

Q.39 Select the most appropriate option that can substitute the underlined word which has been incorrectly spelt.
They have begun to study in sepparate rooms.

- Ans
- 1. saperate
 - 2. separate
 - 3. seprate
 - 4. saparate

Question ID : 264330123043
Option 1 ID : 264330482238
Option 2 ID : 264330482236
Option 3 ID : 264330482235
Option 4 ID : 264330482237
Status : Answered
Chosen Option : 2

Q.40 Select the sentence that has a spelling error.

- A- One has to understand the rudimentary fact that intelligence and intellect are at two opposite poles.
- B- An intellectual person may have all the knowledge of the world but won't know how to give it a shape.
- C- Knowledge will plague the individual if he does not have the intelligence to express it.
- D- Without basic intelligence, an individual is trapped within himself manifesting conflicts and ignorance in the external world.

- Ans
- 1. Without basic intelligence, an individual is trapped within himself, manifesting conflicts and ignorance in the external world.
 - 2. An intellectual person may have all the knowledge of the world but won't know how to give it a shape.
 - 3. Knowledge will plague the individual if he does not have the intelligence to express it.
 - 4. One has to understand the rudimentary fact that intelligence and intellect are at two opposite poles.

Question ID : 264330141562
Option 1 ID : 264330554586
Option 2 ID : 264330554584
Option 3 ID : 264330554585
Option 4 ID : 264330554583
Status : Answered
Chosen Option : 4

Comprehension:

In the following passage some words have been deleted. Read the passage carefully and select the most appropriate option to fill in each blank.

Rabindranath Tagore founded a small school at Santiniketan in 1901 and Kala Bhavan, an art school, in 1919 which (1)_____ became a part of the Visvabharati University founded in 1921. Located in an (2)_____ village some distance from the city of Calcutta, Kala Bhavan presented an alternative methodology of art training, in which studio based practice was (3)_____ in favour of learning through observation and living as a part of nature. The natural surroundings with the (4)_____ of bare red earth dotted with trees, the colours of the changing seasons, the animals and birds (5)_____ inspiration to students.

SubQuestion No : 41

Q.41 Select the most appropriate option to fill in blank no. 1.

- Ans 1. better
 2. later
 3. faster
 4. slower

Question ID : 264330164177

Option 1 ID : 264330643957

Option 2 ID : 264330643955

Option 3 ID : 264330643958

Option 4 ID : 264330643956

Status : Answered

Chosen Option : 2

Comprehension:

In the following passage some words have been deleted. Read the passage carefully and select the most appropriate option to fill in each blank.

Rabindranath Tagore founded a small school at Santiniketan in 1901 and Kala Bhavan, an art school, in 1919 which (1)_____ became a part of the Visvabharati University founded in 1921. Located in an (2)_____ village some distance from the city of Calcutta, Kala Bhavan presented an alternative methodology of art training, in which studio based practice was (3)_____ in favour of learning through observation and living as a part of nature. The natural surroundings with the (4)_____ of bare red earth dotted with trees, the colours of the changing seasons, the animals and birds (5)_____ inspiration to students.

SubQuestion No : 42

Q.42 Select the most appropriate option to fill in blank no. 2.

- Ans 1. normal
 2. magical
 3. reliable
 4. idyllic

Question ID : 264330164178

Option 1 ID : 264330643959

Option 2 ID : 264330643960

Option 3 ID : 264330643962

Option 4 ID : 264330643961

Status : Answered

Chosen Option : 4

Comprehension:

In the following passage some words have been deleted. Read the passage carefully and select the most appropriate option to fill in each blank.

Rabindranath Tagore founded a small school at Santiniketan in 1901 and Kala Bhavan, an art school, in 1919 which (1)_____ became a part of the Visvabharati University founded in 1921. Located in an (2)_____ village some distance from the city of Calcutta, Kala Bhavan presented an alternative methodology of art training, in which studio based practice was (3)_____ in favour of learning through observation and living as a part of nature. The natural surroundings with the (4)_____ of bare red earth dotted with trees, the colours of the changing seasons, the animals and birds (5)_____ inspiration to students.

SubQuestion No : 43

Q.43 Select the most appropriate option to fill in blank no. 3.

- Ans 1. accepted
 2. rejected
 3. investigated
 4. aspired

Question ID : 264330164179

Option 1 ID : 264330643963

Option 2 ID : 264330643964

Option 3 ID : 264330643965

Option 4 ID : 264330643966

Status : Answered

Chosen Option : 4

Comprehension:

In the following passage some words have been deleted. Read the passage carefully and select the most appropriate option to fill in each blank.

Rabindranath Tagore founded a small school at Santiniketan in 1901 and Kala Bhavan, an art school, in 1919 which (1)_____ became a part of the Visvabharati University founded in 1921. Located in an (2)_____ village some distance from the city of Calcutta, Kala Bhavan presented an alternative methodology of art training, in which studio based practice was (3)_____ in favour of learning through observation and living as a part of nature. The natural surroundings with the (4)_____ of bare red earth dotted with trees, the colours of the changing seasons, the animals and birds (5)_____ inspiration to students.

SubQuestion No : 44

Q.44 Select the most appropriate option to fill in blank no. 4.

- Ans 1. vistas
 2. murk
 3. haze
 4. band

Question ID : 264330164180

Option 1 ID : 264330643970

Option 2 ID : 264330643969

Option 3 ID : 264330643968

Option 4 ID : 264330643967

Status : Answered

Chosen Option : 1

Comprehension:

In the following passage some words have been deleted. Read the passage carefully and select the most appropriate option to fill in each blank.

Rabindranath Tagore founded a small school at Santiniketan in 1901 and Kala Bhavan, an art school, in 1919 which (1)_____ became a part of the Visvabharati University founded in 1921. Located in an (2)_____ village some distance from the city of Calcutta, Kala Bhavan presented an alternative methodology of art training, in which studio based practice was (3)_____ in favour of learning through observation and living as a part of nature. The natural surroundings with the (4)_____ of bare red earth dotted with trees, the colours of the changing seasons, the animals and birds (5)_____ inspiration to students.

SubQuestion No : 45

Q.45 Select the most appropriate option to fill in blank no. 5.

- Ans 1. groomed
 2. refused
 3. provided
 4. agreed

Question ID : 264330164181

Option 1 ID : 264330643972

Option 2 ID : 264330643971

Option 3 ID : 264330643973

Option 4 ID : 264330643974

Status : Answered

Chosen Option : 3

Comprehension:

Read the given passage carefully and answer the questions that follow.

Mountains occupy about a quarter of the Earth's land, harbour most of its biodiversity hotspots and supply fresh water to an estimated half of humanity. Present on every continent, mountains include a multitude of ecosystems holding many unique species such as snow leopards and mountain gorillas. They are also home to great cultural diversity among people adapted to the challenges of mountain life. Their special traditions and breath-taking scenery attract ever-growing numbers of tourists.

Mountain regions are particularly sensitive to degradation from both human pressures and climate change. Steep slopes mean the clearing of forest for farming, settlements or infrastructure can cause serious soil erosion as well as the loss of habitat. Erosion and pollution harm the quality of water flowing downstream. Climate change threatens the quantity and timing of water supplies to farms, cities, industry and power stations. Fast-rising temperatures are forcing mountain species, ecosystems and the people that depend on them to adapt or migrate.

SubQuestion No : 46

Q.46 What is the ANTONYM for the word 'diversity' from the passage?

- Ans 1. Block
 2. Dilemma
 3. Uniformity
 4. Heritage

Question ID : 264330164691

Option 1 ID : 264330645930

Option 2 ID : 264330645929

Option 3 ID : 264330645927

Option 4 ID : 264330645928

Status : Answered

Chosen Option : 3

Comprehension:

Read the given passage carefully and answer the questions that follow.

Mountains occupy about a quarter of the Earth's land, harbour most of its biodiversity hotspots and supply fresh water to an estimated half of humanity. Present on every continent, mountains include a multitude of ecosystems holding many unique species such as snow leopards and mountain gorillas. They are also home to great cultural diversity among people adapted to the challenges of mountain life. Their special traditions and breath-taking scenery attract ever-growing numbers of tourists.

Mountain regions are particularly sensitive to degradation from both human pressures and climate change. Steep slopes mean the clearing of forest for farming, settlements or infrastructure can cause serious soil erosion as well as the loss of habitat. Erosion and pollution harm the quality of water flowing downstream. Climate change threatens the quantity and timing of water supplies to farms, cities, industry and power stations. Fast-rising temperatures are forcing mountain species, ecosystems and the people that depend on them to adapt or migrate.

SubQuestion No : 47**Q.47 What is the ANTONYM for the word 'migrate' from the passage?**

- Ans 1. Stay
 2. Run
 3. Die
 4. Assume

Question ID : 264330164693

Option 1 ID : 264330645935

Option 2 ID : 264330645936

Option 3 ID : 264330645937

Option 4 ID : 264330645938

Status : Answered

Chosen Option : 1

Comprehension:

Read the given passage carefully and answer the questions that follow.

Mountains occupy about a quarter of the Earth's land, harbour most of its biodiversity hotspots and supply fresh water to an estimated half of humanity. Present on every continent, mountains include a multitude of ecosystems holding many unique species such as snow leopards and mountain gorillas. They are also home to great cultural diversity among people adapted to the challenges of mountain life. Their special traditions and breath-taking scenery attract ever-growing numbers of tourists.

Mountain regions are particularly sensitive to degradation from both human pressures and climate change. Steep slopes mean the clearing of forest for farming, settlements or infrastructure can cause serious soil erosion as well as the loss of habitat. Erosion and pollution harm the quality of water flowing downstream. Climate change threatens the quantity and timing of water supplies to farms, cities, industry and power stations. Fast-rising temperatures are forcing mountain species, ecosystems and the people that depend on them to adapt or migrate.

SubQuestion No : 48**Q.48 Which is the best description of the tone of the passage?**

- Ans 1. Laudatory
 2. Emotional
 3. Biased
 4. Humanistic

Question ID : 264330164690

Option 1 ID : 264330645923

Option 2 ID : 264330645925

Option 3 ID : 264330645924

Option 4 ID : 264330645926

Status : Answered

Chosen Option : 4

Comprehension:

Read the given passage carefully and answer the questions that follow.

Mountains occupy about a quarter of the Earth's land, harbour most of its biodiversity hotspots and supply fresh water to an estimated half of humanity. Present on every continent, mountains include a multitude of ecosystems holding many unique species such as snow leopards and mountain gorillas. They are also home to great cultural diversity among people adapted to the challenges of mountain life. Their special traditions and breath-taking scenery attract ever-growing numbers of tourists.

Mountain regions are particularly sensitive to degradation from both human pressures and climate change. Steep slopes mean the clearing of forest for farming, settlements or infrastructure can cause serious soil erosion as well as the loss of habitat. Erosion and pollution harm the quality of water flowing downstream. Climate change threatens the quantity and timing of water supplies to farms, cities, industry and power stations. Fast-rising temperatures are forcing mountain species, ecosystems and the people that depend on them to adapt or migrate.

SubQuestion No : 49**Q.49 Which of the following represents the structure of the passage?**

- Ans 1. Chronological
 2. Definition
 3. Compare and contrast
 4. Cause-effect

Question ID : 264330164692

Option 1 ID : 264330645934

Option 2 ID : 264330645932

Option 3 ID : 264330645933

Option 4 ID : 264330645931

Status : Answered

Chosen Option : 4

Comprehension:

Read the given passage carefully and answer the questions that follow.

Mountains occupy about a quarter of the Earth's land, harbour most of its biodiversity hotspots and supply fresh water to an estimated half of humanity. Present on every continent, mountains include a multitude of ecosystems holding many unique species such as snow leopards and mountain gorillas. They are also home to great cultural diversity among people adapted to the challenges of mountain life. Their special traditions and breath-taking scenery attract ever-growing numbers of tourists.

Mountain regions are particularly sensitive to degradation from both human pressures and climate change. Steep slopes mean the clearing of forest for farming, settlements or infrastructure can cause serious soil erosion as well as the loss of habitat. Erosion and pollution harm the quality of water flowing downstream. Climate change threatens the quantity and timing of water supplies to farms, cities, industry and power stations. Fast-rising temperatures are forcing mountain species, ecosystems and the people that depend on them to adapt or migrate.

SubQuestion No : 50**Q.50 Which of the following most accurately states the central idea of the passage?**

- Ans 1. Pollution
 2. Mountain ecosystem
 3. Biodegradation
 4. Climate change

Question ID : 264330164689

Option 1 ID : 264330645919

Option 2 ID : 264330645922

Option 3 ID : 264330645921

Option 4 ID : 264330645920

Status : Answered

Chosen Option : 3